

CGLE- Combined Graduate Level Tier-I, 2018 Examination

Roll No.	
Registration No.	
Name	
Test Venue	Confinet It Solutions Pvt. Ltd
Test Time	1:00 PM - 2:00 PM
Test Date	07/06/2019

Section : General Intelligence and Reasoning

Q.1 Select the set in which the numbers are related in the same way as are the numbers of the following set.

(8, 15, 9)

- Ans**
- 1. (5, 17, 11)
 - 2. (9, 12, 15)
 - 3. (7, 13, 14)
 - 4. (4, 16, 12)

Question ID : 98958013714

Status : Answered

Chosen Option : 3

Q.2 A square paper is folded and cut as shown below. How will it appear when unfolded?



Ans


- 1.
- 2.
- 3.
- 4.

Question ID : 98958013722

Status : Answered

Chosen Option : 1

Q.3



The ratio of the present age of Mitali to that of Shabnam is 4 : 7. If the difference between the present ages of Shabnam and Mitali after 5 years will be 13 years, then what is the sum of the present ages of Mitali and Shabnam?

- Ans
- 1. 64 years
 - 2. 74 years
 - 3. 60 years
 - 4. 66 years

Question ID : 98958013716

Status : Answered

Chosen Option : 4

Q.4 Select the mirror image of the given figure when the mirror is placed to the right of the figure.



Ans

- 1.
- 2.
- 3.
- 4.

Question ID : 98958013721

Status : Answered

Chosen Option : 1

Q.5 Two statements are given, followed by three conclusions numbered I, II and III. Assuming the statements to be true even if they seem to be at variance with commonly known facts, decide which of the conclusions logically follow(s) from the statements.

Statements:

Some roads are streets.

Some streets are lanes.

Conclusions:

I. No road is a lane.

II. All streets are lanes.

III. Some lanes are roads.

- Ans
- 1. Either conclusions I or III follows
 - 2. Only conclusion I follows
 - 3. Only conclusion II follows
 - 4. Only conclusions II and III follow



Question ID : 98958013709
 Status : Answered
 Chosen Option : 1

Q.6 P, Q की बहन और R की माँ है। S, W की बहू है और Q की पत्नी है। W का पौत्र M, P का भतीजा और V का भाई है। W के केवल दो बच्चे हैं। Q का V से क्या संबंध है?

- Ans
- 1. पुत्र
 - 2. भाई
 - 3. पिता
 - 4. चाचा

Question ID : 98958013708
 Status : Answered
 Chosen Option : 3

Q.7 Which number will replace the question mark (?) in the following series?

5, 12, 26, 54, ?

- Ans
- 1. 92
 - 2. 112
 - 3. 98
 - 4. 110

Question ID : 98958013710
 Status : Answered
 Chosen Option : 4

Q.8 Select the set in which the numbers are related in the same way as are the numbers of the following set.

(3, 16, 5)

- Ans
- 1. (7, 32, 9)
 - 2. (5, 26, 9)
 - 3. (11, 45, 14)
 - 4. (9, 35, 11)

Question ID : 98958013713
 Status : Answered
 Chosen Option : 1

Q.9 If CLEAN is coded as 1415123 and BLOW is coded as 2315122, then how will JOKE be coded as?

- Ans
- 1. 1011155
 - 2. 5121611
 - 3. 4111612
 - 4. 5111510

Question ID : 98958013706
 Status : Answered
 Chosen Option : 4

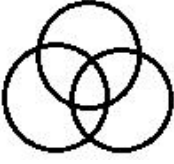


Q.10 Select the Venn diagram that best illustrates the relationship between the following classes.

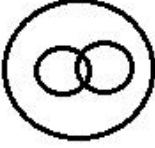
Graduates, Teachers, Literates

Ans


✗ 1.



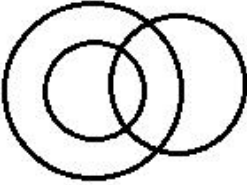
✓ 2.



✗ 3.



✗ 4.



Question ID : 98958013723

Status : Answered

Chosen Option : 2

Q.11 Select the number-pair in which the two numbers are related in the same way as are the two numbers of the following number-pair.

12 : 42

Ans

✗ 1. 15 : 52

✗ 2. 16 : 53

✗ 3. 24 : 82

✓ 4. 8 : 28

Question ID : 98958013711

Status : Answered

Chosen Option : 4

Q.12 निम्नलिखित दिए गए विकल्पों में से उस शब्द युग्म का चयन कीजिए जो आपस में उसी प्रकार संबंधित हैं जिस प्रकार नीचे लिखे गए शब्द युग्म आपस में संबंधित हैं ।

सहलाना : प्रेम

Ans

✗ 1. क्रोध: भावना

✗ 2. अपराध: स्वीकारोक्ति

✗ 3. साक्षात्कार: चयन

✓ 4. लात मारना: दुश्मनी

Question ID : 98958013704

Status : Answered

Chosen Option : 4

Q.13

'Disconnect' is related to 'Unify' in the same way as 'Mend' is related to '_____'.
 Question ID : 98958013703
 Status : Answered
 Chosen Option : 3

- Ans
- 1. Discomfort
 - 2. Rough
 - 3. Damage
 - 4. Stitch

Question ID : 98958013703

Status : Answered

Chosen Option : 3

Q.14 Select the option that is related to the third letter-cluster in the same way as the second letter-cluster is related to the first letter-cluster.

DFIM : WURN :: GKNP : ?

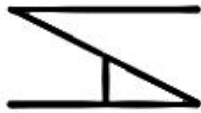
- Ans
- 1. SOLJ
 - 2. TPNL
 - 3. TROK
 - 4. TPMK

Question ID : 98958013699

Status : Answered

Chosen Option : 4

Q.15 Select the figure in which the given figure is embedded.



Ans

- 1.
- 2.
- 3.
- 4.

Question ID : 98958013720

Status : Answered

Chosen Option : 4



Q.16 Three of the following four letter-clusters are alike in a certain way and one is different. Pick the odd one out.

- Ans** 1. RSTY
 2. PQRU
 3. HJLO
 4. BDFA

Question ID : 98958013701
 Status : Not Answered
 Chosen Option : --

Q.17 Three of the following four numbers are alike in a certain way and one is different. Pick the number that is different from the rest.

- Ans** 1. 43
 2. 63
 3. 57
 4. 39

Question ID : 98958013712
 Status : Answered
 Chosen Option : 1

Q.18 Which two signs should be interchanged in the following equation to make it correct?

$$9 - 3 + 12 \times 8 \div 4 = 11$$

- Ans** 1. - and ÷
 2. + and ÷
 3. + and -
 4. + and ×

Question ID : 98958013715
 Status : Answered
 Chosen Option : 2

Q.19 निम्नलिखित चार शब्दों में से तीन शब्द किसी प्रकार से एकसमान हैं और एक शब्द असमान है। असमान शब्द का चयन कीजिए।


- Ans** 1. निंदा
 2. बदनाम
 3. अजीब
 4. उपेक्षा

Question ID : 98958013702
 Status : Answered
 Chosen Option : 3

Q.20 Select the combination of letters that when sequentially placed in the gaps of the given letter series will complete the series.

db_cbd_ba_bd_bac_d

- Ans** 1. adbcd
 2. bdcdb
 3. adcdb



✗ 4. dacdb

Question ID : 98958013707
Status : Answered
Chosen Option : 3

Q.21 In a code language, REGULAR is written as GERTRAL. How will BROTHER be written as in that language?

- Ans
- ✗ 1. ROBSERH
 - ✓ 2. ORBSREH
 - ✗ 3. ORBUREH
 - ✗ 4. ORBEHTS

Question ID : 98958013705
Status : Answered
Chosen Option : 2

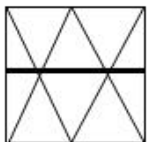
Q.22 Arrange the following words in a logical and meaningful order.

1. Learn
2. College
3. Degree
4. Admission
5. Assessment
6. Class

- Ans
- ✗ 1. 4, 2, 1, 6, 3, 5
 - ✗ 2. 2, 1, 4, 5, 6, 3
 - ✓ 3. 4, 2, 6, 1, 5, 3
 - ✗ 4. 5, 4, 2, 1, 6, 3

Question ID : 98958013700
Status : Answered
Chosen Option : 3

Q.23 How many triangles are there in the following figure?



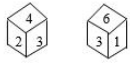
- Ans
- ✓ 1. 18
 - ✗ 2. 20
 - ✗ 3. 14
 - ✗ 4. 16

Question ID : 98958013718
Status : Answered



Chosen Option : 1

Q.24 Two different positions of the same dice are shown. Which number will be at the top if 6 is at the bottom?



- Ans
- 1. 5
 - 2. 4
 - 3. 2
 - 4. 3

Question ID : 98958013719

Status : Answered

Chosen Option : 3

Q.25 Select the figure that will come next in the following figure series.



Ans

- 1.
- 2.
- 3.
- 4.

Question ID : 98958013717

Status : Answered

Chosen Option : 1

Section : General Awareness

Q.1 World _____ Day 2019 was observed on 23 March with the theme 'The Sun, the Earth and the weather'.

- Ans
- 1. Geological
 - 2. Geographical
 - 3. Meteorological
 - 4. Astrological

Question ID : 98958014322



Status : **Answered**
Chosen Option : **3**

Q.2 Pierre Curie shared the 1903 Nobel Prize in Physics with his wife, Marie Curie, and Henri Becquerel for their discoveries related to _____.

- Ans
- 1. radioactivity
 - 2. X-rays
 - 3. thermodynamics
 - 4. mirror images

Question ID : **98958014304**
Status : **Answered**
Chosen Option : **1**

Q.3 Electron was discovered in the year 1897 by _____.

- Ans
- 1. T. A. Edison
 - 2. Nicola Tesla
 - 3. J J Thomson
 - 4. Isaac Newton

Question ID : **98958014303**
Status : **Answered**
Chosen Option : **3**

Q.4 Akbar was succeeded by his son, Salim, who took the title of _____, meaning 'Conqueror of the World'.

- Ans
- 1. Jahapana
 - 2. Shah Jahan
 - 3. Jahangir
 - 4. Badshah

Question ID : **98958014313**
Status : **Answered**
Chosen Option : **3**

Q.5 _____ Constitution Amendment Act, 2002 provided for free and compulsory elementary education to all children.

- Ans
- 1. 86th
 - 2. 87th
 - 3. 84th
 - 4. 85th

Question ID : **98958014318**
Status : **Answered**
Chosen Option : **1**

Q.6 Humayun's heir, _____, was born in exile and was only 13 years old when his father died.

- Ans
- 1. Babur
 - 2. Jahangir
 - 3. Shah Jahan
 - 4. Akbar

Question ID : **98958014314**
Status : **Answered**



Chosen Option : 4

Q.7 Which river passes through maximum number of countries?

- Ans
- 1. Volga
 - 2. Danube
 - 3. Rhine
 - 4. Amazon

Question ID : 98958014309

Status : Not Answered

Chosen Option : --

Q.8 The Victoria Memorial, conceived by Lord Curzon, represents the architectural climax of _____ city.

- Ans
- 1. Kolkata
 - 2. Delhi
 - 3. Mumbai
 - 4. Jaipur

Question ID : 98958014300

Status : Answered

Chosen Option : 1

Q.9 Which of the following is the longest rivers in India?

- Ans
- 1. Godavari
 - 2. Kaveri
 - 3. Brahmaputra
 - 4. Ganga

Question ID : 98958014308

Status : Answered

Chosen Option : 3

Q.10 Who was the prime minister of India during "the Emergency" between the year 1975 to 1977?

- Ans
- 1. Moraj Desai
 - 2. Indira Gandhi
 - 3. Charan Singh
 - 4. Rajiv Gandhi

Question ID : 98958014317

Status : Answered

Chosen Option : 2

Q.11 The Red Fort and the Jama Masjid in Delhi stand out as towering achievements of architecture during the reign of _____.

- Ans
- 1. Aurangzeb
 - 2. Shah Jahan
 - 3. Akbar
 - 4. Jehangir

Question ID : 98958014311

Status : Answered

Chosen Option : 2



Q.12 Who had built Taj Mahal, for his wife Mumtaz Mahal along the banks of the Yamuna River in Agra?

- Ans 1. Shah Jahan
 2. Jahangir
 3. Aurangzeb
 4. Akbar

Question ID : 98958014312
Status : Answered
Chosen Option : 1

Q.13 Indian naval officer Commander _____ became the only Asian to participate in the prestigious Golden Globe Race (GGR), which commenced from Les Sables d'Olonne harbour in France on 1 July 2018.

- Ans 1. Pradeep Singh
 2. Rajesh Dhankhar
 3. Abhilash Tomy
 4. Mahendra Nath Mulla

Question ID : 98958014316
Status : Not Answered
Chosen Option : --

Q.14 _____ received the very first Nobel Prize in Physics in 1901 for his discovery of X-rays.

- Ans 1. Wilhelm Röntgen
 2. William Crookes
 3. Louis Pasteur
 4. William Thomson

Question ID : 98958014305
Status : Answered
Chosen Option : 4

Q.15 Justice _____, who retired from the Supreme Court of India on 6 July 2018, has been appointed as the new chairperson of the National Green Tribunal.

- Ans 1. Justice Jawad Rahim
 2. Adarsh Kumar Goel
 3. Sonam Phintso Wangdi
 4. Raghuvendra Singh

Question ID : 98958014315
Status : Not Answered
Chosen Option : --

Q.16 Which of the following was the most important characteristic of India's trade throughout the colonial period?

- Ans 1. Import surplus
 2. Export deficiency
 3. Import deficiency
 4. Export surplus

Question ID : 98958014301
Status : Answered
Chosen Option : 4



Q.17 _____ won a silver medal at the 38th GeeBee Boxing Tournament which was held at Helsinki, Finland.

- Ans
- 1. Sumit Sangwan
 - 2. Sachin Siwach
 - 3. Naveen Kumar
 - 4. Mohammed Hussamuddin

Question ID : 98958014320
Status : Not Answered
Chosen Option : --

Q.18 A _____ occurs when a government's total expenditures exceed the revenue that it generates, excluding money from borrowings.

- Ans
- 1. Fiscal Deficit
 - 2. Current Account Deficit
 - 3. Revenue Deficit
 - 4. Budgetary Deficit

Question ID : 98958014302
Status : Not Answered
Chosen Option : --

Q.19 Name the longest river in Asia.

- Ans
- 1. Yenisei
 - 2. Nile
 - 3. Amazon
 - 4. Yangtze

Question ID : 98958014310
Status : Not Answered
Chosen Option : --

Q.20 On March 23rd, India observes _____ day/divas as a tribute to Bhagat Singh, Sukhdev and Rajguru on their death anniversary.

- Ans
- 1. Protest Day
 - 2. Shaheed Divas
 - 3. Tribute Day
 - 4. Vidroh Divas

Question ID : 98958014321
Status : Answered
Chosen Option : 2

Q.21 Who won the Nobel Prize in 1906 for his neuron doctrine?

- Ans
- 1. Henry Moseley
 - 2. Luis Alvarez
 - 3. Santiago Ramón y Cajal
 - 4. Pierre Curie

Question ID : 98958014307
Status : Not Answered
Chosen Option : --

Q.22 In its Global Economic Outlook report, Fitch Ratings cut India's economic growth forecast for the next financial year 2019-20 starting from April 1 to ____% from its previous estimate of 7%.



- Ans 1. 6.8
 2. 6.1
 3. 6.2
 4. 5.4

Question ID : 98958014323
Status : Not Answered
Chosen Option : --

Q.23 William Crookes was a physical chemist who discovered and named the element _____.

- Ans 1. plutonium
 2. beryllium
 3. thallium
 4. germanium

Question ID : 98958014306
Status : Not Answered
Chosen Option : --

Q.24 There were three bronze medallists from India at the 38th GeeBee Boxing Tournament which was held at Helsinki, Finland. Who amongst the following is NOT one of them?

- Ans 1. Sachin Siwach
 2. Naveen Kumar
 3. Sumit Sangwan
 4. Dinesh Dagar

Question ID : 98958014319
Status : Not Answered
Chosen Option : --

Q.25 Which Indian monument was built by Maharaja Sawai Pratap Singh in the year 1799?

- Ans 1. Mattancherry Palace
 2. Leh Palace
 3. Hawa Mahal
 4. Mysore Palace

Question ID : 98958014299
Status : Answered
Chosen Option : 3

Section : Quantitative Aptitude

Q.1 The prices of two articles are in the ratio 4 : 5. If the price of the first article is increased by $x\%$ and that of the other is decreased by 30%, then the new prices of A and B will be in the ratio 10 : 7. The value of x is:

- Ans 1. 22.5
 2. 25
 3. 24.5
 4. 20

Question ID : 98958013305
Status : Answered
Chosen Option : 2

Q.2



A shopkeeper sells an item for ₹492 after allowing 18% discount on its marked price. Had he NOT allowed any discount, he would have earned a profit of 20% on the cost price. What is the cost price of the item?

- Ans
- 1. ₹500
 - 2. ₹640
 - 3. ₹540
 - 4. ₹600

Question ID : 98958013302
Status : Answered
Chosen Option : 4

Q.3 If the 10-digit number $897359y7x2$ is divisible by 72, then what is the value of $(3x-y)$, for the possible greatest value of y ?

- Ans
- 1. 7
 - 2. 5
 - 3. 8
 - 4. 3

Question ID : 98958013299
Status : Answered
Chosen Option : 1

Q.4 If $\left(\frac{\tan\theta - \sec\theta + 1}{\tan\theta + \sec\theta - 1}\right) \sec\theta = \frac{1}{k}$, then $k =$ _____.

- Ans
- 1. $1 + \cos\theta$
 - 2. $1 + \sin\theta$
 - 3. $1 - \cos\theta$
 - 4. $1 - \sin\theta$

Question ID : 98958013318
Status : Answered
Chosen Option : 2

Q.5 The value of $7\frac{1}{2} \times \left(3\frac{1}{5} \div 4\frac{1}{2} \text{ of } 5\frac{1}{3}\right) + \left[11 - \left(\frac{5}{8} + 3 - 1\frac{1}{4}\right)\right] \div 5\frac{3}{4} - 5 \div 5 \times 5 \text{ of } 5 \div 25$ is:

- Ans
- 1. $\frac{1}{10}$
 - 2. $1\frac{1}{2}$
 - 3. $\frac{3}{10}$
 - 4. $\frac{1}{2}$

Question ID : 98958013300
Status : Answered
Chosen Option : 2

Q.6



The table shows the production of different types of cars (in thousands).

Year					
Car	2010	2011	2012	2013	2014
A	46	69	61	57	63
B	40	56	52	68	64
C	54	55	45	60	56
D	42	53	44	56	65
E	68	67	61	64	72

The average production of all type of cars in 2014 is approximately what percent less than the total production of type B cars in 2013 and type D cars in 2010 taken together?

- Ans
- 1. 44.9%
 - 2. 44.4%
 - 3. 43.2%
 - 4. 41.8%

Question ID : 98958013323

Status : Not Answered

Chosen Option : --

Q.7 If $\sin\theta = \frac{a}{\sqrt{a^2+b^2}}$, $0^\circ < \theta < 90^\circ$, then the value of $\sec\theta + \tan\theta$ is:

- Ans
- 1. $\frac{\sqrt{a^2+b^2}+a}{2b}$
 - 2. $\frac{\sqrt{a^2+b^2}+a}{b}$
 - 3. $\frac{\sqrt{a^2+b^2}+b}{a}$
 - 4. $\frac{\sqrt{a^2+b^2}+b}{2a}$

Question ID : 98958013319

Status : Answered

Chosen Option : 2

Q.8 If $x^2 - 3x - 1 = 0$, then the value of $(x^2 + 8x - 1)(x^3 + x^{-1})^{-1}$ is:

- Ans
- 1. 3
 - 2. 1
 - 3. 8
 - 4. $\frac{3}{8}$

Question ID : 98958013312

Status : Answered

Chosen Option : 2

Q.9 If $9a^2 + 4b^2 + c^2 + 21 = 4(3a + b - 2c)$, then the value of $(9a + 4b - c)$ is:

- Ans
- 1. 12
 - 2. 6
 - 3. 2
 - 4. 16

Question ID : 98958013311

Status : Not Answered

Chosen Option : --



Q.10 In $\triangle ABC$, AD bisects $\angle A$ which meets BC at D. If BC = a, AC = b and AB = c, then DC = _____.

- Ans
1. $\frac{bc}{a+c}$
2. $\frac{ac}{a+b}$
3. $\frac{ac}{a+c}$
4. $\frac{ab}{b+c}$

Question ID : 98958013316

Status : Not Answered

Chosen Option : --

Q.11 The table shows the production of different types of cars (in thousands).

Year					
Car	2010	2011	2012	2013	2014
A	46	69	61	57	63
B	40	56	52	68	64
C	54	55	45	60	56
D	42	53	44	56	65
E	68	67	61	64	72

If the data related to the production of type C cars is represented by a pie-chart, then the central angle of the sector representing production of cars in 2012 will be:

- Ans
1. 72°
2. $73\frac{1}{3}^\circ$
3. 80°
4. 60°

Question ID : 98958013321

Status : Answered

Chosen Option : 4

Q.12 If $(135\sqrt{5}x^3 - 2\sqrt{2}y^3) \div (3\sqrt{5}x - \sqrt{2}y) = Ax^2 + By^2 + \sqrt{10} Cxy$, then the value of $(A + B - 9C)$ is:

- Ans
1. 20
2. 10
3. 18
4. 12

Question ID : 98958013310

Status : Answered

Chosen Option : 1

Q.13 The table shows the production of different types of cars (in thousands).

Year					
Car	2010	2011	2012	2013	2014
A	46	69	61	57	63
B	40	56	52	68	64
C	54	55	45	60	56
D	42	53	44	56	65
E	68	67	61	64	72

What is the ratio of the total production of type B cars in 2011 and type E cars in 2013 taken together to the total production of type C cars in 2014 and type D cars in 2012 taken together?

- Ans
1. 6 : 5
2. 8 : 9
3. 16 : 11



4. 5 : 6

Question ID : 98958013320

Status : Answered

Chosen Option : 1

Q.14 The total number of students in section A and B of a class is 110. The number of students in section A is 10 more than that of section B. The average score of the students in B, in a test, is 20% more than that of students in A. If the average score of all the students in the class is 72, then what is the average score of the students in A?

Ans 1. 66

2. 70

3. 63

4. 68

Question ID : 98958013301

Status : Not Answered

Chosen Option : --

Q.15 A person sold 25 articles for ₹2,500 and incurred a loss of 10%. How many articles should he sell for ₹2,400 to make a profit of 20%?

Ans 1. 15

2. 16

3. 18

4. 20

Question ID : 98958013304

Status : Answered

Chosen Option : 3

Q.16 ABCD is a quadrilateral whose side AB is the diameter of a circle through A, B, C and D. If $\angle ADC = 130^\circ$, then the measure of $\angle BAC$ is:

Ans 1. 40°

2. 50°

3. 45°

4. 35°

Question ID : 98958013313

Status : Answered

Chosen Option : 1

Q.17 To do a certain work, A and B work on alternate days, with B beginning the work on the first day. A can finish the work alone in 48 days. If the work gets completed in $11\frac{1}{3}$ days, then B alone can finish 4 times the same work in:

Ans 1. 30 days

2. 27 days

3. 24 days

4. 32 days

Question ID : 98958013307

Status : Not Answered

Chosen Option : --

Q.18 If $\cos^2\theta - 3\cos\theta + 2 = \sin^2\theta$, $0^\circ < \theta < 90^\circ$, then the value of $2\operatorname{cosec}\theta + 4\cot\theta$ is:

Ans 1. $4\sqrt{3}$



2. $\frac{4\sqrt{3}}{4}$

3. $\frac{8\sqrt{3}}{3}$

4. $2\sqrt{3}$

Question ID : 98958013317
Status : Answered
Chosen Option : 3

Q.19 The area of a field in the shape of a triangle with each side x metres is equal to the area of another triangular field having sides 50 m, 70 m and 80 m. The value of x is closest to:

1. 65.5

2. 62.4

3. 61.8

4. 63.2

Question ID : 98958013309
Status : Answered
Chosen Option : 4

Q.20 A person can row a distance of 4 km upstream in one hour 20 minutes and can row back to the starting point in just 24 minutes. How much time (in hours) will he take to row 13 km in still water?

1. $3\frac{1}{2}$

2. 3

3. 2

4. $2\frac{1}{2}$

Question ID : 98958013308
Status : Answered
Chosen Option : 3

Q.21 In a circle of radius 10 cm and centre O, PQ and PR are two equal chords, each of length 12 cm. What is the length (in cm) of chord QR?

1. 20.4

2. 18.6

3. 19.2

4. 18.4

Question ID : 98958013314
Status : Not Answered
Chosen Option : --

Q.22 A sum of ₹ x was borrowed and paid back in two equal yearly instalments, each of ₹35,280. If the rate of interest was 5%, compounded annually, then the value of x is:

1. 64,400

2. 65,400

3. 65,600

4. 64,800

Question ID : 98958013306
Status : Answered
Chosen Option : 3



Q.23 In $\triangle ABC$, $\angle A$ is a right angle. The lengths of AC and BC are 6 cm and 10 cm respectively. Point D is on AB such that $BD = 4$ cm. What is the length of CD?

- Ans
- 1. $3\sqrt{10}$ cm
 - 2. $2\sqrt{10}$ cm
 - 3. $2\sqrt{13}$ cm
 - 4. $3\sqrt{13}$ cm

Question ID : **98958013315**
 Status : **Answered**
 Chosen Option : **3**

Q.24 The table shows the production of different types of cars (in thousands).

Year					
Car	2010	2011	2012	2013	2014
A	46	69	61	57	63
B	40	56	52	68	64
C	54	55	45	60	56
D	42	53	44	56	65
E	68	67	61	64	72

The total production of type A cars in 2011, and type C cars and type E cars in 2012 taken together is what percent of the total production of type B cars during 2010 to 2014?

- Ans
- 1. 62.5%
 - 2. 58.8%
 - 3. 60.4%
 - 4. 54.7%

Question ID : **98958013322**
 Status : **Answered**
 Chosen Option : **1**

Q.25 A is 20% less than B while C is 20% more than D. If D is 25% less than A, then which of the following is true?

- Ans
- 1. $B = 0.675 C$
 - 2. $C = 0.72 B$
 - 3. $C = 0.675 B$
 - 4. $B = 0.72 C$

Question ID : **98958013303**
 Status : **Answered**
 Chosen Option : **2**

Section : English Comprehension

Q.1 Select the correct passive form of the given sentence.

Please take the guest to his room on the 6th floor.

- Ans
- 1. You are requested to take the guest to his room on the 6th floor.
 - 2. The guest should be took to his room on the 6th floor.
 - 3. Let the guest be taking to his room on the 6th floor.
 - 4. You must take the guest to his room on the 6th floor.

Question ID : **98958012592**
 Status : **Answered**
 Chosen Option : **1**

Q.2 Select the correct active form of the given sentence.

The chairs were being arranged in the examination hall by the staff.

- Ans 1. The staff was arranging the chairs in the examination hall.
2. The staff has arranged the chairs in the examination hall.
3. The chairs were arranging the staff in the examination hall.
4. The staff has been arranging the chairs in the examination hall.

Question ID : 98958012593
Status : Answered
Chosen Option : 1

Q.3 Select the most appropriate meaning of the given idiom.

On tenterhooks

- Ans 1. anxious
2. happy
3. angry
4. unhappy

Question ID : 98958012608
Status : Answered
Chosen Option : 3

Q.4 Select the most appropriate word to fill in the blank.

India is the second largest _____ of cotton in the world.

- Ans 1. grower
2. producer
3. manufacturer
4. creator

Question ID : 98958012614
Status : Answered
Chosen Option : 2

Comprehension:

In the following passage some words have been deleted. Fill in the blanks with the help of the alternatives given. Select the most appropriate option for each blank.

During the reign of Aurangzeb, the last of the Mughals, there (1)_____ revolts against the empire. (2)_____ were the revolts of the Marathas, the Sikhs, the Jats and (3)_____ others. After the death of Aurangzeb, the Mughal empire began to (4)_____ fairly fast. The country soon (5)_____ into smaller territories many of which became more or less independent.

SubQuestion No : 5

Q.5 Select the most appropriate option for blank No. 1.

- Ans 1. were
2. are
3. was
4. have been

Question ID : 98958012597
Status : Answered
Chosen Option : 1

Comprehension:

In the following passage some words have been deleted. Fill in the blanks with the help of the alternatives given. Select the most appropriate option for each blank.

During the reign of Aurangzeb, the last of the Mughals, there (1)_____ revolts against the



empire. (2) _____ were the revolts of the Marathas, the Sikhs, the Jats and (3) _____ others. After the death of Aurangzeb, the Mughal empire began to (4) _____ fairly fast. The country soon (5) _____ into smaller territories many of which became more or less independent.

SubQuestion No : 6

Q.6 Select the most appropriate option for blank No. 2.

- Ans 1. This
 2. That
 3. These
 4. It

Question ID : 98958012598

Status : Answered

Chosen Option : 3

Comprehension:

In the following passage some words have been deleted. Fill in the blanks with the help of the alternatives given. Select the most appropriate option for each blank.

During the reign of Aurangzeb, the last of the Mughals, there (1) _____ revolts against the empire. (2) _____ were the revolts of the Marathas, the Sikhs, the Jats and (3) _____ others. After the death of Aurangzeb, the Mughal empire began to (4) _____ fairly fast. The country soon (5) _____ into smaller territories many of which became more or less independent.

SubQuestion No : 7

Q.7 Select the most appropriate option for blank No. 3.

- Ans 1. each
 2. many
 3. every
 4. more

Question ID : 98958012599

Status : Answered

Chosen Option : 2

Comprehension:

In the following passage some words have been deleted. Fill in the blanks with the help of the alternatives given. Select the most appropriate option for each blank.

During the reign of Aurangzeb, the last of the Mughals, there (1) _____ revolts against the empire. (2) _____ were the revolts of the Marathas, the Sikhs, the Jats and (3) _____ others. After the death of Aurangzeb, the Mughal empire began to (4) _____ fairly fast. The country soon (5) _____ into smaller territories many of which became more or less independent.

SubQuestion No : 8

Q.8 Select the most appropriate option for blank No. 4.

- Ans 1. disturb
 2. disintegrate
 3. disrupt
 4. disperse

Question ID : 98958012600

Status : Answered


Chosen Option : 2

Comprehension:

In the following passage some words have been deleted. Fill in the blanks with the help of the alternatives given. Select the most appropriate option for each blank.

During the reign of Aurangzeb, the last of the Mughals, there (1) _____ revolts against the empire. (2) _____ were the revolts of the Marathas, the Sikhs, the Jats and (3) _____ others. After the death of Aurangzeb, the Mughal empire began to (4) _____ fairly fast. The country soon (5) _____ into smaller territories many of which became more or less independent.

SubQuestion No : 9



Q.9 Select the most appropriate option for blank No. 5.

- Ans
- 1. broke out
 - 2. broke off
 - 3. broke up
 - 4. broke in

Question ID : 98958012601
Status : Answered
Chosen Option : 3

Q.10 Select the most appropriate meaning of the given idiom.

Lend an ear

- Ans
- 1. to not make trouble
 - 2. to force someone to listen
 - 3. to not tell someone something
 - 4. to pay attention to

Question ID : 98958012609
Status : Answered
Chosen Option : 4

Q.11 Select the most appropriate option to substitute the underlined segment in the given sentence. If no substitution is required, select No improvement.

We can't live without water, will we?

- Ans
- 1. No improvement
 - 2. can we
 - 3. do we
 - 4. won't we

Question ID : 98958012594
Status : Answered
Chosen Option : 2

Q.12 Select the word which means the same as the group of words given.

a large, deep pot used both in the oven and as a serving vessel.

- Ans
- 1. casserole
 - 2. skillet
 - 3. cauldron
 - 4. sauce-pan

Question ID : 98958012611
Status : Answered
Chosen Option : 1

Q.13 Select the most appropriate option to substitute the underlined segment in the given sentence. If no substitution is required, select No improvement.

His school was 7 km away from his house. I wondered how he covered so long distance daily on foot.

- Ans
- 1. No improvement
 - 2. so long the distance
 - 3. such long distance
 - 4. such a long distance



Question ID : 98958012595
Status : Answered
Chosen Option : 4

Q.14 Select the antonym of the given word.

SOBER

- Ans 1. nervous
 2. agitated
 3. calm
 4. serious

Question ID : 98958012606
Status : Answered
Chosen Option : 2

Q.15 In the sentence identify the segment which contains the grammatical error.

The Doon Valley with all its lights look beautiful at night from the top of the mountain.

- Ans 1. with all its lights
 2. at night
 3. look beautiful
 4. from the top

Question ID : 98958012591
Status : Answered
Chosen Option : 3

Q.16 Select the most appropriate word to fill in the blank.

The company management is of the opinion that not wearing a suit and tie at the workplace could create a bad _____ on clients.

- Ans 1. notion
 2. outlook
 3. response
 4. impression

Question ID : 98958012615
Status : Answered
Chosen Option : 4

Q.17 Select the wrongly spelt word.

- Ans 1. nuisance
 2. noticable
 3. negligible
 4. neighbouring

Question ID : 98958012613
Status : Answered
Chosen Option : 2

Q.18 Select the word which means the same as the group of words given.

Flowers or leaves woven together in a circle for placing on a coffin or a grave

- Ans 1. wreath
 2. bouquet
 3. garland



4. bunch

Question ID : 98958012610
Status : Answered
Chosen Option : 3

Q.19 Given below are four jumbled sentences. Select the option that gives their correct order.

- A. Since then Boeing has received over 5,000 orders for the aircraft and has delivered 371 to date.
B. The Max first started flying commercially in 2017.
C. Boeing had huge hopes for its 737 Max aircraft and viewed it as a key part of its future.
D. However, the company's market value has plummeted by nearly \$26 billion since the crash in Ethiopia.

- Ans 1. CBAD
 2. ABCD
 3. DCBA
 4. BCDA

Question ID : 98958012603
Status : Not Answered
Chosen Option : --

Q.20 Select the antonym of the given word.

SWERVE

- Ans 1. deviate
 2. lurch
 3. droop
 4. straighten

Question ID : 98958012607
Status : Not Answered
Chosen Option : --

Q.21 In the sentence identify the segment which contains the grammatical error.

The Japanese artist Yoh Nagao was busy splashing the wall from colours.

- Ans 1. splashing the wall
 2. The Japanese artist
 3. from colours
 4. was busy

Question ID : 98958012590
Status : Answered
Chosen Option : 3

Q.22 Given below are four jumbled sentences. Select the option that gives their correct order.

- A. It has been a leading producer of both industrial and agricultural goods.
B. The United States of America holds a dominant position in the world because of its high economic development.
C. Because of its enormous output, the United States has a major share in world trade.
D. It is also a leader in the development and application of innovative technology.

- Ans 1. BACD
 2. DABC
 3. BCAD
 4. ABCD



Question ID : **98958012602**
Status : **Not Answered**
Chosen Option : --

Q.23 Select the synonym of the given word.

RAMPANT

- Ans
- 1. rare
 - 2. gentle
 - 3. excessive
 - 4. limited

Question ID : **98958012605**
Status : **Answered**
Chosen Option : **2**

Q.24 Select the synonym of the given word.

EXEMPT

- Ans
- 1. hinder
 - 2. exclude
 - 3. reduce
 - 4. prevent

Question ID : **98958012604**
Status : **Answered**
Chosen Option : **2**

Q.25 Select the wrongly spelt word.

- Ans
- 1. brisk
 - 2. brittle
 - 3. bridle
 - 4. bristel

Question ID : **98958012612**
Status : **Answered**
Chosen Option : **4**

