



2018 IV 09

0930

Seat No. :

--	--	--	--	--

Time : 2½ Hours

GEOGRAPHY AND ECONOMICS (E)
(For Children With Special Needs)

Subject Code

S	0	1	7
---	---	---	---

Total No. of Questions : 5

(Printed Pages : 16)

Maximum Marks : 65

- INSTRUCTIONS:** I) **All** questions are **compulsory**.
II) Answers to be entered in the **space** provided on the question paper.
III) Figures to the **right** indicate **full** marks.

1. A) 1) Identify the picture given and answer the following questions.

[2]



a) Name the type of soil you see in the above picture.

b) Name any one State where this type of soil is found.



2) Match the resources given in **Column A** based on their ownership in **Column B** and write the correct answer in **Column C**. [2]

Column A	Column B	Column C
1) National resources	a) House	1) _____
2) Individual resources	b) Ocean	2) _____
	c) Railways	

3) Name the method used to control soil erosion against each picture. [2]



(1)



(2)



4) Choose and write only the correct answer from the alternatives given below. [1]

1) _____ is a example of non renewable resource.


- a) forest
- b) fossil fuel
- c) solar energy



B) 1) Match the following animals in **Column A** with their category of existence in **Column B** and write the correct answer in **Column C**. [2]

Column A	Column B	Column C
1)  Nicobar Pigeon	a) Extinct species	(1)
2)  Asiatic Cheetah	b) Normal species	(2)
	c) Endemic species	

2) Look at the picture and answer the following questions : [2]




a) Which Act was implemented in 1972 in India with various provisions for protecting species of wildlife ?



b) Write any one step taken by the Government of India to conserve forest and wildlife.

3) Within the poor, women are affected more than men due to the depletion of forest. [2]





Why are women affected more as compared to men due to the depletion of forest ?

(Give any two points)

1) _____

2) _____

4) We need to conserve our forest and wildlife. [2]






a) Name the two animals seen in the given pictures which are gravely threatened.

b) Which State passed the first resolution for joint forest management ?

2. A) 1)



Write any two advantages of dams.

[2]

2) Match the multipurpose projects in **Column A** with States in **Column B** and write the correct answer in **Column C**.

[2]

Column A	Column B	Column C
1) Chambal Valley Project	a) Andhra Pradesh	(1)
2) Nagarjuna Sagar Project	b) Punjab	(2)
	c) Madhya Pradesh	



3) Choose and write the correct alternative from the options given below. [1]

a) Tehri Dam Andolan is mainly concerned with the State of _____

i) Uttarakhand

ii) Punjab

iii) Haryana

4) Over exploitation and mismanagement of water resources will impoverish this resources. [2]



a) How does industrialization exert more pressure on existing fresh water resources ? (write one point)


b) Why is irrigation necessary in India ?




B) Tick mark the correct answer from the options given below :

[2]


1) Which one of the following is a fiber crop ?



a) Rice




b) Jute




c) Cotton

2) Which one of the following is a rabi crop ?



a) Maize



b) Wheat



c) Muskmelon

3) This type of farming is still practiced in few pockets of India.

[2]





a) Name the type of agriculture you can see in the given picture.

b) Land productivity is low in this type of agriculture. Give reason.

4) Complete the given sentences with the help of the picture given below. [2]



Tea is an important beverage crop in India.

1) Tea is processed with in the tea garden _____

2) Major tea producing states are _____




5) Millets are also known as coarse grains. [2]

a) What are the geographical conditions and soil required for the growth of Ragi. (Write any two points)

a) _____

b) _____

3. A) 1) Observe the following picture and answer the questions given below. [2]



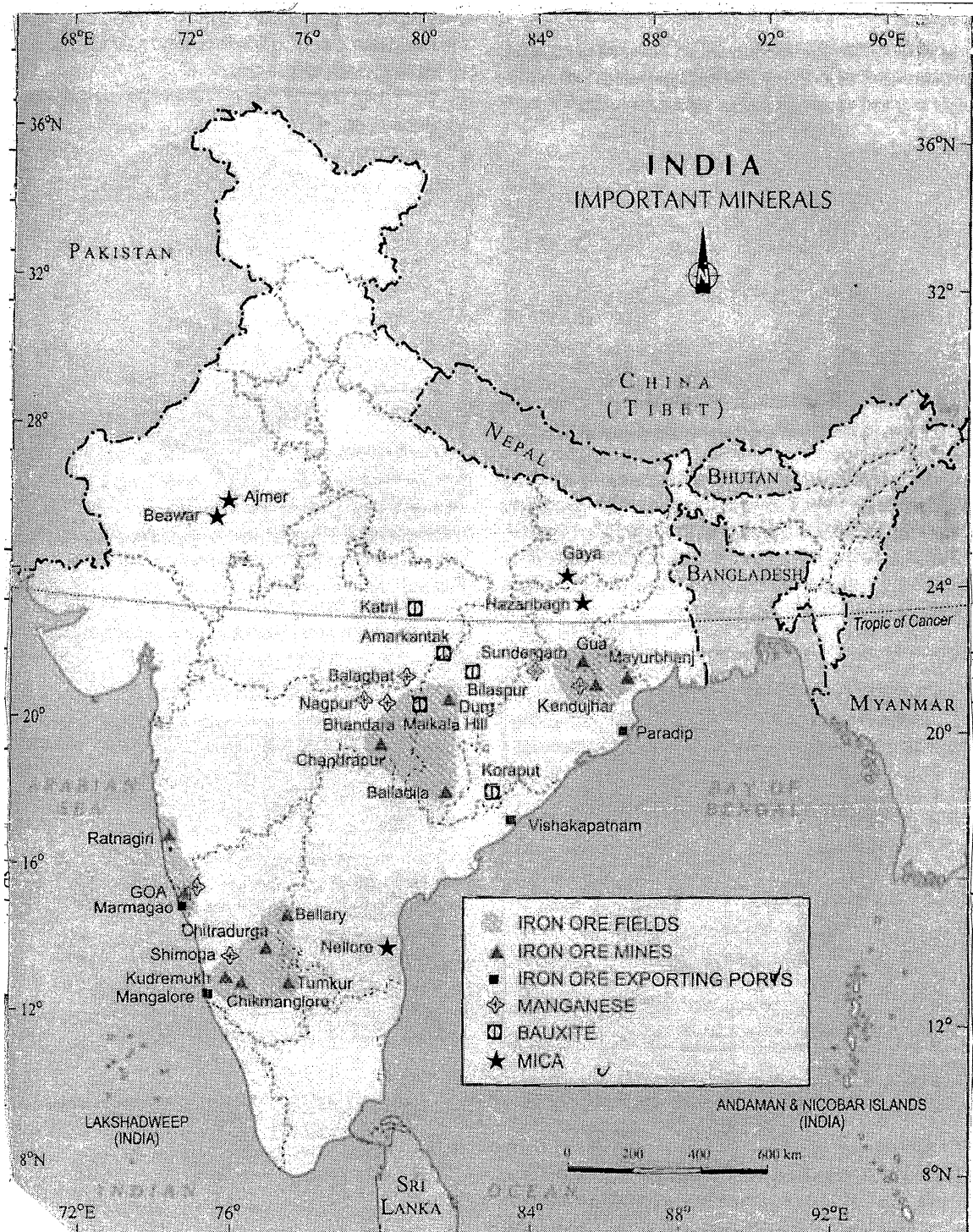
a) What are the raw materials used to produce biogas ?

b) State any one benefit of using Gobar gas to farmers.



2) Observe the map and answer the following questions given below.

[3]





a) Name the iron ore exporting port in Orissa.

b) Name any one mica producing area in Rajasthan.

c) Name any one iron ore mine in Maharashtra.

3) Choose and write only the correct alternative from those alternatives given below. [2]


a) Which one of the following is the electronic capital of India ? _____

- i) Pune
- ii) Hyderabad
- iii) Bangalore

b) Which of the following minerals is also called black gold ? _____

- i) Petroleum
- ii) Coal
- iii) Iron

B) 1) The textile industry occupies unique position in the Indian economy. [2]





a) Name any two textile industries.

b) Write any one challenge faced by the textile industry.

2) Choose and write only the correct alternative from the given alternatives. [2]

a) Most of the jute mills in India are located along the banks of the river

i) Yamuna ii) Kaveri iii) Hugli

b) Which one of the following industries uses limestone as a raw material ?

i) Aluminium ii) Cement iii) Jute

3) Iron and steel industry is the basic industry. Why ? [2]





4) a) What is manufacturing ? [1]

b) Write any two types of pollutions caused by industries. [1]

4. A) 1) Name the following : [2]

a) It is the oldest artificial port of India _____

b) It is used to carry gases liquids and slurry _____

2) Water ways are the cheapest mean of transport. State its importance (any two points). [2]



a) _____

b) _____



3) Air travel has made access easier. [2]



a) State two merits of airways.

4) Communication is process of sending messages. [2]

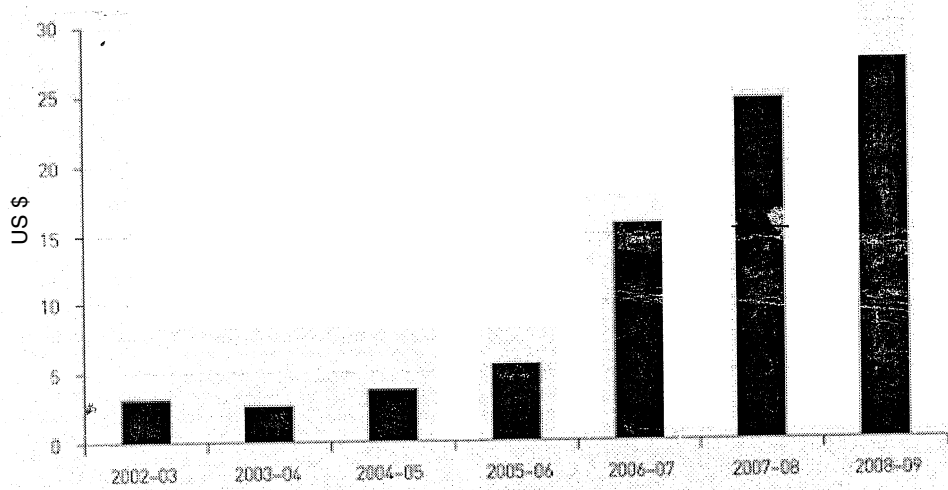
a) Write any two means of mass communication.

b) Name any two mail channels introduced recently.



5) Observe the bar graph of the trade carried out by India to the United States and answer the questions that follow below :

[2]



a) What was the amount of trade between the two countries in 2007 – 2008 ?

b) What was the difference in trade from 2004 – 05 to 2006 – 07 ?

5. A) 1) Choose and write only the correct alternative from the given alternatives. [2]

a) 24th December is observed as the _____ in India.

- i) Earth Day
- ii) National Consumer Day
- iii) Constitutional Day

b) _____ is accepted as a medium of exchange by the government of the country.

- i) Cattle
- ii) Grains
- iii) Money



2) Study the following table and answer the question given below : [2]

State/union territories	Male literacy rate	Female literacy rate
Kerala	96.02	91.98
Lakshadweep	96.11	88.25
Mizoram	93.72	89.40
Goa	92.81	81.84

a) Which State. Union territory has the highest percentage of male literacy rate ?

b) What was the female literacy rate of Goa ?

3) Write the full form of the following : [2]

a) M.N.C. _____

b) I.T. _____

4) Fill in the following table stating the definition and one example. [2]

	Primary Sector	Secondary Sector
a) Definition		
b) Example		

5) a) Mention any one factor which causes exploitation of consumer. [1]

b) Which bank issues currency in India ? [1]
