



**PGDM-C**

**MICAT SAMPLE QUESTIONS**

**DISCLAIMER**



**Please note that these are simply questions for your reference and not indicative of the actual paper. These questions are to give you an idea of what can be expected.**

**Good luck!**

Section	QNo	Question	Option	Correct
A- Descriptive	1	<p><b>“To be happy we must not be too concerned with others”</b> Present five <b>arguments in support</b> of this statement.</p>		
A- Descriptive	2	<p><b>“To be happy we must not be too concerned with others”</b> Present five <b>arguments against</b> this statement.</p>		
A- Descriptive	3	<p>Having given your arguments on both sides of the statement, “To be happy we must not be too concerned with others” present <b>your own views</b> in about 200 words in response to a request from a leading newspaper editor. Please note that you have to take one viewpoint for your response, i.e., either for or against. No marks will be given for expressing your views on both sides of the argument.</p>		
		<p>Arrange the following pictures in any sequence to create a story. Select your picture sequence and write a story of approximately 300 words in the allocated space. Ensure that all the pictures have been utilized in your story.</p> <div data-bbox="370 1025 1190 1287" style="border: 1px solid black; height: 195px; margin-top: 10px;"></div>		

A-  
Descriptive

4



A,B,C,D

A,B,D,C

A,C,B,D

A,C,D,B

A,D,B,C

A,D,C,B

B,A,C,D

B,A,D,C

B,C,A,D

B,C,D,A

B,D,A,C

B,D,C,A

C,A,B,D

C,A,D,B

			C,B,A,D	
			C,B,D,A	
			C,D,A,B	
			C,D,B,A	
			D,A,B,C	
			D,A,C,B	
			D,B,A,C	
			D,B,C,A	
			D,C,A,B	
			D,C,B,A	

There are fifteen problems in this section. Each problem consists of four clues and against that set, five alternatives are given. These alternatives are associated with either one or more than one clues in some manner. Of these alternatives, there is only one option that is associated with all four clues in some way. This alternative is the right answer. For example in the sample problem, alternative E “**apple**” is related to all the four clues as follows: i) an apple cart ii) cider is made from apples iii)apple of my eye and iv) orange and apple are fruits. Therefore alternative 'E' is the right answer.

Clues		Alternatives	
i	Cart	A	Round
ii	Cider	B	Juice
iii	Eye	C	Orchard
iv	Orange	D	Village
		E	Apple

- I Eyes
- ii Free
- iii Hair
- iv Safe

C-Reasoning

1

Money

Distance

Secret

Air

Lock

Correct

There are fifteen problems in this section. Each problem consists of four clues and against that set, five alternatives are given. These alternatives are associated with either one or more than one clues in some manner. Of these alternatives, there is only one option that is associated with all four clues in some way. This alternative is the right answer. For example in the sample problem, alternative E “**apple**” is related to all the four clues as follows: i) an apple cart ii) cider is made from apples iii)apple of my eye and iv) orange and apple are fruits. Therefore alternative 'E' is the right answer.

Clues		Alternatives	
i	Cart	A	Round

C-Reasoning

2

ii	Cider	B	Juice
iii	Eye	C	Orchard
iv	Orange	D	Village
		E	Apple

- I Miss
- ii Struck
- iii Slap
- iv Down

Hit

Correct

Repulse

Lightning

Collide

Bang

C-Reasoning

3

There are fifteen problems in this section. Each problem consists of four clues and against that set, five alternatives are given. These alternatives are associated with either one or more than one clues in some manner. Of these alternatives, there is only one option that is associated with all four clues in some way. This alternative is the right answer. For example in the sample problem, alternative E “**apple**” is related to all the four clues as follows: i) an apple cart ii) cider is made from apples iii)apple of my eye and iv) orange and apple are fruits. Therefore alternative 'E' is the right answer.

Clues		Alternatives	
i	Cart	A	Round
ii	Cider	B	Juice
iii	Eye	C	Orchard
iv	Orange	D	Village
		E	Apple

Bash

Correct

- I Party
- ii Hit
- iii Condemn
- iv Hash

Crash

Criticize

Hosts

Slit

There are fifteen problems in this section. Each problem consists of four clues and against that set, five alternatives are given. These alternatives are associated with either one or more than one clues in some manner. Of these alternatives, there is only one option that is associated with all four clues in some way. This alternative is the right answer. For example in the sample problem, alternative E “**apple**” is related to all the four clues as follows: i) an apple cart ii) cider is made from apples iii)apple of my eye and iv) orange and apple are fruits. Therefore alternative 'E' is the right answer.

Clues		Alternatives	
i	Cart	A	Round
ii	Cider	B	Juice
iii	Eye	C	Orchard
iv	Orange	D	Village
		E	Apple

Thrill

- I Careless
- ii Toy
- iii Cooker
- iv Happy

C-Reasoning

4

			Pressure																									
			Whistle	Correct																								
			Sad																									
			Child																									
C- Reasoning	5	<p>There are fifteen problems in this section. Each problem consists of four clues and against that set, five alternatives are given. These alternatives are associated with either one or more than one clues in some manner. Of these alternatives, there is only one option that is associated with all four clues in some way. This alternative is the right answer. For example in the sample problem, alternative E “<b>apple</b>” is related to all the four clues as follows: i) an apple cart ii) cider is made from apples iii)apple of my eye and iv) orange and apple are fruits. Therefore alternative 'E' is the right answer.</p> <table border="1"> <thead> <tr> <th colspan="2">Clues</th> <th colspan="2">Alternatives</th> </tr> </thead> <tbody> <tr> <td>i</td> <td>Cart</td> <td>A</td> <td>Round</td> </tr> <tr> <td>ii</td> <td>Cider</td> <td>B</td> <td>Juice</td> </tr> <tr> <td>iii</td> <td>Eye</td> <td>C</td> <td>Orchard</td> </tr> <tr> <td>iv</td> <td>Orange</td> <td>D</td> <td>Village</td> </tr> <tr> <td></td> <td></td> <td>E</td> <td>Apple</td> </tr> </tbody> </table> <p>I Over ii Promise iii Blue iv Ocean</p>	Clues		Alternatives		i	Cart	A	Round	ii	Cider	B	Juice	iii	Eye	C	Orchard	iv	Orange	D	Village			E	Apple	Break	
		Clues		Alternatives																								
i	Cart	A	Round																									
ii	Cider	B	Juice																									
iii	Eye	C	Orchard																									
iv	Orange	D	Village																									
		E	Apple																									
			Green																									
			Moon	Correct																								



			Vow																									
			Finished																									
C-Reasoning	6	<p>There are fifteen problems in this section. Each problem consists of four clues and against that set, five alternatives are given. These alternatives are associated with either one or more than one clues in some manner. Of these alternatives, there is only one option that is associated with all four clues in some way. This alternative is the right answer. For example in the sample problem, alternative E “<b>apple</b>” is related to all the four clues as follows: i) an apple cart ii) cider is made from apples iii)apple of my eye and iv) orange and apple are fruits. Therefore alternative 'E' is the right answer.</p> <table border="1"> <thead> <tr> <th colspan="2">Clues</th> <th colspan="2">Alternatives</th> </tr> </thead> <tbody> <tr> <td>i</td> <td>Cart</td> <td>A</td> <td>Round</td> </tr> <tr> <td>ii</td> <td>Cider</td> <td>B</td> <td>Juice</td> </tr> <tr> <td>iii</td> <td>Eye</td> <td>C</td> <td>Orchard</td> </tr> <tr> <td>iv</td> <td>Orange</td> <td>D</td> <td>Village</td> </tr> <tr> <td></td> <td></td> <td>E</td> <td>Apple</td> </tr> </tbody> </table> <p>I Wheat ii Flood iii Polished iv Cash</p>	Clues		Alternatives		i	Cart	A	Round	ii	Cider	B	Juice	iii	Eye	C	Orchard	iv	Orange	D	Village			E	Apple	Rice	Correct
		Clues		Alternatives																								
		i	Cart	A	Round																							
		ii	Cider	B	Juice																							
		iii	Eye	C	Orchard																							
iv	Orange	D	Village																									
		E	Apple																									
			Card																									
			Field																									
			Hit																									
			Cricket																									
		<p>There are fifteen problems in this section. Each problem consists of four clues and against that set, five alternatives are given. These alternatives are associated with either one or more than one clues in some manner. Of these alternatives, there is only one option that is associated with all four clues in some way. This alternative is the right answer. For example in the sample problem, alternative E “<b>apple</b>” is related to all the four clues as follows: i) an apple cart ii) cider</p>																										

is made from apples iii)apple of my eye and iv) orange and apple are fruits. Therefore alternative 'E' is the right answer.

Clues		Alternatives	
i	Cart	A	Round
ii	Cider	B	Juice
iii	Eye	C	Orchard
iv	Orange	D	Village
		E	Apple

- I Temperate
- ii Cool
- iii Tepid
- iv Sun

C-Reasoning

7

Warm

Correct

Wave

Grassland

Care

Moon

There are fifteen problems in this section. Each problem consists of four clues and against that set, five alternatives are given. These alternatives are associated with either one or more than one clues in some manner. Of these alternatives, there is only one option that is associated with all four clues in some way. This alternative is the right answer. For example in the sample problem, alternative E “**apple**” is related to all the four clues as follows: i) an apple cart ii) cider is made from apples iii)apple of my eye and iv) orange and apple are fruits. Therefore alternative 'E' is the right answer.

Clues		Alternatives	
i	Cart	A	Round
ii	Cider	B	Juice
iii	Eye	C	Orchard

C-Reasoning

8

iv	Orange	D	Village
		E	Apple

- I Curve
- ii Sail
- iii Gas
- iv Fall

Balloon

Wind

Correct

Glory

Boat

Raid

C-Reasoning

9

There are fifteen problems in this section. Each problem consists of four clues and against that set, five alternatives are given. These alternatives are associated with either one or more than one clues in some manner. Of these alternatives, there is only one option that is associated with all four clues in some way. This alternative is the right answer. For example in the sample problem, alternative E “**apple**” is related to all the four clues as follows: i) an apple cart ii) cider is made from apples iii)apple of my eye and iv) orange and apple are fruits. Therefore alternative 'E' is the right answer.

Clues		Alternatives	
i	Cart	A	Round
ii	Cider	B	Juice
iii	Eye	C	Orchard
iv	Orange	D	Village
		E	Apple

Treaty

- I Draft

- ii Rely
- iii Border
- iv Local

Amy

Bank

Correct

News

Force

There are fifteen problems in this section. Each problem consists of four clues and against that set, five alternatives are given. These alternatives are associated with either one or more than one clues in some manner. Of these alternatives, there is only one option that is associated with all four clues in some way. This alternative is the right answer. For example in the sample problem, alternative E “**apple**” is related to all the four clues as follows: i) an apple cart ii) cider is made from apples iii)apple of my eye and iv) orange and apple are fruits. Therefore alternative 'E' is the right answer.

Clues		Alternatives	
i	Cart	A	Round
ii	Cider	B	Juice
iii	Eye	C	Orchard
iv	Orange	D	Village
		E	Apple

Rose

Correct

- I Satin
- ii On feet
- iii Rebellion
- iv Fragrance

C-Reasoning

10

Incense

Perfume

Revolution

Invention

There are fifteen problems in this section. Each problem consists of four clues and against that set, five alternatives are given. These alternatives are associated with either one or more than one clues in some manner. Of these alternatives, there is only one option that is associated with all four clues in some way. This alternative is the right answer. For example in the sample problem, alternative E “**apple**” is related to all the four clues as follows: i) an apple cart ii) cider is made from apples iii)apple of my eye and iv) orange and apple are fruits. Therefore alternative 'E' is the right answer.

Clues		Alternatives	
i	Cart	A	Round
ii	Cider	B	Juice
iii	Eye	C	Orchard
iv	Orange	D	Village
		E	Apple

Help

C-Reasoning

11

- I Extra
- ii Salute
- iii Unbalance
- iv Advice

Tax

Tip

Correct

Tank

Bend

C-Reasoning

12

There are fifteen problems in this section. Each problem consists of four clues and against that set, five alternatives are given. These alternatives are associated with either one or more than one clues in some manner. Of these alternatives, there is only one option that is associated with all four clues in some way. This alternative is the right answer. For example in the sample problem, alternative E “apple” is related to all the four clues as follows: i) an apple cart ii) cider is made from apples iii)apple of my eye and iv) orange and apple are fruits. Therefore alternative 'E' is the right answer.

Clues		Alternatives	
i	Cart	A	Round
ii	Cider	B	Juice
iii	Eye	C	Orchard
iv	Orange	D	Village
		E	Apple

- I Lamb
- ii Look
- iii Knife
- iv Joy

Vegetable

Sea

Kill

Correct

Sheep

Run

There are fifteen problems in this section. Each problem consists of four clues and against that set, five alternatives are given. These alternatives are associated with either one or more than one clues in some manner. Of these alternatives, there is only one option that is associated with all four clues in some way. This alternative is the right answer. For example in the sample problem, alternative E “apple” is related to all the four clues as follows: i) an apple cart ii) cider is made from apples iii)apple of my eye and iv) orange and apple are fruits. Therefore alternative 'E' is the right answer.

Clues		Alternatives	

C-Reasoning

13

i	Cart	A	Round
ii	Cider	B	Juice
iii	Eye	C	Orchard
iv	Orange	D	Village
		E	Apple

- I Polish
- ii Sin
- iii Pie
- iv Eye

Salvation

Apple

Correct

Chart

Potato

Shoe

C-Reasoning

14

There are fifteen problems in this section. Each problem consists of four clues and against that set, five alternatives are given. These alternatives are associated with either one or more than one clues in some manner. Of these alternatives, there is only one option that is associated with all four clues in some way. This alternative is the right answer. For example in the sample problem, alternative E “**apple**” is related to all the four clues as follows: i) an apple cart ii) cider is made from apples iii)apple of my eye and iv) orange and apple are fruits. Therefore alternative 'E' is the right answer.

Clues		Alternatives	
i	Cart	A	Round
ii	Cider	B	Juice
iii	Eye	C	Orchard
iv	Orange	D	Village
		E	Apple

Sof

- I Cash
- ii Hard
- iii Type
- iv Person

Word

Water

Flow

Kind

Correct

There are fifteen problems in this section. Each problem consists of four clues and against that set, five alternatives are given. These alternatives are associated with either one or more than one clues in some manner. Of these alternatives, there is only one option that is associated with all four clues in some way. This alternative is the right answer. For example in the sample problem, alternative E “**apple**” is related to all the four clues as follows: i) an apple cart ii) cider is made from apples iii)apple of my eye and iv) orange and apple are fruits. Therefore alternative 'E' is the right answer.

Clues		Alternatives	
i	Cart	A	Round
ii	Cider	B	Juice
iii	Eye	C	Orchard
iv	Orange	D	Village
		E	Apple

Merchant

- i Cloth
- ii Window
- iii Eye
- iv Man

C-Reasoning

15



			Blind	Correct
			Woman	
			Surgeon	
			Open	
C- Reasoning	16	<p>Each question consists of two statements followed by two conclusions, I and II. Considering the two given statements to be true, identify the conclusion(s) that follow logically beyond any reasonable doubt from the information given in the statements, and choose the most appropriate of the following options:</p> <p>(A) Only conclusion I follows  (B) Only conclusion II follows  (C) Either conclusion I or II follows  (D) Neither conclusion I nor II follows  (E) Both conclusions I and II follow</p> <p><i>Sentence -1</i> Despite the scorching sun, none of the fun-loving tourists stayed back on the bus; all ventured to the beach.  <i>Sentence -2</i> The group had many senior citizens, some of whom were fun-loving and some of whom were not.</p> <p><i>Conclusion 1:</i> There were at least some senior citizens who were at the beach.  <i>Conclusion 2:</i> There were at least some senior citizens who were not at the beach.</p>	If only conclusion I follows	Correct
			If only conclusion II follows	
			If either conclusion I or II follows	
			If neither conclusion I nor II follows	
			If both conclusions I and II follow	
C-	17	<p>Each question consists of two statements followed by two conclusions, I and II. Considering the two given statements to be true, identify the conclusion(s) that follow logically beyond any reasonable doubt from the information given in the statements, and choose the most appropriate of the following options:</p> <p>(A) Only conclusion I follows  (B) Only conclusion II follows  (C) Either conclusion I or II follows  (D) Neither conclusion I nor II follows</p>	If only conclusion I	

Reasoning		<p>(E) Both conclusions I and II follow</p> <p><i>Sentence -1</i> Conservationists have segregated bird species into ‘extinct’, ‘critically endangered’, ‘endangered’, ‘vulnerable’ and those of ‘least concern’ depending on the population of each species and causes of threat.  <i>Sentence -2</i> Each category is mutually exclusive and taken together the categories are exhaustive.</p> <p><i>Conclusion 1:</i> The Bengal Florican which is currently identified as a critically endangered species with only 400 birds worldwide will soon become extinct.  <i>Conclusion 2:</i> A species such as the Forest Owlet which is marked ‘critically endangered’ is obviously also ‘vulnerable’.</p>	follows	
			If only conclusion II follows	
			If either conclusion I or II follows	
			If neither conclusion I nor II follows	Correct
			If both conclusions I and II follow	
C-Reasoning	18	<p>Each question consists of two statements followed by two conclusions, I and II. Considering the two given statements to be true, identify the conclusion(s) that follow logically beyond any reasonable doubt from the information given in the statements, and choose the most appropriate of the following options:</p> <p>(A) Only conclusion I follows  (B) Only conclusion II follows  (C) Either conclusion I or II follows  (D) Neither conclusion I nor II follows  (E) Both conclusions I and II follow</p> <p><i>Sentence -1</i> Prior to twenty-four hour news channels, we had news coming in just two or three times a day.  <i>Sentence -2</i> Round-the-clock news has given us continuous access to sensational rubbish rather than meaningful analytical insights.</p> <p><i>Conclusion 1:</i> If we want meaningful analytical insights, we should have news coming in just once a day.  <i>Conclusion 2:</i> Round-the-clock news channels are responsible for poor quality of news reporting.</p>	If only conclusion I follows	
			If only conclusion II follows	Correct
			If either conclusion I or II follows	
			If neither conclusion I nor II follows	
			If both conclusions I and II follow	
		<p>Each question consists of two statements followed by two conclusions, I and II. Considering the two given statements to be true, identify the conclusion(s) that follow logically beyond any reasonable doubt from the information given in the statements, and choose the most appropriate of the following options:</p>		

C-Reasoning	19	<p>(A) Only conclusion I follows  (B) Only conclusion II follows  (C) Either conclusion I or II follows  (D) Neither conclusion I nor II follows  (E) Both conclusions I and II follow</p> <p><i>Sentence -1</i> Organic farming is time consuming and expensive  <i>Sentence -2</i> However organic farming is gentle on the soil and yields produce that is far more nutritious than conventionally grown crops.</p> <p><i>Conclusion 1:</i> If maintaining the quality of the soil is a major concern for farmers, then they have the choice of turning to organic farming.  <i>Conclusion 2:</i> If farmers are poor they have no choice but to adopt conventional methods of farming.</p>	If only conclusion I follows	Correct
			If only conclusion II follows	
			If either conclusion I or II follows	
			If neither conclusion I nor II follows	
			If both conclusions I and II follow	
C-Reasoning	20	<p><b>Each statement is followed by two assumptions which may or may not contain data that is presupposed by the statement. Choose the most appropriate option:</b></p> <p>As shoppers move online they opine that though it is time saving and offers hefty discounts, it lacks all the fun of bargaining and hopping from shop to shop looking for the best deal.</p> <p>Assumption 1: Offline shops do not offer hefty discounts like online stores.</p> <p>Assumption 2: Online shoppers miss the fun they used to have bargain-hunting earlier.</p>	If the statement presupposes either assumption I or it presupposes assumption II	
			If the statement presupposes neither assumption I or assumption II	
			If the statement presupposes only assumption I	
			If the statement presupposes only assumption II	Correct
			If the statement presupposes both assumption I and assumption II	
		<p><b>Each statement is followed by two assumptions which may or may not contain data that is presupposed by the statement. Choose the most appropriate option:</b></p>		

C-Reasoning	21	<p>The price of hasty decision making is time spent afterwards convincing people to come on board, getting them to agree to a halfbaked plan.</p> <p>Assumption 1: Decisions made in haste are never fully thought through.</p> <p>Assumption 2: It is better to spend time before coming to a decision than later.</p>	If the statement presupposes either assumption I or it presupposes assumption II	
			If the statement presupposes neither assumption I or assumption II	
			If the statement presupposes only assumption I	
			If the statement presupposes only assumption II	
			If the statement presupposes both assumption I and assumption II	Correct
C-Reasoning	22	<p><b>Each statement is followed by two assumptions which may or may not contain data that is presupposed by the statement. Choose the most appropriate option:</b></p> <p>With the increasing number of accidents involving pedestrians, the government has decided to use a two-pronged approach to resolve this problem: on the one hand it has decided to make road infrastructure pedestrian friendly, and on the other, it has decided to change people's attitudes through continuous cultural interventions.</p> <p>Assumption 1: The government views its two pronged approach as necessary and sufficient to address and resolve the issue.</p> <p>Assumption 2: Other strategies to resolve the problem are less effective.</p>	If the statement presupposes either assumption I or it presupposes assumption II	
			If the statement presupposes neither assumption I or assumption II	
			If the statement presupposes only assumption I	Correct
			If the statement presupposes only assumption II	
			If the statement presupposes both assumption I and assumption II	
C-	23	<p><b>Each statement is followed by two assumptions which may or may not contain data that is presupposed by the statement. Choose the most appropriate option:</b></p> <p>The most common problem with new-year resolutions is that they have lofty, well-intentioned goals with little operational details.</p>	If the statement presupposes either assumption I or it	

Reasoning		Assumption 1: A goal which does not have an operational plan is not a good goal. Assumption 2: A good goal is one which is not lofty and has a detailed operational strategy.	presupposes assumption II	
			If the statement presupposes neither assumption I or assumption II	
			If the statement presupposes only assumption I	Correct
			If the statement presupposes only assumption II	
			If the statement presupposes both assumption I and assumption II	
C-Reasoning	24			
				Correct

C-Reasoning	25			Correct
-------------	----	--	--	---------

--	--	--	--	--

--	--	--	--	--

--	--	--	--	--


















--	--	--	--	--

C-Reasoning	26			
-------------	----	--	--	--

				Correct
--	--	--	--	---------

--	--	--	--	--



Reasoning		<table border="1"> <tr> <td></td> <td></td> <td></td> <td></td> <td data-bbox="690 51 799 141">?</td> </tr> </table>					?																																													
				?																																																
																																																				
				Correct																																																
																																																				
																																																				
C-Reasoning	29	<table border="1"> <tr> <td>B</td><td>e</td><td>F</td><td>G</td><td>a</td><td>K</td><td>L</td><td>u</td><td>P</td><td>Q</td><td>o</td><td>T</td><td></td> </tr> <tr> <td>a</td><td></td><td>i</td><td>u</td><td></td><td>e</td><td>o</td><td></td><td>a</td><td>i</td><td></td><td>μ</td><td>?</td> </tr> <tr> <td>C</td><td>o</td><td>D</td><td>H</td><td>i</td><td>J</td><td>M</td><td>e</td><td>N</td><td>R</td><td>a</td><td>s</td><td></td> </tr> </table>	B	e	F	G	a	K	L	u	P	Q	o	T		a		i	u		e	o		a	i		μ	?	C	o	D	H	i	J	M	e	N	R	a	s		<table border="1"> <tr> <td>x</td><td>i</td><td>y</td> </tr> <tr> <td>o</td><td></td><td>e</td> </tr> <tr> <td>W</td><td>μ</td><td>Z</td> </tr> </table>	x	i	y	o		e	W	μ	Z	
B	e	F	G	a	K	L	u	P	Q	o	T																																									
a		i	u		e	o		a	i		μ	?																																								
C	o	D	H	i	J	M	e	N	R	a	s																																									
x	i	y																																																		
o		e																																																		
W	μ	Z																																																		
			<table border="1"> <tr> <td>V</td><td>i</td><td>y</td> </tr> <tr> <td>e</td><td></td><td>o</td> </tr> <tr> <td>W</td><td>μ</td><td>x</td> </tr> </table>	V	i	y	e		o	W	μ	x																																								
V	i	y																																																		
e		o																																																		
W	μ	x																																																		
			<table border="1"> <tr> <td>V</td><td>i</td><td>Y</td> </tr> <tr> <td>o</td><td></td><td>e</td> </tr> <tr> <td>W</td><td>μ</td><td>X</td> </tr> </table>	V	i	Y	o		e	W	μ	X																																								
V	i	Y																																																		
o		e																																																		
W	μ	X																																																		



			<table border="1"> <tr><td>X</td><td>e</td><td>Y</td></tr> <tr><td>V</td><td>i</td><td>Y</td></tr> <tr><td>e</td><td></td><td>o</td></tr> <tr><td>W</td><td>μ</td><td>X</td></tr> </table>	X	e	Y	V	i	Y	e		o	W	μ	X	Correct
X	e	Y														
V	i	Y														
e		o														
W	μ	X														
C-Reasoning	30															
				Correct												
D- General Awareness	1	OlaCabs bought _____ in March 2015 for \$200million.	TaxiForSure	Correct												
			MeruCabs													
			Uber													

			AppleCabs										
D- General Awareness	2	Oppo, Obi, Digiflip, Jolla and Inco are brand names for _____.	Mobile phones	Correct									
			Accessories										
			Pendrives										
			Hard disks										
D- General Awareness	3	Match the following three columns: <table border="1" data-bbox="240 432 1039 556"> <tr> <td>1. Foodiebay</td> <td>g. OYO rooms</td> <td>j. Deepender Goyal</td> </tr> <tr> <td>2. Oravel</td> <td>h. Dazo</td> <td>k. Ritesh Agarwal</td> </tr> <tr> <td>3. Tapcibo</td> <td>i. Zomato</td> <td>l. Shashaank Singhal</td> </tr> </table>	1. Foodiebay	g. OYO rooms	j. Deepender Goyal	2. Oravel	h. Dazo	k. Ritesh Agarwal	3. Tapcibo	i. Zomato	l. Shashaank Singhal	1 : i : j ; 2 : g : k ; 3 : h : l	Correct
1. Foodiebay	g. OYO rooms	j. Deepender Goyal											
2. Oravel	h. Dazo	k. Ritesh Agarwal											
3. Tapcibo	i. Zomato	l. Shashaank Singhal											
			1 : i : j ; 2 : g : l ; 3 : h : k										
			3 : i : j ; 2 : g : k ; 1 : h : l										
			3 : i : j ; 2 : g : l ; 1 : h : k										
D- General Awareness	4	Match the following brands and companies: <table border="1" data-bbox="240 935 1039 1099"> <tr> <td>1. Oral-B</td> <td>g. Nestle</td> </tr> <tr> <td>2. Clean &amp; Clear</td> <td>h. Unilever</td> </tr> <tr> <td>3. Crunch</td> <td>i. P&amp;G</td> </tr> <tr> <td>4. Vaseline</td> <td>j. Johnson &amp; Johnson</td> </tr> </table>	1. Oral-B	g. Nestle	2. Clean & Clear	h. Unilever	3. Crunch	i. P&G	4. Vaseline	j. Johnson & Johnson	1 : i ; 2 : j ; 3 : g ; 4 : h	Correct	
1. Oral-B	g. Nestle												
2. Clean & Clear	h. Unilever												
3. Crunch	i. P&G												
4. Vaseline	j. Johnson & Johnson												
			2 : i ; 3 : j ; 4 : g ; 1 : h										
			3 : i ; 4 : j ; 1 : g ;										

			2 : h									
			4 : i ; 1 : j ; 2 : g ; 3 : h									
D- General Awareness	5	<p>Match brands with taglines:</p> <table border="1"> <tr> <td>1. Audi</td> <td>g. The relentless pursuit of perfection</td> </tr> <tr> <td>2. BMW</td> <td>h. The ultimate driving machine</td> </tr> <tr> <td>3. Cadillac</td> <td>i. Break through</td> </tr> <tr> <td>4. Lexus</td> <td>j. Never follow</td> </tr> </table>	1. Audi	g. The relentless pursuit of perfection	2. BMW	h. The ultimate driving machine	3. Cadillac	i. Break through	4. Lexus	j. Never follow	2 : j ; 3 : h ; 4 : i ; 1 : g	
1. Audi	g. The relentless pursuit of perfection											
2. BMW	h. The ultimate driving machine											
3. Cadillac	i. Break through											
4. Lexus	j. Never follow											
			3 : j ; 4 : h ; 1 : i ; 2 : g									
			4 : j ; 1 : h ; 2 : i ; 3 : g									
			1 : j ; 2 : h ; 3 : i ; 4 : g	Correct								
D- General Awareness	6	Which of the following companies started India operations in 2016?	Disney									
			Netflix	Correct								
			Amazon									
			Walmart									
D- General Awareness	7	Free Basics is an initiative of?	Twitter									
			GOI									
			Facebook	Correct								
			AAP									
D- General Awareness	8	Which of the following has ventured into the FMCG sector recently?	Iyenger Group									
			Patanjali	Correct								
			Art of Living									

			VishwaParishad									
D- General Awareness	9	'Pandeymonium', the book that was recently launched, is written by _____.	Prasoon Pandey									
			Piyush Pandey	Correct								
			Ritu Pandey									
			Mony Pandey									
D- General Awareness	10	<p>Match the following:</p> <table border="1"> <tr> <td>1. Fastrack</td> <td>a. Dove</td> </tr> <tr> <td>2. Indigo</td> <td>b. Gujarat Tourism</td> </tr> <tr> <td>3. Elixir</td> <td>c. Blue</td> </tr> <tr> <td>4. Amitabh Bachchan</td> <td>d. Titan</td> </tr> </table>	1. Fastrack	a. Dove	2. Indigo	b. Gujarat Tourism	3. Elixir	c. Blue	4. Amitabh Bachchan	d. Titan	1-d, 2-c, 3-a, 4-b	Correct
1. Fastrack	a. Dove											
2. Indigo	b. Gujarat Tourism											
3. Elixir	c. Blue											
4. Amitabh Bachchan	d. Titan											
			2-d, 3-c, 4-a, 1-b									
			3-d, 4-c, 1-a, 2-b									
			4-d, 1-c, 2-a, 3-b									
D- General Awareness	11	<p>Match the following:</p> <table border="1"> <tr> <td>1. Walmart</td> <td>a. Memories</td> </tr> <tr> <td>2. Paperboat</td> <td>b. Streaming</td> </tr> <tr> <td>3. Periscope</td> <td>c. Pen</td> </tr> <tr> <td>4. Mont Blanc</td> <td>d. Retail</td> </tr> </table>	1. Walmart	a. Memories	2. Paperboat	b. Streaming	3. Periscope	c. Pen	4. Mont Blanc	d. Retail	2-d, 3-c, 4-a, 1-b	
1. Walmart	a. Memories											
2. Paperboat	b. Streaming											
3. Periscope	c. Pen											
4. Mont Blanc	d. Retail											
			3-d, 4-c, 1-a, 2-b									
			4-d, 1-c, 2-a, 3-b									
			1-d, 2-a, 3-b, 4-c	Correct								

D- General Awareness	12	The deficiency of Vitamin A affects which organ the most?	Eyes	Correct
			Kidney	
			Liver	
			Pancreas	
D- General Awareness	13	Who was the Prime Minister of india during the period known as the 'Emergency'?	Rajiv Gandhi	
			Narendra Modi	
			Indira Gandhi	Correct
			IK Gujral	
D- General Awareness	14	What is the strength of the Indian Lok Sabha?	585	
			545	Correct
			510	
			420	
D- General Awareness	15	When did the Non-Cooperation Movement in India begin?	1910	
			1914	
			1920	Correct
			1925	
D- General Awareness	16	Which Indian state houses the Kaziranga National Park?	Arunachal Pradesh	
			Manipur	
			Madhya Pradesh	
			Assam	Correct
D- General Awareness	17	What is the full form of NIA?	National Intelligence Agency	

			National Investigation Agency	Correct
			National Interim Advisory	
			National Integration Agency	
D- General Awareness	18	On what continent is the mountain range known as the Andes?	North America	
			Asia	
			Africa	
			South America	Correct
D- General Awareness	19	In which year did the Indian Supreme Court recognise transgender people as the 'third gender'?	2016	
			2014	Correct
			2010	
			2007	
D- General Awareness	20	Which of the following is the chemical composition of 'laughing gas'?	CO	
			H <sub>2</sub> N <sub>3</sub>	
			N <sub>2</sub> O	Correct
			HNO <sub>3</sub>	
D- General Awareness	21	_____ is the committee that most recently submitted a report on the workings of the BCCI.	Lodha Committee	Correct
			Jethmalani Committee	
			Dave Committee	
			Salve Committee	
D- General Awareness	22	Who authored the 'Vande Mataram'?	Rabindranath Tagore	

			Bankim Chandra Chattopadhyay	Correct
			Sarat Chandra Bose	
			Michael Madhusudan Dutt	
D- General Awareness	23	On which Shakespearean play is the film 'Omkara' based?	Macbeth	
			Hamlet	
			King Lear	
			Othello	Correct
D- General Awareness	24	In which city was the 2015 United Nations Climate Change Conference held?	Copenhagen	
			Paris	Correct
			Caracas	
			Durban	
D- General Awareness	25	For his work on what social issue did Kailash Satyarthi win the Nobel Peace Prize in 2014?	Child labour	Correct
			Micro-finance	
			Women's selfhelp groups	
			Urban renewal	
E- Verbal Ability	1	<p><i>Read the passage given and answer the questions that follow</i></p> <p>In the 1990s, one of the most popular genres in India was the diaspora romance, which began a long and continuing representation of the Indian diaspora – or at least the diaspora in the UK and the USA, as Indian cinema has barely glanced at the twenty-million strong Indian diaspora beyond the West. The landmark was Aditya Chopra's <i>DDLJ</i> (Dilwale Dulhania Le Jayenge, 1995), which many have argued, also inaugurated the new type of Hindi cinema known as Bollywood. Henceforth, the diaspora began to play a key role in Indian cinema both as audiences as well as characters within the films, no longer Hindi-speaking exiles waiting to return to the motherland, but the second generation born and brought up in the West. In <i>DDLJ</i>, the father dreams of returning to the homeland, but the children have no such intention. Although the daughter is taken to India for her wedding, there is no indication of a return otherwise. Yet these films do not present the characters as realistically diasporic: these are Hindi-speaking Indians whose fantasies, styling and interiors are those of Indians, or at most recent migrants, even if they display no dreams of a 'return'. This means that while the parents may be convincing (as first-generation migrants), the children are not...Shah Rukh Khan (SRK) is one of the biggest stars of Hindi cinema since the mid-1990s, both at home and abroad, starring in eleven of the 25 top overseas grossers of all time, including five big-budget romances closely associated with Karan Johar's Dharma productions...</p> <p>Karan Johar's <i>K3G</i> (Kabhi Khushi Kabhi Gham, 2001) is a great family drama. (In it) overseas locations are used as part of the spectacle of wealth and glamour, and a location for romance, placing consumerism and lifestyle at the heart of romance. London is a location for education and work but it is also a place for the new India to win admiration for its style, dancing and being cool, as well as a place to feel a specific Indian nationalism and indulge a nostalgic view of India...Overseas is a site of exile, a temporary place, and the brother's quest to bring his older brother home is a clear reference to the <i>Ramayana</i>.</p> <p>(Source: <i>Picture Abhi Baki Hai</i>, Rachel Dwyer)</p>	<p>From the early 20<sup>th</sup>-century onwards, when 'Talkies' began to be made in Bombay</p>	

		From what moment onwards can it be said that the Indian diaspora insinuates itself into depictions of 'Indian-ness' in Bollywood cinema?						
			Post-independence, when Indians began to take interest in the lives of their counter-parts in the West					
			From the late 20 <sup>th</sup> century onwards, after the liberalization of the economy also resulted in an opening out of the tourism sector, allowing foreign tourists to travel to India.					
			From the late 20 <sup>th</sup> century onwards, when Bollywood filmmakers like Aditya Chopra started to capitalize on the fact that the lives of the diaspora were aspirational to 'young' Indian cinema-goers.	Correct				
E- Verbal Ability	2	<p><i>Read the passage given and answer the questions that follow</i></p> <p>In the 1990s, one of the most popular genres in India was the diaspora romance, which began a long and continuing representation of the Indian diaspora – or at least the diaspora in the UK and the USA, as Indian cinema has barely glanced at the twenty-million strong Indian diaspora beyond the West. The landmark was Aditya Chopra's <i>DDLJ</i> (Dilwale Dulhania Le Jayenge, 1995), which many have argued, also inaugurated the new type of Hindi cinema known as Bollywood. Henceforth, the diaspora began to play a key role in Indian cinema both as audiences as well as characters within the films, no longer Hindi-speaking exiles waiting to return to the motherland, but the second generation born and brought up in the West. In <i>DDLJ</i>, the father dreams of returning to the homeland, but the children have no such intention. Although the daughter is taken to India for her wedding, there is no indication of a return otherwise. Yet these films do not present the characters as realistically diasporic: these are Hindi-speaking Indians whose fantasies, styling and interiors are those of Indians, or at most recent migrants, even if they display no dreams of a 'return'. This means that while the parents may be convincing (as first-generation migrants), the children are not...Shah Rukh Khan (SRK) is one of the biggest stars of Hindi cinema since the mid-1990s, both at home and abroad, starring in eleven of the 25 top overseas grossers of all time, including five big-budget romances closely associated with Karan Johar's Dharma productions...</p> <p>Karan Johar's <i>K3G</i> (Kabhi Khushi Kabhi Gham, 2001) is a great family drama...(In it) overseas locations are used as part of the spectacle of wealth and glamour, and a location for romance, placing consumerism and lifestyle at the heart of romance. London is a location for education and work but it is also a place for the new India to win admiration for its style, dancing and being cool, as well as a place to feel a specific Indian nationalism and indulge a nostalgic view of India...Overseas is a site of exile, a temporary place, and the brother's quest to bring his older brother home is a clear reference to the <i>Ramayana</i>. (Source: <i>Picture Abhi Baki Hai</i>, Rachel Dwyer)</p> <p>Match the words to their closest meaning:</p> <table border="1"> <tr> <td>A. Landmark</td> <td>1. Commercialism</td> </tr> <tr> <td>B. Genre</td> <td>2. Critical point</td> </tr> </table>	A. Landmark	1. Commercialism	B. Genre	2. Critical point	A-1, B-2, C-3	
A. Landmark	1. Commercialism							
B. Genre	2. Critical point							



		C. Consumerism	3. Category		
				A-2, B-1, C-3	
				A-2, B-3, C-1	Correct
				A-3, B-1, C-2	
E- Verbal Ability	3	<p><i>Read the passage given and answer the questions that follow</i></p> <p>In the 1990s, one of the most popular genres in India was the diaspora romance, which began a long and continuing representation of the Indian diaspora – or at least the diaspora in the UK and the USA, as Indian cinema has barely glanced at the twenty-million strong Indian diaspora beyond the West. The landmark was Aditya Chopra’s <i>DDLJ</i> (Dilwale Dulhania Le Jayenge, 1995), which many have argued, also inaugurated the new type of Hindi cinema known as Bollywood. Henceforth, the diaspora began to play a key role in Indian cinema both as audiences as well as characters within the films, no longer Hindi-speaking exiles waiting to return to the motherland, but the second generation born and brought up in the West. In <i>DDLJ</i>, the father dreams of returning to the homeland, but the children have no such intention. Although the daughter is taken to India for her wedding, there is no indication of a return otherwise. Yet these films do not present the characters as realistically diasporic: these are Hindi-speaking Indians whose fantasies, styling and interiors are those of Indians, or at most recent migrants, even if they display no dreams of a ‘return’. This means that while the parents may be convincing (as first-generation migrants), the children are not. . .Shah Rukh Khan (SRK) is one of the biggest stars of Hindi cinema since the mid-1990s, both at home and abroad, starring in eleven of the 25 top overseas grossers of all time, including five big-budget romances closely associated with Karan Johar’s Dharma productions...</p> <p>Karan Johar’s <i>K3G</i> (Kabhi Khushi Kabhi Gham, 2001) is a great family drama. . .(In it) overseas locations are used as part of the spectacle of wealth and glamour, and a location for romance, placing consumerism and lifestyle at the heart of romance. London is a location for education and work but it is also a place for the new India to win admiration for its style, dancing and being cool, as well as a place to feel a specific Indian nationalism and indulge a nostalgic view of India. . .Overseas is a site of exile, a temporary place, and the brother’s quest to bring his older brother home is a clear reference to the <i>Ramayana</i>. (Source: <i>Picture Abhi Baki Hai</i>, Rachel Dwyer)</p> <p>What is the purpose of using overseas locations in a film like <i>K3G</i>?</p>			To show that new India has ‘arrived’ on the global stage.
				To set up a vast difference between the perceived shallowness of the West and the worth of Indian values	
				To speak of the exile’s quest to set things right, which is not possible in India	
				To highlight that Indians are not comfortable living and working in the West.	Correct
		<p><i>Read the passage given and answer the questions that follow</i></p> <p>In the 1990s, one of the most popular genres in India was the diaspora romance, which began a long and continuing representation of the Indian diaspora – or at least the diaspora in the UK and the USA, as Indian cinema has barely glanced at the twenty-million strong Indian diaspora beyond the West. The landmark was Aditya Chopra’s <i>DDLJ</i> (Dilwale Dulhania Le Jayenge, 1995), which many have argued, also inaugurated the new type of Hindi cinema known as Bollywood. Henceforth, the diaspora began to play a key role in Indian cinema both as audiences as well as characters within the films, no longer Hindi-speaking exiles waiting to return to the</p>			

E- Verbal Ability	4	<p>motherland, but the second generation born and brought up in the West. In <i>DDLJ</i>, the father dreams of returning to the homeland, but the children have no such intention. Although the daughter is taken to India for her wedding, there is no indication of a return otherwise. Yet these films do not present the characters as realistically diasporic: these are Hindi-speaking Indians whose fantasies, styling and interiors are those of Indians, or at most recent migrants, even if they display no dreams of a 'return'. This means that while the parents may be convincing (as first-generation migrants), the children are not...Shah Rukh Khan (SRK) is one of the biggest stars of Hindi cinema since the mid-1990s, both at home and abroad, starring in eleven of the 25 top overseas grossers of all time, including five big-budget romances closely associated with Karan Johar's Dharma productions...</p> <p>Karan Johar's <i>K3G</i> (Kabhi Khushi Kabhi Gham, 2001) is a great family drama...(In it) overseas locations are used as part of the spectacle of wealth and glamour, and a location for romance, placing consumerism and lifestyle at the heart of romance. London is a location for education and work but it is also a place for the new India to win admiration for its style, dancing and being cool, as well as a place to feel a specific Indian nationalism and indulge a nostalgic view of India...Overseas is a site of exile, a temporary place, and the brother's quest to bring his older brother home is a clear reference to the <i>Ramnyana</i>. (Source: <i>Picture Abhi Baki Hai</i>, Rachel Dwyer)</p> <p>Which of the following definitions comes closest to explaining what is meant by the category 'diaspora'?</p>	A 'diaspora' refers to a scattered population whose origin lies within a shared (fixed) geographic location or point of origin.	Correct
			A 'diaspora' is created when a group of people has been forced into life in exile.	
			A 'diaspora' refers to a community which can trace back its roots at least three generations in a given locale	
			A 'diaspora' is a community which shares a religion	
E- Verbal Ability	5	<p><i>Read the passage given and answer the questions that follow</i></p> <p>In the 1990s, one of the most popular genres in India was the diaspora romance, which began a long and continuing representation of the Indian diaspora – or at least the diaspora in the UK and the USA, as Indian cinema has barely glanced at the twenty-million strong Indian diaspora beyond the West. The landmark was Aditya Chopra's <i>DDLJ</i> (Dilwale Dulhania Le Jayenge, 1995), which many have argued, also inaugurated the new type of Hindi cinema known as Bollywood. Henceforth, the diaspora began to play a key role in Indian cinema both as audiences as well as characters within the films, no longer Hindi-speaking exiles waiting to return to the motherland, but the second generation born and brought up in the West. In <i>DDLJ</i>, the father dreams of returning to the homeland, but the children have no such intention. Although the daughter is taken to India for her wedding, there is no indication of a return otherwise. Yet these films do not present the characters as realistically diasporic: these are Hindi-speaking Indians whose fantasies, styling and interiors are those of Indians, or at most recent migrants, even if they display no dreams of a 'return'. This means that while the parents may be convincing (as first-generation migrants), the children are not...Shah Rukh Khan (SRK) is one of the biggest stars of Hindi cinema since the mid-1990s, both at home and abroad, starring in eleven of the 25 top overseas grossers of all time, including five big-budget romances closely associated with Karan Johar's Dharma productions...</p> <p>Karan Johar's <i>K3G</i> (Kabhi Khushi Kabhi Gham, 2001) is a great family drama...(In it) overseas locations are used as part of the spectacle of wealth and glamour, and a location for romance, placing consumerism and lifestyle at the heart of romance. London is a location for education and work but it is also a place for the new India to win admiration for its style, dancing and being cool, as well as a place to feel a specific Indian nationalism and indulge a nostalgic view of India...Overseas is a site of exile, a temporary place, and the brother's quest to bring his older brother home is a clear reference to the <i>Ramnyana</i>. (Source: <i>Picture Abhi Baki Hai</i>, Rachel Dwyer)</p> <p>How do the desires of the second generation diasporic Indians vary from the first generation?</p>	The second generation doesn't want to identify as 'Indian' any more	
			The second generation aspires to the rampant consumerism of the West and has no	

			nationalistic feeling for India	
			The second generation does not dream of a 'return' to the motherland like their parents fervently desire	Correct
			The second generation wants to make its own decisions and sees no worth in following the diktats of their elders	
E- Verbal Ability	6	Determine appropriate contextual usage of the underlined terms: It's a cultural <u>touchstone</u> on the order of <i>Star Wars</i> , but while it's also had its imitators over the years—including semi-remakes in several languages—it remains a proud franchise of one.	event	
			benchmark	Correct
			outcast	
			artefact	
E- Verbal Ability	7	Determine appropriate contextual usage of the underlined terms: Fiction and films influence public opinion, not by making political statements or <u>polemics</u> , but by the stories they tell and the way they tell them.	tirade	Correct
			assumption	
			involvement	
			urge	
E- Verbal Ability	8	Determine appropriate contextual usage of the underlined terms: Once the data started coming in, we realized that it was easy to <u>miss the wood for the trees</u> .	lose sight of the big picture	Correct
			miss the logic of	
			miss the deadline for	
			lose objectivity	
E- Verbal Ability	9	Determine appropriate contextual usage of the underlined terms: While there will be endless debates over the quantum of pollution reduced (if any), there is hardly any argument over the fact that the Odd-Even Plan was largely obeyed	political decision-making ability	

		by the public, boosting the <u>political equity</u> of the AAP.		
			political aggressiveness	
			political goodwill	Correct
			political effectiveness	
E- Verbal Ability	10	Determine appropriate contextual usage of the underlined terms: We <u>went the whole nine yards</u> to buy a house away from the city.	did very little to	
			did everything possible to	Correct
			really wished to	
			tried hard not to	
E- Verbal Ability	11	Choose the best combination of words to complete the following sentences: The disease had weakened her _____ and she could not _____ in time for the meeting.	philology, recover	
			anatomy, compose	
			constitution, recuperate	Correct
			composition, renew	
E- Verbal Ability	12	Choose the best combination of words to complete the following sentences: It is often _____ that secularism is _____ as a principle of governance.	ignored, inviolable	Correct
			forgotten, invalidated	
			accepted, enunciated	
			stated, engendered	
E- Verbal Ability	13	Choose the best combination of words to complete the following sentences: An _____ constructed on badly designed _____ cannot be expected to deliver the desired outcomes.	edifice, incentives	Correct
			establishment, impetus	

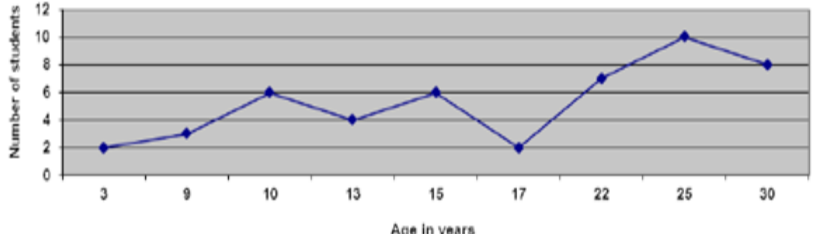
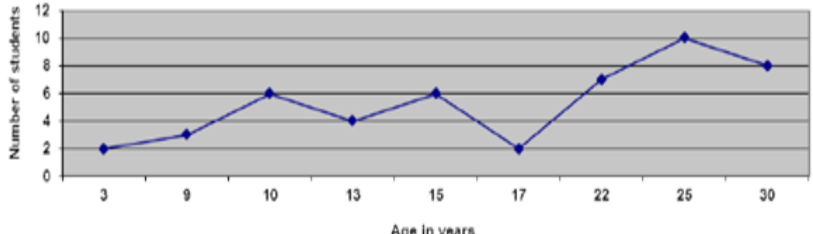
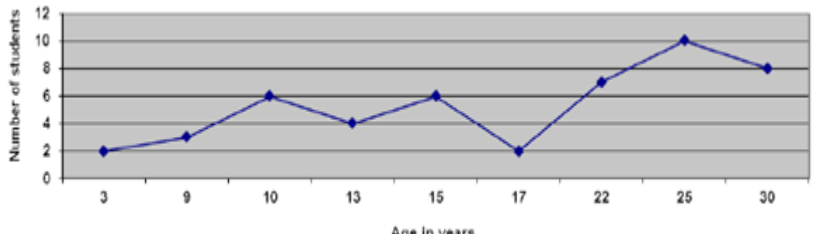
			automaton, foundation	
			empire, argument	
E- Verbal Ability	14	Choose the best combination of words to complete the following sentences:  This _____ was demanded by manufacturing states who argued that they needed to be _____ for the investment they had made in improving their manufacturing capabilities.	imposition, amended	
			levy, compensated	Correct
			raise, reimbursed	
			fee, appropriated	
E- Verbal Ability	15	Choose the best combination of words to complete the following sentences:  Manohar, with the full extent of his _____ exposed, decided to cooperate with the police and the law in exchange for _____ for his own misdeeds.	maleficance, leniency	Correct
			malevolence, pardon	
			malpractice, abrogation	
			guilt, benevolence	
E- Verbal Ability	16	Organise the following sentences in logical order:  a) In many cases where conventional drugs were unaffordable and hard to find, traditional prescriptions, such as herbal extracts, offered a solution. b) This training covered traditional as well as allopathic practices. c) Though the history is complex, and contested, China's experience in the mid-twentieth century is particularly instructive. d) Faced with the problem of providing healthcare to millions of the rural poor who had no easy access to modern medicine, the Chinese government under Mao Zedong instituted a system of training hundreds of thousands of people in the villages in basic healthcare.	dbac	
			abcd	
			cdba	Correct
			bcad	
E- Verbal Ability	17	Organise the following sentences in logical order:  a. Dealings with strangers might provide contexts for the commoditization of things that are otherwise protected from commoditization. b. Thus in many societies, marriage transactions might constitute the context in which women are most intensely, and most appropriately, regarded as exchange values. c. Auctions accentuate the commodity of objects (such as paintings) in a manner that might well be regarded as deeply inappropriate in other contexts.	abcd	

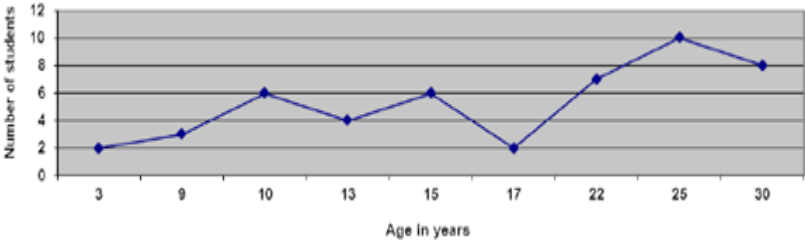
		d. Finally, the commodity <i>context</i> refers to the variety of <i>social</i> arenas, within or between <i>cultural</i> units, that help link the commodity candidacy of a thing to the commodity phase of its career.		
			dbac	Correct
			cabd	
			acdb	
E- Verbal Ability	18	Organise the following sentences in logical order: a) We told them we had learned much of what we knew about protesting and using democracy to promote human rights from examples set by Indian leaders during their struggle against British rule. b) Nearby a group of police officers were sitting in chairs, watching us. c) We told them we were originally from Tibet, but were born in India and living here in exile. d) They asked where we'd come from and why we were protesting.	bdca	Correct
			cabd	
			adbc	
			boda	
E- Verbal Ability	19	Organise the following sentences in logical order: a) As much as I'm allergic to domesticity as a person, I also knew that writing about my life as a wife, or my experience of marital rape would lead me to being labelled/ slotted, and even worse, not even published. b) Does this fear of being labelled domestic haunt us? c) Why? Because I would become that category that everyone dreads: the housewife novelist. d) Yes, it does, and in ways that are too many to enumerate.	abcd	
			bdca	
			bcad	Correct
			doba	
E- Verbal Ability	20	Organise the following sentences in logical order: a) And that reader likely resides in China, where Facebook is blocked, and these Instant Articles can't be viewed in the first place. b) The only real reason for a native Chinese-speaking person to read China Daily or CCTV News (rather than their Chinese versions) is to practice English comprehension. c) Facebook already has an office and staff in Beijing, and unblocking the social network in China is believed to be one of Zuckerberg's top goals. d) Adding CCTV and China Daily to Instant Articles likely has more to do with Zuckerberg's ongoing charm offensive towards the Chinese government than getting	doba	

		an audience for them.		
			acdb	
			odab	
			baed	Correct
E- Verbal Ability	21	Which of the phrases given below each sentence should replace the underlined word/phrase to make it grammatically correct? Sheila really has <u>feelings for</u> numbers.	a feel for	Correct
			the feeling for	
			the feel to	
			feels for	
E- Verbal Ability	22	Which of the phrases given below each sentence should replace the underlined word/phrase to make it grammatically correct? I cannot seem to make <u>heads or tails</u> of this particular issue.	head or tales	
			headings or tailings	
			heads or tales	
			The sentence is correct as it is	Correct
E- Verbal Ability	23	Which of the phrases given below each sentence should replace the underlined word/phrase to make it grammatically correct? This little kid has her mother <u>wrapped against her finger</u> .	wrapped around her finger	Correct
			wrap against her finger	
			wrap around her finger	
			wrapping her finger	
E- Verbal Ability	24	Which of the phrases given below each sentence should replace the underlined word/phrase to make it grammatically correct? I cannot claim to <u>speak off</u> the entire community: I represent only myself	to speak about	
			to speak in	
			to speak for	Correct
			to speak against	

E- Verbal Ability	25	Which of the phrases given below each sentence should replace the underlined word/phrase to make it grammatically correct?  The flood victims were determined to survive, even <u>for the odds</u> .	again all odds	
			against all odd	
			against the odds	Correct
			again the odds	
F- Quantitative Ability	1	<b>Based on the following information answer the questions that follow.</b>  XYZ Ltd. produces component 'P'. During January the production of 'P' was 2000 units and the rejection rate was 5%. Production increased by 20% during February, but there was also a 5% increase in rejections. During March, the total number of acceptable components produced was 180 units less than during February, though there was no change in the percentage of rejections.  What was the quantity rejected during March?	16	
			220	Correct
			198	
			116	
F- Quantitative Ability	2	<b>Based on the following information answer the questions that follow.</b>  XYZ Ltd. produces component 'P'. During January the production of 'P' was 2000 units and the rejection rate was 5%. Production increased by 20% during February, but there was also a 5% increase in rejections. During March, the total number of acceptable components produced was 180 units less than during February, though there was no change in the percentage of rejections.  What was the percentage increase/decrease in production in March, compared to January?	10% increase	Correct
			20% decrease	
			10% decrease	
			No change	
F- Quantitative Ability	3	Mayur, Nayan and Bhajanlal can complete a construction task in 12, 16, and 24 days respectively. If Nayan starts work, and receives help from Mayur and Bhajanlal every second day, in how many days will they complete construction?	2 days	
			4 days	
			6 days	
			8 days	Correct
		Directions: Refer to the line graph below, detailing a group of students, and answer the questions that follow.		



F- Quantitative Ability	4		19 years	Correct
		What is the average age of the group?	17 years	
			16.5 years	
			18 years	
F- Quantitative Ability	5	<p>Directions: Refer to the line graph below, detailing a group of students, and answer the questions that follow.</p>  <p>How many students are above the age of 15 years?</p>	28	
			26	
			25	
			27	Correct
F- Quantitative Ability	6	<p>Directions: Refer to the line graph below, detailing a group of students, and answer the questions that follow.</p> 	25.1 years	Correct

		What is the average age of students above 15 years?		
			24.9 years	
			20 years	
			22.8 years	
F- Quantitative Ability	7	<p>Directions: Refer to the line graph below, detailing a group of students, and answer the questions that follow.</p>  <p>If 20% of the students below the age group of 10 are girls, find the number of boys below 10 years of age.</p>	1	
			6	
			3	
			4	Correct
F- Quantitative Ability	8	The simple interest accrued on an amount of Rs. 14,800 at the end of three years is Rs. 6,216. What would the compound interest accrued on the same amount at the same rate in the same period be?	Rs.5127	
			Rs.6127	
			Rs.7127	Correct
			Rs.8127	
F- Quantitative Ability	9	<p><b>Study the information carefully to answer the following questions:</b></p> <p>In an organization consisting of 750 employees, the ratio of male to female employees is 8:7. Employees work in five different departments, viz. HR, Management, PR, IT and Recruitment. 16% of the women employees work in Management. 32% of the male employees work in HR. One-fifth of the women work in the department of Recruitment. The ratio of males to females in Management is 3:2. 20% of the total number of employees work in the PR Department. Women working in Recruitment equal 50% of the males working in the same department. 8% of the men work in the IT department. The remaining males work in PR. 22% of female employees work in HR, and the remaining women work in the IT Department.</p>	147	

		What is the total number of female employees working in the IT and Recruitment departments together?	83	Correct
			126	
			45	
F- Quantitative Ability	10	<p><b>Study the information carefully to answer the following questions:</b></p> <p>In an organization consisting of 750 employees, the ratio of male to female employees is 8:7. Employees work in five different departments, viz. HR, Management, PR, IT and Recruitment. 16% of the women employees work in Management. 32% of the male employees work in HR. One-fifth of the women work in the department of Recruitment. The ratio of males to females in Management is 3:2. 20% of the total number of employees work in the PR Department. Women working in Recruitment equal 50% of the males working in the same department. 8% of the men work in the IT department. The remaining males work in PR. 22% of female employees work in HR, and the remaining women work in the IT Department.</p> <p>What is the number of females working in the HR department?</p>	77	Correct
			70	
			56	
			134	
F- Quantitative Ability	11	<p><b>Study the information carefully to answer the following questions:</b></p> <p>In an organization consisting of 750 employees, the ratio of male to female employees is 8:7. Employees work in five different departments, viz. HR, Management, PR, IT and Recruitment. 16% of the women employees work in Management. 32% of the male employees work in HR. One-fifth of the women work in the department of Recruitment. The ratio of males to females in Management is 3:2. 20% of the total number of employees work in the PR Department. Women working in Recruitment equal 50% of the males working in the same department. 8% of the men work in the IT department. The remaining males work in PR. 22% of female employees work in HR, and the remaining women work in the IT Department.</p> <p>Number of males working in the HR department forms approximately what % of total number of employees in the organization?</p>	20	
			28	
			32	
			17	Correct
		<p><b>Study the information carefully to answer the following questions:</b></p> <p>In an organization consisting of 750 employees, the ratio of male to female employees is 8:7. Employees work in five different departments, viz. HR, Management, PR, IT and Recruitment. 16% of the women employees work in</p>		

F- Quantitative Ability	12	<p>Management. 32% of the male employees work in HR. One-fifth of the women work in the department of Recruitment. The ratio of males to females in Management is 3:2. 20% of the total number of employees work in the PR Department. Women working in Recruitment equal 50% of the males working in the same department. 8% of the men work in the IT department. The remaining males work in PR. 22% of female employees work in HR, and the remaining women work in the IT Department.</p> <p>Number of males working in the PR department finds what % of the number of females working in the same department? (rounded off to two digits after decimal)</p>	22.98	
			16.68	
			11.94	Correct
			6.79	
F- Quantitative Ability	13	<p><b>Study the information carefully to answer the following questions:</b></p> <p>In an organization consisting of 750 employees, the ratio of male to female employees is 8:7. Employees work in five different departments, viz. HR, Management, PR, IT and Recruitment. 16% of the women employees work in Management. 32% of the male employees work in HR. One-fifth of the women work in the department of Recruitment. The ratio of males to females in Management is 3:2. 20% of the total number of employees work in the PR Department. Women working in Recruitment equal 50% of the males working in the same department. 8% of the men work in the IT department. The remaining males work in PR. 22% of female employees work in HR, and the remaining women work in the IT Department.</p> <p>What is the total number of employees working in the Management department?</p>	128	
			77	
			210	
			140	Correct
F- Quantitative Ability	14	In an examination, 52% of the candidates failed in Mathematics, 42% failed in Physics, and 17% failed in both subjects. Find out what percentage of students passed in both subjects.	21%	
			22%	
			23%	Correct
			None of these options	
F- Quantitative Ability	15	A person goes to a garden and runs in the following sequence: from the starting point, they go west 25 metres, then due north 80 metres, and finally due south 15 metres. How far are they now from their starting point?	68.4	
			69.6	Correct

			70.5																																											
			None of these options																																											
F- Quantitative Ability	16	A cyclist rides 24 km at 16 km per hour and a further 36 km at 15 km per hour. Find her average speed for the journey.	15.38 km per hour	Correct																																										
			16 km per hour																																											
			16.5 km per hour																																											
			None of these options																																											
F- Quantitative Ability	17	<p><b>Answer the following questions based on the information given below.</b> An athletics coach was trying to make an energy drink which is best suited for athletes. For this purpose, she took five of the best known energy drinks (A, B, C, D and E) in the market with the idea of mixing them to get the result desired. The table below gives the composition and cost of these drinks:</p> <table border="1"> <thead> <tr> <th></th> <th>Price</th> <th colspan="4">Composition</th> </tr> <tr> <th>Energy Drink</th> <th>Rs. Per Litre</th> <th>Carbohydrates</th> <th>Protein</th> <th>Fats</th> <th>Minerals</th> </tr> </thead> <tbody> <tr> <td>A</td> <td>150</td> <td>50</td> <td>30</td> <td>10</td> <td>10</td> </tr> <tr> <td>B</td> <td>050</td> <td>80</td> <td>20</td> <td>00</td> <td>00</td> </tr> <tr> <td>C</td> <td>200</td> <td>10</td> <td>30</td> <td>50</td> <td>10</td> </tr> <tr> <td>D</td> <td>500</td> <td>05</td> <td>50</td> <td>40</td> <td>05</td> </tr> <tr> <td>E</td> <td>100</td> <td>45</td> <td>50</td> <td>00</td> <td>05</td> </tr> </tbody> </table> <p>For sprinters, the coach has to prepare a drink containing 10% minerals and at least 30% protein. In how many different ways can she prepare this drink by mixing at least two ingredients?</p>		Price	Composition				Energy Drink	Rs. Per Litre	Carbohydrates	Protein	Fats	Minerals	A	150	50	30	10	10	B	050	80	20	00	00	C	200	10	30	50	10	D	500	05	50	40	05	E	100	45	50	00	05	One	Correct
	Price	Composition																																												
Energy Drink	Rs. Per Litre	Carbohydrates	Protein	Fats	Minerals																																									
A	150	50	30	10	10																																									
B	050	80	20	00	00																																									
C	200	10	30	50	10																																									
D	500	05	50	40	05																																									
E	100	45	50	00	05																																									
			Two																																											
			Three																																											
			Four																																											
F-		<p><b>Answer the following questions based on the information given below.</b> An athletics coach was trying to make an energy drink which is best suited for athletes. For this purpose, she took five of the best known energy drinks (A, B, C, D and E) in the market with the idea of mixing them to get the result desired. The table below gives the composition and cost of these drinks:</p> <table border="1"> <thead> <tr> <th></th> <th>Price</th> <th colspan="4">Composition</th> </tr> <tr> <th>Energy Drink</th> <th>Rs. Per Litre</th> <th>Carbohydrates</th> <th>Protein</th> <th>Fats</th> <th>Minerals</th> </tr> </thead> <tbody> <tr> <td>A</td> <td>150</td> <td>50</td> <td>30</td> <td>10</td> <td>10</td> </tr> </tbody> </table>		Price	Composition				Energy Drink	Rs. Per Litre	Carbohydrates	Protein	Fats	Minerals	A	150	50	30	10	10																										
	Price	Composition																																												
Energy Drink	Rs. Per Litre	Carbohydrates	Protein	Fats	Minerals																																									
A	150	50	30	10	10																																									

Quantitative Ability	18	B	050	80	20	00	00	C and E	Correct
		C	200	10	30	50	10		
		D	500	05	50	40	05		
		E	100	45	50	00	05		
Which among the following is the combination having the lowest cost per unit for a drink having 10% fat and at least 30% proteins? The drink has to be formed by mixing two ingredients together.									

								B and E	
--	--	--	--	--	--	--	--	---------	--

								B and D	
--	--	--	--	--	--	--	--	---------	--

								D and E	
--	--	--	--	--	--	--	--	---------	--

F- Quantitative Ability	19	<b>Answer the following questions based on the information given below.</b>						2 : 1 : 3	
		An athletics coach was trying to make an energy drink which is best suited for athletes. For this purpose, she took five of the best known energy drinks (A, B, C, D and E) in the market with the idea of mixing them to get the result desired. The table below gives the composition and cost of these drinks:							
			Price	Composition					
		Energy Drink	Rs. Per Litre	Carbohydrates	Protein	Fats	Minerals		
		A	150	50	30	10	10		
		B	050	80	20	00	00		
C	200	10	30	50	10				
D	500	05	50	40	05				
E	100	45	50	00	05				
In what proportion should B, C and E be mixed to make a drink having at least 60% carbohydrates at the lowest cost per unit?									

								4 : 1 : 2	
--	--	--	--	--	--	--	--	-----------	--

								2 : 1 : 4	
--	--	--	--	--	--	--	--	-----------	--

								4 : 1 : 1	Correct
--	--	--	--	--	--	--	--	-----------	---------

		<b>Answer the following questions based on the information given below.</b>							
		An athletics coach was trying to make an energy drink which is best suited for athletes. For this purpose, she took five of the best known energy drinks (A, B, C, D and E) in the market with the idea of mixing them to get the result desired. The table below gives the composition and cost of these drinks:							
			Price	Composition					
		Energy Drink	Rs. Per Litre	Carbohydrates	Protein	Fats	Minerals		

F-  
Quantitative  
Ability

20

A	150	50	30	10	10
B	050	80	20	00	00
C	200	10	30	50	10
D	500	05	50	40	05
E	100	45	50	00	05

A and B

A drink containing 30% each of carbohydrate and protein, no more than 25% fat and at least 5% minerals is to be made. Which of the following two drinks must be mixed in equal quantities to obtain the required drink?

D and E

C and D

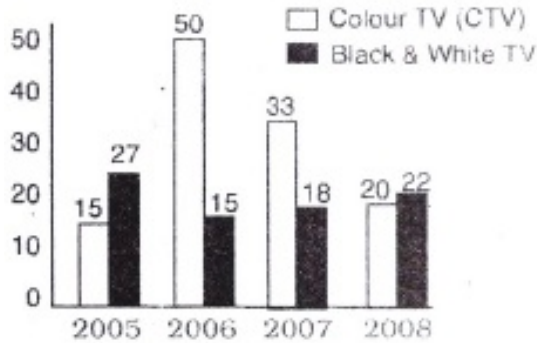
A and E

Correct

F-  
Quantitative  
Ability

21

The bar diagram given below presents the annual percentage growth of sale of television sets over the years. Study the bar diagram carefully and answer the following questions based on it.



2005

Correct

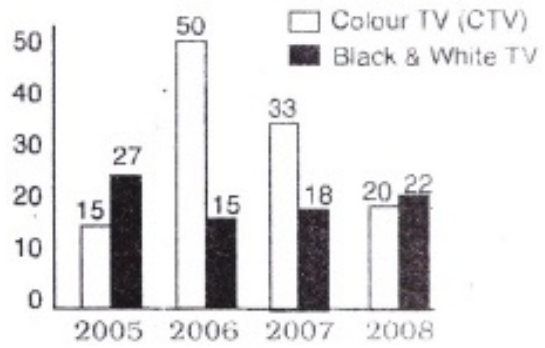
In which of the following years was there minimum percentage growth in sales ofCTVs?

2006

2007

2008

The bar diagram given below presents the annual percentage growth of sale of television sets over the years. Study the bar diagram carefully and answer the following questions based on it.

F- Quantitative Ability	22		16	
		Approximately, what was the average of percentage growth in sale of black and white TVs over the period visualised here?	22	
			18	
			20	Correct
F- Quantitative Ability	23	A company advertises its product twice a day on television. The first advertisement is seen by 100 viewers. Probability (p) is that they will watch the second advertisement. There are also new first time viewers for the second advertisement, outnumbering those who watch the advertisement for the second time by 3:1. 10% of all those who view the advertisement only once buy the product, and 50% of those who view the advertisement twice buy the product, on the same day. If total sales on a given day is 100, then 'p' should be?	7/9	Correct
			8/9	
			2/3	
			None of these options	
F- Quantitative Ability	24	Mr. Dani has a budget of Rs.5000.00 to tend to all his domestic services. Due to inflation, service charges were hiked by 10%. To manage within the budget, what % of services does Mr. Dani have to reduce?	8.1%	
			9.1%	Correct
			10.1%	
			None of these options	
F- Quantitative Ability	25	An online retailer of electronic items sold 50 units per week. After the retailer started using an app, the sale of electronic items grew by 20 units per week. How many total no. of units will be sold at the end of 10 weeks after the app is released?	1600	



			1550	
			1650	Correct
			1450	