

FINAL JEE-MAIN EXAMINATION – JUNE, 2022

 (Held On Wednesday 29th June, 2022)

TIME : 3 : 00 PM to 06 : 00 PM

CHEMISTRY
TEST PAPER WITH SOLUTION
SECTION-A

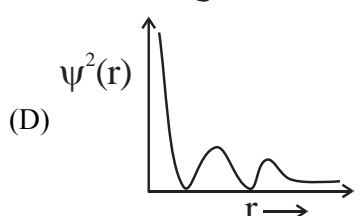
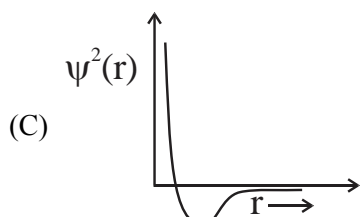
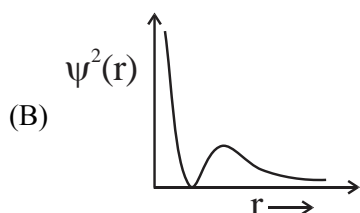
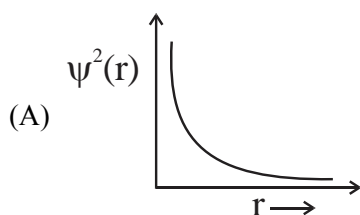
1. Using the rules for significant figures, the correct answer for the expression $\frac{0.02858 \times 0.112}{0.5702}$ will be:

(A) 0.005613 (B) 0.00561
 (C) 0.0056 (D) 0.006

Official Ans. by NTA (B)
Allen Ans. (B)

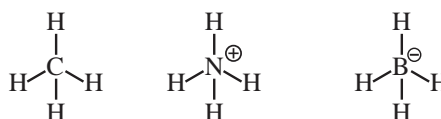
- Sol.** Reported answer should not be more precise than least precise term in calculations, so there should be three significant figures in reported answer.

2. Which of the following is the correct plot for the probability density $\psi^2(r)$ as a function of distance 'r' of the electron from the nucleus for 2s orbital?


Official Ans. by NTA (B)
Allen Ans. (B)

- Sol.** For 2s, number of radial nodes = $2 - 0 - 1 = 1$ and value of ψ^2 is always positive.

3. Consider the species CH_4 , NH_4^+ and BH_4^- . Choose the correct option with respect to the these species:
- (A) They are isoelectronic and only two have tetrahedral structures
 (B) They are isoelectronic and all have tetrahedral structures
 (C) Only two are isoelectronic and all have tetrahedral structures
 (D) Only two are isoelectronic and only two have tetrahedral structures

Official Ans. by NTA (B)
Allen Ans. (B)
Sol.


All are tetrahedral and each have 10 electrons.

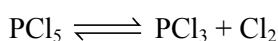
4. 4.0 moles of argon and 5.0 moles of PCl_5 are introduced into an evacuated flask of 100 litre capacity at 610 K. The system is allowed to equilibrate. At equilibrium, the total pressure of mixture was found to be 6.0 atm. The K_p for the reaction is [Given : $R = 0.082 \text{ L atm K}^{-1} \text{ mol}^{-1}$]
- (A) 2.25 (B) 6.24
 (C) 12.13 (D) 15.24

Official Ans. by NTA (A)
Allen Ans. (A)
Sol. $\text{PCl}_5 = 5$ mole

 $\text{Ar} = 4$ mole

$$P_{\text{Total}} = \frac{9 \times 0.82 \times 610}{100} = 4.5 \text{ atm}$$

$$P_{\text{PCl}_5} = \frac{5 \times 4.5}{9} = 2.5 ; P_{\text{Ar}} = \frac{4 \times 4.5}{9} = 2$$



$$P_{\text{total}} = 2.5 - P + P + P + P_{\text{Ar}} = 6$$

$$P = 1.5$$

$$K_p = \frac{1.5 \times 1.5}{1} = 2.25$$

5. A 42.12% (w/v) solution of NaCl causes precipitation of a certain sol in 10 hours. The coagulating value of NaCl for the sol is
 [Given : Molar mass : Na = 23.0 g mol⁻¹; Cl = 35.5 g mol⁻¹]

- (A) 36 mmol L⁻¹
 (B) 36 mol L⁻¹
 (C) 1440 mol L⁻¹
 (D) 1440 mmol L⁻¹

Official Ans. by NTA (D)

Allen Ans. (Bonus)

Sol. Data insufficient.

6. Given below are two statements. One is labelled as Assertion A and the other is labelled as Reason R.

Assertion A : The first ionization enthalpy for oxygen is lower than that of nitrogen.

Reason R : The four electrons in 2p orbitals of oxygen experience more electron-electron repulsion.

In the light of the above statements, choose the correct answer from the options given below.

- (A) Both A and R are correct and R is the correct explanation of A.
 (B) Both A and R are correct but R is NOT the correct explanation of A.
 (C) A is correct but R is not correct.
 (D) A is not correct but R is correct

Official Ans. by NTA (A)

Allen Ans. (A)

Sol. Ionisation energy = N > O.

In oxygen atom, 2 of the 4 2p electrons must occupy the same 2p orbital resulting in an increased electron electron-repulsion.

7. Match List I with List II.

List I Ore	List II Composition
A. Siderite	I. Fe CO ₃
B. Malachite	II. CuCO ₃ .Cu(OH) ₂
C. Sphalerite	III. ZnS
D. Calamine	IV. ZnCO ₃

Choose the correct answer from the options given below:

- (A) A-I, B-II, C-III, D-IV
 (B) A-III, B-IV, C-II, D-I
 (C) A-IV, B-III, C-I, D-II
 (D) A-I, B-II, C-IV, D-III

Official Ans. by NTA (A)

Allen Ans. (A)

Sol. Siderite – FeCO₃

Malachite – CuCO₃.Cu(OH)₂

Calamine – ZnCO₃

Sphalerite – ZnS

8. Given below are two statements .

Statement I : In CuSO₄.5H₂O, Cu–O bonds are present.

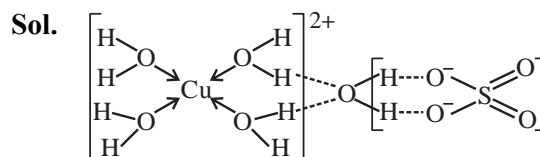
Statement II : In CuSO₄.5H₂O, ligands coordinating with Cu(II) ion are O-and S-based ligands.

In the light of the above statements, choose the correct answer from the options given below

- (A) Both Statement I and Statement II are correct
 (B) Both Statement I and Statement II are incorrect
 (C) Statement I is correct but Statement II is incorrect
 (D) Statement I is incorrect but Statement II is correct

Official Ans. by NTA (C)

Allen Ans. (C)



9. Amongst baking soda, caustic soda and washing soda carbonate anion is present in :
- (A) washing soda only.
 (B) washing soda and caustic soda only.
 (C) washing soda and baking soda only.
 (D) baking soda, caustic soda and washing soda.

Official Ans. by NTA (A)

Allen Ans. (A)

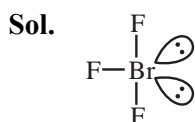
Sol. Baking soda \rightarrow NaHCO_3
 Washing soda \rightarrow $\text{Na}_2\text{CO}_3 \cdot 10\text{H}_2\text{O}$
 Caustic soda \rightarrow NaOH

10. Number of lone pair (s) of electrons on central atom and the shape of BrF_3 molecule respectively, are :

- (A) 0, triangular planar.
 (B) 1, pyramidal.
 (C) 2, bent T-shape.
 (D) 1, bent T-shape

Official Ans. by NTA (C)

Allen Ans. (C)



Steric no. = 5 (sp^3d), lone pair = 2
 Bent T shape.

11. Aqueous solution of which of the following boron compounds will be strongly basic in nature?
- (A) NaBH_4 (B) LiBH_4
 (C) B_2H_6 (D) $\text{Na}_2\text{B}_4\text{O}_7$

Official Ans. by NTA (D)

Allen Ans. (D)

Sol. $\text{Na}_2\text{B}_4\text{O}_7$ gives H_3BO_3 and NaOH (strong base) in water.

12. Sulphur dioxide is one of the components of polluted air. SO_2 is also a major contributor to acid rain. The correct and complete reaction to represent acid rain caused by SO_2 is :

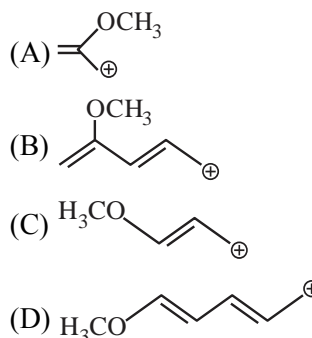
- (A) $2\text{SO}_2 + \text{O}_2 \rightarrow 2\text{SO}_3$
 (B) $\text{SO}_2 + \text{O}_3 \rightarrow \text{SO}_3 + \text{O}_2$
 (C) $\text{SO}_2 + \text{H}_2\text{O}_2 \rightarrow \text{H}_2\text{SO}_4$
 (D) $2\text{SO}_2 + \text{O}_2 + 2\text{H}_2\text{O} \rightarrow 2\text{H}_2\text{SO}_4$

Official Ans. by NTA (D)

Allen Ans. (D)

Sol. $2\text{SO}_2 + \text{O}_2 + 2\text{H}_2\text{O} \rightarrow 2\text{H}_2\text{SO}_4$ (Acid rain)

13. Which of the following carbocations is most stable :




Official Ans. by NTA (D)

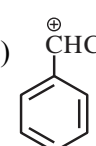
Allen Ans. (D)



Is most stable carbocation

14.  + $\text{CH}_3\text{CH}_2\text{CH}_2\text{Cl} \xrightarrow{\text{Anhydrous, AlCl}_3}$ 'A'
 Major Product

The stable carbocation formed in the above reaction is :

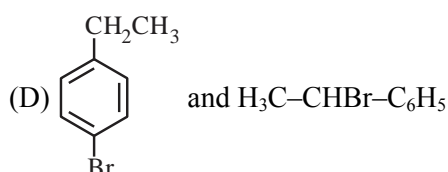
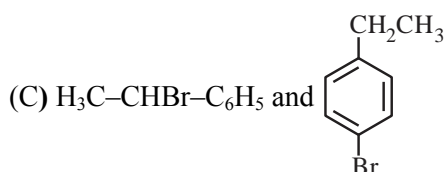
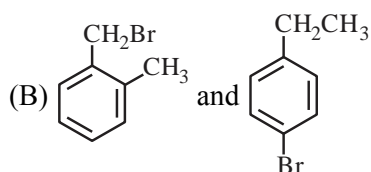
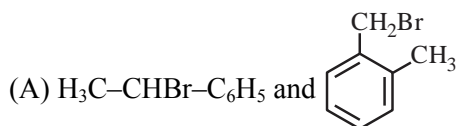
- (A) $\text{CH}_3\text{CH}_2\text{CH}_2^+$ (B) CH_3CH_2^+
 (C) $\text{CH}_3-\text{CH}^+-\text{CH}_3$ (D) 

Official Ans. by NTA (C)

Allen Ans. (C)

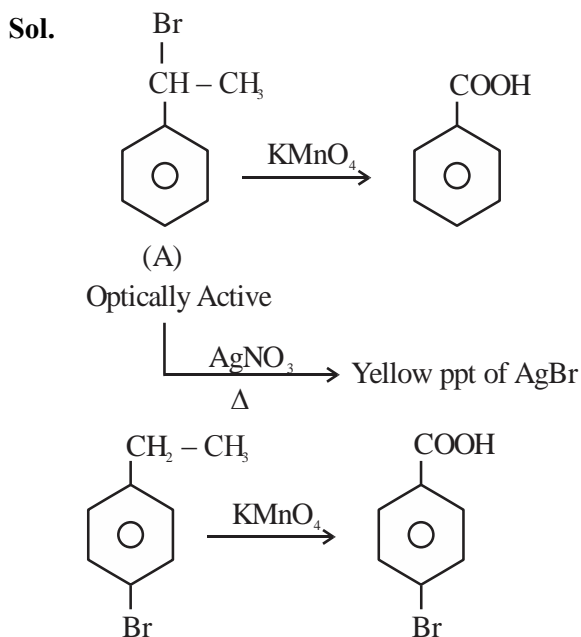
Sol. $\text{CH}_3-\text{CH}^+-\text{CH}_3$ is formed in the above reaction

15. Two isomers (A) and (B) with Molar mass 184 g/mol and elemental composition C, 52.2%; H, 4.9% and Br 42.9% gave benzoic acid and p-bromobenzoic acid, respectively on oxidation with KMnO_4 . Isomer 'A' is optically active and gives a pale yellow precipitate when warmed with alcoholic AgNO_3 . Isomer 'A' and 'B' are, respectively :



Official Ans. by NTA (C)

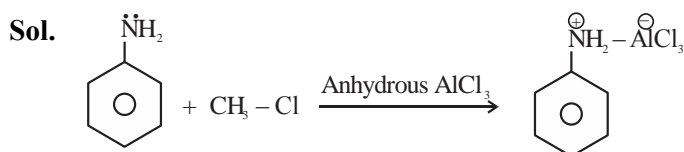
Allen Ans. (C)



16. In Friedel-Crafts alkylation of aniline, one gets :
- (A) alkylated product with ortho and para substitution.
- (B) secondary amine after acidic treatment.
- (C) an amide product.
- (D) positively charged nitrogen at benzene ring.

Official Ans. by NTA (D)

Allen Ans. (D)

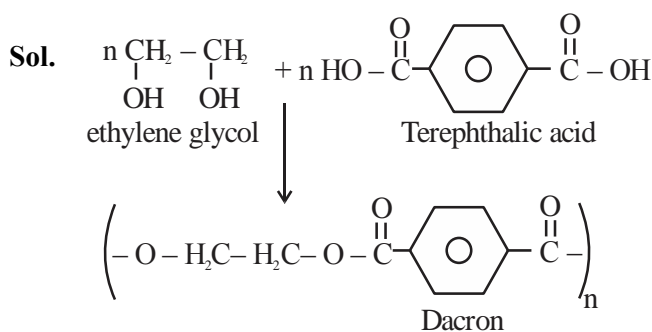


17. Given below are two statements : one is labelled as **Assertion A** and the other is labelled as **Reason R**.
- Assertion A:** Dacron is an example of polyester polymer.
- Reason R:** Dacron is made up of ethylene glycol and terephthalic acid monomers.
- In the light of the above statements, choose the **most appropriate** answer from the options given below.

- (A) Both **A** and **B** are correct and **R** is the correct explanation of **A**.
- (B) Both **A** and **B** are correct but **R** is NOT the correct explanation of **A**.
- (C) **A** is correct but **R** is not correct.
- (D) **A** is not correct but **R** is correct.

Official Ans. by NTA (A)

Allen Ans. (A)



3. Elevation in boiling point for 1.5 molal solution of glucose in water is 4K. The depression in freezing point for 4.5 molal solution of glucose in water is 4K. The ratio of molal elevation constant to molal depression constant (K_b/K_f) is _____.

Official Ans. by NTA (3)

Allen Ans. (3)

Sol. $\Delta T_b = iK_b m$

$$\Delta T_f = iK_f m$$

$$\frac{4}{4} = \frac{K_b \cdot 1.5}{K_f \cdot 4.5}$$

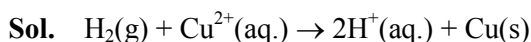
$$\frac{K_b}{K_f} = 3$$

4. The cell potential for the given cell at 298 K
 $\text{Pt} | \text{H}_2(\text{g}, 1 \text{ bar}) | \text{H}^+(\text{aq}) || \text{Cu}^{2+}(\text{aq}) | \text{Cu}(\text{s})$
 is 0.31V. The pH of the acidic solution is found to be 3, whereas the concentration of Cu^{2+} is 10^{-x} M. The value of x is _____.

(Given: $E_{\text{Cu}^{2+}/\text{Cu}}^\ominus = 0.34 \text{ V}$ and $\frac{2.303RT}{F} = 0.06 \text{ V}$)

Official Ans. by NTA (7)

Allen Ans. (7)



$$0.31 = 0.34 - \frac{0.06}{2} \log \frac{[\text{H}^+]^2}{[\text{Cu}^{2+}]}$$

$$[\text{Cu}^{2+}] = 10^{-7} \text{ M}$$

$$x = 7$$

5. The equation

$$k = (6.5 \times 10^{12} \text{ s}^{-1}) e^{-26000\text{K}/T}$$

is followed for the decomposition of compound A. The activation energy for the reaction is _____ kJ mol^{-1} . [nearest integer]

(Given: $R = 8.314 \text{ J K}^{-1} \text{ mol}^{-1}$)

Official Ans. by NTA (216)

Allen Ans. (216)

Sol. $k = A e^{-E_a/RT} = (6.5 \times 10^{12} \text{ s}^{-1}) e^{-26000\text{K}/T}$

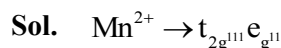
$$\frac{E_a}{8.314} = 26000$$

$$E_a = 216.164 \text{ kJ/mol.}$$

6. Spin only magnetic moment of $[\text{MnBr}_6]^{4-}$ is _____ B.M. (round off to the closest integer)

Official Ans. by NTA (6)

Allen Ans. (6)

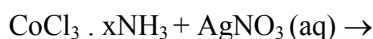


$$\mu_s = \sqrt{35}$$

$$= 5.91$$

$$= 6$$

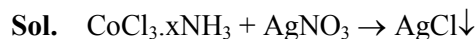
7. For the reaction given below:



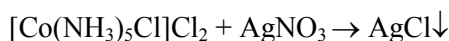
If two equivalents of AgCl precipitate out, then the value of x will be _____.

Official Ans. by NTA (5)

Allen Ans. (5)



2 mol



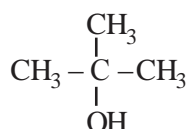
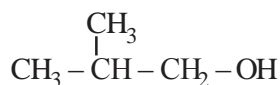
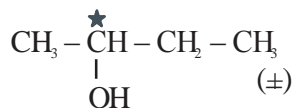
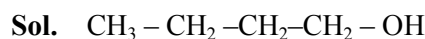
2 mol

$$x = 5$$

8. The number of chiral alcohol(s) with molecular formula $\text{C}_4\text{H}_{10}\text{O}$ is _____.

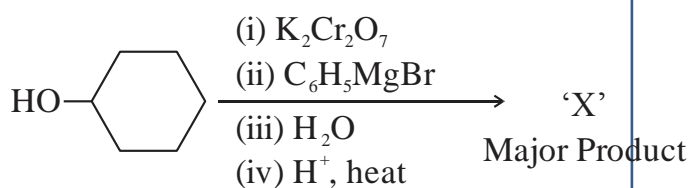
Official Ans. by NTA (1)

Allen Ans. (2)



Out of which only two are chiral

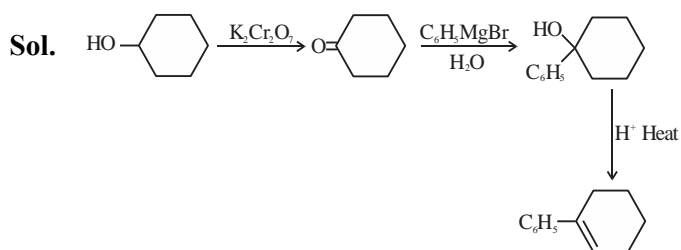
9. In the given reaction



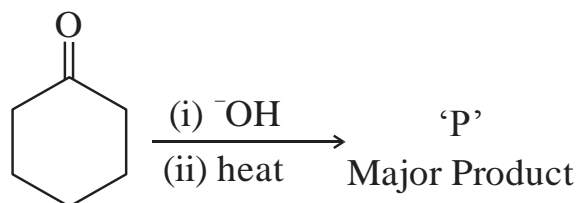
the number of sp^2 hybridised carbon (s) in compound 'X' is _____.

Official Ans. by NTA (8)

Allen Ans. (8)



10. In the given reaction,



The number of π electrons present in the product 'P' is _____.

Official Ans. by NTA (4s)

Allen Ans. (4)

Sol.

