

PHYSICS

1. The equation of wave is given as  $y = 0.05 \sin(2x - 4t)$ , where  $x$  in meters and  $t$  is time in seconds. The velocity of the wave is equal to

- A. 2
- B. 4
- C. 0.5
- D. 0.25

Answer (A)

Sol. Comparing it with the general equation of wave;  $y = A \sin(kx - \omega t + \phi)$

$$k = 2, \omega = 4$$

$$V = \frac{\omega}{k} = \frac{4}{2} = 2 \text{ m/s}$$

2. Two charges  $q_1$  and  $q_2$  separated by a distance  $d$  are placed in a medium of dielectric constant  $k$ , if they are placed in the air then find equivalent distance at which they experience same force.

- A.  $d\sqrt{k}$
- B.  $k\sqrt{d}$
- C.  $2d\sqrt{k}$
- D.  $1.5d\sqrt{k}$

Answer (A)

Sol.

Without dielectric placed in between,  $F = \frac{q_1 q_2}{4\pi\epsilon_0 r^2}$

With dielectric placed in between,  $F' = \frac{q_1 q_2}{4\pi k \epsilon_0 d^2}$

At equivalent distance ( $r_{eq}$ )

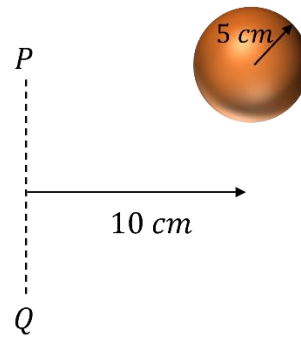
$$\frac{q_1 q_2}{4\pi\epsilon_0 r_{eq}^2} = \frac{q_1 q_2}{4\pi k \epsilon_0 d^2}$$

$$r_{eq}^2 = kd^2$$

$$r_{eq} = d\sqrt{k}$$

3. Find the radius of gyration for the uniform solid sphere of radius 5 cm about the axis PQ, as shown in the figure.

- A. 5 cm
- B. 10 cm
- C.  $\sqrt{110}$  cm
- D.  $\sqrt{90}$  cm



**Answer (C)**

**Sol.**

Applying parallel axis - theorem

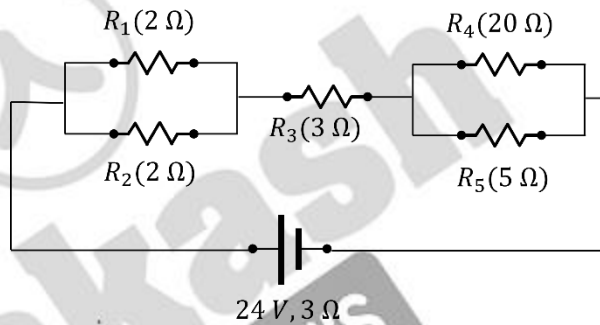
$$MK^2 = M\left(\frac{2}{5}R^2 + d^2\right)$$

$$K^2 = \frac{2}{5} \times 25 + 100$$

$$K = \sqrt{110} \text{ cm}$$

4. In the circuit shown, Find the current through  $R_4(I_4)$  and  $R_5(I_5)$

- A.  $I_4 = \frac{24}{55}$  A,  $I_5 = \frac{96}{55}$  A
- B.  $I_4 = \frac{96}{55}$  A,  $I_5 = \frac{24}{55}$  A
- C.  $I_4 = \frac{24}{37}$  A,  $I_5 = \frac{96}{37}$  A
- D.  $I_4 = \frac{96}{37}$  A,  $I_5 = \frac{24}{37}$  A



**Answer (A)**

**Sol.**

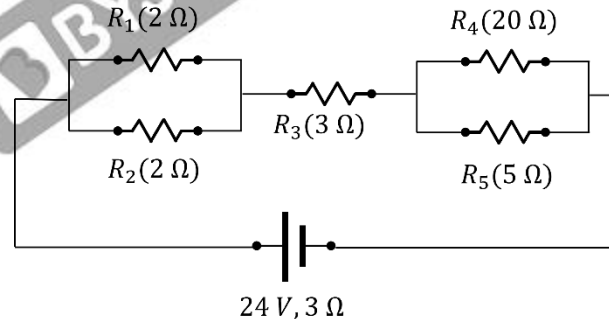
$$R_{eq} = 2 \times \frac{2}{4} + 20 \times \frac{5}{25} + 3 + 3$$

$$R_{eq} = 11 \Omega$$

$$\text{Current, } I_T = \frac{24}{11} \text{ A}$$

$$I_4 = \frac{5}{25} \times \frac{24}{11} \text{ A} = \frac{24}{55} \text{ A}$$

$$I_5 = \frac{20}{25} \times \frac{24}{11} \text{ A} = \frac{96}{55} \text{ A}$$



5. In the figure shown two blocks of masses  $m_1 = 4 \text{ kg}$  and  $m_2 = 1 \text{ kg}$  are placed over a smooth fixed wedge, connected by an ideal string over a smooth pulley. As the system is released the tension in the string is

- A.  $4(\sqrt{3} + 1) \text{ N}$
- B.  $10\left(1 - \frac{1}{\sqrt{3}}\right) \text{ N}$
- C.  $10(\sqrt{3} - 1) \text{ N}$
- D.  $\frac{10}{3}(\sqrt{3} - 1) \text{ N}$



**Answer (A)**

**Sol.**

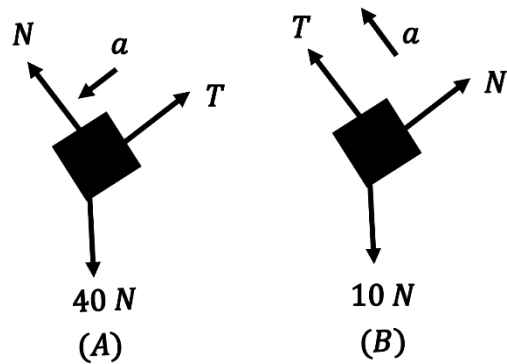
Equation for A parallel to the surface

$$40 \sin 60^\circ - T = 4a$$

Equation for B parallel to the surface

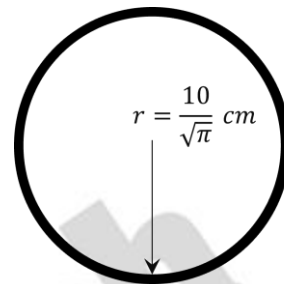
$$T - 10 \sin 30^\circ = a$$

On solving:  $4(\sqrt{3} + 1) N$



6. A circular loop of radius  $\frac{10}{\sqrt{\pi}} \text{ cm}$  is placed in a linearly varying perpendicular magnetic field which has magnitude  $0.5 \text{ T}$  at time  $t = 0$ . The magnetic field reduces to zero at  $t = 0.5 \text{ sec}$ . Find the *emf* induced in the loop at  $t = 0.25 \text{ sec}$ .

- A.  $0.01 \text{ V}$
- B.  $0.005 \text{ V}$
- C.  $0.02 \text{ V}$
- D.  $0.03 \text{ V}$



**Answer: (A)**

**Sol.**

$$B = 0.5 \text{ T}$$

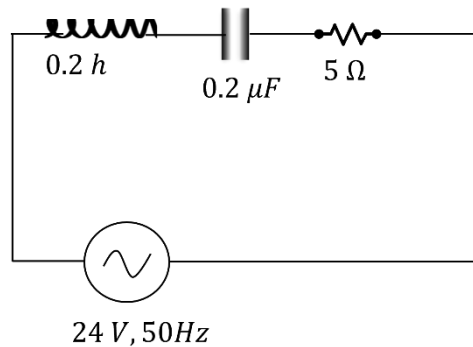
$$B = 0, \text{ at } t = 0.5 \text{ sec}$$

Assuming linear graph between  $B$  &  $t$

$$\begin{aligned} \epsilon_{ind} &= \frac{\Delta\phi}{\Delta t} = \frac{\Delta(BA)}{\Delta t} = A \frac{\Delta(B)}{\Delta t} \\ &= \pi \times \left(\frac{10}{\sqrt{\pi}}\right)^2 \times 10^{-4} \times \left(\frac{0.25}{0.25}\right) \\ &= 10^{-2} \times 1 = 0.01 \text{ V} \end{aligned}$$

7. Calculate the ratio between bandwidth and quality factor for the following circuit

- A.  $1/3$
- B.  $1/8$
- C.  $1/16$
- D.  $1/4$



**Answer (B)**

**Sol.**

For an RLC circuit

$$\text{Band width} = R/L$$

$$= \frac{5}{0.2} \text{ Hz}$$

$$= 25 \text{ Hz}$$

For an RLC circuit quality factor

$$\begin{aligned}
 &= \frac{\sqrt{L}}{R\sqrt{C}} \\
 &= \frac{\sqrt{0.2}}{5 \times \sqrt{(0.2 \times 10^{-6})}} \\
 &= 200 \\
 \frac{BW}{Q} &= \frac{25}{200} = 1/8
 \end{aligned}$$

8. If a ball is thrown from ground in vertical plane, it attains maximum height of 360 m. Find the maximum distance, the ball can cover on ground keeping the projection speed constant.

- A. 360 m
- B. 720 m
- C. 1440 m
- D. 180 m

**Answer (B)**

**Sol.**

For ground projectile, Range = 2 × Maximum height = 2 × 360 = 720 m

9. Which statement is correct about photoelectric effect?

- A. Maximum kinetic energy depends upon intensity of light.
- B. Stopping potential is dependant only on work function of metal.
- C. Photoelectric effect can be explained by wave nature of light.
- D. Photoelectric effect can be explained by particle nature of light.

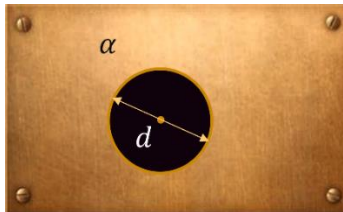
**Answer (D)**

**Sol.**

We know that photoelectric effect is supported by particle nature of light, so option D is correct.

10. A uniform rectangular plate has a circular hole of diameter 'd' as shown. The coefficient of linear expansion of the plate is  $\alpha$ . Find the change in diameter of the hole, if temperature of the plate is increased by  $\Delta T$ .

- A.  $2d\alpha\Delta T$
- B.  $d\alpha\Delta T$
- C.  $\frac{d}{2}\alpha\Delta T$
- D.  $3d\alpha\Delta T$



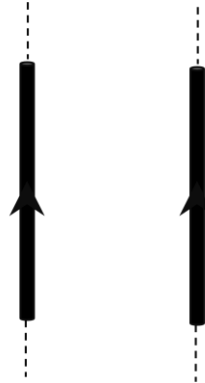
**Answer (B)**

**Sol.**

As we know that  $\frac{\Delta d}{d} = \alpha\Delta T \Rightarrow \Delta d = d\alpha\Delta T$

11. Two parallel infinite wires carry equal currents as shown. If both the currents are doubled and separation is halved, the force on a 10 cm section of one of the wires becomes:

- A. 4 times
- B. 1/4 times
- C. 8 times
- D. 1/8 times



**Answer: (C)**

**Sol.**

Magnetic force on length  $l$  of either wire

$$F = \frac{\mu_0 I_1 I_2 l}{2\pi d}$$

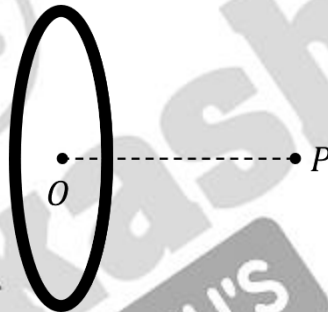
Original force,  $F = \frac{\mu_0 I_0^2 l}{2\pi d}$

New force,  $F' = \frac{\mu_0 \times 4I_0^2 l}{2\pi(\frac{d}{2})} = \frac{8\mu_0 I_0^2 l}{2\pi d}$

$$F' = 8F$$

12. A coil of radius  $R$  centred at  $O$  carries a current  $i$ . Point  $P$  is on the axis of coil at a distance  $R$  from the centre  $O$  as shown. Ratio of magnetic field at point  $O$  to magnetic field at point  $P$  is equal to

- A. 2
- B.  $2\sqrt{2}$
- C.  $1/\sqrt{2}$
- D.  $1/2\sqrt{2}$



**Answer (B)**

**Sol.**

$$B_0 = \frac{\mu i}{2R}$$

$$B_p = \frac{\mu i R^2}{2(R^2 + R^2)^{3/2}} = \frac{\mu i}{4\sqrt{2}R}$$

$$\frac{B_0}{B_p} = 2\sqrt{2}$$

13. Statement 1: Photodiodes are operated in reverse biased.

Statement 2 : Current in forward biased is more than current in reverse bias in  $p - n$  diode.

- A. Both the statements are true.
- B. Statement 1 is true and statement 2 is false.
- C. Statement 1 is true and statement 2 is false.
- D. Both the statements are false.

**Answer (A)**

**Sol.**

Statement 1 is true as photodiode is used in reverse bias to increase the sensitivity of diode current.

Statement 2 is true as diode provides greater resistance in reverse bias.

14. Weight of an object at earth's surface is  $18\text{ N}$ . If the object is taken  $3200\text{ km}$  above the surface, then the weight of the object (in  $\text{N}$ ) is \_\_\_\_\_  
(Given; radius of Earth =  $6400\text{ km}$ )

**Answer (8)**

**Sol.**

As we know that;

$$g = \frac{GM}{r^2}$$

$$g_{\text{new}} = \frac{GM}{(R+\frac{R}{2})^2} = \frac{4}{9} \times \frac{GM}{R^2} = \frac{4}{9} g_{\text{surface}}$$

$$\text{New weight} = \frac{4}{9} \times 18\text{ N} = 8\text{ N}$$



15. A block of mass  $2\text{ kg}$  is attached with two identical spring of force constant  $20\text{ N/m}$  as shown in the figure. If the time period of the oscillation of the block is  $2\pi\sqrt{\frac{1}{x}}\text{ sec}$ . Find  $x$ .



**Answer (20)**

**Sol.**

Equivalent spring constant

$$k_{eq} = k_1 + k_2 = 40\text{ N/m}$$

Time period of system is:

$$T = 2\pi\sqrt{\frac{m}{k_{eq}}} = 2\pi\sqrt{\frac{2}{40}} = 2\pi\sqrt{\frac{1}{20}}$$

$$x = 20$$

16. A ring of uniform wire and radius  $5\text{ cm}$  is made to rotate about a coplanar axis which is at a distance of  $10\text{ cm}$  from the centre of the ring as shown. The radius of gyration of ring about the axis is equal to  $\frac{15}{\sqrt{K}}\text{ cm}$ . The value of  $K$  is equal to

**Answer : 2**

**Sol.**

Moment of inertia is given as.

$$I_{axis} = \frac{m \times 5^2}{2} + m \times 10^2$$

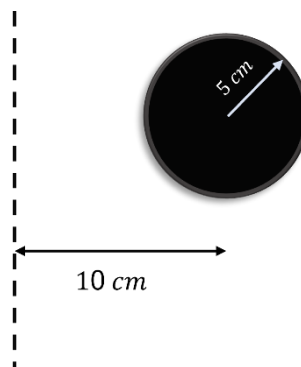
$$= \frac{225}{2} m$$

Let radius of gyration is  $K$  so,

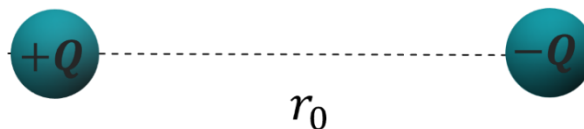
$$mK^2 = \frac{225}{2} m$$

$$K = \frac{15}{\sqrt{2}}\text{ cm}$$

So, the answer is **2**



17. Two charges (both at rest initially), having a charge  $Q$  and  $-Q$  are released from the situation shown. If the kinetic energy of the system when the separation between them becomes half is  $\frac{1}{4\pi\epsilon_0} \frac{Q^2}{nr_0}$ , find  $n$ ?



**Answer: 1**

**Sol.**

$$\text{Initial potential energy } U_i = -\frac{1}{4\pi\epsilon_0} \times \frac{Q^2}{r_0}$$

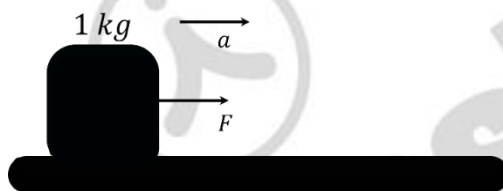
$$\text{Final potential energy } U_f = -\frac{1}{4\pi\epsilon_0} \times \frac{Q^2}{r_0/2}$$

$$\text{Loss in potential energy, } U_i - U_f = -\frac{1}{4\pi\epsilon_0} \times \frac{Q^2}{r_0} + \frac{1}{4\pi\epsilon_0} \times \frac{Q^2}{\frac{r_0}{2}} = \frac{1}{4\pi\epsilon_0} \times \frac{Q^2}{r_0}$$

$$\text{Kinetic energy} = \frac{1}{4\pi\epsilon_0} \times \frac{Q^2}{r_0}$$

$$n = 1$$

18. A constant force acting on a body of mass  $1 \text{ kg}$  provides it a kinetic energy of  $1800 \text{ J}$  by the end of  $5^{\text{th}}$  second. If the body was initially at rest at the beginning of action of force then magnitude of force is equal to \_\_\_\_\_  $\text{N}$ .



**Answer: 12 N**

**Sol.**

$$a = F/m$$

As force is constant so block is moving with constant acceleration

$$S = \frac{1}{2} at^2 = Ft^2/2m$$

From work energy theorem

$$W = \Delta KE = \vec{F} \cdot \vec{s}$$

$$\frac{F^2 t^2}{2m} = KE$$

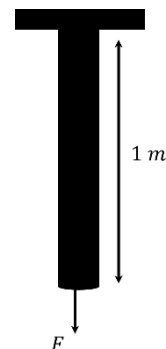
$$F = \sqrt{\frac{2mKE}{t^2}} = \sqrt{\frac{2 \times 1 \times 1800}{25}} = 12 \text{ N}$$

19. A light rod of cross-sectional area  $A$  and Young's Modulus  $Y$  is arranged as shown:

The applied force  $F = 250 \text{ N}$ . If length of rod is  $1 \text{ m}$ , the extension comes out to be  $x \times 10^{-6} \text{ metres}$ . Find  $x$ .

$$\text{Given that: } A = 6.25 \times 10^{-4} \text{ m}^2$$

$$Y = 10^{10} \text{ N/m}^2$$



**Answer: 40.00**

**Sol.**

$$\Delta l = \frac{Fl}{AY}$$

$$\Delta l = \frac{250 \times 1}{6.25 \times 10^{-4} \times 10^{10}}$$

$$\Delta l = 40 \times 10^{-6} \text{ m}$$

$$x = 40.00$$

**20. Statement 1:** If the weight of the lift is equal to the tension force of the cable wire, then it moves with uniform velocity.

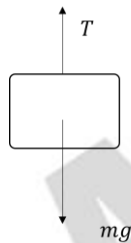
**Statement 2:** If the lift moves downward with an acceleration, then the contact force between the boy's feet and lift floor is more than the weight of boy.

- A. Both the statements are true and (2) is the correct explanation of (1)
- B. Both the statements are true and (2) is not the correct explanation of (1)
- C. Statement 1 is true and statement 2 is false.
- D. Statement 2 is true and statement 1 is false.

**Answer (C)**

**Sol.**

**Statement 1:**

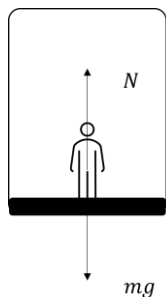


$a = 0$ , as lift is moving with constant velocity.

So,  $T = mg$

Statement 1 is correct

**Statement 2:**



$$mg - N = ma$$

$$N = m(g - a)$$

So,  $N < mg$

Statement 2 is incorrect.