

# KVS PRT Model Question Paper 2023

## English

**1. Directions: Choose the word most nearly OPPOSITE in meaning to the given word:**

**FACT**

- (1) Fiction
- (2) Imagination
- (3) Reality
- (4) Lie

**Answer: (4)**

**Directions (2) and (3): Complete the following sentences by using the correct form of the verb with the help of options that follow:**

**2. The Headmaster \_\_\_\_\_ to speak to you.**

- (1) is wanting
- (2) was wanting
- (3) were wanting
- (4) wants

**Answer: (4)**

**3. He \_\_\_\_\_ for five hours.**

- (1) has been sleeping
- (2) must had been Sleeping
- (3) was sleeping
- (4) had slept

**Answer: (1)**

**Directions (4) and (5): In each of the following sentences improve the underlined part with the help of given options:**

**4. I shall have much pleasure in accepting your kind invitation to dinner.**

- (1) Can't have much pleasure
- (2) I am having much pleasure

(3) I may have much pleasure

(4) I have much pleasure

**Answer: (4)**

**5. No sooner did the police arrived than the robbers made good their escape.**

(1) No sooner when the police arrived

(2) No sooner did the police arrive

(3) No sooner the police arrived

(4) No Sooner had the police arrived

**Answer: (4)**

**6. Directions: The idiom given below is followed by four possible meanings. Choose the correct option:**

**By fits and starts**

(1) irregularly

(2) successfully

(3) incompletely

(4) suddenly

**Answer: (1)**

**7. Directions: In the following sentence, out of the given alternatives choose the one which best expresses the meaning of the underlined word:**

**His performance in the office is quite superficial.**

(1) excellent

(2) shallow

(3) excessive

(4) unnatural

**Answer: (4)**

**8. Directions: In the following sentence, one part may have an error. Choose the one which has the error, if any:**

**It is high time/that we send/the answer/to this query.**

(1)

(2)

(3)

(4)

**Answer: (2)**

**Directions (9) and (10):** In the following items a word is followed by four explanatory expressions. Choose the expression which best describes the word:

**9. ORTHODOX**

- (1) one who flaunts established opinions
- (2) one who has no opinions of one's own
- (3) one who holds established opinions
- (4) one who is self-opinionated

**Answer: (3)**

**10. EXPLICIT**

- (1) drawing out a secret from somebody
- (2) comparison that is out of place
- (3) statement that is absolutely clear
- (4) trade prohibited by law

**Answer: (3)**

## General Hindi

**11. निम्नलिखित विकल्पों में से सही वर्तनी वाले शब्द का चुनाव कीजिए:**

- (1) उज्ज्वल
- (2) उज्जवल
- (3) उज्वल
- (4) उजवल

**Answer: (1)**

**12. 'जल्दी चलो' - रेखांकित अंश में कौन-सा विशेषण है?**

- (1) परिमाण बोधक विशेषण
- (2) अनिश्चय वाचक विशेषण
- (3) निश्चय वाचक विशेषण

(4) क्रियाविशेषण

**Answer: (4)**

13. इनमें से कौन-सा शब्द 'पर्वत' का पर्याय नहीं है?

(1) भूधर

(2) नग

(3) नभ

(4) शैल

**Answer: (3)**

14. 'सुख-चैन' में समास है:

(1) कर्मधारय

(2) तत्पुरुष

(3) द्विगु

(4) द्वन्द्व

**Answer: (4)**

15. छाती पर साँप लोटना' - मुहावरे का सही अर्थ दिए गए विकल्पों में से चुनिए:

(1) कष्ट पाना

(2) भयभीत होना

(3) साहस का काम करना

(4) ईर्ष्या करना

**Answer: (4)**

16. परिक्रमा' शब्द में उपसर्ग है:

(1) प

(2) मा

(3) आ

(4) परि

**Answer: (4)**

17. निम्नलिखित में से अशुद्ध वाक्य कौन-सा है?

- (1) इस बार फसल अच्छी होगी।
- (2) बैठक का समय चार बजकर दस मिनट होगा
- (3) जब वर्षा होगी तब देखा जाएगा।
- (4) हम सब जा रहे हैं, आप भी चलोगे ?

**Answer: (3)**

**18. 'सिंह वन में रहता है' रेखांकित में कारक है:**

- (1) करण कारक
- (2) कर्म कारक
- (3) अपादान कारक
- (4) अधिकरण कारक

**Answer: (4)**

**19. 'विद्वान' का स्त्री-लिंग है:**

- (1) विद्वत्ता
- (2) विदुषी
- (3) विद्वत्री
- (4) विद्वानी

**Answer: (2)**

**20. 'शाखा' का बहुवचन है:**

- (1) शाखाएँ
- (2) शाखियाँ
- (3) शाख
- (4) शाखें

**Answer: (1)**

## **General Knowledge and Current Affairs**

**21. When was Goods and Service Tax (GST) introduced in India?**

- (1) February, 2017
- (2) April, 2017
- (3) July, 2017
- (4) January, 2017

**Answer: (3)**

**22. Which of the following gates in the defence wall of Delhi was identified by Ibn-Battuta as the greatest?**

- (1) Gul darwaza
- (2) Budaun darwaza
- (3) Delhi darwaza
- (4) Mandwi darwaza

**Answer: (2)**

**23. Which of the following is the first State in India that has made roof top rainwater harvesting structure compulsory to all the houses across the State?**

- (1) Punjab
- (2) Tamil Nadu
- (3) Kerala
- (4) Maharashtra

**Answer: (2)**

**24. The Chipko movement is associated with which of the following states?**

- (1) Uttarakhand
- (2) Chhattisgarh
- (3) Madhya Pradesh
- (4) Jharkhand

**Answer: (1)**

**25. Who is the founder of Grameen Bank of Bangladesh?**

- (1) Mohammed Yunus
- (2) Mohammed Talib
- (3) S.R. Hashim

(4) Mahabub-ul-Haq

**Answer: (1)**

**26. Who was awarded with Jnanpith award, 2017?**

(1) Shiv Mehta

(2) Krishna Sobti

(3) Ramesh Kuntal Megh

(4) Jayantha Mahatab Bora

**Answer: (2)**

**27. Which one of the following rivers flows across China, India and Bangladesh?**

(1) Indus

(2) Ganga

(3) Chang Jiang

(4) Brahmaputra

**Answer: (4)**

**28. Which one of the following is not the form of precipitation?**

(1) Sleet

(2) Hail

(3) Absolute humidity

(4) Rainfall

**Answer: (3)**

**29. Dipa Karmakar won a gold medal in Gymnastics World Challenge Cup at Mersin, Turkey on July 8, 2018. In which event, did she win?**

(1) bar event

(2) vault event

(3) parallel bar exercise

(4) floor exercise

**Answer: (2)**

**30. Which of the following country hosted the Asian Games in 2018?**

(1) China

- (2) Indonesia
- (3) Japan
- (4) South Korea

**Answer: (2)**

### Reasoning Ability

**31. A solid brick of Gold measuring 18 cm x 48 cm x 16 cm is melted and converted into a cubical shape. An edge of this new shape is equal to:**

- (1) 24cm
- (2) 12cm
- (3) 18cm
- (4) 48cm

**Answer: (1)**

**32. A man is standing near a clock tower. He moves southwards to reach a point 'P', 8 km from the clock tower. From 'P' he turns right, then moves 6 km to reach a point from 'Q' he moves to right again and reaches a point 'R', 10 km from 'Q'. From 'R' he turns right and reaches a spot 'S', 6 km from 'R'. How far and in which direction, he is from the clock tower?**

- (1) 2 km South
- (2) 2 km North
- (3) 18 km South
- (4) 4 km South

**Answer: (2)**

**33. Out the following given four words, one is different from the other three. Select the odd one:**

- (1) White
- (2) Red
- (3) Yellow
- (4) Blue

**Answer: (1)**

**34. Inder is a man and Sahej is a woman. Sahej's mother is daughter of Inder's mother's sister. How is Sahej related to Inder?**



(1) Sister

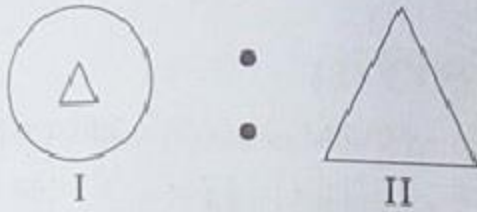
(2) Niece

(3) Grand-daughter

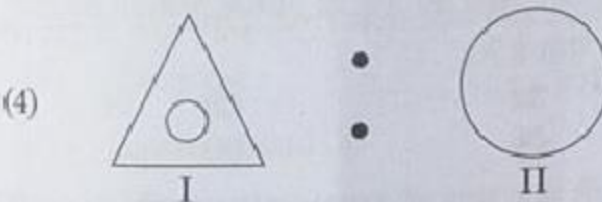
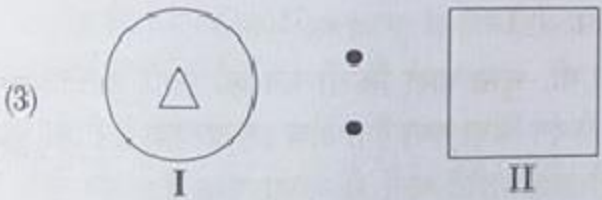
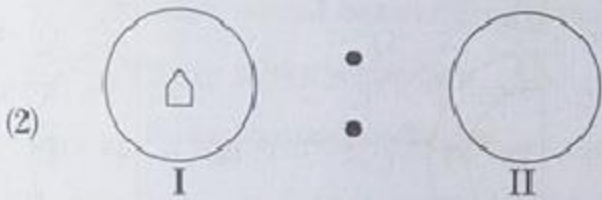
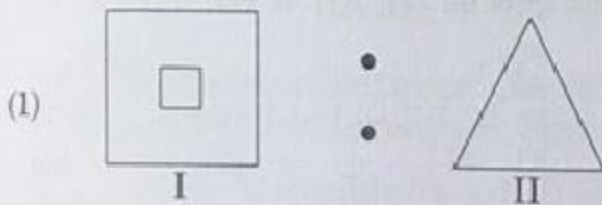
(4) Daughter

**Answer: (2)**

35.



There is some relationship among the above two figures. Out of the following figures select the set of figures that have a relationship similar to that in the above figures :



Answer: (4)

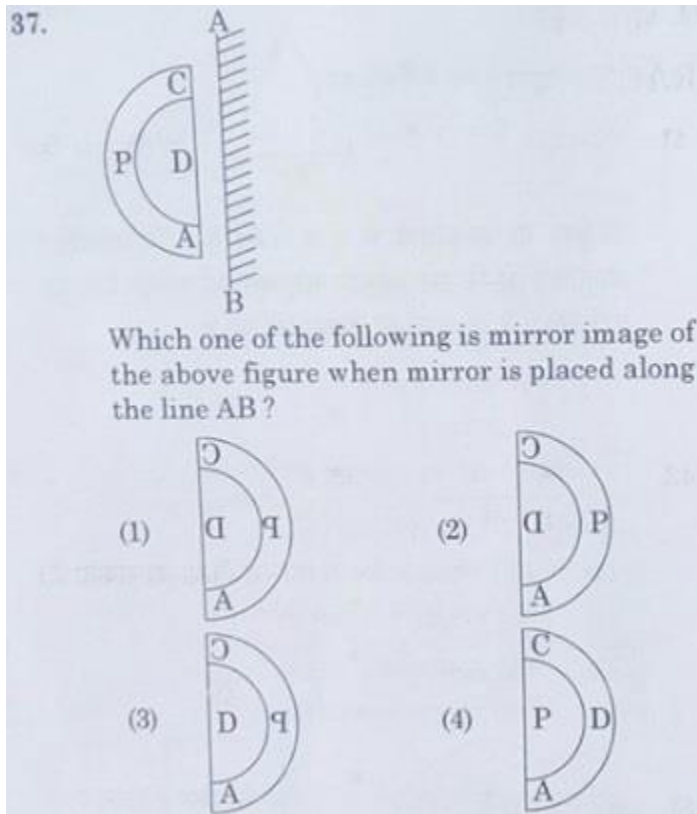
36. Observe the following words carefully:

hopeful, helpful, healthy, healing heating.

If we arrange these words in dictionary order, which one of these will be at the third place?

- (1) heating
- (2) helpful
- (3) healthy
- (4) healing

**Answer: (1)**



**Answer: (1)**

**38. A cube of side 8 cm is painted red on all the sides. It is then cut into smaller cubes, each of side 2cm. How many of these smaller cubes have one or more sides painted red?**

- (1) 32
- (2) 48
- (3) 56
- (4) 24

**Answer: (3)**

**39. In a certain code language 'PRINCESS' is written as 'ECINRPTU'. How will you write 'SPICEJET' in the same code language?**

- (1) EJICSPFV
- (2) JECIPSGU
- (3) JEICPSGV
- (4) JEICPSFV

**Answer: (4)**

**40. what is related to the numbers '3, 4, 5' in the same way as numbers '1, 2, 3' are related to '1, 4, 9'?**

- (1) 3, 16, 25
- (2) 9, 16, 25
- (3) 3, 6, 11
- (4) 3, 8, 25

**Answer: (2)**

## **Computer Literacy**

**41. Thesaurus tool in MS-Word is used for:**

- (1) Spelling suggestions
- (2) Synonyms and Antonyms words
- (3) Correcting sentences
- (4) Grammar options

**Answer: (2)**

**42. What is common between the following?**

Facebook, Twitter, Instagram, Pintrest.

- (1) All are accessible from dark web.
- (2) All are social networking sites.
- (3) All are news websites.
- (4) All are banned websites.

**Answer: (2)**

**43. Artificial intelligence is the science and engineering for:**

**(a) making intelligent machines.**

**(b) making computers think like humans.**

**Which of the following is the correct option?**

(1) Only (b)

(2) Both (a) and (b)

(3) Neither (a) nor (b)

(4) Only (a)

**Answer: (2)**

**44. Which of the following font effect is not available in MS-PowerPoint Font dialog box?**

(1) Shadow

(2) Strike Through

(3) Underline

(4) Emboss

**Answer: (4)**

**45. \_\_\_\_\_ and \_\_\_\_\_ are the smallest and largest font size available in Font Size tool on formatting toolbar in MS-Office.**

(1) 8 and 72

(2) 12 and 64

(3) 12 and 72

(4) 8 and 64

**Answer: (1)**

**46. Input devices most commonly used on laptops for routine operations are \_\_\_\_\_.**

(1) Keyboard and Mouse

(2) Keyboard and CD-ROM

(3) Mouse and Pendrive

(4) Keyboard and Screen

**Answer: (1)**

**47. Which of the following features is used to apply motion effects in between a slide exits and another enters?**

- (1) Animation Scheme
- (2) Slide Design
- (3) Slide Transition
- (4) Animation Objectives

**Answer: (3)**

**48. Which of the following are Indian IT companies?**

- (1) Intel and HCL
- (2) HCL and TCS
- (3) DELL and TCS
- (4) Intel and Wipro

**Answer: (2)**

**49. Given the following pairs:**

- (a) Wi-Fi - Modem
- (b) Chrome - Cable
- (c) File - Hard Drive
- (d) Charging - Cable

**Which of the above is an odd pair?**

- (1) (b) only
- (2) (c) Only
- (3) (c) and (d)
- (4) (a) only

**Answer: (1)**

**50. Which of the following option is used to move data from one place to another in a document (MS-Office)?**

- (1) Paste
- (2) Cut and Paste
- (3) Cut
- (4) Copy

**Answer: (2)**

## Pedagogy

**51. Which of the following are important barriers in the equalization of educational opportunities?**

- (a) Differences in economic states of learner
- (b) Gender disparities
- (c) Common school system
- (d) Differences in the standards of educational institutions

Code:

- (1) (a) and (d)
- (2) (a), (b) and (c)
- (3) (a), (b) and (d)
- (4) (a), (b), (c) and (d)

**Answer: (3)**

**52. Which of the following is not characteristic of the socially and emotionally mature person?**

- (1) He makes conformity to social expectations his primary goal.
- (2) He is relatively free from anxiety and conflict.
- (3) He is capable of exercising control in the face of emotional stress.
- (4) He has a sense of humour and positive outlook on life.

**Answer: (1)**

**53. What cannot be visualized as a role of the teacher in teaching through problem-solving?**

- (1) Creating the problem situation.
- (2) Assist students in perceiving defining and stating the problem
- (3) Assist students in finding appropriate solution to the problems.
- (4) Create fear free atmosphere in the class.

**Answer: (1)**

**54. The concept of IEP (Individualised Education Plan) is not based on the idea of:**

- (1) current strengths of the learner
- (2) individual goals to be achieved
- (3) use of cooperative learning strategy

(4) separating children on the basis or ability grouping

**Answer: (4)**

**55. What is not a major concern or the school on the development of child's language competence?**

(1) Issues related to articulation and literacy

(2) Enhancing vocabulary quantum

(3) Ability to use language and create

(4) To think and communicate with others

**Answer: (1)**

**56. What type of efforts are needed to be made in learning of Mathematics in early primary years i.e., upto class IV?**

(1) Diagnosing learning difficulties

(2) Providing enrichment programmes

(3) Completing the Course/competencies

(4) Ensuring regularity in attending the class/school

**Answer: (1)**

**57. Which of the following is not a mode of Computer Assisted Learning?**

(1) Tutorial

(2) Drill and Practice Session

(3) Modelling

(4) Data Interpretation and Drawing Conclusions

**Answer: (3)**

**58. A school curriculum can be best defined as:**

(1) The complete array of the Courses or study

(2) All the materials used to further pupils' activities

(3) A complete set of organised experiences in the school

(4) Sum total of knowledge to be provided to learners

**Answer: (1)**

**59. The most important issue of a multi-level situation is:**

(1) seeking cooperation amongst students



- (2) Class size exceeding 30
- (3) Addressing the learning needs of different level students of different grades simultaneously
- (4) Arranging appropriate TLM

**Answer: (3)**

**60. A child takes a favourite book and retells the 'story' often by using pictures as cues. At what process/stage/component does she/he demonstrates?**

- (1) Narrative
- (2) Syntactic awareness
- (3) Emergent reading
- (4) Phonological awareness

**Answer: (1)**

**61. A teacher would become more effective if:**

- (1) he/she uses good instructional aids.
- (2) her/she helps students to ask question.
- (a) he/she helps students to achieve mastery learning.
- (4) students score high marks.

**Answer: (3)**

**62. Social maturity is best characterized by:**

- (1) ability to win friends and influence people
- (2) a high level of personal adjustment
- (3) a high degree of social competence
- (4) a high degree of integration of one's needs and purposes with those of the social order

**Answer: (4)**

**63. Match the two sets. Set - I indicate stages of cognitive development in Piaget's model and Set - II indicates associated characteristics. Select the correct code to represent your answer.**

Set-I	Set-II
(a) Sensorimotor	(i) Reversible thinking
(b) Pre-Operational	(ii) Object permanence

(c) Concrete Operational	(iii) Egocentrism
(d) Formal Operational	(iv) Deductive thinking
	(v) Repetitive tasks
	(vi) Intense self-awareness

Code:

(a) (b) (c) (d)

(1) (ii) (iii) (i) (iv)

(2) (v) (vi) (ii) (i)

(3) (v) (ii) (iv) (vi)

(4) (ii) (iii) (iv) (i)

**Answer: (3)**

(4) (1) Heredity determines how far we will go

(2) It determines how far we can go

(3) It is the prime determinant of how far we will go

(4) It is the prime determinant of how far we can go

**Answer: (2)**

**65. Identification of learning gaps of children and plugging them is done through:**

(1) Team teaching

(2) Reflective teaching

(3) Remedial teaching

(4) Re-teaching

**Answer: (3)**

**66. You have administered a test on Mathematics to class V, and most of the students failed in it. You have to construct and administer another test. Which test would you prefer?**

(1) Summative test

(2) Mastery Test

(3) Diagnostic test

(4) Formative test

**Answer: (4)**

**67. Emotional response to symbolic stimuli is primarily the result of:**

- (1) maturation
- (2) learning
- (3) adjustment
- (4) increased sensory perception

**Answer: (1)**

**68. A generalized view or characteristics that ought to be possessed by women and men constitutes:**

- (1) gender roles
- (2) gender identity
- (3) gender disparity
- (4) gender stereotypes

**Answer: (4)**

**69. The best way to handle a wrong response of a student would be:**

- (1) to explain the subject matter in detail again.
- (2) to tell the student that your answer is wrong.
- (3) to ask another student to give the correct answer.
- (4) to explain and give another chance to give answer.

**Answer: (1)**

**70. Micro teaching is a technique used for:**

- (1) teaching small sized class
- (2) teaching in a simulated condition
- (3) preparation of teacher in specific teaching skill
- (4) teaching difficult concepts

**Answer: (2)**