

# National Testing Agency

**Question Paper Name :** PGQP38 15th Sep 2021 Shift 1  
**Subject Name :** PGQP38  
**Creation Date :** 2021-09-15 17:32:44  
**Duration :** 120  
**Total Marks :** 400  
**Display Marks:** Yes

## PGQP38

**Group Number :** 1  
**Group Id :** 19088919  
**Group Maximum Duration :** 0  
**Group Minimum Duration :** 120  
**Show Attended Group? :** No  
**Edit Attended Group? :** No  
**Break time :** 0  
**Group Marks :** 400  
**Is this Group for Examiner? :** No

## MBA

**Section Id :** 19088958  
**Section Number :** 1  
**Section type :** Online  
**Mandatory or Optional :** Mandatory

<b>Number of Questions :</b>	72
<b>Number of Questions to be attempted :</b>	72
<b>Section Marks :</b>	400
<b>Enable Mark as Answered Mark for Review and Clear Response :</b>	Yes
<b>Sub-Section Number :</b>	1
<b>Sub-Section Id :</b>	19088984
<b>Question Shuffling Allowed :</b>	Yes

**Question Number : 1 Question Id : 1908892292 Question Type : MCQ Option Shuffling : No Is Question Mandatory : No**

**Correct Marks : 4 Wrong Marks : 1**

**Identify the correct meaning of the underlined idioms in the given sentences.**

The cricket fans were in the dark till the disclosure to the CBI report.

- |              |                |
|--------------|----------------|
| (1) innocent | (2) ignorant   |
| (3) happy    | (4) remorseful |

**Options :**

1908899101. 1

1908899102. 2

1908899103. 3

1908899104. 4

**Question Number : 2 Question Id : 1908892293 Question Type : MCQ Option Shuffling : No Is Question Mandatory : No**

**Correct Marks : 4 Wrong Marks : 1**

**Identify the correct meaning of the underlined idioms in the given sentences.**

As people age, they generally become hard of hearing.

- (1) able to do something with great difficulty
- (2) refuse to listen to others
- (3) unable to hear well
- (4) learn the real or true facts

**Options :**

1908899105. 1

1908899106. 2

1908899107. 3

1908899108. 4

**Question Number : 3 Question Id : 1908892294 Question Type : MCQ Option Shuffling : No Is Question Mandatory : No**

**Correct Marks : 4 Wrong Marks : 1**

Identify the correct meaning of the underlined idioms in the given sentences.

The politician accused of corruption called for a public meeting to clear the air regarding his actions.

- |                          |                  |
|--------------------------|------------------|
| (1) to flaunt            | (2) to propagate |
| (3) get rid of suspicion | (4) to influence |

**Options :**

1908899109. 1

1908899110. 2

1908899111. 3

1908899112. 4

**Question Number : 4 Question Id : 1908892295 Question Type : MCQ Option Shuffling : No Is Question Mandatory : No**

**Correct Marks : 4 Wrong Marks : 1**

Which is the word nearest in meaning to ESOTERIC

- |              |                |
|--------------|----------------|
| (1) Hidden   | (2) Mysterious |
| (3) Profound | (4) Common     |

**Options :**

1908899113. 1

1908899114. 2

1908899115. 3

1908899116.4

**Question Number : 5 Question Id : 1908892296 Question Type : MCQ Option Shuffling : No Is Question Mandatory : No**

**Correct Marks : 4 Wrong Marks : 1**

A word which is no longer in use

- |              |               |
|--------------|---------------|
| (1) Obsolete | (2) Absolute  |
| (3) Aspecial | (4) Ambiguous |

**Options :**

1908899117.1

1908899118.2

1908899119.3

1908899120.4

**Question Number : 6 Question Id : 1908892297 Question Type : MCQ Option Shuffling : No Is Question Mandatory : No**

**Correct Marks : 4 Wrong Marks : 1**

Fill in the blank with the right word:

He took a bar of chocolate and \_\_\_\_\_ a bit.

- |                |               |
|----------------|---------------|
| (1) break away | (2) break out |
| (3) break in   | (4) broke off |

**Options :**

1908899121.1

1908899122.2

1908899123.3

1908899124.4

**Question Number : 7 Question Id : 1908892298 Question Type : MCQ Option Shuffling : No Is Question Mandatory : No**

**Correct Marks : 4 Wrong Marks : 1**

Fill in the blank with the right word:

Doctor told her to \_\_\_\_\_ the treatment.

- |                   |               |
|-------------------|---------------|
| (1) care for      | (2) carry out |
| (3) carry on with | (4) carry on  |

**Options :**

1908899125. 1

1908899126. 2

1908899127. 3

1908899128. 4

**Question Number : 8 Question Id : 1908892299 Question Type : MCQ Option Shuffling : No Is Question Mandatory : No**

**Correct Marks : 4 Wrong Marks : 1**

A person who hates the institution of marriage is

- |                |                |
|----------------|----------------|
| (1) Monogamist | (2) Bigamist   |
| (3) Misogynist | (4) Misogamist |

**Options :**

1908899129. 1

1908899130. 2

1908899131. 3

1908899132. 4

**Sub-Section Number :** 2

**Sub-Section Id :** 19088985

**Question Shuffling Allowed :** Yes

**Question Id : 1908892300 Question Type : COMPREHENSION Sub Question Shuffling Allowed : Yes Group Comprehension Questions : No**

**Question Numbers : (9 to 13)**

Question Label : Comprehension

Read the following paragraph and answer the questions.

Indian granite industry is in peril in the absence of a uniform policy from the state governments, despite the truth given by liberalization policies of the union government in the last two years. Compared to the remarkable progress in the field during the last three years, the absence of matching policies by state governments had put granite quarry owners and other involved in the industry on the verge of collapse in the international market. The policies differed from state to state, had created problems as far as dead rent and duration of lease were concerned.

### Sub questions

**Question Number : 9 Question Id : 1908892301 Question Type : MCQ Option Shuffling : No Is**

**Question Mandatory : No**

**Correct Marks : 4 Wrong Marks : 1**

The granite production is largely controlled by individuals.

- |                     |                     |
|---------------------|---------------------|
| (1) Data inadequate | (2) Definitely true |
| (3) Probably true   | (4) Probably false  |

### Options :

1908899133. 1

1908899134. 2

1908899135. 3

1908899136. 4

**Question Number : 10 Question Id : 1908892302 Question Type : MCQ Option Shuffling : No Is**

**Question Mandatory : No**

**Correct Marks : 4 Wrong Marks : 1**

The granite produced in India does not match with the quality of international level.

- |                     |                     |
|---------------------|---------------------|
| (1) Data inadequate | (2) Definitely true |
| (3) Probably true   | (4) Probably false  |

### Options :

1908899137. 1

1908899138. 2

1908899139. 3

1908899140. 4

**Question Number : 11 Question Id : 1908892303 Question Type : MCQ Option Shuffling : No Is Question Mandatory : No**

**Correct Marks : 4 Wrong Marks : 1**

The union government's liberalization policy became applicable to granite industry only during the last two years.

- |                     |                     |
|---------------------|---------------------|
| (1) Data inadequate | (2) Definitely true |
| (3) Probably true   | (4) Probably false  |

**Options :**

1908899141. 1

1908899142. 2

1908899143. 3

1908899144. 4

**Question Number : 12 Question Id : 1908892304 Question Type : MCQ Option Shuffling : No Is Question Mandatory : No**

**Correct Marks : 4 Wrong Marks : 1**

Each state having granite quarry has set up its own rules which are contrary to the interest of the industry.

- |                     |                     |
|---------------------|---------------------|
| (1) Data inadequate | (2) Definitely true |
| (3) Probably true   | (4) Probably false  |

**Options :**

1908899145. 1

1908899146. 2

1908899147. 3

1908899148. 4

**Question Number : 13 Question Id : 1908892305 Question Type : MCQ Option Shuffling : No Is Question Mandatory : No**

**Correct Marks : 4 Wrong Marks : 1**

Till three years ago, granite production in India was not profitable.

- |                     |                     |
|---------------------|---------------------|
| (1) Data inadequate | (2) Definitely true |
| (3) Probably true   | (4) Probably false  |

**Options :**

1908899149. 1

1908899150. 2

1908899151. 3

1908899152. 4

**Sub-Section Number :** 3

**Sub-Section Id :** 19088986

**Question Shuffling Allowed :** Yes

**Question Number : 14 Question Id : 1908892306 Question Type : MCQ Option Shuffling : No Is**

**Question Mandatory : No**

**Correct Marks : 4 Wrong Marks : 1**

Choose the most suitable synonym:

**REDEEM**

- |             |            |
|-------------|------------|
| (1) heal    | (2) regain |
| (3) improve | (4) obtain |

**Options :**

1908899153. 1

1908899154. 2

1908899155. 3

1908899156. 4

**Question Number : 15 Question Id : 1908892307 Question Type : MCQ Option Shuffling : No Is**

**Question Mandatory : No**

**Correct Marks : 4 Wrong Marks : 1**



Choose the most suitable synonym:

**TACT**

- |                  |               |
|------------------|---------------|
| (1) cunningness  | (2) diplomacy |
| (3) intelligence | (4) Rudeness  |

**Options :**

1908899157. 1

1908899158. 2

1908899159. 3

1908899160. 4

**Question Number : 16 Question Id : 1908892308 Question Type : MCQ Option Shuffling : No Is Question Mandatory : No**

**Correct Marks : 4 Wrong Marks : 1**

Choose the most suitable synonym:

**APPRISE**

- |              |              |
|--------------|--------------|
| (1) consider | (2) evaluate |
| (3) direct   | (4) notify   |

**Options :**

1908899161. 1

1908899162. 2

1908899163. 3

1908899164. 4

**Question Number : 17 Question Id : 1908892309 Question Type : MCQ Option Shuffling : No Is Question Mandatory : No**

**Correct Marks : 4 Wrong Marks : 1**

Select the word which is opposite in meaning (antonym):

**ENSUE**

- |             |               |
|-------------|---------------|
| (1) follow  | (2) instigate |
| (3) precede | (4) cease     |

**Options :**

1908899165. 1

1908899166. 2

1908899167. 3

1908899168. 4

**Question Number : 18 Question Id : 1908892310 Question Type : MCQ Option Shuffling : No Is Question Mandatory : No**

**Correct Marks : 4 Wrong Marks : 1**

Select the word which is opposite in meaning (antonym):

**DUCTILE**

(1) opaque

(2) tensile

(3) coarse

(4) brittle

**Options :**

1908899169. 1

1908899170. 2

1908899171. 3

1908899172. 4

**Question Number : 19 Question Id : 1908892311 Question Type : MCQ Option Shuffling : No Is Question Mandatory : No**

**Correct Marks : 4 Wrong Marks : 1**

Select the word which is opposite in meaning (antonym):

**ADEPT**

(1) skilled

(2) inept

(3) ugly

(4) serene

**Options :**

1908899173. 1

1908899174. 2

1908899175. 3

1908899176. 4

**Question Number : 20 Question Id : 1908892312 Question Type : MCQ Option Shuffling : No Is Question Mandatory : No**

**Correct Marks : 4 Wrong Marks : 1**

Select the word which is opposite in meaning (antonym):

**CATALYST**

- |               |               |
|---------------|---------------|
| (1) promoter  | (2) assassin  |
| (3) destroyer | (4) deterrent |

**Options :**

1908899177. 1

1908899178. 2

1908899179. 3

1908899180. 4

**Question Number : 21 Question Id : 1908892313 Question Type : MCQ Option Shuffling : No Is Question Mandatory : No**

**Correct Marks : 4 Wrong Marks : 1**

Identify the meaning of the idiom:

**On thin ice**

- |                           |                               |
|---------------------------|-------------------------------|
| (1) on the verge of ruins | (2) unbounded                 |
| (3) in the open air       | (4) in a precarious situation |

**Options :**

1908899181. 1

1908899182. 2

1908899183. 3

1908899184. 4

**Question Number : 22 Question Id : 1908892314 Question Type : MCQ Option Shuffling : No Is Question Mandatory : No**

**Correct Marks : 4 Wrong Marks : 1**

Identify the meaning of the idiom:

**To give a turn**

- |                         |                 |
|-------------------------|-----------------|
| (1) to reject or refuse | (2) to dominate |
| (3) to run away         | (4) to frighten |

**Options :**

1908899185. 1

1908899186. 2

1908899187. 3

1908899188. 4

**Question Number : 23 Question Id : 1908892315 Question Type : MCQ Option Shuffling : No Is Question Mandatory : No**

**Correct Marks : 4 Wrong Marks : 1**

Identify the meaning of the idiom:

**Make no bones**

- |                           |                             |
|---------------------------|-----------------------------|
| (1) without offence       | (2) to be sure and definite |
| (3) undaunted by anything | (4) to be practical         |

**Options :**

1908899189. 1

1908899190. 2

1908899191. 3

1908899192. 4

**Question Number : 24 Question Id : 1908892316 Question Type : MCQ Option Shuffling : No Is Question Mandatory : No**

**Correct Marks : 4 Wrong Marks : 1**

Identify the meaning of the idiom:

**Child's play**

- |                                  |                                  |
|----------------------------------|----------------------------------|
| (1) to handle a situation calmly | (2) to dispute over petty points |
| (3) an easy task                 | (4) to treat lightly             |

**Options :**

- 1908899193. 1
- 1908899194. 2
- 1908899195. 3
- 1908899196. 4

**Question Number : 25 Question Id : 1908892317 Question Type : MCQ Option Shuffling : No Is Question Mandatory : No**

**Correct Marks : 4 Wrong Marks : 1**

Identify the meaning of the idiom:

**The bottom line**

- (1) the trick
- (2) the most important factor
- (3) the secret
- (4) ignorance

**Options :**

- 1908899197. 1
- 1908899198. 2
- 1908899199. 3
- 1908899200. 4

**Question Number : 26 Question Id : 1908892318 Question Type : MCQ Option Shuffling : No Is Question Mandatory : No**

**Correct Marks : 4 Wrong Marks : 1**

The sum of first 45 natural numbers is:

- (1) 1035
- (2) 1280
- (3) 2070
- (4) 2140

**Options :**

- 1908899201. 1
- 1908899202. 2
- 1908899203. 3
- 1908899204. 4

**Question Number : 27 Question Id : 1908892319 Question Type : MCQ Option Shuffling : No Is Question Mandatory : No**

**Correct Marks : 4 Wrong Marks : 1**

The sum of even numbers between 1 and 31 is:

- |         |         |
|---------|---------|
| (1) 16  | (2) 128 |
| (3) 240 | (4) 512 |

**Options :**

1908899205. 1

1908899206. 2

1908899207. 3

1908899208. 4

**Question Number : 28 Question Id : 1908892320 Question Type : MCQ Option Shuffling : No Is Question Mandatory : No**

**Correct Marks : 4 Wrong Marks : 1**

$(51 + 52 + 53 + \text{---} + 100)$  is equal to:

- |          |          |
|----------|----------|
| (1) 2525 | (2) 2975 |
| (3) 3225 | (4) 3775 |

**Options :**

1908899209. 1

1908899210. 2

1908899211. 3

1908899212. 4

**Question Number : 29 Question Id : 1908892321 Question Type : MCQ Option Shuffling : No Is Question Mandatory : No**

**Correct Marks : 4 Wrong Marks : 1**

How many numbers between 200 and 600 are divisible by 4, 5 and 6?

- (1) 5 (2) 6  
(3) 7 (4) 8

**Options :**

1908899213. 1

1908899214. 2

1908899215. 3

1908899216. 4

**Question Number : 30 Question Id : 1908892322 Question Type : MCQ Option Shuffling : No Is**

**Question Mandatory : No**

**Correct Marks : 4 Wrong Marks : 1**

An employer pays Rs.20 for each day a worker works, and forfeits Rs.3 for each day he is idle. At the end of 60 days, a worker gets Rs.280. For how many days did the worker remain idle?

- (1) 40 (2) 60  
(3) 80 (4) 120

**Options :**

1908899217. 1

1908899218. 2

1908899219. 3

1908899220. 4

**Question Number : 31 Question Id : 1908892323 Question Type : MCQ Option Shuffling : No Is**

**Question Mandatory : No**

**Correct Marks : 4 Wrong Marks : 1**

Two pens and three pencils cost Rs.86. Four pens and a pencil cost Rs.112. Find the cost of a pen and that of a pencil.

- (1) 25, 12 (2) 12, 25  
(3) 26, 12 (4) None of these

**Options :**

1908899221. 1

1908899222. 2

1908899223. 3

1908899224. 4

**Question Number : 32 Question Id : 1908892324 Question Type : MCQ Option Shuffling : No Is Question Mandatory : No**

**Correct Marks : 4 Wrong Marks : 1**

By how much is three-fifth of 350 greater than four-seventh of 210 ?

(1) 95

(2) 110

(3) 120

(4) None of these

**Options :**

1908899225. 1

1908899226. 2

1908899227. 3

1908899228. 4

**Question Number : 33 Question Id : 1908892325 Question Type : MCQ Option Shuffling : No Is Question Mandatory : No**

**Correct Marks : 4 Wrong Marks : 1**

One-fifth of a number exceeds one-seventh of the same by 10. The number is:

(1) 125

(2) 150

(3) 175

(4) 200

**Options :**

1908899229. 1

1908899230. 2

1908899231. 3

1908899232. 4

**Question Number : 34 Question Id : 1908892326 Question Type : MCQ Option Shuffling : No Is**



**Question Mandatory : No**

**Correct Marks : 4 Wrong Marks : 1**

Find the average of all the numbers between 6 and 34 which are divisible by 5.

- (1) 18 (2) 20  
(3) 24 (4) 30

**Options :**

1908899233. 1  
1908899234. 2  
1908899235. 3  
1908899236. 4

**Question Number : 35 Question Id : 1908892327 Question Type : MCQ Option Shuffling : No Is**

**Question Mandatory : No**

**Correct Marks : 4 Wrong Marks : 1**

The average of first five multiples of 3 is:

- (1) 3 (2) 9  
(3) 12 (4) 15

**Options :**

1908899237. 1  
1908899238. 2  
1908899239. 3  
1908899240. 4

**Question Number : 36 Question Id : 1908892328 Question Type : MCQ Option Shuffling : No Is**

**Question Mandatory : No**

**Correct Marks : 4 Wrong Marks : 1**

Three numbers are in the ratio 4: 5: 6 and their average is 25. The largest number is:

- (1) 30 (2) 32  
(3) 36 (4) 42

**Options :**

1908899241. 1

1908899242. 2

1908899243. 3

1908899244. 4

**Question Number : 37 Question Id : 1908892329 Question Type : MCQ Option Shuffling : No Is Question Mandatory : No**

**Correct Marks : 4 Wrong Marks : 1**

The sum of two numbers is 25 and their difference is 13. Find their product.

(1) 104

(2) 114

(3) 315

(4) 325

**Options :**

1908899245. 1

1908899246. 2

1908899247. 3

1908899248. 4

**Question Number : 38 Question Id : 1908892330 Question Type : MCQ Option Shuffling : No Is Question Mandatory : No**

**Correct Marks : 4 Wrong Marks : 1**

If 15% of 40 is greater than 25% of a number by 2, then the number is:

(1) 12

(2) 16

(3) 24

(4) 32

**Options :**

1908899249. 1

1908899250. 2

1908899251. 3

1908899252. 4

**Question Number : 39 Question Id : 1908892331 Question Type : MCQ Option Shuffling : No Is Question Mandatory : No**

**Correct Marks : 4 Wrong Marks : 1**

Subtracting 40% of a number from the number, we get the result as 30. The number is:

- |        |        |
|--------|--------|
| (1) 28 | (2) 52 |
| (3) 50 | (4) 70 |

**Options :**

1908899253. 1

1908899254. 2

1908899255. 3

1908899256. 4

**Question Number : 40 Question Id : 1908892332 Question Type : MCQ Option Shuffling : No Is Question Mandatory : No**

**Correct Marks : 4 Wrong Marks : 1**

The number which exceeds 16% of it by 42 is:

- |        |        |
|--------|--------|
| (1) 50 | (2) 52 |
| (3) 58 | (4) 60 |

**Options :**

1908899257. 1

1908899258. 2

1908899259. 3

1908899260. 4

**Question Number : 41 Question Id : 1908892333 Question Type : MCQ Option Shuffling : No Is Question Mandatory : No**

**Correct Marks : 4 Wrong Marks : 1**



1908899269. 1

1908899270. 2

1908899271. 3

1908899272. 4

**Question Number : 44 Question Id : 1908892336 Question Type : MCQ Option Shuffling : No Is Question Mandatory : No**

**Correct Marks : 4 Wrong Marks : 1**

The ratio of the cost price and the selling price is 4 : 5. The profit percent is:

(1) 10%

(2) 20%

(3) 25%

(4) 30%

**Options :**

1908899273. 1

1908899274. 2

1908899275. 3

1908899276. 4

**Question Number : 45 Question Id : 1908892337 Question Type : MCQ Option Shuffling : No Is Question Mandatory : No**

**Correct Marks : 4 Wrong Marks : 1**

A does a work in 10 days and B does the same work in 15 days. In how many days they together will do the same work ?

(1) 5 days

(2) 6 days

(3) 8 days

(4) 9 days

**Options :**

1908899277. 1

1908899278. 2

1908899279. 3

1908899280. 4

**Question Number : 46 Question Id : 1908892338 Question Type : MCQ Option Shuffling : No Is Question Mandatory : No**

**Correct Marks : 4 Wrong Marks : 1**

The difference between the length and breadth of a rectangle is 23 m. If its perimeter is 206 m, then its area is:

- (1)  $1520 m^2$  (2)  $2420 m^2$   
(3)  $2480 m^2$  (4)  $2520 m^2$

**Options :**

1908899281. 1

1908899282. 2

1908899283. 3

1908899284. 4

**Question Number : 47 Question Id : 1908892339 Question Type : MCQ Option Shuffling : No Is Question Mandatory : No**

**Correct Marks : 4 Wrong Marks : 1**

The capacity of a tank of dimensions (8 m x 6 m x 2.5 m) is:

- (1) 120 litres (2) 1200 litres  
(3) 12000 litres (4) 120000 litres

**Options :**

1908899285. 1

1908899286. 2

1908899287. 3

1908899288. 4

**Question Number : 48 Question Id : 1908892340 Question Type : MCQ Option Shuffling : No Is Question Mandatory : No**

**Correct Marks : 4 Wrong Marks : 1**

Find the surface area of a 10 cm x 4 cm x 3 cm brick.

- (1) 84 sq. cm (2) 124 sq. cm  
(3) 164 sq. cm (4) 180 sq. cm

**Options :**

1908899289. 1

1908899290. 2

1908899291. 3

1908899292. 4

**Question Number : 49 Question Id : 1908892341 Question Type : MCQ Option Shuffling : No Is**

**Question Mandatory : No**

**Correct Marks : 4 Wrong Marks : 1**

The area of the base of a rectangular tank is  $6500 \text{ cm}^2$  and the volume of water contained in it is 2.6 cubic meters. The depth of water in the tank is:

- (1) 3.5 m (2) 4 m  
(3) 5 m (4) 6 m

**Options :**

1908899293. 1

1908899294. 2

1908899295. 3

1908899296. 4

**Question Number : 50 Question Id : 1908892342 Question Type : MCQ Option Shuffling : No Is**

**Question Mandatory : No**

**Correct Marks : 4 Wrong Marks : 1**

The perimeter of one face of a cube is 20 cm. Its volume must be:

- (1)  $125 \text{ cm}^3$  (2)  $400 \text{ cm}^3$   
(3)  $1000 \text{ cm}^3$  (4)  $8000 \text{ cm}^3$

**Options :**

1908899297. 1

1908899298. 2

1908899299. 3

1908899300. 4

**Question Number : 51 Question Id : 1908892343 Question Type : MCQ Option Shuffling : No Is**

**Question Mandatory : No**

**Correct Marks : 4 Wrong Marks : 1**

In each of the following questions, a statement is given followed by some conclusions. Choose the conclusion which logically follows from the given statement.

**Statement:**

All scientists working in America are talented. Some Indian scientists are working in America.

**Conclusions:**

A. None of Indian scientists is talented.

B. Some talented Indian scientists have migrated to America.

C. All talented scientists are Indians.

D. Some Indian scientists are talented.

The conclusion(s) correctly drawn is/are

(1) B and C

(2) A only

(3) B and D

(4) B only

**Options :**

1908899301. 1

1908899302. 2

1908899303. 3

1908899304. 4

**Question Number : 52 Question Id : 1908892344 Question Type : MCQ Option Shuffling : No Is**

**Question Mandatory : No**

**Correct Marks : 4 Wrong Marks : 1**



In each of the following questions, a statement is given followed by some conclusions. Choose the conclusion which logically follows from the given statement.

**Statement:**

Few shops on this road have neon lights, but they all have signboards.

**Conclusions:**

- A. Some shops have either signboards or neon lights.
- B. Some shops have both signboards and neon lights.
- C. Some shops have no neon lights.
- D. Some shops have no signboards.

The conclusion(s) correctly drawn is/are

- |             |             |
|-------------|-------------|
| (1) A alone | (2) A and D |
| (3) B alone | (4) B and C |

**Options :**

1908899305. 1

1908899306. 2

1908899307. 3

1908899308. 4

**Question Number : 53 Question Id : 1908892345 Question Type : MCQ Option Shuffling : No Is Question Mandatory : No**

**Correct Marks : 4 Wrong Marks : 1**

In each of the following questions, a statement is given followed by some conclusions. Choose the conclusion which logically follows from the given statement.

**Statement:**

Amit and Subhash are friends. Subhash is friendly with all. Amit has many enemies. Rahul and Amit do not like each other.

**Conclusions:**

- A. Amit, Rahul and Subhash form a clique.
- B. Rahul and Subhash are friends.
- C. Subhash is friendly with Amit's friends.
- D. Amit and Rahul are both friends of Subhash.

The conclusion(s) correctly drawn is/are

- |             |                |
|-------------|----------------|
| (1) C and D | (2) B and C    |
| (3) A and B | (4) B, C and D |

**Options :**

1908899309. 1

1908899310. 2

1908899311. 3

1908899312. 4

**Question Number : 54 Question Id : 1908892346 Question Type : MCQ Option Shuffling : No Is**

**Question Mandatory : No**

**Correct Marks : 4 Wrong Marks : 1**

In each of the following questions, a statement is given followed by some conclusions. Choose the conclusion which logically follows from the given statement.

Statement:

All watches sold in that shop are of high standard; some of the HMT watches are sold in that shop.

Conclusion:

- A. All watches of high standard were manufactured by HMT.
- B. Some of the HMT watches are of high standard.
- C. None of the HMT watches is of high standard.
- D. Some of the HMT watches of high standard are sold in that shop.

The conclusion(s) correctly drawn is/are

- (1) A and B
- (2) A and C
- (3) B and D
- (4) A and D

**Options :**

1908899313. 1

1908899314. 2

1908899315. 3

1908899316. 4

**Question Number : 55 Question Id : 1908892347 Question Type : MCQ Option Shuffling : No Is Question Mandatory : No**

**Correct Marks : 4 Wrong Marks : 1**

In each of the following questions, a statement is given followed by some conclusions. Choose the conclusion which logically follows from the given statement.

Statement:

A wise man saves for a rainy day. A rainy day signifies adversity.

Conclusions:

- A. A fool squanders everything.
- B. A wise man is likely to get into adversity.
- C. A clear day signifies prosperity

The conclusion(s) correctly drawn is/are

- (1) A only
- (2) A and B
- (3) B only
- (4) A and C

**Options :**

1908899317. 1

1908899318. 2

1908899319. 3

1908899320. 4

**Sub-Section Number :** 4**Sub-Section Id :** 19088987**Question Shuffling Allowed :** Yes**Question Id : 1908892348 Question Type : COMPREHENSION Sub Question Shuffling Allowed :****Yes Group Comprehension Questions : No****Question Numbers : (56 to 60)**

Question Label : Comprehension

A school has four sections A, B, C, D of class IX students. The results of half-yearly and annual examinations are shown in the table given below. Answer the questions based on this table.

Result	Number of Students			
	Section A	Section B	Section C	Section D
Student failed in both Exams	28	23	17	27
Students failed in half-yearly but passed in annual exams	14	12	8	13
Students passed in half-yearly but failed in annual exams	6	17	9	15
Students passed in both exams	64	55	46	76

**Sub questions****Question Number : 56 Question Id : 1908892349 Question Type : MCQ Option Shuffling : No Is****Question Mandatory : No****Correct Marks : 4 Wrong Marks : 1**

How many students are there in class IX in the School ?

(1) 336

(2) 189

(3) 335

(4) 430

**Options :**

1908899321. 1

1908899322. 2

1908899323. 3

1908899324. 4

**Question Number : 57 Question Id : 1908892350 Question Type : MCQ Option Shuffling : No Is Question Mandatory : No**

**Correct Marks : 4 Wrong Marks : 1**

Which section has the minimum failure rate in half-yearly examination ?

- (1) A (2) B  
(3) C (4) D

**Options :**

1908899325. 1

1908899326. 2

1908899327. 3

1908899328. 4

**Question Number : 58 Question Id : 1908892351 Question Type : MCQ Option Shuffling : No Is Question Mandatory : No**

**Correct Marks : 4 Wrong Marks : 1**

Which section has the maximum success rate in annual examination ?

- (1) A (2) B  
(3) C (4) D

**Options :**

1908899329. 1

1908899330. 2

1908899331. 3

1908899332. 4

**Question Number : 59 Question Id : 1908892352 Question Type : MCQ Option Shuffling : No Is Question Mandatory : No**

**Correct Marks : 4 Wrong Marks : 1**

Which section has the maximum pass percentage in at least one of the two examinations?

- (1) A (2) B  
(3) C (4) D

**Options :**

1908899333. 1

1908899334. 2

1908899335. 3

1908899336. 4

**Question Number : 60 Question Id : 1908892353 Question Type : MCQ Option Shuffling : No Is**

**Question Mandatory : No**

**Correct Marks : 4 Wrong Marks : 1**

If the number of students passing an examination be considered a criteria for comparison of difficulty level of two examinations, which of the following statements is true in this context ?

- (1) Half-yearly examinations were more difficult.  
(2) Annual examinations were more difficult  
(3) Both the examinations had almost the same difficulty level  
(4) For students of section A and B, the annual examinations seem to be more difficult as compared to the half-yearly examinations

**Options :**

1908899337. 1

1908899338. 2

1908899339. 3

1908899340. 4

**Sub-Section Number :** 5

**Sub-Section Id :** 19088988

**Question Shuffling Allowed :** Yes

**Question Id : 1908892354 Question Type : COMPREHENSION Sub Question Shuffling Allowed :**

**Yes Group Comprehension Questions : No**

**Question Numbers : (61 to 65)**

Question Label : Comprehension

The following table gives the sales of batteries manufactured by a company over the years. Study the table and answer the questions that follow:

Number of different types of batteries sold by a company over the years  
(numbers in thousands)

Year	TYPES OF BATTERIES					
	4AH	7AH	32AH	35AH	55AH	Total
1992	75	144	114	102	108	543
1993	90	126	102	84	126	528
1994	96	114	75	105	135	525
1995	105	90	150	90	75	510
1996	90	75	135	75	90	465
1997	105	60	165	45	120	495
1998	115	85	160	100	145	605

**Sub questions****Question Number : 61 Question Id : 1908892355 Question Type : MCQ Option Shuffling : No Is****Question Mandatory : No****Correct Marks : 4 Wrong Marks : 1**

The total sales of all the seven years are the maximum for which battery?

- (1) 4AH (2) 7AH  
(3) 32AH (4) 35AH

**Options :**

1908899341. 1

1908899342. 2

1908899343. 3

1908899344. 4

**Question Number : 62 Question Id : 1908892356 Question Type : MCQ Option Shuffling : No Is****Question Mandatory : No****Correct Marks : 4 Wrong Marks : 1**

What is the difference in the number of 35AH batteries sold in 1993 and 1997?

- (1) 24000 (2) 28000  
(3) 35000 (4) 39000

**Options :**

1908899345. 1  
1908899346. 2  
1908899347. 3  
1908899348. 4

**Question Number : 63 Question Id : 1908892357 Question Type : MCQ Option Shuffling : No Is Question Mandatory : No**

**Correct Marks : 4 Wrong Marks : 1**

The percentage of 4AH batteries sold to the total number of batteries sold was maximum in the year:

- (1) 1994 (2) 1995  
(3) 1996 (4) 1997

**Options :**

1908899349. 1  
1908899350. 2  
1908899351. 3  
1908899352. 4

**Question Number : 64 Question Id : 1908892358 Question Type : MCQ Option Shuffling : No Is Question Mandatory : No**

**Correct Marks : 4 Wrong Marks : 1**

In case of which battery there was a continuous decrease in sales from 1992 to 1997 ?

- (1) 4AH (2) 7AH  
(3) 32AH (4) 35AH

**Options :**

1908899353. 1



1908899354. 2

1908899355. 3

1908899356. 4

**Question Number : 65 Question Id : 1908892359 Question Type : MCQ Option Shuffling : No Is**

**Question Mandatory : No**

**Correct Marks : 4 Wrong Marks : 1**

What was the approximate percentage increase in the sales of 55AH batteries in 1998 compared to that in 1992 ?

(1) 28%

(2) 31%

(3) 33%

(4) 34%

**Options :**

1908899357. 1

1908899358. 2

1908899359. 3

1908899360. 4

**Sub-Section Number :** 6

**Sub-Section Id :** 19088989

**Question Shuffling Allowed :** Yes

**Question Id : 1908892360 Question Type : COMPREHENSION Sub Question Shuffling Allowed :**

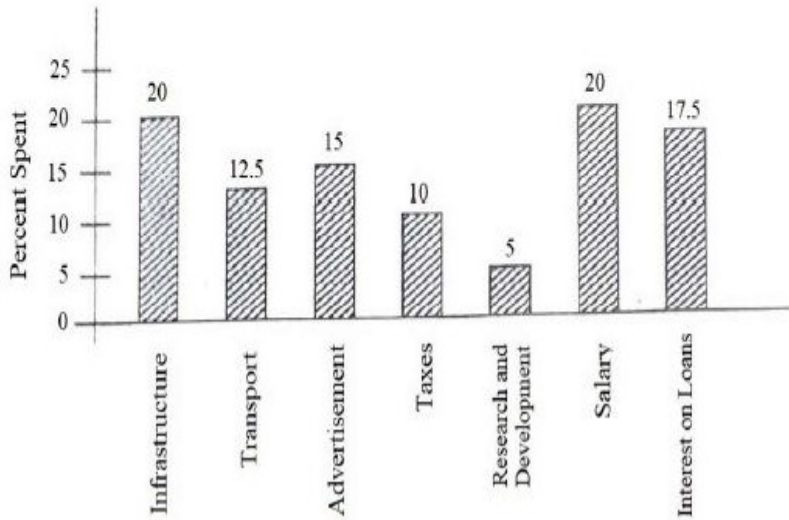
**Yes Group Comprehension Questions : No**

**Question Numbers : (66 to 70)**

Question Label : Comprehension

The bar graph given below shows the percentage distribution of total expenditures of a company under various expense heads during 2013. Study the graph and answer the questions that follow:

Percentage Distribution of Total Expenditures of a Company



### Sub questions

Question Number : 66 Question Id : 1908892361 Question Type : MCQ Option Shuffling : No Is Question Mandatory : No

Correct Marks : 4 Wrong Marks : 1

The expenditure on the interest on loans is by what percent more than the expenditures on transport ?

- (1) 5% (2) 10%  
(3) 20% (4) 40%

### Options :

1908899361. 1  
1908899362. 2  
1908899363. 3  
1908899364. 4

Question Number : 67 Question Id : 1908892362 Question Type : MCQ Option Shuffling : No Is Question Mandatory : No

Correct Marks : 4 Wrong Marks : 1

What is the ratio of the total expenditure on infrastructure and transport to the total expenditure on taxes and interest on loans ?

- (1) 5 : 4 (2) 8 : 7  
(3) 13 : 11 (4) 9 : 7

**Options :**

1908899365. 1  
1908899366. 2  
1908899367. 3  
1908899368. 4

**Question Number : 68 Question Id : 1908892363 Question Type : MCQ Option Shuffling : No Is Question Mandatory : No**

**Correct Marks : 4 Wrong Marks : 1**

If the expenditure on advertisement is Rs. 2.10 crores then the difference between the expenditure on transport and taxes is :

- (1) Rs. 1.25 crores (2) Rs. 95 lakhs  
(3) Rs. 65 lakhs (4) Rs. 35 lakhs

**Options :**

1908899369. 1  
1908899370. 2  
1908899371. 3  
1908899372. 4

**Question Number : 69 Question Id : 1908892364 Question Type : MCQ Option Shuffling : No Is Question Mandatory : No**

**Correct Marks : 4 Wrong Marks : 1**

The total amount of expenditure of the company is how many times the expenditure on research and development ?

- (1) 27 (2) 20  
(3) 18 (4) 8

**Options :**

1908899373. 1

1908899374. 2

1908899375. 3

1908899376. 4

**Question Number : 70 Question Id : 1908892365 Question Type : MCQ Option Shuffling : No Is**

**Question Mandatory : No**

**Correct Marks : 4 Wrong Marks : 1**

If the interest on loans amounted to Rs. 2.45 crores then the total amount of expenditure on advertisement, taxes, and research and development is:

- (1) Rs. 7 crores (2) Rs. 5.4 crores  
(3) Rs. 4.2 crores (4) Rs. 3 crores

**Options :**

1908899377. 1

1908899378. 2

1908899379. 3

1908899380. 4

**Sub-Section Number :** 7

**Sub-Section Id :** 19088990

**Question Shuffling Allowed :** Yes

**Question Id : 1908892366 Question Type : COMPREHENSION Sub Question Shuffling Allowed :**

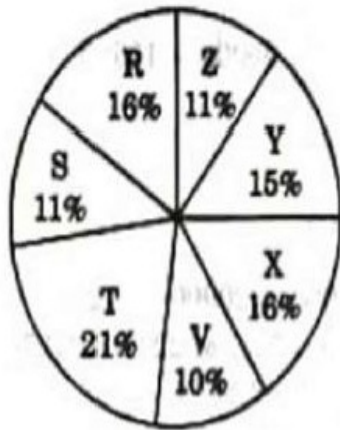
**Yes Group Comprehension Questions : No**

**Question Numbers : (71 to 75)**

**Question Label : Comprehension**

Study the following pie-chart and the table and answer the questions based on them.

### PROPORTION OF POPULATION OF SEVEN VILLAGES IN 1997



Village	% Population Below Poverty Line
X	38
Y	52
Z	42
R	51
S	49
T	46
V	58

#### Sub questions

Question Number : 71 Question Id : 1908892367 Question Type : MCQ Option Shuffling : No Is Question Mandatory : No

Correct Marks : 4 Wrong Marks : 1

Find the population of village S if the population of village X below poverty line in 1997 is 12160.

- (1) 18500 (2) 20500  
(3) 22000 (4) 26000

#### Options :

1908899381. 1  
1908899382. 2  
1908899383. 3  
1908899384. 4

Question Number : 72 Question Id : 1908892368 Question Type : MCQ Option Shuffling : No Is Question Mandatory : No

Correct Marks : 4 Wrong Marks : 1

The ratio of population of village T below poverty line to that of village Z below poverty line in 1997 is :

- (1) 11: 23 (2) 23 : 11  
(3) 13: 11 (4) 11: 13

**Options :**

1908899385. 1

1908899386. 2

1908899387. 3

1908899388. 4

**Question Number : 73 Question Id : 1908892369 Question Type : MCQ Option Shuffling : No Is**

**Question Mandatory : No**

**Correct Marks : 4 Wrong Marks : 1**

If the population of village R in 1997 is 32000, then what will be the population of Village Y below poverty line in that year ?

- (1) 14100 (2) 17000  
(3) 16500 (4) 15600

**Options :**

1908899389. 1

1908899390. 2

1908899391. 3

1908899392. 4

**Question Number : 74 Question Id : 1908892370 Question Type : MCQ Option Shuffling : No Is**

**Question Mandatory : No**

**Correct Marks : 4 Wrong Marks : 1**

If in 1998, the population of villages Y and V increases by 10% each and the percentage of population below poverty line remains unchanged for all the villages, then find the population of village V below poverty line in 1998, given that the population of village Y in 1997 was 30000.

- (1) 11250 (2) 12760  
(3) 13140 (4) 13780

**Options :**

1908899393. 1

1908899394. 2

1908899395. 3

1908899396. 4

**Question Number : 75 Question Id : 1908892371 Question Type : MCQ Option Shuffling : No Is**

**Question Mandatory : No**

**Correct Marks : 4 Wrong Marks : 1**

If in 1999, the population of village R increases by 10% while that of village Z reduces by 5% compared to that in 1997 and the percentage of population below poverty line remains unchanged for all the villages, then find the approximate ratio of population of village R below poverty line to the ratio of population of village Z below poverty line for the year 1999.

(1) 2 : 1

(2) 3 : 2

(3) 4 : 3

(4) 5 : 4

**Options :**

1908899397. 1

1908899398. 2

1908899399. 3

1908899400. 4

**Sub-Section Number :** 8

**Sub-Section Id :** 19088991

**Question Shuffling Allowed :** Yes

**Question Number : 76 Question Id : 1908892372 Question Type : MCQ Option Shuffling : No Is**

**Question Mandatory : No**

**Correct Marks : 4 Wrong Marks : 1**

Choose the missing term out of the given alternatives.

AZ, BY, CX, ?

(1) EF

(2) GH

(3) IJ

(4) DW

**Options :**

1908899401. 1

1908899402. 2

1908899403. 3

1908899404. 4

**Question Number : 77 Question Id : 1908892373 Question Type : MCQ Option Shuffling : No Is Question Mandatory : No**

**Correct Marks : 4 Wrong Marks : 1**

Choose the missing term out of the given alternatives.

AZ, GT, MN, ?, YB

(1) KF

(2) RX

(3) SH

(4) TS

**Options :**

1908899405. 1

1908899406. 2

1908899407. 3

1908899408. 4

**Question Number : 78 Question Id : 1908892374 Question Type : MCQ Option Shuffling : No Is Question Mandatory : No**

**Correct Marks : 4 Wrong Marks : 1**

Choose the missing term out of the given alternatives.

O TE, PUF, QVG, RWH, ?

(1) SYJ

(2) TXI

(3) SXJ

(4) SXI

**Options :**

1908899409. 1

1908899410. 2

1908899411. 3

1908899412. 4



**Question Number : 79 Question Id : 1908892375 Question Type : MCQ Option Shuffling : No Is Question Mandatory : No**

**Correct Marks : 4 Wrong Marks : 1**

Choose the missing term out of the given alternatives.

CAT, FDW, IGZ, ?

(1) KJA

(2) KTC

(3) LJC

(4) LHD

**Options :**

1908899413. 1

1908899414. 2

1908899415. 3

1908899416. 4

**Question Number : 80 Question Id : 1908892376 Question Type : MCQ Option Shuffling : No Is Question Mandatory : No**

**Correct Marks : 4 Wrong Marks : 1**

Choose the missing term out of the given alternatives.

BEH, KNQ, TWZ, ?

(1) IJL

(2) CFI

(3) BDF

(4) ADG

**Options :**

1908899417. 1

1908899418. 2

1908899419. 3

1908899420. 4

**Question Number : 81 Question Id : 1908892377 Question Type : MCQ Option Shuffling : No Is Question Mandatory : No**

**Correct Marks : 4 Wrong Marks : 1**

If white is called blue, blue is called red, red is called yellow, yellow is called green, green is called black, black is called violet and violet is called orange, what would be the colour of human blood ?

- |            |            |
|------------|------------|
| (1) Red    | (2) Green  |
| (3) Yellow | (4) Violet |

**Options :**

1908899421. 1

1908899422. 2

1908899423. 3

1908899424. 4

**Question Number : 82 Question Id : 1908892378 Question Type : MCQ Option Shuffling : No Is**

**Question Mandatory : No**

**Correct Marks : 4 Wrong Marks : 1**

If room is called bed, bed is called window, window is called flower and flower is called cooler, on what would a man sleep ?

- |            |            |
|------------|------------|
| (1) Window | (2) Bed    |
| (3) Flower | (4) Cooler |

**Options :**

1908899425. 1

1908899426. 2

1908899427. 3

1908899428. 4

**Question Number : 83 Question Id : 1908892379 Question Type : MCQ Option Shuffling : No Is**

**Question Mandatory : No**

**Correct Marks : 4 Wrong Marks : 1**

A woman introduces a man as the son of the brother of her mother. How is the man related to the woman ?

- (1) Nephew
- (3) Cousin

- (2) Uncle
- (4) Son

**Options :**

1908899429. 1

1908899430. 2

1908899431. 3

1908899432. 4

**Question Number : 84 Question Id : 1908892380 Question Type : MCQ Option Shuffling : No Is Question Mandatory : No**

**Correct Marks : 4 Wrong Marks : 1**

If X is the brother of the son of Y's son, how is X related to Y ?

(1) Son

(2) Brother

(3) Cousin

(4) Grandson

**Options :**

1908899433. 1

1908899434. 2

1908899435. 3

1908899436. 4

**Sub-Section Number :** 9

**Sub-Section Id :** 19088992

**Question Shuffling Allowed :** Yes

**Question Id : 1908892381 Question Type : COMPREHENSION Sub Question Shuffling Allowed : Yes Group Comprehension Questions : No**

**Question Numbers : (85 to 89)**

**Question Label : Comprehension**

Read the following information and answer the questions based on it:

In a school, there were five teachers. A and B were teaching Hindi and English. C and B were teaching English and Geography. D and A were teaching Mathematics and Hindi. E and B were teaching History and French.

### Sub questions

Question Number : 85 Question Id : 1908892382 Question Type : MCQ Option Shuffling : No Is

Question Mandatory : No

Correct Marks : 4 Wrong Marks : 1

Who among the teachers was teaching maximum number of subjects?

- |       |       |
|-------|-------|
| (1) A | (2) B |
| (3) C | (4) D |

### Options :

1908899437. 1

1908899438. 2

1908899439. 3

1908899440. 4

Question Number : 86 Question Id : 1908892383 Question Type : MCQ Option Shuffling : No Is

Question Mandatory : No

Correct Marks : 4 Wrong Marks : 1

Which of the following pairs was teaching both Geography and Hindi?

- |             |                   |
|-------------|-------------------|
| (1) A and B | (2) B and C       |
| (3) C and A | (4) None of these |

### Options :

1908899441. 1

1908899442. 2

1908899443. 3

1908899444. 4

Question Number : 87 Question Id : 1908892384 Question Type : MCQ Option Shuffling : No Is

Question Mandatory : No

**Correct Marks : 4 Wrong Marks : 1**

More than two teachers were teaching which subject?

- (1) History (2) Hindi  
(3) French (4) Geography

**Options :**

1908899445. 1

1908899446. 2

1908899447. 3

1908899448. 4

**Question Number : 88 Question Id : 1908892385 Question Type : MCQ Option Shuffling : No Is Question Mandatory : No**

**Correct Marks : 4 Wrong Marks : 1**

D, B and A were teaching which of the following subjects?

- (1) English only (2) Hindi and English  
(3) Hindi only (4) English and Geography

**Options :**

1908899449. 1

1908899450. 2

1908899451. 3

1908899452. 4

**Question Number : 89 Question Id : 1908892386 Question Type : MCQ Option Shuffling : No Is Question Mandatory : No**

**Correct Marks : 4 Wrong Marks : 1**

Who among the teachers was teaching less than two subjects?

- (1) A (2) B  
(3) D (4) There is no such teacher

**Options :**

1908899453. 1

1908899454. 2

1908899455. 3

1908899456. 4

**Sub-Section Number :** 10  
**Sub-Section Id :** 19088993  
**Question Shuffling Allowed :** Yes

**Question Id : 1908892387 Question Type : COMPREHENSION Sub Question Shuffling Allowed :  
Yes Group Comprehension Questions : No**

**Question Numbers : (90 to 94)**

Question Label : Comprehension

Study the given information carefully and answer the questions that follow:

- (i) A, B, C, D, E, F and G are sitting on a wall and all of them are facing east.
- (ii) C is on the immediate right of D.
- (iii) B is at an extreme end and has E as his neighbor.
- (iv) G is between E and F.
- (v) D is sitting third from the south end.

**Sub questions**

**Question Number : 90 Question Id : 1908892388 Question Type : MCQ Option Shuffling : No Is  
Question Mandatory : No**

**Correct Marks : 4 Wrong Marks : 1**

Who is sitting to the right of E?

- (1) A
- (2) C
- (3) D
- (4) None of these

**Options :**

1908899457. 1

1908899458. 2

1908899459. 3

1908899460. 4

**Question Number : 91 Question Id : 1908892389 Question Type : MCQ Option Shuffling : No Is**

**Question Mandatory : No**

**Correct Marks : 4 Wrong Marks : 1**

Which of the following pairs of people are sitting at the extreme ends?

- |        |        |
|--------|--------|
| (1) AB | (2) AF |
| (3) CB | (4) FB |

**Options :**

1908899461. 1

1908899462. 2

1908899463. 3

1908899464. 4

**Question Number : 92 Question Id : 1908892390 Question Type : MCQ Option Shuffling : No Is**

**Question Mandatory : No**

**Correct Marks : 4 Wrong Marks : 1**

Name the person who should change places with C such that he gets the third place from the north end.

- |       |       |
|-------|-------|
| (1) E | (2) F |
| (3) G | (4) D |

**Options :**

1908899465. 1

1908899466. 2

1908899467. 3

1908899468. 4

**Question Number : 93 Question Id : 1908892391 Question Type : MCQ Option Shuffling : No Is**

**Question Mandatory : No**

**Correct Marks : 4 Wrong Marks : 1**

Immediately between which of the following pairs of people is D sitting?

- |        |        |
|--------|--------|
| (1) AC | (2) AF |
| (3) CE | (4) CF |

**Options :**

1908899469. 1

1908899470. 2

1908899471. 3

1908899472. 4

**Question Number : 94 Question Id : 1908892392 Question Type : MCQ Option Shuffling : No Is Question Mandatory : No**

**Correct Marks : 4 Wrong Marks : 1**

Which of the conditions (i) to (v) given above is not required to find out the place in which A is sitting ?

- (1) (i) (2) (ii)  
(3) (iii) (4) All are required

**Options :**

1908899473. 1

1908899474. 2

1908899475. 3

1908899476. 4

**Sub-Section Number :** 11

**Sub-Section Id :** 19088994

**Question Shuffling Allowed :** Yes

**Question Number : 95 Question Id : 1908892393 Question Type : MCQ Option Shuffling : No Is Question Mandatory : No**

**Correct Marks : 4 Wrong Marks : 1**

Compare the knowledge of persons X, Y, Z, A, B and C in relation to each other

- (i) X knows more than A  
(ii) Y knows as much as B  
(iii) Z knows less than C  
(iv) A knows more than Y

The best knowledgeable person amongst all is

- (1) X (2) Y  
(3) A (4) C



**Options :**

1908899477. 1

1908899478. 2

1908899479. 3

1908899480. 4

**Question Number : 96 Question Id : 1908892394 Question Type : MCQ Option Shuffling : No Is Question Mandatory : No**

**Correct Marks : 4 Wrong Marks : 1**

Ashish is heavier than Govind. Mohit is lighter than Jack. Pawan is heavier than Jack but lighter than Govind. Who among them is the heaviest ?

(1) Govind

(2) Jack

(3) Pawan

(4) Ashish

**Options :**

1908899481. 1

1908899482. 2

1908899483. 3

1908899484. 4

**Question Number : 97 Question Id : 1908892395 Question Type : MCQ Option Shuffling : No Is Question Mandatory : No**

**Correct Marks : 4 Wrong Marks : 1**

Pune is bigger than Jhansi, Sitapur is bigger than Chittor. Raigarh is not as big as Jhansi, but is bigger than Sitapur. Which is the smallest?

(1) Pune

(2) Jhansi

(3) Sitapur

(4) Chittor

**Options :**

1908899485. 1


1908899486. 2

1908899487. 3


**Question Number : 98 Question Id : 1908892396 Question Type : MCQ Option Shuffling : No Is Question Mandatory : No**

**Correct Marks : 4 Wrong Marks : 1**

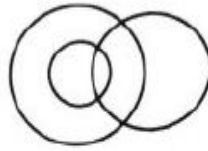
Which of the following diagrams correctly represents Elephants, Wolves, Animals?



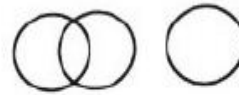
(A)



(B)



(C)



(D)

(1) A

(2) B

(3) C

(4) D

**Options :**

1908899489. 1

1908899490. 2

1908899491. 3

1908899492. 4

**Question Number : 99 Question Id : 1908892397 Question Type : MCQ Option Shuffling : No Is Question Mandatory : No**

**Correct Marks : 4 Wrong Marks : 1**

In a certain code, '37' means 'which class' and '583' means 'caste and class'. What is the code for 'caste'?

(1) 3

(2) 7

(3) 8

(4) Either 5 or 8

**Options :**

1908899493. 1

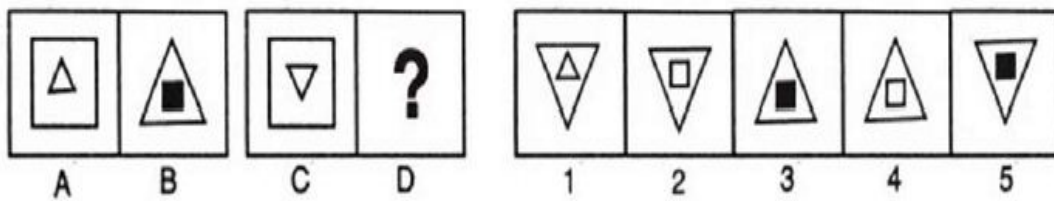
1908899494. 2

1908899495. 3

**Question Number : 100 Question Id : 1908892398 Question Type : MCQ Option Shuffling : No Is Question Mandatory : No**

**Correct Marks : 4 Wrong Marks : 1**

The following question consists of two sets of figures. Figures A, B, C and D constitute the *Problem Set*, while figures 1, 2, 3, 4 and 5 constitute the *Answer Set*. There is a definite relationship between figures A and B. Establish a similar relationship between figures C and D by choosing a suitable figure for D from the *Answer Set*.



(1) 1

(2) 2

(3) 3

(4) 5

**Options :**

1908899497.1

1908899498.2

1908899499.3

1908899500.4