

Resonance[®]
Educating for better tomorrow

JEE (Main) PAPER-1 (B.E./B. TECH.)

2023

COMPUTER BASED TEST (CBT) Memory Based Questions & Solutions

Date: 01 February, 2023 (SHIFT-2) | TIME : (3.00 p.m. to 6.00 p.m)
Duration: 3 Hours | Max. Marks: 300

SUBJECT: PHYSICS

Resonance Eduventures Ltd.
Reg. Office & Corp. Office : CG Tower, A-46 & 52, IPIA, Near City Mall, Jhalawar Road, Kota (Raj.) - 324005
Ph. No.: +91-744-2777777, 2777700 | FAX No. : +91-022-39167222
To Know more : sms RESO at 56677 | Website : www.resonance.ac.in | E-mail : contact@resonance.ac.in | CIN : U80302RJ2007PLC024029
Toll Free : 1800 258 5555 | 7340010333 | [facebook.com/ResonanceEd](https://www.facebook.com/ResonanceEd) | twitter.com/ResonanceEd | www.youtube.com/reswatch | [blogs.resonance.ac.in](https://www.blogs.resonance.ac.in)

This solution was download from Resonance JEE (MAIN) 2023 Solution portal

| JEE (MAIN) 2023 | DATE : 01-02-2023 (SHIFT-2) | PAPER-1 | MEMORY BASED | PHYSICS

1. Two objects O_1 & O_2 are placed on principal axis of concave mirror as shown. Find out the separation between images of both objects :

- (1) 120 cm (2) 40 cm (3) 160 cm (4) 60 cm

Ans. (3)

Sol. $\frac{1}{V} + \frac{1}{u} = \frac{1}{f}$

From O_1

$u = -15 \text{ cm}, f = -20 \text{ cm}$

$\frac{1}{V_1} - \frac{1}{15} = -\frac{1}{20} \Rightarrow \frac{1}{V_1} = \frac{1}{15} - \frac{1}{20} = \frac{4-3}{60} = \frac{1}{60}$

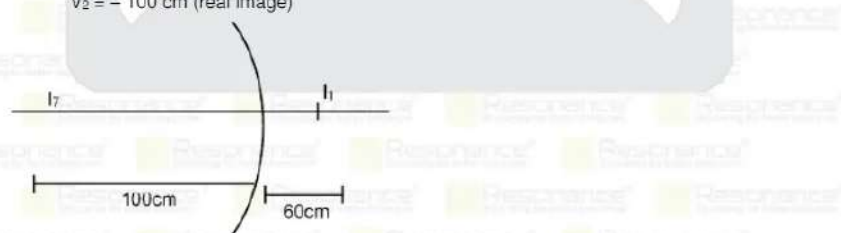
$V_1 = 60 \text{ cm}$ (virtual image)

For O_2

$u = -25 \text{ cm}, f = -20 \text{ cm}$

$\frac{1}{V_2} - \frac{1}{25} = -\frac{1}{20} \Rightarrow \frac{1}{V_2} = \frac{1}{25} - \frac{1}{20} = \frac{4-5}{100} = -\frac{1}{100}$

$V_2 = -100 \text{ cm}$ (real image)



Separation = 160

Resonance Eduventures Ltd.

Reg. Office & Corp. Office : CG Tower, A-46 & 52, IPIA, Near City Mall, Jhalawar Road, Kota (Raj.) - 324005

Ph. No.: +91-744-2777777, 2777700 | FAX No. : +91-022-39167222

To Know more : sms RESO at 56677 | Website : www.resonance.ac.in | E-mail : contact@resonance.ac.in | CIN : U80302RJ2007PLC024029
Toll Free : 1800 258 5555 | 7340010333 | facebook.com/ResonanceEdu | twitter.com/ResonanceEdu | www.youtube.com/resonance | blog.resonance.ac.in

This solution was download from Resonance JEE (MAIN) 2023 Solution portal

PAGE # 1

| JEE (MAIN) 2023 | DATE : 01-02-2023 (SHIFT-2) | PAPER-1 | MEMORY BASED | PHYSICS

2. If $F = (3y^2 + y)N$ force acting on a particle along y direction then work done by force from $y = 2$ to $y = 5$:

- (1) 200J (2) 300J (3) 127.5J (4) 100J

Ans. (3)

Ans.

$w = \int dy$

$w =$

$w =$

$= [125 + \dots - 8 - 2] = 115 + \dots = 127.5J$

3. A stone is projected from ground at some angle, at highest point of its path -

- (1) Vertical component of velocity is maximum (2) Horizontal component of velocity is zero.
(3) Gravitational potential energy is maximum (4) Kinetic energy is half of maximum possible value.

Ans. (3)

Sol.

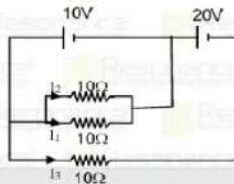
At maximum height
 $V_y = 0$
 $V_x = u \cos \theta$
 potential energy = mgH_{\max}

Resonance Eduventures Ltd.

Reg. Office & Corp. Office : CG Tower, A-46 & 52, IPIA, Near City Mall, Jhalawar Road, Kota (Raj.) - 324005
 Ph. No.: +91-744-2777777, 2777700 | FAX No. : +91-022-39167222
 To Know more : sms RESO at 56677 | Website : www.resonance.ac.in | E-mail : contact@resonance.ac.in | CIN : U80302RJ2007PLC024029
 7340010333

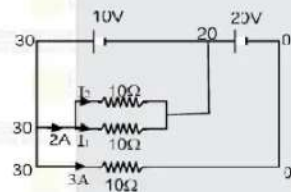
This solution was download from Resonance JEE (MAIN) 2023 Solution portal PAGE # 2

4. Find $\frac{I_1 + I_3}{I_2}$ from given electrical circuit :



- (1) 2 (2) 4 (3) 6 (4) 1


Ans. (2)
 Sol.



$I_2 = 1A$
 $I_1 = 1A$
 $I_3 = 3A$
 $\frac{I_1 + I_3}{I_2} = \frac{1+3}{1} = 4$

5. 0.25J energy is stored in a spring when it is stretched by 10 cm then find spring constant (N/m)
 (1) 50 (2) 70 (3) 75 (4) 100

Ans. (1)
 Sol.



$$\Rightarrow \frac{1}{2}kx^2 = 0.25$$

$$\Rightarrow \frac{1}{2} \times k \times (0.1)^2 = 0.25$$

$$k = \frac{0.5}{0.1 \times 0.1} = 50 \text{ N/m}$$

Resonance Eduventures Ltd.

Reg. Office & Corp. Office : CG Tower, A-46 & 52, IPIA, Near City Mall, Jhalawar Road, Kota (Raj.) - 324005

Ph. No.: +91-744-2777777, 2777700 | FAX No. : +91-022-39167222

To Know more : sms RESO at 56677 | Website : www.resonance.ac.in | E-mail : contact@resonance.ac.in | CIN : U80302RJ2007PLC024029

Toll Free : 1800 258 5555 | 7340010333 | facebook.com/Resonanceedu | twitter.com/Resonanceedu | www.youtube.com/reswatch | blog.resonance.ac.in

This solution was download from Resonance JEE (MAIN) 2023 Solution portal

PAGE # 3

| JEE (MAIN) 2023 | DATE : 01-02-2023 (SHIFT-2) | PAPER-1 | MEMORY BASED | PHYSICS

6. A train moving with speed 20m/s applies brakes to stop at a station when train is 500m away from the station. Another train moving with same speed applies brakes with same retardation as previous train. If the train is at a distance of 250 m from station when breaks are applied then velocity of train with which it crosses station will be ?

- (1) 16 m/s (2) 10 m/s (3) 14 m/s (4) 12 m/s

Ans. (3)

Sol. $V^2 - u^2 = 2as$

$$0 - (20)^2 = 2 \times a \times 500$$

$$- \frac{400}{1000} = a \Rightarrow a = -0.4 \text{ m/s}^2$$

(-ve sing tells that direction of acceleration is opposite to direction of velocity)

For train -2

$$V^2 - u^2 = 2as$$

$$v^2 - (20)^2 = 2 \times (-0.4) \times 250$$

$$v^2 = 400 - 200 = 200$$

$$v = \sqrt{200} \text{ m/s} = 10\sqrt{2} \text{ m/s}$$

7. Two planets A and B have radius in the ratio 1 : 3 and ratio of their escape speed from surface is 1 : 2, find the ratio of acceleration due to gravity at their surface :

- (1) 5/6 (2) 3/4 (3) 2/3 (4) 1/3

Ans. (2)

Sol. $v_e = \sqrt{2gR_e}$

$$\frac{v_{e1}}{v_{e2}} = \sqrt{\frac{g_1 R_1}{g_2 R_2}}$$

$$\frac{1}{2} = \sqrt{\frac{g_1 \left(\frac{1}{3}\right)}{g_2 \left(\frac{1}{3}\right)}}$$

$$\frac{1}{4} = \frac{g_1}{g_2} \times \frac{1}{3}$$

$$\frac{g_1}{g_2} = \frac{3}{4}$$

Resonance Eduventures Ltd.

Reg. Office & Corp. Office : CG Tower, A-46 & 52, IPIA, Near City Mall, Jhalawar Road, Kota (Raj.) - 324005

Ph. No.: +91-744-2777777, 2777700 | FAX No. : +91-022-39167222

To Know more : sms RESO at 56677 | Website : www.resonance.ac.in | E-mail : contact@resonance.ac.in | CIN : U80302RJ2007PLC024029

Toll Free : 1800 258 5555 | 7340010333 | facebook.com/Resonanceedu | twitter.com/Resonanceedu | www.youtube.com/reswatch | blog.resonance.ac.in

This solution was download from Resonance JEE (MAIN) 2023 Solution portal

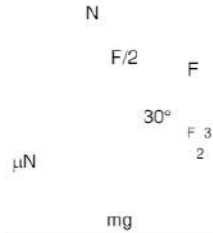
PAGE # 4

8. Find the minimum value of force so that block of mass 10 kg can move

- (1) 25 N (2) 25.23 N (3) 35.5 N (4) 20 N

Ans. (1)

Sol. FBD of the block



$$N = mg - F/2$$

$$f = \mu N = 0.25 \left[100 - \frac{F}{2} \right]$$

Condition so that block can slide

$$F \cos 30^\circ \geq f$$

$$\frac{\sqrt{3}F}{2} \geq 0.25 \left[100 - \frac{F}{2} \right]$$

$$F = \frac{200}{4\sqrt{3} + 1}$$

$$F = 25.23 \text{ N}$$

9. **Statement-1** : A metallic hollow and a metallic solid sphere of same radius charged to a same potential gains different charge.

Statement-2 : Capacitance of a sphere depends upon the radius.

- (1) Statement-1 is True, Statement-2 is True; Statement-2 is a correct explanation for Statement-1.
 (2) Statement-1 is True, Statement-2 is True; Statement-2 is NOT a correct explanation for Statement-1
 (3) Statement-1 is True, Statement-2 is False
 (4) Statement-1 is False, Statement-2 is True

Ans. (4)

Resonance Eduventures Ltd.

Reg. Office & Corp. Office : CG Tower, A-46 & 52, IPIA, Near City Mall, Jhalawar Road, Kota (Raj.) - 324005

Ph. No.: +91-744-2777777, 2777700 | FAX No. : +91-022-39167222

To Know more : sms RESO at 56677 | Website : www.resonance.ac.in | E-mail : contact@resonance.ac.in | CIN : U80302RJ2007PLC024029

Toll Free : 1800 258 5555 7340010333 f /resonanceedu t /resonanceedu www.youtube.com/reswatch b /resonance.ac.in

This solution was download from Resonance JEE (MAIN) 2023 Solution portal

PAGE # 5

10. **Statement-1** : A voltmeter of resistance 400Ω is much better than the voltmeter of resistance 100Ω .

Statement-2 : Current passing through 400Ω voltmeter is lesser as compare to voltmeter of resistance 100Ω .

- (1) Statement-1 is True, Statement-2 is True; Statement-2 is a correct explanation for Statement-1.
 (2) Statement-1 is True, Statement-2 is True; Statement-2 is NOT a correct explanation for Statement-1
 (3) Statement-1 is True, Statement-2 is False
 (4) Statement-1 is False, Statement-2 is True

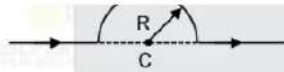
Ans. (1)

11. Find the magnetic field at the centre of semi-circular ring of radius 10^{-7} m when current is 3A :

- (1) 30×10^{-7} T (2) 25×10^{-7} T (3) 45×10^{-7} T (4) 77×10^{-7} T

Ans. (1)

Sol.

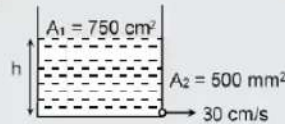


$$B = \frac{\mu_0 i}{4 R}$$

$$= \frac{\mu_0}{4} \times \frac{3 \times 10}{\pi}$$

$$B = 30 \times 10^{-7} \text{ T}$$

12. A tank has hole at bottom. The area of the hole is 500 mm^2 . The tank is filled with water upto height h . The water comes out through hole with speed 30 cm/s . Area of cross-section of tank is 750 cm^2 (shown in figure) then the rate of change at height h of water level in tank is $x \times 10^{-3} \text{ m/s}$ then x will be :



- (1) 4 (2) 3 (3) 2 (4) 1

Ans. (3)

Sol. Using continuity equation

$$A_1 V_1 = A_2 V_2$$

$$750 \text{ cm}^2 \times \frac{dh}{dt} = 500 \times 10^{-2} \text{ cm}^2 \times 30 \text{ cm/s}$$

$$\frac{dh}{dt} = \frac{150}{750} \text{ cm/s} = \frac{1}{5} \text{ cm/s} = 0.2 \text{ cm/s}$$

$$\frac{dh}{dt} = 2 \times 10^{-3} \text{ m/s}$$

$$\text{so } x = 2$$

Resonance Eduventures Ltd.

Reg. Office & Corp. Office : CG Tower, A-46 & 52, IPIA, Near City Mall, Jhalawar Road, Kota (Raj.) - 324005

Ph. No.: +91-744-2777777, 2777700 | FAX No. : +91-022-39167222

To Know more : sms RESO at 56677 | Website: www.resonance.ac.in | E-mail : contact@resonance.ac.in | CIN : U80302RJ2007PLC024029

Toll Free : 1800 258 5555 | 7340010333 | [facebook.com/resonanceedu](https://www.facebook.com/resonanceedu) | twitter.com/resonanceedu | www.youtube.com/reswatch | blog.resonance.ac.in

This solution was download from Resonance JEE (MAIN) 2023 Solution portal

PAGE # 6

| JEE (MAIN) 2023 | DATE : 01-02-2023 (SHIFT-2) | PAPER-1 | MEMORY BASED | PHYSICS

13. Calculate the dimensional formula of mass in terms of G, h and C where G is gravitational constant, h is

Planck's constant and C is the speed of light :

- (1) $[G]^{1/2} [h]^{1/3} [C]^{1/4}$ (2) $[G]^{-1/2} [h]^{1/2} [C]^{1/2}$ (3) $[G]^{1/2} [h]^{1/2} [C]^{1/2}$ (4) $[G] [h] [C]$

Ans. (2)

$$[M] = [G]^a [h]^b [C]^c$$

$$[G] = [M^{-1} L^3 T^{-2}] ; [h] = [ML^2 T^{-1}]$$

$$[C] = [LT^{-1}]$$

$$[M] = [M^{-1} L^3 T^{-2}]^a [ML^2 T^{-1}]^b [LT^{-1}]^c$$

$$= M^{-a+b} L^{3a+2b+c} T^{-2a-b-c}$$

$$-a + b = 1$$

$$3a + 2b + c = 0$$

$$-2a - b - c = 0$$

$$a = \frac{-1}{2}$$

$$b = 1/2$$

$$c = 1/2 \Rightarrow [M] = [G]^{-1/2} [h]^{1/2} [C]^{1/2}$$

14. Find equivalent resistance between adjacent edges of n sides polygon if each side is having a resistance

R.

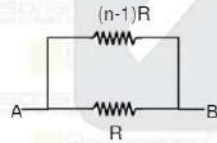
(1)

(1)

- (1) $R \left(1 - \frac{1}{n}\right)$ (2) $R(2n - 1)$ (3) $R \left(\frac{1}{n} - 1\right)$ (4) $R(n - 1)$

Ans. (1)

Sol.



$$R_{AB} = \frac{R(n-1)R}{R(n-1)+R} = \frac{R(n-1)}{n}$$

$$= R \left(1 - \frac{1}{n}\right) \Omega$$

15. In a Carnot engine temperature of source is 99°C & efficiency $1/3$. If the temperature of sink increased by x then efficiency becomes $1/6$ then x is :

- (1) 42k (2) 62k (3) 36k (4) 28k

Ans. (2)

Resonance Eduventures Ltd.

Reg. Office & Corp. Office : CG Tower, A-46 & 52, IPIA, Near City Mall, Jhalawar Road, Kota (Raj.) - 324005

Ph. No.: +91-744-2777777, 2777700 | FAX No. : +91-022-39167222

To Know more : sms RESO at 56677 | Website: www.resonance.ac.in | E-mail : contact@resonance.ac.in | CIN : U80302RJ2007PLC024029
Toll Free : 1800 258 5555 | 7340010333 | www.facebook.com/resonanceedu | twitter.com/resonanceedu | www.youtube.com/resonance | [blog.resonance.ac.in](https://www.blog.resonance.ac.in)

This solution was downloaded from Resonance JEE (MAIN) 2023 Solution portal

PAGE # 7

[JEE (MAIN) 2023 | DATE : 01-02-2023 (SHIFT-2) | PAPER-1 | MEMORY BASED | PHYSICS

Sol.

Let T_2 is the temperature of sink then

$$\eta_1 = 1 - \frac{T_2}{T_1} = 1 - \frac{T_2}{372} = 1 - \frac{T_2}{372}$$

$$\text{given } \eta_1 = \frac{1}{3}$$

$$\text{So } \frac{1}{3} = 1 - \frac{T_2}{372} \Rightarrow \frac{T_2}{372} = 1 - \frac{1}{3} = \frac{2}{3}$$

$$T_2 = 248$$

Now this sink temperature $T_2 = 248\text{K}$ is increased by x & efficiency become $\frac{1}{6}$

$$\eta_2 = 1 - \frac{T_2 + x}{T_1} \Rightarrow \frac{1}{6} = 1 - \frac{248 + x}{372}$$

$$\frac{248 + x}{372} = 1 - \frac{1}{6} = \frac{5}{6}$$

$$248 + x = 310 \Rightarrow x = 62\text{K}$$

16. A block is hanging from a fixed support on a different planet where gravity is 4 times lesser than earth's gravity. The rod by which block is hanging has length of 6m, cross sectional area of 3mm^2 and young modulus is $2 \times 10^{11} \text{N/m}^2$. Calculate the elongation in the rod if mass of block is 4 kg. (g on earth = 10m/s^2)

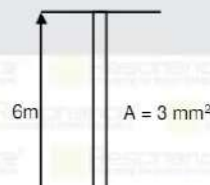
- (1) 0.2 mm (2) 1 mm (3) 0.1mm (4) 2 mm

Ans. (3)

$$\text{Sol. Stress} = \frac{F}{A} = \frac{4 \times \frac{10}{4}}{3 \times 10^{-6}} = \frac{10}{3} \times 10^6 \text{N/m}^2$$

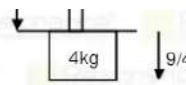
$$\frac{\text{Stress}}{\text{strain}} = y$$

$$\frac{\text{stress}}{y} = \frac{\Delta l}{l} \Rightarrow \Delta l = \frac{l \times \sigma}{y}$$



$$\Delta l = \frac{6 \times \frac{10}{3} \times 10^6}{2 \times 10^{11}} = \frac{10^7}{10^{11}}$$

$$\Delta \lambda = 10^{-4} \text{ m} \Rightarrow \Delta \lambda = 0.1 \text{ mm}$$



Resonance Eduventures Ltd.

Reg. Office & Corp. Office : CG Tower, A-46 & 52, IPIA, Near City Mall, Jhalawar Road, Kota (Raj.) - 324005

Ph. No.: +91-744-2777777, 2777700 | FAX No. : +91-022-39167222

To Know more : sms RESO at 56677 | Website : www.resonance.ac.in | E-mail : contact@resonance.ac.in | CIN : U80302RJ2007PLC024029

Toll Free : 1800 258 5555 | 7340010333 | [facebook.com/resonanceedu](https://www.facebook.com/resonanceedu) | [twitter.com/resonanceedu](https://www.twitter.com/resonanceedu) | www.youtube.com/resonanceedu | [blog.resonance.ac.in](https://www.blog.resonance.ac.in)

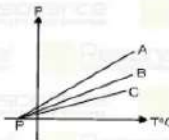
This solution was download from Resonance JEE (MAIN) 2023 Solution portal

PAGE # 8



JEE (MAIN) 2023 | DATE : 01-02-2023 (SHIFT-2) | PAPER-1 | MEMORY BASED | PHYSICS

17. Pressure temperature graph is plotted for three ideal gases A, B, C with almost same density (least density varies). Then temperature at point P shown in graph will be :

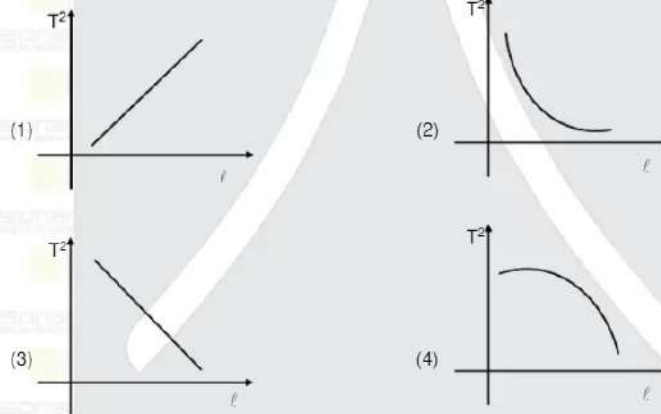


- (1) -273°C (2) -100°C (3) -80°C (4) 0°C

Ans. (1)

Sol. When temperature goes to -273°C , all constituent particles get freeze and pressure goes to zero irrespective of the density of gas.

18. Which of the following graph is correct between T^2 and ℓ for a simple pendulum :



Ans. (1)

Sol. $T = 2\pi \sqrt{\frac{\ell}{g}}$

$$T^2 = 4\pi^2 \frac{\ell}{g} \Rightarrow T^2 \propto \ell$$

$$\Rightarrow T^2 = k\ell$$

Resonance Eduventures Ltd.

Reg. Office & Corp. Office : CG Tower, A-46 & 52, IPIA, Near City Mall, Jhalawar Road, Kota (Raj.) - 324005

Ph. No.: +91-744-2777777, 2777700 | FAX No. : +91-022-39167222

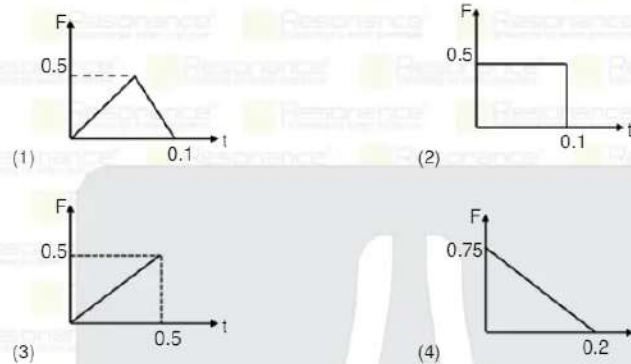
To Know more : sms RESO at 56677 | Website : www.resonance.ac.in | E-mail : contact@resonance.ac.in | CIN : U80302RJ2007PLC024029

Toll Free : 1800 258 5555 | 7340010333 | [facebook.com/resonanceedu](https://www.facebook.com/resonanceedu) | [twitter.com/resonanceedu](https://www.twitter.com/resonanceedu) | www.youtube.com/resonanceedu | [blog.resonance.ac.in](https://www.blog.resonance.ac.in)

This solution was download from Resonance JEE (MAIN) 2023 Solution portal

PAGE # 9

19. Which of the graph represent maximum impulse?



Ans. (3)

Sol. Impulse (I) = $\int F \cdot dt$

So impulse is area under curve between F & t

For option (1)

$$\text{Area} = \frac{1}{2} \times 0.1 \times 0.5 = \frac{0.05}{2} = 0.025 \text{ N.s}$$

$$I_A = 0.025 \text{ N.s}$$

For option (2)

$$\text{Area} = 0.5 \times 0.1 = 0.05 \text{ N.s}$$

$$I_B = 0.05 \text{ N.s}$$

For option (3)

$$\text{Area} = \frac{1}{2} \times 0.5 \times 0.5 = 0.125 \text{ N.s}$$

$$I_C = 0.125 \text{ N.s}$$

For option (4)

$$\text{Area} = \frac{1}{2} \times 0.2 \times 0.75 = 0.075 \text{ N.s}$$

$$I_D = 0.075 \text{ N.s}$$

20. A coil is placed perpendicular to the magnetic field. Magnetic flux (ϕ_B) through the coil changes when :

- (a) Area of coil will change (b) Direction of magnetic field will change
 (c) strength of magnetic field will change (d) moving the coil along the magnetic field.
 (1) c & d (2) b, c & d (3) a, b, c (4) All of the above

Ans. (3)

Resonance Eduventures Ltd.

Reg. Office & Corp. Office : CG Tower, A-46 & 52, IPIA, Near City Mall, Jhalawar Road, Kota (Raj.) - 324005

Ph. No.: +91-744-2777777, 2777700 | FAX No. : +91-022-39167222

To Know more : sms RESO at 56677 | Website : www.resonance.ac.in | E-mail : contact@resonance.ac.in | CIN : U80302RJ2007PLC024029

Toll Free : 1800 258 5555 7340010333 [facebook.com/ResonanceEdu](https://www.facebook.com/ResonanceEdu) twitter.com/ResonanceEdu www.youtube.com/reswater blog.resonance.ac.in

This solution was download from Resonance JEE (MAIN) 2023 Solution portal

PAGE # 10

21. For a hydrogen like atom whose atomic number is 4 an electron jumps from its 4th excited state to 2nd excited state energy level. Calculate the energy of the photon emitted in the process :

- (1) 57.57 eV (2) 15.5 eV (3) 41.29 eV (4) 27.27 eV

Ans. (2)

Sol. $E_1 = -13.6 \times \frac{(4)^2}{(5)^2}$

$$E_2 = 13.6 \times \frac{(4)^2}{(3)^2}$$

$$E_1 - E_2 = -13.6 (4^2) \left[\frac{1}{25} - \frac{1}{9} \right] = -13.6 \times 16 \times \left(\frac{9-25}{25 \times 9} \right)$$

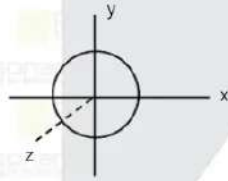
$$\Delta E = 15.5 \text{ eV}$$

22. The moment of inertia of a disc about its diameter is $MR^2/4$. Find out moment of inertia of disc about an axis normal to the edge of disc :

- (1) $\frac{3MR^2}{4}$ (2) $\frac{5MR^2}{4}$ (3) $\frac{3MR^2}{2}$ (4) MR^2

Ans. (3)

Sol. Using perpendicular axis theorem

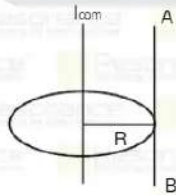


$$I_z = I_x + I_y$$

$$\text{by symmetry } I_x = I_y = \frac{MR^2}{4}$$

$$I_z = I_{\text{com}} = \frac{MR^2}{4} + \frac{MR^2}{4} = \frac{MR^2}{2}$$

using parallel axis theorem



$$I_{AB} = I_{\text{com}} + MR^2$$

$$I_{AB} = \frac{MR^2}{2} + MR^2 = \frac{3}{2} MR^2$$

Resonance Eduventures Ltd.

Reg. Office & Corp. Office : CG Tower, A-46 & 52, IPIA, Near City Mall, Jhalawar Road, Kota (Raj.) - 324005

Ph. No.: +91-744-2777777, 2777700 | FAX No. : +91-022-39167222

To Know more : sms RESO at 56677 | Website : www.resonance.ac.in | E-mail : contact@resonance.ac.in | CIN : U80302RJ2007PLC024029

Toll Free : 1800 258 5555 7340010333

This solution was download from Resonance JEE (MAIN) 2023 Solution portal

PAGE # 11

Resonance Eduventures Ltd. | JEE (MAIN) 2023 | DATE : 01-02-2023 (SHIFT-2) | PAPER-1 | MEMORY BASED | PHYSICS

23. If f_0 is the threshold frequency for a metal. If a light of frequency $2f_0$ is incident on metal plate, the velocity of photoelectron is observed to be V_1 and if a light of frequency $5f_0$ is incident on metal plate the velocity of photoelectron is observed to be V_2 . Find the ratio of V_1 & V_2

- (1) 2/1 (2) 1/2 (3) 1/3 (4) 1/4

Ans. (2)

Sol. When h is the plank's constant & f is the incident frequency f_0 threshold frequency of metal & KE is the kinetic energy of photoelectron

For $2f_0$

$$h(2f_0) = hf_0 + KE_1 \Rightarrow KE_1 = hf_0 \quad \dots\dots(I)$$

For $5f_0$

$$h(5f_0) = hf_0 + KE_2 \Rightarrow KE_2 = 4hf_0 \quad \dots\dots(II)$$

divide (I) by (II)

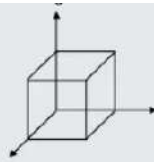
$$\frac{KE_1}{KE_2} = \frac{\frac{1}{2}mv_1^2}{\frac{1}{2}mv_2^2} = \frac{hf_0}{4hf_0} \Rightarrow \frac{v_1^2}{v_2^2} = \frac{1}{4} \Rightarrow \frac{v_1}{v_2} = \frac{1}{2}$$

24. Which of the following statement is true about Zener diode?

- (1) Used in reverse biased mode as voltage regulator.
 (2) Used in forward biased mode as voltage regulator.
 (3) It is not used as voltage regulator.
 (4) Used in forward and reverse biased mode as voltage regulator.

Ans. (1)

25. A cube is imagined as shown. If $\vec{E} = E_0 \hat{x}$ N/C exists in the region where $E_0 = 4 \times 10^4$ N/C and $\epsilon_0 = 9 \times 10^{-12}$ Nm²/C², $a = 1$ cm, and the charge enclosed in the cube is $q \times 10^{-14}$ C. Find q



(1) 14 (2) 12 (3) 36 (4) 10

Ans. (3)

Sol. $E_{at\ x=a} = E_0 a$

$$\Rightarrow \int \vec{E} \cdot d\vec{A} = \frac{Q}{\epsilon_0}$$

$$\Rightarrow E_0 a \times a^2 = \frac{Q}{\epsilon_0}$$

$$Q = E_0 a^3 \epsilon_0$$

$$Q = 4 \times 10^4 \times \left(\frac{1}{100}\right)^3 \times 9 \times 10^{-12}$$

$$Q = 36 \times 10^{-8} \times 10^{-6}$$

$$Q = 36 \times 10^{-14} \text{ C}$$

$$x = 36$$

Resonance Eduventures Ltd.

Reg. Office & Corp. Office: CG Tower, A-46 & 52, IPIA, Near City Mall, Jhalawar Road, Kota (Raj.) - 324005

Ph. No.: +91-744-2777777, 2777700 | FAX No.: +91-022-39167222

To Know more: sms RESO at 56677 | Website: www.resonance.ac.in | E-mail: contact@resonance.ac.in | CIN: U80302RJ2007PLC024029

Toll Free: 1800 258 5555 | 7340010333 | [facebook.com/ResonanceEdu](https://www.facebook.com/ResonanceEdu) | twitter.com/ResonanceEdu | www.youtube.com/resowatch | blog.resonance.ac.in

This solution was download from Resonance JEE (MAIN) 2023 Solution portal

PAGE # 12



TO KNOW MORE

Call: 0744-2777777,
8441024095

TARGET: JEE (ADV.) 2023

Polish your subject knowledge with the guidance of
Top Notch Sr. Faculty of Resonance

SPARK

15 WEEKS COMPAC COURSE

OFFLINE / ONLINE

CLASS
STARTS

6th FEBRUARY
2023

ACADEMIC FEATURES

- Course Duration: **15 Weeks**
- Total No. of Lectures: **234** (P: 78 | C: 78 | M: 78)
- Duration of One Lecture: **1.5 hrs.** (90 Minutes)
- Classroom Teaching Hours: **351 Hrs.**
- Testing Duration: **60 Hrs.**
- Total Academic Hours: **411 Hrs.**

Course Features

- Study Material
- Guest Classes
- Build up support of recorded lectures
- Print / Pdf Syllabus / Test Series

Facilities for Offline Students

- IT Package / Computer Lab
- Self Study Rooms for Boys & Girls



TARGET: JEE (Main) 2023

Boost your Percentile with

PERCENTILE BOOSTER COURSE

CLASS
STARTS



8 WEEKS COMPAC COURSE

6th FEBRUARY 2023

OFFLINE / ONLINE

COURSE FEATURES

- Complete Course Coverage
- 25 Chapter wise Test
- Regular Practice through 3.5 Daily Online Practice Test
- 5 Full Syllabus Test
- 3 Joint Preparatory Test
- Approx 2500 practice Ques.
- 113 Teaching hours
- 99 Tosting Hours
- Regular Test discussion classes for concept clearance
- Back up support of recorded lectures



Resonance Resonance Resonance Resonance



JEE (ADVANCED) 2022 RESULT

RESONites ने फिर लहराया सफलता का परचम

STUDENTS FROM CLASSROOM PROGRAM (OFFLINE/ ONLINE)

AIR 6
KARTHIKEYA POLISETTY
Roll No.: 21925115
AIR-1 GEN-EWS

AIR 8
DHEERAJ KURUKUNDA
Roll No.: 21920114

Students in TOP-100 All India Ranks (AIRs)



AIR-11
DEVANSHU MALJI
Roll No.: 2191044



AIR-15
ARSHIF ALI
Roll No.: 21925145



AIR-35
SANSKAR SHRIVASTAVA
Roll No.: 21925153



AIR-50
ANSHUL GARG
Roll No.: 21920122



AIR-54
SAKSHITA D. NAVIK
Roll No.: 21920154



AIR-58
KARISHK SHARMA
Roll No.: 21920154

ADMISSIONS OPEN FOR ACADEMIC SESSION 2023-24

TARGET: JEE (Adv.) 2024

for Class XII Passed Student

VISHESH COURSE

MODE: OFFLINE / ONLINE

CLASS STARTS 10th & 17th April

TARGET: JEE (Main) 2024

for Class XII Passed Student

ABHYAAS COURSE

MODE: OFFLINE / ONLINE

CLASS STARTS 10th & 24th April

SCHOLARSHIP ON THE BASIS OF JEE (MAIN) 2023 %ILE / AIR

Resonance Eduventures Limited

REGISTERED & CORPORATE OFFICE: CG Tower, A-46 & 52, IPIA, Near City Mall, Jhalawar Road, Kota (Rajasthan) - 324005
Tel. No.: 0744-2777777, 2777700 | CIN: U80302RJ2007PLC024029

Social Media Connect

- Facebook: facebook.com/resonance.edu
- WhatsApp: 83007 41444
- YouTube: youtube.com/resonanceedu
- LinkedIn: in:linkedin.com/school/resonance-eduventures-ltd/
- Instagram: instagram.com/resonance_edu
- Twitter: twitter.com/Resonanceedu
- Official Resonance: t.me/OfficialResonance

