



महाराष्ट्र शासन

शालेय शिक्षण व क्रीडा विभाग

राज्य शैक्षणिक संशोधन व प्रशिक्षण परिषद, महाराष्ट्र पुणे

७०८ सदाशिव पेठ, कुमठेकर मार्ग, पुणे ४११०३०

संपर्क क्रमांक (०२०) २४४७ ६९३८

E-mail: mathsdept@maa.ac.in

जा.क्र. राशैसंप्रपम/गवि/प्रश्नपेढी/२०२२-२३

दि.

इयत्ता:-दहावी

माध्यम:-इंग्रजी

विषय:- गणित भाग - २

सूचना-

१. सदर प्रश्नपेढी ही १००% अभ्यासक्रमावर तयार करण्यात आली आहे.
२. सदर प्रश्नपेढीतील प्रश्न हे अधिकच्या सरावासाठी असून प्रश्नसंचातील प्रश्न बोर्डाच्या प्रश्नपत्रिकेत येतीलच असे नाही, याची नोंद घ्यावी.

Class-10
Mathematics part-2
Question bank
1.Similarity

Q.1 A) MCQ (1 Mark)

1.If $\Delta ABC \sim \Delta PQR$ and $AB: PQ = 3: 4$ then $A(\Delta ABC): A(\Delta PQR) = ?$

- (A)9:25 (B) 9:16 (C) 16:9 (D)25:9

2.Which of the following is not a test of similarity?

- (A)AAA (B)SAS (C) SAA (D)SSS

3.If $\Delta XYZ \sim \Delta PQR$ and $A(\Delta XYZ) = 25 \text{ cm}^2$, $A(\Delta PQR) = 4 \text{ cm}^2$ then $XY: PQ = ?$

- (A) 4:25 (B)2:5 (C) 5:2 (D)25:4

4.Ratio of areas of two similar triangles is 9:25. _____ is the ratio of their corresponding sides.

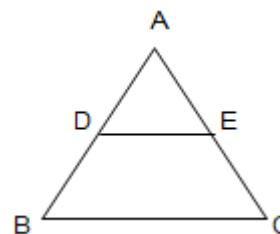
- (A)3:4 (B)3 :5 (C) 5:3 (D)25:81

5. Given $\Delta ABC \sim \Delta DEF$, if $\angle A = 45^\circ$ and $\angle E = 35^\circ$ then $\angle B = ?$

- (A) 45° (B) 35° (C) 25° (D) 40°

6. In fig,seg $DE \parallel$ seg BC , identify correct statement.

- (A) $\frac{AD}{DB} = \frac{AE}{AC}$ (B) $\frac{AD}{DB} = \frac{AB}{AC}$
(C) $\frac{AD}{DB} = \frac{EC}{AC}$ (D) $\frac{AD}{DB} = \frac{AE}{EC}$



7.If $\Delta XYZ \sim \Delta PQR$ then $\frac{XY}{PQ} = \frac{YZ}{QR} = ?$

(A) $\frac{XZ}{PR}$

(B) $\frac{XZ}{PQ}$

(C) $\frac{XZ}{QR}$

(D) $\frac{YZ}{PQ}$

8. If $\triangle ABC \sim \triangle LMN$ and $\angle A = 60^\circ$ then $\angle L = ?$

(A) 45°

(B) 60°

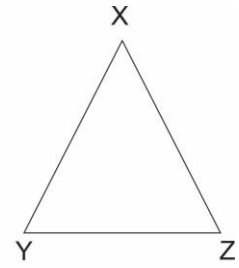
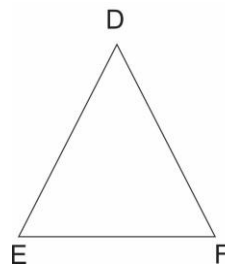
(C) 25°

(D) 40°

9. In $\triangle DEF$ and $\triangle XYZ$, $\frac{DE}{XY} = \frac{FE}{YZ}$ & $\angle E \cong \angle Y$ _____ test gives similarity between $\triangle DEF$ & $\triangle XYZ$.

(A)AAA (B)SAS

(C) SAA (D)SSS



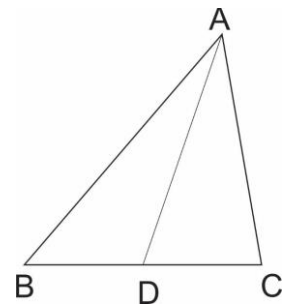
10. In fig $BD=8, BC=12$ B-D-C then $\frac{A(\triangle ABC)}{A(\triangle ABD)} = ?$

(A)2:3

(B)3:2

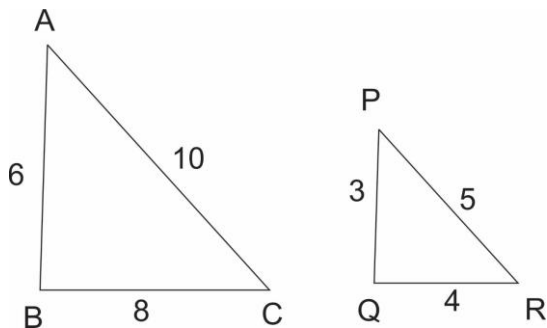
(C) 5:3

(D)3:4

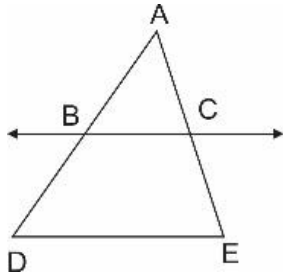


Q.1 B) Solve 1 mark

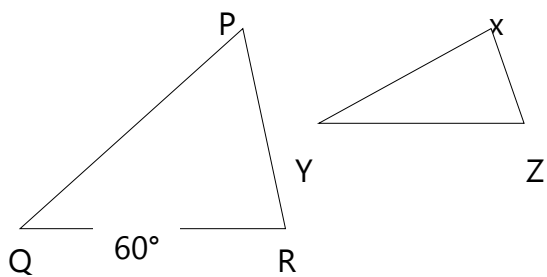
B.1 Are triangles in figure similar ? If yes then write the test of similarity.



2. In fig line $BC \parallel$ line DE , $AB=2, BD=3, AC=4$ and $CE= x$, then find the value of x .



3.State whether the following triangles are similar or not : If yes , then write the test of similarity.



$\angle P = 35^\circ$, $\angle x = 35^\circ$ and $\angle Q = 60^\circ$, $\angle Y =$

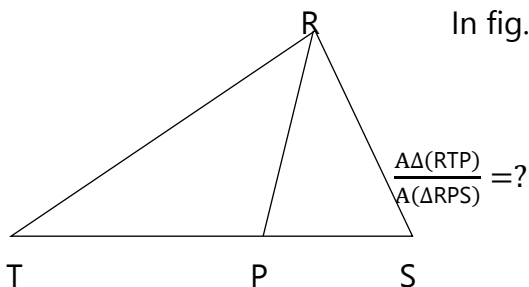
4. If $\triangle ABC \sim \triangle LMN$ & $\angle B = 40^\circ$ then $\angle M = ?$ Give reason .

5.Areas of two similar triangles are in the ratio 144:49. Find the ratio of their corresponding sides.

6. $\triangle PQR \sim \triangle SUV$ write pair of congruent angle.

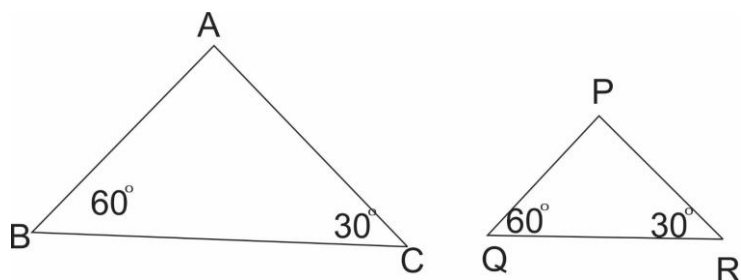
7. $\triangle ABC \sim \triangle DEF$ write ratio of their corresponding sides.

8. In fig. $TP = 10$ cm $PS = 6$ cm



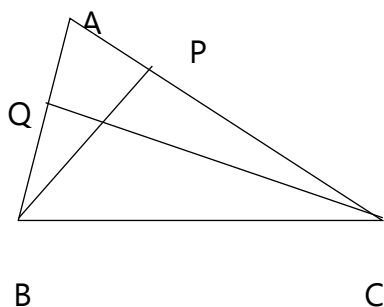
9.Ratio of corresponding sides of two similar triangles is 4:7 then find the ratio of their areas = ?

10. Write the test of similarity for triangles given in figure.



Q.2 A. Complete the activity 2marks

1.



in fig. $BP \perp AC, CQ \perp AB$ A-P-C

& A-Q-B then show that

ΔAPB & ΔAQC are similar

In ΔAPB & ΔAQC $\angle APB = [\quad]^\circ \dots (I)$

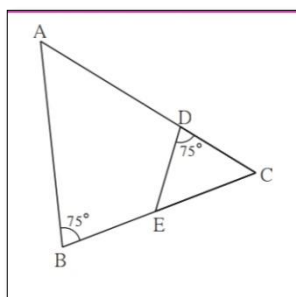
$\angle AQC = [\quad]^\circ \dots (II)$

$\angle APB \cong \angle AQC$ (I) & (II)

$\angle PAB \cong \angle QAC$ [.....]

$\Delta APB \sim \Delta AQC$ [.....]

2. Observe the figure & complete following activity.



in fig $\angle B = 75^\circ, \angle D = 75^\circ$

$\angle B \cong [\dots]$ each of 75°

$\angle C \cong \angle C$ [.....]

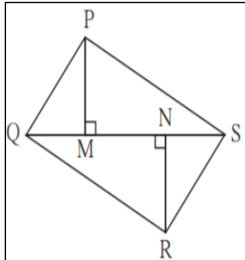
$\Delta ABC \sim \Delta [\dots]$

....[.....]similarity test

3. $\Delta ABC \sim \Delta PQR$, $A(\Delta ABC) = 80 \text{sqcm}$ $A(\Delta PQR) = 125 \text{sqcm}$ then complete

$$\frac{A(\Delta ABC)}{A(\Delta PQR)} = \frac{80}{125} = \frac{[\dots]}{[\dots]} \text{ hence } \frac{AB}{PQ} = \frac{[\dots]}{[\dots]}$$

4. in fig. PM=10 cm A(ΔPQS)= 100sqcm A(ΔQRS) = 110sqcm then NR?

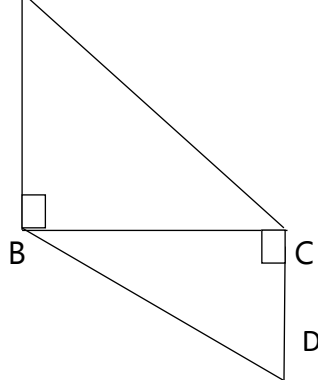


ΔPQS & ΔQRS having seg QS common base

Areas of two triangles whose base are common, are in proportion of their corresponding [.....]

$$\frac{A(\Delta PQS)}{A(\Delta QRS)} = \frac{[\dots]}{NR} , \frac{100}{110} = \frac{[\dots]}{NR} , NR = [\dots] \text{ cm}$$

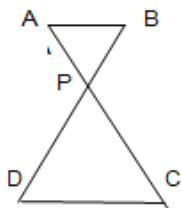
Q.2 B A



1. In fig AB ⊥ BC and DC ⊥ BC AB=6, DC=4

$$\text{then } \frac{A(\Delta ABC)}{A(\Delta BCD)} = ?$$

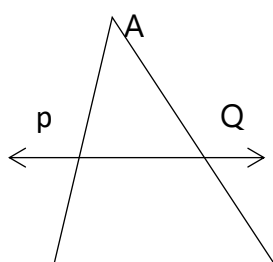
2. In fig seg AC & seg BD intersect each other at point p



$$\frac{AP}{PC} = \frac{BP}{PD} \text{ then prove that } \Delta ABP \sim \Delta DPC$$

3. ΔABP ~ ΔDEF & A(ΔABP): A(ΔDEF) = 144:81 then AB:DE = ?

4. From given information is PQ || BC ?



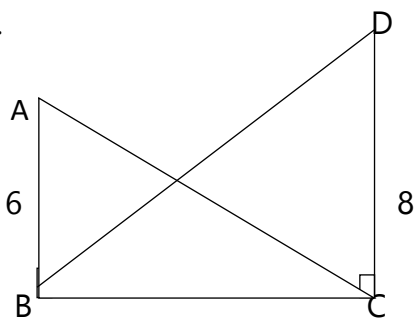
$$AP=2, PB=4 \quad AQ=3, QC=6$$

B

C

5. Areas of two similar triangles are 225 cm^2 and 81 cm^2 if side of smaller triangle is 12cm. find corresponding side of major triangle

6.

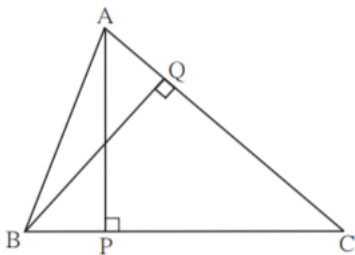


from adjoining figure

$$\angle ABC = 90^\circ \quad \angle DCB = 90^\circ \quad AB = 6,$$

$$DC = 8 \quad \text{then} \quad \frac{A(\triangle ABC)}{A(\triangle DCB)} = ?$$

Q.3A) Complete the following activity 3 marks



1. $\triangle ABC$ AP perpendicular BC & BQ perpendicular AC, B-P-C, A-Q-C
then show that $\triangle CPA \sim \triangle CQB$ if $AP=7, BQ=8, BC=12$
then $AC=?$ In $\triangle CPA$ and $\triangle CQB$ $\angle CPA \cong \angle CQB$ (each 90°)

$$\angle ACP \cong \angle BCQ \text{ (common angle)}$$

$$\triangle CPA \sim \triangle CQB \text{ (.....similarity test)}$$

$$\frac{AP}{BQ} = \frac{CP}{CQ} \text{ (corresponding sides of similar triangle)}$$

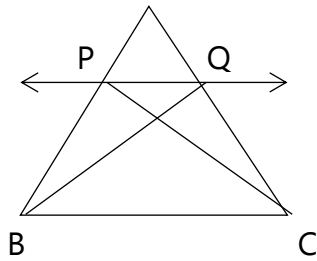
$$\frac{7}{8} = \frac{CP}{12}$$

$$AC \times \frac{7}{8} = 7 \times 12 \quad AC = 10.5$$

2. A line is parallel to one side of triangle which intersects remaining two sides in two distinct points then that line divides sides in same proportion.

Given :In ΔABC line $l \parallel$ side BC & line l intersect side AB in P & side

AC in Q A



Given: $\frac{AP}{PB} = \frac{AQ}{QC}$ construction :draw CP & BQ

Proof: ΔAPQ & ΔPQB have equal height

$$\frac{A(\Delta APQ)}{A(\Delta PQB)} = \frac{[...]}{PB} \text{ (areas in proportion of base)}$$

$$\frac{A(\Delta APQ)}{A(\Delta PQC)} = \frac{[...]}{QC} \text{ (areas in proportion of base)}$$

ΔPQC & ΔPQB have [...] is common base
 Seg $PQ \parallel$ Seg BC hence height of:
 ΔAPQ & ΔPQC

$$A(\Delta PQC) = A(\Delta \dots) \dots \dots \dots (III)$$

$$\frac{A(\Delta APQ)}{A(\Delta PQB)} = \frac{A(\Delta \dots)}{A(\Delta \dots)} \dots \dots \dots [(I), (II) \& (III)]$$

$$\frac{AP}{PB} = \frac{AQ}{QC} \dots \dots \dots [(I) \& (II)]$$

From fig. seg $PQ \parallel$ side BC

$$AP = x + 3, PB = x - 3, AQ = x + 5, QC = x - 2$$

then complete the activity to find the value of x

in ΔPQB , $PQ \parallel$ side BC

$$\frac{AP}{PB} = \frac{AQ}{QC} \dots \dots \dots [(I) \dots \dots \dots]$$

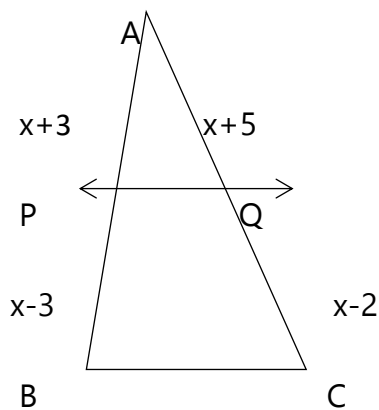
$$\frac{x + 3}{x - 3} = \frac{x + 5}{x - 2}$$

$$(x + 3)[\dots] = (x + 5)(x - 2)$$

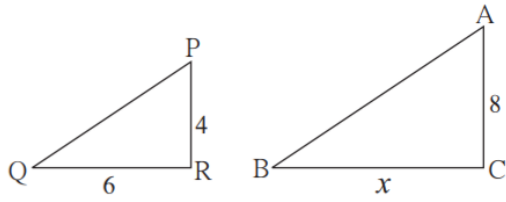
$$x^2 + x - [\dots] = x^2 + 2x - 10$$

$$x = [\dots]$$

3.

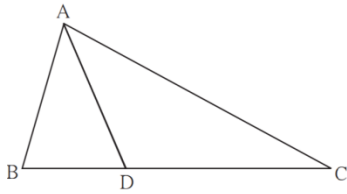


Q.3 B 3 marks

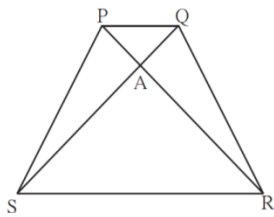


1. There are two poles having heights 8m & 4m on plane ground as shown in fig. Because of sunlight shadow of smaller pole is 6m long then find the length of shadow of longer pole.

2. In $\triangle ABC$ B-D-C & BD=7, BC=20 then find the following ratio

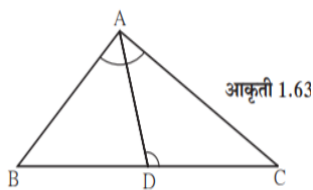


- 1) $\frac{A(\triangle ABD)}{A(\triangle ADC)}$
- 2) $\frac{A(\triangle ABD)}{A(\triangle ABC)}$
- 3) $\frac{A(\triangle ADC)}{A(\triangle ABC)}$



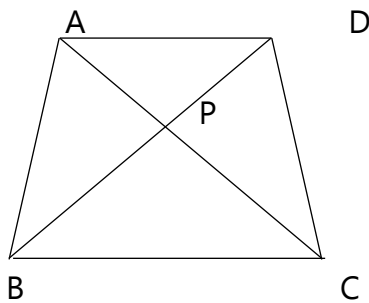
3. In given fig. quadrilateral PQRS side $PQ \parallel$ side SR, $AR=5AP$, then prove that, $SR=5PQ$

4.



In triangle ABC point D is on side BC (B-D-C) such that $\angle BAC = \angle ADC$ then prove that $CA^2 = CB \times CD$

5.



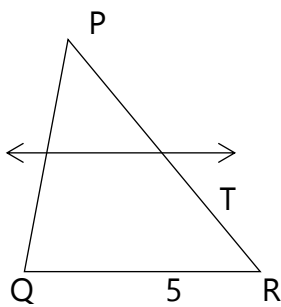
In Quadrilateral ABCD Side $AD \parallel$ BC diagonal AC & BD intersct in point P then prove that $\frac{AP}{PD} = \frac{PC}{BP}$

Q.4 4 marks

1. Side of equilateral triangle PQR is 8 cm then find the area of triangle whose side is half of side of triangle PQR
2. Areas of two similar triangle are equal then prove that triangles are congruent
3. Two triangles are similar .Smaller triangle sides are 4 cm ,5 cm,6 cm perimeter of larger triangle is 90 cm then find the sides of larger triangle.

Q.5 3 marks

1. In fig , PS = 2, SQ=6 QR = 5, PT = x & TR = y. then find the pair of value of x&y such that ST \parallel side QR.



- 2 .An architecture have model of building, length of building is 1m then length of model is 0.75cm then find length & height of model building whose actual length is 22.5m& heght is 10m.

2. PYTHAGORAS THEOREM

Que. 1 (A). Choose the correct alternative from those given below

(1 mark each)

1. Out of given triplets, which is a Pythagoras triplet ?

(A) (1,5,10) (B) (3,4,5) (C) (2,2,2) (D) (5,5,2)

2. Out of given triplets, which is not a Pythagoras triplet ?

(A) (5,12,13) (B) (8,15,17) (C) (7,8,15) (D) (24,25,7)

3. Out of given triplets, which is not a Pythagoras triplet ?

(A) (9,40,41) (B) (11,60,61) (C) (6,14,15) (D) (6,8,10)

4. In right angled triangle, if sum of square of sides of right angle is 169 then what is the length of hypotenuse?

(A) 15 (B) 13 (C) 5 (D) 12

5. A rectangle having length of a side is 12 and length of diagonal is 20 then what is length of other side?

(A) 2 (B) 13 (C) 5 (D) 16

6. If the length of diagonal of square is $\sqrt{2}$ then what is the length of each side ?

(A) 2 (B) $\sqrt{3}$ (C) 1 (D) 4

7. If length of both diagonals of rhombus are 60 and 80 then what is the length of side?

- (A)100 (B)50 (C) 200 (D) 400

8. If length of sides of triangle are a ,b, c and $a^2 + b^2 = c^2$ then which type of triangle it is ?

- (A)Obtuse angled triangle (B) Acute angled triangle
(C) Equilateral triangle (D)Right angled triangle

9. In ΔABC , $AB = 6\sqrt{3}$ cm, $AC = 12$ cm, and $BC = 6$ cm then $m\angle A = ?$

- (A)30⁰ (B) 60⁰ (C) 90⁰ (D) 45⁰

10. The diagonal of a square is $10\sqrt{2}$ cm then its perimeter is

- (A)10 cm. (B) $40\sqrt{2}$ cm. (C) 20 cm. (D) 40 cm.

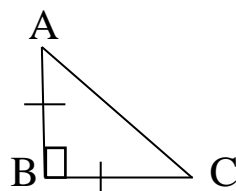
11. Out of all numbers from given dates, which is a Pythagoras triplet ?

- (A)15/8/17 (B)16/8/16 (C) 3/5/17 (D) 4/9/15

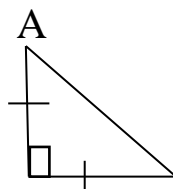
Que. 1 (B). Solve the following questions : (1 mark each)

1.Height and base of a right angled triangle are 24 cm and 18 cm find the length of its hypotenus ?

2. From given figure, In ΔABC , $AB \perp BC$, $AB = BC$ then $m \angle A = ?$

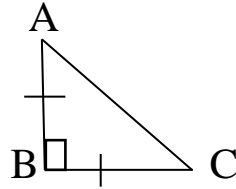


3. From given figure, In ΔABC , $AB \perp BC$, $AB = BC$, $AC = 2\sqrt{2}$ then $l(AB) = ?$



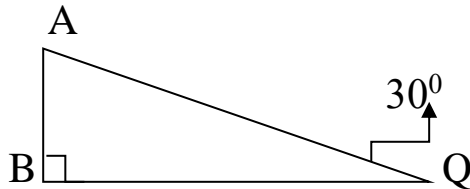
B C

4. From given figure, In ΔABC , $AB \perp BC$, $AB = BC$, $AC = 5\sqrt{2}$ then what is the height of ΔABC ?



5. Find the height of an equilateral triangle having side 4 cm. ?

6. From given figure, In ΔABQ , If $AQ = 8$ cm. then $AB = ?$



7. In right angled triangle, if length of hypotenuse is 25 cm. and height is 7 cm. then what is the length of its base ?

8. If a triangle having sides 50 cm., 14 cm, and 48 cm., then state whether given triangle is right angled triangle or not.

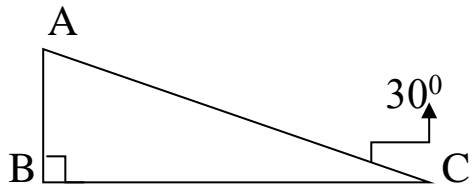
9. If a triangle having sides 8 cm., 15 cm., and 17 cm., then state whether given triangle is right angled triangle or not.

10. A rectangle having dimensions 35 m X 12 m, then what is the length of its diagonal ?

Que. 2 (A). Complete the following activities (2 marks each)

*** (Write complete answers, don't just fill the boxes)**

1. From given figure, In ΔABC , If $AC = 12$ cm. then $AB = ?$



Activity : From given figure, In ΔABC , $\angle ABC = 90^\circ$, $\angle ACB = 30^\circ$

$\therefore \angle BAC =$

$\therefore \Delta ABC$ is $30^\circ - 60^\circ - 90^\circ \Delta$.

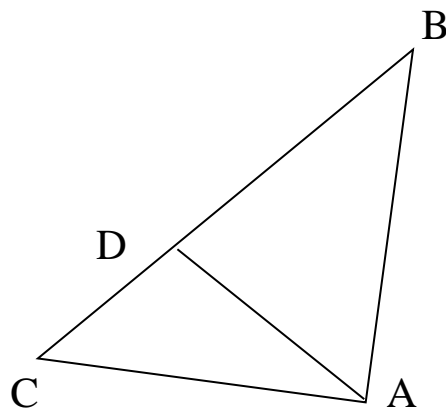
\therefore In ΔABC by Property of $30^\circ - 60^\circ - 90^\circ \Delta$.

$\therefore AB = \frac{1}{2}AC$ and $= \frac{\sqrt{3}}{2} AC$.

\therefore $= \frac{1}{2} \times 12$ And $BC = \frac{\sqrt{3}}{2} \times 12$

\therefore $= 6$ ँ $BC = 6\sqrt{3}$.

2. From given figure, In ΔABC , $AD \perp BC$, then prove that $AB^2 + CD^2 = BD^2 + AC^2$ by completing activity.



Activity : From given figure, In ΔABC , By pythagoras theorem

$AC^2 = AD^2 +$

$\therefore AD^2 = AC^2 - CD^2 \dots\dots (I)$

Also, In ΔABD , by pythagoras theorem,

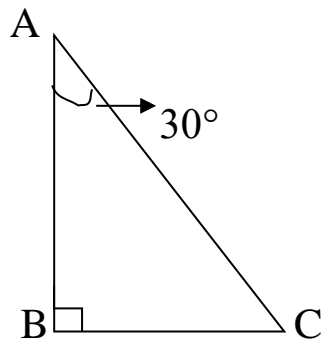
$AB^2 =$ $+ BD^2$

$\therefore AD^2 = AB^2 - BD^2 \dots\dots\dots (II)$

$$\therefore \boxed{} - BD^2 = AC^2 - \boxed{}$$

$$\therefore AB^2 + CD^2 = AC^2 + BD^2$$

3. From given figure, In ΔABC , If $\angle ABC = 90^\circ$ $\angle CAB = 30^\circ$, $AC = 14$ then for finding value of AB and BC , complete the following activity.



Activity : In ΔABC , If $\angle ABC = 90^\circ$ $\angle CAB = 30^\circ$

$$\therefore \angle BCA = \boxed{}$$

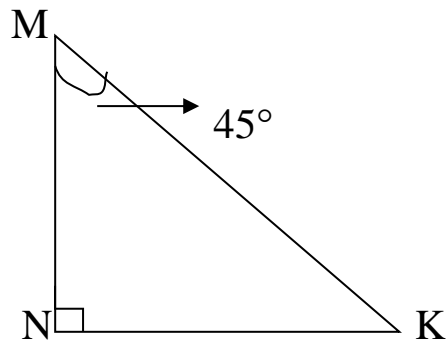
By theorem of $30^\circ - 60^\circ - 90^\circ \Delta^{le}$,

$$\therefore \boxed{} = \frac{1}{2}AC \quad \text{and} \quad \boxed{} = \frac{\sqrt{3}}{2}AC$$

$$\therefore BC = \frac{1}{2} \times \boxed{} \quad \& \quad AB = \frac{\sqrt{3}}{2} \times 14$$

$$\therefore BC = 7 \quad \& \quad AB = 7\sqrt{3}.$$

4. From given figure, In ΔMNK , If $\angle MNK = 90^\circ$ $\angle M = 45^\circ$, $MK = 6$ then for finding value of MN and KN , complete the following activity.



Activity : In ΔMNK , If $\angle MNK = 90^\circ$ $\angle M = 45^\circ$...(given)

$$\therefore \angle K = \boxed{} \quad \dots \text{ (remaining angles of } \Delta MNK \text{)}$$

By theorem of $45^\circ - 45^\circ - 90^\circ \Delta^{le}$,

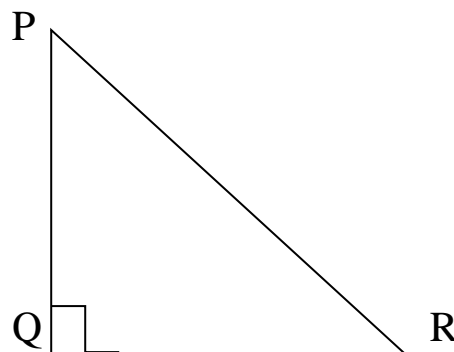
$$\therefore \boxed{} = \frac{1}{\sqrt{2}} MK \quad \text{and} \quad \boxed{} = \frac{1}{\sqrt{2}} MK$$

$$\therefore MN = \frac{1}{\sqrt{2}} \times \boxed{} \quad \& \quad KN = \frac{1}{\sqrt{2}} \times 6$$

$$\therefore MN = 3\sqrt{2}. \quad \& \quad KN = 3\sqrt{2}.$$

5. A ladder 10 m long reaches a window 8m above the ground. Find the distance of the foot of the ladder from the base of wall. Complete the given activity.

Activity : as shown in fig. suppose



PR is the length of ladder = 10 m

At P – window, At Q – base of wall, At R – foot of ladder

$$\therefore PQ = 6 \text{ m}$$

$$\therefore QR = ?$$

In ΔPQR , $\angle PQR = 90^\circ$

By Pythagoras Theorem,

$$\therefore PQ^2 + \boxed{} = PR^2 \dots\dots (I)$$

Here, $PR = 10$, $PQ = \boxed{}$

From equation (I)

$$8^2 + QR^2 = 10^2$$

$$QR^2 = 10^2 - 8^2$$

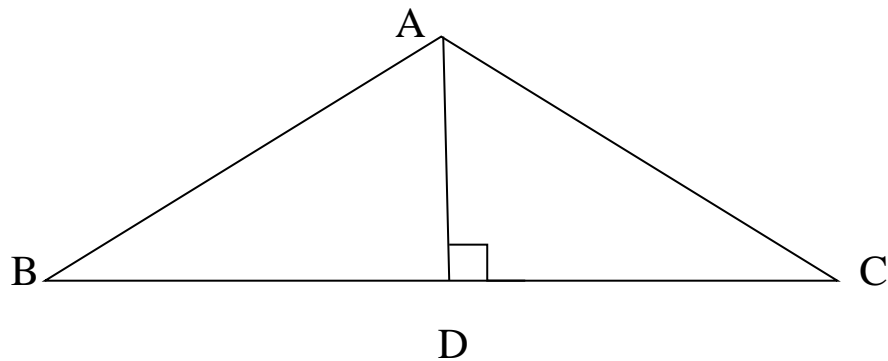
$$QR^2 = 100 - 64$$

$$QR^2 = \boxed{}$$

$$QR = 6$$

\therefore The distance of foot of the ladder from the base of wall is 6 m.

6. From the given figure, In ΔABC , If $AD \perp BC$, $\angle C = 45^\circ$, $AC = 8\sqrt{2}$, $BD = 5$ then for finding value of AD and BC , complete the following activity.



Activity : In ΔADC , If $\angle ADC = 90^\circ$ $\angle C = 45^\circ$... (given)

$\therefore \angle DAC =$ (remaining angles of ΔADC)

By theorem of $45^\circ - 45^\circ - 90^\circ \Delta^{le}$,

\therefore $= \frac{1}{\sqrt{2}} AC$ and $= \frac{1}{\sqrt{2}} AC$

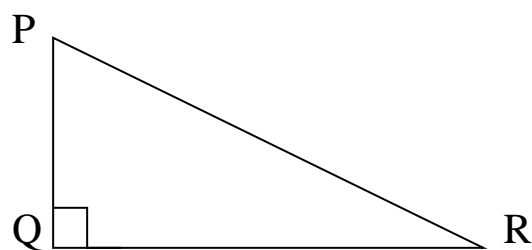
$\therefore AD = \frac{1}{\sqrt{2}} \times$ & $DC = \frac{1}{\sqrt{2}} \times 8\sqrt{2}$

$\therefore AD = 8$ & $DC = 8$

$\therefore BC = BD + DC = 5 + 8 = 13$

7. Complete the following activity to find the length of hypotenuse of right angled triangle, if sides of right angle are 9 cm and 12 cm.

Activity : In ΔPQR , $m \angle PQR = 90^\circ$



By Pythagoras Theorem,

$$\therefore PQ^2 + \boxed{} = PR^2 \dots\dots (I)$$

$$\therefore PR^2 = 9^2 + 12^2$$

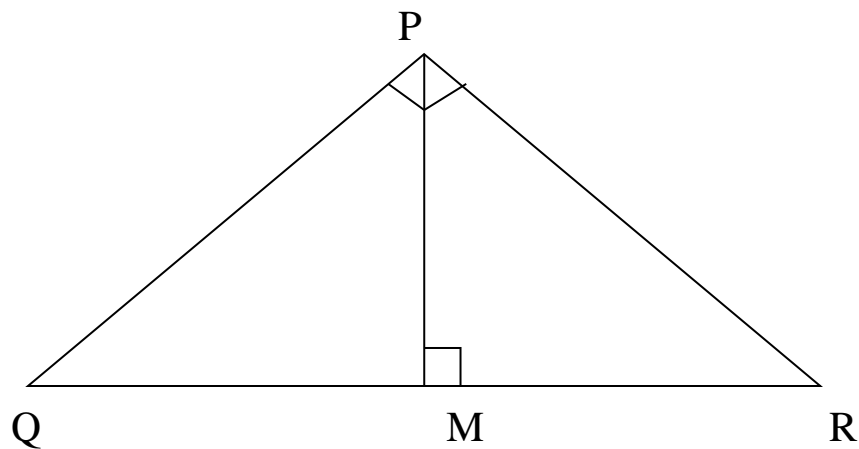
$$\therefore PR^2 = \boxed{} + 144$$

$$\therefore PR^2 = \boxed{}$$

$$\therefore PR = 15$$

\therefore Length hypotenuse of triangle PQR is $\boxed{}$ cm.

8. From given figure, In ΔPQR , If $\angle QPR = 90^\circ$, $PM \perp QR$, $PM = 10$, $QM = 8$ then for finding the value of QR , complete the following activity.



Activity : In ΔPQR , If $\angle QPR = 90^\circ$, $PM \perp QR$, (given)

In ΔPMQ , By Pythagoras Theorem,

$$\therefore PM^2 + \boxed{} = PQ^2 \dots\dots (I)$$

$$\therefore PQ^2 = 10^2 + 8^2$$

$$\therefore PQ^2 = \boxed{} + 64$$

$$\therefore PQ^2 = \boxed{}$$

$$\therefore PQ = \sqrt{164}$$

Here, $\Delta QPR \sim \Delta QMP \sim \Delta PMR$

$$\therefore \Delta QMP \sim \Delta PMR$$

$$\therefore \frac{PM}{RM} = \frac{QM}{PM}$$

$$\therefore PM^2 = RM \times QM$$

$$\therefore 10^2 = RM \times 8$$

$$RM = \frac{100}{8} = \boxed{}$$

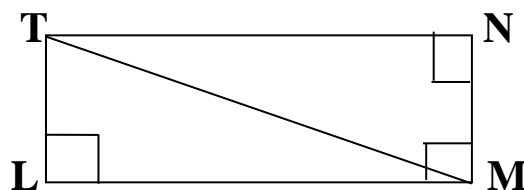
And,

$$QR = QM + MR$$

$$QR = \boxed{} + \frac{25}{2} = \frac{41}{2}$$

9. Find the diagonal of a rectangle whose length is 16 cm and area is 192sq.cm. Complete the following activity.

Activity :



As shown in fig. \square LMNT is rectangle

\therefore Area of rectangle = length X breadth

\therefore Area of rectangle = $\boxed{}$ X breadth

$\therefore 192 = \boxed{}$ X breadth

\therefore Breadth = 12 cm.

Also, $\angle TLM = 90^\circ$ (each angle of rectangle is right angle)

In ΔTLM , By Pythagoras theorem

$$\therefore TM^2 = TL^2 + \boxed{}$$

$$\therefore TM^2 = 12^2 + \boxed{}$$

$$\therefore TM^2 = 144 + \boxed{}$$

$$\therefore TM^2 = 400$$

$$\therefore TM = 20$$

10. In ΔLMN , $l = 5$, $m = 13$, $n = 12$ then complete the activity to show that whether given triangle is right angled triangle or not.

* (l, m, n are opposite sides of $\angle L, \angle M, \angle N$ respectively)

Activity :

In ΔLMN मध्ये, $l = 5$, $m = 13$, $n = \boxed{}$

$$\therefore l^2 = \boxed{} ; \quad m^2 = 169 ; \quad n^2 = 144.$$

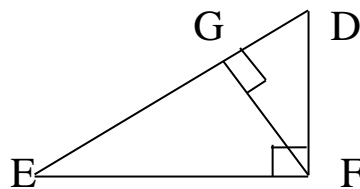
$$\therefore l^2 + n^2 = 25 + 144 = \boxed{}$$

$$\therefore \boxed{} + l^2 = m^2$$

\therefore By Converse of Pythagoras theorem, ΔLMN is right angled triangle.

Que. 3 (B). Solve the following questions : (3 marks each)

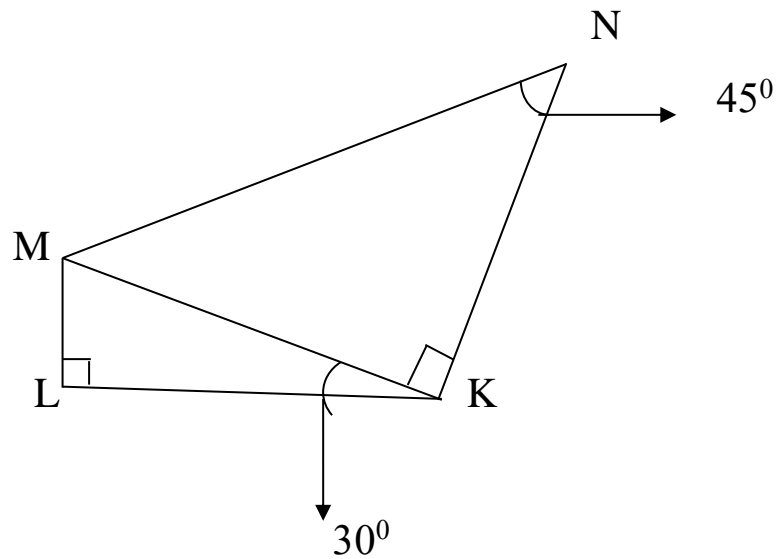
1. As shown in figure, $\angle DFE = 90^\circ$, $FG \perp ED$, If $GD = 8$, $FG = 12$, then (1) $EG = ?$ (2) $FD = ?$ (3) $EF = ?$



2. A congruent side of an isosceles right angled triangle is 7 cm, Find its perimeter .

Que. 4. Solve the following questions : (Challenging question 4 marks each)

1. As shown in figure, $LK = 6\sqrt{2}$ then 1) $MK = ?$ 2) $ML = ?$ 3) $MN = ?$



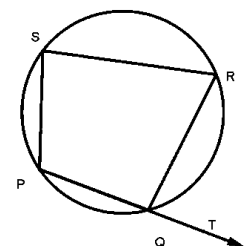
3 Circle.

Q.1. Four alternative answers for each of the following questions are given.

Choose the correct alternative.

- 1) Two circles intersect each other such that each circle passes through the centre of the other. If the distance between their centres is 12, what is the radius of each circle?
(A) 6 cm (B) 12 cm (C) 24 cm (D) can't say
- 2) A circle touches all sides of a parallelogram. So the parallelogram must be a,
(A) rectangle (B) rhombus (C) square (D) trapezium
- 3) $\angle ACB$ is inscribed in arc ACB of a circle with centre O . If $\angle ACB = 65^\circ$, find $m(\text{arc } ACB)$.
(A) 65° (B) 130° (C) 295° (D) 230°
- 4) In a cyclic $\square ABCD$, twice the measure of $\angle A$ is thrice the measure of $\angle C$. Find the measure of $\angle C$?
(A) 36 (B) 72 (C) 90 (D) 108
- 5) How many circles can be drawn passing through three non-collinear points?
(A) 0 (B) Infinite (C) 2 (D) One and only one (unique)
- 6) Two circles of radii 5.5 cm and 4.2 cm touch each other externally. Find the distance between their centres
(A) 9.7 (B) 1.3 (C) 2.6 (D) 4.6
- 7) What is the measurement of angle inscribed in a semicircle?
(A) 90° (B) 120° (C) 100° (D) 60°
- 8) Two circles having diameters 8 cm and 6 cm touch each other internally. Find the distance between their centres.
(A) 2 (B) 14 (C) 7 (D) 1
- 9) Points A, B, C are on a circle, such that $m(\text{arc } AB) = m(\text{arc } BC) = 120^\circ$. No point, except point B , is common to the arcs. Which is the type of $\triangle ABC$?
(A) Equilateral triangle (B) Scalene triangle
(C) Right angled triangle (D) Isosceles triangle
- 10) In $\square PQRS$ if $\angle RSP = 80^\circ$ then find $\angle RQT$?

- (A) 100° (B) 80°
(C) 70° (D) 110°

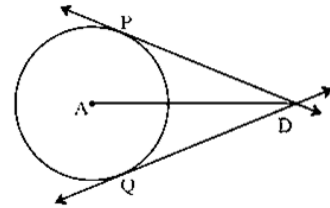


Q.2 Solve the following sub-questions. (1 mark question)

1) How many circles can be drawn passing through a point?

2) Segment DP and segment DQ are tangent segments to the circle with center A,

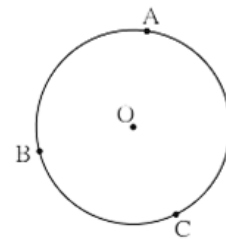
If $DP = 7$ cm. So find the length of the segment DQ?



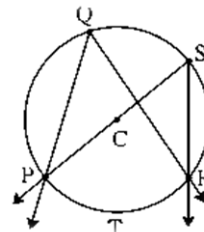
3) Two circles having radii 3.5 cm and 4.8 cm touch each other internally. Find the distance between their centres.

4) What is the measure of a semi circular arc?

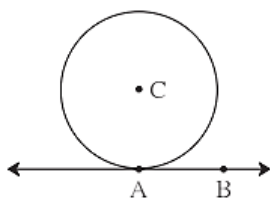
5) A, B, C are any points on the circle with centre O. If $m \text{ arc } (BC) = 110^\circ$ and $m \text{ arc } (AB) = 125^\circ$, find measure arc AC



6) In the figure if $\angle PQR = 50^\circ$ then find $\angle PSR$

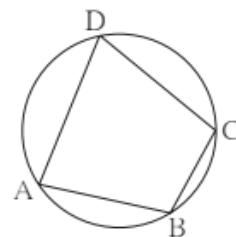


7)

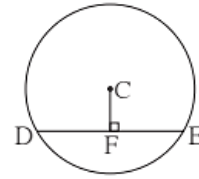


In the adjoining figure the radius of a circle with centre C is 6 cm, line AB is a tangent at A. What is the measure of $\angle CAB$? Why?

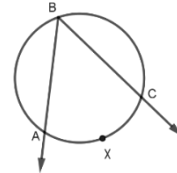
8) In the figure quadrilateral ABCD is a cyclic, if $\angle DAB = 75^\circ$ then find measure of $\angle DCB$



- 9) In the adjoining figure, seg DE is the chord of the circle with center C. seg $CF \perp$ seg DE and $DE = 16$ cm, then find the length of DF?

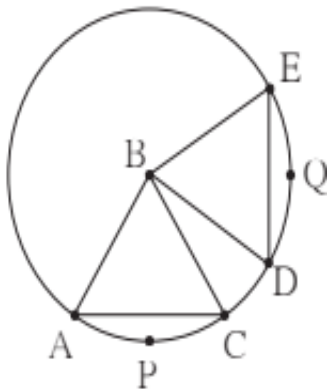


- 10) In the figure, if $\angle ABC = 35^\circ$ then find $m(\text{arc } AXC)$?



Q.3 Complete the following activities (2 marks each).

The chords corresponding to congruent arcs of a circle are congruent. Prove the theorem by completing following activity.



Given : In a circle with centre B

$$\text{arc } APC \cong \text{arc } DQE$$

To Prove : Chord $AC \cong$ chord DE

Proof : In $\triangle ABC$ and $\triangle DBE$,

side $AB \cong$ side DB

side $BC \cong$ side

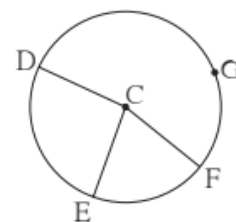
$\angle ABC \cong \angle DBE$ (measure of congruent arcs)

$\triangle ABC \cong \triangle DBE$

- 2) In figure , points G, D, E, F are concyclic points of a circle with centre C.

$\angle ECF = 70^\circ$, $m(\text{arc } DGF) = 200^\circ$

find $m(\text{arc } DEF)$ by completing activity.



$$m(\text{arc EF}) = \angle \text{ECF} \quad \dots \quad (\text{Definition of measure of arc})$$

$$\therefore m(\text{arc EF}) = \boxed{}$$

$$\text{But; } m(\text{arc DE}) + m(\text{arc EF}) + m(\text{arc DGF}) = \boxed{} \quad (\text{measure of a complete circle})$$

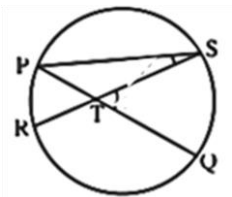
$$\therefore m(\text{arc DE}) = \boxed{}$$

$$\therefore m(\text{arc DEF}) = m(\text{arc DE}) + m(\text{arc EF})$$

$$\therefore m(\text{arc DEF}) = \boxed{}$$

3)

In the figure if the chord PQ and chord RS intersect at point T Prove that :
 $m\angle \text{STQ} = \frac{1}{2} [m(\text{arc PR}) + m(\text{arc SQ})]$ for any measure of $\angle \text{STQ}$ by filling out the boxes.



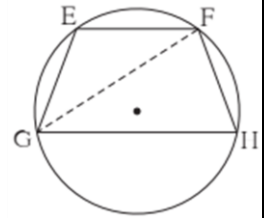
$$\text{Proof: } m\angle \text{STQ} = m\angle \text{SPQ} + \boxed{} \quad \dots \quad (\text{Theorem of the external angle of a triangle})$$

$$= \frac{1}{2} m(\text{arc SQ}) + \boxed{} \quad \dots \quad (\text{inscribed angle theorem})$$

$$= \frac{1}{2} [+]$$

- 4) In figure, chord $EF \parallel$ chord GH . Prove that, chord $EG \cong$ chord FH . Fill in the blanks and write the proof.

Proof : Draw seg GF .



$$\angle EFG = \angle FGH \quad \dots \quad \boxed{} \quad \text{(I)}$$

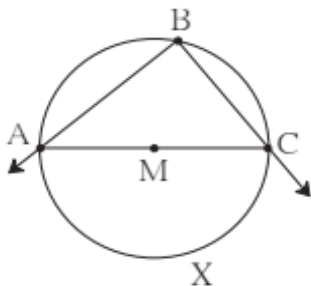
$$\angle EFG = \boxed{} \quad \dots \text{(inscribed angle theorem) (II)}$$

$$\angle FGH = \boxed{} \quad \dots \text{(inscribed angle theorem) (III)}$$

$$\therefore m(\text{arc } EG) = \boxed{} \quad \dots \text{[By (I) , (II) \& (III)]}$$

chord $EG \cong$ chord $FH \quad \dots \text{(corresponding chords of congruent arcs)}$

The angle inscribed in the semicircle is a right angle Prove the result by completing the following activity .



Given: $\angle ABC$ is inscribed angle in a semicircle with center M .

To prove : $\angle ABC$ is a right angle.

Proof: segment AC is a diameter of the circle.

$$\therefore m(\text{arc } AXC) = \boxed{}$$

Arc AXC is intercepted by the inscribed angle $\angle ABC$.

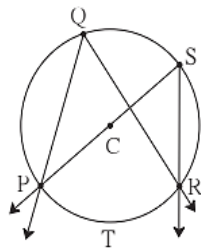
$$\angle ABC = \boxed{} \quad \dots \text{(Inscribed angle theorem)}$$

$$= \frac{1}{2} \times \boxed{}$$

$$\therefore m \angle ABC = \boxed{}$$

$\therefore \angle ABC$ is a right angle.

- 6) Prove that angles inscribed in the same arc are congruent.



Given: In a circle with centre C, $\angle PQR$ and $\angle PSR$ is inscribed in same arc PQR. Arc PTR is intercepted by the angles.
To prove : $\angle PQR \cong \angle PSR$.

Proof : $m\angle PQR = \frac{1}{2} \times [m(\text{arc PTR})]$ (i)

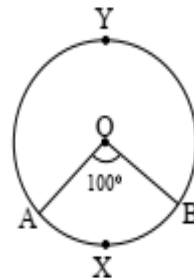
$m\angle$ $= \frac{1}{2} \times [m(\text{arc PTR})]$

$m\angle$ $= m\angle PSR$ By(i) &(ii)

$\therefore \angle PQR \cong \angle PSR$

- 7) If O is the center of the circle in the figure alongside , then complete the table from the given information.

The type of arc

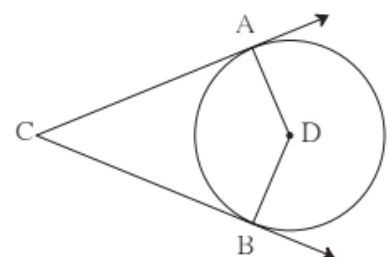


Type of circular arc	Name of circular arc	Measure of circular arc
Minor arc		
Major arc		

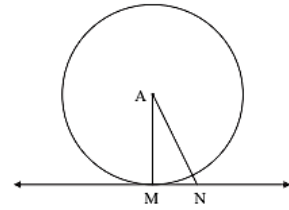
Q.4. Solve the following sub-questions. (2 marks question)

1)

In the adjoining figure circle with Centre D touches the sides of $\angle ACB$ at A and B. If $\angle ACB = 52^\circ$, find measure of $\angle ADB$.

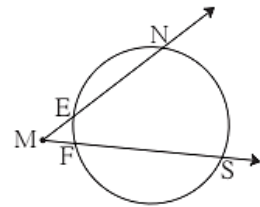


- 2) In the adjoining figure, the line MN touches the circle with center A at point M. If AN = 13 and MN = 5 then find the radius of the circle?



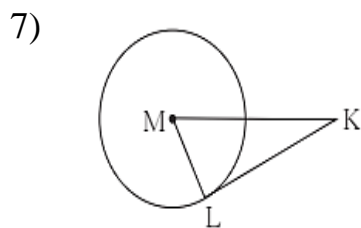
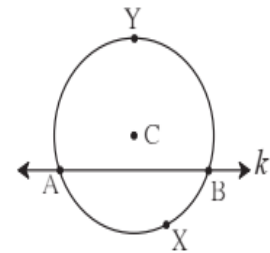
- 3) What is the distance between two parallel tangents of a circle having radius 4.5 cm? Justify your answer.

- 4) In figure, $m(\text{arc NS}) = 125^\circ$, $m(\text{arc EF}) = 37^\circ$, find the measure $\angle NMS$.



- 5) Length of a tangent segment drawn from a point which is at a distance 15 cm from the centre of a circle is 12 cm, find the diameter of the circle?

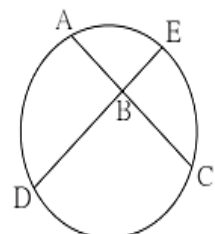
- 6) In the figure a circle with center C has $m(\text{arc AXB}) = 100^\circ$ then find central $\angle ACB$ and measure $m(\text{arc AYB})$.



In figure, M is the centre of the circle and seg KL is a tangent segment. If $MK = 12$, $KL = 6\sqrt{3}$ then find (1) Radius of the circle.

(2) Measures of $\angle K$ and $\angle M$.

- 8) In figure, chords AC and DE intersect at B. If $\angle ABE = 108^\circ$, $m(\text{arc AE}) = 95^\circ$, find $m(\text{arc DC})$.

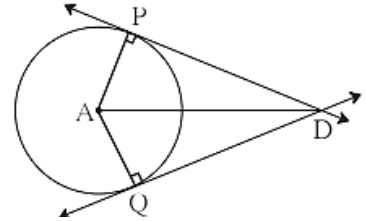


Q. 5. Complete the following activity. (3 marks each)

- 1) Tangent segments drawn from an external point to a circle are congruent, prove this theorem. Complete the following activity.

Given :

To Prove:



Proof : Draw radius AP and radius AQ and complete the following proof of the theorem.

In $\triangle PAD$ and $\triangle QAD$,

Seg PA \cong (radii of the same circle.)

Seg AD \cong Seg AD ()

$\angle APD \cong \angle AQD = 90^\circ$ (tangent theorem)

$\therefore \triangle PAD \cong \triangle QAD$ ()

$\therefore \text{seg DP} \cong \text{seg DQ}$ ()

2)

\square MRPN is cyclic, $\angle R = (5x - 13)^\circ$, $\angle N = (4x + 4)^\circ$. Find measures of $\angle R$ and $\angle N$, by completing the following activity.

Solution : \square MRPN is cyclic

The opposite angles of a cyclic square are

$$\angle R + \angle N = \text{$$

$$\therefore (5x-13)^\circ + (4x+4)^\circ = \text{$$

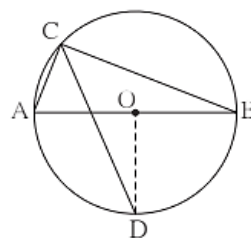
$$\therefore 9x = 189$$

$$\therefore x = \text{$$

$$\therefore \angle R = (5x-13)^\circ = \text{$$

$$\therefore \angle N = (4x+4)^\circ = \text{$$

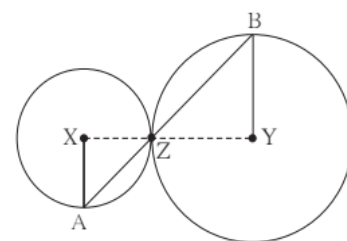
- 3) In figure , seg AB is a diameter of a circle with centre O . The bisector of $\angle ACB$ intersects the circle at point D. Prove that, seg AD \cong seg BD. Complete the following proof by filling in the blanks.



Proof Draw seg OD.

$\angle ACB = \boxed{}$ angle inscribed in semicircle
 $\angle DCB = \boxed{}$ CD is the bisector of $\angle C$
 $m(\text{arc DB}) = \boxed{}$ inscribed angle theorem
 $\angle DOB = \boxed{}$ definition of measure of an arc (I)
 seg OA \cong seg OB $\boxed{}$ (II)
 \therefore line OD is $\boxed{}$ of seg AB From (I) and (II)
 \therefore seg AD \cong seg BD

- 4) In the adjoining figure circles with centres X and Y touch each other at point Z. A secant passing through Z intersects the circles at points A and B respectively.



Prove that , radius XA \parallel radius YB.
 Fill in the blanks and complete the proof.

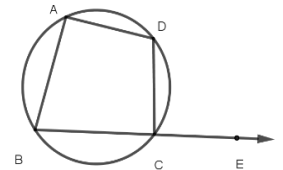
Construction : Draw segments XZ and YZ.

Proof :By theorem of touching circles, points X, Z, Y are $\boxed{}$
 $\therefore \angle XZA \cong \boxed{}$ opposite angles
 Let $\angle XZA = \angle BZY = a$ (I)
 Now, seg XA \cong seg XZ (radii of the same circle.)
 $\therefore \angle XAZ = \boxed{} = a$ (isosceles triangle theorem) (II)
 similarly, seg YB \cong seg YZ (radii of the same circle.)
 $\therefore \angle BZY = \boxed{} = a$ (isosceles triangle theorem.) (III)

∴ from (I), (II), (III),
 $\angle XAZ = \boxed{}$
 ∴ radius $XA \parallel$ radius YB $\boxed{}$)

5) An exterior angle of a cyclic quadrilateral is congruent to the angle opposite to its adjacent interior angle, to prove the theorem complete the activity .

Given : $\square ABCD$ is cyclic ,
 $\boxed{}$ is the exterior angle of $\square ABCD$



To prove : $\angle DCE \cong \angle BAD$

Proof : $\boxed{} + \angle BCD = \boxed{}$ (Angles in linear pair) (I)

$\square ABCD$ is a cyclic .

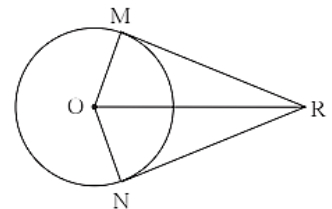
$\boxed{} + \angle BAD \boxed{}$ (Theorem of cyclic quadrilateral) (II)

By (I) and (II)

$$\angle DCE + \angle BCD \boxed{} + \angle BAD$$

$$\angle DCE \cong \angle BAD$$

6) Seg RM and seg RN are tangent segments of a circle with centre O . Prove that seg OR bisects $\angle MRN$ as well as $\angle MON$ with the help of activity.



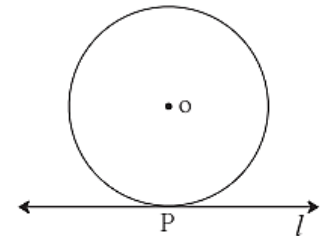
Q.6. Solve the following sub-questions. (3 marks question)

1) Prove the following theorems:

- i) Opposite angles of a cyclic quadrilateral are supplementary.
- ii) Tangent segments drawn from an external point to a circle are congruent.
- iii) Angles inscribed in the same arc are congruent.

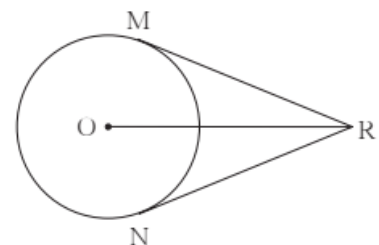
2) Line ℓ touches a circle with centre O at point P. If radius of the circle is 9 cm, answer the following.

- (i) What is $d(O, P)$ = ? Why ?
- (ii) If $d(O, Q) = 8$ cm, where does the point Q lie ?
- (iii) If $d(PQ) = 15$ cm, How many locations of point R are line on line ℓ ? At what distance will each of them be from point P ?



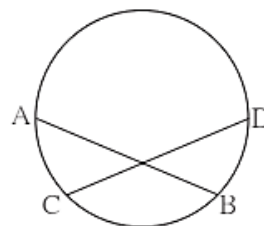
3) In the adjoining figure, O is the centre of the circle. From point R, seg RM and seg RN are tangent segments touching the circle at M and N. If $(OR) = 10$ cm and radius of the circle = 5 cm, then

- (1) What is the length of each tangent segment ?
- (2) What is the measure of $\angle MRO$?
- (3) What is the measure of $\angle MRN$?



4)

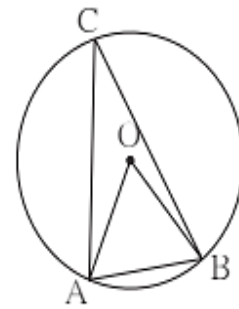
In figure ,chord $AB \cong$ chord CD ,
Prove that, arc $AC \cong$ arc BD



5)

In figure , in a circle with centre O, length of chord AB is equal to the radius of the circle. Find measure of each of the following.

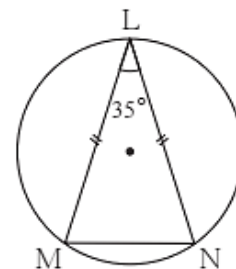
- (1) $\angle AOB$ (2) $\angle ACB$
 (3) arc AB



6)

In figure , chord $LM \cong$ chord LN , $\angle L = 35^\circ$ find (i) $m(\text{arc } MN)$

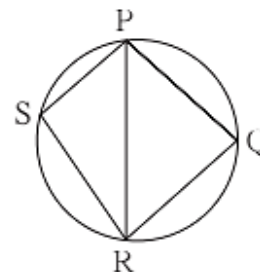
(ii) $m(\text{arc } LN)$



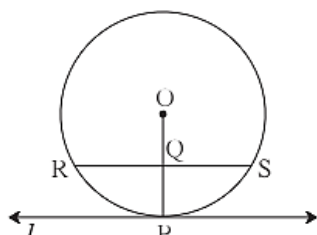
7) Prove that, any rectangle is a cyclic quadrilateral.

8)

In figure , PQRS is cyclic.
 side $PQ \cong$ side RQ . $\angle PSR = 110^\circ$,
 Find- (1) measure of $\angle PQR$
 (2) $m(\text{arc } PQR)$
 (3) $m(\text{arc } QR)$



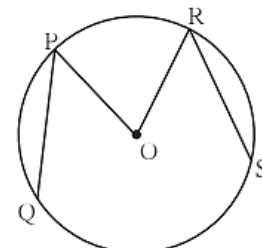
9)



In figure , line ℓ touches the circle with centre O at point P. Q is the mid point of radius OP. RS is a chord through Q such that chords $RS \parallel$ line ℓ . If $RS = 12$ find the radius of the circle

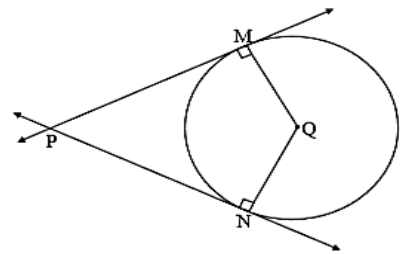
10)

In figure , O is the centre of a circle,
 chord $PQ \cong$ chord RS If $\angle POR = 70^\circ$
 and $m(\text{arc } RS) = 80^\circ$, find (1) $m(\text{arc } PR)$ (2)
 $m(\text{arc } QS)$ (3) $m(\text{arc } QSR)$



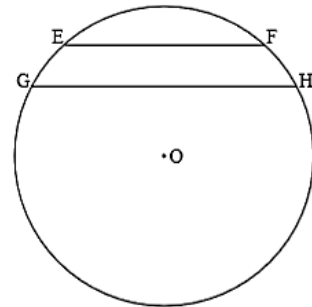
11)

In the adjoining figure circle with Centre Q touches the sides of $\angle MPN$ at M and N. If $\angle MPN = 40^\circ$, find measure of $\angle MQN$.



12)

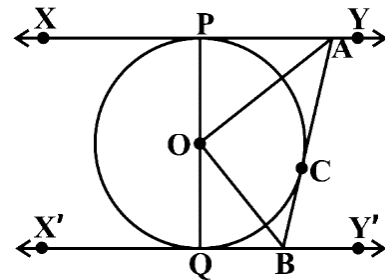
In the figure if O is the center of the circle and two chords of the circle EF and GH are parallel to each other. Show that $\angle EOG \cong \angle FOH$



Q. 7. Solve the following sub-questions. (4 marks question)

1)

In the figure segment PQ is the diameter of the circle with center O. The tangent to the circle drawn from point C on it, intersects the tangents drawn from points P and Q at points A and B respectively, prove that $\angle AOC = 90^\circ$

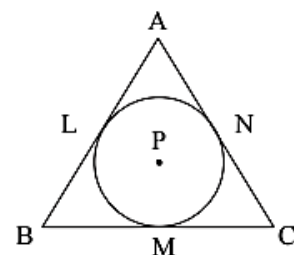


2) The chords AB and CD of the circle intersect at point M in the interior of the same circle then prove that $CM \times BD = BM \times AC$.

3)

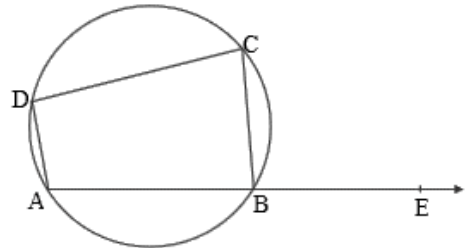
A circle with centre P is inscribed in the ΔABC . Side AB, side BC and side AC touches the circle at points L, M and N respectively. Radius of the circle is r.

Prove that : $A(\Delta ABC) = \frac{1}{2}(AB + BC + AC) \times r$



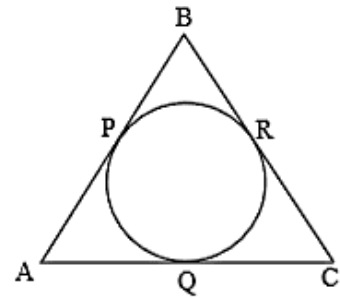
4)

In the figure $\square ABCD$ is a cyclic quadrilateral. If $m(\text{arc } ABC) = 230^\circ$. then find $\angle ABC$, $\angle CDA$, $\angle CBE$

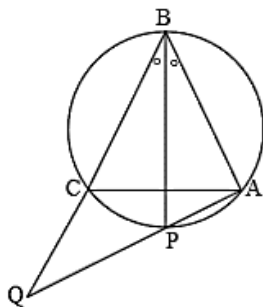


5)

The figure $\triangle ABC$ is an isosceles triangle with a perimeter of 44 cm. The sides AB and BC are congruent and the length of the base AC is 12 cm. If a circle touches all three sides as shown in the figure, then find the length of the tangent segment drawn to the circle from the point B



6)

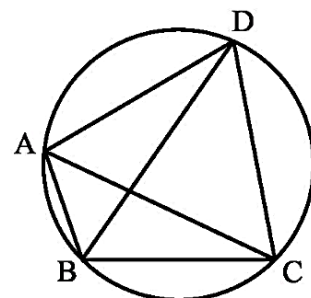


In the figure $\triangle ABC$ is an equilateral triangle. The angle bisector of $\angle B$ will intersect the circumcircle $\triangle ABC$ at point P.

Then prove that : $CQ = CA$.

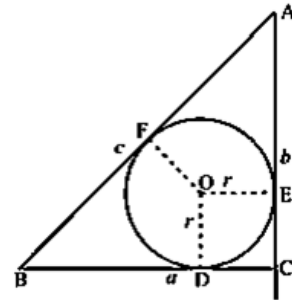
7)

In the figure quadrilateral ABCD is cyclic, If $m(\text{arc } BC) = 90^\circ$ and $\angle DBC = 55^\circ$. Then find the measure of $\angle BCD$.



- 8) Given : A circle inscribed in a right angled $\triangle ABC$. If $\angle ACB = 90^\circ$ and the radius of the circle is r .

To prove : $2r = a + b - c$



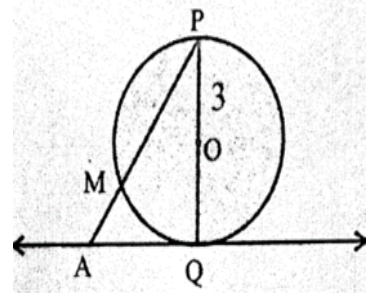
- 9) In a circle with centre P , chord AB is parallel to a tangent and intersects the radius drawn from the point of contact to its midpoint. If $AB = 16\sqrt{3}$ then find the radius of the circle.

- 10) In the figure, O is the center of the circle.

Line AQ is a tangent. If $OP = 3$

$m(\text{arc } PM) = 120^\circ$

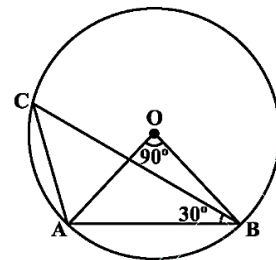
then find the length of AP ?



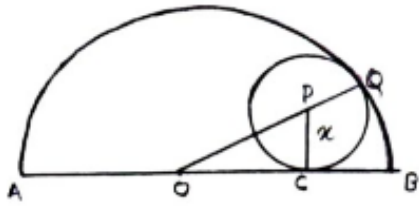
Q. 8. Solve the following sub-questions (3 marks each)

- 1) In the figure, O is the centre of the circle and $\angle AOB = 90^\circ$, $\angle ABC = 30^\circ$

Then find $\angle CAB$?



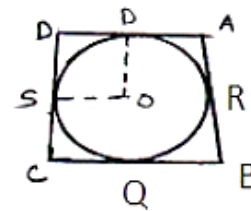
2)



In the figure a circle with center P touches the semicircle at points Q and C having center O. if diameter $AB = 10$, $AC = 6$ then find the radius x of the smaller circle?

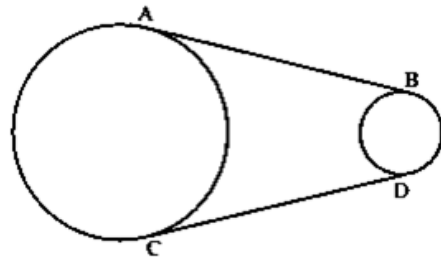
3)

In the figure a circle touches all the sides of quadrilateral ABCD from the inside. The center of the circle is O. If $AD \perp DC$ and $BC = 38$, $QB = 27$, $DC = 25$ then find the radius of the circle?



4)

If AB and CD are the common tangents in the circles of two unequal (different) radii then show that $\text{seg } AB \cong \text{seg } CD$



5) Circles with centres A, B and C touch each other externally. If $AB = 36$, $BC = 32$, $CA = 30$, then find the radii of each circle.

4. Geometric Constructions

Question 1) (A) choose the correct alternative answer for each of the following sub question. Write the correct alphabet.

1) number of tangents can be drawn to a circle from the point on the circle.

- A) 3 B) 2 C) 1 D) 0

2) The tangents drawn at the end of a diameter of a circle are.....

- A) Perpendicular B) parallel C) congruent D) can't say

3) $\triangle LMN \sim \triangle HIJ$ and $\frac{LM}{HI} = \frac{2}{3}$ then

A) $\triangle LMN$ is a smaller triangle.

B) $\triangle HIJ$ is a smaller triangle.

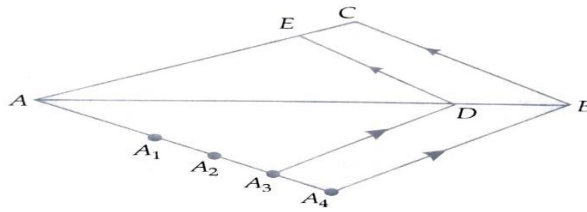
C) Both triangles are congruent.

D) Can't say.

4)number of tangents can be drawn to a circle from the point outside the circle.

- A) 2 B) 1 C) one and only one D) 0

5)



In the figure $\Delta ABC \sim \Delta ADE$ then the ratio of their corresponding sides is -----.

A) $\frac{3}{1}$

B) $\frac{1}{3}$

C) $\frac{3}{4}$

D) $\frac{4}{3}$

6) Which theorem is used while constructing a tangent to the circle by using center of a circle?

A) tangent - radius theorem.

B) Converse of tangent - radius theorem.

C) Pythagoras theorem

D) Converse of Pythagoras theorem.

7) $\Delta PQR \sim \Delta ABC$, $\frac{PR}{AC} = \frac{5}{7}$ then

A) ΔABC is greater.

B) ΔPQR is greater.

C) Both triangles are congruent.

D) Can't say.

8) $\triangle ABC \sim \triangle AQR$. $\frac{AB}{AQ} = \frac{7}{5}$ then which of the following option is true.

A) A-Q-B B) A-B-Q C) A-C-B D) A-R-B

Question 1 (B) solve the following examples (1 mark each)

- 1) Construct $\angle ABC = 60^\circ$ and bisect it.
- 2) Construct $\angle PQR = 115^\circ$ and divide it into two equal parts.
- 3) Draw Seg AB of length 9.7cm. Take point P on it such that AP = 3.5 cm and A-P-B. Construct perpendicular to seg AB from point P.
- 4) Draw seg AB of length 4.5 cm and draw its perpendicular bisector.
- 5) Draw seg AB of length 9 cm and divide it in the ratio 3:2.
- 6) Draw a circle of radius 3 cm and draw a tangent to the circle from point P on the circle.

Question 2) (A) Solve the following examples as per the instructions given in the activity. (2 marks each)

1) Draw a circle and take any point P on the circle. Draw ray OP



Draw perpendicular to ray OP from point P.

2) Draw a circle with center O and radius 3cm



Take any point P on the circle.



Draw ray OP.



Draw perpendicular to ray OP from point P

1) To draw tangents to the circle from the end points of the diameter of the circle.

Construct a circle with center O. Draw any diameter AB of it.



Draw ray OA and OB



Construct perpendicular to ray OA from point A



Construct perpendicular to Ray OB from point B

Question 2) (B) Solve the following examples (2 marks each)

- 1) Draw a circle of radius 3.4 cm take any point P on it. Draw tangent to the circle from point P.
- 2) Draw a circle of radius 4.2 cm take any point M on it. Draw tangent to the circle from point M.
- 3) Draw a circle of radius 3 cm. Take any point K on it. Draw a tangent to the circle from point K without using center of the circle.
- 4) Draw a circle of radius 3.4 cm. Draw a chord MN 5.7 cm long in a circle. Draw a tangent to the circle from point M and point N.
- 5) Draw a circle of 4.2 cm. Draw a tangent to the point P on the circle without using the center of the circle.
- 6) Draw a circle with a diameter AB of length 6 cm. Draw a tangent to the circle from the endpoints of the diameter.
- 7) Draw seg AB = 6.8 cm. Draw a circle with diameter AB. Draw points C on the circle apart from A and B. Draw line AC and line CB Write the measure of angle ACB .

Question 3) (A) Do the activity as per the given instructions. (3 marks each)

1) Complete the following activity to draw tangents to the circle.

- a) Draw a circle with radius 3.3 cm and center O. Draw chord PQ of length 6.6cm.. Draw ray OP and ray OQ.
- b) Draw a line perpendicular to the ray OP from P.

c) Draw a line perpendicular to the ray OQ from Q.

2) **Draw a circle with center O. Draw an arc AB of 100° measure.**

Perform the following steps to draw tangents to the circle from point A and B.

a) Draw a circle with any radius and center P.

b) Take any point A on the circle.

c) Draw ray PB such $\angle APB = 100^\circ$.

d) Draw perpendicular to ray PA from point A.

e) Draw perpendicular to ray PB from point B.

3) **Do the following activity to draw tangents to the circle without using center of the circle.**

a) Draw a circle with radius 3.5 cm and take any point C on it.

b) Draw chord CB and an inscribed angle CAB

c) With the center A and any convenient radius draw an arc intersecting the sides of angle BAC in points M and N.

d) Using the same radius draw and center C, draw an arc intersecting the chord CB at point R.

e) Taking the radius equal to $d(MN)$ and center R, draw an arc intersecting the arc drawn in the previous step. Let D be the point of intersection of these arcs. Draw line CD. Line CD is the required tangent to the circle.

Question 3 B) Solve the following examples (3 marks each):

1) $\triangle ABC \sim \triangle PBQ$, In $\triangle ABC$, $AB = 3$ cm, $\angle B = 90^\circ$, $BC = 4$ cm.

Ratio of the corresponding sides of two triangles is 7:4. Then construct

$\triangle ABC$ and $\triangle PBQ$

2) $\triangle RHP \sim \triangle NED$, In $\triangle NED$, $NE = 7$ cm, $\angle D = 30^\circ$, $\angle N = 20^\circ$ and $\frac{HP}{ED} = \frac{4}{5}$. Then

construct $\triangle RHP$ and $\triangle NED$.

3) $\triangle PQR \sim \triangle ABC$, In $\triangle PQR$ $PQ = 3.6$ cm, $QR = 4$ cm, $PR = 4.2$ cm ratio of the corresponding sides of triangle is 3:4 then construct $\triangle PQR$ and $\triangle ABC$.

4) Construct an equilateral $\triangle ABC$ with side 5 cm. $\triangle ABC \sim \triangle LMN$, ratio the corresponding sides of triangle is 6:7 then construct $\triangle LMN$ and $\triangle ABC$

5) Draw a circle with center O and radius 3.4. Draw a chord MN of length 5.7 cm in a circle. Draw a tangent to the circle from point M and N.

6) Draw a circle with center O and radius 3.6 cm. draw a tangent to the circle from point B at a distance of 7.2 cm from the center of the circle.

7) Draw a circle with center C and radius 3.2 cm. Draw a tangent to the circle from point P at a distance of 7.5 cm from the center of the circle.

8) Draw a circle with a radius of 3.5 cm. Take the point K anywhere on the circle. Draw a tangent to the circle from K (without using the center of the circle).

9) Draw a circle of radius 4.2 cm. Draw arc PQ measuring 120°
Draw a tangent to the circle from point P and point Q.

10) Draw a circle of radius 4.2 cm. Draw a tangent to the circle from a point 7 cm away from the center of the circle.

11) Draw a circle of radius 3 cm and draw chord XY 5 cm long. Draw the tangent of the circle passing through point X and point Y (without using the center of the circle).

Question 4) solve the following examples. (4 marks each)

1) $\triangle AMT \sim \triangle AHE$, In $\triangle AMT$, $AM = 6.3$ cm

$\angle MAT = 120^\circ$, $AT = 4.9$ cm, $\frac{AM}{HA} = \frac{7}{5}$ then construct $\triangle AMT$ and $\triangle AHE$.

2) $\triangle RHP \sim \triangle NED$, In $\triangle NED$, $NE = 7$ cm. $\angle D = 30^\circ$, $\angle N = 20^\circ$, $\frac{HP}{ED} = \frac{4}{5}$ then construct $\triangle RHP$ and $\triangle NED$.

3) $\triangle ABC \sim \triangle PBR$, $BC = 8$ cm, $AC = 10$ cm, $\angle B = 90^\circ$,

$\frac{BC}{BR} = \frac{5}{4}$ then construct $\triangle ABC$ and $\triangle PBR$

4) $\triangle AMT \sim \triangle AHE$, In $\triangle AMT$ $AM=6.3$ cm, $\angle TAM=50^\circ$, $AT=5.6$ cm, $\frac{AM}{AH}=\frac{7}{5}$, then construct $\triangle AMT$ and $\triangle AHE$.

5) Draw a circle with radius 3.3cm. Draw a chord PQ of length 6.6cm . Draw tangents to the circle at points P and Q. Write your observation about the tangents.

6) Draw a circle with center O and radius 3 cm. Take the point P and the point Q at a distance of 7 cm from the center of the circle on the opposite side of the circle at the intersection passing through the center of the circle Draw a tangent to the circle from the point P and the point Q.

Question 5) Solve the following examples (3 marks each)

1) Draw a circle with radius 4cm and construct two tangents to a circle such that when those two tangents intersect each other outside the circle they make an angle of 60° with each other.

2) $AB = 6$ cm, $\angle BAQ = 50^\circ$. Draw a circle passing through A and B so that AQ is the tangent to the circle.

3) Draw a circle with radius 3 cm. Construct a square such that each of its side will touch the circle from outside.

4) Take points P and Q on the same side of line AB Draw a circle passing through point P and point Q so that it touches line AB.

5) Draw any circle with radius greater than 1.8 cm and less than 3 cm.

Draw a chord AB 3.6 cm long in this circle. Tangent to the circle passing through A and B without using the center of the circle

6) Draw a circle with center O and radius 3 cm. Take point P outside the circle such that $d(O, P) = 4.5$ cm. Draw tangents to the circle from point P.

7) Draw a circle with center O and radius 2.8 cm. Take point P in the exterior of a circle such that tangents PA and PB drawn from point P make an angle $\angle APB$ of measure 70° .

8) Point P is at a distance of 6 cm from line AB. Draw a circle of radius 4cm passing through point P so that line AB is the tangent to the circle.

.....

...

Coordinate Geometry

Q. 1 A) MCQ

- 1) Point P is midpoint of segment AB where A(- 4,2) and B(6,2) then the coordinates of P are -----
A) (-1, 2) B) (1, 2) C) (1, - 2) D) (-1, - 2)
- 2) The distance between Point P (2 , 2) and Q (5, x) is 5 cm then the value of x = -----
A) 2 B) 6 C) 3 D) 1
- 3) The distance between points P (-1 , 1) and Q(5, -7) is -----..
A) 11 cm B) 10 cm C) 5 cm D) 7 cm
- 4) If the length of the segment joining point L (x , 7) and point M(1, 15) is 10 cm then the value of x is -----
A) 7 B) 7 or -5 C) - 1 D) 1
- 5) Find distance between point A (-3 , 4) and origin O.
A) 7 cm B) 10 cm C) 5 cm D) -5 cm
- 6) If point P (1 , 1) divide segment joining point A and point B (-1 , -1) in the ratio 5 : 2 then the coordinates of A are -----
A)(3 ,3) B)(6, 6) C)(2, 2) D)(1, 1)
- 7) If segment AB is parallel Y-axis and coordinates of A are (1, 3) then the coordinates of B are -----
A)(3 ,1) B)(5, 3) C)(3, 0) D)(1, -3)
- 8) If point P is midpoint of segment joining point A (-4, 2) and point B(6, 2) then the coordinates of P are -----
A)(-1, 2) B)(1 , 2) C)(1 , -2) D) (-1, - 2)

9) If point P divides segment AB in the ratio 1:3 where A(-5 , 3) and B(3 , -5) then the coordinates of P are -----

- A)(-2, -2) B)(-1 , -1) C) (-3 , 1) D) (1, - 3)

10) If the sum of x-coordinates of the vertices of a triangle is 12 and the sum of Y-coordinates is 9 then the coordinates of centroid are -----

- A)(12 , 9) B)(9 , 12) C)(4, 3) D)(3 ,4)

Q. 1 B. Solve the following (1 mark each)

- 1) Find the coordinates of the point of intersection of the graph of the equation $X = 2$ and $y = -3$.
- 2) Find distance between point A (7, 5) and B (2, 5).
- 3) The coordinates of diameter AB of a circle are A (2, 7) and B (4 , 5) then find the coordinates of the centre.
- 4) Write the X-coordinate and Y-coordinate of point P(- 5 , 4).
- 5) What are the coordinates of origin?
- 6) Find distance of point A(6, 8) from origin:
- 7) Find coordinates of midpoint joining (-2 ,6) and (8 ,2)
- 8) Find the coordinates of centroid of a triangle whose vertices are (4, 7) , (8, 4) and (7 ,11).
- 9) Find distance between point O(0, 0) and B (-5 , 12).
- 10) Find coordinates of midpoint of point (0, 2) and (12, 14).

Q. 2 A) Complete the activity (each of 2 mark)

- 1) Find distance between point Q (3 , - 7) and point R (3, 3)

Solution: Suppose Q (x_1 , y_1) and point R (x_2 , y_2)

$$X_1 = 3 , y_1 = -7 \quad \text{and} \quad x_2 = 3 , y_2 = 3$$

Using distance formula,

$$d (Q, R) = \sqrt{\quad \quad \quad}$$

$$\therefore d(Q, R) = \sqrt{\boxed{} + 100}$$

$$\therefore d(Q, R) = \sqrt{\boxed{}}$$

$$\therefore d(Q, R) = \boxed{}$$

2) Find distance between point A(-1, 1) and point B (5, -7) :

Solution: - Suppose A(x₁, y₁) and B(x₂, y₂)

$$x_1 = -1, y_1 = 1 \quad \text{and} \quad x_2 = 5, y_2 = -7$$

Using distance formula,

$$d(A, B) = \sqrt{(x_2 - x_1)^2 + (y_2 - y_1)^2}$$

$$\therefore d(A, B) = \sqrt{\boxed{} + ((-7) - \boxed{})^2}$$

$$\therefore d(A, B) = \sqrt{\boxed{}}$$

$$\therefore d(A, B) = \boxed{}$$

3) Find coordinates of the midpoint of a segment joining point A(-1, 1) and point B(5, -7).

Solution: - Suppose A(x₁, y₁) and B(x₂, y₂)

$$x_1 = -1, y_1 = 1 \quad \text{and} \quad x_2 = 5, y_2 = -7$$

Using midpoint formula,

$$\therefore \text{Coordinates of midpoint of segment AB} = \left(\frac{x_1 + x_2}{2}, \frac{y_1 + y_2}{2} \right) = \left(\frac{\boxed{}}{2}, \frac{\boxed{}}{2} \right)$$

$$\therefore \text{Coordinates of the midpoint} = \left(\frac{4}{2}, \frac{\boxed{}}{2} \right)$$

$$\therefore \text{Coordinates of the midpoint} = (2, \boxed{})$$

4) The coordinates of the vertices of a triangle ABC are A (-7, 6), B(2, -2) and C(8, 5) find coordinates of its centroid.

Solution : - Suppose A(x_1, y_1) and B(x_2, y_2) and C (x_3, y_3)

$$x_1 = -7, y_1 = 6 \text{ and } x_2 = 2, y_2 = -2 \text{ and } x_3 = 8, y_3 = 5$$

Using Centroid formula

\therefore Coordinates of the centroid of a triangle

$$ABC = \left(\frac{x_1 + x_2 + x_3}{3}, \frac{y_1 + y_2 + y_3}{3} \right) = \left(\frac{\boxed{}}{3}, \frac{\boxed{}}{3} \right)$$

\therefore Coordinates of the centroid of a triangle ABC = $\left(\frac{3}{3}, \boxed{} \right)$

\therefore Coordinates of the centroid of a triangle ABC = $\left(1, \boxed{} \right)$

Q. 2 Solve (Each of 2 marks)

- 1) The point Q divides segment joining A (3, 5) and B (7, 9) in the ratio 2 : 3. Find the X-coordinate of Q.
- 2) If the distance between point L (x, 7) and point M (1, 15) is 10 then find the value of X.
- 3) Find the coordinates of midpoint of segment joining (22, 20) and (0, 16)
- 4) Find distance CD where C(-3a, a), D(a, -2a).
- 5) Show that the point(11, -2) is equidistant from (4, -3) and (6, 3).

Q. 3 A) Complete the activity (Each of 3 marks)

- 1) If the point P (6,7) divides the segment joining A (8, 9) and B(1, 2) in some ratio. Find that ratio.

Solution : Point P divides segment AB in the ratio m : n.

$$A (8, 9) = (x_1, y_1), B (1, 2) = (x_2, y_2) \text{ and } P (6, 7) = (x, y)$$

Using Section formula of internal division,

$$\therefore 7 = \frac{m(\square) + n(9)}{m+n}$$

$$\therefore 7m + 7n = \square + 9n$$

$$\therefore 7m - \square = 9n - \square$$

$$\therefore \square = 2n$$

$$\therefore \frac{m}{n} = \square$$

1) From the figure given alongside find the length of the median AD of triangle ABC .

Complete the activity.

Solution :- Here A (-1 , 1), B(5, -3), C (3, 5) and

suppose D (x,y) are coordinates of point D.

Using midpoint formula,

$$X = \frac{5+3}{2}$$

$$y = \frac{-3+5}{2}$$

$$\therefore x = \square$$

$$\therefore y = \square$$

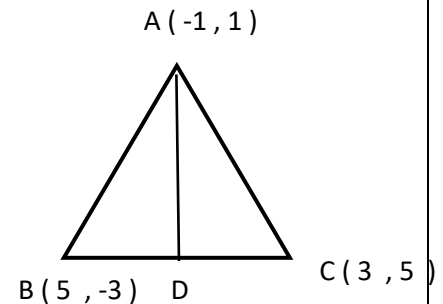
Using distance formula,

$$\therefore AD = \sqrt{(4 - \square)^2 + (1 - 1)^2}$$

$$\therefore AD = \sqrt{(\square)^2 + (0)^2}$$

$$\therefore AD = \sqrt{\square}$$

$$\therefore \text{The length of median AD} = \square$$



Q. 3 B) Solve the following (Each of 3 marks)

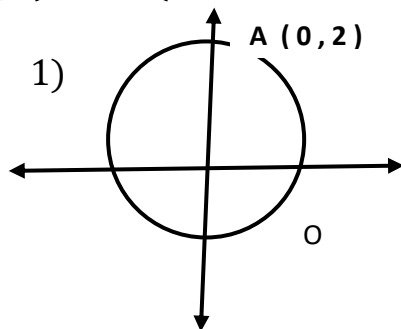
- 1) Show that P(-2 , 2), Q (2, 2) and R (2, 7) are vertices of a right angled triangle.
- 2) Show that the point (0 , 9) is equidistant from the points (-4,1) and (4 , 1).

- 3) Point $P(-4, 6)$ divides point $A(-6, 10)$ and $B(m, n)$ in the ratio $2:1$ then find the coordinates of point B .

Q. 4 Solve (Each of 4 marks)

- 1) Show that points $A(-4, -7)$, $B(-1, 2)$, $C(8, 5)$ and $D(5, -4)$ are the vertices of a parallelogram $ABCD$.
- 2) Show that the points $(0, -1)$, $(8, 3)$, $(6, 7)$ and $(-2, 3)$ are vertices of a rectangle.
- 3) Show that the points $(2, 0)$, $(-2, 0)$ and $(0, 2)$ are vertices of a triangle. State the type of triangle with reason.
- 4) If $A(5, 4)$, $B(-3, -2)$ and $C(1, -8)$ are the vertices of a ΔABC . Segment AD is median. Find the length of seg AD :
- 5) Show that $A(1, 2)$, $(1, 6)$, $C(1 + 2\sqrt{3}, 4)$ are vertices of an equilateral triangle.

Q.5) Solve (Each of 3 marks)



Seg OA is the radius of a circle with centre O .

The coordinates of point A is $(0, 2)$ then

decide whether the point $B(1, 2)$ is on the circle?

- 2) Find the ratio in which Y -axis divides the point $A(3, 5)$ and point $B(-6, 7)$. Find the coordinates of that point.
- 3) The points $(7, -6)$, $(2, K)$ and $(h, 18)$ are the vertices of triangle. If $(1, 5)$ are the coordinates of centroid. Find the value of h and k .
- 4) Using distance formula decide whether the points $(4, 3)$, $(5, 1)$ and $(1, 9)$ are collinear or not?

Trigonometry

Que.) 1 A) .Choose the correct alternative from those given below each question : (1 mark for each MCQ)

1. $\cos \theta \cdot \sec \theta = ?$

- A) 1 B) 0 C) $\frac{1}{2}$ D) $\sqrt{2}$

2. $\sec 60^\circ = ?$

- A) $\frac{1}{2}$ B) 2 C) $\frac{2}{\sqrt{3}}$ D) $\sqrt{2}$

3. $1 + \cot^2 \theta = ?$

- A) $\tan^2 \theta$
 $\cos^2 \theta$ B) $\sec^2 \theta$ C) $\operatorname{cosec}^2 \theta$ D)

4. $\cot \theta \cdot \tan \theta = ?$

- A) 1 B) 0 C) 2 D) $\sqrt{2}$

5. $\sec^2 \theta - \tan^2 \theta = ?$

- A) 0 B) 1 C) 2 D) $\sqrt{2}$

6. $\sin^2 \theta + \sin^2(90 - \theta) = ?$

- A) 0 B) 1 C) 2 D) $\sqrt{2}$

7. $\frac{1 + \cot^2 A}{1 + \tan^2 A} = ?$

- A) $\tan^2 \theta$ B) $\sec^2 \theta$ C) $\operatorname{cosec}^2 \theta$ D) $\cot^2 \theta$

8. $\sin \theta = \frac{1}{2}$ then $\theta = ?$

- A) 30° B) 45° C) 60° D) 90°

9. $\tan(90-\theta) = ?$

- A) $\sin \theta$ B) $\cos \theta$ C) $\cot \theta$ D) $\tan \theta$

10. $\cos 45^\circ = ?$

- A) $\sin 45^\circ$ B) $\sec 45^\circ$ C) $\cot 45^\circ$ D) $\tan 45^\circ$

11. If $\sin \theta = \frac{3}{5}$ then $\cos \theta = ?$

- A) $\frac{5}{3}$ B) $\frac{3}{5}$ C) $\frac{4}{5}$ D) $\frac{5}{4}$

12. Which is not correct formula ?

A) $1 + \tan^2 \theta = \sec^2 \theta$

B) $1 + \sec^2 \theta = \tan^2 \theta$

C) $\operatorname{cosec}^2 \theta - \cot^2 \theta = 1$

D) $\sin^2 \theta + \cos^2 \theta = 1$

13. If $\angle A = 30^\circ$ then $\tan 2A = ?$

- A) 1 B) 0 C) $\frac{1}{\sqrt{3}}$ D) $\sqrt{3}$

Que.) 1 B). Solve the following questions : (1 mark each)

1. $\frac{1 - \tan^2 45^\circ}{1 + \tan^2 45^\circ} = ?$

2. If $\tan \theta = \frac{13}{12}$ then $\cot \theta = ?$

3. Prove that $\operatorname{cosec} \theta \times \sqrt{1 - \cos^2 \theta} = 1$.

4. If $\tan \theta = 1$ then $\sin \theta \cdot \cos \theta = ?$

5. If $2 \sin \theta = 3 \cos \theta$ then $\tan \theta = ?$

6. If $\cot (90 - A) = 1$ then $\angle A = ?$

7. If $1 - \cos^2 \theta = \frac{1}{4}$ then $\theta = ?$

8. Prove that $\frac{\cos (90 - A)}{\sin A} = \frac{\sin (90 - A)}{\cos A}$.

9. If $\tan \theta \times \boxed{} = \sin \theta$ then $\boxed{} = ?$

10. $(\sec \theta + \tan \theta) \cdot (\sec \theta - \tan \theta) = ?$

11. $\frac{\sin 75^\circ}{\cos 15^\circ} = ?$

Que.) 2 A). Complete the following activities (2 marks each)

*** (Write complete answers, don't just fill the boxes)**

1. Prove that $\cos^2 \theta \cdot (1 + \tan^2 \theta) = 1$. Complete the activity given below.

Activity \Rightarrow L . H . S. = $\boxed{}$
= $\cos^2 \theta \times \boxed{} \dots (1 + \tan^2 \theta = \boxed{})$
= $(\cos \theta \times \boxed{})^2$
= 1^2
= 1
= R . H . S.

2. $\frac{5}{\sin^2 \theta} - 5 \cot^2 \theta$, Complete the activity given below.

Activity $\Rightarrow \frac{5}{\sin^2 \theta} - 5 \cot^2 \theta$

$$= \boxed{} \left(\frac{1}{\sin^2 \theta} - \cot^2 \theta \right)$$

$$= 5 \left(\boxed{} - \cot^2 \theta \right) \quad \dots\dots\dots \left(\frac{1}{\sin^2 \theta} = \boxed{} \right)$$

)

$$= 5 (1)$$

$$= \boxed{}$$

3. If $\sec \theta + \tan \theta = \sqrt{3}$. Complete the activity to find the value of $\sec \theta - \tan \theta$

Activity $\Rightarrow \boxed{} = 1 + \tan^2 \theta \dots\dots\dots$ (Fundamental trigonometric identity)

$$\boxed{} - \tan^2 \theta = 1$$

$$(\sec \theta + \tan \theta) \cdot (\sec \theta - \tan \theta) = \boxed{}$$

$$\sqrt{3} \cdot (\sec \theta - \tan \theta) = 1$$

$$(\sec \theta - \tan \theta) = \boxed{}$$

4. If $\tan \theta = \frac{9}{40}$. Complete the activity to find the value of $\sec \theta$.

Activity $\Rightarrow \sec^2 \theta = 1 + \boxed{} \dots\dots\dots$ (Fundamental trigonometric identity)

$$\sec^2 \theta = 1 + \boxed{}^2$$

$$\sec^2 \theta = 1 + \boxed{}$$

$$\sec \theta = \boxed{}$$

Que.) 2 B). Solve the following questions : (2 marks each)

1. If $\cos \theta = \frac{24}{25}$ then $\sin \theta = ?$

2. Prove that $\frac{\sin^2\theta}{\cos\theta} + \cos\theta = \sec\theta$.
3. Prove that $\frac{1}{\operatorname{cosec}\theta - \cot\theta} = \operatorname{cosec}\theta + \cot\theta$.
4. If $\cos(45^\circ + x) = \sin 30^\circ$ then $x = ?$
5. If $\tan\theta + \cot\theta = 2$ then $\tan^2\theta + \cot^2\theta = ?$
6. Prove that $\sec^2\theta + \operatorname{cosec}^2\theta = \sec^2\theta \times \operatorname{cosec}^2\theta$.
7. Prove that $\cot^2\theta \times \sec^2\theta = \cot^2\theta + 1$.
8. If $3 \sin\theta = 4 \cos\theta$ then $\sec\theta = ?$
9. If $\sin 3A = \cos 6A$ then $\angle A = ?$
10. Prove that $\sec^2\theta - \cos^2\theta = \tan^2\theta + \sin^2\theta$.
11. Prove that $\frac{\tan A}{\cot A} = \frac{\sec^2 A}{\operatorname{cosec}^2 A}$.
12. Prove that $\frac{\sin\theta + \tan\theta}{\cos\theta} = \tan\theta (1 + \sec\theta)$.
13. Prove that $\frac{\cos^2\theta}{\sin\theta} + \sin\theta = \operatorname{cosec}\theta$.
14. Prove that $\frac{\cos\theta}{1 + \sin\theta} = \frac{1 - \sin\theta}{\cos\theta}$.

Que.) 3 A). Complete the following activities (3 marks each)

*** (Write complete answers, don't just fill the boxes)**

1. $\sin^4 A - \cos^4 A = 1 - 2\cos^2 A$, For proof of this complete the activity given below.

$$\begin{aligned}
 \text{Activity } \Rightarrow \text{ L . H . S. } &= \boxed{} \\
 &= (\sin^2 A + \cos^2 A) (\boxed{}) \\
 &= 1 (\boxed{}) \dots\dots\dots (\sin^2 A + \boxed{} = 1)
 \end{aligned}$$

$$= \boxed{} - \cos^2 A \dots\dots\dots (\sin^2 A = 1 - \cos^2 A)$$

$$= \boxed{}$$

= R. H. S.

2. $\tan^2 \theta - \sin^2 \theta = \tan^2 \theta \times \sin^2 \theta$.For proof of this complete the activity given below.

Activity \Rightarrow L . H . S. = $\boxed{}$

$$= \boxed{} \left(1 - \frac{\sin^2 \theta}{\tan^2 \theta} \right)$$

$$= \tan^2 \theta \left(1 - \frac{\boxed{}}{\frac{\sin^2 \theta}{\cos^2 \theta}} \right)$$

$$= \tan^2 \theta \left(1 - \frac{\sin^2 \theta}{1} \times \frac{\cos^2 \theta}{\boxed{}} \right)$$

$$= \tan^2 \theta \left(1 - \boxed{} \right)$$

$$= \tan^2 \theta \times \boxed{} \dots\dots\dots (1 - \cos^2 \theta = \sin^2 \theta)$$

= R. H. S.

3. If $\tan \theta = \frac{7}{24}$ then To find value of $\cos \theta$ complete the activity given below.

Activity $\Rightarrow \sec^2 \theta = 1 + \boxed{} \dots\dots\dots$ (Fundamental tri. identity)

$$\sec^2 \theta = 1 + \boxed{}^2$$

$$\sec^2 \theta = 1 + \frac{\boxed{}}{576}$$

$$\sec^2 \theta = \frac{\boxed{}}{576}$$

$$\sec \theta = \boxed{}$$

$$\cos \theta = \boxed{} \dots\dots\dots(\cos \theta = \frac{1}{\sec \theta})$$

4. To prove $\cot \theta + \tan \theta = \operatorname{cosec} \theta \times \sec \theta$. Complete the activity given below.

$$\begin{aligned} \text{Activity } \Rightarrow \text{ L . H . S. } &= \boxed{} \\ &= \frac{\boxed{}}{\sin \theta} = \frac{\sin \theta}{\cos \theta} \\ &= \frac{\cos^2 \theta + \sin^2 \theta}{\boxed{}} \\ &= \frac{1}{\sin \theta \cdot \cos \theta} \dots\dots\dots(\cos^2 \theta + \sin^2 \theta = \boxed{}) \\ &= \frac{1}{\sin \theta} \times \frac{1}{\boxed{}} \\ &= \boxed{} \\ &= \text{R. H. S.} \end{aligned}$$

Que.) 3 B). Solve the following questions : (3 marks each)

1. If $\sec \theta = \frac{41}{40}$ then find values of $\sin \theta$, $\cot \theta$, $\operatorname{cosec} \theta$.
2. If $5 \sec \theta - 12 \operatorname{cosec} \theta = 0$ then find values of $\sin \theta$, $\sec \theta$.
3. Prove that $\frac{\tan(90-\theta) + \cot(90-\theta)}{\operatorname{cosec} \theta} = \sec A$.
4. Prove that $\cot^2 \theta - \tan^2 \theta = \operatorname{cosec}^2 \theta - \sec^2 \theta$.
5. Prove that $\frac{1 + \sin \theta}{1 - \sin \theta} = (\sec \theta + \tan \theta)^2$.
6. Prove that $\frac{\sin \theta}{\sec \theta + 1} + \frac{\sin \theta}{\sec \theta - 1} = 2 \cot \theta$.
7. Prove that $\frac{\sec A}{\tan A + \cot A} = \sin A$.
8. Prove that $\frac{\sin \theta + \operatorname{cosec} \theta}{\sin \theta} = 2 + \cot^2 \theta$.

9. Prove that $\frac{\cot A}{1-\cot A} + \frac{\tan A}{1-\tan A} = -1$.

10. Prove that $\sqrt{\frac{1+\cos A}{1-\cos A}} = \operatorname{cosec} A + \cot A$.

11. Prove that $\sin^4 A - \cos^4 A = 1 - 2\cos^2 A$.

12. Prove that $\sec^2 \theta - \cos^2 \theta = \tan^2 \theta + \sin^2 \theta$.

13. Prove that $\operatorname{cosec} \theta - \cot \theta = \frac{\sin \theta}{1+\cos \theta}$.

14. In ΔABC , $\cos C = \frac{12}{13}$ and $BC = 24$ then $AC = ?$

15. Prove that $\frac{1+\sec A}{\sec A} = \frac{\sin^2 A}{1-\cos A}$.

16. If $\sin A = \frac{3}{5}$ then show that $4 \tan A + 3 \cot A = 6 \cos A$

17. Prove that $\frac{1+\sin B}{\cos B} + \frac{\cos B}{1+\sin B} = 2 \sec B$.

Que. 4 Solve the following questions : (Challenging questions, 4 marks each)

1. Prove that

$$\sin^2 A \cdot \tan A + \cos^2 A \cdot \cot A + 2 \sin A \cdot \cos A = \tan A + \cot A$$

2. Prove that $\sec^2 A - \operatorname{cosec}^2 A = \frac{2\sin^2 A - 1}{\sin^2 A \cdot \cos^2 A}$.

3. Prove that $\frac{\cot A + \operatorname{cosec} A - 1}{\cot A - \operatorname{cosec} A + 1} = \frac{1+\cos A}{\sin A}$.

4. Prove that $\sin \theta (1 - \tan \theta) - \cos \theta (1 - \cot \theta) = \operatorname{cosec} \theta - \sec \theta$

5. If $\cos A = \frac{2\sqrt{m}}{m+1}$ then Prove that $\operatorname{cosec} A = \frac{m+1}{m-1}$.

6. If $\sec A = x + \frac{1}{4x}$ then show that $\sec A + \tan A = 2x$ or $\frac{1}{2x}$.

7. In ΔABC , $\sqrt{2} AC = BC$, $\sin A = 1$, $\sin^2 A + \sin^2 B + \sin^2 C = 2$
then $\angle A = ?$ $\angle B = ?$ $\angle C = ?$

8. Prove that $\sin^6 A + \cos^6 A = 1 - 3 \sin^2 A \cdot \cos^2 A$.

9. Prove that $2(\sin^6 A + \cos^6 A) - 3(\sin^4 A + \cos^4 A) + 1 = 0$.

10. Prove that $\frac{\cot A}{1 - \tan A} + \frac{\tan A}{1 - \cot A} = 1 + \tan A + \cot A = \sec A \cdot \operatorname{cosec} A + 1$

Que. 5 Solve the following questions : (Creative questions, 3 marks each)

1. If $3 \sin A + 5 \cos A = 5$ then show that $5 \sin A - 3 \cos A = \pm 3$.

2. If $\cos A + \cos^2 A = 1$ then $\sin^2 A + \sin^4 A = ?$

3. If $\operatorname{cosec} A - \sin A = p$ आणि $\sec A - \cos A = q$ then prove that

$$(p^2 q)^{\frac{2}{3}} + (p q^2)^{\frac{2}{3}} = 1$$

4. Show that $\tan 7^\circ \times \tan 23^\circ \times \tan 60^\circ \times \tan 67^\circ \times \tan 83^\circ = \sqrt{3}$.

5. If $\sin \theta + \cos \theta = \sqrt{3}$ then show that $\tan \theta + \cot \theta = 1$.

6. If $\tan \theta - \sin^2 \theta = \cos^2 \theta$ then show that $\sin^2 \theta = \frac{1}{2}$.

7. Prove that

$$(1 - \cos^2 A) \cdot \sec^2 B + \tan^2 B (1 - \sin^2 A) = \sin^2 A + \tan^2 B$$

7. Mensuration

Q. 1 A) MCQ - (1 Mark Each)

- 1) If the dimensions of a cuboid in cm are $16 \times 14 \times 20$, then its total surface area is.....
 - A) 4480 cm^2
 - B) 1648 cm^2
 - C) 824 cm^2
 - D) 1740 cm^2
- 2) The total surface area of hemisphere is $300 \pi \text{ cm}^2$, then find its radius.
 - A) 8 cm
 - B) 12 cm
 - C) 10 cm
 - D) 9 cm
- 3) Find the perimeter of a sector of a circle if its measure is 90° and radius is 7 cm.
 - A) 25 cm
 - B) 44 cm
 - C) 36 cm
 - D) 56 cm
- 4) The radius of a cone is 7 cm and height is 24 cm. What is its curved surface area?
 - A) 550 cm^2
 - B) 110 cm^2
 - C) 440 cm^2
 - D) 330 cm^2
- 5) For a cuboid $l^2 + b^2 + h^2 = 484 \text{ cm}^2$ then what is the length of its diagonal?
 - A) 12 cm
 - B) 22 cm
 - C) 11 cm
 - D) 24 cm
- 6) If the radius of the sector is 6 and length of its corresponding arc is 14, then area of the sector is.....
 - A) 35
 - B) 84
 - C) 42
 - D) 24
- 7) Find the ratio of the volumes of a cylinder and cone having equal radius and equal height.
 - A) 1 : 3
 - B) 3 : 1
 - C) 2 : 1
 - D) 1 : 2
- 8) The height of cone is 12 cm and radius is 5 cm then its slant height
 - A) 17 cm
 - B) 60 cm
 - C) 7 cm
 - D) 13 cm
- 9) What is volume of the bath tub in litres if its volume in cm^3 is 2058?
 - A) 2058
 - B) 20.58
 - C) 2.058
 - D) 205.8
- 10) A solid sphere of diameter 6 cm is melted and drawn into a wire of radius 4 mm. The length of wire is
 - A) 90^0 cm
 - B) 90 cm
 - C) 900 m
 - D) 225 cm

- Q. 1 B)**
- 1) Find the area of the segment of a circle of radius 7 cm whose corresponding sector has a central angle of 60° ($\pi = 3.14$)
 - 2) Area of a sector of a circle of radius 15 cm is 30 cm^2 . Find the length of the arc of the sector.
 - 3) Radius of sector of a circle is 5 cm and length of its arc is 2.8 cm. Find the area of the sector.
 - 4) Find the surface area of sphere of radius 4.2 cm.
 - 5) The radii of circular ends of frustum of a cone are 20 cm and 12 cm and its height is 6 cm. Find the Slant height of frustum.

- Q. 2 A)**
- 1) If the heights of two cylinders are equal and their radii are in the ratio of 7 : 5 then the ratio of their volumes is.....

Volume of cylinder = (Formula)
 = h^2

$$\frac{\text{Volume}_1}{r_1^2} = \frac{7}{\text{Volume}_2}$$

$$\frac{\pi r_1^2 h_1}{\pi r_2^2 h_2} = \frac{49}{25}$$

- 2) A road roller of length $3l$ m and radius $\frac{l}{3}$ m can cover field in 100 revolutions moving once over. The area of the field in terms of l m^2

Curved surface area = $2\pi rh$

$h = \text{input} \text{ m}$

$\text{input} = \frac{l}{3} \text{ m}$

\therefore Curved surface area of cylinder = $\times 2$

\therefore Area of field = $2\pi r l^2 \times 100 = \text{input}$

- 3) Find the volume of greatest right circular cone, which can be cut from a cube of a side 4 cm.

Let, diameter of cone be edge of the square

$\therefore l = \text{input} \text{ cm}$

$\therefore h = \text{input} \text{ cm}$

$r = 2 \text{ cm}$

Volume of cone = (Formula)

$$V = \frac{1}{3} \pi \text{input}^3 \times 4$$

$$V = \boxed{} \text{ cm}^3$$

- 4) The measure of central angle of circle is 150° and the radius of circle is 21 cm. To find the length of the arc complete the following activity.

$$\begin{aligned} \text{Length of arc} = l &= \frac{\theta}{360} \times \boxed{} \\ &= \frac{150^\circ}{\boxed{}} \times \boxed{} \times \frac{22}{7} \times 2 = \boxed{} \text{ cm} \end{aligned}$$

- 5) A right circular cone in such that the angle of at its vertex is 90° and its base radius is 49 cm. then find the curved surface area of the cone?

Let slant height be x and \perp will bisect vertex angle.

$\therefore \triangle ABC$ is isoright angle \triangle

$$\therefore x^2 + x^2 = (49 \times 2)^2$$

$$x^2 = 4802$$

$$\text{Curved surface area of cone} = \boxed{} \dots (\text{formula})$$

$$= \frac{22}{7} \times 49 \times \boxed{}$$

$$= \frac{22}{7} \times \boxed{} \times 49\sqrt{2}$$

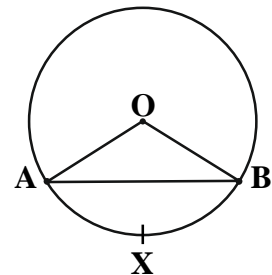
$$= \boxed{} \text{ cm}^2$$

Q. 2 B) Solve the following questions. (2 Marks Each)

- 1) The diameter of a garden roller is 1.4 m and it is 2 m long. How much area will it is 2 m long. How much area will it cover in 5 revolutions. ($\pi = \frac{22}{7}$)
- 2) Find the surface area of a sphere of radius 3.5 cm.
- 3) The volume of a cube is 1000 cm^3 . Find its total surface area.
- 4) A cone of height 24 cm has a plane base of surface area 154 cm^2 . Find its volume.
- 5) Find the surface area of hemisphere with radius 10 cm ($\pi = 3.14$)
- 6) In figure, point O is the centre of the circle.

$$\angle AOB = 30^\circ, OA = 12 \text{ cm.}$$

Find the area of segment AXB ($\pi = 3.14$)



- Q. 3 A)** 1) The circumferences of circular faces of frustum are 132 cm and 88 cm and its height is 24 cm, to find the curved surface area of the frustum complete the following activity. ($\pi = \frac{22}{7}$)

$$\text{Circumference}_1 = 2\pi r_1 = 132$$

$$r_1 = \frac{132}{2\pi} = \boxed{}$$

$$\text{Circumference}_2 = 2\pi r_2 = 88$$

$$r_2 = \frac{88}{2\pi} = \boxed{}$$

$$\text{Slant height frustum} = (l) = \sqrt{h^2 + (r_1 - r_2)^2}$$

$$= \sqrt{\boxed{}^2 + \boxed{}^2}$$

$$= \boxed{} \text{ cm}$$

$$\therefore \text{curved surface area of frustum} = \pi (r_1 + r_2) l = \boxed{} \text{ cm}^2$$

- 2) The circumference of circular faces of a frustum.
- 3) The area of a minor sector of a circle is 3.85 cm^2 . The measure of its central angle is 36° . Find the radius of circle.

$$\text{Area of minor sector} = 3.85 \text{ cm}^2$$

$$\text{Measure of its central angle } (\theta) = 150^\circ$$

let, its radius be r

$$\text{Area of minor sector} = \frac{\theta}{360^\circ} \times \pi r^2 = \boxed{}$$

$$3.85 = \frac{36^\circ}{360^\circ} \times \frac{22}{7} \times r^2$$

$$r^2 = \frac{\boxed{} \times \boxed{} \times \boxed{}}{\boxed{}}$$

$$r^2 = \frac{12.25}{\boxed{}}$$

$$r = \boxed{}$$

- 4) A hollow hemisphere bowl of thickness 1 cm has an inner radius of 6 cm. Find the volume of metal required to make the bowl.

$$\text{Inner Radius } r = 6 \text{ cm}$$

$$\text{Thickness, } t = 1 \text{ cm}$$

$$\therefore \text{Outer Radius } (R) = 6 + 1 = 7 \text{ cm}$$

$$\therefore \text{Volume of steel required} = \frac{2}{3} \pi R^3 - \frac{2}{3} \pi r^3$$

$$= \frac{2}{3} \times \frac{22}{7} \times \boxed{}^3 - \frac{2}{3} \times \frac{22}{7} \times \boxed{}^3$$

$$= \frac{44}{21} (\boxed{}^3 - 6^3)$$

$$\begin{aligned}
&= \frac{44}{21} \times (\square - \square) \\
&= \frac{44}{21} \times \square \\
&= \frac{5588}{21} \text{ cm}^2
\end{aligned}$$

4) In the figure given below, ABCD is a square of side 7 cm. BD is an arc of a circle of radius AB. What is the area of shaded region.

$$\text{Area of shaded region} = 2 (\text{Area of sector BAD} - \text{Area of } \triangle \text{ ABD})$$

$$= \left[\frac{90^\circ}{396^\circ} \times \square \times 7^2 - \square \times 7^2 \right]$$

$$= 2 \left[\frac{1}{4} \times 154 - \square \right]$$

$$= \frac{2}{2} [77 - \square]$$

$$= \square \text{ cm}^2$$

6) A square of side 28 cm is folded into a cylinder by joining its two sides. Find the base area of the cylinder thus formed.

$$\text{Area of square} = \text{Total surface area of cylinder}$$

$$(28)^2 = 2\pi rh$$

$$= 2 \times 22 \times r \times 28$$

$$r = \frac{(28)^2 \times 7}{2 \times 22 \times \square}$$

$$r = \frac{\square}{11}$$

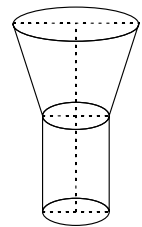
$$\text{Base area of cylinder} = \pi r^2$$

$$= \frac{22}{7} \times \frac{49}{\square} \times \frac{\square}{11}$$

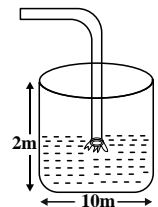
$$= \frac{\square}{\square} \text{ cm}^2$$

- Q. 3 B)**
- 1) In a clock, the minute hand is of length 7 cm. Find the area covered by the minute hand in 5 minutes.
 - 2) Three cubes each of side 15 cm joined end to end. Find the total surface area of the resulting cuboid.
 - 3) The radii of the circular ends of a frustum of a cone are 14 cm and 8 cm. If the height of the frustum is 8 cm, find :
 - a) Slant height of frustum.
 - b) Total surface area of frustum.
 - c) Volume of frustum ($\pi = 3.14$)
 - 4) A sector of a circle of radius 15 cm has the angle 120° . It is rolled up so that two bounding radii are joined together to form a cone. Find the volume of the cone. ($\pi = \frac{22}{7}$)
 - 5) A metallic sphere of radius 10.5 cm is melted and then recast into small cones, each of radius 3.5 cm and height is 3 cm. Find how many cones are obtained?


- Q. 4)**
- 1) An oil funnel made of tin sheet consists of a cylindrical portion 10 cm long attached to a frustum of a cone. If the total height is 22 cm, diameter of the cylindrical portion is 8 cm and the diameter of the top of funnel is 18 cm. Find the area of tin required to make the funnel.



- 2) A toy is in the form of a cone mounted on a hemisphere. The diameter of the base of the cone and that of a hemisphere is 18 cm and the height of cone is 12 cm. Find the total surface area of toy. ($\pi = 3.14$)
- 3) A farmer connects a pipe of internal diameter 20 cm from the canal into a cylindrical tank in his field, which is 10 m in diameter and 2 m deep. If water flows through the rate of 3 km/h, in how much time will the tank be filled.



- 4) How many coins 1.75 cm in diameter and 2 mm thick must be melted to form a cuboid $11 \text{ cm} \times 10 \text{ cm} \times 7 \text{ cm}$?
- Q. 5.**
- 1) Write True or False and justify your answers in the following.
 - a) A solid ball is exactly fitted inside the cubical box of side b ,
The volume of ball is $\frac{4}{3}\pi b^3$
 - b) The capacity of cylindrical vessel with a hemispherical portion raised upward at the bottom as shown in fig. is $\pi r^3 (3h - 2r)$ where r is radius in cm and h cm is height.
 - 2) In the figure, a sphere is placed in a cylinder. It touches the top, bottom and the curved surface of cylinder. If radius of the base of the cylinder is r . Write the answers of following questions.



- a) What is the height of the cylinder in terms of r .

- b)** What is the ratio of curved surface area of cylinder and surface area of sphere.
- c)** What is the ratio volumes of the cylinder and of the sphere?
- 3) A horse is tied to a peg at one corner of square shaped grass field of side 15 m by means of 5 m long rope, find
- a)** The area of that part of the field in which the horse can graze.
- b)** The increase in the grazing area if the rope were 10 m long instead of 5 m.
($\pi = 3.14$)
- 4) A donor agency ensures milk is supplied in containers, which are in the form of a frustum of cone to be distributed to flood victims in a camp. The height of each frustum is 30 cm and the radii of lower and upper circular ends are 20 cm and 40 cm respectively. If this milk is available at the rate of ` 35 per litre and 8800 litres of milk is needed daily for a camp.
- a)** Find how many milk containers are needed daily for the camp.
- b)** What daily cost will put on the donor agency?