

PART : MATHEMATICS

1. The number of ways to distribute 20 identical chocolates among three students such that each student will get at least one chocolate, is

(1) ${}^{22}C_2$ (2) ${}^{19}C_3$ (3) ${}^{19}C_2$ (4) ${}^{22}C_3$

Ans. (3)

Sol. $x_1 + x_2 + x_3 = 20$

let $x_1 = 1 + t_1, x_2 = 1 + t_2, x_3 = 1 + t_3$

when $t_1, t_2, t_3 \in \{0, 1, 2, \dots, 17\}$

$t_1 + t_2 + t_3 = 17$ -----(1)

So number of such distribution is equal to number of non negative integral solutions of equation (1)

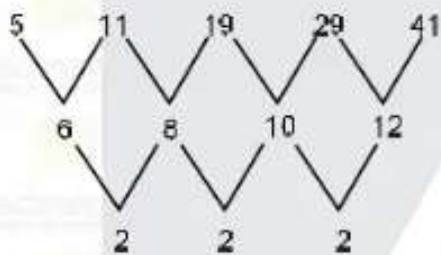
So required solution = ${}^{17+3-1}C_{3-1} = {}^{19}C_2$

2. Sum of first 20 terms of the series : $5 + 11 + 19 + 29 + 41 + \dots$ is

(1) 3250 (2) 3520 (3) 3052 (4) 3205

Ans. (2)

Sol.



let $T_n = an^2 + bn + c$

$$\therefore a + b + c = \dots \quad (1)$$

$$4a + 2b + c = 11 \quad (2)$$

$$9a + 3b + c = 19 \quad (3)$$

$$(2) - (1) \Rightarrow 3a + b = 6 \quad (4)$$

$$(3) - (2) \Rightarrow 5a + b = 8 \quad (5)$$

$$(5) - (4) \Rightarrow 2a = 2 \Rightarrow a = 1$$

$$\therefore b = 3 \text{ and } c = 1$$

$$\therefore T_n = n^2 + 3n + 1$$

$$\therefore S_{20} = \sum_{n=1}^{20} T_n = \sum_{n=1}^{20} (n^2 + 3n + 1)$$

$$= \frac{20 \times 21 \times 41}{6} + \frac{3 \times 20 \times 21}{2} + 20$$

$$= 70 \times 41 + 30 \times 21 + 20$$

$$= 10(7 \times 41 + 63 + 2)$$

$$= 10(287 + 65)$$

$$= 10(352)$$

$$= 3520$$

3. $|x^2 - 8x + 15| - 2x + 7 = 0$, then sum of roots of the equation is

- (1) $9 + \sqrt{3}$ (2) $6 + \sqrt{3}$ (3) $3 + \sqrt{3}$ (4) $9 - \sqrt{3}$

Ans. (1)

Sol.

case I

$$x < 3$$

$$x^2 - 8x + 15 - 2x + 7 = 0$$

$$x^2 - 10x + 22 = 0$$

$$(x - 5)^2 - 3 = 0$$

$$x - 5 = \pm\sqrt{3}$$

$$x = 5 + \sqrt{3}, 5 - \sqrt{3}$$

case III

$$5 < x$$

$$x - 5 = \pm\sqrt{3}$$

$$x = 5 + \sqrt{3}, 5 - \sqrt{3}$$

$$\text{sum} = 5 + \sqrt{3} + 4 = 9 + \sqrt{3}$$

case II

$$3 \leq x \leq 5$$

$$x^2 - 8x + 15 + 2x - 7 = 0$$

$$x^2 - 6x + 8 = 0$$

$$x = 2, 4$$

4. If $\frac{{}^{2n}C_3}{{}^nC_3} = \frac{10}{1}$, then value of $\frac{n^2 + 3n}{n^2 - 3n + 4}$ is equal to

- (1) 1 (2) 2 (3) 4 (4) 5

Ans. (2)

Sol. $\frac{2n(2n-1)(2n-2)}{n(n-1)(n-2)} = \frac{10}{1}$

$$\frac{4(2n-1)}{n-2} = \frac{10}{1}$$

$$8n - 4 = 10n - 20 \Rightarrow n = 8$$

$$\frac{n^2 + 3n}{n^2 - 3n + 4} = \frac{64 + 24}{64 - 24 + 4} = \frac{88}{44} = 2$$

5. $\int \frac{x^2(x \sec^2 x + \tan x)}{(x \tan x + 1)^2} dx$ is equal to

- (1) $\frac{-x^2}{(x \tan x + 1)} + 2 \ln |x \sin x - \cos x| + c$ (2) $\frac{-x^2}{(x \tan x + 1)} - 2 \ln |x \sin x + \cos x| + c$
 (3) $\frac{-x^2}{(x \tan x + 1)} + 2 \ln |x \sin x + \cos x| + c$ (4) $\frac{x^2}{(x \tan x + 1)} + 2 \ln |x \sin x + \cos x| + c$

Ans. (3)

Sol. Let $I = \int \frac{x^2(x \sec^2 x + \tan x)}{(x \tan x + 1)^2} dx$

$$\therefore \frac{d}{dx} (x \tan x + 1) = x \sec^2 x + \tan x$$

$$\therefore \int \frac{x \sec^2 x + \tan x}{(x \tan x + 1)^2} dx = -\frac{1}{x \tan x + 1}$$

$$\therefore I = x^2 \left(\frac{-1}{x \tan x + 1} \right) - \int 2x \left(\frac{-1}{x \tan x + 1} \right) dx$$

$$= \frac{-x^2}{(x \tan x + 1)} + 2 \int \frac{x \cos x}{x \sin x + \cos x} dx$$

$$= \frac{-x^2}{(x \tan x + 1)} + 2 \int \frac{\frac{d}{dx}(x \sin x + \cos x)}{x \sin x + \cos x} dx$$

$$= \frac{-x^2}{(x \tan x + 1)} + 2 \ln |x \sin x + \cos x| + c.$$

6. The coefficient of x^{18} , in the expansion of $\left(x^4 - \frac{1}{x^3}\right)^{15}$, is

(1) ${}^{14}C_7$

(2) ${}^{15}C_6$

(3) ${}^{15}C_6$

(4) ${}^{14}C_9$

Ans. (3)

Sol. $T_{r+1} = {}^{15}C_r (x^4)^{15-r} \left(-\frac{1}{x^3}\right)^r$

$$60 - 4r - 3r = 18$$

$$7r = 42$$

$$r = 6$$

$$\text{Coff.} = {}^{15}C_6$$

7. If $2x^y + 3y^x = 20$, then $\frac{dy}{dx}$ at point (2, 2) is equal to

(1) $\frac{(2-3\ln 2)}{(4-2\ln 2)}$

(2) $\frac{(2+3\ln 2)}{(3+4\ln 2)}$

(3) $\frac{-(2+3\ln 2)}{(3+4\ln 2)}$

(4) $\frac{-(2+3\ln 2)}{(3+2\ln 2)}$

Ans. (4)

Sol. Differentiating $2 \cdot x^y \left(\frac{dy}{dx} \ln x + y \frac{1}{x}\right) + 3 \cdot y^x \left(1 \cdot \ln y + x \frac{y'}{y}\right) = 0$

Put $x = 2, y = 2$

$$2 \cdot 4 \left(\frac{dy}{dx} \ln 2 + 1\right) + 3 \cdot 4 \left(\ln 2 + \frac{dy}{dx}\right) = 0$$

$$(2 \cdot \ln 2 + 3) \frac{dy}{dx} + (2 + 3 \ln 2) = 0$$

$$\frac{dy}{dx} = -\frac{(2+3\ln 2)}{(3+2\ln 2)}$$

8. Two groups G_1 and G_2 have 15 observations each, means of G_1 and G_2 are 12 and 14 respectively. If variance of G_1 is 14 and combined variance of G_1 and G_2 is 13, then the variance of G_2 is
 (1) 12 (2) 10 (3) 11 (4) 13

Ans. (2)

Sol. We know that combined variance of two groups = $\frac{n_1\sigma_1^2 + n_2\sigma_2^2}{n_1 + n_2} + \frac{n_1n_2(\bar{x}_1 - \bar{x}_2)^2}{(n_1 + n_2)^2}$

$$\Rightarrow 13 = \frac{15(14) + 15(\sigma_2^2)}{30} + \frac{225(4)}{30 \times 30}$$

$$\Rightarrow 13 = \frac{14 + \sigma_2^2}{2} + \frac{15 \times 2}{30}$$

$$\Rightarrow \sigma_2^2 = 10$$

9. In the expansion of $\left(2^{\frac{1}{4}} + \frac{1}{3^{\frac{1}{4}}}\right)^n$, if the ratio of 5th term from the beginning and the end is $\sqrt{6} : 1$, then the 3rd term from the beginning is :

- (1) $\frac{60}{\sqrt{3}}$ (2) $30\sqrt{3}$ (3) $90\sqrt{3}$ (4) $60\sqrt{3}$

Ans. (4)

Sol. given $\frac{{}^nC_4 \left(2^{\frac{1}{4}}\right)^{n-4} \cdot \left(\frac{1}{3^{\frac{1}{4}}}\right)^4}{{}^nC_4 \left(\frac{1}{3^{\frac{1}{4}}}\right)^{n-4} \cdot \left(2^{\frac{1}{4}}\right)^4} = \sqrt{6}$

$$\Rightarrow 2^{\frac{n-8}{4}} \cdot 3^{\frac{n-8}{4}} = \sqrt{6}$$

$$\Rightarrow 6^{n-8} = 6^2$$

$$\Rightarrow n = 10$$

$$\begin{aligned} \text{So } T_3 &= {}^{10}C_2 \left(2^{\frac{1}{4}}\right)^8 \cdot \left(\frac{1}{3^{\frac{1}{4}}}\right)^2 \\ &= \frac{15 \times 3 \times 4}{\sqrt{3}} = 60\sqrt{3} \end{aligned}$$

10. If the image of point $P(1, 2, 3)$ in the plane $2x - y + 3z = 2$ is Q , then the area of triangle PQR is, (where point R is $(4, 10, 12)$)

- (1) $\frac{\sqrt{1543}}{4}$ (2) $\frac{\sqrt{2131}}{2}$ (3) $\frac{\sqrt{1531}}{2}$ (4) $\frac{\sqrt{3215}}{4}$

Ans. (3)

Sol. Image of P in plane is Q

$$\frac{x-1}{2} = \frac{y-2}{-1} = \frac{z-3}{3} = -2 \frac{(2-2+9-2)}{4+1+9}$$

$$\vec{PQ} = -2\hat{i} + \hat{j} - 3\hat{k}, \vec{PR} = 3\hat{i} + 8\hat{j} + 9\hat{k}$$

$$\text{Area of } \Delta PQR = \frac{1}{2} |\vec{PQ} \times \vec{PR}| = \frac{1}{2} \begin{vmatrix} \hat{i} & \hat{j} & \hat{k} \\ -2 & 1 & -3 \\ 3 & 8 & 9 \end{vmatrix}$$

$$= \frac{1}{2} |\hat{i}(9+24) - \hat{j}(-18+9) + \hat{k}(-16-3)|$$

$$= \frac{1}{2} \sqrt{33^2 + 9^2 + 19^2} = \frac{1}{2} \sqrt{1531}$$

11. If $5f(x) + 4f\left(\frac{1}{x}\right) = \frac{1}{x} + 3$ ($x > 0$), then $18 \int_1^2 f(x) dx$ is

(1) $10 \ln 2 + 6$

(2) $10 \ln 2 - 6$

(3) $5 \ln 2 + 16$

(4) $10 \ln 2 - 16$

Ans. (2)

Sol. $\because 5f(x) + 4f\left(\frac{1}{x}\right) = \frac{1}{x} + 3$

$$5f\left(\frac{1}{x}\right) + 4f(x) = x + 3$$

$$9f(x) = \frac{5}{x} + 15 - 4x - 12$$

$$18f(x) = \frac{10}{x} - 8x + 6$$

$$\int_1^2 18f(x) dx = \left(10 \ln x - 4x^2 + 6x\right) \Big|_1^2$$

$$= 10 \ln 2 - 16 + 12 + 4 - 6$$

$$= 10 \ln 2 - 6$$

12. $(P \Rightarrow Q) \wedge (R \Rightarrow Q)$ is equivalent to :

(1) $(P \wedge R) \Rightarrow Q$

(2) $(P \vee R) \Rightarrow Q$

(3) $(P \vee Q) \Rightarrow R$

(4) $(P \wedge Q) \Rightarrow R$

Ans. (2)

Sol. $(\sim P \vee Q) \wedge (\sim R \vee Q)$

$$\equiv (\sim P \wedge \sim R) \vee Q$$

$$\equiv \sim (P \vee R) \vee Q$$

$$\equiv (P \vee R) \Rightarrow Q$$

13. If $\vec{a} = 2\hat{i} + 3\hat{j} + 4\hat{k}$, $\vec{b} = \hat{i} - 2\hat{j} - 2\hat{k}$, $\vec{c} = -\hat{i} + 4\hat{j} + 3\hat{k}$ and \vec{d} is a vector perpendicular to both \vec{b} and \vec{c} such that $\vec{a} \cdot \vec{d} = 18$, then $|\vec{a} \times \vec{d}|^2 =$

(1) 770 (2) 820 (3) 720 (4) 860

Ans. (3)

Sol. As \vec{d} is perpendicular to both \vec{b} and $\vec{c} \Rightarrow \vec{d} = \lambda (\vec{b} \times \vec{c}), \lambda \in \mathbb{R}$

$$\vec{d} = \lambda \begin{vmatrix} \hat{i} & \hat{j} & \hat{k} \\ 1 & -2 & -2 \\ -1 & 4 & 3 \end{vmatrix} = \lambda (\hat{i}(2) - \hat{j}(1) + \hat{k}(2))$$

$$= \lambda (2\hat{i} - \hat{j} + 2\hat{k})$$

$$\vec{a} \cdot \vec{d} = 18 \Rightarrow |\lambda| = 2$$

$$(\vec{a} \times \vec{d})^2 = \lambda^2 \begin{vmatrix} \hat{i} & \hat{j} & \hat{k} \\ 2 & 3 & 4 \\ 2 & -1 & 2 \end{vmatrix} = 4 (10\hat{i} + 4\hat{j} - 8\hat{k})^2$$

$$= 4 (100 + 16 + 64) = 4 (180) = 720$$

14. Given that $a_1, a_2, a_3, \dots, a_n$ are in A.P with common difference. Then value of

$$\lim_{n \rightarrow \infty} \sqrt{\frac{d}{n} \left(\frac{1}{\sqrt{a_1} + \sqrt{a_2}} + \frac{1}{\sqrt{a_2} + \sqrt{a_3}} + \dots + \frac{1}{\sqrt{a_{n-1}} + \sqrt{a_n}} \right)}$$
 is

Ans. (1)

Sol.
$$\left(\frac{1}{\sqrt{a_1} + \sqrt{a_2}} + \frac{1}{\sqrt{a_2} + \sqrt{a_3}} + \dots + \frac{1}{\sqrt{a_{n-1}} + \sqrt{a_n}} \right)$$

$$= \left(\frac{\sqrt{a_2} - \sqrt{a_1}}{a_2 - a_1} + \frac{\sqrt{a_3} - \sqrt{a_2}}{a_3 - a_2} + \frac{\sqrt{a_4} - \sqrt{a_3}}{a_4 - a_3} + \dots + \frac{\sqrt{a_n} - \sqrt{a_{n-1}}}{a_n - a_{n-1}} \right)$$

$$= \frac{1}{d} (\sqrt{a_n} - \sqrt{a_1})$$

$$\therefore \lim_{n \rightarrow \infty} \sqrt{\frac{d}{n} \left(\frac{1}{\sqrt{a_1} + \sqrt{a_2}} + \frac{1}{\sqrt{a_2} + \sqrt{a_3}} + \dots + \frac{1}{\sqrt{a_{n-1}} + \sqrt{a_n}} \right)}$$

$$= \lim_{n \rightarrow \infty} \sqrt{\frac{d}{n} \left(\frac{\sqrt{a_n} - \sqrt{a_1}}{d} \right)}$$

$$= \lim_{n \rightarrow \infty} \left(\frac{\sqrt{a_1 + (n-1)d} - \sqrt{a_1}}{\sqrt{n}\sqrt{d}} \right) = \lim_{n \rightarrow \infty} \left(\sqrt{\frac{a_1}{nd} + \left(1 - \frac{1}{n}\right)} - \sqrt{\frac{a_1}{nd}} \right)$$

$$= 1$$

15. $I = \int_0^{\frac{\pi}{2}} \cos^5 x (\sin^7 x) dx$ is equal to

- (1) $\frac{1}{120}$ (2) $\frac{1}{60}$ (3) $\frac{1}{240}$ (4) $\frac{\pi}{120}$

Sol. By wall's formulas

$$I = \frac{(4 \times 2)(6 \times 4 \times 2)}{12 \times 10 \times 8 \times 6 \times 4 \times 2} = \frac{1}{120}$$

16. Let A be a 2×2 matrix with $A^2 = I$ and all entries of A are non-zero. If sum of leading diagonal elements is 'a' and $\det(A) = b$, then the value of $(3a^2 + b^2)$ is

Ans. 1

Sol. $|A|^2 = 1 \Rightarrow b^2 = 1$

Let $A = \begin{bmatrix} a_1 & b_1 \\ a_2 & b_2 \end{bmatrix}$

$$A^2 = \begin{bmatrix} a_1 & b_1 \\ a_2 & b_2 \end{bmatrix} \begin{bmatrix} a_1 & b_1 \\ a_2 & b_2 \end{bmatrix} = \begin{bmatrix} a_1^2 + b_1 a_2 & a_1 b_1 + b_1 b_2 \\ a_1 a_2 + b_2 a_2 & a_2 b_1 + b_2^2 \end{bmatrix} = \begin{bmatrix} 1 & 0 \\ 0 & 1 \end{bmatrix}$$

$$\Rightarrow a_2 (a_1 + b_2) = 0 \text{ and } b_1 (a_1 + b_2) = 0$$

$$\Rightarrow a_1 + b_2 = 0$$

$$\Rightarrow \text{Tr}(A) = 0$$

$$\Rightarrow a = 0$$

$$\text{So } (3a^2 + b^2) = 0 + 1 = 1$$

17. A pair of dice is rolled 5 times. If getting a sum 5 is considered as a success, then the probability of four successes is

- (1) $\frac{4}{9^5}$ (2) $\frac{20}{9^4}$ (3) $\frac{5}{9^4}$ (4) $\frac{40}{9^5}$

Ans. (4)

Sol. $S = \{(1, 1), (1, 2), \dots, (1, 6)$

$(2, 1), (2, 2), \dots, (2, 6)$

$(6, 1), (6, 2), \dots, (6, 6)\}$

Event of success = $\{(1, 4), (4, 1), (2, 3), (3, 2)\}$

$$p = \frac{4}{36}$$

$$\text{Probability of exactly four successes is } = {}^5C_4 \left(\frac{8}{9}\right)^4 \left(\frac{1}{9}\right)^1$$

18. If $f(x) = [a + 13 \sin x]$, where $x \in (0, \pi)$ and $[\cdot]$ denotes G.I.F. and $a \in I$, then the number of points of non-differentiability is

- (1) 24 (2) 26 (3) 25 (4) 23

Ans. (3)

Sol. $f(x) = a + [13 \sin x] \quad \because a \in I \text{ and } x \in (0, \pi)$

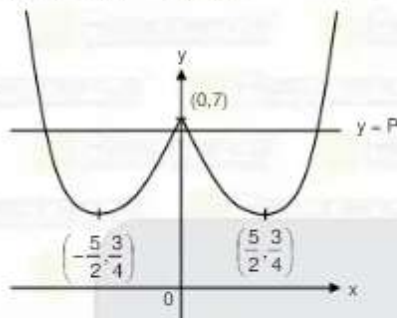
\therefore total number of points of non-differentiability of $[p \sin x] = 2p - 1$ here $p = 13$

\therefore total number of points of non-differentiability of $[13 \sin x] = 25$

19. If the equation $|x^2 - 5|x| + 7| = P$, $P \in \mathbb{I}$, has 4 solutions, then the number of possible values of P is.

Ans. (6)

Sol. Let $y = ||x|^2 - 5|x| + 7|$ $\therefore x^2 = |x|^2$ as $x \in \mathbb{R}$



Suppose $f(x) = x^2 - 5x + 7$

So $y = |f(|x|)|$
for 4 solutions

$$\frac{3}{4} < P < 7$$

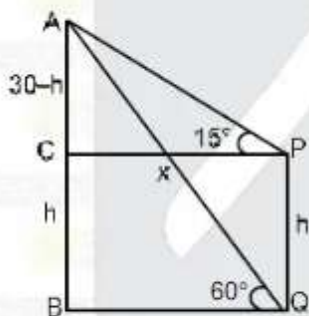
But $P \in \mathbb{I}$ so $P = 1, 2, 3, 4, 5, 6$
6 values

20. AB is a building of height 30 m with base B. PQ is a pole with base Q. Angle of depression from point A to P and Q are 15° and 60° respectively. A point C is on the same level of point P, on the building. Then area of rectangle PCBQ is

- (1) $60(\sqrt{3}-1)$ (2) $600(\sqrt{3}+1)$ (3) $600(\sqrt{3}-1)$ (4) $60(\sqrt{3}+1)$

Ans. (3)

Sol.



$$\tan 15^\circ = \frac{30-h}{x}$$

$$\tan 60^\circ = \frac{30}{x} \Rightarrow x = \frac{30}{\sqrt{3}}$$

$$\frac{2-\sqrt{3}}{\sqrt{3}} = \frac{30-h}{30} \Rightarrow 30\left(\frac{2-\sqrt{3}}{\sqrt{3}}\right) = 30-h$$

$$h = 30 - 30 \times \frac{2}{\sqrt{3}} + 30 = 60 - \frac{60}{\sqrt{3}}$$

$$\text{Area} = \frac{30(60)(\sqrt{3}-1)}{3} = 600(\sqrt{3}-1)$$

21. Number of words with or without meaning using all the letters of the word ASSASSINATION such that all the vowels come together is :

(1) 38004

(2) 38042


(3) 50400

(4) 60200

Ans. (3)

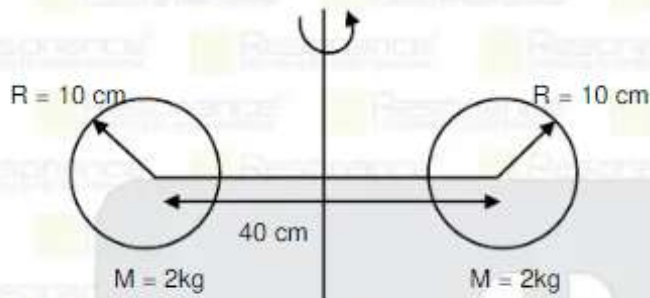
Sol. We have to arrange bundle of AAAIIO with seven consonants SSSSNTN :

$$\begin{aligned}\text{So. no of words} &= \frac{8!}{4!2!} \times \frac{6!}{3!2!1!} \\ &= 50400\end{aligned}$$



PART : PHYSICS

1.



Moment of inertia of system of two solid spheres connected by light rod about given axis is $n \times 10^{-3} \text{ kg m}^2$, then n will be :

- (1) 180 (2) 176 (3) 166 (4) 156

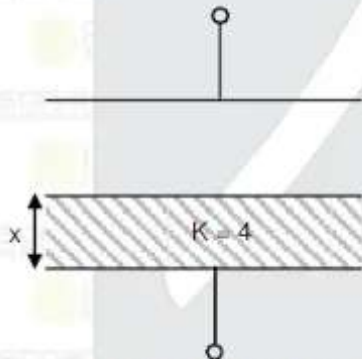
Ans. (2)

Sol. $I = 2 \left[\frac{2}{5} mR^2 + md^2 \right]$

$d = 20 \text{ cm} = 2R$

$I = 2 \left[\frac{2}{5} mR^2 + 4mR^2 \right] = \frac{44}{5} MR^2 = 176 \times 10^{-3} \text{ kg.m}^2$

2.



When dielectric is filled upto $x = d/3$ capacitance is $C_1 = 2 \mu\text{F}$ and when dielectric is filled up to $x = 2d/3$ capacitance is C_2 then C_2 will be :

- (1) $12 \mu\text{F}$ (2) $9 \mu\text{F}$ (3) $6 \mu\text{F}$ (4) $3 \mu\text{F}$

Ans. (4)

Sol. $C_1 = \frac{\epsilon_0 A}{\frac{d}{3k} + \frac{2d}{3}} = \frac{\epsilon_0 A}{\frac{d}{12} + \frac{2d}{3}} = \frac{\epsilon_0 A}{\frac{d}{12}(1+8)} = \frac{12\epsilon_0 A}{9d} = \frac{4\epsilon_0 A}{3d}$

$C_2 = \frac{\epsilon_0 A}{\frac{2d}{3k} + \frac{d}{3}} = \frac{\epsilon_0 A}{\frac{2d}{12} + \frac{d}{3}} = \frac{\epsilon_0 A}{\frac{d}{6}(1+2)} = \frac{6\epsilon_0 A}{3d} = \frac{2\epsilon_0 A}{d}$

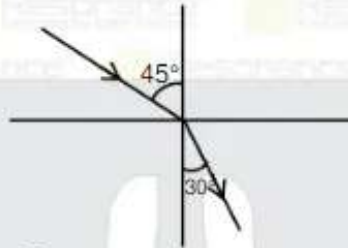
$\frac{C_1}{C_2} = \frac{4/3}{2/1} ; \frac{C_1}{C_2} = \frac{4}{2 \times 3} = \frac{2}{3} ; C_2 = \frac{3}{2} C_1$

$C_2 = 3 \mu\text{F}$

3. In an Electromagnetic wave $E = E_0 \sin(\omega t - kx)$, $B = B_0 \sin(\omega t - kx)$. The ratio of average energy density of electric field and average energy density of magnetic field will be
 (1) 2/1 (2) 1/1 (3) 1/2 (4) 4/1

Ans. (2)

4. The angle of incidence of a ray in a medium is 45° and angle of refraction in the second medium is 30° let λ_1, f_1 and λ_2, f_2 be the wavelength & frequency in the two media.



- Ans. (1) $\lambda_1 = \sqrt{2} \lambda_2, f_1 = f_2$ (2) $\lambda_2 = \sqrt{2} \lambda_1, f_1 = f_2$ (3) $\lambda_1 = \lambda_2, f_1 = \sqrt{2} f_2$ (4) $\lambda_1 = \lambda_2, f_2 = \sqrt{2} f_1$

Sol. $n_1 \sin 45^\circ = n_2 \sin 30^\circ$

$$\frac{C}{V_1} \times \frac{1}{\sqrt{2}} = \frac{C}{V_2} \times \frac{1}{2} \Rightarrow V_1 = \sqrt{2} V_2, \lambda_1 = \sqrt{2} \lambda_2$$

5. If the height of transmitting Antenna on the earth surface is increase by 21%, by what percentage will the range of the signals on the surface increase :

- (1) 42% (2) 40% (3) 20% (4) 10%

Ans. (4)

Sol. $d = \sqrt{2RH}$

$$d' = \sqrt{2R \times 1.21H}$$

$$\frac{d' - d}{d} \times 100 = 10\%$$

6. Find the radius of electrons in 5^{th} orbit of Li^{++}

- (1) 3.3 \AA (2) 7.8 \AA (3) 4.4 \AA (4) 5.7 \AA

Ans. (2)

Sol. $r = \frac{n^2}{Z} a_0 = \frac{5^2}{3} \times 5.3 \times 10^{-11} \text{ m} \approx 4.4 \text{ \AA}$

7. A wire is extended by 20% and area of cross-section is reduce by 4%. Find the percentage change in resistance of wire :

- (1) 25% (2) 30% (3) 40% (4) 20%

Ans. (1)

Sol. Suppose initial length of wire = l

cross area sectional = A

And resistivity of material = ρ

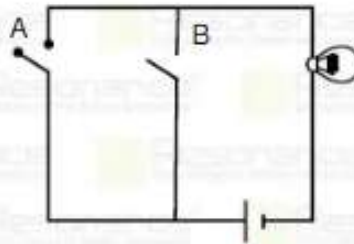
\therefore Initial resistance $R = \rho \times \frac{l}{A}$

Now Resistance of change $R' = \frac{\rho \cdot [1 + 0.20]l}{A[1 - 0.04]}$

$$R' = 1.25 \frac{\rho l}{A} = 1.25R$$

$$\therefore \% \text{ change } \frac{\Delta R}{R} \times 100 = 25\%$$

8. Find the type of logic gate

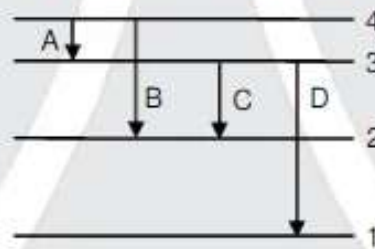


- (1) NOR (2) AND (3) NAND (4) OR

Ans. (4)
 Sol. OR

A	B	Output
1	1	1
1	0	1
0	1	1
0	0	0

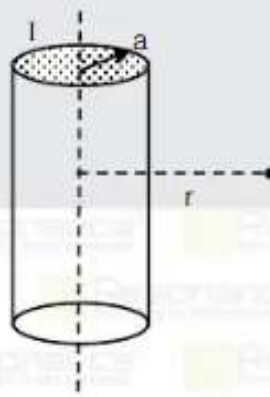
9. Which of the transitions will give maximum wavelength of emitted photon :



- (1) A (2) B (3) C (4) D

Ans. (1)

10. Solid conductor of radius a carrying uniformly distributed current. Select the correct option about magnetic field B at radial distance r .



- (1) if $r < a$, $B \propto r$ if $r > a$, $B \propto 1/r^2$
 (2) if $r < a$, $B \propto r$ if $r > a$, $B \propto r^2$
 (3) B is uniformly distributed for $r < a$ and for $r > a$, $B \propto 1/r$
 (4) if $r < a$ B is proportional to r and for $r > a$, $B \propto 1/r$

Ans. (4)

Sol. For $r < a$

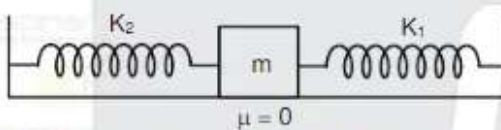
$$B = \frac{\mu_0 I r}{2\pi a^2}$$

$\therefore B \propto r$
for $r > a$

$$B = \frac{\mu_0 I}{2\pi r}$$

$\therefore B \propto \frac{1}{r}$

11.



Time period of oscillations of this system is

(1) $T = 2\pi\sqrt{\frac{m}{k_1+k_2}}$ (2) $T = 2\pi\sqrt{\frac{m(k_1+k_2)}{k_1k_2}}$ (3) $T = 2\pi\sqrt{\frac{k_1+k_2}{m}}$ (4) $T = 2\pi\sqrt{\frac{k_1k_2}{(k_1+k_2)m}}$

Ans. (1)


12. Kinetic energy of electron, proton and α -particle is given as $4K$, K and $2K$ respectively. Correct order of de-Broglie wavelength λ_e , λ_p , λ_α for electron, proton and α -particle respectively is:

(1) $\lambda_e > \lambda_\alpha > \lambda_p$ (2) $\lambda_e = \lambda_p > \lambda_\alpha$ (3) $\lambda_e > \lambda_p > \lambda_\alpha$ (4) $\lambda_\alpha > \lambda_p > \lambda_e$

Ans. (3)

Sol. $\lambda_e = \frac{h}{\sqrt{2m_e 4K}}$; $\lambda_p = \frac{h}{\sqrt{2m_p K}} < \lambda_e$; $\lambda_\alpha = \frac{h}{\sqrt{2(4m_p)2K}} = \frac{\lambda_p}{2\sqrt{2}}$

13. Potential and radial distance graph for uniformly charged spherical shell will be :



Ans. (2)

14. A block of mass 100 gram attached to spring rotating with angular velocity 5 rad/s in horizontal plane radius of circular path of block is 20mm and spring constant is $k = 7.5 \text{ N/m}$ then tension in spring will be:
 (1) 0.01 N (2) 0.05 N (3) 1 N (4) 2.5 N

Sol. $T = m\omega^2 r$
 $= 0.1(5)^2(20 \times 10^{-3})$
 $= 50 \times 10^{-3}$
 $= 0.05 \text{ N}$

15. EMF will induced if
 (a) Coil moves in uniform magnetic field with constant velocity
 (b) Coil moves in non-uniform magnetic field with constant velocity
 (c) Coil rotating in uniform magnetic field
 (d) Area of coil increase in uniform magnetic field

then which of following is correct :

- (1) a & b (2) b & c (3) c & d (4) b & d

Ans. (4)

16. **Assertion (A)** : There is atmosphere on the surface of earth and no atmosphere on the surface of moon.
Reason (R) : Escape velocity from the surface of earth is more than escape velocity from the surface of moon. Gases get escape out from moon due to its escape speed load than root mean square velocity at the moon.



- (1) Both A and R are correct but R is not the correct explanation of A
 (2) A is correct but R is not correct
 (3) A is not correct but R is correct
 (4) Both A and R are correct and R is the correct explanation of A

Ans. (1)

17. A planet has mass twice of that of earth but same density as that of earth. Weight of an object placed on earth is 'W' then what will be the weight of the same object on this planet

- (1) $W \times 2$ (2) $W \times 2^{4/3}$ (3) $W \times 2^{1/3}$ (4) $W \times 2^{5/3}$

Ans. (3)

Sol. Weight $W_e = mg = \frac{mGM}{R^2}$

$$\frac{M}{\frac{4\pi}{3} R_e^3} = \frac{2M}{\frac{4\pi}{3} R_p^3}$$

$$R_p = R_e \cdot 2^{1/3}$$

$$\text{Ratio of weight} \Rightarrow \frac{W_e}{W_p} = \frac{M_e}{M_p} \times \left(\frac{R_p}{R_e}\right)^2$$

$$\frac{W}{W_p} = \frac{M}{2M} \times (2^{1/3})^2 \Rightarrow \frac{W}{W_p} = 2^{2/3-1} \Rightarrow W_p = W \times 2^{1/3}$$

18. In a process Rate at which work done by gas is 10J/s and rate of heat supply to gas is 30J/s. Determine the rate at which internal energy of gas is increasing (in J/s)
 (1) 20 (2) 30 (3) 40 (4) 60

Ans. (1)

Sol. First law of thermodynamic

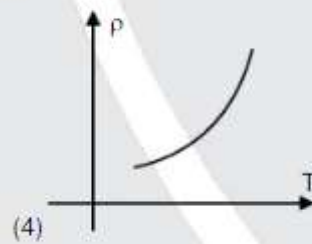
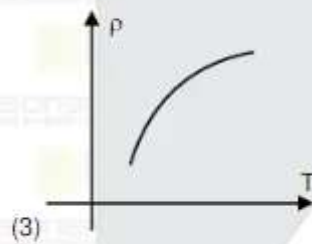
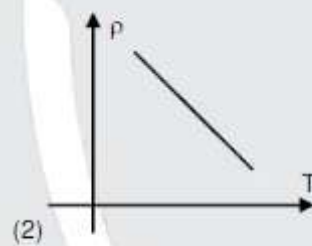
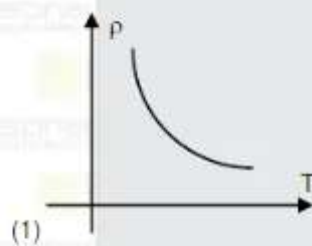
$$Q = \Delta u + w$$

$$\dot{Q} = \frac{du}{dt} + \dot{W}$$

$$30 = \frac{du}{dt} + 10$$

$$\frac{du}{dt} = 20 \text{ J/s}$$

19. Select the correct graph which give variation of resistivity of semiconductor with increase in temperature.



Ans. (1)

20. Two resistance $R_1 = [15 \pm 0.5]\Omega$ and $R_2 = (10 \pm 0.5)\Omega$ are connected in parallel. The equivalent resistance will be :
 (1) $[6 \pm 0.26]\Omega$ (2) $[6 \pm 0.52]\Omega$ (3) $[6 \pm 0.14]\Omega$ (4) $[6 \pm 0.75]\Omega$

Ans. (1)

Sol. $\frac{1}{R} = \frac{1}{R_1} + \frac{1}{R_2}$

$$\frac{1}{R} = \frac{1}{15} + \frac{1}{10}$$

$$R = 6\Omega$$

$$\frac{\Delta R}{R^2} = \left[\frac{\Delta R_1}{R_1^2} + \frac{\Delta R_2}{R_2^2} \right]$$

$$\Delta R = R^2 \left[\frac{\Delta R_1}{R_1^2} + \frac{\Delta R_2}{R_2^2} \right] = 6^2 \left[\frac{0.5}{15^2} + \frac{0.5}{10^2} \right] = 36 [0.0022 + 0.005]$$

$$= 36 [0.0072] = 0.2592 \approx 0.26 \Omega$$

Resistance is $R \pm \Delta R = 6 \pm 0.26$

PART : CHEMISTRY

1. If the radius of hydrogen atom is 51 pm then what will be the radius of 5th orbit of Li²⁺ (in pm) ?
(Report your answer to the nearest integer).

Ans. (425)

Sol. $r_H = 51 \text{ pm}$

$$r_{L^{2+}} = \frac{r_H \times n^2}{Z} = \frac{51 \times 5^2}{3} = 17 \times 25 = 425 \text{ pm}$$

2. If X forms CCP and Y occupy $\frac{1}{3}$ of octahedral voids then what will be the formula of the compound ?

(1) XY₃ (2) X₂Y₃ (3) X₃Y (4) X₃Y₂

Ans. (3)

Sol. Number of X atom = 4

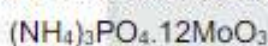
$$\text{Number of Y atom} = 4 \times \frac{1}{3} = \frac{4}{3}$$

$$\text{Formula of compound } (X_4 Y_{4/3}) \times \frac{3}{4} = X_3 Y$$

3. What is the Oxidation state of Mo in ammonium phosphomolybdate ?

Ans. (6)

Sol. the Oxidation state of Mo in ammonium phosphomolybdate = + 6



4. Find log K_{eq} value for a reaction for which $\Delta H^\circ = -54.07 \text{ KJ/mol}$ and $\Delta S^\circ = 10 \text{ J/K}$ at T = 293K
Given : 2.303 RT = 5610 (Report your answer in to nearest integer)

Ans. 10

Sol. $\Delta G^\circ = \Delta H^\circ - T\Delta S^\circ$

$$\Delta G^\circ = -54070 - 293 \times 10 = -57000 \text{ J}$$

$$\Delta G^\circ = -2.303 RT \log K_{eq}$$

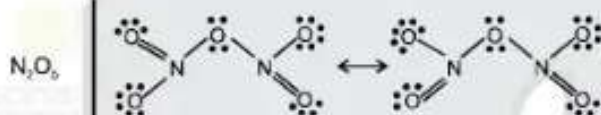
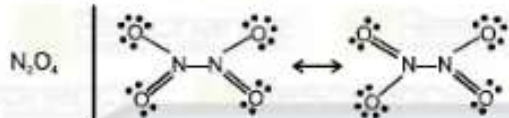
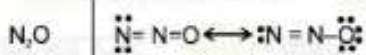
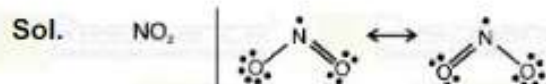
$$-57000 \text{ J} = -5610 \log K_{eq}$$

$$\log K_{eq} = 10.16 = 10$$

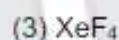

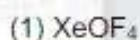
5. Match the following

	List-I (species)		List-II (type of bond)	
(A)	NO ₂	(P)	N – N	
(B)	N ₂ O	(Q)	N = O	
(C)	N ₂ O ₄	(R)	N – O – N	
(D)	N ₂ O ₅	(S)	N = O / N = N	
	(A) (B)	(C) (D)		
(1)	Q S	P R		
(2)	P R	Q S		
(3)	Q S	R P		
(4)	S P	Q R		

Ans. (1)



6. Which of the following have square pyramidal structure :



Ans. (1)

Sol. (1) XeOF_4



(Square pyramidal)

(2) BrF_3



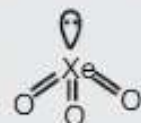
(T-shape)

(3) XeF_4



(Square planar)

(4) XeO_3



(Pyramidal)

7. For a reversible reaction

$\text{A}_2\text{B}_3(\text{g}) \rightleftharpoons 2\text{A}(\text{g}) + 3\text{B}(\text{g})$ the initial concentration of A_2B_3 is C mol/L and equilibrium constant of the reaction is K , then degree of dissociation (α) is :

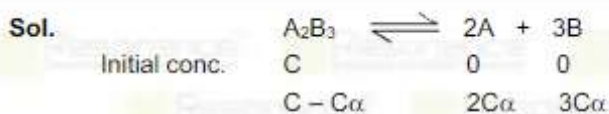
(1) $\alpha = \left[\frac{K}{108 C^4} \right]^{1/5}$

(2) $\alpha = \left[\frac{108 C^4}{K} \right]^{1/5}$

(3) $\alpha = \left[\frac{K}{27 C^4} \right]^{1/5}$

(4) $\alpha = \left[\frac{4 C^2}{K} \right]^{1/3}$

Ans. (1)



$$K = \frac{(2C\alpha)^2(3C\alpha)^3}{(C - C\alpha)}$$

$$K = \frac{108C^5\alpha^5}{C} = 108C^4\alpha^5$$

$$\alpha = \left[\frac{K}{108C^4} \right]^{1/5}$$

8. Total number of ambidentate ligand in the complex $[Co(en)(SCN)_4]^{-1}$ is

Ans. (4)

Sol. SCN⁻ is an ambidentate ligand.

9. Amongst the following select the best oxidising & reducing agent respectively :

- (1) Ce⁺⁴, Tb⁺² (2) Ce⁺³, Eu⁺² (3) Ce⁺⁴, Eu⁺² (4) Tb⁺², Eu⁺²

Ans. (3)

Sol. $(E_{Ce^{+4}/Ce^{+3}}^0)_{RP} = 1.74 V$

Eu⁺² is a strong reducing agent changing to common oxidation state + 3.

10. **Assertion** : Magnetic moment of $[Fe(H_2O)_6]^{+3}$ is 5.92 BM and that of $[Fe(CN)_6]^{-3}$ is 1.73 BM

Reason : Oxidation state of Fe in both the complexes is +3

- (1) Both **Assertion** and **Reason** are correct and **Reason** is the correct explanation of **Assertion**.
 (2) Both **Assertion** and **Reason** are not correct and **Reason** is the correct explanation of **Assertion**.
 (3) **Reason** is correct and **Assertion** is not correct
 (4) **Assertion** is correct and **Reason** is not correct

Ans. (2)

Sol. In $[Fe(H_2O)_6]^{+3}$, H₂O is a weak field ligand so configuration of Fe⁺³ is $t_{2g}^{1,1,1}, e_g^{1,1}$

so number of unpaired electron are 5 and magnetic moment is 5.92 BM

In $[Fe(CN)_6]^{-3}$, CN⁻ is a weak field ligand so configuration of Fe⁺³ is $t_{2g}^{2,2,1}, e_g^{0,0}$

so number of unpaired electron are 1 and magnetic moment is 1.73 BM

11. Which substance is added in cement for increase in setting time of cement

- (1) silica (2) clay (3) gypsum (4) lime stone

Ans. (3)

Sol. The purpose of adding gypsum is only to slow down the process of setting of the cement so that it gets sufficiently hardened.

12. For which of the following pair of elements have maximum difference in value of electron gain enthalpy (ΔH_{eg})

- (1) Ne, Cl (2) Ar, F (3) Ar, Cl (4) Ne, F

Ans. (1)

Sol. Cl has maximum $-ve$ ΔH_{eg} and Ne has most $+ive$ ΔH_{eg} hence difference will be maximum for Ne and Cl.

Element	ΔH_{eg} (KJ/mole)
F	-333
Cl	-349
Ne	+48
Ar	+116

13. When 5 mole of $BaCl_2$ mixed with 2 mole of Na_3PO_4 then Maximum Number of mole of $Ba_3(PO_4)_2$ are formed.

Ans. 1.00

Sol. $3BaCl_2 + 2Na_3PO_4 \longrightarrow Ba_3(PO_4)_2 + 6NaCl$

initial mole 5 2

L.R. $\frac{5}{3} = 1.67$ $\frac{2}{2} = 1$ (L.R. = Na_3PO_4)

$$\frac{\text{mole } Na_3PO_4}{2} = \frac{\text{mole } Ba_3(PO_4)_2}{1}$$

maximum number of mole of $Ba_3(PO_4)_2 = \frac{2}{2} = 1$ mole

14. $2Na[Ag(CN)_2]_{aq} + Zn(s) \longrightarrow Na_2[Zn(CN)_4]_{aq} + 2Ag(s)$ the given reaction is an example of

- (I) Redox reaction
- (II) Displacement reaction
- (III) Combination reaction
- (IV) Decomposition reaction

correct answer is

- (1) I, II
- (2) I, III
- (3) I, IV
- (4) II, IV

Ans. (1)

Sol. Theory based

15. Standard electrode potential M^{2+}/M does not depends upon :

- (1) Sublimation enthalpy
- (2) Hydration enthalpy
- (3) Ionisation enthalpy
- (4) Concentration of metal ion

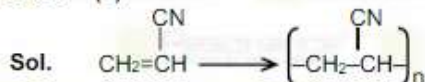
Ans. (4)

Sol. Theory based

16. Polymer which is named as orlon is

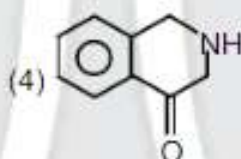
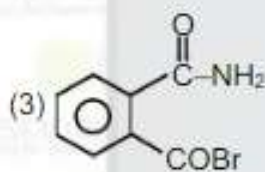
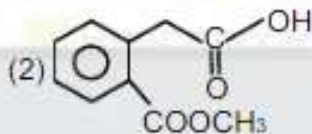
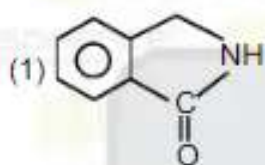
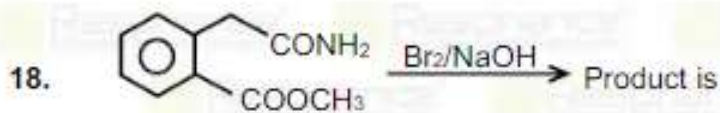
- (1) Polyamide
- (2) Polyacrylonitrile
- (3) Polycarbonate
- (4) Polythene

Ans. (2)

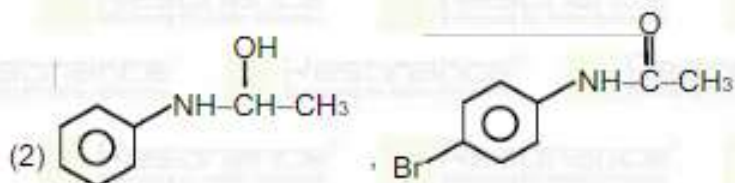
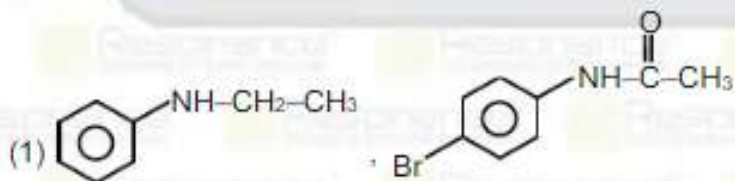
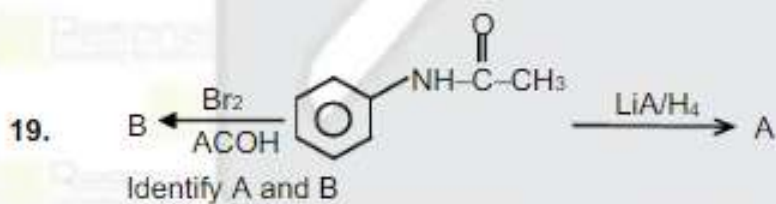
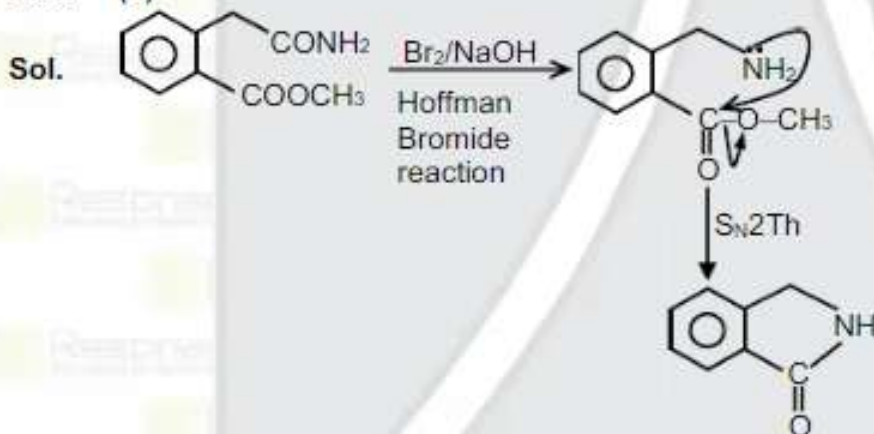


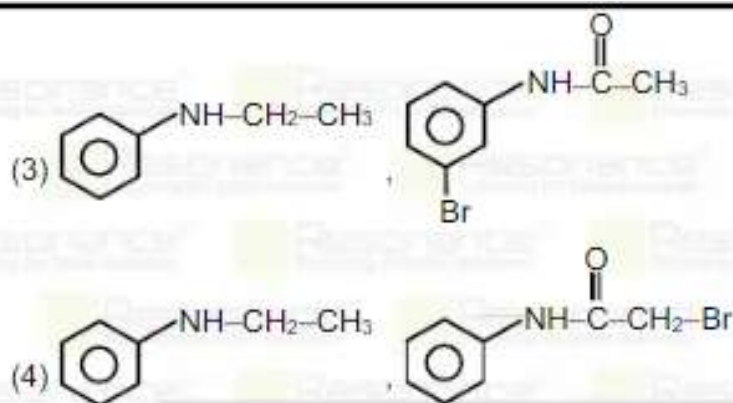
17. Photochemical smog occurs in which area?
 (1) Himalaya village area (2) Industrial area
 (3) Plain area (4) Muddy area

Ans. (2)



Ans. (1)





Ans. (1)

20. Match the following :

	List-I (Element)		List-II (Reagent use to identify)
(A)	Halogen	(I)	$\text{Fe}(\text{CN})_6$
(B)	Sulphur	(II)	AgNO_3
(C)	Nitrogen	(III)	$[\text{Fe}(\text{CN})_5\text{NO}]^{-2}$
(D)	Phosphorous	(IV)	$(\text{NH}_4)_2\text{MoO}_4$

(1) A - II ; B - III ; C - I ; D - IV

(2) A - III ; B - I ; C - II ; D - IV

(3) A - I ; B - II ; C - III ; D - IV

(4) A - II ; B - I ; C - IV ; D - III

Ans. (1)

Sol. (1) Halogen + $\text{AgNO}_3 \rightarrow \text{AgX}$ ppt

(2) 'S' + Sodium nitro prusside \rightarrow Violet colour

(3) 'N' + $[\text{Fe}(\text{CN})_6]^{4-} \rightarrow$ Blue colour

(4) 'P' + $(\text{NH}_4)_2\text{MoO}_4 \rightarrow (\text{NH}_4)_3\text{PO}_4 \cdot 12\text{MoO}_3 \rightarrow$ Yellow colour

21. Match the following :

	List-I		List-II
(A)	Vitamin A	(I)	Beri-Beri
(B)	Thiamine	(II)	Scurvery
(C)	Ascorbic acid	(III)	Chelosis
(D)	Riboflavin	(IV)	Xerophthalmia

(1) A - IV ; B - I ; C - II ; D - III

(2) A - I ; B - II ; C - III ; D - IV

(3) A - III ; B - IV ; C - II ; D - I

(4) A - II ; B - I ; C - III ; D - IV

Ans. (1)

Sol. Vitamin A \rightarrow Xerophthalmia

Thiamine \rightarrow Beri-Beri

Ascorbic acid \rightarrow Chelosis

Riboflavin \rightarrow Xerophthalmia

22. Match the following :

	List-I		List-II
(A)	Etard	(I)	$\text{CO} + \text{HCl}$
(B)	Gatterman-koach	(II)	$\text{CrO}_2\text{Cl}_2 + \text{CS}_2$
(C)	H.V.Z.	(III)	Red P + X_2
(D)	Haloform reaction	(IV)	I_2/NaOH

(1) A - II ; B - I ; C - IV ; D - III

(2) A - IV ; B - III ; C - I ; D - II

(3) A - I ; B - II ; C - IV ; D - III

(4) A - III ; B - II ; C - I ; D - IV

Ans. (1)