

QUESTIONS & SOLUTIONS

Reproduced from Memory Retention

 08 APRIL, 2023

 9:00 AM to 12:00 Noon

SHIFT - 1

Duration : 3 Hours

Maximum Marks : 300

SUBJECT - CHEMISTRY

LEAGUE OF TOPPERS (Since 2020)
TOP 100 AIRs IN JEE ADVANCED

AIR
5
MAYANK
MOTWANI
Roll No. : 20771637
JEE Adv, 2022



AIR
15
DHANANJAY
KEJRIWAL
Roll No. : 19821428
JEE Adv, 2020



AIR
29
SANKALP
PARASHAR
Roll No. : 20975666
JEE Adv, 2020



AIR
30
AARYAN
GUPTA
Roll No. : 20975800
JEE Adv, 2020



AIR
67
ANKAN
SARKAR
Roll No. : 20771420
JEE Adv, 2021



Admission Announcement for **JEE Advanced** (For Session 2023-24)

VIKAAS
For Class X to XI
Moving Students
TARGET 2025

VISHWAAS
For Class XI to XII
Moving Students
TARGET 2024

VISHESH
For Class XII
Passed Students
TARGET 2024

Starting From : **12 & 19 APRIL '23**

Avail Scholarship up to **90%** through **R-NET** on **EVERY SUNDAY**

CHEMISTRY

1. The number of d electrons present in CrO_2Cl_2 are same as those present in which of the following?

- (A) Fe(III) (B) Mn(VII) (C) Ni(II) (D) Co(II)

Ans. (B)

Sol. CrO_2Cl_2 : d^0 d electron = 0

Fe^{3+} : $3d^5$ d electron = 5

Ni^{2+} : $3d^8$ d electron = 8

Co^{2+} : $3d^7$ d electron = 7

2. $\text{XeF}_4 + \text{SbF}_5 \longrightarrow [\text{XeF}_m]^{+n} [\text{SbF}_p]^{q-}$

The value of $m + n + p + q$ is :

Ans. 11

Sol. $\text{XeF}_4 + \text{SbF}_5 \longrightarrow \text{XeF}_3^+ \text{SbF}_6^-$

$m = 3$

$n = 1$

$p = 6$

$q = 1$

$m + n + p + q = 3 + 1 + 6 + 1 = 11$

3. The extraction of which of the following metals involves concentration of the ore by leaching ?

- (1) Copper (2) Magnesium (3) Gold (4) Potassium

Ans. (3)

Sol. $\text{Au} + \text{NaCN} + \text{H}_2\text{O} \longrightarrow \text{Na}[\text{Au}(\text{CN})_2](\text{aq}) + \text{NaOH}$

(Leachant)

4. Order of Electronegativity of following elements is:

P, Br, At, C

Ans. $\text{Br} > \text{C} > \text{At} > \text{P}$

Sol. $\text{Br}(2.8) > \text{C}(2.5) > \text{At}(2.2) > \text{P}(2.1)$

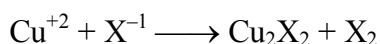
5. **Statement-1** : Lithium and Magnesium do not form super oxides.

Statement -2 : Ionic radius of Li^+ is greater than Mg^{2+} .

- (1) Both statement-1 & 2 are correct.
 (2) Both statement-1 & 2 are incorrect.
 (3) Statement-1 is correct but statement-2 is incorrect.
 (4) Statement-2 is correct but statement-2 is incorrect.

Ans. (1)

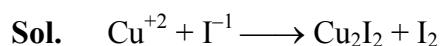
6. Consider the reaction



product X_2 will be predominantly

- (1) only Cl_2 (2) only Br_2 (3) only I_2 (4) All halogens are possible

Ans. (3)



7. How many factors will contribute to major role in covalent character of a compound ?

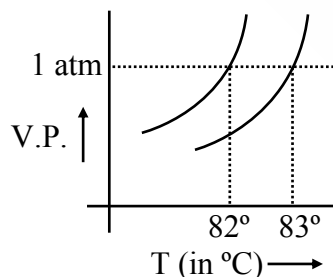
- (a) Polarising power of cation
 (b) Polarisability of the anion
 (c) Distortion caused by cation
 (d) Polarisability of cation

Ans. (3)

Sol. Covalent character depends on :

- (a) Polarising power of cation
 (b) Polarisability of the anion
 (c) Distortion caused by cation

8. Given below are the variation of V.P. of solution and solvent with temperature. Determine boiling point of solvent.



Ans. 82°C

9. 0.5 gram of an organic compound having 60% C evolves $x \times 10^{-1}$ gm CO_2 on complete combustion. Determine x.

Ans. 11

Sol. Mass of C = $0.5 \times \frac{60}{100}$

$$\text{Moles of C} = \frac{0.5 \times 60}{12} = n_{\text{CO}_2}$$

$$\text{Mass of CO}_2 = \frac{0.5 \times 60}{12} \times 44 = 1.1 \text{ g} = 11 \times 10^{-1} \text{ g}$$

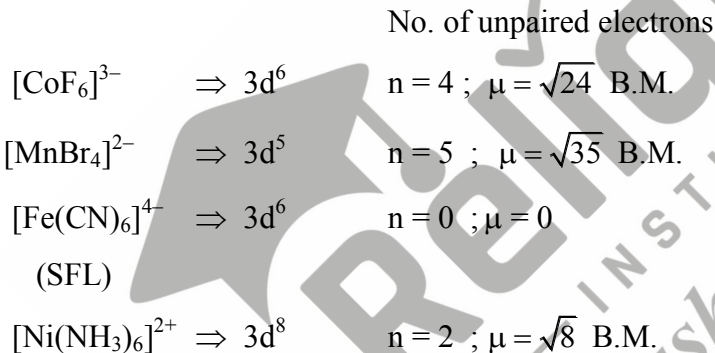
$$x = 11$$

10. Order of spin only magnetic moment of the following complexes is :



Ans. II > I > IV > III

Sol.



11. Gypsum is added to cement as

- (1) It helps in slowing down process of settling of cement.
- (2) It helps in fast settling of cement.
- (3) It helps in hardening of cement.
- (4) It reacts with cement to form stable compound.

Ans. (1)

Sol. It helps in slowing down process of settling of cement.

12. How many of the following statements are correct regarding relation between activation energy, rate constant and temperature?
- (a) If temperature dependence on rate constant is large, more will be the activation energy.
(b) If activation energy is zero, then rate constant is independent of temperature.
(c) If temperature dependence on rate constant is small, less will be the activation energy.
(d) If activation energy is negative, more will be the temperature dependence on rate constant.

Ans. (3)

Sol. a, b, c are correct

13. Which of the following complex is octahedral, diamagnetic and most stable ?

(1) $K_3[Co(CN)_6]$ (2) $[Ni(NH_3)_6]Cl_2$ (3) $[Co(H_2O)_6]Cl_3$ (4) $Na_3[CoCl_6]$

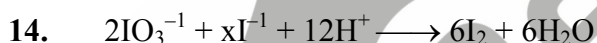
Ans. (1)

Sol. * All are octahedral

* Diamagnetic are

$K_3[Co(CN)_6]$ & $[Co(H_2O)_6]Cl_3$

* Out of these two $K_3[Co(CN)_6]$ is more stable (SFL)



x is :

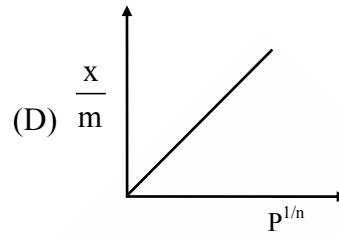
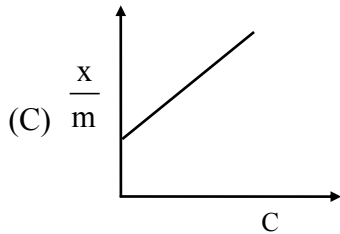
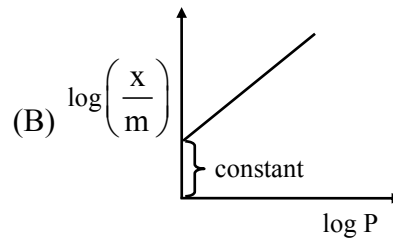
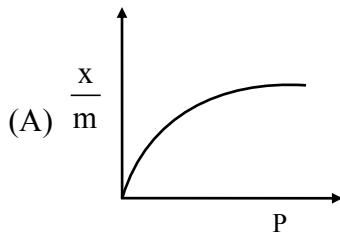
(1) 2 (2) 6 (3) 10 (4) 12

Ans. (3)

Sol. Balanced chemical reaction is :



15. The correct graph regarding Freundlich adsorption isotherm




- (1) A, B only (2) A, B, D only (3) B, C, D only (4) B, C only

Ans. (2)

Sol. As per Freundlich isotherm

$$\frac{x}{m} = k(P)^{1/n} \Rightarrow \log\left(\frac{x}{m}\right) = \log k + \frac{1}{n} \log(P)$$

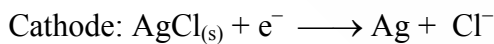

16. Which cell representation is correct for the reaction given



- (1) $\text{Pt}_{(s)} | \text{H}_{2(g)} | \text{HCl}_{(aq)} | \text{AgCl}_{(s)} | \text{Ag}_{(s)}$
 (2) $\text{Pt}_{(s)} | \text{H}_{2(g)} | \text{KCl}_{(aq)} | \text{AgCl}_{(s)} | \text{Ag}_{(s)}$
 (3) $\text{Pt}_{(s)} | \text{H}_{2(g)} | \text{HCl}_{(aq)} | \text{AgNO}_{3(aq)} | \text{Ag}_{(s)}$
 (4) $\text{Pt}_{(s)} | \text{H}_{2(g)} | \text{KCl}_{(aq)} | \text{AgNO}_{3(aq)} | \text{Ag}_{(s)}$

Ans. (1)

Sol. $\text{Pt}_{(s)} | \text{H}_{2(g)} | \text{HCl}_{(aq)} | \text{AgCl}_{(s)} | \text{Ag}_{(s)}$



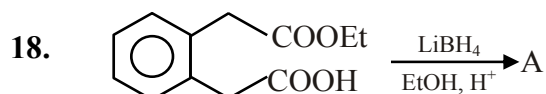
Net cell reaction:



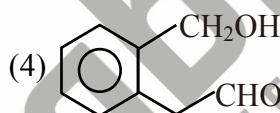
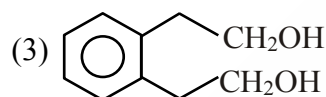
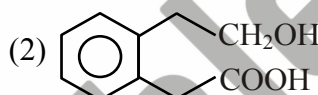
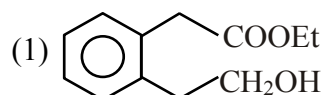
17. Match the following compound with maximum prescribed concentration of metals or ions in drinking water.

- | | |
|-----------------|-------------|
| (A) F^- | (P) 5 ppm |
| (B) Zn | (Q) 500 ppm |
| (C) SO_4^{2-} | (R) 50 ppm |
| (D) NO_3^- | (S) 1 ppm |

Ans. A → S, B → P, C → Q, D → R



A is :



Ans. (2)

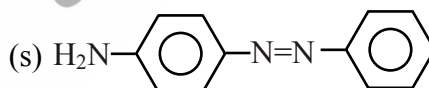
Sol. $LiBH_4$ reduce ester to alcohol.

19. Match the products of reactions between benzene diazonium salt with the following reagents.

- Reagents
- (A) $Ph-NH_2$
(B) Cu/HCl
(C) $CuCN$

- Products
- (p) $Ph-CN$
(q) $Ph-Cl$
(r) $Ph-F$

(D) HBF_4 , Heat


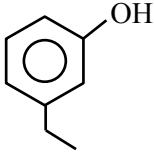
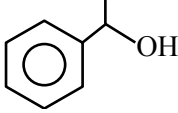


- (1) A-s, B-q, C-p, D-r
(3) A-s, B-q, C-r, D-p

- (2) A-q, B-s, C-p, D-r
(4) A-s, B-p, C-q, D-r

Ans. (1)

20. Match the following with their characteristic laboratory tests?

Column-I (Compounds)	Column-II (Lab test)
(1) 	(p) Neutral FeCl_3
(2) 	(q) Chloroform in alkali potash
(3) 	(r) $\text{NaOI} + \text{KI}$
(4)	(s)

Ans. (1-q) ; (2-p) (3-r)

21. Match the following

Column-I	Column-II
(1) First artificial sweetening agent	(p) Alitame
(2) Stable at cooking temperature	(q) Sucralose
(3) High potency sweetener	(r) Saccharin
(4) Unstable at cooking temperature	(s) Aspartame

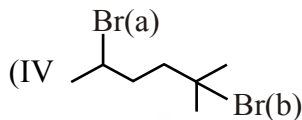
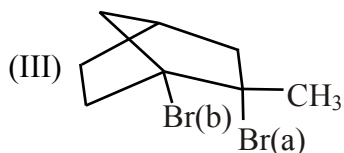
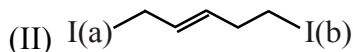
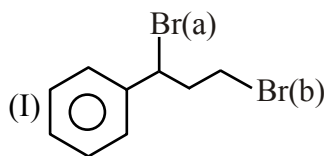
Ans. (1) → (r), (2) → (q), (3) → (p), (4) → (s)

22. Sulphur containing amino acids among the followings

(a) Cysteine	(b) Alanine	(c) Isoleucine
(d) Methionine	(e) Proline	
(1) a & b	(2) c & d	(3) a & d
		(4) d & e

Ans. (3)

23. Which of the following will have higher rate towards S_N1 reaction (Site)



(1) I \rightarrow Br(a), II \rightarrow I(a), III \rightarrow Br(a), IV \rightarrow Br(b)

(2) I \rightarrow Br(b), II \rightarrow I(b), III \rightarrow Br(a), IV \rightarrow Br(b)

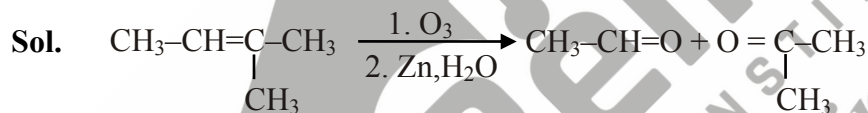
(3) I \rightarrow Br(a), II \rightarrow I(b), III \rightarrow Br(a), IV \rightarrow Br(b)

(4) I \rightarrow Br(a), II \rightarrow I(b), III \rightarrow Br(b), IV \rightarrow Br(a)

Ans. (1)

24. A hydrocarbon gives ethanal and propanone on ozonolysis. Calculate the molecular mass of hydrocarbon.

Ans. 70



SATYAM CHAKRAVORTY

(Classroom) →→

selected for

- ✓ **ASIAN PACIFIC MATHEMATICS OLYMPIAD (APMO) 2023**
- ✓ **IMOTC 2023 Camp** (Conducted by HBCSE)
- 🏅 **BRONZE MEDAL IN INOI**
(Indian National Olympiad in Informatics 2023)



Success **Delivered** to the **Deserving**



RELIABLE INSTITUTE : A-10, Road No.1, IPIA, Kota-324005 (Rajasthan), India

Tel. : 0744-3535544, 2665544 | Website : www.reliablekota.com | E-mail : info@reliablekota.com