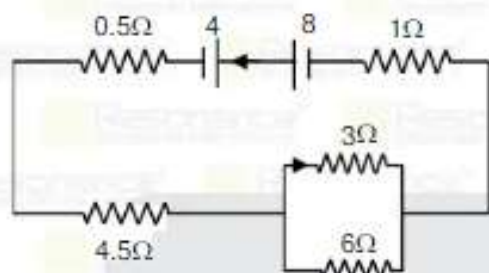


PART : PHYSICS

1.



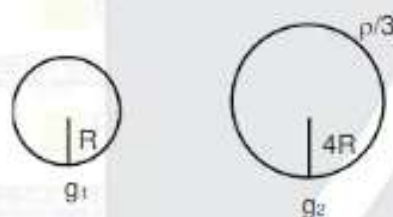
The current in the 3Ω is $x/3$, then the value of x will be:

- (1) $\frac{1}{3}$ A (2) $\frac{1}{6}$ A (3) $\frac{1}{2}$ A (4) $\frac{1}{4}$ A

Ans. (1)

Sol. $i = \frac{4}{8} = \frac{1}{2}$
 $i_1 = \frac{1}{2} \times \frac{2}{3} = \frac{1}{3}$ A

2.



Ratio of acceleration due to gravity at the surface of two planets of radius R and $4R$ and densities ρ and

$\frac{\rho}{3}$:

- (1) $\frac{1}{3}$ (2) $\frac{3}{4}$ (3) $\frac{2}{3}$ (4) $\frac{5}{4}$

Ans. (2)

$g = \frac{4}{3} \pi G \rho R$
 $\frac{g_1}{g_2} = \frac{\rho_1}{\rho_2} \times \frac{R_1}{R_2} = 3 \times \frac{1}{4} = \frac{3}{4}$

3. Two identical heating coils are in series in one case & in parallel in the other case under the same voltage. Find the ratio of heat generated in the combination in two cases :

- (1) $\frac{1}{4}$ (2) $\frac{4}{1}$ (3) $\frac{2}{1}$ (4) $\frac{1}{2}$

Ans. (1)

Sol. $\frac{H_1}{H_2} = \frac{V^2 / 2R}{2V^2 / R} = \frac{1}{4}$

Resonance Eduventures Ltd.

Reg. Office & Corp. Office : CG Tower, A-46 & 52, IPIA, Near City Mall, Jhalawar Road, Kota (Raj.) - 324005

Ph. No.: +91-744-2777777, 2777700 | FAX No.: +91-022-39167222

To Know more : sms RESO at 56677 | Website : www.resonance.ac.in | E-mail : contact@resonance.ac.in | CIN : U80302RJ2007PLC024029

Toll Free : 1800 258 5555 | 7340010333 | [facebook.com/ResonanceEds](https://www.facebook.com/ResonanceEds) | twitter.com/ResonanceEds | www.youtube.com/resonance | blog.resonance.ac.in

4. A capacitor of capacity $2F$ is charged to voltage V & energy stored is E_1 . Now another identical uncharged capacitor is connected in parallel to the first capacitor finally energy stored in second capacitor is E_2 . Find

$$\frac{E_2}{E_1}$$

(1) $\frac{1}{4}$

(2) $\frac{4}{1}$

(3) $\frac{2}{1}$

(4) $\frac{1}{2}$

Ans. (1)

Sol. $E_1 = \frac{1}{2}CV^2$

$$E_2 = \frac{1}{2}C \times \left(\frac{CV+0}{C+C} \right)^2 = \frac{1}{2}C \frac{V^2}{4}$$

$$\frac{E_2}{E_1} = \frac{1}{4}$$

5. On some new scale boiling point of water is $65^\circ X$ & Freezing point is $-15^\circ X$. Find the value of $-95^\circ X$ in Fahrenheit scale :

(1) 65

(2) 14

(3) 35

(4) 23

Ans. (4)

Sol. $\frac{F-32}{9} = \frac{(-95)+15}{65+15}$

$$F = 23$$

6. A projectile is projected at 30° angle from horizontal. It is at same height from ground at $t = 3$ and $t = 5$ seconds respectively. Find the speed of projection

(1) 80 m/s

(2) 40 m/s

(3) 20 m/s

(4) 100 m/s

Ans. (1)

Sol. $8 = \frac{2u \sin 30^\circ}{g}$

$$u = 80 \text{ m/s}$$

7. A lens is made of material of refractive index 1.8. It is immersed in liquid of refractive index 1.5. Radius of curvature of each face is 20 cm. Find the ratio of power of lens in air & power of lens in liquid :

(1) 4 cm

(2) 8 cm

(3) 6 cm

(4) 2 cm

Ans. (1)

Sol. $P_1 = (1.8-1) \left(\frac{2}{20} \right)$

$$P_2 = \left(\frac{1.8}{1.5} - 1 \right) \left(\frac{2}{20} \right)$$

$$\frac{P_1}{P_2} = 4 \text{ cm}$$

8. If wavelength of light incident on a metallic is λ then stopping potential is V_0 , and if wavelength is 2λ , then stopping potential is $V_0/4$ then find threshold wavelength of metal :

(1) 9λ

(2) 7λ

(3) 5λ

(4) 3λ

Ans. (4)

Resonance Eduventures Ltd.

Reg. Office & Corp. Office : CG Tower, A-46 & 52, IPIA, Near City Mall, Jhalawar Road, Kota (Raj.) - 324005

Ph. No.: +91-744-2777777, 2777700 | FAX No. : +91-022-39167222

To Know more : sms RFSD at 56577 | Website : www.resonance.ac.in | E-mail : contact@resonance.ac.in | CIN : U180302R12007PLC024029

Sol. Let λ_0 is the threshold wavelength

$$eV = hc \left(\frac{1}{\lambda} - \frac{1}{\lambda_0} \right)$$

$$eV_0 = hc \left(\frac{1}{\lambda} - \frac{1}{\lambda_0} \right) \quad \dots(1)$$

$$\frac{eV_0}{4} = hc \left(\frac{1}{2\lambda} - \frac{1}{\lambda_0} \right) \quad \dots(2)$$

eq (1)/eq (2)

$$\frac{hc \left(\frac{1}{\lambda} - \frac{1}{\lambda_0} \right)}{hc \left(\frac{1}{2\lambda} - \frac{1}{\lambda_0} \right)}$$

$$\left(\frac{1}{2\lambda} - \frac{1}{\lambda_0} \right) = \left(\frac{1}{\lambda} - \frac{1}{\lambda_0} \right)$$

$$\frac{24}{\lambda} - \frac{4}{\lambda_0} = \frac{1}{\lambda} - \frac{1}{\lambda_0}$$

$$\frac{2}{\lambda} - \frac{1}{\lambda} = \frac{4}{\lambda_0} - \frac{1}{\lambda_0}$$

$$\frac{2-1}{\lambda} = \frac{4-1}{\lambda_0}$$

$$\frac{1}{\lambda} = \frac{3}{\lambda_0}$$

$$\lambda_0 = 3\lambda$$

threshold wavelength in terms of $\lambda_0 = 3\lambda$.

9. Critical angle of a material w.r.t. vacuum is 45° . If speed of light in vacuum is 3×10^8 m/s. Find speed of light in that medium.

- (1) $\sqrt{2} \times 10^8$ m/s (2) 5×10^7 m/s (3) 3.12×10^8 m/s (4) 2.12×10^8 m/s

Ans. (4)

Sol. $n = \sqrt{2}$

$$V = \frac{C}{n} = \frac{3}{\sqrt{2}} \times 10^8 = 2.12 \times 10^8 \text{ m/s}$$

10. A machine gun fires bullets of mass 10 gm each with 250 m/s. If 125 N force acts to hold it. Find the number of bullets fired per seconds :

- (1) 55 (2) 45 (3) 40 (4) 65

Ans. (1)

Sol. $F = \frac{\Delta P}{\Delta t} = \frac{N}{t} \times \frac{10}{1000} \times 250$

$$125 = \frac{5}{2} \times \frac{N}{t} \Rightarrow \frac{N}{t} = 50$$

Resonance Eduventures Ltd.

Reg. Office & Corp. Office : CG Tower, A-46 & 52, IPIA, Near City Mall, Jhalawar Road, Kota (Raj.) - 324005

Ph. No.: +91-744-2777777, 2777700 | FAX No. : +91-022-39167222

Website: www.resonance.ac.in | www.resonance.in | www.resonance.edu.in

11. $F = 2 + 3x$ N acting on a particle. Then work done by force when particle displaced from $x = 0$ to $x = 4$:
 (1) 32 J (2) 22 J (3) 16 J (4) 12 J

Ans. (1)

Sol. $W = \int_{x=0}^{x=4} F dx = 2x + \frac{3x^2}{2}$
 $= 2(4) + \frac{3}{2}(16) = 8 + 24 = 32$ J

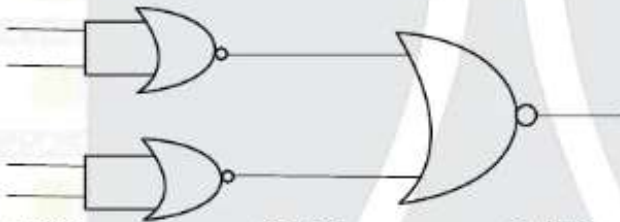
12. Three gases Ne, Cu_2 and XeF_6 (monoatomic, diatomic and polyatomic) are at same temperature. Find the order of v_{rms} of gases

- (1) $v_{\text{mono}} > v_{\text{dia}} > v_{\text{poly}}$ (2) $v_{\text{mono}} = v_{\text{dia}} > v_{\text{poly}}$ (3) $v_{\text{mono}} < v_{\text{dia}} < v_{\text{poly}}$ (4) $v_{\text{mono}} = v_{\text{dia}} = v_{\text{poly}}$

Ans. (1)

Sol. $v = \sqrt{\frac{3RT}{M}}$

- 13.

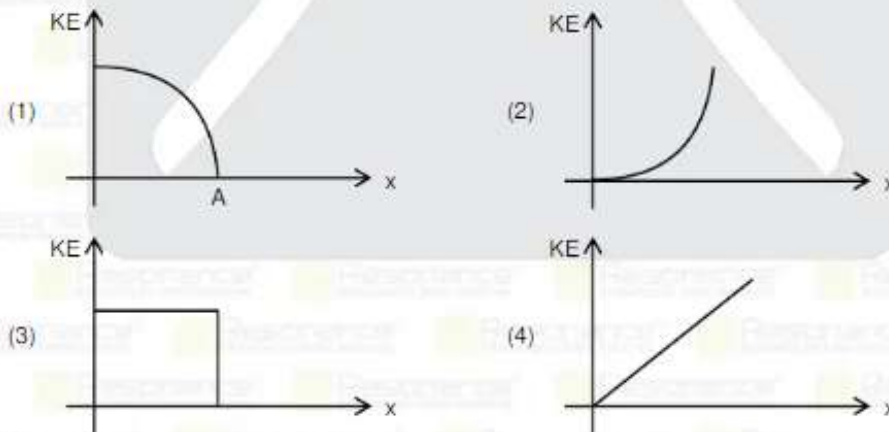


- (1) OR (2) NOR (3) AND (4) NAND

Ans. (3)

Sol. $A + B$ is the Boolean equation

14. Which is the correct graph for K.E. v/s position in SHM.



Ans. (1)

15. A coin placed on a rotating turntable just slips at 1 cm distance from axis at angular speed ω . At what distance will it slip at speed $\frac{\omega}{2}$:

- (1) 4 cm (2) 2 cm (3) 1 cm (4) 6 cm

Ans. (1)

Resonance Eduventures Ltd.

Reg. Office & Corp. Office : CG Tower, A-46 & 52, IPIA, Near City Mall, Jhalawar Road, Kota (Raj.) - 324005

Ph. No.: +91-744-2777777, 2777700 | FAX No. : +91-022-39167222

To Know more : sms RESO at 56677 | Website : www.resonance.ac.in | E-mail : contact@resonance.ac.in | CIN : U80302RJ2007PLC024029

Sol. $m\omega^2 r = \mu mg$

$$m\left(\frac{\omega}{2}\right)^2 r^1 = \mu mg$$

$$r = \frac{r^1}{4}$$

$$r^1 = 4 \text{ cm}$$

16. Half-life of a radioactive sample A is equal to average life of sample B, then which of the following options is correct

(1) $\lambda_A = \lambda_B$

(2) $\lambda_B = 2/n\lambda_A$

(3) $\lambda_A = 2/n\lambda_B$

(4) $\lambda_A = n\lambda_B$

Ans. (4)

Sol. $\lambda_A = \frac{1/n}{t_{A_{1/2}}} = \frac{1/n}{t_B} = n\lambda_B$

17. If a wire is stretched with force 100 N, its length is l_1 . If force applied is 120 N, its length is l_2 . If

$$10l_2 = 11l_1 \text{ \& natural length } l_0 = \frac{1}{x} l_1. \text{ Find } x$$

(1) 1

(2) 2

(3) 3

(4) 4

Ans. (2)

Sol. $100 = K(l_1 - l_0)$

$$120 = K(l_2 - l_0)$$

$$\frac{6}{5} = \frac{l_2 - l_0}{l_1 - l_0}$$

$$\Rightarrow 6l_1 - 6l_0 = 5l_2 - 5l_0$$

$$\Rightarrow 6l_1 - 5l_2 = l_0 \Rightarrow 6l_1 - \frac{11}{2}l_1 = l_0 \Rightarrow \frac{1}{2}l_1 = l_0$$

18. 1 g water at 100°C is converted to 1g steam at 100°C and 1atm pressure. If volume of water is

$$1 \times 10^{-6} \text{ m}^3 \text{ and that of steam is } 1.671 \times 10^{-3} \text{ m}^3 \text{ and latent heat of vaporization is } 2456 \frac{\text{KJ}}{\text{kg}}. \text{ Find the}$$

increase in internal average of water :

(1) 2050 J

(2) 2250 J

(3) 2289 J

(4) 2089 J

Ans. (3)

Sol. $\Delta W = P\Delta V = 1.670 \times 10^2 = 167 \text{ J}$

$$\Delta Q = mL = 2456 \text{ J}$$

$$\Delta U = \Delta Q - \Delta W = 2289 \text{ J}$$

19. Range of a tower for transmitting signals on earth surface is 4 km. If radius of earth is 6400 km, the height of the tower is $x \times 10^{-2}$ m, find x

(1) 125

(2) 100

(3) 50

(4) 150

Ans. (1)

Sol. $h = \frac{d^2}{2R} = 125 \times 10^{-2} \text{ m}$

Resonance Eduventures Ltd.

Reg. Office & Corp. Office : CG Tower, A-46 & 52, IPIA, Near City Mall, Jhalawar Road, Kota (Raj.) - 324005

Ph. No.: +91-744-2777777, 2777700 | FAX No. : +91-022-39167222

To Know more : sms RESO at 56677 | Website : www.resonance.ac.in | E-mail : contact@resonance.ac.in | CIN : U80302RJ2007PLC024029

20. **Statement-1** : AU, Parsec & light year are used to measure large distance.

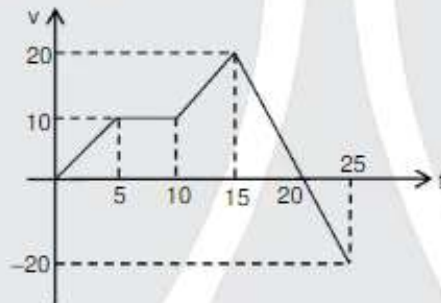
Statement-2 : AU < Parsec < Light year.

- (1) Statement-1 and statement-2 both are correct
 (2) Statement-1 and statement-2 both are incorrect
 (3) Statement-1 is correct but statement-2 is incorrect
 (4) Statement-1 is incorrect and statement-2 is correct

Ans. (3)

Sol. 1 Parsec. = 2.06×10^5 AU = 3.26 light year
 AU < Light Year < Parsec

21. Velocity time curve for a particle moving in a straight line is shown, find the ratio of distance and displacement in the shown time interval.

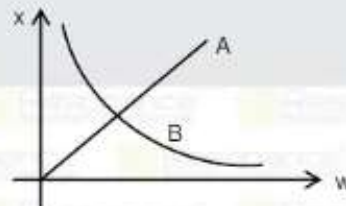


- (1) $\frac{5}{3}$ (2) $\frac{3}{5}$ (3) $\frac{4}{3}$ (4) $\frac{3}{4}$

Ans. (1)

Sol. Distance = $25 + 50 + 75 + 50 + 50 = 250$
 Displacement = $25 + 50 + 75 + 50 - 50 = 150$
 $\Rightarrow \frac{250}{150} = \frac{5}{3}$

22. Graph A and B shown are for inductor L, capacitor C or resistor R.



Choose the right option matching the graph with the element (Here ω = angular frequency and x is reactant):

- (1) A \rightarrow L ; B \rightarrow C (2) A \rightarrow C ; B \rightarrow L (3) A \rightarrow R ; B \rightarrow L (4) A \rightarrow C ; B \rightarrow R

Ans. (1)

Sol. $X_L = wL$
 $X_C = \frac{1}{wC}$

Resonance Eduventures Ltd.

Reg. Office & Corp. Office : CG Tower, A-46 & 52, IPIA, Near City Mall, Jhalawar Road, Kota (Raj.) - 324005

Ph. No.: +91-744-2777777, 2777700 | FAX No.: +91-022-39167222

To Know more : sms RESO at 56677 | Website : www.resonance.ac.in | E-mail : contact@resonance.ac.in | CIN : U80302RJ2007PLC024029

Toll Free : 1800 258 5555 | 7340010333 | [f](https://www.facebook.com/ResonanceEd) [i](https://www.instagram.com/ResonanceEd) [y](https://www.youtube.com/ResonanceEd) www.resonance.ac.in | www.resonance.ac.in