

44
YEARS
OF EXCELLENCE



NARAYANA
EDUCATIONAL INSTITUTIONS

NARAYANA GRABS
THE LION'S SHARE IN JEE-ADV.2022

5 RANKS in OPEN CATEGORY
ONLY FROM NARAYANA
IN TOP 10 AIR



JEE MAIN (APRIL) 2023 (13-04-2023-FN)

Memory Based Question Paper
CHEMISTRY



Toll Free: 1800 102 3344

 SUBSCRIBE /TheNarayanaGroup

CHEMISTRY

1. 12 g of non-electrolyte 'A' dissolved in 1000 ml of solution. It is isotonic with 0.05 molar glucose solution. Find molar mass of 'A'.

Ans. 240 g

Sol. $\Pi_A = \Pi_{\text{glucose}}$

$$\frac{12}{M} \times \frac{1}{1} = 0.05$$

$$M = \frac{12}{0.05} = 240 \text{ g}$$

2. For a real gas at $P = 100 \text{ atm}$, $T = 500 \text{ K}$, volume is found to be 0.15 dm^3 . At this condition compressibility factor of gas is 1.07. For the same sample at $P = 300 \text{ atm}$, $T = 300 \text{ K}$ compressibility factor is 1.7. If volume at this condition is $x \times 10^{-4} \text{ dm}^3$. Determine 'x'.

Ans. 476

Sol. $PV = ZnRT$

$$n = \frac{PV}{ZRT}$$

$$n = n$$

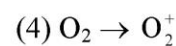
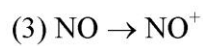
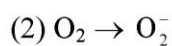
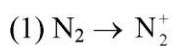
$$\frac{PV}{ZRT} = \frac{PV}{ZRT}$$

$$\frac{100 \times 0.15}{1.07 \times 500} = \frac{300 \times V}{1.7 \times 300}$$

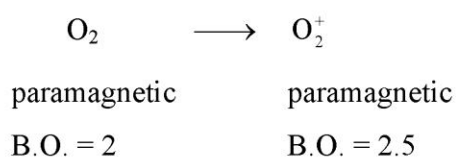
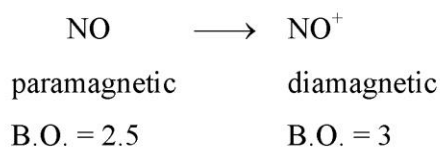
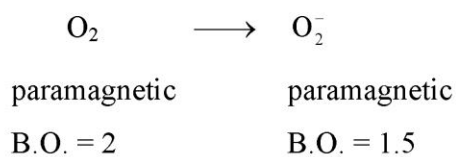
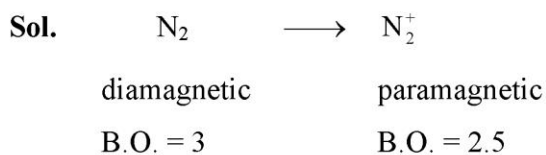
$$V = \frac{0.15 \times 1.7}{1.07 \times 5} = 0.0476 \text{ dm}^3 = 476 \times 10^{-4} \text{ dm}^3$$

$$x = 476$$

3. In which of the following options the species changes from paramagnetic to diamagnetic & bond order increases ?



Ans. (3)



4. What happens when lyophilic sol is added to lyophobic sol.

- (1) Prevention form coagulation
- (2) Precipitation
- (3) Electrophoresis
- (4) Coagulation

Ans. (1)

Sol. Lyophilic sol protect lyophobic sol from coagulation.

5. Radius of 2nd orbit of He^+ is r_0 , radius of 4th orbit of Be^{3+} is $x r_0$. Find x.

Ans. x = 2

Sol. $(r_2)_{\text{He}^+} = r_0 = 0.529 \times \frac{2^2}{2} \text{ \AA}$

$(r_4)_{\text{Be}^{3+}} = 0.529 \times \frac{4^2}{4} = 2 r_0$

6. Which of the following are incorrectly matched ?

- (i) Chlorophyll : Complex of Co
- (ii) EDTA : Used for removal of hardness
- (iii) $\text{Au}(\text{CN})_2^-$: Used in photography
- (iv) D-phenicillamine : Chelating ligand
- (v) $[(\text{Ph}_3\text{P})_3\text{RhCl}]$: Wilkinson's catalyst

- (1) (i) & (iii) (2) (i), (ii) & (iii) (3) (ii) & (iv) (4) (iii), (iv) & (v)

Ans. (1)

Sol. Chlorophyll is a coordination compound of magnesium.

$[\text{Ag}(\text{S}_2\text{O}_3)_2]^{3-}$ is used in photography.

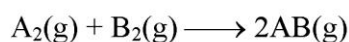
7. The bond enthalpy of A_2 bond is :

Given : $\text{A}_2(\text{g}) + \text{B}_2(\text{g}) \longrightarrow 2\text{AB}(\text{g})$, $\Delta H_f(\text{AB}) = -200 \text{ kJ/mol}$

The ratio of bond enthalpy of A_2 , B_2 , AB are in 1 : 05 : 1 ratio.

Ans. 800 kJ/mol

Sol. Let $\text{B.E.}_{\text{A-A}} = x$



$$\Delta H = -400 = \text{B.E.}_{\text{A-A}} + \text{B.E.}_{\text{B-B}} - 2\text{B.E.}_{\text{A-B}}$$

$$\Rightarrow -400 = x + \frac{x}{2} - 2x$$

$$\Rightarrow \frac{x}{2} = 400 \Rightarrow x = 800 \text{ kJ/mol}$$

8. $\text{Be}(\text{OH})_2 + \text{Sr}(\text{OH})_2 \longrightarrow \text{Product}$

For above reaction which of the following are correct?

- (A) Be is tetrahedrally co-ordinated in anionic part
- (B) Sr and Be are present in anionic part
- (C) It is acid base neutralisation
- (D) Sr and Be are present in cationic part

- (1) (A) and (C) (2) (A) Only (3) (C) Only (4) (B), (C)

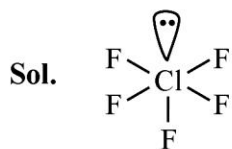
Ans. (1)

Sol. $\text{Be}(\text{OH})_2 + \text{Sr}(\text{OH})_2 \longrightarrow \text{Sr}[\text{Be}(\text{OH})_4]$

Amphoteric

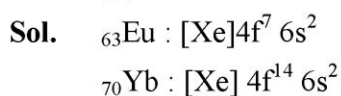
9. Select correct option
- (1) ClF_5 is square pyramidal, colourless gas
 - (2) ClF_5 is square pyramidal, colourless liquid
 - (3) ClF_5 is trigonal bipyramidal, colourless gas
 - (4) ClF_5 is trigonal bipyramidal, colourless liquid

Ans. (2)



10. Which of following pair has high third ionisation energy ?
- (1) Eu, Gd
 - (2) Eu, Yb
 - (3) Gd, Lu
 - (4) Gd, Yb

Ans. (2)



11. For a I^{st} order reaction, determine the ratio $t_{87.5\%}$ & $t_{50\%}$.

Ans. 3

Sol.

$$t_{87.5} = \frac{1}{k} \ln \left(\frac{100}{100 - 87.5} \right) = \frac{1}{k} \ln(8) = \frac{3 \ln 2}{k}$$

$$t_{50\%} = \frac{\ln 2}{k}$$

$$\therefore \frac{t_{87.5\%}}{t_{50\%}} = \frac{\frac{3 \ln 2}{k}}{\frac{\ln 2}{k}} = 3$$

12. Which of the following is **incorrect** matched ?

- (1) Zn – Liquation
- (2) Cu – Electrolysis
- (3) Ni – Mond's process
- (4) Ti – Van arkel method

Ans. (1)

Sol. Zn – Distillation

13. (A) Electron gain enthalpy of F is more negative than Cl

- (B) Ionisation energy decreases down the group in P.T.
 (C) Electronegativity depends on the surrounding atoms
 (D) NO and Al₂O₃ are amphoteric oxides

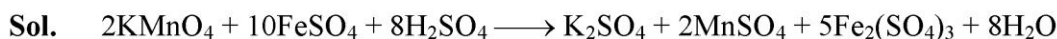
Incorrect statement is :

- (1) B, C (2) A, C, D (3) A, B, D (4) A, B, C, D

Ans. (3)

- 14.** 2 molecules of KMnO₄ are titrated with ferrous ammonium sulphate hexahydrate in presence of H₂SO₄. Determine the number of molecules of H₂O produced.

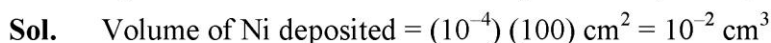
Ans. 68



Corresponding to 2 molecules of KMnO₄, 8 molecules of H₂O are released.

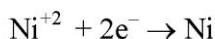
Also corresponding to 10 molecule of FeSO₄, 60 molecules of H₂O will also be produced.

- 15.** An aqueous solution of Ni(NO₃)₂ is electrolysed. How long would it take to form 10⁻³ mm thick layer on a 100 cm² area with 2 amp. current. (Density of Ni = 10 gm/ml, Ni = 60)



∴ Weight of Ni deposited = (10⁻²)(10) = 0.1 gram

∴ Moles of N deposited = $\frac{10^{-3}}{60} = \frac{1}{6} \times 10^{-2}$



⇒ Charge used = $\frac{1}{6} \times 10^{-2} \times 2F = (i)(t)$

$t = \frac{1}{6} \times 10^{-2} \times \frac{2 \times 6500}{2} \approx 161 \text{ sec}$



Which of the following statement is correct?

- (1) Be is tetrahedrally coordinated in anionic part of salt.
 (2) Sr & Be present in anionic part.
 (3) Acid-base neutralisation reaction.
 (4) Be is present in the cationic part.

Ans. (1)

17. An organic compound on combustion gives 0.022 g of CO₂ and 0.126 g H₂O. Compound contains 24% C, if the percentage of hydrogen is $x \times 10^{-1}$. Determine x.

Ans. 560

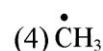
Sol. Mass of C = $\frac{0.022}{44} \times 12$ g

Mass of H = $\frac{0.126}{18} \times 2$ g

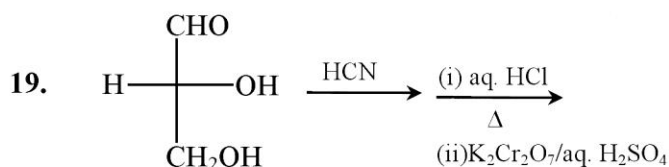
$$\text{Mass\% of H} = \frac{\frac{0.126}{18} \times 2}{\frac{0.022}{44} \times 12} \times 24$$

$$= 56\%$$

18. Which of the following deplete ozone layer?



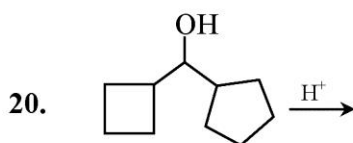
Ans. (1)



D(+)-Glyceraldehyde

- (1) Products obtained are optically active
 (2) Products mixture is racemic
 (3) One product is optically active and the other is meso
 (4) Products obtained are optically inactive

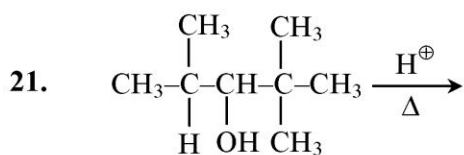
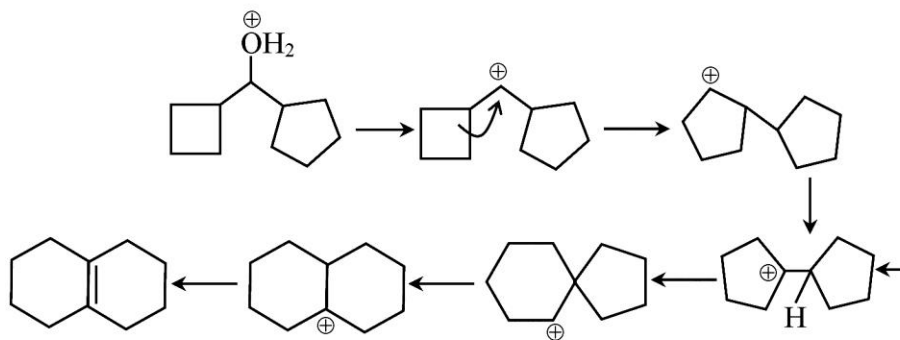
Ans. (3)



- (1) Both rings will be 5-membered in product
 (2) One ring will be 6 membered & other will be 4 membered in product
 (3) Both rings will be 6 membered in product
 (4) One ring four and other ring five membered in product

Ans. (3)

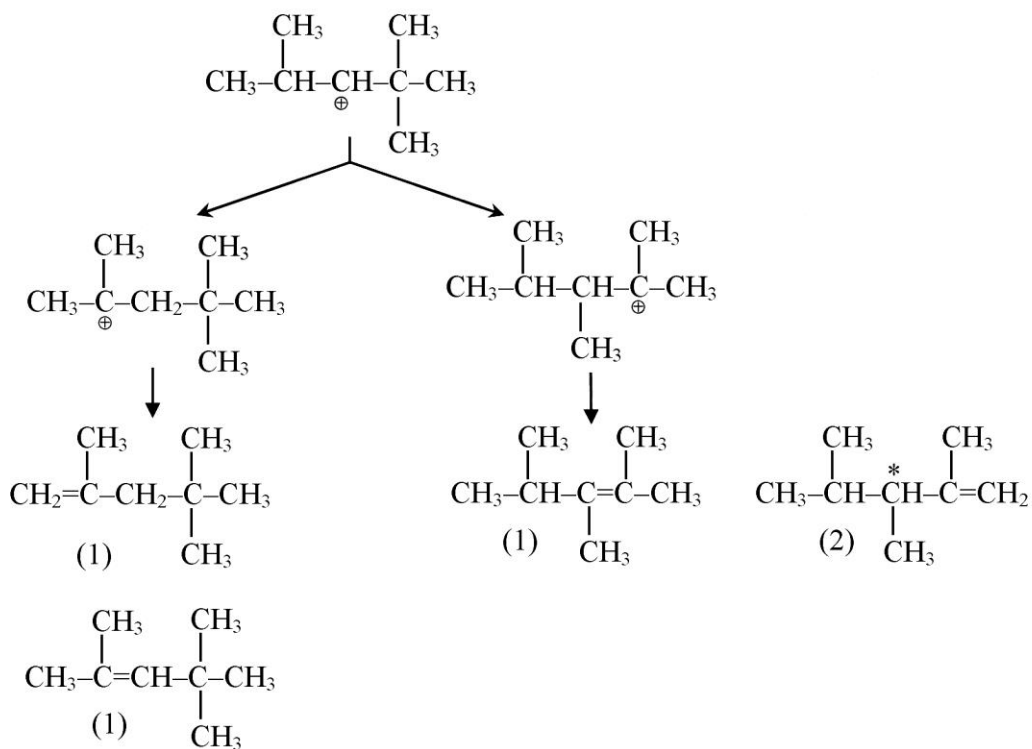
Sol.



Total number of products obtained by tertiary carbocation in the above reactions.

Ans. 5

Sol.



22. List I (Monomer)

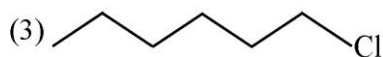
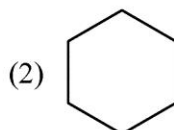
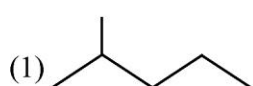
- (a) caprolatum
- (b) Isoprene
- (c) chloroprene
- (d) Polyester of glycol and terephthalic acid

List II (Polymer)

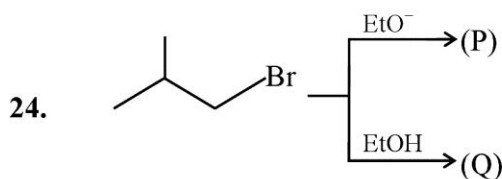
- (p) Neoprene
- (q) Dacron
- (r) Nylon-6
- (s) Natural rubber

Ans. (a) → (r), (b) → (s), (c) → (p), (d) → (q)

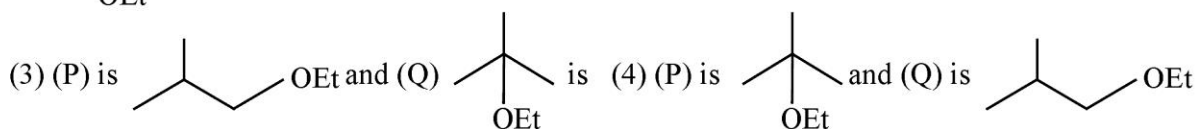
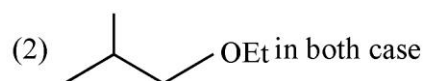
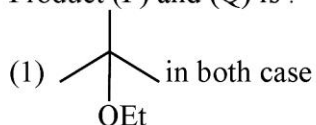
23. n-hexane $\xrightarrow[\Delta]{\text{AlCl}_3+\text{HCl}}$ Product is



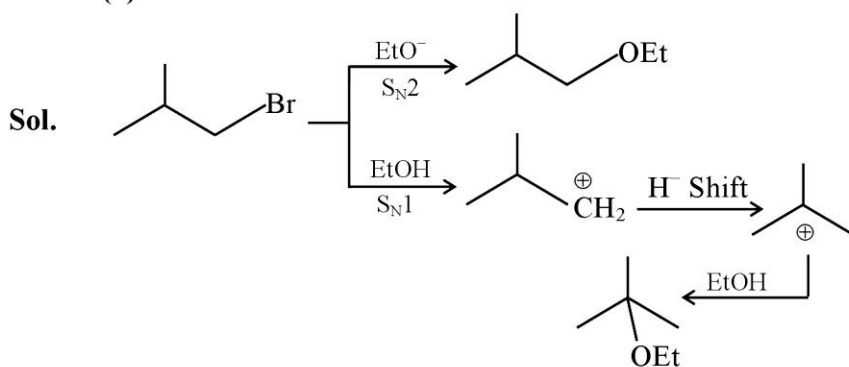
Ans. (1)

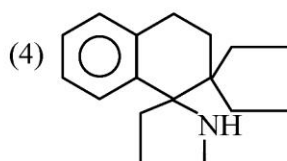
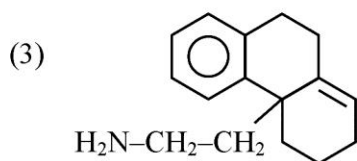
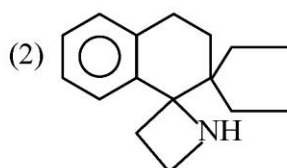
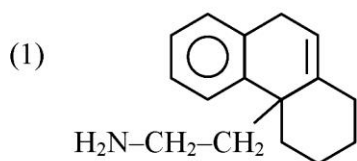
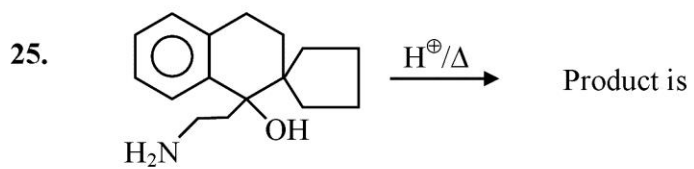


Product (P) and (Q) is :



Ans. (3)





Ans. (2)

