

Paper:	GENERAL TEST
Set Name:	SET 22
Exam Date:	06 Oct 2022
Exam Shift:	1
Language:	English

Section:	GENERAL TEST
Item No:	1
Question ID:	654701
Question Type:	MCQ
Question:	Actress and Model "Harnaaz Sandhu" was crowned as _____ in Dec 2021.
A:	Miss World 2021
B:	Miss India 2021
C:	Miss Universe 2021
D:	Miss Earth 2021

Section:	GENERAL TEST
Item No:	2
Question ID:	654702
Question Type:	MCQ
Question:	If each side of a cube is reduced by 50%, the surface area will reduced by.
A:	75%
B:	50%
C:	25%
D:	100%

Section:	GENERAL TEST
Item No:	3
Question ID:	654703
Question Type:	MCQ
Question:	If * is an operation such that $a * b = 3a - 4b$, find the value of $3 * 4$
A:	0
B:	-7
C:	7
D:	-1

Section:	GENERAL TEST
Item No:	4
Question ID:	654704
Question Type:	MCQ

Question:	In a certain language TRIANGLE is written as VTKCPING. How RECTANGLE will be written
A:	TGEUCPING



B:	TGEVCPKNG
C:	TGEVCPING
D:	GTEVCPING

Section:	GENERAL TEST
Item No:	5
Question ID:	654705
Question Type:	MCQ
Question:	<p>The next figure is</p>
A:	
B:	
C:	
D:	



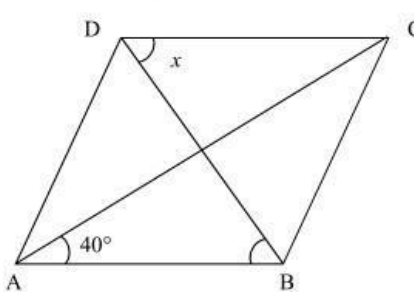
Section:	GENERAL TEST
Item No:	6
Question ID:	654706
Question Type:	MCQ
Question:	Two numbers are in ratio of 7:10 and if the sum of the numbers is 119. Find the difference of the numbers.
A:	7
B:	21
C:	17
D:	12

Section:	GENERAL TEST
----------	--------------

Item No:	7
Question ID:	654707
Question Type:	MCQ
Question:	



A:	Field Marshal K. M Cariappa
B:	General Manoj Mukund Narayan
C:	General Bipin Rawat
D:	General Manoj Pande

Section:	GENERAL TEST
Item No:	8
Question ID:	654708
Question Type:	MCQ
Question:	<p>In the given figure ABCD is a rhombus, the value of x is .</p> 
A:	40°
B:	50°
C:	90°
D:	60°



Section:	GENERAL TEST
Item No:	9
Question ID:	654709
Question Type:	MCQ
Question:	<p>What is the next number 2, 9, 28, 65, _____.</p>
A:	130
B:	126
C:	139
D:	136

Section:	GENERAL TEST
Item No:	10
Question ID:	6547010
Question Type:	MCQ
Question:	'Neeraj Chopra' is associated with which sports event?
A:	Wrestling
B:	Boxing

Section:	GENERAL TEST
----------	--------------

C:	Shooting
D:	Javelin Throw



Item No:	11
Question ID:	6547011
Question Type:	MCQ
Question:	The missing term of the series is A2, C5, E8, G11, _____
A:	I 13
B:	H 14
C:	I 14
D:	H 13

Section:	GENERAL TEST
Item No:	12
Question ID:	6547012
Question Type:	MCQ
Question:	What is the full form of NABARD?
A:	National Bank for Agriculture and Resource Development
B:	National Bank for Agriculture and Rural Development
C:	National Bank for Asian Research Development
D:	National Bank for Agriculture Related Development

Section:	GENERAL TEST																				
Item No:	13																				
Question ID:	6547013																				
Question Type:	MCQ																				
Question:	Match List I with List II																				
	<table border="1"> <thead> <tr> <th colspan="2">LIST I (Equations)</th> <th colspan="2">LIST II (Solutions)</th> </tr> </thead> <tbody> <tr> <td>A.</td> <td>$2x - 4 = 2 - x$</td> <td>I.</td> <td>$x = 3$</td> </tr> <tr> <td>B.</td> <td>$7 - 4x = 0$</td> <td>II.</td> <td>$x = 2$</td> </tr> <tr> <td>C.</td> <td>$\frac{x}{2} - 3 = 0$</td> <td>III.</td> <td>$x = \frac{7}{4}$</td> </tr> <tr> <td>D.</td> <td>$2x + 3 = x + 6$</td> <td>IV.</td> <td>$x = 6$</td> </tr> </tbody> </table>	LIST I (Equations)		LIST II (Solutions)		A.	$2x - 4 = 2 - x$	I.	$x = 3$	B.	$7 - 4x = 0$	II.	$x = 2$	C.	$\frac{x}{2} - 3 = 0$	III.	$x = \frac{7}{4}$	D.	$2x + 3 = x + 6$	IV.	$x = 6$
LIST I (Equations)		LIST II (Solutions)																			
A.	$2x - 4 = 2 - x$	I.	$x = 3$																		
B.	$7 - 4x = 0$	II.	$x = 2$																		
C.	$\frac{x}{2} - 3 = 0$	III.	$x = \frac{7}{4}$																		
D.	$2x + 3 = x + 6$	IV.	$x = 6$																		
	Choose the correct answer from the options given below:																				
A:	A-II, B-IV, C-III, D-I																				
B:	A-I, B-III, C-IV, D-II																				
C:	A-II, B-III, C-IV, D-I																				
D:	A-II, B-I, C-IV, D-III																				

Section:	GENERAL TEST
----------	--------------

Item No:	14
Question ID:	6547014
Question Type:	MCQ



Question:	LIST I (Crematoriums (samadhi sthal))		LIST II (Person)	
	A.	Ekta sthal	I.	Jawahar Lal Nehru
	B.	Vijay Ghat	II.	Rajiv Gandhi
	C.	Veer Bhumi	III.	Lal Bahadur Shastri
	D.	Shanti Van	IV.	Giani Zail Singh
Choose the correct answer from the option given below:				
A:	A-I, B-II, C-III, D-IV			
B:	A-II, B-IV, C-I, D-III			
C:	A-IV, B-III, C-II, D-I			
D:	A-III, B-I, C-IV, D-II			

Section:	GENERAL TEST
Item No:	15
Question ID:	6547015
Question Type:	MCQ
Passage:	A, B, C, D and E are standing in row. 'A' is between 'B' and 'D'. E is not at the starting of row. 'C' is just before D. Study above statement and answer the question
Question:	Who is at the middle of the row.
A:	D
B:	C
C:	A
D:	B




Section:	GENERAL TEST
Item No:	16
Question ID:	6547016
Question Type:	MCQ
Passage:	A, B, C, D and E are standing in row. 'A' is between 'B' and 'D'. E is not at the starting of row. 'C' is just before D. Study above statement and answer the question
Question:	Who is at the starting of the row.
A:	C
B:	D
C:	A
D:	B

Section:	GENERAL TEST
Item No:	17
Question ID:	6547017
Question Type:	MCQ

Passage:	A, B, C, D and E are standing in row. 'A' is between 'B' and 'D'. E is not at the starting of row. 'C' is just before D. Study above statement and answer the question
Question:	'B' is standing in between



A:	'E' and 'D'
B:	'A' and 'E'
C:	'D' and 'C'
D:	'A' and 'C'

Section:	GENERAL TEST
Item No:	18
Question ID:	6547018
Question Type:	MCQ
Question:	 <p>The number of triangles in above figure is</p>
A:	5
B:	10
C:	18
D:	6

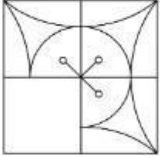
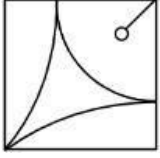
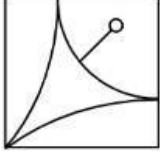
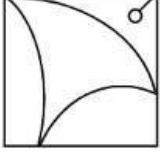
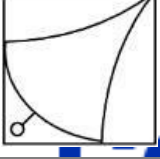
Section:	GENERAL TEST
Item No:	19
Question ID:	6547019
Question Type:	MCQ
Question:	Which of the following standing committee of parliament has no member from Rajya Sabha?
A:	Public Account committee
B:	Estimate Committee
C:	Committee on public undertaking
D:	Committee on government assurance

Section:	GENERAL TEST
Item No:	20
Question ID:	6547020
Question Type:	MCQ
Question:	New education policy, 2020 is goal to achieve 100% gross enrolment Ratio(GER) in school Education by the year _____.
A:	2025
B:	2030
C:	2035

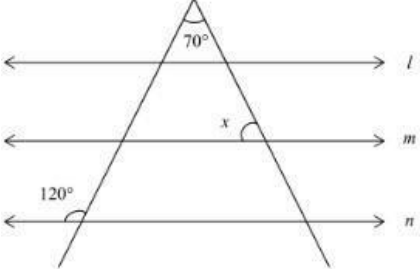
D:	2040
----	------

Section:	GENERAL TEST
----------	--------------



Item No:	21
Question ID:	6547021
Question Type:	MCQ
Question:	Which of the following will complete the adjoining figure 
A:	
B:	
C:	
D:	



Section:	GENERAL TEST
Item No:	22
Question ID:	6547022
Question Type:	MCQ
Question:	In the given figure $l \parallel m \parallel n$, the value of x is 
A:	80°
B:	70°
C:	60°
D:	50°

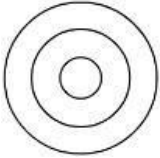
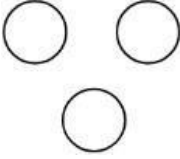
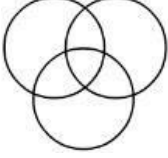
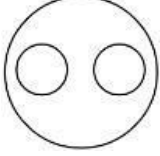
Section:	GENERAL TEST
Item No:	23

Question ID:	6547023
Question Type:	MCQ
Question:	Which of the following date world environment day is celebrated?



A:	21 June
B:	5 June
C:	21 July
D:	22 March

Section:	GENERAL TEST
Item No:	24
Question ID:	6547024
Question Type:	MCQ
Question:	If DOG = 26, FLY = 43 them what is the code for 'BIRD'
A:	60
B:	32
C:	33
D:	24

Section:	GENERAL TEST
Item No:	25
Question ID:	6547025
Question Type:	MCQ
Question:	Which is the best diagram, showing the relation among Father, Mother and family.
A:	
B:	
C:	
D:	

Section:	GENERAL TEST
Item No:	26
Question ID:	6547026
Question Type:	MCQ

Question:	Which of the following seas has highest salinity in the world?
A:	Dead sea
B:	Black sea



C:	Red sea
D:	Mediterranean sea

Section:	GENERAL TEST
Item No:	27
Question ID:	6547027
Question Type:	MCQ
Question:	If the sugar price is increased by 25% by how much percent consumption should be reduced that expense remains same.
A:	25%
B:	20%
C:	30%
D:	35%

Section:	GENERAL TEST
Item No:	28
Question ID:	6547028
Question Type:	MCQ
Question:	Mohan's Mother is three times as old as Mohan. After 6 years, his mother will be two times as old as he will be then, find the age of Mohan.
A:	18 years
B:	6 years
C:	3 years
D:	16 years

Section:	GENERAL TEST
Item No:	29
Question ID:	6547029
Question Type:	MCQ
Question:	Which organisation published the Human Development Index (HDI) Report?
A:	UNDP
B:	UNESCO
C:	IMF
D:	UNICEF

Section:	GENERAL TEST
Item No:	30
Question ID:	6547030
Question Type:	MCQ
Question:	Penicillium is a _____.
A:	Virus

B:	Algae
C:	Fungi



D: Bacteria

Section:	GENERAL TEST
Item No:	31
Question ID:	6547031
Question Type:	MCQ
Question:	In a row of 35 student, Ramesh is 24 th from starting. Two student from last went away. What is the position of Ramesh from last row?
A:	12 th
B:	10 th
C:	14 th
D:	11 th

Section:	GENERAL TEST
Item No:	32
Question ID:	6547032
Question Type:	MCQ
Question:	Which one of the following is the correct sequence in the decreasing order of contribution of different sources to the gross domestic product (GDP) in India.
A:	Service- Industry-Agriculture
B:	Service-Agriculture-Industry
C:	Industry-Service-Agriculture
D:	Agriculture-Industry-service

Section:	GENERAL TEST																				
Item No:	33																				
Question ID:	6547033																				
Question Type:	MCQ																				
Question:	Match List I with List II <table border="1"><thead><tr><th colspan="2">List I (Country)</th><th colspan="2">List II (Capital city)</th></tr></thead><tbody><tr><td>A.</td><td>Ukrain</td><td>I.</td><td>Kiev</td></tr><tr><td>B.</td><td>Sri Lanka</td><td>II.</td><td>Warsaw</td></tr><tr><td>C.</td><td>Turkey</td><td>III.</td><td>Colombo</td></tr><tr><td>D.</td><td>Poland</td><td>IV.</td><td>Ankara</td></tr></tbody></table> <p>Choose the correct answer from the options given below:</p>	List I (Country)		List II (Capital city)		A.	Ukrain	I.	Kiev	B.	Sri Lanka	II.	Warsaw	C.	Turkey	III.	Colombo	D.	Poland	IV.	Ankara
List I (Country)		List II (Capital city)																			
A.	Ukrain	I.	Kiev																		
B.	Sri Lanka	II.	Warsaw																		
C.	Turkey	III.	Colombo																		
D.	Poland	IV.	Ankara																		
A:	A-I, B-III, C-II, D-IV																				
B:	A-II, B-III, C-IV, D-I																				
C:	A-I, B-III, C-IV, D-II																				
D:	A-I, B-II, C-III, D-IV																				

Section:	GENERAL TEST
----------	--------------

Item No:	34
Question ID:	6547034
Question Type:	MCQ



Question:	Which one of the following bills must be passed by each house of the India parliament separately by special majority?
A:	Money Bill
B:	Finance Bill
C:	Ordinary Bill
D:	Constitutional Amendment Bill

Section:	GENERAL TEST
Item No:	35
Question ID:	6547035
Question Type:	MCQ
Question:	The average of first 8 multiples of 8 is.
A:	41
B:	45
C:	36
D:	31

Section:	GENERAL TEST
Item No:	36
Question ID:	6547036
Question Type:	MCQ
Question:	
A:	
B:	
C:	
D:	

kho

Section:	GENERAL TEST
Item No:	37
Question ID:	6547037
Question Type:	MCQ



Question:	At hill station, the boiling point of water will be _____.
A:	Same as at sea level
B:	More than that at sea level
C:	Less than that at sea level
D:	Equal to the melting point of Ice

Section:	GENERAL TEST
Item No:	38
Question ID:	6547038
Question Type:	MCQ
Passage:	A rectangular paper of width 8cm and length 22cm rolled along it width and a cylinder is formed. On the above Intimation, Solve the question given below
Question:	The radius of the cylinder is-
A:	$\frac{2}{7}$ cm
B:	7 cm
C:	$\frac{7}{2}$ cm
D:	14 cm

Section:	GENERAL TEST
Item No:	39
Question ID:	6547039
Question Type:	MCQ
Passage:	A rectangular paper of width 8cm and length 22cm rolled along it width and a cylinder is formed. On the above Intimation, Solve the question given below
Question:	If the outer surface area of cylinder is pointed @ ₹ 0.5/cm ² , then the total cost of painting is
A:	₹88
B:	₹176
C:	₹78
D:	₹186

Section:	GENERAL TEST
Item No:	40
Question ID:	6547040
Question Type:	MCQ

Passage:	A rectangular paper of width 8cm and length 22cm rolled along its width and a cylinder is formed. On the above information, solve the question given below
Question:	The volume of cylinder is
A:	98cm^3



B:	$49\pi\text{cm}^3$
C:	49cm^3
D:	$98\pi\text{cm}^3$

Section:	GENERAL TEST																				
Item No:	41																				
Question ID:	6547041																				
Question Type:	MCQ																				
Question:	<p>Match List I with List II</p> <table border="1" style="margin-left: auto; margin-right: auto;"> <thead> <tr> <th colspan="2">LIST I (Movement/organization)</th> <th colspan="2">LIST II (Founder)</th> </tr> </thead> <tbody> <tr> <td>A.</td> <td>Brahmo Samaj</td> <td>I.</td> <td>Henry Vivian Derozio</td> </tr> <tr> <td>B.</td> <td>Satya shodhak samaj</td> <td>II.</td> <td>Gopal Krishan Gokhale</td> </tr> <tr> <td>C.</td> <td>Young Bengal Movement</td> <td>III.</td> <td>Raja Ram Mohan Roy</td> </tr> <tr> <td>D.</td> <td>Servant of India society</td> <td>IV.</td> <td>Jyotiba Phule</td> </tr> </tbody> </table> <p>Choose the correct answer from the options given below:</p>	LIST I (Movement/organization)		LIST II (Founder)		A.	Brahmo Samaj	I.	Henry Vivian Derozio	B.	Satya shodhak samaj	II.	Gopal Krishan Gokhale	C.	Young Bengal Movement	III.	Raja Ram Mohan Roy	D.	Servant of India society	IV.	Jyotiba Phule
LIST I (Movement/organization)		LIST II (Founder)																			
A.	Brahmo Samaj	I.	Henry Vivian Derozio																		
B.	Satya shodhak samaj	II.	Gopal Krishan Gokhale																		
C.	Young Bengal Movement	III.	Raja Ram Mohan Roy																		
D.	Servant of India society	IV.	Jyotiba Phule																		
A:	A-I, B-II, C-III, D-IV																				
B:	A-II, B-IV, C-I, D-III																				
C:	A-III, B-IV, C-II, D-I																				
D:	A-III, B-IV, C-I, D-II																				

Section:	GENERAL TEST
Item No:	42
Question ID:	6547042
Question Type:	MCQ
Question:	The headquarter of RBI is situated at-
A:	Delhi
B:	Kolkata
C:	Chennai
D:	Mumbai

Section:	GENERAL TEST
Item No:	43
Question ID:	6547043
Question Type:	MCQ
Question:	Who is the chairperson of 15 th finance commission
A:	Y. V. Reddy
B:	N. K. Singh
C:	Vijay Kelkar
D:	C. Rangarajan



Section:	GENERAL TEST
Item No:	44
Question ID:	6547044



Question Type:	MCQ
Question:	Headquarter of World Health Organization (WHO) is located at -
A:	Paris
B:	Geneva
C:	New York
D:	Washington D.C.

Section:	GENERAL TEST
Item No:	45
Question ID:	6547045
Question Type:	MCQ
Question:	Samsung : mobile :: Action: ?
A:	Cricket
B:	Shoes
C:	Fighter
D:	Movie

Section:	GENERAL TEST
Item No:	46
Question ID:	6547046
Question Type:	MCQ
Question:	The deepest oceanic trench 'Mariana' is located in -
A:	Atlantic Ocean
B:	Arctic Ocean
C:	Pacific Ocean
D:	Indian Ocean

Section:	GENERAL TEST
Item No:	47
Question ID:	6547047
Question Type:	MCQ
Question:	Find the value of $(25)^3 + (-29)^3 + (4)^3$
A:	-8700
B:	0
C:	8700
D:	2900

Section:	GENERAL TEST
Item No:	48
Question ID:	6547048

Question Type:	MCQ
Question:	If the area and sum of parallel side of a trapezium are 48 cm^2 and 48cm respectively. Then the distance between the parallel sides is



A:	$\frac{1}{2}$ cm
B:	1 cm
C:	2 cm
D:	3 cm

Section:	GENERAL TEST
Item No:	49
Question ID:	6547049
Question Type:	MCQ
Question:	One TB (Tera Byte) approximately occupies or comprises which of the following data or space size
A:	1000 KB
B:	1000 GB
C:	1024 KB
D:	1024 GB

Section:	GENERAL TEST
Item No:	50
Question ID:	6547050
Question Type:	MCQ
Question:	If 36 persons can finish 50% of work in 12 days In how many days 72 person can finish the complete work?
A:	6
B:	3
C:	9
D:	12

Section:	GENERAL TEST
Item No:	51
Question ID:	6547051
Question Type:	MCQ
Question:	Who is known as 'Nightingale of India' ?
A:	Vijaya Laxmi Pandit
B:	Indira Gandhi
C:	Sarojini Naidu
D:	Lata Mangeshkar

Section:	GENERAL TEST
Item No:	52
Question ID:	6547052

Question Type:	MCQ
Question:	Which incident led Gandhi ji to with draw non-cooperation movement ?



A:	Kakori episode
B:	Chauri-Chaura episode
C:	Yang-bang episode
D:	Jallianwala Bagh episode

Section:	GENERAL TEST
Item No:	53
Question ID:	6547053
Question Type:	MCQ
Question:	A shopkeeper offers discount 50% + 50% on a shirt of M.R.P ₹ 800, find the selling price of the shirt.
A:	₹ 700
B:	₹ 0
C:	₹ 400
D:	₹ 200

Section:	GENERAL TEST
Item No:	54
Question ID:	6547054
Question Type:	MCQ
Question:	Pointing a man in a photograph, Karina Said, 'His mother is the only daughter of my mother.' How is Karina related to the man of photograph.
A:	Mother
B:	Sister
C:	Wife
D:	Daughter

Section:	GENERAL TEST
Item No:	55
Question ID:	6547055
Question Type:	MCQ
Question:	If 180 meter long train crosses a pole in 9 seconds, find the speed of train in kilo meter/hour.
A:	72 km/h
B:	36 km/h
C:	20 km/h
D:	90 km/h

Section:	GENERAL TEST
Item No:	56
Question ID:	6547056

Question Type:	MCQ



	(Mountain pass)		(State)
Question:	A. Mana	I.	Sikkim
	B. Nathula	II.	Jammu & Kashmir
	C. Zozila	III.	Himachal Pradesh
	D. Sipkila	IV.	Uttrakand

Choose the correct answer from the options given below:

A:	A-II, B-IV, C-I, D-III
B:	A-III, B-II, C-IV, D-I
C:	A-IV, B-I, C-II, D-III
D:	A-IV, B-I, C-III, D-II

Section:	GENERAL TEST
Item No:	57
Question ID:	6547057
Question Type:	MCQ
Question:	If the cost of 4 pens and 6 note books is ₹ 800, then find the cost of 6 pens and 9 note books.
A:	₹ 900
B:	₹ 1200
C:	₹ 1000
D:	₹ 1100

Section:	GENERAL TEST
Item No:	58
Question ID:	6547058
Question Type:	MCQ
Question:	The value of $\frac{(2 \cdot 7)^3 - (2 \cdot 2)^3}{(2 \cdot 7)^2 + 2 \cdot 7 \times 2 \cdot 2 + (2 \cdot 2)^2}$ is
A:	4.9
B:	0.5
C:	0.05
D:	0.49

Section:	GENERAL TEST
Item No:	59
Question ID:	6547059
Question Type:	MCQ
Question:	EVM Stands for _____.
A:	Electric Vending Machine
B:	Electronic Vending Machine
C:	Electronic Voting Machine

D:	Electric Voting Machine
----	-------------------------

Section:	GENERAL TEST
----------	--------------



Item No:	60
Question ID:	6547060
Question Type:	MCQ
Question:	If the volume of a cube is 27cm^3 , then the diagonal of cube is
A:	3 cm
B:	$\sqrt[3]{3}$ cm
C:	$\sqrt{3}$ cm
D:	$\frac{1}{\sqrt{3}}$ cm

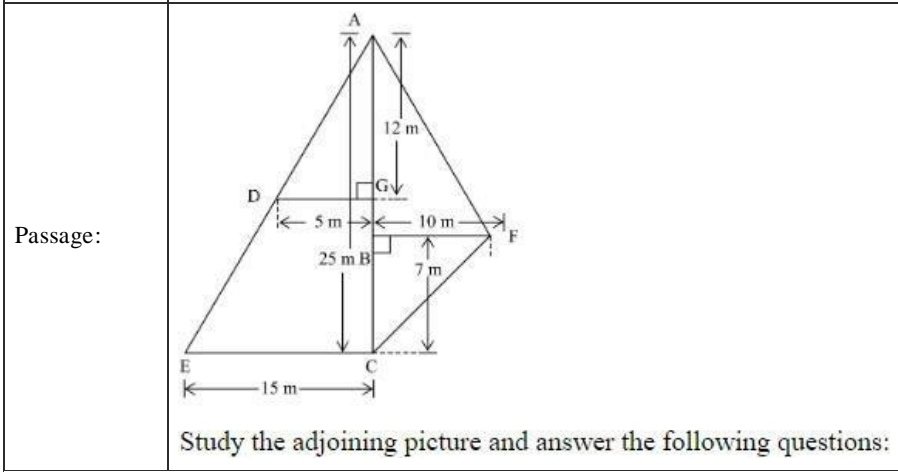
Section:	GENERAL TEST
Item No:	61
Question ID:	6547061
Question Type:	MCQ
Question:	An Atoll is _____.
A:	A lake in the Crates
B:	A Lagoon along the shores
C:	A lake in Glaciated mountains
D:	A ring shaped island with a lagoon at the Centre

Section:	GENERAL TEST
Item No:	62
Question ID:	6547062
Question Type:	MCQ
Passage:	<p>Study the adjoining picture and answer the following questions:</p>
Question:	The area of ΔABF is.
A:	180 m^2
B:	90 m^2
C:	125 m^2
D:	60 m^2

Section:	GENERAL TEST
Item No:	63
Question ID:	6547063



Question Type: MCQ



Question: The area of Trapezum DGCE is.

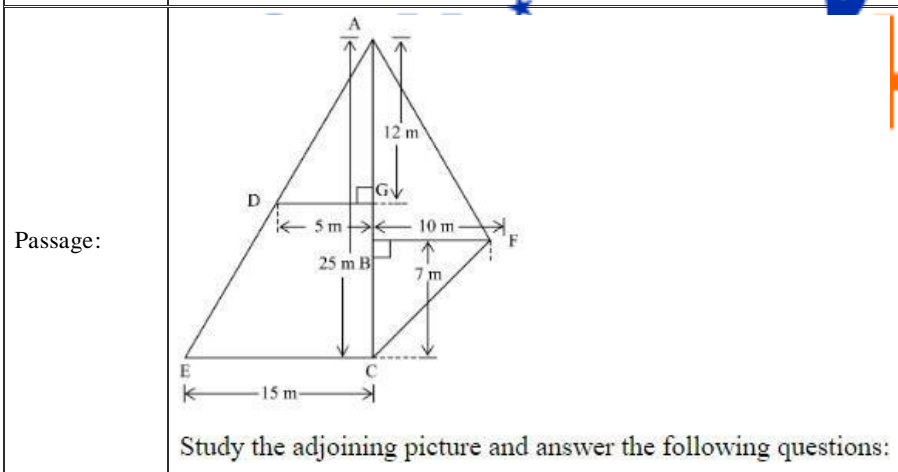
- A: 100 m^2
- B: 260 m^2
- C: 70 m^2
- D: 130 m^2

Section: GENERAL TEST

Item No: 64

Question ID: 6547064

Question Type: MCQ



Question: Area of ΔAFC is.

- A: 85 m^2
- B: 75 m^2
- C: 125 m^2
- D: 250 m^2

Section: GENERAL TEST

Item No: 65

Question ID: 6547065


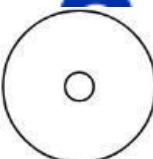

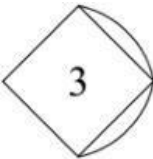
Question Type: MCQ

Question:	Which country will host the G-20 summit in 2023 ?
A:	Italy
B:	Germany
C:	



D:	India
----	-------

Section:	GENERAL TEST
Item No:	66
Question ID:	6547066
Question Type:	MCQ
Question:	If 60% of 80 = x% of 96, then x is.
A:	50
B:	40
C:	55
D:	45

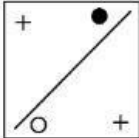
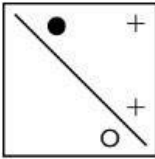
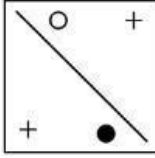
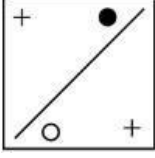
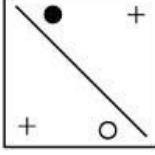
Section:	GENERAL TEST
Item No:	67
Question ID:	6547067
Question Type:	MCQ
Question:	Which of the following figure is odd one among the all.
A:	
B:	
C:	
D:	

Section:	GENERAL TEST
Item No:	68
Question ID:	6547068
Question Type:	MCQ
Question:	Sunit is going towards north, after going 8 km he turns left and goes 6 km. What is the distance of Sunit from initial point.
A:	14 km
B:	10 km

C:	8 km
D:	6 km




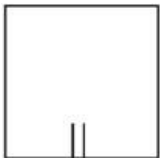
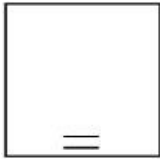
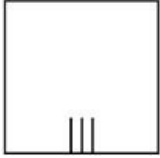

Section:	GENERAL TEST
Item No:	69
Question ID:	6547069
Question Type:	MCQ
Question:	At which of the following place, weight of an object is maximum?
A:	At equator
B:	At poles
C:	At tropic of Cancer
D:	At tropic of Capricorn

Section:	GENERAL TEST
Item No:	70
Question ID:	6547070
Question Type:	MCQ
Question:	The mirror image of  along the dotted line is
A:	
B:	
C:	
D:	

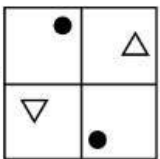
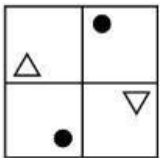
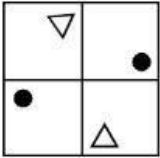
Section:	GENERAL TEST
Item No:	71
Question ID:	6547071
Question Type:	MCQ
Question:	Indian National Congress was founded by _____.
A:	W.C Banerjee

B:	A.O Hume
C:	M.K Gandhi
D:	J.L Nehru



Section:	GENERAL TEST
Item No:	72
Question ID:	6547072
Question Type:	MCQ
Question:	 <p>The next figure is</p>
A:	
B:	
C:	
D:	



Section:	GENERAL TEST
Item No:	73
Question ID:	6547073
Question Type:	MCQ
Question:	<p>Water image of</p>  <p>is</p>
A:	
B:	

C:	<table border="1"><tr><td>△</td><td>●</td></tr><tr><td>●</td><td>△</td></tr></table>	△	●	●	△
△	●				
●	△				



D:

▽	
	△
●	

Section:	GENERAL TEST
Item No:	74
Question ID:	6547074
Question Type:	MCQ
Question:	
A:	
B:	
C:	
D:	

Section:	GENERAL TEST																				
Item No:	75																				
Question ID:	6547075																				
Question Type:	MCQ																				
Question:	<p>Match List I with List II</p> <table border="1"> <thead> <tr> <th colspan="2">LIST I (Artical)</th> <th colspan="2">LIST II (Provision)</th> </tr> </thead> <tbody> <tr> <td>A.</td> <td>Article 368</td> <td>I.</td> <td>Panchayati Raj</td> </tr> <tr> <td>B.</td> <td>Article 40</td> <td>II.</td> <td>Emergency Provision</td> </tr> <tr> <td>C.</td> <td>Article 61</td> <td>III.</td> <td>Constitution amendment</td> </tr> <tr> <td>D.</td> <td>Article 352</td> <td>IV.</td> <td>Impeachment of President</td> </tr> </tbody> </table> <p>Choose the correct answer from the option given below :</p>	LIST I (Artical)		LIST II (Provision)		A.	Article 368	I.	Panchayati Raj	B.	Article 40	II.	Emergency Provision	C.	Article 61	III.	Constitution amendment	D.	Article 352	IV.	Impeachment of President
LIST I (Artical)		LIST II (Provision)																			
A.	Article 368	I.	Panchayati Raj																		
B.	Article 40	II.	Emergency Provision																		
C.	Article 61	III.	Constitution amendment																		
D.	Article 352	IV.	Impeachment of President																		
A:	A-II, B-I, C-IV, D-III																				
B:	A-III, B-I, C-IV, D-II																				

C:	A-III, B-IV, C-I, D-II
D:	A-II, B-IV, C-I, D-III

