

National Testing Agency

Question Paper Name :	Fine Arts Eng 12th June 2023 Shift 1
Subject Name :	Fine Arts Eng
Creation Date :	2023-06-12 13:16:39
Duration :	120
Total Marks :	400
Display Marks:	Yes

Fine Arts

Group Number :	1
Group Id :	920906132
Group Maximum Duration :	0
Group Minimum Duration :	120
Show Attended Group? :	No
Edit Attended Group? :	No
Break time :	0
Group Marks :	400
Is this Group for Examiner? :	No
Examiner permission :	Cant View
Show Progress Bar? :	No

Part A

Section Id :	920906263
Section Number :	1
Section type :	Online
Mandatory or Optional :	Mandatory
Number of Questions :	21
Number of Questions to be attempted :	21
Section Marks :	100
Enable Mark as Answered Mark for Review and Clear Response :	Yes
Maximum Instruction Time :	0
Sub-Section Number :	1
Sub-Section Id :	920906431
Question Shuffling Allowed :	No
Is Section Default? :	null

Question Id : 92090613266 Question Type : COMPREHENSION Sub Question Shuffling Allowed : Yes Group Comprehension Questions : No Question Pattern Type : NonMatrix Calculator : None Response Time : N.A Think Time : N.A Minimum Instruction Time : 0

Question Numbers : (1 to 5)

Question Label : Comprehension

Two Indians on finals in final list of Rs 2Cr global nursing award

NAOMI CANTON

London: Shanti Teresa Lakra, a nurse working with primitive tribes in the Andaman and Nicobar Islands, and Kerala-born Jincy Jerry from Ireland are among honouring nursing staff worldwide. Lakra from GB Pant Hospital in Port Blair was awarded the Padma Shri in 2011 for her incredible service to the tribal community of Andaman and Nicobar – gaining their trust over the year, overcoming the language barrier and providing medical assistance whenever they needed it.

Lakra and Jerry, the assistant director of nursing for infection prevention and control at Mater Misericordiae University Hospital in Dublin, were selected from 52,000 entries sent by 202 countries for the Aster Guardians Global Nursing Award 2023, which carries a prize-money of more than Rs. 2Crore. The finalists will be evaluated by a judging panel and the result declared at a ceremony in London on may 12, coinciding with International Nurses Day. As many as 13,156 nurses applied from India in the second editions of the award.

“My whole world belongs to the tribes-folk living in a very interior and isolated part of Andaman and Nicobar,” Lakra said. When the 2004 tsunami hit the island of the Onge tribe and drove them deep into the jungle, she made her home with them and lived in an open tent. She recalled assisting an Onge teenager deliver a premature baby weighing less than a kilo on the night of the tsunami. Lakra said if she wins the award, she will use the cash to create an NGO to provide healthcare to the endangered native islanders. Lakra, born in Rangat on Middle Andaman Island, also wants to fund Onge youngsters wishing to train as nurses.

Jerry, who moved to Dublin in 2006 after training as a nurse Delhi’s Jamia Hamadard, was nominated for a robotic system she introduced in her Dublin hospital in March 2020. Inspired by the banking sector, it has drastically reduced the administrative work of nurses, eliminating human error, allowing nurses to spend more time with patients and improving job satisfaction and staff retention.

Sub questions

Question Number : 1 Question Id : 92090613267 Question Type : MCQ Option Shuffling : No Is Question Mandatory : No Calculator : None Response Time : N.A Think Time : N.A Minimum Instruction Time : 0

Correct Marks : 4 Wrong Marks : 1

Antonym of the word barrier is

- | | |
|--------------|-------------|
| (1) Fence | (2) Opening |
| (3) Obstacle | (4) Barren |

Options :

92090652401. 1

92090652402. 2

92090652403. 3

92090652404. 4

Question Number : 2 Question Id : 92090613268 Question Type : MCQ Option Shuffling : No Is Question Mandatory : No Calculator : None Response Time : N.A Think Time : N.A Minimum Instruction Time : 0

Correct Marks : 4 Wrong Marks : 1

Meaning of the word Primitive:

- | | |
|-------------------------------|-------------------------------------|
| (1) Earliest ancestor | (2) Substance for priming something |
| (3) Earliest times in history | (4) primipara |

Options :

92090652405. 1

92090652406. 2

92090652407. 3

92090652408. 4

Question Number : 3 Question Id : 92090613269 Question Type : MCQ Option Shuffling : No Is Question Mandatory : No Calculator : None Response Time : N.A Think Time : N.A Minimum Instruction Time : 0

Correct Marks : 4 Wrong Marks : 1

“Nurses day” is celebrated internationally on:

- | | |
|--------------------------------------|--------------------------|
| (1) 12 th April | (2) 12 th May |
| (3) 2 nd Wednesday of May | (4) March last friday |

Options :

92090652409. 1

92090652410. 2

92090652411. 3

92090652412. 4

Question Number : 4 Question Id : 92090613270 Question Type : MCQ Option Shuffling : No Is Question Mandatory : No Calculator : None Response Time : N.A Think Time : N.A Minimum Instruction Time : 0

Correct Marks : 4 Wrong Marks : 1

Why Shanti Teresa Lakra was in news?

- (A) She is working with primitive tribes in the Lakshyadeep Island.
- (B) She won Padmashri award in 2021.
- (C) She was a finalist for the Aster Guardians Global Nursing Award 2023.
- (D) She assisted in delivery of a premature baby on the night of the tsunami.

Choose the correct answer from the options given below :

- (1) (C) only
- (2) (A) and (C)
- (3) (B) and (C)
- (4) (B) and (D)

Options :

- 92090652413. 1
- 92090652414. 2
- 92090652415. 3
- 92090652416. 4

Question Number : 5 Question Id : 92090613271 Question Type : MCQ Option Shuffling : No Is Question Mandatory : No Calculator : None Response Time : N.A Think Time : N.A Minimum Instruction Time : 0

Correct Marks : 4 Wrong Marks : 1

Primitive tribes in this passage refers to:

- (1) Old tribes of Andaman
- (2) Onge tribe
- (3) Tribe folk living in very interior and isolated part of Andaman and Nicobar
- (4) Natives of Rangat on middle Andaman Island.

Options :

- 92090652417. 1
- 92090652418. 2
- 92090652419. 3
- 92090652420. 4

Question Id : 92090613266 Question Type : COMPREHENSION Sub Question Shuffling Allowed : Yes Group Comprehension Questions : No Question Pattern Type : NonMatrix Calculator : None Response Time : N.A Think Time : N.A Minimum Instruction Time : 0

Question Numbers : (1 to 5)

Question Label : Comprehension

Two Indians on finals in final list of Rs 2Cr global nursing award

NAOMI CANTON

London: Shanti Teresa Lakra, a nurse working with primitive tribes in the Andaman and Nicobar Islands, and Kerala-born Jincy Jerry from Ireland are among honouring nursing staff worldwide. Lakra from GB Pant Hospital in Port Blair was awarded the Padma Shri in 2011 for her incredible service to the tribal community of Andaman and Nicobar – gaining their trust over the year, overcoming the language barrier and providing medical assistance whenever they needed it.

Lakra and Jerry, the assistant director of nursing for infection prevention and control at Mater Misericordiae University Hospital in Dublin, were selected from 52,000 entries sent by 202 countries for the Aster Guardians Global Nursing Award 2023, which carries a prize-money of more than Rs. 2Crore. The finalists will be evaluated by a judging panel and the result declared at a ceremony in London on May 12, coinciding with International Nurses Day. As many as 13,156 nurses applied from India in the second editions of the award.

“My whole world belongs to the tribes-folk living in a very interior and isolated part of Andaman and Nicobar,” Lakra said. When the 2004 tsunami hit the island of the Onge tribe and drove them deep into the jungle, she made her home with them and lived in an open tent. She recalled assisting an Onge teenager deliver a premature baby weighing less than a kilo on the night of the tsunami. Lakra said if she wins the award, she will use the cash to create an NGO to provide healthcare to the endangered native islanders. Lakra, born in Rangat on Middle Andaman Island, also wants to fund Onge youngsters wishing to train as nurses.

Jerry, who moved to Dublin in 2006 after training as a nurse at Delhi's Jamia Hamdard, was nominated for a robotic system she introduced in her Dublin hospital in March 2020. Inspired by the banking sector, it has drastically reduced the administrative work of nurses, eliminating human error, allowing nurses to spend more time with patients and improving job satisfaction and staff retention.

Sub questions

Question Number : 1 Question Id : 92090613267 Question Type : MCQ Option Shuffling : No Is Question Mandatory : No Calculator : None Response Time : N.A Think Time : N.A Minimum Instruction Time : 0

Correct Marks : 4 Wrong Marks : 1

Antonym of the word barrier is

- | | |
|--------------|-------------|
| (1) Fence | (2) Opening |
| (3) Obstacle | (4) Barren |

Options :

- 92090652401. 1
- 92090652402. 2
- 92090652403. 3
- 92090652404. 4

Question Number : 2 Question Id : 92090613268 Question Type : MCQ Option Shuffling : No Is Question Mandatory : No Calculator : None Response Time : N.A Think Time : N.A Minimum Instruction Time : 0

Correct Marks : 4 Wrong Marks : 1

Meaning of the word Primitive:

- | | |
|-------------------------------|-------------------------------------|
| (1) Earliest ancestor | (2) Substance for priming something |
| (3) Earliest times in history | (4) primipara |

Options :

92090652405. 1

92090652406. 2

92090652407. 3

92090652408. 4

Question Number : 3 Question Id : 92090613269 Question Type : MCQ Option Shuffling : No Is Question Mandatory : No Calculator : None Response Time : N.A Think Time : N.A Minimum Instruction Time : 0

Correct Marks : 4 Wrong Marks : 1

“Nurses day” is celebrated internationally on:

- | | |
|--------------------------------------|--------------------------|
| (1) 12 th April | (2) 12 th May |
| (3) 2 nd Wednesday of May | (4) March last friday |

Options :

92090652409. 1

92090652410. 2

92090652411. 3

92090652412. 4

Question Number : 4 Question Id : 92090613270 Question Type : MCQ Option Shuffling : No Is Question Mandatory : No Calculator : None Response Time : N.A Think Time : N.A Minimum Instruction Time : 0

Correct Marks : 4 Wrong Marks : 1

Why Shanti Teresa Lakra was in news?

- (A) She is working with primitive tribes in the Lakshyadeep Island.
- (B) She won Padmashri award in 2021.
- (C) She was a finalist for the Aster Guardians Global Nursing Award 2023.
- (D) She assisted in delivery of a premature baby on the night of the tsunami.

Choose the correct answer from the options given below :

- (1) (C) only
- (2) (A) and (C)
- (3) (B) and (C)
- (4) (B) and (D)

Options :

- 92090652413. 1
- 92090652414. 2
- 92090652415. 3
- 92090652416. 4

Question Number : 5 Question Id : 92090613271 Question Type : MCQ Option Shuffling : No Is Question Mandatory : No Calculator : None Response Time : N.A Think Time : N.A Minimum Instruction Time : 0

Correct Marks : 4 Wrong Marks : 1

Primitive tribes in this passage refers to:

- (1) Old tribes of Andaman
- (2) Onge tribe
- (3) Tribe folk living in very interior and isolated part of Andaman and Nicobar
- (4) Natives of Rangat on middle Andaman Island.

Options :

- 92090652417. 1
- 92090652418. 2
- 92090652419. 3
- 92090652420. 4

Sub-Section Number :

2

Sub-Section Id :

920906432

Question Shuffling Allowed :

Yes

Is Section Default? :

null

Question Number : 6 Question Id : 92090613272 Question Type : MCQ Option Shuffling : No Is Question Mandatory : No Calculator : None Response Time : N.A Think Time : N.A Minimum Instruction Time : 0

Correct Marks : 4 Wrong Marks : 1

Fill in the blank with suitable word from the options given below:

The lion is at ____and has brought havoc in this area.

- (1) Bay (2) Sea
(3) Open (4) Large

Options :

92090652421. 1
92090652422. 2
92090652423. 3
92090652424. 4

Question Number : 6 Question Id : 92090613272 Question Type : MCQ Option Shuffling : No Is Question Mandatory : No Calculator : None Response Time : N.A Think Time : N.A Minimum Instruction Time : 0

Correct Marks : 4 Wrong Marks : 1

Fill in the blank with suitable word from the options given below:

The lion is at ____and has brought havoc in this area.

- (1) Bay (2) Sea
(3) Open (4) Large

Options :

92090652421. 1
92090652422. 2
92090652423. 3
92090652424. 4

Question Number : 7 Question Id : 92090613273 Question Type : MCQ Option Shuffling : No Is Question Mandatory : No Calculator : None Response Time : N.A Think Time : N.A Minimum Instruction Time : 0

Correct Marks : 4 Wrong Marks : 1

Choose the appropriate one word substitute for:

A study, analysis and collection of currency and especially coins used throughout history.

- (1) Ornithology (2) Philology
(3) Philately (4) Numismatics

Options :

92090652425. 1
92090652426. 2
92090652427. 3
92090652428. 4

Question Number : 7 Question Id : 92090613273 Question Type : MCQ Option Shuffling : No Is Question Mandatory : No Calculator : None Response Time : N.A Think Time : N.A Minimum Instruction Time : 0

Correct Marks : 4 Wrong Marks : 1

Choose the appropriate one word substitute for:

A study, analysis and collection of currency and especially coins used throughout history.

- | | |
|-----------------|-----------------|
| (1) Ornithology | (2) Philology |
| (3) Philately | (4) Numismatics |

Options :

- 92090652425. 1
- 92090652426. 2
- 92090652427. 3
- 92090652428. 4

Question Number : 8 Question Id : 92090613274 Question Type : MCQ Option Shuffling : No Is Question Mandatory : No Calculator : None Response Time : N.A Think Time : N.A Minimum Instruction Time : 0

Correct Marks : 4 Wrong Marks : 1

Fill in the blanks with appropriate preposition from the options given below:

Degradation of a body ____ water ____ a substance or condition ____ such a degree that the water fails ____ meet specific purpose.

- | | |
|---------------------|----------------------|
| (1) of, by, to, to | (2) for, to, of, to |
| (3) of, to, by, for | (4) of, from, in, to |

Options :

- 92090652429. 1
- 92090652430. 2
- 92090652431. 3
- 92090652432. 4

Question Number : 8 Question Id : 92090613274 Question Type : MCQ Option Shuffling : No Is Question Mandatory : No Calculator : None Response Time : N.A Think Time : N.A Minimum Instruction Time : 0

Correct Marks : 4 Wrong Marks : 1

Fill in the blanks with appropriate preposition from the options given below:

Degradation of a body ____ water ____ a substance or condition ____ such a degree that the water fails ____ meet specific purpose.

- (1) of, by, to, to
(3) of, to, by, for

- (2) for, to, of, to
(4) of, from, in, to

Options :

92090652429. 1
92090652430. 2
92090652431. 3
92090652432. 4

Question Number : 9 Question Id : 92090613275 Question Type : MCQ Option Shuffling : No Is Question Mandatory : No Calculator : None Response Time : N.A Think Time : N.A Minimum Instruction Time : 0

Correct Marks : 4 Wrong Marks : 1

Synonym of the word "ALMS" is:

- (1) Blessings
(3) Worship
- (2) Prayers
(4) Charity

Options :

92090652433. 1
92090652434. 2
92090652435. 3
92090652436. 4

Question Number : 9 Question Id : 92090613275 Question Type : MCQ Option Shuffling : No Is Question Mandatory : No Calculator : None Response Time : N.A Think Time : N.A Minimum Instruction Time : 0

Correct Marks : 4 Wrong Marks : 1

Synonym of the word "ALMS" is:

- (1) Blessings
(3) Worship
- (2) Prayers
(4) Charity

Options :

92090652433. 1
92090652434. 2
92090652435. 3
92090652436. 4

Question Number : 10 Question Id : 92090613276 Question Type : MCQ Option Shuffling : No Is Question Mandatory : No Calculator : None Response Time : N.A Think Time : N.A Minimum Instruction Time : 0

Correct Marks : 4 Wrong Marks : 1

Correct the underlined phrase and choose appropriate option to replace it.

Primitive man believing that a crime created in imbalance which could be rectified only by punishing the wrongdoer.

- (1) Believed that a crime creates (2) Believes that a crime created
(3) Believed that a crime created (4) Believed that a criminal created

Options :

92090652437. 1
92090652438. 2
92090652439. 3
92090652440. 4

Question Number : 10 Question Id : 92090613276 Question Type : MCQ Option Shuffling : No Is Question Mandatory : No Calculator : None Response Time : N.A Think Time : N.A Minimum Instruction Time : 0

Correct Marks : 4 Wrong Marks : 1

Correct the underlined phrase and choose appropriate option to replace it.

Primitive man believing that a crime created in imbalance which could be rectified only by punishing the wrongdoer.

- (1) Believed that a crime creates (2) Believes that a crime created
(3) Believed that a crime created (4) Believed that a criminal created

Options :

92090652437. 1
92090652438. 2
92090652439. 3
92090652440. 4

Question Number : 11 Question Id : 92090613277 Question Type : MCQ Option Shuffling : No Is Question Mandatory : No Calculator : None Response Time : N.A Think Time : N.A Minimum Instruction Time : 0

Correct Marks : 4 Wrong Marks : 1

The surface area of a sphere of radius 7cm is: (Take $\pi = \frac{22}{7}$)

- (1) 4158 cm² (2) 540 cm²
(3) 616 cm² (4) 280 cm²

Options :

92090652441. 1
92090652442. 2
92090652443. 3

92090652444. 4

Question Number : 11 Question Id : 92090613277 Question Type : MCQ Option Shuffling : No Is Question Mandatory : No Calculator : None Response Time : N.A Think Time : N.A Minimum Instruction Time : 0

Correct Marks : 4 Wrong Marks : 1

The surface area of a sphere of radius 7cm is: (Take $\pi = \frac{22}{7}$)

- (1) 4158 cm² (2) 540 cm²
(3) 616 cm² (4) 280 cm²

Options :

92090652441. 1
92090652442. 2
92090652443. 3
92090652444. 4

Question Number : 12 Question Id : 92090613278 Question Type : MCQ Option Shuffling : No Is Question Mandatory : No Calculator : None Response Time : N.A Think Time : N.A Minimum Instruction Time : 0

Correct Marks : 4 Wrong Marks : 1

Find the value of '?' in the following

$$784 \div 14 + 598 \div 13 + ? = 99 \% \text{ of } 2500$$

- (1) 2475 (2) 2373
(3) 2565 (4) 2285

Options :

92090652445. 1
92090652446. 2
92090652447. 3
92090652448. 4

Question Number : 12 Question Id : 92090613278 Question Type : MCQ Option Shuffling : No Is Question Mandatory : No Calculator : None Response Time : N.A Think Time : N.A Minimum Instruction Time : 0

Correct Marks : 4 Wrong Marks : 1

Find the value of '?' in the following

$$784 \div 14 + 598 \div 13 + ? = 99 \% \text{ of } 2500$$

- (1) 2475 (2) 2373
(3) 2565 (4) 2285

Options :

- 92090652445. 1
- 92090652446. 2
- 92090652447. 3
- 92090652448. 4

Question Number : 13 Question Id : 92090613279 Question Type : MCQ Option Shuffling : No Is Question Mandatory : No Calculator : None Response Time : N.A Think Time : N.A Minimum Instruction Time : 0

Correct Marks : 4 Wrong Marks : 1

During festival sale, a shop offered 10% discount on all items. What would a customer have to pay on purchase of a jacket marked at ₹1450 and two shirts marked at ₹850 each?

- | | |
|-----------|-----------|
| (1) ₹2735 | (2) ₹2835 |
| (3) ₹3150 | (4) ₹2935 |

Options :

- 92090652449. 1
- 92090652450. 2
- 92090652451. 3
- 92090652452. 4

Question Number : 13 Question Id : 92090613279 Question Type : MCQ Option Shuffling : No Is Question Mandatory : No Calculator : None Response Time : N.A Think Time : N.A Minimum Instruction Time : 0

Correct Marks : 4 Wrong Marks : 1

During festival sale, a shop offered 10% discount on all items. What would a customer have to pay on purchase of a jacket marked at ₹1450 and two shirts marked at ₹850 each?

- | | |
|-----------|-----------|
| (1) ₹2735 | (2) ₹2835 |
| (3) ₹3150 | (4) ₹2935 |

Options :

- 92090652449. 1
- 92090652450. 2
- 92090652451. 3
- 92090652452. 4

Question Number : 14 Question Id : 92090613280 Question Type : MCQ Option Shuffling : No Is Question Mandatory : No Calculator : None Response Time : N.A Think Time : N.A Minimum Instruction Time : 0

Correct Marks : 4 Wrong Marks : 1

A car covers 20km in 12 minutes. If its speed is reduced by 20km/hr, then time taken to cover the same distance will be

(1) $\frac{1}{3}$ hour

(2) $\frac{1}{2}$ hour

(3) $\frac{2}{3}$ hour

(4) $\frac{1}{4}$ hour

Options :

92090652453. 1

92090652454. 2

92090652455. 3

92090652456. 4

Question Number : 14 Question Id : 92090613280 Question Type : MCQ Option Shuffling : No Is Question Mandatory : No Calculator : None Response Time : N.A Think Time : N.A Minimum Instruction Time : 0

Correct Marks : 4 Wrong Marks : 1

A car covers 20km in 12 minutes. If its speed is reduced by 20km/hr, then time taken to cover the same distance will be

(1) $\frac{1}{3}$ hour

(2) $\frac{1}{2}$ hour

(3) $\frac{2}{3}$ hour

(4) $\frac{1}{4}$ hour

Options :

92090652453. 1

92090652454. 2

92090652455. 3

92090652456. 4

Question Number : 15 Question Id : 92090613281 Question Type : MCQ Option Shuffling : No Is Question Mandatory : No Calculator : None Response Time : N.A Think Time : N.A Minimum Instruction Time : 0

Correct Marks : 4 Wrong Marks : 1

A certain sum on simple interest becomes Rs 14880 in 3 years and Rs 16800 in 5 years. Find the rate of interest.

(1) 6.5%

(2) 7%

(3) 8%

(4) 8.25%

Options :

92090652457. 1

92090652458. 2

92090652459. 3

92090652460. 4

Question Number : 15 Question Id : 92090613281 Question Type : MCQ Option Shuffling : No Is Question Mandatory : No Calculator : None Response Time : N.A Think Time : N.A Minimum Instruction Time : 0

Correct Marks : 4 Wrong Marks : 1

A certain sum on simple interest becomes Rs 14880 in 3 years and Rs 16800 in 5 years. Find the rate of interest.

(1) 6.5%

(2) 7%

(3) 8%

(4) 8.25%

Options :

92090652457. 1

92090652458. 2

92090652459. 3

92090652460. 4

Question Number : 16 Question Id : 92090613282 Question Type : MCQ Option Shuffling : No Is Question Mandatory : No Calculator : None Response Time : N.A Think Time : N.A Minimum Instruction Time : 0

Correct Marks : 4 Wrong Marks : 1

Bhuvan is fifteenth from the front in queue of boys. There are thrice as many behind him as There were in front. How many boys are there between Bhuvan and the seventh boy from the end of the queue?

(1) 33

(2) 34

(3) 35

(4) 36

Options :

92090652461. 1

92090652462. 2

92090652463. 3

92090652464. 4

Question Number : 16 Question Id : 92090613282 Question Type : MCQ Option Shuffling : No Is Question Mandatory : No Calculator : None Response Time : N.A Think Time : N.A Minimum Instruction Time : 0

Correct Marks : 4 Wrong Marks : 1

Bhuvan is fifteenth from the front in queue of boys. There are thrice as many behind him as There were in front. How many boys are there between Bhuvan and the seventh boy from the end of the queue?

- (1) 33 (2) 34
(3) 35 (4) 36

Options :

92090652461. 1
92090652462. 2
92090652463. 3
92090652464. 4

Question Number : 17 Question Id : 92090613283 Question Type : MCQ Option Shuffling : No Is Question Mandatory : No Calculator : None Response Time : N.A Think Time : N.A Minimum Instruction Time : 0

Correct Marks : 4 Wrong Marks : 1

Statement : There should be only one university throughout India.

- Arguments** : (I) This will make the degrees procured by students, comparable for offering jobs.
(II) This is the only way to bring about uniformity in the educational standards.

Which of the above argument(s) hold for the statement?

- (1) Only argument I
(2) Only argument II
(3) Argument I and argument II
(4) Neither argument I nor argument II

Options :

92090652465. 1
92090652466. 2
92090652467. 3
92090652468. 4

Question Number : 17 Question Id : 92090613283 Question Type : MCQ Option Shuffling : No Is Question Mandatory : No Calculator : None Response Time : N.A Think Time : N.A Minimum Instruction Time : 0

Correct Marks : 4 Wrong Marks : 1

Statement : There should be only one university throughout India.

Arguments : (I) This will make the degrees procured by students, comparable for offering jobs.

(II) This is the only way to bring about uniformity in the educational standards.

Which of the above argument(s) hold for the statement?

- (1) Only argument I
- (2) Only argument II
- (3) Argument I and argument II
- (4) Neither argument I nor argument II

Options :

92090652465. 1

92090652466. 2

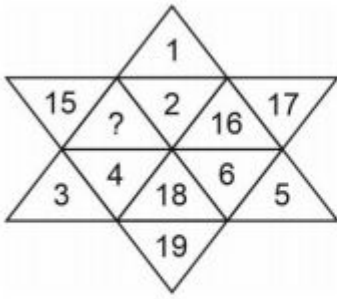
92090652467. 3

92090652468. 4

Question Number : 18 Question Id : 92090613284 Question Type : MCQ Option Shuffling : No Is Question Mandatory : No Calculator : None Response Time : N.A Think Time : N.A Minimum Instruction Time : 0

Correct Marks : 4 Wrong Marks : 1

Find the missing number.



(1) 13

(2) 14

(3) 20

(4) 21

Options :

92090652469. 1

92090652470. 2

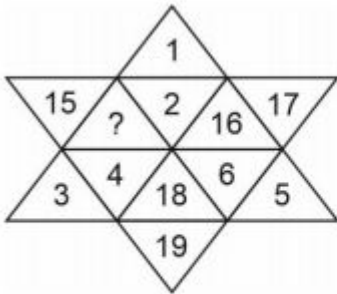
92090652471. 3

92090652472. 4

Question Number : 18 Question Id : 92090613284 Question Type : MCQ Option Shuffling : No Is Question Mandatory : No Calculator : None Response Time : N.A Think Time : N.A Minimum Instruction Time : 0

Correct Marks : 4 Wrong Marks : 1

Find the missing number.



(1) 13

(2) 14

(3) 20

(4) 21

Options :

92090652469. 1

92090652470. 2

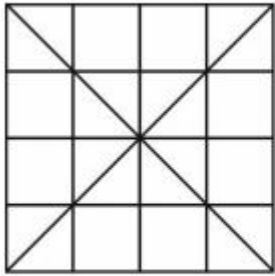
92090652471. 3

92090652472. 4

Question Number : 19 Question Id : 92090613285 Question Type : MCQ Option Shuffling : No Is Question Mandatory : No Calculator : None Response Time : N.A Think Time : N.A Minimum Instruction Time : 0

Correct Marks : 4 Wrong Marks : 1

Find the number of triangles in the following figure.



(1) 48

(2) 42

(3) 44

(4) 38

Options :

92090652473. 1

92090652474. 2

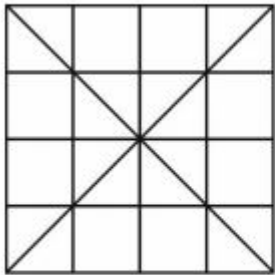
92090652475. 3

92090652476. 4

Question Number : 19 Question Id : 92090613285 Question Type : MCQ Option Shuffling : No Is Question Mandatory : No Calculator : None Response Time : N.A Think Time : N.A Minimum Instruction Time : 0

Correct Marks : 4 Wrong Marks : 1

Find the number of triangles in the following figure.



(1) 48

(2) 42

(3) 44

(4) 38

Options :

92090652473. 1

92090652474. 2

92090652475. 3

92090652476. 4

Question Number : 20 Question Id : 92090613286 Question Type : MCQ Option Shuffling : No Is Question Mandatory : No Calculator : None Response Time : N.A Think Time : N.A Minimum Instruction Time : 0

Correct Marks : 4 Wrong Marks : 1

Identify the water image of the following fig (X)

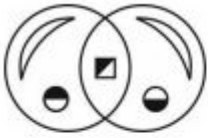
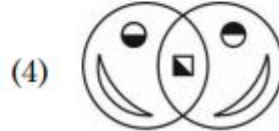
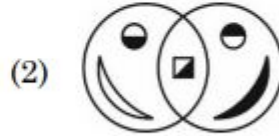
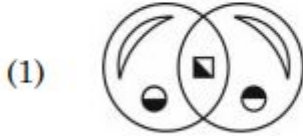


fig (X)



Options :

- 92090652477. 1
- 92090652478. 2
- 92090652479. 3
- 92090652480. 4

Question Number : 20 Question Id : 92090613286 Question Type : MCQ Option Shuffling : No Is Question Mandatory : No Calculator : None Response Time : N.A Think Time : N.A Minimum Instruction Time : 0

Correct Marks : 4 Wrong Marks : 1

Identify the water image of the following fig (X)

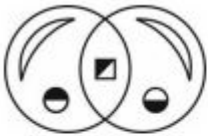
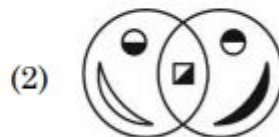
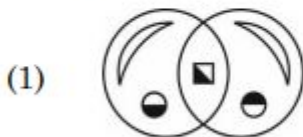


fig (X)



Options :

- 92090652477. 1
- 92090652478. 2
- 92090652479. 3
- 92090652480. 4

Question Number : 21 Question Id : 92090613287 Question Type : MCQ Option Shuffling : No Is Question Mandatory : No Calculator : None Response Time : N.A Think Time : N.A Minimum Instruction Time : 0

Correct Marks : 4 Wrong Marks : 1

The Name of India's 1st Drone which can carry human passengers?

- | | |
|------------|------------------|
| (1) Varuna | (2) Hanu |
| (3) Garuda | (4) Udan Khatola |

Options :

- 92090652481. 1
- 92090652482. 2
- 92090652483. 3
- 92090652484. 4

Question Number : 21 Question Id : 92090613287 Question Type : MCQ Option Shuffling : No Is Question Mandatory : No Calculator : None Response Time : N.A Think Time : N.A Minimum Instruction Time : 0

Correct Marks : 4 Wrong Marks : 1

The Name of India's 1st Drone which can carry human passengers?

- | | |
|------------|------------------|
| (1) Varuna | (2) Hanu |
| (3) Garuda | (4) Udan Khatola |

Options :

- 92090652481. 1
- 92090652482. 2
- 92090652483. 3
- 92090652484. 4

Question Number : 22 Question Id : 92090613288 Question Type : MCQ Option Shuffling : No Is Question Mandatory : No Calculator : None Response Time : N.A Think Time : N.A Minimum Instruction Time : 0

Correct Marks : 4 Wrong Marks : 1

National emergency is declared under which of the article of Indian Constitution?

- | | |
|-----------------|-----------------|
| (1) Article 342 | (2) Article 350 |
| (3) Article 362 | (4) Article 352 |

Options :

- 92090652485. 1
- 92090652486. 2
- 92090652487. 3
- 92090652488. 4

Question Number : 22 Question Id : 92090613288 Question Type : MCQ Option Shuffling : No Is Question Mandatory : No Calculator : None Response Time : N.A Think Time : N.A Minimum Instruction Time : 0

Correct Marks : 4 Wrong Marks : 1

National emergency is declared under which of the article of Indian Constitution?

- | | |
|-----------------|-----------------|
| (1) Article 342 | (2) Article 350 |
| (3) Article 362 | (4) Article 352 |

Options :

- 92090652485. 1
- 92090652486. 2
- 92090652487. 3
- 92090652488. 4

Question Number : 23 Question Id : 92090613289 Question Type : MCQ Option Shuffling : No Is Question Mandatory : No Calculator : None Response Time : N.A Think Time : N.A Minimum Instruction Time : 0

Correct Marks : 4 Wrong Marks : 1

Given below are two statements :

Statement I : The National wealth is the measurement of total National Income of the country on a given time.

Statement II : National income is the measurement of flow of services and goods in economic system. It is the production power of economic system in a given time period.

In the light of the above statements, choose the correct answer from the options given below :

- (1) Both Statement I and Statement II are correct
- (2) Both Statement I and Statement II are incorrect
- (3) Statement I is correct but Statement II is incorrect
- (4) Statement I is incorrect but Statement II is correct

Options :

- 92090652489. 1
- 92090652490. 2

92090652491. 3

92090652492. 4

Question Number : 23 Question Id : 92090613289 Question Type : MCQ Option Shuffling : No Is Question Mandatory : No Calculator : None Response Time : N.A Think Time : N.A Minimum Instruction Time : 0

Correct Marks : 4 Wrong Marks : 1

Given below are two statements :

Statement I : The National wealth is the measurement of total National Income of the country on a given time.

Statement II : National income is the measurement of flow of services and goods in economic system. It is the production power of economic system in a given time period.

In the light of the above statements, choose the correct answer from the options given below :

- (1) Both Statement I and Statement II are correct
- (2) Both Statement I and Statement II are incorrect
- (3) Statement I is correct but Statement II is incorrect
- (4) Statement I is incorrect but Statement II is correct

Options :

92090652489. 1

92090652490. 2

92090652491. 3

92090652492. 4

Question Number : 24 Question Id : 92090613290 Question Type : MCQ Option Shuffling : No Is Question Mandatory : No Calculator : None Response Time : N.A Think Time : N.A Minimum Instruction Time : 0

Correct Marks : 4 Wrong Marks : 1

Who out of the following became the first ever player in football to score 700 goals in club football and also the leading Scores in international football?

- (1) Lionel Messi (2) Cristiano Ronaldo
(3) Pele (4) Robert Lewandowski

Options :

92090652493. 1
92090652494. 2
92090652495. 3
92090652496. 4

Question Number : 24 Question Id : 92090613290 Question Type : MCQ Option Shuffling : No Is Question Mandatory : No Calculator : None Response Time : N.A Think Time : N.A Minimum Instruction Time : 0

Correct Marks : 4 Wrong Marks : 1

Who out of the following became the first ever player in football to score 700 goals in club football and also the leading Scores in international football?

- (1) Lionel Messi (2) Cristiano Ronaldo
(3) Pele (4) Robert Lewandowski

Options :

92090652493. 1
92090652494. 2
92090652495. 3
92090652496. 4

Question Number : 25 Question Id : 92090613291 Question Type : MCQ Option Shuffling : No Is Question Mandatory : No Calculator : None Response Time : N.A Think Time : N.A Minimum Instruction Time : 0

Correct Marks : 4 Wrong Marks : 1

Which of the following diseases are caused by houseflies?

- (A) Cholera
- (B) Malaria
- (C) Typhoid
- (D) Dysentery
- (E) Dengue

Choose the correct answer from the options given below :

- (1) (A), (B) and (D) only
- (2) (A), (B) and (E) only
- (3) (A), (C) and (D) only
- (4) (A), (D) and (E) only

Options :

- 92090652497. 1
- 92090652498. 2
- 92090652499. 3
- 92090652500. 4

Question Number : 25 Question Id : 92090613291 Question Type : MCQ Option Shuffling : No Is Question Mandatory : No Calculator : None Response Time : N.A Think Time : N.A Minimum Instruction Time : 0

Correct Marks : 4 Wrong Marks : 1

Which of the following diseases are caused by houseflies?

- (A) Cholera
- (B) Malaria
- (C) Typhoid
- (D) Dysentery
- (E) Dengue

Choose the correct answer from the options given below :

- (1) (A), (B) and (D) only
- (2) (A), (B) and (E) only
- (3) (A), (C) and (D) only
- (4) (A), (D) and (E) only

Options :

- 92090652497. 1
- 92090652498. 2
- 92090652499. 3
- 92090652500. 4

Part B: Fine Arts

Section Id :	920906264
Section Number :	2
Section type :	Online
Mandatory or Optional :	Mandatory
Number of Questions :	75
Number of Questions to be attempted :	75
Section Marks :	300
Enable Mark as Answered Mark for Review and Clear Response :	Yes
Maximum Instruction Time :	0
Sub-Section Number :	1
Sub-Section Id :	920906433
Question Shuffling Allowed :	Yes
Is Section Default? :	null

Question Number : 26 Question Id : 92090613292 Question Type : MCQ Option Shuffling : No Is Question Mandatory : No Calculator : None Response Time : N.A Think Time : N.A Minimum Instruction Time : 0

Correct Marks : 4 Wrong Marks : 1

Where was the Indian female artist Amrita Sher-Gil born?

1. Melbourne, Australia
2. Budapest, Hungary
3. Moscow, Russia
4. New York, America

Options :

- 92090652501. 1
- 92090652502. 2
- 92090652503. 3
- 92090652504. 4

Question Number : 26 Question Id : 92090613292 Question Type : MCQ Option Shuffling : No Is Question Mandatory : No Calculator : None Response Time : N.A Think Time : N.A Minimum Instruction Time : 0

Correct Marks : 4 Wrong Marks : 1

भारतीय महिला कलाकार अमृता शेरगिल का जन्म कहाँ पर हुआ था?

- | | |
|---------------------------|-----------------------|
| (1) मेलबोर्न, ऑस्ट्रेलिया | (2) बूडापैस्ट, हंगरी |
| (3) मॉस्को, रूस | (4) न्यूयॉर्क, अमरीका |

Options :

92090652501. 1
92090652502. 2
92090652503. 3
92090652504. 4

Question Number : 27 Question Id : 92090613293 Question Type : MCQ Option Shuffling : No Is Question Mandatory : No Calculator : None Response Time : N.A Think Time : N.A Minimum Instruction Time : 0

Correct Marks : 4 Wrong Marks : 1

Which Cave is known as "Indra Sabha' in Ellora"?

1. Cave No.—13
2. Cave No.—14
3. Cave No.—32
4. Cave No.—33

Options :

92090652505. 1
92090652506. 2
92090652507. 3
92090652508. 4

Question Number : 27 Question Id : 92090613293 Question Type : MCQ Option Shuffling : No Is Question Mandatory : No Calculator : None Response Time : N.A Think Time : N.A Minimum Instruction Time : 0

Correct Marks : 4 Wrong Marks : 1

एलोरा में किस गुफा को 'इन्द्र सभा' के नाम से जाना जाता है?

- | | |
|--------------------|--------------------|
| (1) गुफा संख्या 13 | (2) गुफा संख्या 14 |
| (3) गुफा संख्या 32 | (4) गुफा संख्या 33 |

Options :

92090652505. 1
92090652506. 2
92090652507. 3
92090652508. 4

Question Number : 28 Question Id : 92090613294 Question Type : MCQ Option Shuffling : No Is Question Mandatory : No Calculator : None Response Time : N.A Think Time : N.A Minimum Instruction Time : 0

Correct Marks : 4 Wrong Marks : 1

Painter 'Manaku' is associated with which style of painting?

1. Basohli
2. Kangra
3. Kishangarh
4. Guler

Options :

92090652509. 1
92090652510. 2
92090652511. 3
92090652512. 4

Question Number : 28 Question Id : 92090613294 Question Type : MCQ Option Shuffling : No Is Question Mandatory : No Calculator : None Response Time : N.A Think Time : N.A Minimum Instruction Time : 0

Correct Marks : 4 Wrong Marks : 1

'मन्कू' चित्रकार, चित्रकला की किस शैली से संबंधित है?

- | | |
|-------------|-------------|
| (1) बोसोहली | (2) काँगड़ा |
| (3) किशनगढ़ | (4) गुलेर |

Options :

92090652509. 1
92090652510. 2
92090652511. 3
92090652512. 4

Question Number : 29 Question Id : 92090613295 Question Type : MCQ Option Shuffling : No Is Question Mandatory : No Calculator : None Response Time : N.A Think Time : N.A Minimum Instruction Time : 0

Correct Marks : 4 Wrong Marks : 1

During which of the following dynasties was the "Kamakhya Devi" Temple located in Guwahati, Assam established?

1. Chola Dynasty
2. Gandhara Dynasty
3. Salastambha Dynasty
4. Pala Dynasty

Options :

92090652513. 1
92090652514. 2
92090652515. 3
92090652516. 4

Question Number : 29 Question Id : 92090613295 Question Type : MCQ Option Shuffling : No Is Question Mandatory : No Calculator : None Response Time : N.A Think Time : N.A Minimum Instruction Time : 0

Correct Marks : 4 Wrong Marks : 1

गुवाहाटी, असम में स्थित "कामाख्या देवी" मंदिर की स्थापना किस वंश के शासनकाल में हुई थी?

- | | |
|-----------------|----------------|
| (1) चोल वंश | (2) गांधार वंश |
| (3) शलस्तंभ वंश | (4) पाल वंश |

Options :

92090652513. 1
92090652514. 2
92090652515. 3
92090652516. 4

Question Number : 30 Question Id : 92090613296 Question Type : MCQ Option Shuffling : No Is Question Mandatory : No Calculator : None Response Time : N.A Think Time : N.A Minimum Instruction Time : 0

Correct Marks : 4 Wrong Marks : 1

Badami, Aihole, Pattadakal and Mahakuteshwara are the art centers of which of the following kingdoms?

1. Pallava kingdom
2. Gupta kindgom
3. Chalukya kingdom
4. Maurya kingdom

Options :

92090652517. 1
92090652518. 2
92090652519. 3
92090652520. 4

Question Number : 30 Question Id : 92090613296 Question Type : MCQ Option Shuffling : No Is Question Mandatory : No Calculator : None Response Time : N.A Think Time : N.A Minimum Instruction Time : 0

Correct Marks : 4 Wrong Marks : 1

बादामी, ऐथोल, पट्टडाकाल तथा महाकुतेश्वर निम्न में से किस साम्राज्य के काल में कला के केन्द्र हैं?

- (1) पल्लव काल (2) गुप्त काल
(3) चालुक्य काल (4) मौर्य काल

Options :

92090652517. 1
92090652518. 2
92090652519. 3
92090652520. 4

Question Number : 31 Question Id : 92090613297 Question Type : MCQ Option Shuffling : No Is Question Mandatory : No Calculator : None Response Time : N.A Think Time : N.A Minimum Instruction Time : 0

Correct Marks : 4 Wrong Marks : 1

Which of the following isms is associated with "Boccioni"?

1. Impressionism
2. Futurism
3. Fauvism
4. Post-Impressionism

Options :

92090652521. 1
92090652522. 2
92090652523. 3
92090652524. 4

Question Number : 31 Question Id : 92090613297 Question Type : MCQ Option Shuffling : No Is Question Mandatory : No Calculator : None Response Time : N.A Think Time : N.A Minimum Instruction Time : 0

Correct Marks : 4 Wrong Marks : 1

निम्नलिखित में से कौन सा 'वाद' बोक्सियोनी से संबंधित है?

- | | |
|---------------|---------------------|
| (1) प्रभाववाद | (2) भविष्यवाद |
| (3) फॉविज़म | (4) उत्तर-प्रभाववाद |

Options :

92090652521. 1
92090652522. 2
92090652523. 3
92090652524. 4

Question Number : 32 Question Id : 92090613298 Question Type : MCQ Option Shuffling : No Is Question Mandatory : No Calculator : None Response Time : N.A Think Time : N.A Minimum Instruction Time : 0

Correct Marks : 4 Wrong Marks : 1

"The Card Cheaters" is a painting done by

1. Peter Paul Rubens
2. Caravaggio
3. Bernini
4. Pietro da Cortona

Options :

92090652525. 1
92090652526. 2
92090652527. 3
92090652528. 4

Question Number : 32 Question Id : 92090613298 Question Type : MCQ Option Shuffling : No Is Question Mandatory : No Calculator : None Response Time : N.A Think Time : N.A Minimum Instruction Time : 0

Correct Marks : 4 Wrong Marks : 1

'द कार्ड चीटर्स' नामक चित्र किसके द्वारा बनाई गई है?

- | | |
|----------------------|----------------------|
| (1) पीटर पॉल रुबेन्स | (2) कारावेजियो |
| (3) बर्निनी | (4) पीएट्रो द कोटोना |

Options :

92090652525. 1
92090652526. 2
92090652527. 3
92090652528. 4

Question Number : 33 Question Id : 92090613299 Question Type : MCQ Option Shuffling : No Is Question Mandatory : No Calculator : None Response Time : N.A Think Time : N.A Minimum Instruction Time : 0

Correct Marks : 4 Wrong Marks : 1

The painting "Les Femmes d'Alger" was created by

1. Picasso
2. Braque
3. Matisse
4. Kandinsky

Options :

92090652529. 1
92090652530. 2
92090652531. 3
92090652532. 4

Question Number : 33 Question Id : 92090613299 Question Type : MCQ Option Shuffling : No Is Question Mandatory : No Calculator : None Response Time : N.A Think Time : N.A Minimum Instruction Time : 0

Correct Marks : 4 Wrong Marks : 1

"ले डेमोसैल्स ड एविग्नन" चित्र किसके द्वारा बनाई गई थी ?

- | | |
|------------|-----------------|
| (1) पिकासो | (2) ब्राँक |
| (3) मैतिस | (4) कैन्डिन्सकी |

Options :

92090652529. 1
92090652530. 2
92090652531. 3
92090652532. 4

Question Number : 34 Question Id : 92090613300 Question Type : MCQ Option Shuffling : No Is Question Mandatory : No Calculator : None Response Time : N.A Think Time : N.A Minimum Instruction Time : 0

Correct Marks : 4 Wrong Marks : 1

Identify the art movement associated with "The Blue Rider" group.

1. German Expressionism
2. Realism
3. Dadaism
4. Romanticism

Options :

92090652533. 1
92090652534. 2
92090652535. 3
92090652536. 4

Question Number : 34 Question Id : 92090613300 Question Type : MCQ Option Shuffling : No Is Question Mandatory : No Calculator : None Response Time : N.A Think Time : N.A Minimum Instruction Time : 0

Correct Marks : 4 Wrong Marks : 1

“द ब्लू राइडर” समूह से संबंधित कला आंदोलन कौन सा है?

- | | |
|------------------------|--------------------------|
| (1) जर्मन अभिव्यंजकवाद | (2) यथार्थवाद |
| (3) दादावाद | (4) अतिरंजनवाद/रोमांसवाद |

Options :

92090652533. 1
92090652534. 2
92090652535. 3
92090652536. 4

Question Number : 35 Question Id : 92090613301 Question Type : MCQ Option Shuffling : No Is Question Mandatory : No Calculator : None Response Time : N.A Think Time : N.A Minimum Instruction Time : 0

Correct Marks : 4 Wrong Marks : 1

“Surya Temple” of Modhera is located in which State?

1. Madhya Pradesh
2. Chhattisgarh
3. Uttar Pradesh
4. Gujarat

Options :

92090652537. 1
92090652538. 2
92090652539. 3

92090652540. 4

Question Number : 35 Question Id : 92090613301 Question Type : MCQ Option Shuffling : No Is Question Mandatory : No Calculator : None Response Time : N.A Think Time : N.A Minimum Instruction Time : 0

Correct Marks : 4 Wrong Marks : 1

मोढेरा 'सूर्य मंदिर' किस राज्य में है ?

- | | |
|------------------|---------------|
| (1) मध्य प्रदेश | (2) छत्तीसगढ़ |
| (3) उत्तर प्रदेश | (4) गुजरात |

Options :

- 92090652537. 1
- 92090652538. 2
- 92090652539. 3
- 92090652540. 4

Question Number : 36 Question Id : 92090613302 Question Type : MCQ Option Shuffling : No Is Question Mandatory : No Calculator : None Response Time : N.A Think Time : N.A Minimum Instruction Time : 0

Correct Marks : 4 Wrong Marks : 1

Which artist developed a new style of painting influenced by Kalighat style of paintings?

1. Devi Prasad Roy Chowdhury
2. Samarendra Nath Gupta
3. Naghatta
4. Jamini Roy

Options :

- 92090652541. 1
- 92090652542. 2
- 92090652543. 3
- 92090652544. 4

Question Number : 36 Question Id : 92090613302 Question Type : MCQ Option Shuffling : No Is Question Mandatory : No Calculator : None Response Time : N.A Think Time : N.A Minimum Instruction Time : 0

Correct Marks : 4 Wrong Marks : 1

निम्नलिखित में से किस चित्रकार ने कालीघाट चित्रकला शैली से प्रभावित होकर चित्रकला की एक नई शैली विकसित की ?

- | | |
|----------------------------|--------------------------|
| (1) देवी प्रसाद राय चौधुरी | (2) समरेन्द्र नाथ गुप्ता |
| (3) नघट्टा | (4) जामिनी रॉय |

Options :

92090652541. 1
92090652542. 2
92090652543. 3
92090652544. 4

Question Number : 37 Question Id : 92090613303 Question Type : MCQ Option Shuffling : No Is Question Mandatory : No Calculator : None Response Time : N.A Think Time : N.A Minimum Instruction Time : 0

Correct Marks : 4 Wrong Marks : 1

What is the total number of Bagh Caves?

1. 12 caves
2. 9 caves
3. 8 caves
4. 7 caves

Options :

92090652545. 1
92090652546. 2
92090652547. 3
92090652548. 4

Question Number : 37 Question Id : 92090613303 Question Type : MCQ Option Shuffling : No Is Question Mandatory : No Calculator : None Response Time : N.A Think Time : N.A Minimum Instruction Time : 0

Correct Marks : 4 Wrong Marks : 1

बाघ गुफाओं की कुल संख्या कितनी है ?

- | | |
|---------------|---------------|
| (1) 12 गुफाएँ | (2) 09 गुफाएँ |
| (3) 08 गुफाएँ | (4) 07 गुफाएँ |

Options :

92090652545. 1
92090652546. 2
92090652547. 3
92090652548. 4

Question Number : 38 Question Id : 92090613304 Question Type : MCQ Option Shuffling : No Is Question Mandatory : No Calculator : None Response Time : N.A Think Time : N.A Minimum Instruction Time : 0

Correct Marks : 4 Wrong Marks : 1

Under whose reign did the *Humzanama* got completed?

1. Humayun
2. Akbar
3. Jahangir
4. Shah Jahan

Options :

92090652549. 1
92090652550. 2
92090652551. 3
92090652552. 4

Question Number : 38 Question Id : 92090613304 Question Type : MCQ Option Shuffling : No Is Question Mandatory : No Calculator : None Response Time : N.A Think Time : N.A Minimum Instruction Time : 0

Correct Marks : 4 Wrong Marks : 1

'हज़ानामा' किसके शासनकाल में पाण्डुलिपि पूर्ण हुई ?

- | | |
|-------------|-------------|
| (1) हुमायूँ | (2) अकबर |
| (3) जहाँगीर | (4) शाहजहाँ |

Options :

92090652549. 1
92090652550. 2
92090652551. 3
92090652552. 4

Question Number : 39 Question Id : 92090613305 Question Type : MCQ Option Shuffling : No Is Question Mandatory : No Calculator : None Response Time : N.A Think Time : N.A Minimum Instruction Time : 0

Correct Marks : 4 Wrong Marks : 1

Out of the following which is *not* the famous place for Romanesque Art?

1. France
2. England
3. Spain
4. Poland

Options :

92090652553. 1
92090652554. 2
92090652555. 3
92090652556. 4

Question Number : 39 Question Id : 92090613305 Question Type : MCQ Option Shuffling : No Is Question Mandatory : No Calculator : None Response Time : N.A Think Time : N.A Minimum Instruction Time : 0

Correct Marks : 4 Wrong Marks : 1

निम्नलिखित में से कौन सा स्थान रोमनस्क कला के लिए प्रसिद्ध नहीं है?

- | | |
|------------|--------------|
| (1) फ्रांस | (2) इंग्लैंड |
| (3) स्पेन | (4) पोलैंड |

Options :

92090652553. 1
92090652554. 2
92090652555. 3
92090652556. 4

Question Number : 40 Question Id : 92090613306 Question Type : MCQ Option Shuffling : No Is Question Mandatory : No Calculator : None Response Time : N.A Think Time : N.A Minimum Instruction Time : 0

Correct Marks : 4 Wrong Marks : 1

Among the following who was the teacher of Leonardo da Vinci?

1. Verrocchio
2. Giotto
3. Cimabue
4. Michelangelo

Options :

92090652557. 1
92090652558. 2

92090652559. 3

92090652560. 4

Question Number : 40 Question Id : 92090613306 Question Type : MCQ Option Shuffling : No Is Question Mandatory : No Calculator : None Response Time : N.A Think Time : N.A Minimum Instruction Time : 0

Correct Marks : 4 Wrong Marks : 1

निम्नलिखित में से लियोनार्दो दा विंसि का शिक्षक कौन था ?

- | | |
|--------------|-----------------|
| (1) वेरोचियो | (2) जियोतो |
| (3) चिमेबी | (4) माइकल एंजलो |

Options :

92090652557. 1

92090652558. 2

92090652559. 3

92090652560. 4

Question Number : 41 Question Id : 92090613307 Question Type : MCQ Option Shuffling : No Is Question Mandatory : No Calculator : None Response Time : N.A Think Time : N.A Minimum Instruction Time : 0

Correct Marks : 4 Wrong Marks : 1

The painting "The Death of Marat" was created by

1. Ingres
2. Jean Gros
3. Louis David
4. Louis Girodet

Options :

92090652561. 1

92090652562. 2

92090652563. 3

92090652564. 4

Question Number : 41 Question Id : 92090613307 Question Type : MCQ Option Shuffling : No Is Question Mandatory : No Calculator : None Response Time : N.A Think Time : N.A Minimum Instruction Time : 0

Correct Marks : 4 Wrong Marks : 1

'द डैथ ऑफ मारात' नामक चित्र किसने बनाई थी ?

- (1) इंग्लैंड (2) जॉन ग्रॉस
(3) लुइस डेविड (4) लुइस जिरोडेट

Options :

92090652561. 1
92090652562. 2
92090652563. 3
92090652564. 4

Question Number : 42 Question Id : 92090613308 Question Type : MCQ Option Shuffling : No Is Question Mandatory : No Calculator : None Response Time : N.A Think Time : N.A Minimum Instruction Time : 0

Correct Marks : 4 Wrong Marks : 1

Joseph Turner was a

1. British printmaker
2. Italian sculptor
3. British landscape painter
4. German portrait painter

Options :

92090652565. 1
92090652566. 2
92090652567. 3
92090652568. 4

Question Number : 42 Question Id : 92090613308 Question Type : MCQ Option Shuffling : No Is Question Mandatory : No Calculator : None Response Time : N.A Think Time : N.A Minimum Instruction Time : 0

Correct Marks : 4 Wrong Marks : 1

जोसेफ़ टर्नर कौन था ?

- (1) ब्रिटेन का एक छापाचित्र कलाकार (2) इटली का एक शिल्पकार
(3) ब्रिटेन का एक भूदृश्य बनाने वाला चित्रकार (4) जर्मन पोर्ट्रेट बनाने वाला चित्रकार

Options :

92090652565. 1
92090652566. 2
92090652567. 3
92090652568. 4

Question Number : 43 Question Id : 92090613309 Question Type : MCQ Option Shuffling : No Is Question Mandatory : No Calculator : None Response Time : N.A Think Time : N.A Minimum Instruction Time : 0

Correct Marks : 4 Wrong Marks : 1

Pointillism belongs to which ism?

1. Neo-Impressionism
2. Expressionism
3. Impressionism
4. Cubism

Options :

92090652569. 1
92090652570. 2
92090652571. 3
92090652572. 4

Question Number : 43 Question Id : 92090613309 Question Type : MCQ Option Shuffling : No Is Question Mandatory : No Calculator : None Response Time : N.A Think Time : N.A Minimum Instruction Time : 0

Correct Marks : 4 Wrong Marks : 1

बिंदु-चित्रण किस 'वाद' से संबंधित है?

- | | |
|------------------|------------------|
| (1) नव प्रभाववाद | (2) अभित्यंजनवाद |
| (3) प्रभाववाद | (4) घनवाद |

Options :

92090652569. 1
92090652570. 2
92090652571. 3
92090652572. 4

Question Number : 44 Question Id : 92090613310 Question Type : MCQ Option Shuffling : No Is Question Mandatory : No Calculator : None Response Time : N.A Think Time : N.A Minimum Instruction Time : 0

Correct Marks : 4 Wrong Marks : 1

"A Sunday Afternoon on the island of La Grande Jatte" painting is made by which of the following artist?

1. Georges Seurat
2. Paul Cezanne
3. Picasso
4. Pissarro

Options :

92090652573. 1
92090652574. 2
92090652575. 3
92090652576. 4

Question Number : 44 Question Id : 92090613310 Question Type : MCQ Option Shuffling : No Is Question Mandatory : No Calculator : None Response Time : N.A Think Time : N.A Minimum Instruction Time : 0

Correct Marks : 4 Wrong Marks : 1

किस चित्रकार ने "ए संडे आफ्टरनून ऑन ला ग्रान्ड जेटे" नामक चित्र बनाया है

- | | |
|-----------------|----------------|
| (1) जॉर्ज सूरेट | (2) पॉल सीज़ान |
| (3) पिकासो | (4) पिसारो |

Options :

92090652573. 1
92090652574. 2
92090652575. 3
92090652576. 4

Question Number : 45 Question Id : 92090613311 Question Type : MCQ Option Shuffling : No Is Question Mandatory : No Calculator : None Response Time : N.A Think Time : N.A Minimum Instruction Time : 0

Correct Marks : 4 Wrong Marks : 1

Out of the following which is not binder of tempera?

1. Gum Arabic
2. Giletine
3. Egg yolk
4. Turpentine oil

Options :

92090652577. 1
92090652578. 2
92090652579. 3
92090652580. 4

Question Number : 45 Question Id : 92090613311 Question Type : MCQ Option Shuffling : No Is Question Mandatory : No Calculator : None Response Time : N.A Think Time : N.A Minimum Instruction Time : 0

Correct Marks : 4 Wrong Marks : 1

निम्नलिखित में से क्या टैम्पेरा का बंध्यकारी नहीं है ?

- | | |
|--------------------|-------------------|
| (1) गम अरेबिक | (2) जिलेटिन |
| (3) अंडे की ज़र्दी | (4) तारपीन का तेल |

Options :

92090652577. 1
92090652578. 2
92090652579. 3
92090652580. 4

Question Number : 46 Question Id : 92090613312 Question Type : MCQ Option Shuffling : No Is Question Mandatory : No Calculator : None Response Time : N.A Think Time : N.A Minimum Instruction Time : 0

Correct Marks : 4 Wrong Marks : 1

Who was the founder artist of Neo-Impressionism?

1. Georges Seurat
2. Monet
3. Matisse
4. Gauguin

Options :

92090652581. 1
92090652582. 2
92090652583. 3
92090652584. 4

Question Number : 46 Question Id : 92090613312 Question Type : MCQ Option Shuffling : No Is Question Mandatory : No Calculator : None Response Time : N.A Think Time : N.A Minimum Instruction Time : 0

Correct Marks : 4 Wrong Marks : 1

नव-प्रभाववाद का स्थापक कलाकार कौन था ?

- | | |
|------------------|-----------|
| (1) जॉर्ज सूरेंट | (2) मोने |
| (3) मैतिस | (4) गॉगिन |

Options :

92090652581. 1
92090652582. 2
92090652583. 3
92090652584. 4

Question Number : 47 Question Id : 92090613313 Question Type : MCQ Option Shuffling : No Is Question Mandatory : No Calculator : None Response Time : N.A Think Time : N.A Minimum Instruction Time : 0

Correct Marks : 4 Wrong Marks : 1

"Water Lilies" is the art work done by

1. Monet
2. Manet
3. Pissarro
4. Degas

Options :

92090652585. 1
92090652586. 2
92090652587. 3
92090652588. 4

Question Number : 47 Question Id : 92090613313 Question Type : MCQ Option Shuffling : No Is Question Mandatory : No Calculator : None Response Time : N.A Think Time : N.A Minimum Instruction Time : 0

Correct Marks : 4 Wrong Marks : 1

'वाटर लिलीज़' कलाकृति किसने बनाई ?

- | | |
|------------|----------|
| (1) मोने | (2) माने |
| (3) पिसारो | (4) देगा |

Options :

92090652585. 1
92090652586. 2
92090652587. 3
92090652588. 4

Question Number : 48 Question Id : 92090613314 Question Type : MCQ Option Shuffling : No Is Question Mandatory : No Calculator : None Response Time : N.A Think Time : N.A Minimum Instruction Time : 0

Correct Marks : 4 Wrong Marks : 1

In which city was the first paper mill established in India?

1. Madras (Chennai)
2. Bombay (Mumbai)
3. Goa
4. Calcutta (Kolkata)

Options :

92090652589. 1

92090652590. 2

92090652591. 3

92090652592. 4

Question Number : 48 Question Id : 92090613314 Question Type : MCQ Option Shuffling : No Is Question Mandatory : No Calculator : None Response Time : N.A Think Time : N.A Minimum Instruction Time : 0

Correct Marks : 4 Wrong Marks : 1

भारत के किस शहर में सर्वप्रथम कागज़ की मिल लगाई गई?

- | | |
|---------------------|-----------------------|
| (1) मद्रास (चेन्नई) | (2) बॉम्बे (मुम्बई) |
| (3) गोआ | (4) कलकत्ता (कोलकाता) |

Options :

92090652589. 1

92090652590. 2

92090652591. 3

92090652592. 4

Question Number : 49 Question Id : 92090613315 Question Type : MCQ Option Shuffling : No Is Question Mandatory : No Calculator : None Response Time : N.A Think Time : N.A Minimum Instruction Time : 0

Correct Marks : 4 Wrong Marks : 1

Out of the following which is *not* from the secondary colour group?

1. Orange colour
2. Red colour
3. Green colour
4. Violet colour

Options :

92090652593. 1
92090652594. 2
92090652595. 3
92090652596. 4

Question Number : 49 Question Id : 92090613315 Question Type : MCQ Option Shuffling : No Is Question Mandatory : No Calculator : None Response Time : N.A Think Time : N.A Minimum Instruction Time : 0

Correct Marks : 4 Wrong Marks : 1

निम्नलिखित में से कौन सा रंग द्वितीयक वर्ण समूह में नहीं है?

- | | |
|------------|------------|
| (1) नारंगी | (2) लाल |
| (3) हरा | (4) बैंगनी |

Options :

92090652593. 1
92090652594. 2
92090652595. 3
92090652596. 4

Question Number : 50 Question Id : 92090613316 Question Type : MCQ Option Shuffling : No Is Question Mandatory : No Calculator : None Response Time : N.A Think Time : N.A Minimum Instruction Time : 0

Correct Marks : 4 Wrong Marks : 1

Artist Abdur Rahman Chughtai was famous for

1. Wash painting
2. Mural
3. Sculpture
4. Oil painting

Options :

92090652597. 1
92090652598. 2

92090652599. 3

92090652600. 4

Question Number : 50 Question Id : 92090613316 Question Type : MCQ Option Shuffling : No Is Question Mandatory : No Calculator : None Response Time : N.A Think Time : N.A Minimum Instruction Time : 0

Correct Marks : 4 Wrong Marks : 1

अबदुर्रहमान चुगताई नामक कलाकार किसलिए प्रसिद्ध था ?

- | | |
|-------------------|--------------------------|
| (1) वाँश चित्रकला | (2) म्यूरल/भित्ति चित्रण |
| (3) शिल्पकला | (4) तैलीय चित्र |

Options :

92090652597. 1

92090652598. 2

92090652599. 3

92090652600. 4

Question Number : 51 Question Id : 92090613317 Question Type : MCQ Option Shuffling : No Is Question Mandatory : No Calculator : None Response Time : N.A Think Time : N.A Minimum Instruction Time : 0

Correct Marks : 4 Wrong Marks : 1

Catacombs are

1. Temple
2. Underground tomb
3. Entrance gate
4. Cave

Options :

92090652601. 1

92090652602. 2

92090652603. 3

92090652604. 4

Question Number : 51 Question Id : 92090613317 Question Type : MCQ Option Shuffling : No Is Question Mandatory : No Calculator : None Response Time : N.A Think Time : N.A Minimum Instruction Time : 0

Correct Marks : 4 Wrong Marks : 1

अवतुंब क्या हैं?

- (1) मंदिर (2) भूमिगत मकबरा
(3) प्रवेश द्वार (4) गुफा

Options :

92090652601. 1
92090652602. 2
92090652603. 3
92090652604. 4

Question Number : 52 Question Id : 92090613318 Question Type : MCQ Option Shuffling : No Is Question Mandatory : No Calculator : None Response Time : N.A Think Time : N.A Minimum Instruction Time : 0

Correct Marks : 4 Wrong Marks : 1

The remains of Pompeii Murals has been preserved in which museum?

1. The National Archaeological Museum of Naples
2. The Louvre Museum, France
3. The British Museum, London
4. The National Museum, New Delhi

Options :

92090652605. 1
92090652606. 2
92090652607. 3
92090652608. 4

Question Number : 52 Question Id : 92090613318 Question Type : MCQ Option Shuffling : No Is Question Mandatory : No Calculator : None Response Time : N.A Think Time : N.A Minimum Instruction Time : 0

Correct Marks : 4 Wrong Marks : 1

पॉम्पी म्यूरल के अवशेष किस संग्रहालय में सुरक्षित रखे है?

- (1) नैपल्स का राष्ट्रीय पुरातत्वविज्ञान संग्रहालय (2) फ्रांस का लूर्व संग्रहालय
(3) लंदन का ब्रिटिश संग्रहालय (4) नई दिल्ली का राष्ट्रीय संग्रहालय

Options :

92090652605. 1
92090652606. 2
92090652607. 3
92090652608. 4

Question Number : 53 Question Id : 92090613319 Question Type : MCQ Option Shuffling : No Is Question Mandatory : No Calculator : None Response Time : N.A Think Time : N.A Minimum Instruction Time : 0

Correct Marks : 4 Wrong Marks : 1

Where are the Jogimara Caves situated?

1. Raigarh
2. Aadamgarh
3. Pahargarh
4. Ramgarh

Options :

92090652609. 1
92090652610. 2
92090652611. 3
92090652612. 4

Question Number : 53 Question Id : 92090613319 Question Type : MCQ Option Shuffling : No Is Question Mandatory : No Calculator : None Response Time : N.A Think Time : N.A Minimum Instruction Time : 0

Correct Marks : 4 Wrong Marks : 1

जोगीमारा गुफाएँ कहाँ पर स्थित हैं?

- | | |
|--------------|------------|
| (1) रायगढ़ | (2) आदमगढ़ |
| (3) पहाड़गढ़ | (4) रामगढ़ |

Options :

92090652609. 1
92090652610. 2
92090652611. 3
92090652612. 4

Question Number : 54 Question Id : 92090613320 Question Type : MCQ Option Shuffling : No Is Question Mandatory : No Calculator : None Response Time : N.A Think Time : N.A Minimum Instruction Time : 0

Correct Marks : 4 Wrong Marks : 1

Which painter got fame by using Indian mythological subjects in western style in his paintings?

1. Jamini Roy
2. Abanindranath Tagore
3. Raja Ravi Varma
4. Asit Kumar Haldar

Options :

92090652613. 1
92090652614. 2
92090652615. 3
92090652616. 4

Question Number : 54 Question Id : 92090613320 Question Type : MCQ Option Shuffling : No Is Question Mandatory : No Calculator : None Response Time : N.A Think Time : N.A Minimum Instruction Time : 0

Correct Marks : 4 Wrong Marks : 1

निम्न में से किस चित्रकार को भारतीय विषय का पाश्चात्य शैली में उपयोग करके प्रसिद्धि मिली ?

- | | |
|--------------------|------------------------|
| (1) जामिनी रॉय | (2) अबनिन्द्रनाथ टैगोर |
| (3) राजा रवि वर्मा | (4) असित कुमार हलदर |

Options :

92090652613. 1
92090652614. 2
92090652615. 3
92090652616. 4

Question Number : 55 Question Id : 92090613321 Question Type : MCQ Option Shuffling : No Is Question Mandatory : No Calculator : None Response Time : N.A Think Time : N.A Minimum Instruction Time : 0

Correct Marks : 4 Wrong Marks : 1

The remains found in the Indus Valley Civilization are mostly in which form?

1. Utensils
2. Murals
3. Manuscripts
4. Sculptures

Options :

92090652617. 1

92090652618. 2

92090652619. 3

92090652620. 4

Question Number : 55 Question Id : 92090613321 Question Type : MCQ Option Shuffling : No Is Question Mandatory : No Calculator : None Response Time : N.A Think Time : N.A Minimum Instruction Time : 0

Correct Marks : 4 Wrong Marks : 1

सिन्धु घाटी सभ्यता के अवशेष अधिकांशतः किस रूप में प्राप्त हुए हैं?

- | | |
|------------------|--------------------------|
| (1) बर्तन | (2) (म्यूरल) भित्तिचित्र |
| (3) पांडुलिपियाँ | (4) मूर्तियाँ |

Options :

92090652617. 1

92090652618. 2

92090652619. 3

92090652620. 4

Question Number : 56 Question Id : 92090613322 Question Type : MCQ Option Shuffling : No Is Question Mandatory : No Calculator : None Response Time : N.A Think Time : N.A Minimum Instruction Time : 0

Correct Marks : 4 Wrong Marks : 1

Akbar awarded the title of "Sheri Kalam" to which painter?

1. Mir Sayyid Ali
2. Khwaja Abdus Samad Shirazi
3. Basawan
4. Daswant

Options :

92090652621. 1

92090652622. 2

92090652623. 3

92090652624. 4

Question Number : 56 Question Id : 92090613322 Question Type : MCQ Option Shuffling : No Is Question Mandatory : No Calculator : None Response Time : N.A Think Time : N.A Minimum Instruction Time : 0

Correct Marks : 4 Wrong Marks : 1

अकबर ने 'शेरे कलम' खिताब किस चित्रकार को दिया ?

- (1) मीर सैय्यद अली (2) ख्वाज़ा अब्दुसमद शिराज़ी
(3) बसवन (4) दसवंत

Options :

92090652621. 1
92090652622. 2
92090652623. 3
92090652624. 4

Question Number : 57 Question Id : 92090613323 Question Type : MCQ Option Shuffling : No Is Question Mandatory : No Calculator : None Response Time : N.A Think Time : N.A Minimum Instruction Time : 0

Correct Marks : 4 Wrong Marks : 1

Who wrote the book, *The Ideals of Indian Art*?

1. Asit Kumar Haldar
2. Abanindranath Tagore
3. E. B. Havell
4. Jamini Roy

Options :

92090652625. 1
92090652626. 2
92090652627. 3
92090652628. 4

Question Number : 57 Question Id : 92090613323 Question Type : MCQ Option Shuffling : No Is Question Mandatory : No Calculator : None Response Time : N.A Think Time : N.A Minimum Instruction Time : 0

Correct Marks : 4 Wrong Marks : 1

'आइडियल ऑफ इंडियन आर्ट' नामक पुस्तक किसने लिखी ?

- (1) असित कुमार हलदर (2) अबनीन्द्रनाथ टैगोर
(3) ई.वी. हैवेल (4) जामिनी रॉय

Options :

92090652625. 1
92090652626. 2
92090652627. 3
92090652628. 4

Question Number : 58 Question Id : 92090613324 Question Type : MCQ Option Shuffling : No Is Question Mandatory : No Calculator : None Response Time : N.A Think Time : N.A Minimum Instruction Time : 0

Correct Marks : 4 Wrong Marks : 1

What type of sculptural style is mainly found in Rajgir Bihar, Jain Temples?

1. Pala style
2. Nagara style
3. Dravida style
4. Gandhara style

Options :

92090652629. 1

92090652630. 2

92090652631. 3

92090652632. 4

Question Number : 58 Question Id : 92090613324 Question Type : MCQ Option Shuffling : No Is Question Mandatory : No Calculator : None Response Time : N.A Think Time : N.A Minimum Instruction Time : 0

Correct Marks : 4 Wrong Marks : 1

राजगिरी, बिहार के जैन मंदिरों में मुख्य रूप से किस प्रकार की शिल्पकला शैली मिलती है?

- | | |
|------------------|-----------------|
| (1) पाल शैली | (2) नागर शैली |
| (3) द्रविड़ शैली | (4) गांधार शैली |

Options :

92090652629. 1

92090652630. 2

92090652631. 3

92090652632. 4

Question Number : 59 Question Id : 92090613325 Question Type : MCQ Option Shuffling : No Is Question Mandatory : No Calculator : None Response Time : N.A Think Time : N.A Minimum Instruction Time : 0

Correct Marks : 4 Wrong Marks : 1

Identify the name of main cave of Chalukya paintings.

1. Bagh Cave
2. Mamunder cave
3. Badami Cave
4. Chaitya Cave

Options :

92090652633. 1
92090652634. 2
92090652635. 3
92090652636. 4

Question Number : 59 Question Id : 92090613325 Question Type : MCQ Option Shuffling : No Is Question Mandatory : No Calculator : None Response Time : N.A Think Time : N.A Minimum Instruction Time : 0

Correct Marks : 4 Wrong Marks : 1

चालुक्य चित्रकलाओं की प्रमुख गुफा कौन सी है?

- | | |
|-----------------|------------------|
| (1) बाघ गुफा | (2) ममून्दर गुफा |
| (3) बादामी गुफा | (4) चैत्य गुफा |

Options :

92090652633. 1
92090652634. 2
92090652635. 3
92090652636. 4

Question Number : 60 Question Id : 92090613326 Question Type : MCQ Option Shuffling : No Is Question Mandatory : No Calculator : None Response Time : N.A Think Time : N.A Minimum Instruction Time : 0

Correct Marks : 4 Wrong Marks : 1

Who wrote the book, *Indian Artistic Anatomy*?

1. Rabindranath Tagore
2. Nandalal Bose
3. Asit Kumar Halder
4. Abanindranath Tagore

Options :

92090652637. 1
92090652638. 2

92090652639. 3

92090652640. 4

Question Number : 60 Question Id : 92090613326 Question Type : MCQ Option Shuffling : No Is Question Mandatory : No Calculator : None Response Time : N.A Think Time : N.A Minimum Instruction Time : 0

Correct Marks : 4 Wrong Marks : 1

‘इंडियन आर्टिस्टिक एनॉटॉमी’ नामक पुस्तक किसने लिखी ?

- | | |
|------------------------|------------------------|
| (1) रबीन्द्र नाथ टैगोर | (2) नंदलाल बोस |
| (3) असित कुमार हलदर | (4) अबनीन्द्रनाथ टैगोर |

Options :

92090652637. 1

92090652638. 2

92090652639. 3

92090652640. 4

Question Number : 61 Question Id : 92090613327 Question Type : MCQ Option Shuffling : No Is Question Mandatory : No Calculator : None Response Time : N.A Think Time : N.A Minimum Instruction Time : 0

Correct Marks : 4 Wrong Marks : 1

In which style was the Hoyasala Temple developed?

1. Chola style
2. Pala style
3. Gandhara style
4. Besar style

Options :

92090652641. 1

92090652642. 2

92090652643. 3

92090652644. 4

Question Number : 61 Question Id : 92090613327 Question Type : MCQ Option Shuffling : No Is Question Mandatory : No Calculator : None Response Time : N.A Think Time : N.A Minimum Instruction Time : 0

Correct Marks : 4 Wrong Marks : 1

‘होयसला मंदिर’ किस शैली में विकसित किए गए थे?

- | | |
|-----------------|---------------|
| (1) चोल शैली | (2) पाल शैली |
| (3) गांधार शैली | (4) बेसर शैली |

Options :

92090652641. 1
92090652642. 2
92090652643. 3
92090652644. 4

Question Number : 62 Question Id : 92090613328 Question Type : MCQ Option Shuffling : No Is Question Mandatory : No Calculator : None Response Time : N.A Think Time : N.A Minimum Instruction Time : 0

Correct Marks : 4 Wrong Marks : 1

The Kandariya Mahadev Temple is situated in

1. Bhubaneswar
2. Mahabalipuram
3. Khajuraho
4. Puri

Options :

92090652645. 1
92090652646. 2
92090652647. 3
92090652648. 4

Question Number : 62 Question Id : 92090613328 Question Type : MCQ Option Shuffling : No Is Question Mandatory : No Calculator : None Response Time : N.A Think Time : N.A Minimum Instruction Time : 0

Correct Marks : 4 Wrong Marks : 1

‘कंदारिया महादेव मंदिर’ कहाँ पर स्थित है?

- | | |
|---------------|----------------|
| (1) भुवनेश्वर | (2) महाबलीपुरम |
| (3) खजुराहो | (4) पुरी |

Options :

92090652645. 1
92090652646. 2
92090652647. 3
92090652648. 4

Question Number : 63 Question Id : 92090613329 Question Type : MCQ Option Shuffling : No Is Question Mandatory : No Calculator : None Response Time : N.A Think Time : N.A Minimum Instruction Time : 0

Correct Marks : 4 Wrong Marks : 1

Raja Ravi Varma was influenced by which of the following styles?

1. Rajasthani style
2. Pahari style
3. European style
4. Mughal style

Options :

92090652649. 1
92090652650. 2
92090652651. 3
92090652652. 4

Question Number : 63 Question Id : 92090613329 Question Type : MCQ Option Shuffling : No Is Question Mandatory : No Calculator : None Response Time : N.A Think Time : N.A Minimum Instruction Time : 0

Correct Marks : 4 Wrong Marks : 1

राजा रवि वर्मा निम्न में से किस शैली द्वारा प्रभावित हुए ?

- | | |
|--------------------|-----------------|
| (1) राजस्थानी शैली | (2) पहाड़ी शैली |
| (3) यूरोपीय शैली | (4) मुगल शैली |

Options :

92090652649. 1
92090652650. 2
92090652651. 3
92090652652. 4

Question Number : 64 Question Id : 92090613330 Question Type : MCQ Option Shuffling : No Is Question Mandatory : No Calculator : None Response Time : N.A Think Time : N.A Minimum Instruction Time : 0

Correct Marks : 4 Wrong Marks : 1

Which printing process is done by using stone?

1. Relief printing
2. Letter press printing
3. Lithography
4. Silk screen

Options :

- 92090652653. 1
- 92090652654. 2
- 92090652655. 3
- 92090652656. 4

Question Number : 64 Question Id : 92090613330 Question Type : MCQ Option Shuffling : No Is Question Mandatory : No Calculator : None Response Time : N.A Think Time : N.A Minimum Instruction Time : 0

Correct Marks : 4 Wrong Marks : 1

निम्न में से कौन सी प्रिंटिंग प्रक्रिया को पत्थर का उपयोग करके किया जा सकता है ?

- (1) उभार प्रिंटिंग
- (2) अक्षर मुद्रण प्रिंटिंग
- (3) लिथोग्राफी
- (4) सिल्क स्क्रीन

Options :

- 92090652653. 1
- 92090652654. 2
- 92090652655. 3
- 92090652656. 4

Question Number : 65 Question Id : 92090613331 Question Type : MCQ Option Shuffling : No Is Question Mandatory : No Calculator : None Response Time : N.A Think Time : N.A Minimum Instruction Time : 0

Correct Marks : 4 Wrong Marks : 1

"Tie and Dye" is a technique of

- 1. Textile printing
- 2. Oil painting
- 3. Water colour
- 4. Tempera

Options :

- 92090652657. 1
- 92090652658. 2
- 92090652659. 3
- 92090652660. 4

Question Number : 65 Question Id : 92090613331 Question Type : MCQ Option Shuffling : No Is Question Mandatory : No Calculator : None Response Time : N.A Think Time : N.A Minimum Instruction Time : 0

Correct Marks : 4 Wrong Marks : 1

'बंधेज' निम्न में से किसकी तकनीक है?

- | | |
|---------------------|------------------|
| (1) कपड़ा प्रिंटिंग | (2) तैलीय चित्रण |
| (3) जल रंग | (4) टैम्परा |

Options :

92090652657. 1
92090652658. 2
92090652659. 3
92090652660. 4

Question Number : 66 Question Id : 92090613332 Question Type : MCQ Option Shuffling : No Is Question Mandatory : No Calculator : None Response Time : N.A Think Time : N.A Minimum Instruction Time : 0

Correct Marks : 4 Wrong Marks : 1

Given below are two statements, one is labelled as Assertion (A) and the other is labelled as Reason (R) :

Assertion (A) : Nandalal Bose is acknowledged as a major painter of the Bengal School.

Reason (R) : Because in 1910, he visited Europe to see museums.

In the light of the above statements, choose the *most appropriate* answer from the options given below.

1. Both (A) and (R) are correct and (R) is the correct explanation of (A)
2. Both (A) and (R) are correct but (R) is not the correct explanation of (A)
3. (A) is correct but (R) is not correct
4. (A) is not correct but (R) is correct

Options :

92090652661. 1
92090652662. 2
92090652663. 3
92090652664. 4

Question Number : 66 Question Id : 92090613332 Question Type : MCQ Option Shuffling : No Is Question Mandatory : No Calculator : None Response Time : N.A Think Time : N.A Minimum Instruction Time : 0

Correct Marks : 4 Wrong Marks : 1

नीचे दो कथन दिए गए हैं : एक अभिकथन (Assertion A) के रूप में लिखित है तो दूसरा उसके कारण (Reason R) के रूप में :

अभिकथन (A) : नंदलाल बोस को बंगाल स्कूल का एक प्रमुख चित्रकार माना जाता है।

कारण (R) : क्योंकि वर्ष 1910 में वह संग्रहालयों को देखने के लिए यूरोप भ्रमण के लिए गया।

उपरोक्त कथन के आलोक में, नीचे दिए गए विकल्पों में से सबसे उपयुक्त उत्तर का चयन कीजिए :

- (1) (A) और (R) दोनों सही हैं और (R), (A) की सही व्याख्या है।
- (2) (A) और (R) दोनों सही हैं, लेकिन (R), (A) की सही व्याख्या नहीं है।
- (3) (A) सही है, लेकिन (R) सही नहीं है।
- (4) (A) सही नहीं है, लेकिन (R) सही है।

Options :

92090652661. 1
92090652662. 2
92090652663. 3
92090652664. 4

Question Number : 67 Question Id : 92090613333 Question Type : MCQ Option Shuffling : No Is Question Mandatory : No Calculator : None Response Time : N.A Think Time : N.A Minimum Instruction Time : 0

Correct Marks : 4 Wrong Marks : 1

Given below are two statements, one is labelled as Assertion (A) and the other is labelled as Reason (R) :

Assertion (A) : Acrylic colours are used as opaque as well as for transparent effects in painting.

Reason (R) : Acrylic colours can be diluted with water and it dries fast.

In the light of the above statements, choose the *correct* answer from the options given below.

1. Both (A) and (R) are true and (R) is the correct explanation of (A)
2. Both (A) and (R) are true but (R) is not the correct explanation of (A)
3. (A) is true but (R) is false
4. (A) is false but (R) is true

Options :

92090652665. 1
92090652666. 2

92090652667. 3

92090652668. 4

Question Number : 67 Question Id : 92090613333 Question Type : MCQ Option Shuffling : No Is Question Mandatory : No Calculator : None Response Time : N.A Think Time : N.A Minimum Instruction Time : 0

Correct Marks : 4 Wrong Marks : 1

नीचे दो कथन दिए गए हैं : एक अभिकथन (Assertion A) के रूप में लिखित है तो दूसरा उसके कारण (Reason R) के रूप में :

अभिकथन (A) : एक्रेलिक रंगों का उपयोग चित्रों में अपारदर्शी तथा पारदर्शी प्रभाव देने के लिए किया जाता है।

कारण (R) : एक्रेलिक रंगों को पानी द्वारा फीका किया जा सकता है तथा ये शीघ्र ही सूख जाते हैं।

उपरोक्त कथन के आलोक में, नीचे दिए गए विकल्पों में से सबसे उपयुक्त उत्तर का चयन कीजिए :

- (1) (A) और (R) दोनों सही हैं और (R), (A) की सही व्याख्या है।
- (2) (A) और (R) दोनों सही हैं, लेकिन (R), (A) की सही व्याख्या नहीं है।
- (3) (A) सही है, लेकिन (R) सही नहीं है।
- (4) (A) सही नहीं है, लेकिन (R) सही है।

Options :

92090652665. 1

92090652666. 2

92090652667. 3

92090652668. 4

Question Number : 68 Question Id : 92090613334 Question Type : MCQ Option Shuffling : No Is Question Mandatory : No Calculator : None Response Time : N.A Think Time : N.A Minimum Instruction Time : 0

Correct Marks : 4 Wrong Marks : 1

Given below are two statements, one is labelled as Assertion (A) and the other is labelled as Reason (R) :

Assertion (A) : The invention of paper spread from China to Korea and later Japan in about 610 AD in Asia.

Reason (R) : Because at first the vegetable fibres were beaten by hand with hammer and sticks.

In the light of the above statements, choose the *correct* answer from the options given below.

1. Both (A) and (R) are true and (R) is the correct explanation of (A)
2. Both (A) and (R) are true but (R) is not the correct explanation of (A)
3. (A) is true but (R) is false
4. (A) is false but (R) is true

Options :

92090652669. 1

92090652670. 2

92090652671. 3

92090652672. 4

Question Number : 68 Question Id : 92090613334 Question Type : MCQ Option Shuffling : No Is Question Mandatory : No Calculator : None Response Time : N.A Think Time : N.A Minimum Instruction Time : 0

Correct Marks : 4 Wrong Marks : 1

नीचे दो कथन दिए गए हैं : एक अभिकथन (Assertion A) के रूप में लिखित है तो दूसरा उसके कारण (Reason R) के रूप में :

अभिकथन (A) : एशिया में लगभग 610 A.D. में कागज़ की खोज चीन से कोरिया तथा बाद में जापान में फैली।

कारण (R) : क्योंकि पहले पौधों से प्राप्त तन्तुओं को हथौड़ों तथा लाठियों द्वारा हाथों से कूटा जाता था।

उपरोक्त कथन के आलोक में, नीचे दिए गए विकल्पों में से सही उत्तर का चयन कीजिए :

- (1) (A) और (R) दोनों सत्य हैं और (R), (A) की सही व्याख्या है।
- (2) (A) और (R) दोनों सत्य हैं, लेकिन (R), (A) की सही व्याख्या नहीं है।
- (3) (A) सत्य है, लेकिन (R) असत्य है।
- (4) (A) असत्य है, लेकिन (R) सत्य है।

Options :

92090652669. 1

92090652670. 2

92090652671. 3

92090652672. 4

Question Number : 69 Question Id : 92090613335 Question Type : MCQ Option Shuffling : No Is Question Mandatory : No Calculator : None Response Time : N.A Think Time : N.A Minimum Instruction Time : 0

Correct Marks : 4 Wrong Marks : 1

Given below are two statements, one is labelled as Assertion (A) and the other is labelled as Reason (R) :

Assertion (A) : For oil painting, hog hair brushes are used and canvas is the most suitable surface.

Reason (R) : For oil painting, the canvas weaving should be condensed.

In the light of the above statements, choose the *correct* answer from the options given below.

1. Both (A) and (R) are true and (R) is the correct explanation of (A)
2. Both (A) and (R) are true but (R) is not the correct explanation of (A)
3. (A) is true but (R) is false
4. (A) is false but (R) is true

Options :

92090652673. 1

92090652674. 2

92090652675. 3

92090652676. 4

Question Number : 69 Question Id : 92090613335 Question Type : MCQ Option Shuffling : No Is Question Mandatory : No Calculator : None Response Time : N.A Think Time : N.A Minimum Instruction Time : 0

Correct Marks : 4 Wrong Marks : 1

नीचे दो कथन दिए गए हैं : एक अभिकथन (Assertion A) के रूप में लिखित है तो दूसरा उसके कारण (Reason R) के रूप में :

अभिकथन (A) : तैलीय चित्रों के लिए सूअर के बालों से बने ब्रुशों का उपयोग किया जाता है तथा इसके लिए सर्वाधिक उपयुक्त सतह/तल कैनवस है।

कारण (R) : तैलीय चित्रों के लिए कैनवस की बुनाई गहन होनी चाहिए।

उपरोक्त कथन के आलोक में, नीचे दिए गए विकल्पों में से सही उत्तर का चयन कीजिए :

- (1) (A) और (R) दोनों सत्य हैं और (R), (A) की सही व्याख्या है।
- (2) (A) और (R) दोनों सत्य हैं, लेकिन (R), (A) की सही व्याख्या नहीं है।
- (3) (A) सत्य है, लेकिन (R) असत्य है।
- (4) (A) असत्य है, लेकिन (R) सत्य है।

Options :

92090652673. 1
92090652674. 2
92090652675. 3
92090652676. 4

Question Number : 70 Question Id : 92090613336 Question Type : MCQ Option Shuffling : No Is Question Mandatory : No Calculator : None Response Time : N.A Think Time : N.A Minimum Instruction Time : 0

Correct Marks : 4 Wrong Marks : 1

Given below are two statements, one is labelled as Assertion (A) and the other is labelled as Reason (R) :

Assertion (A) : Albrecht Dürer was also a brilliant draughtsman and he created many prints.

Reason (R) : "Adam and Eve" is not his famous engraving.

In the light of the above statements, choose the *most appropriate* answer from the options given below.

1. Both (A) and (R) are correct and (R) is the correct explanation of (A)
2. Both (A) and (R) are correct but (R) is not the correct explanation of (A)
3. (A) is correct but (R) is not correct
4. (A) is not correct but (R) is correct

Options :

92090652677. 1
92090652678. 2

92090652679. 3

92090652680. 4

Question Number : 70 Question Id : 92090613336 Question Type : MCQ Option Shuffling : No Is Question Mandatory : No Calculator : None Response Time : N.A Think Time : N.A Minimum Instruction Time : 0

Correct Marks : 4 Wrong Marks : 1

नीचे दो कथन दिए गए हैं : एक अभिकथन (Assertion A) के रूप में लिखित है तो दूसरा उसके कारण (Reason R) के रूप में :

अभिकथन (A) : एलब्रैक्ट ड्यूरेर एक प्रबुद्ध नक्शानविस भी था और उसने बहुत से छापाचित्र बनाए।

कारण (R) : 'एडम तथा ईव' उसकी प्रसिद्ध नक्काशी/उत्कीर्ण नहीं है।

उपरोक्त कथन के आलोक में, नीचे दिए गए विकल्पों में से सबसे उपयुक्त उत्तर का चयन कीजिए :

- (1) (A) और (R) दोनों सही हैं और (R), (A) की सही व्याख्या है।
- (2) (A) और (R) दोनों सही हैं, लेकिन (R), (A) की सही व्याख्या नहीं है।
- (3) (A) सही है, लेकिन (R) सही नहीं है।
- (4) (A) सही नहीं है, लेकिन (R) सही है।

Options :

92090652677. 1

92090652678. 2

92090652679. 3

92090652680. 4

Question Number : 71 Question Id : 92090613337 Question Type : MCQ Option Shuffling : No Is Question Mandatory : No Calculator : None Response Time : N.A Think Time : N.A Minimum Instruction Time : 0

Correct Marks : 4 Wrong Marks : 1

Given below are two statements, one is labelled as Assertion (A) and the other is labelled as Reason (R) :

Assertion (A) : Constantin Brancusi's sculptures are comparable to that of Picasso's paintings.

Reason (R) : Because Brancusi was born in Germany and was already an accomplished artist when he arrived Paris in 1904.

In the light of the above statements, choose the *most appropriate* answer from the options given below.

1. Both (A) and (R) are correct and (R) is the correct explanation of (A)
2. Both (A) and (R) are correct but (R) is not the correct explanation of (A)
3. (A) is correct but (R) is not correct
4. (A) is not correct but (R) is correct

Options :

92090652681. 1
92090652682. 2
92090652683. 3
92090652684. 4

Question Number : 71 Question Id : 92090613337 Question Type : MCQ Option Shuffling : No Is Question Mandatory : No Calculator : None Response Time : N.A Think Time : N.A Minimum Instruction Time : 0

Correct Marks : 4 Wrong Marks : 1

नीचे दो कथन दिए गए हैं : एक को अभिकथन (A) और दूसरे को कारण (R) के रूप में लेबल किया गया है:

अभिकथन (A) : कॉन्स्टैन्टिन ब्रान्क्यूसी की मूर्तियों की तुलना पिकासो की चित्रकलाओं से की जा सकती है।

कारण (R) : क्योंकि ब्रान्क्यूसी का जन्म जर्मनी में हुआ था और जब 1904 में वह पेरिस आया तो वह एक स्थापित कलाकार था।

उपरोक्त कथनों के आलोक में, नीचे दिए गए विकल्पों में से सबसे उपयुक्त उत्तर चुनें:

- (1) (A) और (R) दोनों सही हैं और (R), (A) की सही व्याख्या है।
- (2) (A) और (R) दोनों सही हैं, लेकिन (R), (A) की सही व्याख्या नहीं है।
- (3) (A) सही है, लेकिन (R) सही नहीं है।
- (4) (A) सही नहीं है, लेकिन (R) सही है।

Options :

- 92090652681. 1
- 92090652682. 2
- 92090652683. 3
- 92090652684. 4

Question Number : 72 Question Id : 92090613338 Question Type : MCQ Option Shuffling : No Is Question Mandatory : No Calculator : None Response Time : N.A Think Time : N.A Minimum Instruction Time : 0

Correct Marks : 4 Wrong Marks : 1

Given below are two statements, one is labelled as Assertion (A) and the other is labelled as Reason (R) :

Assertion (A) : Satish Gujral was a famous painter, sculptor and architect, born in 1925.

Reason (R) : He was highly influenced by the Mexican Mural Paintings.

In the light of the above statements, choose the *most appropriate* answer from the options given below.

1. Both (A) and (R) are correct and (R) is the correct explanation of (A)
2. Both (A) and (R) are correct but (R) is not the correct explanation of (A)
3. (A) is correct but (R) is not correct
4. (A) is not correct but (R) is correct

Options :

- 92090652685. 1
- 92090652686. 2
- 92090652687. 3
- 92090652688. 4

Question Number : 72 Question Id : 92090613338 Question Type : MCQ Option Shuffling : No Is Question Mandatory : No Calculator : None Response Time : N.A Think Time : N.A Minimum Instruction Time : 0

Correct Marks : 4 Wrong Marks : 1

नीचे दो कथन दिए गए हैं : एक अभिकथन (Assertion A) के रूप में लिखित है तो दूसरा उसके कारण (Reason R) के रूप में :

अभिकथन (A) : वर्ष 1925 में जन्मे सतीश गुजराल एक प्रसिद्ध चित्रकार, मूर्तिकार तथा वास्तुकार थे।

कारण (R) : वह मैक्सिको के भित्ति चित्रों द्वारा बहुत प्रभावित हुए।

उपरोक्त कथन के आलोक में, नीचे दिए गए विकल्पों में से सबसे उपयुक्त उत्तर का चयन कीजिए :

- (1) (A) और (R) दोनों सही हैं और (R), (A) की सही व्याख्या है।
- (2) (A) और (R) दोनों सही हैं, लेकिन (R), (A) की सही व्याख्या नहीं है।
- (3) (A) सही है, लेकिन (R) सही नहीं है।
- (4) (A) सही नहीं है, लेकिन (R) सही है।

Options :

92090652685. 1
92090652686. 2
92090652687. 3
92090652688. 4

Question Number : 73 Question Id : 92090613339 Question Type : MCQ Option Shuffling : No Is Question Mandatory : No Calculator : None Response Time : N.A Think Time : N.A Minimum Instruction Time : 0

Correct Marks : 4 Wrong Marks : 1

Given below are two statements :

Statement–I : Sculptor Bernini is from 18th century.

Statement–II : Sculptor Henry Moore is from 20th century.

In the light of the above statements, choose the *most appropriate* answer from the options given below.

1. Both Statement–I and Statement–II are correct
2. Both Statement–I and Statement–II are incorrect
3. Statement–I is correct but Statement–II is incorrect
4. Statement–I is incorrect but Statement–II is correct

Options :

92090652689. 1
92090652690. 2
92090652691. 3
92090652692. 4

Question Number : 73 Question Id : 92090613339 Question Type : MCQ Option Shuffling : No Is Question Mandatory : No Calculator : None Response Time : N.A Think Time : N.A Minimum Instruction Time : 0

Correct Marks : 4 Wrong Marks : 1

नीचे दो कथन दिए गए हैं :

कथन (I) : मूर्तिकार बर्निनी 18हवीं शताब्दी से हैं।

कथन (II) : मूर्तिकार हेनरी मूर 20वीं शताब्दी से हैं।

उपरोक्त कथन के आलोक में, नीचे दिए गए विकल्पों में से सबसे उपयुक्त उत्तर का चयन कीजिए :

- (1) कथन (I) और (II) दोनों सही हैं।
- (2) कथन (I) और (II) दोनों गलत हैं।
- (3) कथन (I) सही है, लेकिन कथन (II) गलत है।
- (4) कथन (I) गलत है, लेकिन कथन (II) सही है।

Options :

92090652689. 1

92090652690. 2

92090652691. 3

92090652692. 4

Question Number : 74 Question Id : 92090613340 Question Type : MCQ Option Shuffling : No Is Question Mandatory : No Calculator : None Response Time : N.A Think Time : N.A Minimum Instruction Time : 0

Correct Marks : 4 Wrong Marks : 1

Given below are two statements :

Statement-I : In monotype printing method, edition printing is not possible.

Statement-II : For making monotype printing, zinc plates can also be used.

In the light of the above statements, choose the *most appropriate* answer from the options given below.

1. Both Statement-I and Statement-II are correct
2. Both Statement-I and Statement-II are incorrect
3. Statement-I is correct but Statement-II is incorrect
4. Statement-I is incorrect but Statement-II is correct

Options :

92090652693. 1

92090652694. 2

92090652695. 3

92090652696. 4

Question Number : 74 Question Id : 92090613340 Question Type : MCQ Option Shuffling : No Is Question Mandatory : No Calculator : None Response Time : N.A Think Time : N.A Minimum Instruction Time : 0

Correct Marks : 4 Wrong Marks : 1

नीचे दो कथन दिए गए हैं :

कथन (I) : एकलप्रारूप प्रिंटिंग विधि में एडिशन (Edition) प्रिंटिंग की संभावना नहीं है।

कथन (II) : एकलप्रारूप प्रिंटिंग बनाने के लिए जिंक (जस्ता) प्लेटों का उपयोग भी किया जा सकता है।

उपरोक्त कथन के आलोक में, नीचे दिए गए विकल्पों में से सबसे उपयुक्त उत्तर का चयन कीजिए :

- (1) कथन (I) और (II) दोनों सही हैं।
- (2) कथन (I) और (II) दोनों गलत हैं।
- (3) कथन (I) सही है, लेकिन कथन (II) गलत है।
- (4) कथन (I) गलत है, लेकिन कथन (II) सही है।

Options :

92090652693. 1

92090652694. 2

92090652695. 3

92090652696. 4

Question Number : 75 Question Id : 92090613341 Question Type : MCQ Option Shuffling : No Is Question Mandatory : No Calculator : None Response Time : N.A Think Time : N.A Minimum Instruction Time : 0

Correct Marks : 4 Wrong Marks : 1

Given below are two statements :

Statement–I : Nefertiti sculpted head is preserved in the Berlin Museum.

Statement–II : Nefertiti sculpted head is found from Mesopotamia.

In the light of the above statements, choose the *correct* answer from the options given below.

1. Both Statement–I and Statement–II are true
2. Both Statement–I and Statement–II are false
3. Statement–I is true but Statement–II is false
4. Statement–I is false but Statement–II is true

Options :

- 92090652697. 1
- 92090652698. 2
- 92090652699. 3
- 92090652700. 4

Question Number : 75 Question Id : 92090613341 Question Type : MCQ Option Shuffling : No Is Question Mandatory : No Calculator : None Response Time : N.A Think Time : N.A Minimum Instruction Time : 0

Correct Marks : 4 Wrong Marks : 1

नीचे दो कथन दिए गए हैं :

कथन (I) : नेफ्रेतिति का मुख शिल्प ब्रिटेन संग्रहालय में संरक्षित है।

कथन (II) : नेफ्रेतिति का मुख शिल्प मैसोपोटामिया से प्राप्त हुआ।

उपरोक्त कथन के आलोक में, नीचे दिए गए विकल्पों में से सही उत्तर का चयन कीजिए :

- (1) कथन (I) और (II) दोनों सत्य हैं।
- (2) कथन (I) और (II) दोनों असत्य हैं।
- (3) कथन (I) सत्य है, लेकिन कथन (II) असत्य है।
- (4) कथन (I) असत्य है, लेकिन कथन (II) सत्य है।

Options :

- 92090652697. 1
- 92090652698. 2
- 92090652699. 3
- 92090652700. 4

Question Number : 76 Question Id : 92090613342 Question Type : MCQ Option Shuffling : No Is Question Mandatory : No Calculator : None Response Time : N.A Think Time : N.A Minimum Instruction Time : 0

Correct Marks : 4 Wrong Marks : 1

Given below are two statements :

Statement–I : Fresco Bouno is a wet process of Mural painting.

Statement–II : Fresco technique is also used on canvases.

In the light of the above statements, choose the *most appropriate* answer from the options given below.

1. Both Statement–I and Statement–II are correct
2. Both Statement–I and Statement–II are incorrect
3. Statement–I is correct but Statement–II is incorrect
4. Statement–I is incorrect but Statement–II is correct

Options :

92090652701. 1
92090652702. 2
92090652703. 3
92090652704. 4

Question Number : 76 Question Id : 92090613342 Question Type : MCQ Option Shuffling : No Is Question Mandatory : No Calculator : None Response Time : N.A Think Time : N.A Minimum Instruction Time : 0

Correct Marks : 4 Wrong Marks : 1

नीचे दो कथन दिए गए हैं :

कथन (I) : फ्रैस्को बाउनो म्यूरल पेंटिंग की एक नम/गीली प्रक्रिया है।

कथन (II) : फ्रैस्को तकनीक का उपयोग कैनवास पर भी किया जाता है।

उपरोक्त कथन के आलोक में, नीचे दिए गए विकल्पों में से सबसे उपयुक्त उत्तर का चयन कीजिए :

- (1) कथन (I) और (II) दोनों सही हैं।
- (2) कथन (I) और (II) दोनों गलत हैं।
- (3) कथन (I) सही है, लेकिन कथन (II) गलत है।
- (4) कथन (I) गलत है, लेकिन कथन (II) सही है।

Options :

92090652701. 1
92090652702. 2
92090652703. 3
92090652704. 4

Question Number : 77 Question Id : 92090613343 Question Type : MCQ Option Shuffling : No Is Question Mandatory : No Calculator : None Response Time : N.A Think Time : N.A Minimum Instruction Time : 0

Correct Marks : 4 Wrong Marks : 1

Given below are two statements :

Statement-I : While using earth colours for painting, a binder is needed to mix with.

Statement-II : The basic colour of Pevadi is yellow.

In the light of the above statements, choose the *most appropriate* answer from the options given below.

1. Both Statement-I and Statement-II are correct
2. Both Statement-I and Statement-II are incorrect
3. Statement-I is correct but Statement-II is incorrect
4. Statement-I is incorrect but Statement-II is correct

Options :

92090652705. 1

92090652706. 2

92090652707. 3

92090652708. 4

Question Number : 77 Question Id : 92090613343 Question Type : MCQ Option Shuffling : No Is Question Mandatory : No Calculator : None Response Time : N.A Think Time : N.A Minimum Instruction Time : 0

Correct Marks : 4 Wrong Marks : 1

नीचे दो कथन दिए गए हैं :

कथन (I) : भूमि/प्राकृतिक रंगों द्वारा चित्र बनाते समय किसी बंधनकारी को मिलाने की आवश्यकता होती है।

कथन (II) : पेवाडी का मूल रंग पीला है।

उपरोक्त कथन के आलोक में, नीचे दिए गए विकल्पों में से सबसे उपयुक्त उत्तर का चयन कीजिए :

- (1) कथन (I) और (II) दोनों सही हैं।
- (2) कथन (I) और (II) दोनों गलत हैं।
- (3) कथन (I) सही है, लेकिन कथन (II) गलत है।
- (4) कथन (I) गलत है, लेकिन कथन (II) सही है।

Options :

92090652705. 1

92090652706. 2

92090652707. 3

92090652708. 4

Question Number : 78 Question Id : 92090613344 Question Type : MCQ Option Shuffling : No Is Question Mandatory : No Calculator : None Response Time : N.A Think Time : N.A Minimum Instruction Time : 0

Correct Marks : 4 Wrong Marks : 1

Given below are two statements :

Statement-I : Impasto method is used in oil painting.

Statement-II : Glue is not the component of making Gouache painting.

In the light of the above statements, choose the *most appropriate* answer from the options given below.

1. Both Statement-I and Statement-II are correct
2. Both Statement-I and Statement-II are incorrect
3. Statement-I is correct but Statement-II is incorrect
4. Statement-I is incorrect but Statement-II is correct

Options :

92090652709. 1

92090652710. 2

92090652711. 3

92090652712. 4

Question Number : 78 Question Id : 92090613344 Question Type : MCQ Option Shuffling : No Is Question Mandatory : No Calculator : None Response Time : N.A Think Time : N.A Minimum Instruction Time : 0

Correct Marks : 4 Wrong Marks : 1

नीचे दो कथन दिए गए हैं :

कथन (I) : तैलीय चित्र बनाने के लिए इम्पास्टो विधि का उपयोग किया जाता है।

कथन (II) : गॉस चित्र बनाने के लिए गोंद एक घटक नहीं है।

उपरोक्त कथन के आलोक में, नीचे दिए गए विकल्पों में से सबसे उपयुक्त उत्तर का चयन कीजिए :

- (1) कथन (I) और (II) दोनों सही हैं।
- (2) कथन (I) और (II) दोनों गलत हैं।
- (3) कथन (I) सही है, लेकिन कथन (II) गलत है।
- (4) कथन (I) गलत है, लेकिन कथन (II) सही है।

Options :

92090652709. 1
92090652710. 2
92090652711. 3
92090652712. 4

Question Number : 79 Question Id : 92090613345 Question Type : MCQ Option Shuffling : No Is Question Mandatory : No Calculator : None Response Time : N.A Think Time : N.A Minimum Instruction Time : 0

Correct Marks : 4 Wrong Marks : 1

Given below are two statements :

Statement-I : "The Gates of Hell" is created by Rodin.

Statement-II : The "Fourteen-Year-Old Dancer" is also created by Rodin.

In the light of the above statements, choose the *most appropriate* answer from the options given below.

1. Both Statement-I and Statement-II are correct
2. Both Statement-I and Statement-II are incorrect
3. Statement-I is correct but Statement-II is incorrect
4. Statement-I is incorrect but Statement-II is correct

Options :

92090652713. 1
92090652714. 2
92090652715. 3
92090652716. 4

Question Number : 79 Question Id : 92090613345 Question Type : MCQ Option Shuffling : No Is Question Mandatory : No Calculator : None Response Time : N.A Think Time : N.A Minimum Instruction Time : 0

Correct Marks : 4 Wrong Marks : 1

नीचे दो कथन दिए गए हैं :

कथन (I) : “द गेट्स ऑफ हैल” नामक चित्र रोदिन ने बनाया।

कथन (II) : ‘द फोर्टीन इयर ओल्ड डान्सर’ नामक कृति भी रोदिन की है।

उपरोक्त कथन के आलोक में, नीचे दिए गए विकल्पों में से सबसे उपयुक्त उत्तर का चयन कीजिए :

- (1) कथन (I) और (II) दोनों सही हैं।
- (2) कथन (I) और (II) दोनों गलत हैं।
- (3) कथन (I) सही है, लेकिन कथन (II) गलत है।
- (4) कथन (I) गलत है, लेकिन कथन (II) सही है।

Options :

92090652713. 1
92090652714. 2
92090652715. 3
92090652716. 4

Question Number : 80 Question Id : 92090613346 Question Type : MCQ Option Shuffling : No Is Question Mandatory : No Calculator : None Response Time : N.A Think Time : N.A Minimum Instruction Time : 0

Correct Marks : 4 Wrong Marks : 1

Given below are two statements :

Statement–I : Ajanta Cave paintings depict Jataka Stories.

Statement–II : Jataka Stories consist of the life stories of Shiva.

In the light of the above statements, choose the *most appropriate* answer from the options given below.

1. Both Statement–I and Statement–II are correct
2. Both Statement–I and Statement–II are incorrect
3. Statement–I is correct but Statement–II is incorrect
4. Statement–I is incorrect but Statement–II is correct

Options :

92090652717. 1
92090652718. 2

92090652719. 3

92090652720. 4

Question Number : 80 Question Id : 92090613346 Question Type : MCQ Option Shuffling : No Is Question Mandatory : No Calculator : None Response Time : N.A Think Time : N.A Minimum Instruction Time : 0

Correct Marks : 4 Wrong Marks : 1

नीचे दो कथन दिए गए हैं :

कथन (I) : अजंता की गुफाओं के चित्र जातक कथाओं को दर्शाते हैं।

कथन (II) : जातक कथाएँ शिव के जीवन चरित से बनी हैं।

उपरोक्त कथन के आलोक में, नीचे दिए गए विकल्पों में से सबसे उपयुक्त उत्तर का चयन कीजिए :

- (1) कथन (I) और (II) दोनों सही हैं।
- (2) कथन (I) और (II) दोनों गलत हैं।
- (3) कथन (I) सही है, लेकिन कथन (II) गलत है।
- (4) कथन (I) गलत है, लेकिन कथन (II) सही है।

Options :

92090652717. 1

92090652718. 2

92090652719. 3

92090652720. 4

Question Number : 81 Question Id : 92090613347 Question Type : MCQ Option Shuffling : No Is Question Mandatory : No Calculator : None Response Time : N.A Think Time : N.A Minimum Instruction Time : 0

Correct Marks : 4 Wrong Marks : 1

Given below are two statements :

Statement-I : Akbar's Tomb is situated in Lucknow, Uttar Pradesh.

Statement-II : Buland Darwaza is situated in Agra, Uttar Pradesh.

In the light of the above statements, choose the *correct* answer from the options given below.

1. Both Statement-I and Statement-II are true
2. Both Statement-I and Statement-II are false
3. Statement-I is true but Statement-II is false
4. Statement-I is false but Statement-II is true

Options :

- 92090652721. 1
- 92090652722. 2
- 92090652723. 3
- 92090652724. 4

Question Number : 81 Question Id : 92090613347 Question Type : MCQ Option Shuffling : No Is Question Mandatory : No Calculator : None Response Time : N.A Think Time : N.A Minimum Instruction Time : 0

Correct Marks : 4 Wrong Marks : 1

नीचे दो कथन दिए गए हैं :

कथन (I) : अकबर का मकबरा उत्तर प्रदेश के लखनऊ में स्थित है।

कथन (II) : बुलंद दरवाज़ा उत्तर प्रदेश के आगरा में स्थित है।

उपरोक्त कथन के आलोक में, नीचे दिए गए विकल्पों में से सही उत्तर का चयन कीजिए :

- (1) कथन (I) और (II) दोनों सत्य हैं।
- (2) कथन (I) और (II) दोनों असत्य हैं।
- (3) कथन (I) सत्य है, लेकिन कथन (II) असत्य है।
- (4) कथन (I) असत्य है, लेकिन कथन (II) सत्य है।

Options :

- 92090652721. 1
- 92090652722. 2
- 92090652723. 3
- 92090652724. 4

Question Number : 82 Question Id : 92090613348 Question Type : MCQ Option Shuffling : No Is Question Mandatory : No Calculator : None Response Time : N.A Think Time : N.A Minimum Instruction Time : 0

Correct Marks : 4 Wrong Marks : 1

Choose the correct sequence of the ruling dynasties in chronological order :

- A. Mauryas
- B. Pallavas
- C. Kushanas
- D. Guptas

Choose the *correct* answer from the options given below.

- 1. A, C, D, B
- 2. B, A, C, D
- 3. C, B, D, A
- 4. D, A, B, C

Options :

- 92090652725. 1
- 92090652726. 2
- 92090652727. 3
- 92090652728. 4

Question Number : 82 Question Id : 92090613348 Question Type : MCQ Option Shuffling : No Is Question Mandatory : No Calculator : None Response Time : N.A Think Time : N.A Minimum Instruction Time : 0

Correct Marks : 4 Wrong Marks : 1

निम्नलिखित को कालक्रमानुसार व्यवस्थित करें।

- (A) मौर्य
- (B) पल्लव
- (C) कुशान
- (D) गुप्ता

नीचे दिए गए विकल्पों में से सही उत्तर का चयन कीजिए:

- (1) (A), (C), (D), (B)
- (2) (B), (A), (C), (D)
- (3) (C), (B), (D), (A)
- (4) (D), (A), (B), (C)

Options :

- 92090652725. 1
- 92090652726. 2
- 92090652727. 3

92090652728. 4

Question Number : 83 Question Id : 92090613349 Question Type : MCQ Option Shuffling : No Is Question Mandatory : No Calculator : None Response Time : N.A Think Time : N.A Minimum Instruction Time : 0

Correct Marks : 4 Wrong Marks : 1

Choose the correct sequence of the art movements in chronological order :

- A. High Renaissance
- B. Egyptian
- C. Proto-Renaissance
- D. Byzantine

Choose the *correct* answer from the options given below.

- 1. A, B, C, D
- 2. B, D, C, A
- 3. C, D, B, A
- 4. D, A, C, B

Options :

- 92090652729. 1
- 92090652730. 2
- 92090652731. 3
- 92090652732. 4

Question Number : 83 Question Id : 92090613349 Question Type : MCQ Option Shuffling : No Is Question Mandatory : No Calculator : None Response Time : N.A Think Time : N.A Minimum Instruction Time : 0

Correct Marks : 4 Wrong Marks : 1

कला आंदोलनों को कालक्रमानुसार व्यवस्थित करें।

- (A) उच्च पुनर्जागरण
- (B) मिस्री कला
- (C) मूल/आद्य पुनर्जागरण
- (D) बाइज़ेनटियन कला

नीचे दिए गए विकल्पों में से सही उत्तर का चयन कीजिए:

- (1) (A), (B), (C), (D)
- (2) (B), (D), (C), (A)
- (3) (C), (D), (B), (A)
- (4) (D), (A), (C), (B)

Options :

- 92090652729. 1
- 92090652730. 2
- 92090652731. 3
- 92090652732. 4

Question Number : 84 Question Id : 92090613350 Question Type : MCQ Option Shuffling : No Is Question Mandatory : No Calculator : None Response Time : N.A Think Time : N.A Minimum Instruction Time : 0

Correct Marks : 4 Wrong Marks : 1

Choose the correct period of Indian Sculptures chronologically :

- A. Mauryan
- B. Satavahana
- C. Sunga
- D. Kushana

Choose the *correct* answer from the options given below.

- 1. A, C, B, D
- 2. B, D, A, C
- 3. C, A, D, B
- 4. D, B, A, C

Options :

- 92090652733. 1
- 92090652734. 2

92090652735. 3

92090652736. 4

Question Number : 84 Question Id : 92090613350 Question Type : MCQ Option Shuffling : No Is Question Mandatory : No Calculator : None Response Time : N.A Think Time : N.A Minimum Instruction Time : 0

Correct Marks : 4 Wrong Marks : 1

भारतीय शिल्पकला के काल को कालक्रमानुसार व्यवस्थित करें।

- (A) मौर्य
- (B) सतवाहन
- (C) शुंग
- (D) कुशान

नीचे दिए गए विकल्पों में से सही उत्तर का चयन कीजिए:

- (1) (A), (C), (B), (D)
- (2) (B), (D), (A), (C)
- (3) (C), (A), (D), (B)
- (4) (D), (B), (A), (C)

Options :

92090652733. 1

92090652734. 2

92090652735. 3

92090652736. 4

Question Number : 85 Question Id : 92090613351 Question Type : MCQ Option Shuffling : No Is Question Mandatory : No Calculator : None Response Time : N.A Think Time : N.A Minimum Instruction Time : 0

Correct Marks : 4 Wrong Marks : 1

Set the style of Western sculptural period in chronological order :

- A. Renaissance
- B. Medieval
- C. Mannerism
- D. Classical

Choose the *correct* answer from the options given below.

- 1. B, A, C, D
- 2. A, B, C, D
- 3. D, B, A, C
- 4. C, D, B, A

Options :

- 92090652737. 1
- 92090652738. 2
- 92090652739. 3
- 92090652740. 4

Question Number : 85 Question Id : 92090613351 Question Type : MCQ Option Shuffling : No Is Question Mandatory : No Calculator : None Response Time : N.A Think Time : N.A Minimum Instruction Time : 0

Correct Marks : 4 Wrong Marks : 1

पाश्चात्य शिल्पकला के काल को कालक्रमानुसार व्यवस्थित करें।

- (A) पुनर्जागरण
- (B) मध्यकाल
- (C) व्यक्तिगत व्यवहार/मेनरिज्म
- (D) शास्त्रीय

नीचे दिए गए विकल्पों में से सही उत्तर का चयन कीजिए:

- (1) (B), (A), (C), (D)
- (2) (A), (B), (C), (D)
- (3) (D), (B), (A), (C)
- (4) (C), (D), (B), (A)

Options :

- 92090652737. 1
- 92090652738. 2

92090652739. 3

92090652740. 4

Question Number : 86 Question Id : 92090613352 Question Type : MCQ Option Shuffling : No Is Question Mandatory : No Calculator : None Response Time : N.A Think Time : N.A Minimum Instruction Time : 0

Correct Marks : 4 Wrong Marks : 1

Which of the following are used for digital printing?

- A. RGB
- B. Serigraphy
- C. Thermography
- D. CMYK
- E. FLEX

Choose the *correct* answer from the options given below.

1. A, C, E only
2. A, D, E only
3. B, D, E only
4. C, D, E only

Options :

92090652741. 1

92090652742. 2

92090652743. 3

92090652744. 4

Question Number : 86 Question Id : 92090613352 Question Type : MCQ Option Shuffling : No Is Question Mandatory : No Calculator : None Response Time : N.A Think Time : N.A Minimum Instruction Time : 0

Correct Marks : 4 Wrong Marks : 1

डिजिटल प्रिंटिंग के लिए निम्न में से किन का उपयोग किया जाता है?

- (A) आर.जी.बी. (RGB)
- (B) सेरीग्राफी
- (C) तापलेखी
- (D) सी.एम.वाइ.के. (CMYK)
- (E) एफ.एल.ई.एक्स. (FLEX)

नीचे दिए गए विकल्पों में से सही उत्तर का चयन कीजिए:

- (1) केवल (A), (C), (E)
- (2) केवल (A), (D), (E)
- (3) केवल (B), (D), (E)
- (4) केवल (C), (D), (E)

Options :

- 92090652741. 1
- 92090652742. 2
- 92090652743. 3
- 92090652744. 4

Question Number : 87 Question Id : 92090613353 Question Type : MCQ Option Shuffling : No Is Question Mandatory : No Calculator : None Response Time : N.A Think Time : N.A Minimum Instruction Time : 0

Correct Marks : 4 Wrong Marks : 1

Out of the following which statement(s) is/are correct?

- A. Binder is used as a medium in Tempera painting.
- B. The Mural painting can also be done in Tempera medium.
- C. Turpentine oil is used in Tempera painting.
- D. Tempera painting can be placed in moisture place.
- E. Tempera painting can be made using poster colour.

Choose the *most appropriate* answer from the options given below.

- 1. A only
- 2. B, E only
- 3. E, A only
- 4. A, B, E only

Options :

- 92090652745. 1
- 92090652746. 2
- 92090652747. 3
- 92090652748. 4

Question Number : 87 Question Id : 92090613353 Question Type : MCQ Option Shuffling : No Is Question Mandatory : No Calculator : None Response Time : N.A Think Time : N.A Minimum Instruction Time : 0

Correct Marks : 4 Wrong Marks : 1

निम्नलिखित में से कौन से कथन सही हैं?

- (A) टैम्परा चित्रों में बंधकी को एक माध्यम की तरह उपयोग किया जाता है।
- (B) टैम्परा मीडियम से म्यूरल (भित्तिचित्र) पेंटिंग भी बनाई जा सकती है।
- (C) टैम्परा पेंटिंग में तारपीन के तेल का उपयोग किया जाता है।
- (D) टैम्परा चित्रों को आर्द्रता वाले स्थान पर भी रखा जा सकता है।
- (E) टैम्परा पेंटिंग को पोस्टर रंगों का उपयोग करके भी बनाया जा सकता है।

नीचे दिए गए विकल्पों में से सबसे उपयुक्त उत्तर का चयन कीजिए:

- (1) केवल (A)
- (2) केवल (B), (E)
- (3) केवल (E), (A)
- (4) केवल (A), (B), (E)

Options :

- 92090652745. 1
- 92090652746. 2
- 92090652747. 3
- 92090652748. 4

Question Number : 88 Question Id : 92090613354 Question Type : MCQ Option Shuffling : No Is Question Mandatory : No Calculator : None Response Time : N.A Think Time : N.A Minimum Instruction Time : 0

Correct Marks : 4 Wrong Marks : 1

Out of the following which of the statements are correct?

- A. Mathura was a main centre of the Kushana period.
- B. Shalbhankikas have been carved on the Vedic Pillars of Stupa.
- C. Most of Kushana period sculptures are collected in the Mathura Museum.
- D. Few Kushana period sculptures are collected in the National Gallery of Modern Art, Delhi.
- E. Buddha and Jain sculptures are created in Kushana period.

Choose the *most appropriate* answer from the options given below.

- 1. A, C only
- 2. A, B, C, E only
- 3. A, B, E only
- 4. A, C, B only

Options :

92090652749. 1

92090652750. 2

92090652751. 3

92090652752. 4

Question Number : 88 Question Id : 92090613354 Question Type : MCQ Option Shuffling : No Is Question Mandatory : No Calculator : None Response Time : N.A Think Time : N.A Minimum Instruction Time : 0

Correct Marks : 4 Wrong Marks : 1

निम्न में से कौन से कथन सही हैं?

- (A) कुशान काल का मुख्य केन्द्र मथुरा था।
- (B) स्तूप के वैदिका स्तंभों पर शलभंगिकाएँ उत्कीर्णित हैं।
- (C) कुशान काल की अधिकांश मूर्तियाँ मथुरा संग्रहालय में संग्रहित हैं।
- (D) कुशान काल की कुछ मूर्तियाँ दिल्ली के नेशनल गैलरी ऑफ मॉडर्न आर्ट में संग्रहित हैं।
- (E) बुद्ध तथा जैन मूर्तियाँ कुशान काल में बनीं।

नीचे दिए गए विकल्पों में से सबसे उपयुक्त उत्तर का चयन कीजिए:

- (1) केवल (A), (C)
- (2) केवल (A), (B), (C), (E)
- (3) केवल (A), (B), (E)
- (4) केवल (A), (C), (B)

Options :

- 92090652749. 1
- 92090652750. 2
- 92090652751. 3
- 92090652752. 4

Question Number : 89 Question Id : 92090613355 Question Type : MCQ Option Shuffling : No Is Question Mandatory : No Calculator : None Response Time : N.A Think Time : N.A Minimum Instruction Time : 0

Correct Marks : 4 Wrong Marks : 1

Out of the following which are correct statements?

- A. Henry Moore was a British sculptor.
- B. Henry Moore was 21st century sculptor.
- C. Henry Moore also did many lithograph prints.
- D. Henry Moore rejected classical and Renaissance ideas of beauty.
- E. Henry Moore died in 1950.

Choose the *correct* answer from the options given below.

- 1. A, B only
- 2. A, C, D only
- 3. A, B, C, D, E
- 4. B, E only

Out of the following which are the correct statements?

- A. Basohali, Chamba, Guler and Kangra are the centres of miniature of Pahari painting.
- B. Pahari miniature painting are based on subject of Barah-masa.
- C. The Sansar Chand promoted Kangra style of paintings.
- D. Nihal Chand was a painter of Pahari miniature painting style.
- E. Mola Ram was a painter of Kishangarh miniature style.

Choose the *most appropriate* answer from the options given below.

- 1. A, B only
- 2. A, B, C only
- 3. B, C only
- 4. A, C only

Options :

- 92090652757. 1
- 92090652758. 2
- 92090652759. 3
- 92090652760. 4

Question Number : 90 Question Id : 92090613356 Question Type : MCQ Option Shuffling : No Is Question Mandatory : No Calculator : None Response Time : N.A Think Time : N.A Minimum Instruction Time : 0

Correct Marks : 4 Wrong Marks : 1

निम्न में से कौन से कथन सही हैं?

- (A) बासोहली, चम्बा, गुलेर तथा काँगड़ा, पहाड़ी चित्रकला के लघुचित्रों के केन्द्र हैं।
- (B) पहाड़ी लघुचित्र चित्रकलाएँ बारह मासा विषय पर आधारित हैं।
- (C) संसारचन्द ने काँगड़ा शैली की चित्रकलाओं को प्रोत्साहित किया।
- (D) निहालचंद पहाड़ी लघुचित्र कला शैली का चित्रकार था।
- (E) मोलकराम किशनगढ़ लघुचित्र शैली का एक चित्रकार था।

नीचे दिए गए विकल्पों में से सही उत्तर का चयन कीजिए:

- (1) केवल (A), (B)
- (2) केवल (A), (B), (C)
- (3) केवल (B), (C)
- (4) केवल (A), (C)

Options :

- 92090652757. 1
- 92090652758. 2
- 92090652759. 3
- 92090652760. 4

Question Number : 91 Question Id : 92090613357 Question Type : MCQ Option Shuffling : No Is Question Mandatory : No Calculator : None Response Time : N.A Think Time : N.A Minimum Instruction Time : 0

Correct Marks : 4 Wrong Marks : 1

According to 'Raipal Nelson' which of the following qualities should be in a 'Commercial Logo'?

- A. Symbol, Logotype, Monogram, Pictogram
- B. Letter Head, Visiting Card, Envelope, Banner, Poster
- C. Individuality, Readable, Influential, Re-producible, Easy to recognize
- D. Solid, Creative, Proposed, Remarkable
- E. Main name, Main symbol design, Main type face, Main colour

Choose the *most appropriate* answer from the options given below.

- 1. E, D only
- 2. C only
- 3. D only
- 4. A, B only

Options :

- 92090652761. 1
- 92090652762. 2
- 92090652763. 3
- 92090652764. 4

Question Number : 91 Question Id : 92090613357 Question Type : MCQ Option Shuffling : No Is Question Mandatory : No Calculator : None Response Time : N.A Think Time : N.A Minimum Instruction Time : 0

Correct Marks : 4 Wrong Marks : 1

राजपाल नेल्सन के अनुसार किसी 'वाणिज्यिक लोगो' (logo) में निम्न गुण होने चाहिए।

- (A) प्रतीक, लोगोप्रकार, मोनोग्राम, चित्रलिपि
- (B) शीर्षनाम, विज़िटिंग कार्ड, लिफाफा, बैनर, पोस्टर
- (C) वैयक्तिकता, पढ़ने योग्य (पठनीय), प्रभावपूर्ण, पुनर्उत्पादय, अभिज्ञेय
- (D) ठोस, सर्जनात्मक, प्रस्तावित, असाधारण
- (E) मुख्य नाम, मुख्य प्रतीक का डिज़ाइन, मुख्य टाइपफेस, मुख्य रंग

नीचे दिए गए विकल्पों में से सबसे उपयुक्त उत्तर का चयन कीजिए:

- (1) केवल (E), (D)
- (2) केवल (C)
- (3) केवल (D)
- (4) केवल (A), (B)

Options :

- 92090652761. 1
- 92090652762. 2
- 92090652763. 3
- 92090652764. 4

Question Number : 92 Question Id : 92090613358 Question Type : MCQ Option Shuffling : No Is Question Mandatory : No Calculator : None Response Time : N.A Think Time : N.A Minimum Instruction Time : 0

Correct Marks : 4 Wrong Marks : 1

Match List-I with List-II :

Match the Appropriate Combination of Material and Techniques.

List-I	List-II
(A) Scraper bar machine	(I) Silk screen
(B) Cylinder based machine	(II) Aquatint
(C) Rosin	(III) Intaglio printing
(D) PVC inks	(IV) Lithographic printing

Choose the *correct* answer from the options given below :

1. (A)-(III); (B)-(II); (C)-(I); (D)-(IV)
2. (A)-(IV); (B)-(III); (C)-(II); (D)-(I)
3. (A)-(I); (B)-(II); (C)-(III); (D)-(IV)
4. (A)-(II); (B)-(IV); (C)-(I); (D)-(III)

Options :

- 92090652765. 1
- 92090652766. 2
- 92090652767. 3
- 92090652768. 4

Question Number : 92 Question Id : 92090613358 Question Type : MCQ Option Shuffling : No Is Question Mandatory : No Calculator : None Response Time : N.A Think Time : N.A Minimum Instruction Time : 0

Correct Marks : 4 Wrong Marks : 1

सूची I के साथ सूची II का मिलान कीजिए। सामग्री तथा तकनीक का उचित संयोजन बनाएँ।

सूची I तकनीक	सूची II सामग्री
(A) स्क्रैपर बार मशीन	(I) सिल्कस्क्रीन
(B) सिलिंडर आधारित मशीन	(II) एक्वाटिट
(C) रोज़िन	(III) इंटैग्लियो प्रिंटिंग
(D) पी.वी.सी. स्याही	(IV) अश्ममुद्रित (लिथो) प्रिंटिंग

नीचे दिए गए विकल्पों में से सही उत्तर का चयन कीजिए :

- (1) (A)-(III), (B)-(II), (C)-(I), (D)-(IV)
- (2) (A)-(IV), (B)-(III), (C)-(II), (D)-(I)
- (3) (A)-(I), (B)-(II), (C)-(III), (D)-(IV)
- (4) (A)-(II), (B)-(IV), (C)-(I), (D)-(III)

Options :

92090652765. 1
92090652766. 2
92090652767. 3
92090652768. 4

Question Number : 93 Question Id : 92090613359 Question Type : MCQ Option Shuffling : No Is Question Mandatory : No Calculator : None Response Time : N.A Think Time : N.A Minimum Instruction Time : 0

Correct Marks : 4 Wrong Marks : 1

Match List-I with List-II :

Match the artist with their styles given below.

List-I	List-II
(A) Giovanni Pisano	(I) Baroque
(B) Ghiberti	(II) Renaissance
(C) Houdon	(III) Medieval
(D) Algard	(IV) Neo-Classical

Choose the *correct* answer from the options given below :

1. (A)–(III); (B)–(II); (C)–(IV); (D)–(I)
2. (A)–(IV); (B)–(I); (C)–(II); (D)–(III)
3. (A)–(I); (B)–(III); (C)–(II); (D)–(IV)
4. (A)–(II); (B)–(IV); (C)–(I); (D)–(III)

Options :

92090652769. 1

92090652770. 2

92090652771. 3

92090652772. 4

Question Number : 93 Question Id : 92090613359 Question Type : MCQ Option Shuffling : No Is Question Mandatory : No Calculator : None Response Time : N.A Think Time : N.A Minimum Instruction Time : 0

Correct Marks : 4 Wrong Marks : 1

सूची I के साथ सूची II का मिलान कीजिए। कलाकार को इसकी शैली के साथ मिलान करें:

सूची I कलाकार	सूची II शैली
(A) ज्योवनी पिसानो	(I) बारोक
(B) गिबर्टी	(II) पुनर्जागरण
(C) हाउडन	(III) मध्यकालीन
(D) अलगादी	(IV) नव-शास्त्रीय

नीचे दिए गए विकल्पों में से सही उत्तर का चयन कीजिए :

- (1) (A)-(III), (B)-(II), (C)-(IV), (D)-(I)
- (2) (A)-(IV), (B)-(I), (C)-(II), (D)-(III)
- (3) (A)-(I), (B)-(III), (C)-(II), (D)-(IV)
- (4) (A)-(II), (B)-(IV), (C)-(I), (D)-(III)

Options :

92090652769. 1
92090652770. 2
92090652771. 3
92090652772. 4

**Question Number : 94 Question Id : 92090613360 Question Type : MCQ Option Shuffling : No Is
Question Mandatory : No Calculator : None Response Time : N.A Think Time : N.A Minimum
Instruction Time : 0**

Correct Marks : 4 Wrong Marks : 1

Match List-I with List-II :

Match the Artist with their Art works.

List-I	List-II
(A) Vincent Van Gogh	(I) Nude Descending a Staircase
(B) Henri Matisse	(II) Large Red Interior
(C) Marcel Duchamp	(III) The Starry Night
(D) Salvador Dali	(IV) The Persistence of Memory

Choose the *correct* answer from the options given below :

1. (A)–(I); (B)–(II); (C)–(IV); (D)–(III)
2. (A)–(II); (B)–(III); (C)–(IV); (D)–(I)
3. (A)–(III); (B)–(II); (C)–(I); (D)–(IV)
4. (A)–(III); (B)–(I); (C)–(II); (D)–(IV)

Options :

92090652773. 1

92090652774. 2

92090652775. 3

92090652776. 4

Question Number : 94 Question Id : 92090613360 Question Type : MCQ Option Shuffling : No Is Question Mandatory : No Calculator : None Response Time : N.A Think Time : N.A Minimum Instruction Time : 0

Correct Marks : 4 Wrong Marks : 1

सूची I के साथ सूची II का मिलान कीजिए। कलाकार का उसकी कलाकृति से मिलान करें।

सूची I कलाकार	सूची II कलाकृति
(A) वान गॉग	(I) न्यूड डिसेन्डिंग अ स्टेयरकेस
(B) लार्ज रॉड इंटीरियर	(II) हेनरी मैटीस
(C) मार्सल ड्यूशा	(III) द स्टारी नाइट
(D) सेल्वाडोर डाली	(IV) द परसिस्टेंस ऑफ मैमरी

नीचे दिए गए विकल्पों में से सही उत्तर का चयन कीजिए :

- (1) (A)-(I), (B)-(II), (C)-(IV), (D)-(III)
- (2) (A)-(II), (B)-(III), (C)-(IV), (D)-(I)
- (3) (A)-(III), (B)-(II), (C)-(I), (D)-(IV)
- (4) (A)-(III), (B)-(I), (C)-(II), (D)-(IV)

Options :

92090652773. 1

92090652774. 2

92090652775. 3

92090652776. 4

Question Number : 95 Question Id : 92090613361 Question Type : MCQ Option Shuffling : No Is Question Mandatory : No Calculator : None Response Time : N.A Think Time : N.A Minimum Instruction Time : 0

Correct Marks : 4 Wrong Marks : 1

Match List-I with List-II :

Match the Artist with the place he belongs to.

List-I	List-II
(A) Donatello	(I) Mantua
(B) Andrea Mantegna	(II) Florence
(C) Raphael	(III) Correggio
(D) Correggio	(IV) Rome

Choose the *correct* answer from the options given below :

1. (A)–(II); (B)–(I); (C)–(IV); (D)–(III)
2. (A)–(I); (B)–(II); (C)–(III); (D)–(IV)
3. (A)–(III); (B)–(II); (C)–(IV); (D)–(I)
4. (A)–(IV); (B)–(I); (C)–(II); (D)–(III)

Options :

92090652777. 1

92090652778. 2

92090652779. 3

92090652780. 4

Question Number : 95 Question Id : 92090613361 Question Type : MCQ Option Shuffling : No Is Question Mandatory : No Calculator : None Response Time : N.A Think Time : N.A Minimum Instruction Time : 0

Correct Marks : 4 Wrong Marks : 1

सूची I के साथ सूची II का मिलान कीजिए। कलाकार का उसके स्थान के साथ मिलान करें।

सूची I	सूची II
कलाकार	स्थान
(A) डोनाटेलो	(I) मांटुआ
(B) एन्ड्रिया मॉन्टग्ना	(II) फ्लोरेंस
(C) रफायल	(III) कोरेजियो
(D) कोरेजियो	(IV) रोम

नीचे दिए गए विकल्पों में से सही उत्तर का चयन कीजिए :

- (1) (A)-(II), (B)-(I), (C)-(IV), (D)-(III)
- (2) (A)-(I), (B)-(II), (C)-(III), (D)-(IV)
- (3) (A)-(III), (B)-(II), (C)-(IV), (D)-(I)
- (4) (A)-(IV), (B)-(I), (C)-(II), (D)-(III)

Options :

92090652777. 1

92090652778. 2

92090652779. 3

92090652780. 4

Question Number : 96 Question Id : 92090613362 Question Type : MCQ Option Shuffling : No Is Question Mandatory : No Calculator : None Response Time : N.A Think Time : N.A Minimum Instruction Time : 0

Correct Marks : 4 Wrong Marks : 1

Match List-I with List-II :

Match the following Temples with their periods.

List-I	List-II
(A) Temple of Bheetargaon	(I) Sunga period
(B) The top head of the Ashoka Lion Pillar	(II) Chalukya period
(C) Sanchi Stupa	(III) Mauryan period
(D) Papanatha Temple	(IV) Gupta period

Choose the *correct* answer from the options given below :

1. (A)–(IV); (B)–(III); (C)–(I); (D)–(II)
2. (A)–(III); (B)–(II); (C)–(IV); (D)–(I)
3. (A)–(I); (B)–(III); (C)–(IV); (D)–(II)
4. (A)–(IV); (B)–(II); (C)–(III); (D)–(I)

Options :

92090652781. 1

92090652782. 2

92090652783. 3

92090652784. 4

Question Number : 96 Question Id : 92090613362 Question Type : MCQ Option Shuffling : No Is Question Mandatory : No Calculator : None Response Time : N.A Think Time : N.A Minimum Instruction Time : 0

Correct Marks : 4 Wrong Marks : 1

सूची I के साथ सूची II का मिलान कीजिए। मंदिरों का उनके काल के साथ मिलान करें।

सूची I मंदिर	सूची II काल
(A) भीतर गाँव का मंदिर	(I) शुंग काल
(B) अशोक सिंह स्तंभ का उच्चतम शीर्ष	(II) चालुक्य काल
(C) साँची स्तूप	(III) मौर्य काल
(D) पापनाथ मंदिर	(IV) गुप्ता काल

नीचे दिए गए विकल्पों में से सही उत्तर का चयन कीजिए :

- (1) (A)-(IV), (B)-(III), (C)-(I), (D)-(II)
- (2) (A)-(III), (B)-(II), (C)-(IV), (D)-(I)
- (3) (A)-(I), (B)-(III), (C)-(IV), (D)-(II)
- (4) (A)-(IV), (B)-(II), (C)-(III), (D)-(I)

Options :

92090652781. 1
92090652782. 2
92090652783. 3
92090652784. 4

Question Number : 97 Question Id : 92090613363 Question Type : MCQ Option Shuffling : No Is Question Mandatory : No Calculator : None Response Time : N.A Think Time : N.A Minimum Instruction Time : 0

Correct Marks : 4 Wrong Marks : 1

Match List-I with List-II :

Match the following in view of elements of painting.

List-I	List-II
(A) Symmetrical	(I) Light tone
(B) Dimension of form	(II) Rest
(C) Yellow colour	(III) Triangle
(D) Horizontal line	(IV) Light shade

Choose the *correct* answer from the options given below :

1. (A)–(I); (B)–(II); (C)–(IV); (D)–(III)
2. (A)–(IV); (B)–(III); (C)–(II); (D)–(I)
3. (A)–(III); (B)–(IV); (C)–(I); (D)–(II)
4. (A)–(III); (B)–(II); (C)–(IV); (D)–(I)

Options :

92090652785. 1

92090652786. 2

92090652787. 3

92090652788. 4

Question Number : 97 Question Id : 92090613363 Question Type : MCQ Option Shuffling : No Is Question Mandatory : No Calculator : None Response Time : N.A Think Time : N.A Minimum Instruction Time : 0

Correct Marks : 4 Wrong Marks : 1

सूची I के साथ सूची II का मिलान कीजिए। पेंटिंग के अंतःदृश्य का इसके तत्वों के साथ मिलान करें।

सूची I

सूची II

- | | |
|--------------------|-----------------------|
| (A) सममित | (I) हल्की आभा |
| (B) स्वरूप का आयाम | (II) आधार |
| (C) पीला रंग | (III) त्रिकोण |
| (D) क्षैतिज रेखा | (IV) हल्का शेड (रंगत) |

नीचे दिए गए विकल्पों में से सही उत्तर का चयन कीजिए :

- (1) (A)-(I), (B)-(II), (C)-(IV), (D)-(III)
- (2) (A)-(IV), (B)-(III), (C)-(II), (D)-(I)
- (3) (A)-(III), (B)-(IV), (C)-(I), (D)-(II)
- (4) (A)-(III), (B)-(II), (C)-(IV), (D)-(I)

Options :

92090652785. 1
92090652786. 2
92090652787. 3
92090652788. 4

Question Number : 98 Question Id : 92090613364 Question Type : MCQ Option Shuffling : No Is Question Mandatory : No Calculator : None Response Time : N.A Think Time : N.A Minimum Instruction Time : 0

Correct Marks : 4 Wrong Marks : 1

Match List-I with List-II :

Match the following colour with their impacts.

List-I	List-II
(A) Green	(I) Sad
(B) Black	(II) Happy
(C) Yellow	(III) Development
(D) Violet	(IV) Royal

Choose the *correct* answer from the options given below :

1. (A)–(II); (B)–(I); (C)–(III); (D)–(IV)
2. (A)–(III); (B)–(I); (C)–(II); (D)–(IV)
3. (A)–(IV); (B)–(II); (C)–(III); (D)–(I)
4. (A)–(I); (B)–(II); (C)–(IV); (D)–(III)

Options :

- 92090652789. 1
- 92090652790. 2
- 92090652791. 3
- 92090652792. 4

Question Number : 98 Question Id : 92090613364 Question Type : MCQ Option Shuffling : No Is Question Mandatory : No Calculator : None Response Time : N.A Think Time : N.A Minimum Instruction Time : 0

Correct Marks : 4 Wrong Marks : 1

सूची I के साथ सूची II का मिलान कीजिए। रंगों का उसके प्रभाव के साथ मिलान करें।

सूची I	सूची II
रंग	प्रभाव
(A) हरा	(I) उदास
(B) काला	(II) प्रसन्न
(C) पीला	(III) विकास
(D) बैंगनी	(IV) शाही

नीचे दिए गए विकल्पों में से सही उत्तर का चयन कीजिए :

- (1) (A)-(II), (B)-(I), (C)-(III), (D)-(IV)
- (2) (A)-(III), (B)-(I), (C)-(II), (D)-(IV)
- (3) (A)-(IV), (B)-(II), (C)-(III), (D)-(I)
- (4) (A)-(I), (B)-(II), (C)-(IV), (D)-(III)

Options :

92090652789. 1

92090652790. 2

92090652791. 3

92090652792. 4

Question Number : 99 Question Id : 92090613365 Question Type : MCQ Option Shuffling : No Is Question Mandatory : No Calculator : None Response Time : N.A Think Time : N.A Minimum Instruction Time : 0

Correct Marks : 4 Wrong Marks : 1

Match List-I with List-II :

Match the following for preparing oil painting.

List-I	List-II
(A) Technique of oil colour	(I) Applying white coats on canvas
(B) Sizing	(II) Hog hair
(C) Priming	(III) Dark to light tone
(D) Oil colour brush	(IV) Stretching canvas on a wooden frame

Choose the *correct* answer from the options given below :

1. (A)-(II); (B)-(I); (C)-(IV); (D)-(III)
2. (A)-(III); (B)-(II); (C)-(I); (D)-(IV)
3. (A)-(IV); (B)-(I); (C)-(II); (D)-(III)
4. (A)-(III); (B)-(IV); (C)-(I); (D)-(III)

Options :

92090652793. 1

92090652794. 2

92090652795. 3

92090652796. 4

Question Number : 99 Question Id : 92090613365 Question Type : MCQ Option Shuffling : No Is Question Mandatory : No Calculator : None Response Time : N.A Think Time : N.A Minimum Instruction Time : 0

Correct Marks : 4 Wrong Marks : 1

सूची I के साथ सूची II का मिलान कीजिए। तैलीय चित्र बनाने के लिए तत्परता में मिलान करें।

सूची I	सूची II
(A) तैलीय रंगों की तकनीक	(I) कैनवस पर सफेद रंग करना
(B) आकार	(II) सूअर के बाल
(C) रंजक	(III) गहरे से हल्के
(D) तैलीय रंगों का ब्रुश	(IV) लकड़ी के फ्रेम पर कैनवस को फैलाकर लगाना

नीचे दिए गए विकल्पों में से सही उत्तर का चयन कीजिए :

- (1) (A)-(II), (B)-(I), (C)-(IV), (D)-(III)
- (2) (A)-(III), (B)-(II), (C)-(I), (D)-(IV)
- (3) (A)-(IV), (B)-(I), (C)-(II), (D)-(III)
- (4) (A)-(III), (B)-(IV), (C)-(I), (D)-(II)

Options :

92090652793. 1
92090652794. 2
92090652795. 3
92090652796. 4

Question Number : 100 Question Id : 92090613366 Question Type : MCQ Option Shuffling : No Is Question Mandatory : No Calculator : None Response Time : N.A Think Time : N.A Minimum Instruction Time : 0

Correct Marks : 4 Wrong Marks : 1

Match List-I with List-II :

Match the paintings with the artists.

List-I	List-II
(A) Turkish Bath	(I) Francisco de Goya
(B) The Oath of the Horatii	(II) Delacroix
(C) The Naked Maja	(III) Ingres
(D) Liberty Leading the People	(IV) David

Choose the *correct* answer from the options given below :

1. (A)–(III); (B)–(IV); (C)–(I); (D)–(II)
2. (A)–(III); (B)–(IV); (C)–(II); (D)–(I)
3. (A)–(I); (B)–(III); (C)–(II); (D)–(IV)
4. (A)–(IV); (B)–(III); (C)–(I); (D)–(II)

Options :

92090652797. 1

92090652798. 2

92090652799. 3

92090652800. 4

Question Number : 100 Question Id : 92090613366 Question Type : MCQ Option Shuffling : No Is Question Mandatory : No Calculator : None Response Time : N.A Think Time : N.A Minimum Instruction Time : 0

Correct Marks : 4 Wrong Marks : 1

सूची I के साथ सूची II का मिलान कीजिए। चित्रकला का उसके चित्रकार से मिलान करें।

सूची I चित्रकला	सूची II चित्रकार
(A) टर्किश बाथ	(I) फ्रांसिस्को डि गोया
(B) द ओथ ऑफ द होरेटी	(II) डेलाक्रोक्स
(C) द नेक्ड माजा	(III) इंग्रेस
(D) लिबर्टी लीडिंग द पीपल	(IV) डेविड

नीचे दिए गए विकल्पों में से सही उत्तर का चयन कीजिए :

- (1) (A)-(III), (B)-(IV), (C)-(I), (D)-(II)
- (2) (A)-(III), (B)-(IV), (C)-(II), (D)-(I)
- (3) (A)-(I), (B)-(III), (C)-(II), (D)-(IV)
- (4) (A)-(IV), (B)-(III), (C)-(I), (D)-(II)

Options :

92090652797. 1
92090652798. 2
92090652799. 3
92090652800. 4