

National Testing Agency

Question Paper Name :	Museology Eng 12th June 2023 Shift 3
Subject Name :	Museology Eng
Creation Date :	2023-06-12 20:46:01
Duration :	120
Total Marks :	400
Display Marks:	Yes

Museology

Group Number :	1
Group Id :	920906151
Group Maximum Duration :	0
Group Minimum Duration :	120
Show Attended Group? :	No
Edit Attended Group? :	No
Break time :	0
Group Marks :	400
Is this Group for Examiner? :	No
Examiner permission :	Cant View
Show Progress Bar? :	No

Part A

Section Id :	920906301
Section Number :	1
Section type :	Online
Mandatory or Optional :	Mandatory
Number of Questions :	21
Number of Questions to be attempted :	21
Section Marks :	100
Enable Mark as Answered Mark for Review and Clear Response :	Yes
Maximum Instruction Time :	0
Sub-Section Number :	1
Sub-Section Id :	920906487
Question Shuffling Allowed :	No
Is Section Default? :	null

Question Id : 92090615184 Question Type : COMPREHENSION Sub Question Shuffling Allowed : Yes Group Comprehension Questions : No Question Pattern Type : NonMatrix Calculator : None Response Time : N.A Think Time : N.A Minimum Instruction Time : 0

Question Numbers : (1 to 5)

Question Label : Comprehension

It depends on who is giving the rating: Centre on India's rank in press freedom index

KRISHNADAS RAJAGOPAL, NEW DELHI

Solicitor-General Tushar Mehta, appearing for the government in the Supreme Court on Tuesday, made light of India's fall to 161st position in press freedom ranking, saying "that depends on who is giving the rating. I can have my own forum and give India the first rating".

The remake was in response to the Supreme Court's observation that India has fallen to the 161st position out of 180 countries in the World Press Freedom Index published by the non-profit organization, reporters Without Borders. In 2022, India was ranked at 150.

India is ranked behind countries such as Afghanistan, Pakistan and Somalia.

"India is 161 in ranking in journalistic freedom," Justice K.M. Joseph, addressed the Union and Gujarat government, represented by Mr. Mehta during a hearing in the Billkis Bano case.

HEARING ON JULY 10

Change between Justice Joseph and Mr. Meht came while the Supreme Court ordered the publication of a notice giving the details of the case and the next date of court hearing, July 10, in two vernacular papers in Gujarat to alert those unserved among the 11 convicts who were released prematurely from their life imprisonment. They had been found guilty of the gang rape of Ms. Bano and the murder of her family members. Ms. Banop and other writ petitioners have separately challenged their remission.

The hearing, at one point, saw the Supreme Court wonder whether some of the released convicts were making a "mockery" of or even "playing" with the court by either going incognito to hamper the serving of notice of the case on them or seeking time to file counter affidavits. Previous hearings have been a no go with lawyers for the men seeking adjournment on procedural grounds.

The court decided to publish the notice in the newspapers so that the convicts would not take the plea of ignorance and the case could go ahead and be heard on merits.

Sub questions

Question Number : 1 Question Id : 92090615185 Question Type : MCQ Option Shuffling : No Is Question Mandatory : No Calculator : None Response Time : N.A Think Time : N.A Minimum Instruction Time : 0

Correct Marks : 4 Wrong Marks : 1

Synonym of the term 'incognito' is:

- | | |
|---------------|---------------|
| (1) Inclusive | (2) Inaudible |
| (3) Undutiful | (4) Concealed |

Options :

- 92090660001. 1
- 92090660002. 2
- 92090660003. 3
- 92090660004. 4

Question Number : 2 Question Id : 92090615186 Question Type : MCQ Option Shuffling : No Is Question Mandatory : No Calculator : None Response Time : N.A Think Time : N.A Minimum Instruction Time : 0

Correct Marks : 4 Wrong Marks : 1

'Made light of' means:

- (1) Removed darkness
- (2) Put something on fire
- (3) To act as if something is serious especially when it is not serious
- (4) Play down

Options :

- 92090660005. 1
- 92090660006. 2
- 92090660007. 3
- 92090660008. 4

Question Number : 3 Question Id : 92090615187 Question Type : MCQ Option Shuffling : No Is Question Mandatory : No Calculator : None Response Time : N.A Think Time : N.A Minimum Instruction Time : 0

Correct Marks : 4 Wrong Marks : 1

The antonym of 'remission' is:

- (A) Exoneration
- (B) Censure
- (C) Reprieve
- (D) Increase

Choose the correct answer from the options given below :

- (1) (A) and (B)
- (2) (B) and (C)
- (3) (B) and (D)
- (4) (D) only

Options :

- 92090660009. 1
- 92090660010. 2
- 92090660011. 3
- 92090660012. 4

Question Number : 4 Question Id : 92090615188 Question Type : MCQ Option Shuffling : No Is Question Mandatory : No Calculator : None Response Time : N.A Think Time : N.A Minimum Instruction Time : 0

Correct Marks : 4 Wrong Marks : 1

'Going incognito' means:

- (A) Using false name
- (B) Wearing a disguise
- (C) To be recognised
- (D) Not to be identified.

Choose the correct answer from the options given below :

- (1) (A) and (D)
- (2) (A), (B) and (C)
- (3) (A), (B), and (D)
- (4) (A), (B), (C) and (D)

Options :

- 92090660013. 1
- 92090660014. 2
- 92090660015. 3
- 92090660016. 4

Question Number : 5 Question Id : 92090615189 Question Type : MCQ Option Shuffling : No Is Question Mandatory : No Calculator : None Response Time : N.A Think Time : N.A Minimum Instruction Time : 0

Correct Marks : 4 Wrong Marks : 1

Why Justice K.M. Josheph addressed Gujurat Government during the hearing?

- (1) Gujurat is the reason behind our sharp fall in press freedom ranking
- (2) India is ranked 161, behind nations such as Pakistan, Afganistan etc.
- (3) Bilk is Bano case was iniated and registered in Gujurat.
- (4) The murder convicts were not arrested by the then Gujurat government.

Options :

92090660017. 1

92090660018. 2

92090660019. 3

92090660020. 4

Question Id : 92090615184 Question Type : COMPREHENSION Sub Question Shuffling Allowed : Yes Group Comprehension Questions : No Question Pattern Type : NonMatrix Calculator : None Response Time : N.A Think Time : N.A Minimum Instruction Time : 0

Question Numbers : (1 to 5)

Question Label : Comprehension

It depends on who is giving the rating: Centre on India's rank in press freedom index

KRISHNADAS RAJAGOPAL, NEW DELHI

Solicitor-General Tushar Mehta, appearing for the government in the Supreme Court on Tuesday, made light of India's fall to 161st position in press freedom ranking, saying "that depends on who is giving the rating. I can have my own forum and give India the first rating".

The remake was in response to the Supreme Court's observation that India has fallen to the 161st position out of 180 countries in the World Press Freedom Index published by the non-profit organization, reporters Without Borders. In 2022, India was ranked at 150.

India is ranked behind countries such as Afghanistan, Pakistan and Somalia.

"India is 161 in ranking in journalistic freedom," Justice K.M. Joseph, addressed the Union and Gujarat government, represented by Mr. Mehta during a hearing in the Billkis Bano case.

HEARING ON JULY 10

Change between Justice Joseph and Mr. Meht came while the Supreme Court ordered the publication of a notice giving the details of the case and the next date of court hearing, July 10, in two vernacular papers in Gujarat to alert those unserved among the 11 convicts who were released prematurely from their life imprisonment. They had been found guilty of the gang rape of Ms. Bano and the murder of her family members. Ms. Banop and other writ petitioners have separately challenged their remission.

The hearing, at one point, saw the Supreme Court wonder whether some of the released convicts were making a "mockery" of or even "playing" with the court by either going incognito to hamper the serving of notice of the case on them or seeking time to file counter affidavits. Previous hearings have been a no go with lawyers for the men seeking adjournment on procedural grounds.

The court decided to publish the notice in the newspapers so that the convicts would not take the plea of ignorance and the case could go ahead and be heard on merits.

Sub questions

Question Number : 1 Question Id : 92090615185 Question Type : MCQ Option Shuffling : No Is Question Mandatory : No Calculator : None Response Time : N.A Think Time : N.A Minimum Instruction Time : 0

Correct Marks : 4 Wrong Marks : 1

Synonym of the term 'incognito' is:

- | | |
|---------------|---------------|
| (1) Inclusive | (2) Inaudible |
| (3) Undutiful | (4) Concealed |

Options :

- 92090660001. 1
- 92090660002. 2
- 92090660003. 3
- 92090660004. 4

Question Number : 2 Question Id : 92090615186 Question Type : MCQ Option Shuffling : No Is Question Mandatory : No Calculator : None Response Time : N.A Think Time : N.A Minimum Instruction Time : 0

Correct Marks : 4 Wrong Marks : 1

‘Made light of’ means:

- (1) Removed darkness
- (2) Put something on fire
- (3) To act as if something is serious especially when it is not serious
- (4) Play down

Options :

- 92090660005. 1
- 92090660006. 2
- 92090660007. 3
- 92090660008. 4

Question Number : 3 Question Id : 92090615187 Question Type : MCQ Option Shuffling : No Is Question Mandatory : No Calculator : None Response Time : N.A Think Time : N.A Minimum Instruction Time : 0

Correct Marks : 4 Wrong Marks : 1

The antonym of ‘remission’ is:

- (A) Exoneration
- (B) Censure
- (C) Reprieve
- (D) Increase

Choose the correct answer from the options given below :

- (1) (A) and (B)
- (2) (B) and (C)
- (3) (B) and (D)
- (4) (D) only

Options :

- 92090660009. 1

92090660010. 2

92090660011. 3

92090660012. 4

Question Number : 4 Question Id : 92090615188 Question Type : MCQ Option Shuffling : No Is Question Mandatory : No Calculator : None Response Time : N.A Think Time : N.A Minimum Instruction Time : 0

Correct Marks : 4 Wrong Marks : 1

'Going incognito' means:

- (A) Using false name
- (B) Wearing a disguise
- (C) To be recognised
- (D) Not to be identified.

Choose the correct answer from the options given below :

- (1) (A) and (D)
- (2) (A), (B) and (C)
- (3) (A), (B), and (D)
- (4) (A), (B), (C) and (D)

Options :

92090660013. 1

92090660014. 2

92090660015. 3

92090660016. 4

Question Number : 5 Question Id : 92090615189 Question Type : MCQ Option Shuffling : No Is Question Mandatory : No Calculator : None Response Time : N.A Think Time : N.A Minimum Instruction Time : 0

Correct Marks : 4 Wrong Marks : 1

Why Justice K.M. Josheph addressed Gujurat Government during the hearing?

- (1) Gujurat is the reason behind our sharp fall in press freedom ranking
- (2) India is ranked 161, behind nations such as Pakistan, Afganistan etc.
- (3) Bilk is Bano case was initiated and registered in Gujurat.
- (4) The murder convicts were not arrested by the then Gujurat government.

Options :

92090660017. 1

92090660018. 2

92090660019. 3

92090660020. 4

Sub-Section Number : 2
Sub-Section Id : 920906488
Question Shuffling Allowed : Yes
Is Section Default? : null

Question Number : 6 Question Id : 92090615190 Question Type : MCQ Option Shuffling : No Is Question Mandatory : No Calculator : None Response Time : N.A Think Time : N.A Minimum Instruction Time : 0

Correct Marks : 4 Wrong Marks : 1

The synonym of the word 'VINDICTIVE' is _____.

- | | |
|-------------------|---------------|
| (1) Revengeful | (2) Bigoted |
| (3) Demonstrative | (4) Strategic |

Options :

92090660021. 1
92090660022. 2
92090660023. 3
92090660024. 4

Question Number : 6 Question Id : 92090615190 Question Type : MCQ Option Shuffling : No Is Question Mandatory : No Calculator : None Response Time : N.A Think Time : N.A Minimum Instruction Time : 0

Correct Marks : 4 Wrong Marks : 1

The synonym of the word 'VINDICTIVE' is _____.

- | | |
|-------------------|---------------|
| (1) Revengeful | (2) Bigoted |
| (3) Demonstrative | (4) Strategic |

Options :

92090660021. 1
92090660022. 2
92090660023. 3
92090660024. 4

Question Number : 7 Question Id : 92090615191 Question Type : MCQ Option Shuffling : No Is Question Mandatory : No Calculator : None Response Time : N.A Think Time : N.A Minimum Instruction Time : 0

Correct Marks : 4 Wrong Marks : 1

Fill in the blanks with appropriate prepositions from the options given below:

The e-cycle project _____ the city is slowly finding takers most of them college students who would earlier depend _____ cabs and bike taxis _____ commuting.

(1) in, upon, to

(2) in, on, for

(3) in, off, for

(4) on, with, on

Options :

92090660025. 1

92090660026. 2

92090660027. 3

92090660028. 4

Question Number : 7 Question Id : 92090615191 Question Type : MCQ Option Shuffling : No Is Question Mandatory : No Calculator : None Response Time : N.A Think Time : N.A Minimum Instruction Time : 0

Correct Marks : 4 Wrong Marks : 1

Fill in the blanks with appropriate prepositions from the options given below:

The e-cycle project _____ the city is slowly finding takers most of them college students who would earlier depend _____ cabs and bike taxis _____ commuting.

(1) in, upon, to

(2) in, on, for

(3) in, off, for

(4) on, with, on

Options :

92090660025. 1

92090660026. 2

92090660027. 3

92090660028. 4

Question Number : 8 Question Id : 92090615192 Question Type : MCQ Option Shuffling : No Is Question Mandatory : No Calculator : None Response Time : N.A Think Time : N.A Minimum Instruction Time : 0

Correct Marks : 4 Wrong Marks : 1

Choose the meaning of the term "Bon voyage"

- (A) Used to express good wishes to someone about to set off on a journey.
- (B) Good morning.
- (C) Long Journey.
- (D) Good night.

Options :

- 92090660029. 1
- 92090660030. 2
- 92090660031. 3
- 92090660032. 4

Question Number : 8 Question Id : 92090615192 Question Type : MCQ Option Shuffling : No Is Question Mandatory : No Calculator : None Response Time : N.A Think Time : N.A Minimum Instruction Time : 0

Correct Marks : 4 Wrong Marks : 1

Choose the meaning of the term "Bon voyage"

- (A) Used to express good wishes to someone about to set off on a journey.
- (B) Good morning.
- (C) Long Journey.
- (D) Good night.

Options :

- 92090660029. 1
- 92090660030. 2
- 92090660031. 3
- 92090660032. 4

Question Number : 9 Question Id : 92090615193 Question Type : MCQ Option Shuffling : No Is Question Mandatory : No Calculator : None Response Time : N.A Think Time : N.A Minimum Instruction Time : 0

Correct Marks : 4 Wrong Marks : 1

The correctly spelt word from the following option:-

- (1) BITUMENEZE
- (2) BIBEMINIZE
- (3) BETUMINEZE
- (4) BITUMINIZE

Options :

- 92090660033. 1
- 92090660034. 2
- 92090660035. 3
- 92090660036. 4

Question Number : 9 Question Id : 92090615193 Question Type : MCQ Option Shuffling : No Is Question Mandatory : No Calculator : None Response Time : N.A Think Time : N.A Minimum Instruction Time : 0

Correct Marks : 4 Wrong Marks : 1

The correctly spelt word from the following option:-

- | | |
|----------------|----------------|
| (1) BITUMENEZE | (2) BIBEMINIZE |
| (3) BETUMINEZE | (4) BITUMINIZE |

Options :

- 92090660033. 1
- 92090660034. 2
- 92090660035. 3
- 92090660036. 4

Question Number : 10 Question Id : 92090615194 Question Type : MCQ Option Shuffling : No Is Question Mandatory : No Calculator : None Response Time : N.A Think Time : N.A Minimum Instruction Time : 0

Correct Marks : 4 Wrong Marks : 1

Fear of open spaces is called:

- | | |
|-----------------|-----------------|
| (1) Agoraphobia | (2) Anachronism |
| (3) Anecdote | (4) Apiary |

Options :

- 92090660037. 1
- 92090660038. 2
- 92090660039. 3
- 92090660040. 4

Question Number : 10 Question Id : 92090615194 Question Type : MCQ Option Shuffling : No Is Question Mandatory : No Calculator : None Response Time : N.A Think Time : N.A Minimum Instruction Time : 0

Correct Marks : 4 Wrong Marks : 1

Fear of open spaces is called:

- | | |
|-----------------|-----------------|
| (1) Agoraphobia | (2) Anachronism |
| (3) Anecdote | (4) Apiary |

Options :

- 92090660037. 1
- 92090660038. 2
- 92090660039. 3
- 92090660040. 4

Question Number : 11 Question Id : 92090615195 Question Type : MCQ Option Shuffling : No Is Question Mandatory : No Calculator : None Response Time : N.A Think Time : N.A Minimum Instruction Time : 0

Correct Marks : 4 Wrong Marks : 1

A boat goes 12 km in one hour along the stream and 6 km in one hour against the stream. Th speed of the stream in km/h is:

- (1) 2 (2) 3
(3) 4 (4) 5

Options :

92090660041. 1
92090660042. 2
92090660043. 3
92090660044. 4

Question Number : 11 Question Id : 92090615195 Question Type : MCQ Option Shuffling : No Is Question Mandatory : No Calculator : None Response Time : N.A Think Time : N.A Minimum Instruction Time : 0

Correct Marks : 4 Wrong Marks : 1

A boat goes 12 km in one hour along the stream and 6 km in one hour against the stream. Th speed of the stream in km/h is:

- (1) 2 (2) 3
(3) 4 (4) 5

Options :

92090660041. 1
92090660042. 2
92090660043. 3
92090660044. 4

Question Number : 12 Question Id : 92090615196 Question Type : MCQ Option Shuffling : No Is Question Mandatory : No Calculator : None Response Time : N.A Think Time : N.A Minimum Instruction Time : 0

Correct Marks : 4 Wrong Marks : 1

For $x = 3$, find the value of $x^5 + x^4 - x^3 - x^2 + x - 1$.

- (1) 280 (2) 270
(3) 290 (4) 300

Options :

92090660045. 1
92090660046. 2

92090660047. 3

92090660048. 4

Question Number : 12 Question Id : 92090615196 Question Type : MCQ Option Shuffling : No Is Question Mandatory : No Calculator : None Response Time : N.A Think Time : N.A Minimum Instruction Time : 0

Correct Marks : 4 Wrong Marks : 1

For $x = 3$, find the value of $x^5 + x^4 - x^3 - x^2 + x - 1$.

- | | |
|---------|---------|
| (1) 280 | (2) 270 |
| (3) 290 | (4) 300 |

Options :

92090660045. 1

92090660046. 2

92090660047. 3

92090660048. 4

Question Number : 13 Question Id : 92090615197 Question Type : MCQ Option Shuffling : No Is Question Mandatory : No Calculator : None Response Time : N.A Think Time : N.A Minimum Instruction Time : 0

Correct Marks : 4 Wrong Marks : 1

The sides of three solid metallic cubes are 30cm, 40cm and 50cm respectively. Find the side of the new cube formed by melting the three cubes (in cm)

- | | |
|--------|---------|
| (1) 60 | (2) 120 |
| (3) 90 | (4) 80 |

Options :

92090660049. 1

92090660050. 2

92090660051. 3

92090660052. 4

Question Number : 13 Question Id : 92090615197 Question Type : MCQ Option Shuffling : No Is Question Mandatory : No Calculator : None Response Time : N.A Think Time : N.A Minimum Instruction Time : 0

Correct Marks : 4 Wrong Marks : 1

The sides of three solid metallic cubes are 30cm, 40cm and 50cm respectively. Find the side of the new cube formed by melting the three cubes (in cm)

- | | |
|--------|---------|
| (1) 60 | (2) 120 |
| (3) 90 | (4) 80 |

Options :

- 92090660049. 1
- 92090660050. 2
- 92090660051. 3
- 92090660052. 4

Question Number : 14 Question Id : 92090615198 Question Type : MCQ Option Shuffling : No Is Question Mandatory : No Calculator : None Response Time : N.A Think Time : N.A Minimum Instruction Time : 0

Correct Marks : 4 Wrong Marks : 1

Ankit owes ₹ 42,580 on his credit cards, but he could pay only ₹ 12,580. If the annual rate of compound interest is 10%, then how much will he owe after 4 years?

- | | |
|----------------|----------------|
| (1) Rs. 42,580 | (2) Rs. 43,000 |
| (3) Rs. 43,923 | (4) Rs. 44,228 |

Options :

- 92090660053. 1
- 92090660054. 2
- 92090660055. 3
- 92090660056. 4

Question Number : 14 Question Id : 92090615198 Question Type : MCQ Option Shuffling : No Is Question Mandatory : No Calculator : None Response Time : N.A Think Time : N.A Minimum Instruction Time : 0

Correct Marks : 4 Wrong Marks : 1

Ankit owes ₹ 42,580 on his credit cards, but he could pay only ₹ 12,580. If the annual rate of compound interest is 10%, then how much will he owe after 4 years?

- | | |
|----------------|----------------|
| (1) Rs. 42,580 | (2) Rs. 43,000 |
| (3) Rs. 43,923 | (4) Rs. 44,228 |

Options :

- 92090660053. 1
- 92090660054. 2
- 92090660055. 3
- 92090660056. 4

Question Number : 15 Question Id : 92090615199 Question Type : MCQ Option Shuffling : No Is Question Mandatory : No Calculator : None Response Time : N.A Think Time : N.A Minimum Instruction Time : 0

Correct Marks : 4 Wrong Marks : 1

The percentage of loss when an article is sold at Rs. 50 is the same as that of the profit when it is sold at Rs. 70. Percentage of profit or loss on the article is_____.

- (1) 10% (2) 12%
(3) $16\frac{2}{3}\%$ (4) $8\frac{1}{3}\%$

Options :

92090660057. 1
92090660058. 2
92090660059. 3
92090660060. 4

Question Number : 15 Question Id : 92090615199 Question Type : MCQ Option Shuffling : No Is Question Mandatory : No Calculator : None Response Time : N.A Think Time : N.A Minimum Instruction Time : 0

Correct Marks : 4 Wrong Marks : 1

The percentage of loss when an article is sold at Rs. 50 is the same as that of the profit when it is sold at Rs. 70. Percentage of profit or loss on the article is_____.

- (1) 10% (2) 12%
(3) $16\frac{2}{3}\%$ (4) $8\frac{1}{3}\%$

Options :

92090660057. 1
92090660058. 2
92090660059. 3
92090660060. 4

Question Number : 16 Question Id : 92090615200 Question Type : MCQ Option Shuffling : No Is Question Mandatory : No Calculator : None Response Time : N.A Think Time : N.A Minimum Instruction Time : 0

Correct Marks : 4 Wrong Marks : 1

Which number comes next in the following series?

0, 5, 22, 57, 116, _____.

- (1) 216 (2) 205
(3) 207 (4) 192

Options :

92090660061. 1
92090660062. 2
92090660063. 3
92090660064. 4

Question Number : 16 Question Id : 92090615200 Question Type : MCQ Option Shuffling : No Is Question Mandatory : No Calculator : None Response Time : N.A Think Time : N.A Minimum Instruction Time : 0

Correct Marks : 4 Wrong Marks : 1

Which number comes next in the following series?

0, 5, 22, 57, 116, _____.

- (1) 216 (2) 205
(3) 207 (4) 192

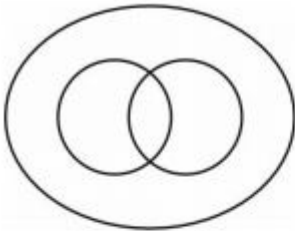
Options :

92090660061. 1
92090660062. 2
92090660063. 3
92090660064. 4

Question Number : 17 Question Id : 92090615201 Question Type : MCQ Option Shuffling : No Is Question Mandatory : No Calculator : None Response Time : N.A Think Time : N.A Minimum Instruction Time : 0

Correct Marks : 4 Wrong Marks : 1

Which of the following group best represented by the figure below:



- (A) Men, Citizions, Educated
(B) Professionals, Doctors, Lawyers
(C) Diseases, Leprosy, Scurvy
(D) Earth, mountain, Forests.
(E) Atmosphere, Water, Hydrogen.

Choose the correct answer from the options given below :

- (1) (A) and(B) only
(2) (B) and (D) only
(3) (A) and (D) only
(4) (C) and (E) only

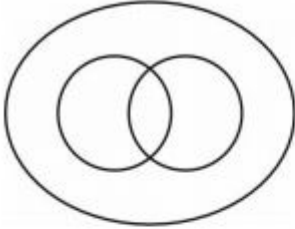
Options :

- 92090660065. 1
- 92090660066. 2
- 92090660067. 3
- 92090660068. 4

Question Number : 17 Question Id : 92090615201 Question Type : MCQ Option Shuffling : No Is Question Mandatory : No Calculator : None Response Time : N.A Think Time : N.A Minimum Instruction Time : 0

Correct Marks : 4 Wrong Marks : 1

Which of the following group best represented by the figure below:



- (A) Men, Citizations, Educated
- (B) Professionals, Doctors, Lawyers
- (C) Diseases, Leprosy, Scurvy
- (D) Earth, mountain, Forests.
- (E) Atmosphere, Water, Hydrogen.

Choose the correct answer from the options given below :

- (1) (A) and(B) only
- (2) (B) and (D) only
- (3) (A) and (D) only
- (4) (C) and (E) only

Options :

- 92090660065. 1
- 92090660066. 2
- 92090660067. 3
- 92090660068. 4

Question Number : 18 Question Id : 92090615202 Question Type : MCQ Option Shuffling : No Is Question Mandatory : No Calculator : None Response Time : N.A Think Time : N.A Minimum Instruction Time : 0

Correct Marks : 4 Wrong Marks : 1

Identify the correct water – image of the fig. (X)

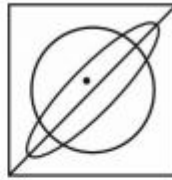
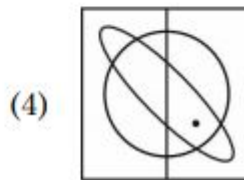
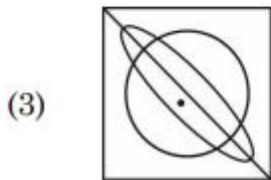
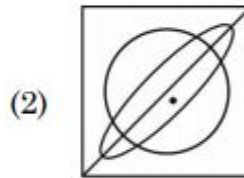
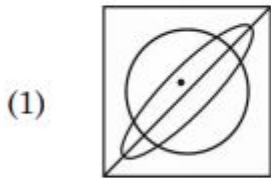


Fig. (X)



Options :

92090660069. 1

92090660070. 2

92090660071. 3

92090660072. 4

Question Number : 18 Question Id : 92090615202 Question Type : MCQ Option Shuffling : No Is Question Mandatory : No Calculator : None Response Time : N.A Think Time : N.A Minimum Instruction Time : 0

Correct Marks : 4 Wrong Marks : 1

Identify the correct water – image of the fig. (X)

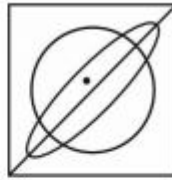
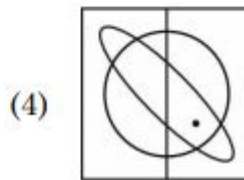
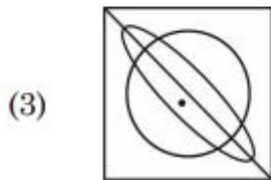
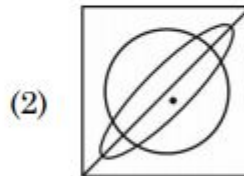
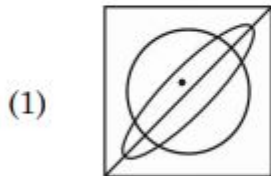


Fig. (X)



Options :

- 92090660069. 1
- 92090660070. 2
- 92090660071. 3
- 92090660072. 4

Question Number : 19 Question Id : 92090615203 Question Type : MCQ Option Shuffling : No Is Question Mandatory : No Calculator : None Response Time : N.A Think Time : N.A Minimum Instruction Time : 0

Correct Marks : 4 Wrong Marks : 1

If in a certain language, GRASP is codes as BMVNK, which word could be coded as CRANE?

- (1) FUDQH
- (2) GVERI
- (3) HWFSJ
- (4) BQZMD

Options :

- 92090660073. 1
- 92090660074. 2
- 92090660075. 3
- 92090660076. 4

Question Number : 19 Question Id : 92090615203 Question Type : MCQ Option Shuffling : No Is Question Mandatory : No Calculator : None Response Time : N.A Think Time : N.A Minimum Instruction Time : 0

Correct Marks : 4 Wrong Marks : 1

If in a certain language, GRASP is codes as BMVNK, which word could be coded as CRANE?

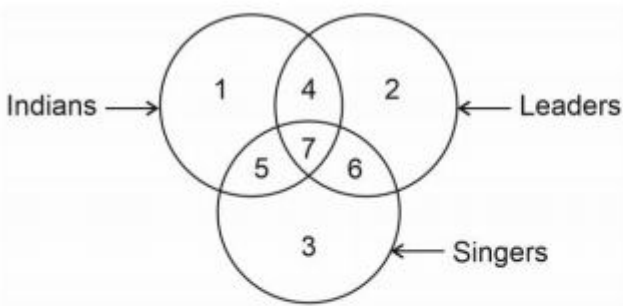
- (1) FUDQH (2) GVERI
(3) HWFSJ (4) BQZMD

Options :

92090660073. 1
92090660074. 2
92090660075. 3
92090660076. 4

Question Number : 20 Question Id : 92090615204 Question Type : MCQ Option Shuffling : No Is Question Mandatory : No Calculator : None Response Time : N.A Think Time : N.A Minimum Instruction Time : 0

Correct Marks : 4 Wrong Marks : 1



Which region represents leaders who are neither singers nor Indians?

- (1) 3 (2) 6
(3) 2 (4) 4

Options :

92090660077. 1
92090660078. 2
92090660079. 3
92090660080. 4

Question Number : 20 Question Id : 92090615204 Question Type : MCQ Option Shuffling : No Is Question Mandatory : No Calculator : None Response Time : N.A Think Time : N.A Minimum Instruction Time : 0

Correct Marks : 4 Wrong Marks : 1

Options :

- 92090660081. 1
- 92090660082. 2
- 92090660083. 3
- 92090660084. 4

Question Number : 22 Question Id : 92090615206 Question Type : MCQ Option Shuffling : No Is Question Mandatory : No Calculator : None Response Time : N.A Think Time : N.A Minimum Instruction Time : 0

Correct Marks : 4 Wrong Marks : 1

Pandit Shiv Kumar Sharma who passed away in May 2022 was a maestro of:

- (1) Flute
- (2) Santoor
- (3) Tabla
- (4) EsraJ

Options :

- 92090660085. 1
- 92090660086. 2
- 92090660087. 3
- 92090660088. 4

Question Number : 22 Question Id : 92090615206 Question Type : MCQ Option Shuffling : No Is Question Mandatory : No Calculator : None Response Time : N.A Think Time : N.A Minimum Instruction Time : 0

Correct Marks : 4 Wrong Marks : 1

Pandit Shiv Kumar Sharma who passed away in May 2022 was a maestro of:

- (1) Flute
- (2) Santoor
- (3) Tabla
- (4) EsraJ

Options :

- 92090660085. 1
- 92090660086. 2
- 92090660087. 3
- 92090660088. 4

Question Number : 23 Question Id : 92090615207 Question Type : MCQ Option Shuffling : No Is Question Mandatory : No Calculator : None Response Time : N.A Think Time : N.A Minimum Instruction Time : 0

Correct Marks : 4 Wrong Marks : 1

Largest Gas pipe line in India is operated by which company?

- (1) Reliance Petroleum
- (2) GAIL
- (3) ONGC
- (4) Bharat Petroleum

Options :

- 92090660089. 1
- 92090660090. 2
- 92090660091. 3
- 92090660092. 4

Question Number : 23 Question Id : 92090615207 Question Type : MCQ Option Shuffling : No Is Question Mandatory : No Calculator : None Response Time : N.A Think Time : N.A Minimum Instruction Time : 0

Correct Marks : 4 Wrong Marks : 1

Largest Gas pipe line in India is operated by which company?

- (1) Reliance Petroleum
- (2) GAIL
- (3) ONGC
- (4) Bharat Petroleum

Options :

- 92090660089. 1
- 92090660090. 2
- 92090660091. 3
- 92090660092. 4

Question Number : 24 Question Id : 92090615208 Question Type : MCQ Option Shuffling : No Is Question Mandatory : No Calculator : None Response Time : N.A Think Time : N.A Minimum Instruction Time : 0

Correct Marks : 4 Wrong Marks : 1

Which of the following can be recycled 100%?

- (1) Food waste
- (2) Glass bottles
- (3) Alluminium cans
- (4) Card board

Options :

- 92090660093. 1
- 92090660094. 2
- 92090660095. 3
- 92090660096. 4

Question Number : 24 Question Id : 92090615208 Question Type : MCQ Option Shuffling : No Is Question Mandatory : No Calculator : None Response Time : N.A Think Time : N.A Minimum Instruction Time : 0

Correct Marks : 4 Wrong Marks : 1

Which of the following can be recycled 100%?

- | | |
|---------------------|-------------------|
| (1) Food waste | (2) Glass bottles |
| (3) Alluminium cans | (4) Card board |

Options :

- 92090660093. 1
- 92090660094. 2
- 92090660095. 3
- 92090660096. 4

Question Number : 25 Question Id : 92090615209 Question Type : MCQ Option Shuffling : No Is Question Mandatory : No Calculator : None Response Time : N.A Think Time : N.A Minimum Instruction Time : 0

Correct Marks : 4 Wrong Marks : 1

Given below are two statements :

Statement I : "The Restoration of life of Lok Sabha and State Assemblies to 5year" is passed in the 52nd Amendment of constitution of India

Statement II : 99th Amendment of constitution of India provides for formation of National Judicial Appointments Commission".

In the light of the above statements, choose the correct answer from the options given below :

- (1) Both Statement I and Statement II are correct
- (2) Both Statement I and Statement II are incorrect
- (3) Statement I is correct but Statement II is incorrect
- (4) Statement I is incorrect but Statement II is correct

Options :

- 92090660097. 1
- 92090660098. 2
- 92090660099. 3
- 92090660100. 4

Question Number : 25 Question Id : 92090615209 Question Type : MCQ Option Shuffling : No Is Question Mandatory : No Calculator : None Response Time : N.A Think Time : N.A Minimum Instruction Time : 0

Correct Marks : 4 Wrong Marks : 1

Given below are two statements :

Statement I : "The Restoration of life of Lok Sabha and State Assemblies to 5year" is passed in the 52nd Amendment of constitution of India

Statement II : 99th Amendment of constitution of India provides for formation of National Judicial Appointments Commission".

In the light of the above statements, choose the correct answer from the options given below :

- (1) Both Statement I and Statement II are correct
- (2) Both Statement I and Statement II are incorrect
- (3) Statement I is correct but Statement II is incorrect
- (4) Statement I is incorrect but Statement II is correct

Options :

92090660097. 1

92090660098. 2

92090660099. 3

92090660100. 4

Part B: Museology

Section Id :	920906302
Section Number :	2
Section type :	Online
Mandatory or Optional :	Mandatory
Number of Questions :	75
Number of Questions to be attempted :	75
Section Marks :	300
Enable Mark as Answered Mark for Review and Clear Response :	Yes
Maximum Instruction Time :	0
Sub-Section Number :	1
Sub-Section Id :	920906489
Question Shuffling Allowed :	Yes
Is Section Default? :	null

Question Number : 26 Question Id : 92090615210 Question Type : MCQ Option Shuffling : No Is Question Mandatory : No Calculator : None Response Time : N.A Think Time : N.A Minimum Instruction Time : 0

Correct Marks : 4 Wrong Marks : 1

The Buddha of Bamiyan were 6th century monumental statues carved into the side of a cliff in the Bamiyan Valley in-

- | | |
|-----------------|---------------|
| (1) Iran | (2) Sri Lanka |
| (3) Afghanistan | (4) China |

Options :

- 92090660101. 1
- 92090660102. 2
- 92090660103. 3
- 92090660104. 4

Question Number : 26 Question Id : 92090615210 Question Type : MCQ Option Shuffling : No Is Question Mandatory : No Calculator : None Response Time : N.A Think Time : N.A Minimum Instruction Time : 0

Correct Marks : 4 Wrong Marks : 1

बामियान में बुद्ध की 6ठी शताब्दी की स्मारक मूर्तियाँ थीं जिन्हें बामियान घाटी के पहाड़ों पर किस देश में बनाया गया था?

- | | |
|-----------------|--------------|
| (1) इरान | (2) श्रीलंका |
| (3) अफगानिस्तान | (4) चीन |

Options :

- 92090660101. 1
- 92090660102. 2
- 92090660103. 3
- 92090660104. 4

Question Number : 27 Question Id : 92090615211 Question Type : MCQ Option Shuffling : No Is Question Mandatory : No Calculator : None Response Time : N.A Think Time : N.A Minimum Instruction Time : 0

Correct Marks : 4 Wrong Marks : 1

The ancient Buddhist University is located at-

- | | |
|------------|-------------------|
| (1) Bihar | (2) Odisha |
| (3) Punjab | (4) Uttar Pradesh |

Options :

- 92090660105. 1
- 92090660106. 2
- 92090660107. 3
- 92090660108. 4

Question Number : 27 Question Id : 92090615211 Question Type : MCQ Option Shuffling : No Is Question Mandatory : No Calculator : None Response Time : N.A Think Time : N.A Minimum Instruction Time : 0

Correct Marks : 4 Wrong Marks : 1

प्राचीन बौद्ध विश्वविद्यालय कहां अवस्थित है?

- | | |
|-----------|------------------|
| (1) बिहार | (2) ओडिशा |
| (3) पंजाब | (4) उत्तर प्रदेश |

Options :

- 92090660105. 1
- 92090660106. 2
- 92090660107. 3
- 92090660108. 4

Question Number : 28 Question Id : 92090615212 Question Type : MCQ Option Shuffling : No Is Question Mandatory : No Calculator : None Response Time : N.A Think Time : N.A Minimum Instruction Time : 0

Correct Marks : 4 Wrong Marks : 1

Terracotta means:

- | | |
|----------------|------------|
| (1) Mud | (2) Fossil |
| (3) Baked clay | (4) Sand |

Options :

- 92090660109. 1
- 92090660110. 2
- 92090660111. 3
- 92090660112. 4

Question Number : 28 Question Id : 92090615212 Question Type : MCQ Option Shuffling : No Is Question Mandatory : No Calculator : None Response Time : N.A Think Time : N.A Minimum Instruction Time : 0

Correct Marks : 4 Wrong Marks : 1

टेराकोटा का अर्थ है-

- | | |
|--------------------|-------------|
| (1) कीचड़ | (2) जीवाश्म |
| (3) पकाई गई मिट्टी | (4) बालू |

Options :

- 92090660109. 1
- 92090660110. 2
- 92090660111. 3

92090660112. 4

Question Number : 29 Question Id : 92090615213 Question Type : MCQ Option Shuffling : No Is Question Mandatory : No Calculator : None Response Time : N.A Think Time : N.A Minimum Instruction Time : 0

Correct Marks : 4 Wrong Marks : 1

The term sculpture is derived from the Latin word 'Sculptura'; it means-

- | | |
|--------------------------|---------------------------------|
| (1) To build stone house | (2) To carve a stone |
| (3) To make a pottery | (4) To draw a painting on stone |

Options :

- 92090660113. 1
- 92090660114. 2
- 92090660115. 3
- 92090660116. 4

Question Number : 29 Question Id : 92090615213 Question Type : MCQ Option Shuffling : No Is Question Mandatory : No Calculator : None Response Time : N.A Think Time : N.A Minimum Instruction Time : 0

Correct Marks : 4 Wrong Marks : 1

'स्कल्पचर' शब्द की व्युत्पत्ति लैटिन शब्द 'स्कल्पतुरा' से हुई है; इसका अर्थ है -

- | | |
|-----------------------|-----------------------------|
| (1) पत्थर का घर बनाना | (2) पत्थर का उत्कीर्णन करना |
| (3) भांडकर्म | (4) पत्थर पर चित्र बनाना |

Options :

- 92090660113. 1
- 92090660114. 2
- 92090660115. 3
- 92090660116. 4

Question Number : 30 Question Id : 92090615214 Question Type : MCQ Option Shuffling : No Is Question Mandatory : No Calculator : None Response Time : N.A Think Time : N.A Minimum Instruction Time : 0

Correct Marks : 4 Wrong Marks : 1

The Nile River is associated with-

- | | |
|------------------------------|---------------------------|
| (1) Mesopotamia Civilization | (2) Egyptian Civilization |
| (3) Harappa Civilization | (4) Greek Civilization |

Options :

- 92090660117. 1

92090660118. 2

92090660119. 3

92090660120. 4

Question Number : 30 Question Id : 92090615214 Question Type : MCQ Option Shuffling : No Is Question Mandatory : No Calculator : None Response Time : N.A Think Time : N.A Minimum Instruction Time : 0

Correct Marks : 4 Wrong Marks : 1

नील नदी किससे संबंधित है?

- | | |
|----------------------------|----------------------|
| (1) मेसोपोटामिया की सभ्यता | (2) इजिप्त की सभ्यता |
| (3) हड़प्पा सभ्यता | (4) यूनानी सभ्यता |

Options :

92090660117. 1

92090660118. 2

92090660119. 3

92090660120. 4

Question Number : 31 Question Id : 92090615215 Question Type : MCQ Option Shuffling : No Is Question Mandatory : No Calculator : None Response Time : N.A Think Time : N.A Minimum Instruction Time : 0

Correct Marks : 4 Wrong Marks : 1

Mona Lisa was created by:

- | | |
|-----------------------|----------------------|
| (1) Raphael | (2) Pablo Picasso |
| (3) Leonardo Da Vinci | (4) Vincent Van Gogh |

Options :

92090660121. 1

92090660122. 2

92090660123. 3

92090660124. 4

Question Number : 31 Question Id : 92090615215 Question Type : MCQ Option Shuffling : No Is Question Mandatory : No Calculator : None Response Time : N.A Think Time : N.A Minimum Instruction Time : 0

Correct Marks : 4 Wrong Marks : 1

मोनालिसा की रचना किसने की?

- | | |
|-------------------------|---------------------|
| (1) रफायेल | (2) पाबलो पिकासो |
| (3) लियानार्डो दा विंसी | (4) विंसेंट वॉन गॉग |

Options :

92090660121. 1
92090660122. 2
92090660123. 3
92090660124. 4

Question Number : 32 Question Id : 92090615216 Question Type : MCQ Option Shuffling : No Is Question Mandatory : No Calculator : None Response Time : N.A Think Time : N.A Minimum Instruction Time : 0

Correct Marks : 4 Wrong Marks : 1

Which Art Gallery is famous for the painting of Raja Rabi Varma?

- (1) Dogra Art Gallery (2) Ashutosh Museum of Indian Art
(3) Jayachamarajendra Art Gallery (4) Jahangir Art Gallery

Options :

92090660125. 1
92090660126. 2
92090660127. 3
92090660128. 4

Question Number : 32 Question Id : 92090615216 Question Type : MCQ Option Shuffling : No Is Question Mandatory : No Calculator : None Response Time : N.A Think Time : N.A Minimum Instruction Time : 0

Correct Marks : 4 Wrong Marks : 1

राजा रवि वर्मा की चित्रकारी के लिए कौन सी कला दीर्घा प्रसिद्ध है?

- (1) डोगरा कला दीर्घा (2) आशुतोष म्युजियम ऑफ इंडियन आर्ट
(3) जयचामराजेंद्र कला दीर्घा (4) जहांगीर कला दीर्घा

Options :

92090660125. 1
92090660126. 2
92090660127. 3
92090660128. 4

Question Number : 33 Question Id : 92090615217 Question Type : MCQ Option Shuffling : No Is Question Mandatory : No Calculator : None Response Time : N.A Think Time : N.A Minimum Instruction Time : 0

Correct Marks : 4 Wrong Marks : 1

Ragamala miniatures were painted during the reign of -

- (1) Akbar (2) Aurangzeb
(3) Shah Jahan (4) Jahangir

Options :

- 92090660129. 1
- 92090660130. 2
- 92090660131. 3
- 92090660132. 4

Question Number : 33 Question Id : 92090615217 Question Type : MCQ Option Shuffling : No Is Question Mandatory : No Calculator : None Response Time : N.A Think Time : N.A Minimum Instruction Time : 0

Correct Marks : 4 Wrong Marks : 1

रागमाला लघुचित्र किसके शासन काल में चित्रित किए गए थे?

- | | |
|-------------|-------------|
| (1) अकबर | (2) औरंगजेब |
| (3) शाहजहां | (4) जहांगीर |

Options :

- 92090660129. 1
- 92090660130. 2
- 92090660131. 3
- 92090660132. 4

Question Number : 34 Question Id : 92090615218 Question Type : MCQ Option Shuffling : No Is Question Mandatory : No Calculator : None Response Time : N.A Think Time : N.A Minimum Instruction Time : 0

Correct Marks : 4 Wrong Marks : 1

Jantar-Mantar is a phenomenal piece of architecture in the form of:

- | | |
|--------------|-------------|
| (1) Palace | (2) Temple |
| (3) Monument | (4) Sundial |

Options :

- 92090660133. 1
- 92090660134. 2
- 92090660135. 3
- 92090660136. 4

Question Number : 34 Question Id : 92090615218 Question Type : MCQ Option Shuffling : No Is Question Mandatory : No Calculator : None Response Time : N.A Think Time : N.A Minimum Instruction Time : 0

Correct Marks : 4 Wrong Marks : 1

वास्तुकला की अद्भुत कृति जंतर मंतर किस स्वरूप में है?

- | | |
|------------|--------------|
| (1) महल | (2) मंदिर |
| (3) स्मारक | (4) सूर्यघडी |

Options :

92090660133. 1
92090660134. 2
92090660135. 3
92090660136. 4

Question Number : 35 Question Id : 92090615219 Question Type : MCQ Option Shuffling : No Is Question Mandatory : No Calculator : None Response Time : N.A Think Time : N.A Minimum Instruction Time : 0

Correct Marks : 4 Wrong Marks : 1

Cultural landscape of Bali consists of five_____ terraces and their water temples.

- | | |
|-----------|-----------|
| (1) Rice | (2) Wheat |
| (3) Bajra | (4) Maize |

Options :

92090660137. 1
92090660138. 2
92090660139. 3
92090660140. 4

Question Number : 35 Question Id : 92090615219 Question Type : MCQ Option Shuffling : No Is Question Mandatory : No Calculator : None Response Time : N.A Think Time : N.A Minimum Instruction Time : 0

Correct Marks : 4 Wrong Marks : 1

बाली के सांस्कृतिक भूदृश्य में पांच _____ के छज्जे (टेरेस) और उनके जल मंदिर शामिल है

- | | |
|-----------|-----------|
| (1) चावल | (2) गेहूं |
| (3) बाजरा | (4) मक्का |

Options :

92090660137. 1
92090660138. 2
92090660139. 3
92090660140. 4

Question Number : 36 Question Id : 92090615220 Question Type : MCQ Option Shuffling : No Is Question Mandatory : No Calculator : None Response Time : N.A Think Time : N.A Minimum

Instruction Time : 0

Correct Marks : 4 Wrong Marks : 1

Lumbini in Nepal is famous for:

- | | |
|------------------------------------|-----------------------------------|
| (1) Birth place of Vikramaditya II | (2) Birth place of Mahavir |
| (3) Birth place of Ashoka | (4) Birth place of Gautama Buddha |

Options :

- 92090660141. 1
- 92090660142. 2
- 92090660143. 3
- 92090660144. 4

Question Number : 36 Question Id : 92090615220 Question Type : MCQ Option Shuffling : No Is Question Mandatory : No Calculator : None Response Time : N.A Think Time : N.A Minimum Instruction Time : 0

Correct Marks : 4 Wrong Marks : 1

नेपाल का लुंबिनी किस लिए प्रसिद्ध है?

- | | |
|-----------------------------------|------------------------------|
| (1) विक्रमादित्य II का जन्म स्थान | (2) महावीर का जन्म स्थान |
| (3) अशोक का जन्म स्थान | (4) गौतम बुद्ध का जन्म स्थान |

Options :

- 92090660141. 1
- 92090660142. 2
- 92090660143. 3
- 92090660144. 4

Question Number : 37 Question Id : 92090615221 Question Type : MCQ Option Shuffling : No Is Question Mandatory : No Calculator : None Response Time : N.A Think Time : N.A Minimum Instruction Time : 0

Correct Marks : 4 Wrong Marks : 1

Mithila painting is also known as:

- | | |
|-------------------------|------------------------|
| (1) Rajasthani painting | (2) Basholi painting |
| (3) Kalighat painting | (4) Madhubani painting |

Options :

- 92090660145. 1
- 92090660146. 2
- 92090660147. 3
- 92090660148. 4

Question Number : 37 Question Id : 92090615221 Question Type : MCQ Option Shuffling : No Is Question Mandatory : No Calculator : None Response Time : N.A Think Time : N.A Minimum Instruction Time : 0

Correct Marks : 4 Wrong Marks : 1

मिथिला पेंटिंग को किस अन्य नाम से भी जाना जाता है?

- | | |
|-----------------------|-------------------|
| (1) राजस्थानी पेंटिंग | (2) बशोली पेंटिंग |
| (3) कालीघाट पेंटिंग | (4) मधुबनी लोककला |

Options :

92090660145. 1
92090660146. 2
92090660147. 3
92090660148. 4

Question Number : 38 Question Id : 92090615222 Question Type : MCQ Option Shuffling : No Is Question Mandatory : No Calculator : None Response Time : N.A Think Time : N.A Minimum Instruction Time : 0

Correct Marks : 4 Wrong Marks : 1

Patachitra refers to the folk painting of the state of:

- | | |
|--------------|------------|
| (1) Punjab | (2) Odisha |
| (3) Nagaland | (4) Kerala |

Options :

92090660149. 1
92090660150. 2
92090660151. 3
92090660152. 4

Question Number : 38 Question Id : 92090615222 Question Type : MCQ Option Shuffling : No Is Question Mandatory : No Calculator : None Response Time : N.A Think Time : N.A Minimum Instruction Time : 0

Correct Marks : 4 Wrong Marks : 1

पटचित्र किस राज्य की लोक चित्रकला से संबंधित है?

- | | |
|--------------|-----------|
| (1) पंजाब | (2) ओडिशा |
| (3) नागालैंड | (4) केरल |

Options :

92090660149. 1
92090660150. 2
92090660151. 3
92090660152. 4

Question Number : 39 Question Id : 92090615223 Question Type : MCQ Option Shuffling : No Is Question Mandatory : No Calculator : None Response Time : N.A Think Time : N.A Minimum Instruction Time : 0

Correct Marks : 4 Wrong Marks : 1

Elephanta caves are dedicated to:

- | | |
|--------------|------------|
| (1) Shiva | (2) Buddha |
| (3) Mahavira | (4) Sun |

Options :

- 92090660153. 1
- 92090660154. 2
- 92090660155. 3
- 92090660156. 4

Question Number : 39 Question Id : 92090615223 Question Type : MCQ Option Shuffling : No Is Question Mandatory : No Calculator : None Response Time : N.A Think Time : N.A Minimum Instruction Time : 0

Correct Marks : 4 Wrong Marks : 1

एलिफैंटा की गुफायें किसको समर्पित हैं?

- | | |
|------------|-----------|
| (1) शिव | (2) बुद्ध |
| (3) महावीर | (4) सूर्य |

Options :

- 92090660153. 1
- 92090660154. 2
- 92090660155. 3
- 92090660156. 4

Question Number : 40 Question Id : 92090615224 Question Type : MCQ Option Shuffling : No Is Question Mandatory : No Calculator : None Response Time : N.A Think Time : N.A Minimum Instruction Time : 0

Correct Marks : 4 Wrong Marks : 1

Golden temple is splendid example of:

- | | |
|--------------------------|--------------------------------------|
| (1) Gothic style | (2) French architecture |
| (3) Kalinga architecture | (4) Indo Islamic Mughal architecture |

Options :

- 92090660157. 1
- 92090660158. 2
- 92090660159. 3

92090660160. 4

Question Number : 40 Question Id : 92090615224 Question Type : MCQ Option Shuffling : No Is Question Mandatory : No Calculator : None Response Time : N.A Think Time : N.A Minimum Instruction Time : 0

Correct Marks : 4 Wrong Marks : 1

स्वर्ण मंदिर किसका शानदार उदाहरण है?

- | | |
|---------------------|---------------------------------|
| (1) गोथिक शैली | (2) फ्रेंच वास्तुकला |
| (3) कलिंग वास्तुकला | (4) ईडो इस्लामिक मुगल वास्तुकला |

Options :

92090660157. 1
92090660158. 2
92090660159. 3
92090660160. 4

Question Number : 41 Question Id : 92090615225 Question Type : MCQ Option Shuffling : No Is Question Mandatory : No Calculator : None Response Time : N.A Think Time : N.A Minimum Instruction Time : 0

Correct Marks : 4 Wrong Marks : 1

Kashmiri King, Lalitaditya Muktapida built a temple in 8th century at Martand in Anantnag it was a:

- | | |
|---------------------|-----------------|
| (1) Buddhist Temple | (2) Sun Temple |
| (3) Shiva Temple | (4) Jain Temple |

Options :

92090660161. 1
92090660162. 2
92090660163. 3
92090660164. 4

Question Number : 41 Question Id : 92090615225 Question Type : MCQ Option Shuffling : No Is Question Mandatory : No Calculator : None Response Time : N.A Think Time : N.A Minimum Instruction Time : 0

Correct Marks : 4 Wrong Marks : 1

कश्मीरी राजा, ललितादित्य मुक्तापीड़ ने अनंतनाग के मार्तंड में 8 वीं शताब्दी में एक मंदिर का निर्माण कराया था यह था :-

- | | |
|-----------------|-----------------|
| (1) बौद्ध मंदिर | (2) सूर्य मंदिर |
| (3) शिव मंदिर | (4) जैन मंदिर |

Options :

- 92090660161. 1
- 92090660162. 2
- 92090660163. 3
- 92090660164. 4

Question Number : 42 Question Id : 92090615226 Question Type : MCQ Option Shuffling : No Is Question Mandatory : No Calculator : None Response Time : N.A Think Time : N.A Minimum Instruction Time : 0

Correct Marks : 4 Wrong Marks : 1

Gothic style is related to:

- | | |
|------------|-----------|
| (1) France | (2) Egypt |
| (3) China | (4) India |

Options :

- 92090660165. 1
- 92090660166. 2
- 92090660167. 3
- 92090660168. 4

Question Number : 42 Question Id : 92090615226 Question Type : MCQ Option Shuffling : No Is Question Mandatory : No Calculator : None Response Time : N.A Think Time : N.A Minimum Instruction Time : 0

Correct Marks : 4 Wrong Marks : 1

गोथिक शैली किससे संबंधित है?

- | | |
|-------------|------------|
| (1) फ़्रांस | (2) इजिप्ट |
| (3) चीन | (4) भारत |

Options :

- 92090660165. 1
- 92090660166. 2
- 92090660167. 3
- 92090660168. 4

Question Number : 43 Question Id : 92090615227 Question Type : MCQ Option Shuffling : No Is Question Mandatory : No Calculator : None Response Time : N.A Think Time : N.A Minimum Instruction Time : 0

Correct Marks : 4 Wrong Marks : 1

The colosseum in Rome was primarily for:

- | | |
|-------------------------|-----------------------------|
| (1) Residential Complex | (2) Amphitheater |
| (3) Market | (4) Educational Institution |

Options :

92090660169. 1
92090660170. 2
92090660171. 3
92090660172. 4

Question Number : 43 Question Id : 92090615227 Question Type : MCQ Option Shuffling : No Is Question Mandatory : No Calculator : None Response Time : N.A Think Time : N.A Minimum Instruction Time : 0

Correct Marks : 4 Wrong Marks : 1

रोम का कोलोसियम मुख्यतः क्या था?

- | | |
|------------------|----------------------|
| (1) आवासीय परिसर | (2) एम्पीथिएटर |
| (3) बाजार | (4) शैक्षणिक संस्थान |

Options :

92090660169. 1
92090660170. 2
92090660171. 3
92090660172. 4

Question Number : 44 Question Id : 92090615228 Question Type : MCQ Option Shuffling : No Is Question Mandatory : No Calculator : None Response Time : N.A Think Time : N.A Minimum Instruction Time : 0

Correct Marks : 4 Wrong Marks : 1

What was the art of painting in the 19th century of India?

- | | |
|------------------------|--------------------------|
| (1) Pahari painting | (2) Bengal school of Art |
| (3) Miniature painting | (4) Ragmala painting |

Options :

92090660173. 1
92090660174. 2
92090660175. 3
92090660176. 4

Question Number : 44 Question Id : 92090615228 Question Type : MCQ Option Shuffling : No Is Question Mandatory : No Calculator : None Response Time : N.A Think Time : N.A Minimum Instruction Time : 0

Correct Marks : 4 Wrong Marks : 1

भारत में 19 वीं शताब्दी में कौन सी चित्रकला थी?

- | | |
|---------------------|-------------------------|
| (1) पहाड़ी चित्रकला | (2) बंगाल स्कूल ऑफ आर्ट |
| (3) लघु चित्रकला | (4) रागमाला चित्रकला |

Options :

- 92090660173. 1
- 92090660174. 2
- 92090660175. 3
- 92090660176. 4

Question Number : 45 Question Id : 92090615229 Question Type : MCQ Option Shuffling : No Is Question Mandatory : No Calculator : None Response Time : N.A Think Time : N.A Minimum Instruction Time : 0

Correct Marks : 4 Wrong Marks : 1

The Last Supper was created by:

- | | |
|-----------------------|-------------------|
| (1) Van Gagh | (2) Pablo Picasso |
| (3) Leonardo da Vinci | (4) Michelangelo |

Options :

- 92090660177. 1
- 92090660178. 2
- 92090660179. 3
- 92090660180. 4

Question Number : 45 Question Id : 92090615229 Question Type : MCQ Option Shuffling : No Is Question Mandatory : No Calculator : None Response Time : N.A Think Time : N.A Minimum Instruction Time : 0

Correct Marks : 4 Wrong Marks : 1

द लास्ट सपर किसकी रचना है?

- | | |
|-------------------------|------------------|
| (1) वॉन गाग | (2) पाबलो पिकासो |
| (3) लियानार्डो दा विंसी | (4) माईकल ऐंजेलो |

Options :

- 92090660177. 1
- 92090660178. 2
- 92090660179. 3
- 92090660180. 4

Question Number : 46 Question Id : 92090615230 Question Type : MCQ Option Shuffling : No Is Question Mandatory : No Calculator : None Response Time : N.A Think Time : N.A Minimum Instruction Time : 0

Correct Marks : 4 Wrong Marks : 1

Which is the popular Dance of Gujarat?

- | | |
|-------------|-------------|
| (1) Bihu | (2) Dandia |
| (3) Katthak | (4) Bhangra |

Options :

- 92090660181. 1
- 92090660182. 2
- 92090660183. 3
- 92090660184. 4

Question Number : 46 Question Id : 92090615230 Question Type : MCQ Option Shuffling : No Is Question Mandatory : No Calculator : None Response Time : N.A Think Time : N.A Minimum Instruction Time : 0

Correct Marks : 4 Wrong Marks : 1

गुजरात का लोकप्रिय नृत्य कौन सा है?

- | | |
|----------|-------------|
| (1) बीहू | (2) डांडिया |
| (3) कथक | (4) भांगरा |

Options :

- 92090660181. 1
- 92090660182. 2
- 92090660183. 3
- 92090660184. 4

Question Number : 47 Question Id : 92090615231 Question Type : MCQ Option Shuffling : No Is Question Mandatory : No Calculator : None Response Time : N.A Think Time : N.A Minimum Instruction Time : 0

Correct Marks : 4 Wrong Marks : 1

The word hieroglyph is-

- | | |
|------------|-------------|
| (1) French | (2) English |
| (3) Greek | (4) Spanish |

Options :

- 92090660185. 1
- 92090660186. 2
- 92090660187. 3

92090660188. 4

Question Number : 47 Question Id : 92090615231 Question Type : MCQ Option Shuffling : No Is Question Mandatory : No Calculator : None Response Time : N.A Think Time : N.A Minimum Instruction Time : 0

Correct Marks : 4 Wrong Marks : 1

‘हायारोग्लिफ’ शब्द किस भाषा का है?

- | | |
|------------|--------------|
| (1) फ्रेंच | (2) अंग्रेजी |
| (3) यूनानी | (4) स्पैनिश |

Options :

92090660185. 1
92090660186. 2
92090660187. 3
92090660188. 4

Question Number : 48 Question Id : 92090615232 Question Type : MCQ Option Shuffling : No Is Question Mandatory : No Calculator : None Response Time : N.A Think Time : N.A Minimum Instruction Time : 0

Correct Marks : 4 Wrong Marks : 1

Painting Avalokitesvara-Padmapani found in:

- | | |
|---------------|------------|
| (1) Bagh | (2) Ellora |
| (3) Bhimbetka | (4) Ajanta |

Options :

92090660189. 1
92090660190. 2
92090660191. 3
92090660192. 4

Question Number : 48 Question Id : 92090615232 Question Type : MCQ Option Shuffling : No Is Question Mandatory : No Calculator : None Response Time : N.A Think Time : N.A Minimum Instruction Time : 0

Correct Marks : 4 Wrong Marks : 1

अवलोकितेश्वर – पद्मपाणि पेंटिंग कहां पाई गई थी ?

- | | |
|--------------|-----------|
| (1) बाघ | (2) एलोरा |
| (3) भीमबेटका | (4) अजंता |

Options :

92090660189. 1

92090660190. 2

92090660191. 3

92090660192. 4

Question Number : 49 Question Id : 92090615233 Question Type : MCQ Option Shuffling : No Is Question Mandatory : No Calculator : None Response Time : N.A Think Time : N.A Minimum Instruction Time : 0

Correct Marks : 4 Wrong Marks : 1

The famous traditional dance Rauf in associated with_____

- | | |
|----------------------|-------------|
| (1) Himachal Pradesh | (2) Punjab |
| (3) Kashmir | (4) Gujarat |

Options :

92090660193. 1

92090660194. 2

92090660195. 3

92090660196. 4

Question Number : 49 Question Id : 92090615233 Question Type : MCQ Option Shuffling : No Is Question Mandatory : No Calculator : None Response Time : N.A Think Time : N.A Minimum Instruction Time : 0

Correct Marks : 4 Wrong Marks : 1

प्रसिद्ध पारंपारिक नृत्य रौफ किससे संबंधित है?

- | | |
|-------------------|------------|
| (1) हिमाचल प्रदेश | (2) पंजाब |
| (3) कश्मीर | (4) गुजरात |

Options :

92090660193. 1

92090660194. 2

92090660195. 3

92090660196. 4

Question Number : 50 Question Id : 92090615234 Question Type : MCQ Option Shuffling : No Is Question Mandatory : No Calculator : None Response Time : N.A Think Time : N.A Minimum Instruction Time : 0

Correct Marks : 4 Wrong Marks : 1

Which is a world Heritage site in Gujarat?

- | | |
|---------------------------|--------------------|
| (1) Sun temple at Modhera | (2) Dilwara temple |
| (3) Akshardham temple | (4) Rani ka Vav |

Options :

- 92090660197. 1
- 92090660198. 2
- 92090660199. 3
- 92090660200. 4

Question Number : 50 Question Id : 92090615234 Question Type : MCQ Option Shuffling : No Is Question Mandatory : No Calculator : None Response Time : N.A Think Time : N.A Minimum Instruction Time : 0

Correct Marks : 4 Wrong Marks : 1

गुजरात में कौन सा वैश्विक धरोहर स्थल है?

- | | |
|---------------------------|--------------------|
| (1) मोधेरा का सूर्य मंदिर | (2) दिलवाड़ा मंदिर |
| (3) अक्षरधाम मंदिर | (4) रानी का वाव |

Options :

- 92090660197. 1
- 92090660198. 2
- 92090660199. 3
- 92090660200. 4

Question Number : 51 Question Id : 92090615235 Question Type : MCQ Option Shuffling : No Is Question Mandatory : No Calculator : None Response Time : N.A Think Time : N.A Minimum Instruction Time : 0

Correct Marks : 4 Wrong Marks : 1

Which is the famous prehistoric painting site?

- | | |
|---------------|------------|
| (1) Bhimbetka | (2) Bagh |
| (3) Ellora | (4) Ajanta |

Options :

- 92090660201. 1
- 92090660202. 2
- 92090660203. 3
- 92090660204. 4

Question Number : 51 Question Id : 92090615235 Question Type : MCQ Option Shuffling : No Is Question Mandatory : No Calculator : None Response Time : N.A Think Time : N.A Minimum Instruction Time : 0

Correct Marks : 4 Wrong Marks : 1

कौन प्रसिद्ध प्राक्ऐतिहासिक चित्रकारी स्थल है?

- (1) भीमबेटका (2) बाघ
(3) एलोरा (4) अजंता

Options :

92090660201. 1
92090660202. 2
92090660203. 3
92090660204. 4

Question Number : 52 Question Id : 92090615236 Question Type : MCQ Option Shuffling : No Is Question Mandatory : No Calculator : None Response Time : N.A Think Time : N.A Minimum Instruction Time : 0

Correct Marks : 4 Wrong Marks : 1

Kathakali style of dance is famous from_____

- (1) Karnataka (2) Kerala
(3) Uttar Pradesh (4) Tamil Nadu

Options :

92090660205. 1
92090660206. 2
92090660207. 3
92090660208. 4

Question Number : 52 Question Id : 92090615236 Question Type : MCQ Option Shuffling : No Is Question Mandatory : No Calculator : None Response Time : N.A Think Time : N.A Minimum Instruction Time : 0

Correct Marks : 4 Wrong Marks : 1

प्रसिद्ध नृत्य शैली कथकली कहाँ से संबंधित है?

- (1) कर्नाटक (2) केरल
(3) उत्तर प्रदेश (4) तमिलनाडु

Options :

92090660205. 1
92090660206. 2
92090660207. 3
92090660208. 4

Question Number : 53 Question Id : 92090615237 Question Type : MCQ Option Shuffling : No Is Question Mandatory : No Calculator : None Response Time : N.A Think Time : N.A Minimum Instruction Time : 0

Correct Marks : 4 Wrong Marks : 1

Which is the largest Buddhist temple in World?

- | | |
|---------------|----------------|
| (1) Mahabodhi | (2) Angkor Wat |
| (3) Borobudur | (4) Chaitya |

Options :

92090660209. 1
92090660210. 2
92090660211. 3
92090660212. 4

Question Number : 53 Question Id : 92090615237 Question Type : MCQ Option Shuffling : No Is Question Mandatory : No Calculator : None Response Time : N.A Think Time : N.A Minimum Instruction Time : 0

Correct Marks : 4 Wrong Marks : 1

विश्व का सबसे बड़ा बौद्ध मंदिर कौन सा है?

- | | |
|---------------|----------------|
| (1) महाबोधि | (2) अंगकोर वाट |
| (3) बोरोबुदुर | (4) चैत्य |

Options :

92090660209. 1
92090660210. 2
92090660211. 3
92090660212. 4

Question Number : 54 Question Id : 92090615238 Question Type : MCQ Option Shuffling : No Is Question Mandatory : No Calculator : None Response Time : N.A Think Time : N.A Minimum Instruction Time : 0

Correct Marks : 4 Wrong Marks : 1

Hari-Hara deity is:

- | | |
|-----------------------------|---------------------------|
| (1) Half Siva Half Brahma | (2) Half Vishnu Half Siva |
| (3) Half Brahma Half Vishnu | (4) Half Siva Half Surya |

Options :

92090660213. 1
92090660214. 2
92090660215. 3
92090660216. 4

Question Number : 54 Question Id : 92090615238 Question Type : MCQ Option Shuffling : No Is Question Mandatory : No Calculator : None Response Time : N.A Think Time : N.A Minimum

Instruction Time : 0

Correct Marks : 4 Wrong Marks : 1

हरिहर देवता है:

- | | |
|----------------------------------|------------------------------|
| (1) अर्द्ध शिव अर्द्ध ब्रह्मा | (2) अर्द्ध विष्णु अर्द्ध शिव |
| (3) अर्द्ध ब्रह्मा अर्द्ध विष्णु | (4) अर्द्ध शिव अर्द्ध सूर्य |

Options :

- 92090660213. 1
- 92090660214. 2
- 92090660215. 3
- 92090660216. 4

Question Number : 55 Question Id : 92090615239 Question Type : MCQ Option Shuffling : No Is Question Mandatory : No Calculator : None Response Time : N.A Think Time : N.A Minimum Instruction Time : 0

Correct Marks : 4 Wrong Marks : 1

Who is the King painter of Indonesia?

- | | |
|------------------|-----------------|
| (1) Ahmad Sadali | (2) Mochtar Api |
| (3) Raden Saleh | (4) Sudjojono |

Options :

- 92090660217. 1
- 92090660218. 2
- 92090660219. 3
- 92090660220. 4

Question Number : 55 Question Id : 92090615239 Question Type : MCQ Option Shuffling : No Is Question Mandatory : No Calculator : None Response Time : N.A Think Time : N.A Minimum Instruction Time : 0

Correct Marks : 4 Wrong Marks : 1

इंडोनेशिया का चित्रकार सुल्तान कौन था?

- | | |
|-----------------|----------------|
| (1) अहमद सदाली | (2) मोचतर अपी |
| (3) रादेन सालेह | (4) सुदजो जोनो |

Options :

- 92090660217. 1
- 92090660218. 2
- 92090660219. 3
- 92090660220. 4

Question Number : 56 Question Id : 92090615240 Question Type : MCQ Option Shuffling : No Is Question Mandatory : No Calculator : None Response Time : N.A Think Time : N.A Minimum Instruction Time : 0

Correct Marks : 4 Wrong Marks : 1

Which miniature painting is made in Himachal Pradesh?

- | | |
|-------------------------------|-----------------------------------|
| (1) Mughal miniature painting | (2) Kangra miniature painting |
| (3) Jain miniature painting | (4) Rajasthani miniature painting |

Options :

- 92090660221. 1
- 92090660222. 2
- 92090660223. 3
- 92090660224. 4

Question Number : 56 Question Id : 92090615240 Question Type : MCQ Option Shuffling : No Is Question Mandatory : No Calculator : None Response Time : N.A Think Time : N.A Minimum Instruction Time : 0

Correct Marks : 4 Wrong Marks : 1

हिमाचल प्रदेश में कौन सी लघु चित्रकला मिलती है?

- | | |
|------------------------|-----------------------------|
| (1) मुगल लघु चित्रकारी | (2) कांगरा लघु चित्रकारी |
| (3) जैन लघु चित्रकारी | (4) राजस्थानी लघु चित्रकारी |

Options :

- 92090660221. 1
- 92090660222. 2
- 92090660223. 3
- 92090660224. 4

Question Number : 57 Question Id : 92090615241 Question Type : MCQ Option Shuffling : No Is Question Mandatory : No Calculator : None Response Time : N.A Think Time : N.A Minimum Instruction Time : 0

Correct Marks : 4 Wrong Marks : 1

The most famous Egyptian Pyramids are found in-

- | | |
|--------------|------------|
| (1) Istambul | (2) Giza |
| (3) Ankora | (4) Bagdad |

Options :

- 92090660225. 1
- 92090660226. 2
- 92090660227. 3
- 92090660228. 4

Question Number : 57 Question Id : 92090615241 Question Type : MCQ Option Shuffling : No Is Question Mandatory : No Calculator : None Response Time : N.A Think Time : N.A Minimum Instruction Time : 0

Correct Marks : 4 Wrong Marks : 1

इजिप्ट के सर्वप्रसिद्ध पिरामिड कहां पाये जाते हैं?

- | | |
|---------------|-----------|
| (1) ईस्तांबुल | (2) गिजा |
| (3) अंकारा | (4) बगदाद |

Options :

92090660225. 1
92090660226. 2
92090660227. 3
92090660228. 4

Question Number : 58 Question Id : 92090615242 Question Type : MCQ Option Shuffling : No Is Question Mandatory : No Calculator : None Response Time : N.A Think Time : N.A Minimum Instruction Time : 0

Correct Marks : 4 Wrong Marks : 1

The code of Hammurabi is the most important art in-

- | | |
|-----------------|-------------|
| (1) Harappa | (2) Sumeria |
| (3) Mesopotamia | (4) Western |

Options :

92090660229. 1
92090660230. 2
92090660231. 3
92090660232. 4

Question Number : 58 Question Id : 92090615242 Question Type : MCQ Option Shuffling : No Is Question Mandatory : No Calculator : None Response Time : N.A Think Time : N.A Minimum Instruction Time : 0

Correct Marks : 4 Wrong Marks : 1

हम्बुराबी की संहिता किसमें सर्वाधिक महत्वपूर्ण कला थी?

- | | |
|------------------|--------------------|
| (1) हड़प्पा | (2) सुमेरिया |
| (3) मेसोपोटामिया | (4) पश्चिमी सभ्यता |

Options :

92090660229. 1
92090660230. 2
92090660231. 3

92090660232. 4

Question Number : 59 Question Id : 92090615243 Question Type : MCQ Option Shuffling : No Is Question Mandatory : No Calculator : None Response Time : N.A Think Time : N.A Minimum Instruction Time : 0

Correct Marks : 4 Wrong Marks : 1

Kandariya Mahadeva Temple, Khajuraho was built by:

- | | |
|------------------|--------------------|
| (1) Bhoja King | (2) Kalachuri King |
| (3) Chauhan King | (4) Chandella King |

Options :

- 92090660233. 1
- 92090660234. 2
- 92090660235. 3
- 92090660236. 4

Question Number : 59 Question Id : 92090615243 Question Type : MCQ Option Shuffling : No Is Question Mandatory : No Calculator : None Response Time : N.A Think Time : N.A Minimum Instruction Time : 0

Correct Marks : 4 Wrong Marks : 1

कंडारिया महादेव मंदिर, खजुराहो का निर्माण किसने कराया?

- | | |
|----------------|------------------|
| (1) राजा भोज | (2) कालचुरी राजा |
| (3) चौहान राजा | (4) चंदेल राजा |

Options :

- 92090660233. 1
- 92090660234. 2
- 92090660235. 3
- 92090660236. 4

Question Number : 60 Question Id : 92090615244 Question Type : MCQ Option Shuffling : No Is Question Mandatory : No Calculator : None Response Time : N.A Think Time : N.A Minimum Instruction Time : 0

Correct Marks : 4 Wrong Marks : 1

Which of the following is famous for Buddhist mural painting in Sri Lanka?

- | | |
|-------------------------|----------------------------------|
| (1) Naguleswaram Temple | (2) Thiru Konamalai Temple |
| (3) Shaktipeeth | (4) Rangiri Dambulla Cave Temple |

Options :

- 92090660237. 1
- 92090660238. 2

92090660239. 3

92090660240. 4

Question Number : 60 Question Id : 92090615244 Question Type : MCQ Option Shuffling : No Is Question Mandatory : No Calculator : None Response Time : N.A Think Time : N.A Minimum Instruction Time : 0

Correct Marks : 4 Wrong Marks : 1

निम्नलिखित में से कौन श्रीलंका में बौद्ध भित्ति चित्रों के लिए प्रसिद्ध है?

- | | |
|----------------------|--------------------------------|
| (1) नागलेश्वरम मंदिर | (2) थिरु कोनमलाई मंदिर |
| (3) शक्ति पीठ | (4) रणगिरी दाम्बुला गुफा मंदिर |

Options :

92090660237. 1

92090660238. 2

92090660239. 3

92090660240. 4

Question Number : 61 Question Id : 92090615245 Question Type : MCQ Option Shuffling : No Is Question Mandatory : No Calculator : None Response Time : N.A Think Time : N.A Minimum Instruction Time : 0

Correct Marks : 4 Wrong Marks : 1

Which City is famous for Terracotta in India?

- | | |
|--------------|-----------------|
| (1) Karimpur | (2) Bishnupur |
| (3) Mysore | (4) Gandhinagar |

Options :

92090660241. 1

92090660242. 2

92090660243. 3

92090660244. 4

Question Number : 61 Question Id : 92090615245 Question Type : MCQ Option Shuffling : No Is Question Mandatory : No Calculator : None Response Time : N.A Think Time : N.A Minimum Instruction Time : 0

Correct Marks : 4 Wrong Marks : 1

भारत का कौन सा शहर टेराकोटा के लिए प्रसिद्ध है?

- | | |
|-------------|---------------|
| (1) करीमपुर | (2) विष्णुपुर |
| (3) मैसुर | (4) गांधीनगर |

Options :

92090660241. 1
92090660242. 2
92090660243. 3
92090660244. 4

Question Number : 62 Question Id : 92090615246 Question Type : MCQ Option Shuffling : No Is Question Mandatory : No Calculator : None Response Time : N.A Think Time : N.A Minimum Instruction Time : 0

Correct Marks : 4 Wrong Marks : 1

'Nemes' in Egypt is-

- (1) A throne (2) A royal head dress
(3) A Pyramid (4) A God

Options :

92090660245. 1
92090660246. 2
92090660247. 3
92090660248. 4

Question Number : 62 Question Id : 92090615246 Question Type : MCQ Option Shuffling : No Is Question Mandatory : No Calculator : None Response Time : N.A Think Time : N.A Minimum Instruction Time : 0

Correct Marks : 4 Wrong Marks : 1

इजिप्ट में 'नेमिस' है

- (1) एक राजगद्दी (2) एक शाही पगड़ी
(3) एक पिरामीड (4) एक देवता

Options :

92090660245. 1
92090660246. 2
92090660247. 3
92090660248. 4

Question Number : 63 Question Id : 92090615247 Question Type : MCQ Option Shuffling : No Is Question Mandatory : No Calculator : None Response Time : N.A Think Time : N.A Minimum Instruction Time : 0

Correct Marks : 4 Wrong Marks : 1

The architectural plan of Aihole Durga Temple is:

- (1) Rectangular (2) Square
(3) Circular (4) Apsidal

Options :

- 92090660249. 1
- 92090660250. 2
- 92090660251. 3
- 92090660252. 4

Question Number : 63 Question Id : 92090615247 Question Type : MCQ Option Shuffling : No Is Question Mandatory : No Calculator : None Response Time : N.A Think Time : N.A Minimum Instruction Time : 0

Correct Marks : 4 Wrong Marks : 1

ऐहोल दुर्गा मंदिर की वास्तुकला योजना है:

- | | |
|--------------|---------------|
| (1) आयताकार | (2) वर्गाकार |
| (3) चक्राकार | (4) गजपृष्ठीय |

Options :

- 92090660249. 1
- 92090660250. 2
- 92090660251. 3
- 92090660252. 4

Question Number : 64 Question Id : 92090615248 Question Type : MCQ Option Shuffling : No Is Question Mandatory : No Calculator : None Response Time : N.A Think Time : N.A Minimum Instruction Time : 0

Correct Marks : 4 Wrong Marks : 1

Given below are two statements: One is labelled as Assertion (A) and the other is labelled as Reason (R).

Assertion (A): The terracotta art of the shunga-Kushana cultural phase in Bengal is essentially a product of the Early historical urbanization of the region.

Reasons (R): This urbanization was an extension of that of the upper valley of Brahmaputra River.

In the light of the above statements, choose the most appropriate answer from the options given below :

- (1) Both (A) and (R) are correct and (R) is the correct explanation of (A)
- (2) Both (A) and (R) are correct but (R) is not the correct explanation of (A)
- (3) (A) is correct but (R) is not correct
- (4) (A) is not correct but (R) is correct

Options :

- 92090660253. 1

92090660254. 2

92090660255. 3

92090660256. 4

Question Number : 64 Question Id : 92090615248 Question Type : MCQ Option Shuffling : No Is Question Mandatory : No Calculator : None Response Time : N.A Think Time : N.A Minimum Instruction Time : 0

Correct Marks : 4 Wrong Marks : 1

नीचे दो कथन दिए गए हैं: एक अभिकथन (Assertion A) के रूप में लिखित है तो दूसरा उसके कारण (Reason R) के रूप में;

अभिकथन A : बंगाल के शुंग – कुषाण सांस्कृतिक युग की टेराकोटा कला मूलतः उस क्षेत्र के प्रारंभिक ऐतिहासिक शहरीकरण की उत्पत्ति थी।

कारण R : यह शहरीकरण ब्रह्मपुत्र नदी की उपरी घाटी का विस्तार था।

उपरोक्त कथन के आलोक में, नीचे दिए गए विकल्पों में से सबसे उपयुक्त उत्तर का चयन कीजिए

- (1) A और R दोनों सही हैं और R, A की सही व्याख्या है
- (2) A और R दोनों सही हैं, लेकिन R, A की सही व्याख्या नहीं है
- (3) A सही है, लेकिन R सही नहीं है
- (4) A सही नहीं है, लेकिन R सही है

Options :

92090660253. 1

92090660254. 2

92090660255. 3

92090660256. 4

Question Number : 65 Question Id : 92090615249 Question Type : MCQ Option Shuffling : No Is Question Mandatory : No Calculator : None Response Time : N.A Think Time : N.A Minimum Instruction Time : 0

Correct Marks : 4 Wrong Marks : 1

Given below are two statements: One is labelled as Assertion (A) and the other is labelled as Reason (R).

Assertion (A): Cuneiform was created by Sumerian

Reasons (R): The system of writing used in the ancient Asia is called cuneiform.

In the light of the above statements, choose the most appropriate answer from the options given below :

- (1) Both (A) and (R) are correct and (R) is the correct explanation of (A)
- (2) Both (A) and (R) are correct but (R) is not the correct explanation of (A)
- (3) (A) is correct but (R) is not correct
- (4) (A) is not correct but (R) is correct

Options :

- 92090660257. 1
- 92090660258. 2
- 92090660259. 3
- 92090660260. 4

Question Number : 65 Question Id : 92090615249 Question Type : MCQ Option Shuffling : No Is Question Mandatory : No Calculator : None Response Time : N.A Think Time : N.A Minimum Instruction Time : 0

Correct Marks : 4 Wrong Marks : 1

नीचे दो कथन दिए गए हैं: एक अभिकथन (Assertion A) के रूप में लिखित है तो दूसरा उसके कारण (Reason R) के रूप में;

अभिकथन A : कंसीफॉर्म सुमेरियन लोगों द्वारा सृजित किया गया था.

कारण R : प्राचीन एशिया में प्रयुक्त लेखन पद्धति कंसीफॉर्म कहलाती है

उपरोक्त कथन के आलोक में, नीचे दिए गए विकल्पों में से सबसे उपयुक्त उत्तर का चयन कीजिए

- (1) A और R दोनों सही हैं और R, A की सही व्याख्या है
- (2) A और R दोनों सही हैं, लेकिन R, A की सही व्याख्या नहीं है
- (3) A सही है, लेकिन R सही नहीं है
- (4) A सही नहीं है, लेकिन R सही है

Options :

- 92090660257. 1
- 92090660258. 2
- 92090660259. 3
- 92090660260. 4

Question Number : 66 Question Id : 92090615250 Question Type : MCQ Option Shuffling : No Is Question Mandatory : No Calculator : None Response Time : N.A Think Time : N.A Minimum Instruction Time : 0

Correct Marks : 4 Wrong Marks : 1

Given below are two statements : One is labelled as Assertion (A) and the other is labelled as Reason (R).

Assertion (A) : Terracotta Temple in Bishnupur are getting damaged because terracotta has hygroscopic characteristic.

Reasons (R) : Bengal experience high humidity throughout the year.

In the light of the above statements, choose the most appropriate answer from the options given below :

- (1) Both (A) and (R) are correct and (R) is the correct explanation of (A)
- (2) Both (A) and (R) are correct but (R) is not the correct explanation of (A)
- (3) (A) is correct but (R) is not correct
- (4) (A) is not correct but (R) is correct

Options :

92090660261. 1
92090660262. 2
92090660263. 3
92090660264. 4

Question Number : 66 Question Id : 92090615250 Question Type : MCQ Option Shuffling : No Is Question Mandatory : No Calculator : None Response Time : N.A Think Time : N.A Minimum Instruction Time : 0

Correct Marks : 4 Wrong Marks : 1

नीचे दो कथन दिए गए हैं: एक अभिकथन (Assertion A) के रूप में लिखित है तो दूसरा उसके कारण (Reason R) के रूप में;

अभिकथन A : विष्णुपुर के टेराकोटा मंदिर नष्ट हो रहे हैं क्योंकि टेराकोटा में हाईग्रोस्कोपिक गुण होते हैं।

कारण R : बंगाल में सालों भर उच्च आर्द्रता रहती है।

उपरोक्त कथन के आलोक में, नीचे दिए गए विकल्पों में से सबसे उपयुक्त उत्तर का चयन कीजिए

- (1) A और R दोनों सही हैं और R, A की सही व्याख्या है
- (2) A और R दोनों सही हैं, लेकिन R, A की सही व्याख्या नहीं है
- (3) A सही है, लेकिन R सही नहीं है
- (4) A सही नहीं है, लेकिन R सही है

Options :

92090660261. 1
92090660262. 2
92090660263. 3
92090660264. 4

Question Number : 67 Question Id : 92090615251 Question Type : MCQ Option Shuffling : No Is Question Mandatory : No Calculator : None Response Time : N.A Think Time : N.A Minimum Instruction Time : 0

Correct Marks : 4 Wrong Marks : 1

Given below are two statements : One is labelled as Assertion (A) and the other is labelled as Reason (R).

Assertion (A) : Originally the Hellenistic Greeks used the 'Meso Potamas', "The land between the rivers".

Reasons (R) : The land specially refer to the region between the Tigris and Nile.

In the light of the above statements, choose the most appropriate answer from the options given below :

- (1) Both (A) and (R) are correct and (R) is the correct explanation of (A)
- (2) Both (A) and (R) are correct but (R) is not the correct explanation of (A)
- (3) (A) is correct but (R) is not correct
- (4) (A) is not correct but (R) is correct

Options :

92090660265. 1
92090660266. 2
92090660267. 3

Question Number : 67 Question Id : 92090615251 Question Type : MCQ Option Shuffling : No Is Question Mandatory : No Calculator : None Response Time : N.A Think Time : N.A Minimum Instruction Time : 0

Correct Marks : 4 Wrong Marks : 1

नीचे दो कथन दिए गए हैं: एक अभिकथन (Assertion A) के रूप में लिखित है तो दूसरा उसके कारण (Reason R) के रूप में;

अभिकथन A : मूलतः हेलेनिस्टिक यूनानियों ने 'मेसोपोटामस' "नदियों के बीच की भूमि" का प्रयोग किया।

कारण R : उस भूमि का संदर्भ विशेषतः टायग्रिस और नील नदी के बीच पड़ते वाले क्षेत्र से है।

उपरोक्त कथन के आलोक में, नीचे दिए गए विकल्पों में से सबसे उपयुक्त उत्तर का चयन कीजिए

- (1) A और R दोनों सही हैं और R, A की सही व्याख्या है
- (2) A और R दोनों सही हैं, लेकिन R, A की सही व्याख्या नहीं है
- (3) A सही है, लेकिन R सही नहीं है
- (4) A सही नहीं है, लेकिन R सही है

Options :

92090660265. 1

92090660266. 2

92090660267. 3

92090660268. 4

Question Number : 68 Question Id : 92090615252 Question Type : MCQ Option Shuffling : No Is Question Mandatory : No Calculator : None Response Time : N.A Think Time : N.A Minimum Instruction Time : 0

Correct Marks : 4 Wrong Marks : 1

Given below are two statements : One is labelled as Assertion (A) and the other is labelled as Reason (R).

Assertion (A) : Ravi Varma did succeed in transforming popular taste and consumption of Pictorial material.

Reasons (R) : He had to resort to oleograph (lithograph) Versions, as well as documented evidence that his prints reached virtually all corners of the country.

In the light of the above statements, choose the correct answer from the options given below :

- (1) Both (A) and (R) are correct and (R) is the correct explanation of (A)
- (2) Both (A) and (R) are correct but (R) is not the correct explanation of (A)
- (3) (A) is true but (R) is false
- (4) (A) is false but (R) is true

Options :

92090660269. 1
92090660270. 2
92090660271. 3
92090660272. 4

Question Number : 68 Question Id : 92090615252 Question Type : MCQ Option Shuffling : No Is Question Mandatory : No Calculator : None Response Time : N.A Think Time : N.A Minimum Instruction Time : 0

Correct Marks : 4 Wrong Marks : 1

नीचे दो कथन दिए गए हैं: एक अभिकथन (Assertion A) के रूप में लिखित है तो दूसरा उसके कारण (Reason R) के रूप में;

अभिकथन A : रवि वर्मा चित्र सामग्री के लोकप्रिय आस्वादन और सरहाना को रूपांतरित करने में सफल हुए।

कारण R : उन्हें ओलियोग्राफ (लिथोग्राफ) संस्करण और प्रलेखित साक्ष्य का सहारा लेना पड़ा जिससे उनके चित्र वस्तुतः देश के हर कोने तक पहुंच गए।

उपरोक्त कथन के आलोक में, नीचे दिए गए विकल्पों में से सबसे उपयुक्त उत्तर का चयन कीजिए

- (1) A और R दोनों सही हैं और R, A की सही व्याख्या है
- (2) A और R दोनों सही हैं, लेकिन R, A की सही व्याख्या नहीं है
- (3) A सही है, लेकिन R सही नहीं है
- (4) A सही नहीं है, लेकिन R सही है

Options :

- 92090660269. 1
- 92090660270. 2
- 92090660271. 3
- 92090660272. 4

Question Number : 69 Question Id : 92090615253 Question Type : MCQ Option Shuffling : No Is Question Mandatory : No Calculator : None Response Time : N.A Think Time : N.A Minimum Instruction Time : 0

Correct Marks : 4 Wrong Marks : 1

Given below are two statements : One is labelled as Assertion (A) and the other is labelled as Reason (R).

Assertion (A) : The rich sculptural tradition of Mathura is distinguished by its principal medium, the white spotted red sandstone.

Reasons (R) : White spotted red Sandstone is locally available in Mathura region.

In the light of the above statements, choose the most appropriate answer from the options given below :

- (1) Both (A) and (R) are correct and (R) is the correct explanation of (A)
- (2) Both (A) and (R) are correct but (R) is not the correct explanation of (A)
- (3) (A) is correct but (R) is not correct
- (4) (A) is not correct but (R) is correct

Options :

- 92090660273. 1
- 92090660274. 2
- 92090660275. 3
- 92090660276. 4

Question Number : 69 Question Id : 92090615253 Question Type : MCQ Option Shuffling : No Is Question Mandatory : No Calculator : None Response Time : N.A Think Time : N.A Minimum Instruction Time : 0

Correct Marks : 4 Wrong Marks : 1

नीचे दो कथन दिए गए हैं: एक अभिकथन (Assertion A) के रूप में लिखित है तो दूसरा उसके कारण (Reason R) के रूप में;

अभिकथन A : मथुरा की समृद्ध मूर्तिकला परंपरा की पहचान इसका मुख्य माध्यम, सफ़ेद धब्बों वाला लाल बलुआ पत्थर है।

कारण R : सफ़ेद धब्बों वाला लाल बलुआ पत्थर मथुरा क्षेत्र में स्थानीय स्तर पर उपलब्ध होता है।

उपरोक्त कथन के आलोक में, नीचे दिए गए विकल्पों में से सबसे उपयुक्त उत्तर का चयन कीजिए

- (1) A और R दोनों सही हैं और R, A की सही व्याख्या है
- (2) A और R दोनों सही हैं, लेकिन R, A की सही व्याख्या नहीं है
- (3) A सही है, लेकिन R सही नहीं है
- (4) A सही नहीं है, लेकिन R सही है

Options :

92090660273. 1
92090660274. 2
92090660275. 3
92090660276. 4

Question Number : 70 Question Id : 92090615254 Question Type : MCQ Option Shuffling : No Is Question Mandatory : No Calculator : None Response Time : N.A Think Time : N.A Minimum Instruction Time : 0

Correct Marks : 4 Wrong Marks : 1

Given below are two statements : One is labelled as Assertion (A) and the other is labelled as Reason (R).

Assertion (A) : All Asokan Pillars were produced at a time.

Reasons (R) : The crowning animals of Asokan Pillars are different.

In the light of the above statements, choose the most appropriate answer from the options given below :

- (1) Both (A) and (R) are correct and (R) is the correct explanation of (A)
- (2) Both (A) and (R) are correct but (R) is not the correct explanation of (A)
- (3) (A) is correct but (R) is not correct
- (4) (A) is not correct but (R) is correct

Options :

92090660277. 1
92090660278. 2
92090660279. 3

92090660280. 4

Question Number : 70 Question Id : 92090615254 Question Type : MCQ Option Shuffling : No Is Question Mandatory : No Calculator : None Response Time : N.A Think Time : N.A Minimum Instruction Time : 0

Correct Marks : 4 Wrong Marks : 1

नीचे दो कथन दिए गए हैं: एक अभिकथन (Assertion A) के रूप में लिखित है तो दूसरा उसके कारण (Reason R) के रूप में;

अभिकथन A : सभी अशोक स्तंभों का निर्माण एक साथ कराया गया था।

कारण R : अशोक स्तंभों के शीर्ष पर भिन्न भिन्न जीव हैं।

उपरोक्त कथन के आलोक में, नीचे दिए गए विकल्पों में से सबसे उपयुक्त उत्तर का चयन कीजिए

- (1) A और R दोनों सही हैं और R, A की सही व्याख्या है
- (2) A और R दोनों सही हैं, लेकिन R, A की सही व्याख्या नहीं है
- (3) A सही है, लेकिन R सही नहीं है
- (4) A सही नहीं है, लेकिन R सही है

Options :

92090660277. 1

92090660278. 2

92090660279. 3

92090660280. 4

Question Number : 71 Question Id : 92090615255 Question Type : MCQ Option Shuffling : No Is Question Mandatory : No Calculator : None Response Time : N.A Think Time : N.A Minimum Instruction Time : 0

Correct Marks : 4 Wrong Marks : 1

Given below are two statements : One is labelled as Assertion (A) and the other is labelled as Reason (R).

Assertion (A) : Cubism Painting developed India late 19th century by the influence of western Art.

Reasons (R) : Many Western Artists came in India during British Rule.

In the light of the above statements, choose the most appropriate answer from the options given below :

- (1) Both (A) and (R) are correct and (R) is the correct explanation of (A)
- (2) Both (A) and (R) are correct but (R) is NOT the correct explanation of (A)
- (3) (A) is correct but (R) is not correct
- (4) (A) is not correct but (R) is correct

Options :

92090660281. 1
92090660282. 2
92090660283. 3
92090660284. 4

Question Number : 71 Question Id : 92090615255 Question Type : MCQ Option Shuffling : No Is Question Mandatory : No Calculator : None Response Time : N.A Think Time : N.A Minimum Instruction Time : 0

Correct Marks : 4 Wrong Marks : 1

नीचे दो कथन दिए गए हैं: एक अभिकथन (Assertion A) के रूप में लिखित है तो दूसरा उसके कारण (Reason R) के रूप में;

अभिकथन A : क्यूबिज्म पेंटिंग भारत में 19 वीं सदी के अंतिम वर्षों में पश्चिमी कला के प्रभाव से विकसित हुई।

कारण R : अंग्रेजों के शासनकाल के दौरान अनेक पश्चिमी कलाकार भारत आए।

उपरोक्त कथन के आलोक में, नीचे दिए गए विकल्पों में से सबसे उपयुक्त उत्तर का चयन कीजिए

- (1) A और R दोनों सही हैं और R, A की सही व्याख्या है
- (2) A और R दोनों सही हैं, लेकिन R, A की सही व्याख्या नहीं है
- (3) A सही है, लेकिन R सही नहीं है
- (4) A सही नहीं है, लेकिन R सही है

Options :

92090660281. 1
92090660282. 2

92090660283. 3

92090660284. 4

Question Number : 72 Question Id : 92090615256 Question Type : MCQ Option Shuffling : No Is Question Mandatory : No Calculator : None Response Time : N.A Think Time : N.A Minimum Instruction Time : 0

Correct Marks : 4 Wrong Marks : 1

Arrange chronologically the religious teachers in the sub continent (Oldest one first).

- (A) Ramanujacharya in Tamil Nadu
- (B) Muinddin Chisti in Rajasthan
- (C) Baba Guru Nanak in Punjab
- (D) Sri Chaitanya in Bengal

Choose the correct answer from the options given below :

- (1) (A), (B), (C), (D)
- (2) (B), (C), (A), (D)
- (3) (C), (B), (D), (A)
- (4) (D), (A), (B), (C)

Options :

92090660285. 1

92090660286. 2

92090660287. 3

92090660288. 4

Question Number : 72 Question Id : 92090615256 Question Type : MCQ Option Shuffling : No Is Question Mandatory : No Calculator : None Response Time : N.A Think Time : N.A Minimum Instruction Time : 0

Correct Marks : 4 Wrong Marks : 1

उपमहाद्वीप के धार्मिक शिक्षकों को कालक्रमानुसार व्यवस्थित करें (सर्वप्रथम सबसे पुराना)

- A. तमिलनाडु में रामानुजाचार्य
- B. राजस्थान में मोईनुद्दीन चिश्ती
- C. पंजाब में बाबा गुरु नानक
- D. बंगाल में श्री चैतन्य

नीचे दिए गए विकल्पों में से सही उत्तर का चयन कीजिए :

- (1) A, B, C, D
- (2) B, C, A, D
- (3) C, B, D, A
- (4) D, A, B, C

Options :

- 92090660285. 1
- 92090660286. 2
- 92090660287. 3
- 92090660288. 4

Question Number : 73 Question Id : 92090615257 Question Type : MCQ Option Shuffling : No Is Question Mandatory : No Calculator : None Response Time : N.A Think Time : N.A Minimum Instruction Time : 0

Correct Marks : 4 Wrong Marks : 1

Arrange personalities of Indian painters according to their Birth (oldest one first):

- (A) S. H. Raja
- (B) Jamini Roy
- (C) Abanindra Nath Tagore
- (D) Raja Ravi Varma

Choose the correct answer from the options given below :

- (1) (D), (C), (B), (A)
- (2) (C), (B), (A), (D)
- (3) (A), (C), (B), (D)
- (4) (B), (A), (D), (C)

Options :

- 92090660289. 1
- 92090660290. 2

92090660291. 3

92090660292. 4

Question Number : 73 Question Id : 92090615257 Question Type : MCQ Option Shuffling : No Is Question Mandatory : No Calculator : None Response Time : N.A Think Time : N.A Minimum Instruction Time : 0

Correct Marks : 4 Wrong Marks : 1

भारतीय चित्रकारों को उनके जन्म के अनुसार व्यवस्थित क्रम में लिखें. (सर्वप्रथम पहला)

- A. एस.एच. राजा
- B. जेमिनी रॉय
- C. अबनिंद्र नाथ टैगोर
- D. राजा रवि वर्मा

नीचे दिए गए विकल्पों में से सही उत्तर का चयन कीजिए :

- 1. D, C, B, A
- 2. C, B, A, D
- 3. A, C, B, D
- 4. B, A, D, C

Options :

92090660289. 1

92090660290. 2

92090660291. 3

92090660292. 4

Question Number : 74 Question Id : 92090615258 Question Type : MCQ Option Shuffling : No Is Question Mandatory : No Calculator : None Response Time : N.A Think Time : N.A Minimum Instruction Time : 0

Correct Marks : 4 Wrong Marks : 1

Arrange the following school of paintings according to their periods of origin (oldest first)

- (A) Bengal School
- (B) Mughal Paintings
- (C) Pala School of painting
- (D) Cave Paintings

Choose the correct answer from the options given below :

- (1) (A), (B), (C), (D)
- (2) (B), (C), (D), (A)
- (3) (D), (C), (B), (A)
- (4) (D), (B), (A), (C)

Options :

- 92090660293. 1
- 92090660294. 2
- 92090660295. 3
- 92090660296. 4

Question Number : 74 Question Id : 92090615258 Question Type : MCQ Option Shuffling : No Is Question Mandatory : No Calculator : None Response Time : N.A Think Time : N.A Minimum Instruction Time : 0

Correct Marks : 4 Wrong Marks : 1

चित्रकारी की निम्नलिखित शाखाओं को उनकी उत्पत्ति की अवधि के अनुसार व्यवस्थित करें (सर्वप्रथम सबसे पुराना)

- A. बंगाल स्कूल
- B. मुगल चित्रकला
- C. पाल स्कूल ऑफ पेंटिंग्स
- D. गुहा चित्रकला

नीचे दिए गए विकल्पों में से सही उत्तर का चयन कीजिए :

- 1. A,B,C,D
- 2. B,C,D,A
- 3. D,C,B,A
- 4. D,B,A,C

Options :

- 92090660293. 1

92090660294. 2

92090660295. 3

92090660296. 4

Question Number : 75 Question Id : 92090615259 Question Type : MCQ Option Shuffling : No Is Question Mandatory : No Calculator : None Response Time : N.A Think Time : N.A Minimum Instruction Time : 0

Correct Marks : 4 Wrong Marks : 1

Chronologically arrange the following Mughal Emperers:

- (A) Jahangir
- (B) Akbar
- (C) Humayun
- (D) Shah Jahan

Choose the correct answer from the options given below :

- (1) (C), (B), (A), (D)
- (2) (B), (A), (C), (D)
- (3) (A), (B), (C), (D)
- (4) (D), (A), (B), (C)

Options :

92090660297. 1

92090660298. 2

92090660299. 3

92090660300. 4

Question Number : 75 Question Id : 92090615259 Question Type : MCQ Option Shuffling : No Is Question Mandatory : No Calculator : None Response Time : N.A Think Time : N.A Minimum Instruction Time : 0

Correct Marks : 4 Wrong Marks : 1

निम्नलिखित मुगल बादशाहों को काल क्रमानुसार व्यवस्थित करे:

- A. जहांगीर
- B. अकबर
- C. हुमायुं
- D. शाहजहां

नीचे दिए गए विकल्पों में से सही उत्तर का चयन कीजिए :

- 1. C,B,A,D
- 2. B,A,C,D
- 3. A,B,C,D
- 4. D,A,B,C

Options :

- 92090660297. 1
- 92090660298. 2
- 92090660299. 3
- 92090660300. 4

Question Number : 76 Question Id : 92090615260 Question Type : MCQ Option Shuffling : No Is Question Mandatory : No Calculator : None Response Time : N.A Think Time : N.A Minimum Instruction Time : 0

Correct Marks : 4 Wrong Marks : 1

Arrange the followings chronologically-

- (A) Early Upanishads
- (B) First Stupas
- (C) Early Vedic traditions
- (D) Earliest temple

Choose the correct answer from the options given below :

- (1) (B), (C), (A), (D)
- (2) (A), (D), (B), (C)
- (3) (C), (A), (B), (D)
- (4) (D), (B), (C), (A)

Options :

- 92090660301. 1
- 92090660302. 2
- 92090660303. 3

92090660304. 4

Question Number : 76 Question Id : 92090615260 Question Type : MCQ Option Shuffling : No Is Question Mandatory : No Calculator : None Response Time : N.A Think Time : N.A Minimum Instruction Time : 0

Correct Marks : 4 Wrong Marks : 1

निम्नलिखित को काल क्रमानुसार व्यवस्थित करे:

- A. प्रारंभिक उपनिषद
- B. प्रथम स्तूप
- C. प्रारंभिक वैदिक परंपरायें
- D. प्राचीनतम मंदिर

नीचे दिए गए विकल्पों में से सही उत्तर का चयन कीजिए :

- 1. B, C, A, D
- 2. A, D, B, C
- 3. C, A, B, D
- 4. D, B, C, A

Options :

- 92090660301. 1
- 92090660302. 2
- 92090660303. 3
- 92090660304. 4

Question Number : 77 Question Id : 92090615261 Question Type : MCQ Option Shuffling : No Is Question Mandatory : No Calculator : None Response Time : N.A Think Time : N.A Minimum Instruction Time : 0

Correct Marks : 4 Wrong Marks : 1

Arrange the followings chronologically-

- (A) Chinese Pilgrim xuam Zang comes in search of Buddhist texts
- (B) Rise of chalukyas
- (C) Accession of Kanishka
- (D) Urbanisation in the Ganga Valley

Choose the correct answer from the options given below :

- (1) (D), (C), (B), (A)
- (2) (A), (B), (C), (D)
- (3) (B), (C), (D), (A)
- (4) (C), (D), (A), (B)

Options :

- 92090660305. 1
- 92090660306. 2
- 92090660307. 3
- 92090660308. 4

Question Number : 77 Question Id : 92090615261 Question Type : MCQ Option Shuffling : No Is Question Mandatory : No Calculator : None Response Time : N.A Think Time : N.A Minimum Instruction Time : 0

Correct Marks : 4 Wrong Marks : 1

निम्नलिखित को काल क्रमानुसार सुव्यवस्थित करें:

- A. चीनी तीर्थयात्री युआन चांग बौद्ध धर्मग्रंथों की खोज में भारत आया
- B. चालुक्यों का उत्थान
- C. कनिष्क का अधिग्रहण
- D. गंगा घाटी में शहरीकरण

नीचे दिए गए विकल्पों में से सही उत्तर का चयन कीजिए :

- 1. D,C,B,A
- 2. A,B,C,D,
- 3. B,C,D,A
- 4. C,D,A,B

Options :

- 92090660305. 1
- 92090660306. 2
- 92090660307. 3

92090660308. 4

Question Number : 78 Question Id : 92090615262 Question Type : MCQ Option Shuffling : No Is Question Mandatory : No Calculator : None Response Time : N.A Think Time : N.A Minimum Instruction Time : 0

Correct Marks : 4 Wrong Marks : 1

Arrange the followings chronologically-

- (A) Sanchi Museum
- (B) Nalanda Museum
- (C) Sarnath Museum
- (D) Hampi Museum

Choose the correct answer from the options given below :

- (1) (B), (D), (C), (A)
- (2) (C), (B), (A), (D)
- (3) (B), (A), (C), (D)
- (4) (D), (C), (A), (B)

Options :

92090660309. 1

92090660310. 2

92090660311. 3

92090660312. 4

Question Number : 78 Question Id : 92090615262 Question Type : MCQ Option Shuffling : No Is Question Mandatory : No Calculator : None Response Time : N.A Think Time : N.A Minimum Instruction Time : 0

Correct Marks : 4 Wrong Marks : 1

निम्नलिखित संग्रहालयों को कालक्रमानुसार व्यवस्थित करें

- A. साँची संग्रहालय
- B. नालंदा संग्रहालय
- C. सारनाथ संग्रहालय
- D. हम्पी संग्रहालय

नीचे दिए गए विकल्पों में से सही उत्तर का चयन कीजिए :

- 1. B,D,C,A
- 2. C,B,A,D
- 3. B,A,C,D
- 4. D,C,A,B

Options :

- 92090660309. 1
- 92090660310. 2
- 92090660311. 3
- 92090660312. 4

Question Number : 79 Question Id : 92090615263 Question Type : MCQ Option Shuffling : No Is Question Mandatory : No Calculator : None Response Time : N.A Think Time : N.A Minimum Instruction Time : 0

Correct Marks : 4 Wrong Marks : 1

Given below are two statements :

Statement I : The Tanjavur school is famous for the special style of decorative paintings.

Statement II : They are unique because of the use of brilliant colour patterns and the liberal use of gold leaf.

In the light of the above statements, choose the most appropriate answer from the options given below :

- (1) Both Statement I and Statement II are correct
- (2) Both Statement I and Statement II are incorrect
- (3) Statement I is correct but Statement II is incorrect
- (4) Statement I is incorrect but Statement II is correct

Options :

- 92090660313. 1
- 92090660314. 2

92090660315. 3

92090660316. 4

Question Number : 79 Question Id : 92090615263 Question Type : MCQ Option Shuffling : No Is Question Mandatory : No Calculator : None Response Time : N.A Think Time : N.A Minimum Instruction Time : 0

Correct Marks : 4 Wrong Marks : 1

नीचे दो कथन दिए गए हैं:

कथन I : तंजावुर स्कूल सजावटी चित्रों की विशिष्ट शैली के लिए प्रसिद्ध है

कथन II : वे स्वर्ण पत्तियों के उदार प्रयोग और शानदार रंग पैटर्न के कारण विशिष्ट हैं

उपरोक्त कथन के आलोक में, नीचे दिए गए विकल्पों में से सबसे उपयुक्त उत्तर का चयन कीजिए

- (1) कथन I और II दोनों सही हैं
- (2) कथन I और II दोनों गलत हैं
- (3) कथन I सही है, लेकिन कथन II गलत है
- (4) कथन I गलत है, लेकिन कथन II सही है

Options :

92090660313. 1

92090660314. 2

92090660315. 3

92090660316. 4

Question Number : 80 Question Id : 92090615264 Question Type : MCQ Option Shuffling : No Is Question Mandatory : No Calculator : None Response Time : N.A Think Time : N.A Minimum Instruction Time : 0

Correct Marks : 4 Wrong Marks : 1

Given below are two statements :

Statement I : Mughal painting famous and spread after Jahangir's death in 1627.

Statement II : Shah Jahan was not interested in painting but his true enthusiasm was for architecture.

In the light of the above statements, choose the correct answer from the options given below :

- (1) Both Statement I and Statement II are true
- (2) Both Statement I and Statement II are false
- (3) Statement I is true but Statement II is false
- (4) Statement I is false but Statement II is true

Options :

92090660317. 1

92090660318. 2

92090660319. 3

92090660320. 4

Question Number : 80 Question Id : 92090615264 Question Type : MCQ Option Shuffling : No Is Question Mandatory : No Calculator : None Response Time : N.A Think Time : N.A Minimum Instruction Time : 0

Correct Marks : 4 Wrong Marks : 1

नीचे दो कथन दिए गए हैं:

कथन I : 1627 में जहांगीर की मृत्यु के पश्चात मुगल चित्रकला प्रसिद्ध और विस्तृत हुई।

कथन II : शाहजहां की चित्रकला में रुचि नहीं थी, किंतु वास्तुकला में उसकी बहुत रुचि थी।

उपरोक्त कथन के आलोक में, नीचे दिए गए विकल्पों में से सबसे उपयुक्त उत्तर का चयन कीजिए

- (1) कथन I और II दोनों सही हैं
- (2) कथन I और II दोनों गलत हैं
- (3) कथन I सही है, लेकिन कथन II गलत है
- (4) कथन I गलत है, लेकिन कथन II सही है

Options :

92090660317. 1

92090660318. 2

92090660319. 3

92090660320. 4

Question Number : 81 Question Id : 92090615265 Question Type : MCQ Option Shuffling : No Is Question Mandatory : No Calculator : None Response Time : N.A Think Time : N.A Minimum Instruction Time : 0

Correct Marks : 4 Wrong Marks : 1

Given below are two statements :

Statement I : Culture is transmitted and carried forward from generation to next generation.

Statement II : The culture we inherit from our predecessors is called our cultural heritage.

In the light of the above statements, choose the correct answer from the options given below :

- (1) Both Statement I and Statement II are true
- (2) Both Statement I and Statement II are false
- (3) Statement I is true but Statement II is false
- (4) Statement I is false but Statement II is true

Options :

92090660321. 1

92090660322. 2

92090660323. 3

92090660324. 4

Question Number : 81 Question Id : 92090615265 Question Type : MCQ Option Shuffling : No Is Question Mandatory : No Calculator : None Response Time : N.A Think Time : N.A Minimum Instruction Time : 0

Correct Marks : 4 Wrong Marks : 1

नीचे दो कथन दिए गए हैं:

कथन I: संस्कृति एक पीढ़ी से दूसरी पीढ़ी में संचारित होती रहेती है।

कथन II : जो संस्कृति हम अपने पूर्वजों से प्राप्त करते हैं, वह सांस्कृतिक विरासत कहलाती है।

उपरोक्त कथन के आलोक में, नीचे दिए गए विकल्पों में से सही उत्तर का चयन कीजिए

- (1) कथन I और II दोनों सत्य हैं
- (2) कथन I और II दोनों असत्य हैं
- (3) कथन I सत्य है, लेकिन कथन II असत्य है
- (4) कथन I असत्य है, लेकिन कथन II सत्य है

Options :

- 92090660321. 1
- 92090660322. 2
- 92090660323. 3
- 92090660324. 4

Question Number : 82 Question Id : 92090615266 Question Type : MCQ Option Shuffling : No Is Question Mandatory : No Calculator : None Response Time : N.A Think Time : N.A Minimum Instruction Time : 0

Correct Marks : 4 Wrong Marks : 1

Given below are two statements :

Statement I: The Gandhara region extending from Arunachal Pradesh to the borders of China.

Statement II: Owing to its location the Gandhara school of Art imbibed all kinds of foreign influences like Persian, Greek, Roman, Saka and kushan.

In the light of the above statements, choose the correct answer from the options given below :

- (1) Both Statement I and Statement II are true
- (2) Both Statement I and Statement II are false
- (3) Statement I is true but Statement II is false
- (4) Statement I is false but Statement II is true

Options :

- 92090660325. 1
- 92090660326. 2
- 92090660327. 3
- 92090660328. 4

Question Number : 82 Question Id : 92090615266 Question Type : MCQ Option Shuffling : No Is Question Mandatory : No Calculator : None Response Time : N.A Think Time : N.A Minimum Instruction Time : 0

Correct Marks : 4 Wrong Marks : 1

नीचे दो कथन दिए गए हैं:

कथन I : गंधार क्षेत्र अरुणाचल प्रदेश से चीन की सीमा तक फैला है।

कथन II : अपनी अवस्थिति के कारण गंधार कला शाखा में सभी प्रकार के विदेशी प्रभाव, जैसे पर्सियन, ग्रीक, रोमन, ससानी और कुशान, आ गये।

उपरोक्त कथन के आलोक में, नीचे दिए गए विकल्पों में से **सही उत्तर** का चयन कीजिए

- (1) कथन I और II दोनों सत्य हैं
- (2) कथन I और II दोनों असत्य हैं
- (3) कथन I सत्य है, लेकिन कथन II असत्य है
- (4) कथन I असत्य है, लेकिन कथन II सत्य है

Options :

92090660325. 1
92090660326. 2
92090660327. 3
92090660328. 4

Question Number : 83 Question Id : 92090615267 Question Type : MCQ Option Shuffling : No Is Question Mandatory : No Calculator : None Response Time : N.A Think Time : N.A Minimum Instruction Time : 0

Correct Marks : 4 Wrong Marks : 1

Given below are two statements :

Statement I : The paintings at Ajanta, Bagh and Badami known as classical Art by the modern Art historians.

Statement II : The modelling quality of the line of the Art that brings out in full the three-dimensional rounded volume of the mass as well as its plasticity.

In the light of the above statements, choose the correct answer from the options given below :

- (1) Both Statement I and Statement II are true
- (2) Both Statement I and Statement II are false
- (3) Statement I is true but Statement II is false
- (4) Statement I is false but Statement II is true

Options :

92090660329. 1

92090660330. 2

92090660331. 3

92090660332. 4

Question Number : 83 Question Id : 92090615267 Question Type : MCQ Option Shuffling : No Is Question Mandatory : No Calculator : None Response Time : N.A Think Time : N.A Minimum Instruction Time : 0

Correct Marks : 4 Wrong Marks : 1

नीचे दो कथन दिए गए हैं:

कथन I : अजंता, बाहा और बादामी की चित्रकलाओं को आधुनिक कला इतिहासकार क्लासिकल आर्ट की संज्ञा देते हैं।

कथन II : कला की माडलिंग गुणवत्ता पदार्थ के त्रिआयामी गोलाकार परिमाण और इसकी कृत्रिमता को इसकी संपूर्णता में उभारती है।

उपरोक्त कथन के आलोक में, नीचे दिए गए विकल्पों में से सही उत्तर का चयन कीजिए

- (1) कथन I और II दोनों सत्य हैं
- (2) कथन I और II दोनों असत्य हैं
- (3) कथन I सत्य है, लेकिन कथन II असत्य है
- (4) कथन I असत्य है, लेकिन कथन II सत्य है

Options :

92090660329. 1

92090660330. 2

92090660331. 3

92090660332. 4

Question Number : 84 Question Id : 92090615268 Question Type : MCQ Option Shuffling : No Is Question Mandatory : No Calculator : None Response Time : N.A Think Time : N.A Minimum Instruction Time : 0

Correct Marks : 4 Wrong Marks : 1

Given below are two statements :

Statement I : Painting is the one of the most delicate forms of Art giving expression to human thoughts and feelings through the media of line and colour.

Statement II : Many thousands of years before the dawn of history, when man was only a cave dweller, he painted his rock shelters to satisfy his aesthetic sensitivity and creative urge.

In the light of the above statements, choose the correct answer from the options given below :

- (1) Both Statement I and Statement II are true
- (2) Both Statement I and Statement II are false
- (3) Statement I is true but Statement II is false
- (4) Statement I is false but Statement II is true

Options :

92090660333. 1
92090660334. 2
92090660335. 3
92090660336. 4

Question Number : 84 Question Id : 92090615268 Question Type : MCQ Option Shuffling : No Is Question Mandatory : No Calculator : None Response Time : N.A Think Time : N.A Minimum Instruction Time : 0

Correct Marks : 4 Wrong Marks : 1

नीचे दो कथन दिए गए हैं:

कथन I : चित्रकला सर्वाधिक कोमल कला रूप है जो आरेखों और चित्रों के माध्यम से मानवीय विचारों और भावनाओं से अभिव्यक्ति देती है।

कथन II : इतिहास के उद्गम के हजारों वर्ष पूर्व जब मनुष्य केवल गुफाओं में रहता था, उसने पत्थरों के अपने आश्रय स्थलों पर चित्रकारी की ताकि वह अपनी सौंदर्य पर संवेदनशीलता और रचनात्मक इच्छा की पूर्ति कर सके।

उपरोक्त कथन के आलोक में, नीचे दिए गए विकल्पों में से सही उत्तर का चयन कीजिए

- (1) कथन I और II दोनों सत्य हैं
- (2) कथन I और II दोनों असत्य हैं
- (3) कथन I सत्य है, लेकिन कथन II असत्य है
- (4) कथन I असत्य है, लेकिन कथन II सत्य है

Options :

- 92090660333. 1
- 92090660334. 2
- 92090660335. 3
- 92090660336. 4

Question Number : 85 Question Id : 92090615269 Question Type : MCQ Option Shuffling : No Is Question Mandatory : No Calculator : None Response Time : N.A Think Time : N.A Minimum Instruction Time : 0

Correct Marks : 4 Wrong Marks : 1

Given below are two statements :

Statement I : Anubis was the God of embalming and the protector of mummies in the potentially dangerous transition between death and rebirth in the afterlife.

Statement II : Anubis was often portrayed as a human with the head of lion.

In the light of the above statements, choose the correct answer from the options given below :

- (1) Both Statement I and Statement II are true
- (2) Both Statement I and Statement II are false
- (3) Statement I is true but Statement II is false
- (4) Statement I is false but Statement II is true

Options :

- 92090660337. 1
- 92090660338. 2
- 92090660339. 3
- 92090660340. 4

Question Number : 85 Question Id : 92090615269 Question Type : MCQ Option Shuffling : No Is Question Mandatory : No Calculator : None Response Time : N.A Think Time : N.A Minimum Instruction Time : 0

Correct Marks : 4 Wrong Marks : 1

नीचे दो कथन दिए गए हैं:

कथन I : अनुबीस आलेपन के देवता थे और वे उत्तर जीवन अवधि में मृत्यु और पुनर्जन्म के बीच के खतरनाक संक्रमण काल में ममियों का संरक्षण करते थे।

कथन II : अनुबीस को प्रायः एक मनुष्य के रूप में दर्शाया गया है जिसका सिर सिंह का होता है।

उपरोक्त कथन के आलोक में, नीचे दिए गए विकल्पों में से सही उतर का चयन कीजिए

- (1) कथन I और II दोनों सत्य हैं
- (2) कथन I और II दोनों असत्य हैं
- (3) कथन I सत्य है, लेकिन कथन II असत्य है
- (4) कथन I असत्य है, लेकिन कथन II सत्य है

Options :

92090660337. 1
92090660338. 2
92090660339. 3
92090660340. 4

Question Number : 86 Question Id : 92090615270 Question Type : MCQ Option Shuffling : No Is Question Mandatory : No Calculator : None Response Time : N.A Think Time : N.A Minimum Instruction Time : 0

Correct Marks : 4 Wrong Marks : 1

Which of the following persons were associated with the excavation of Harappa?

- (A) S. S. Biswas
- (B) John Marshall
- (C) R. D. Banerjee
- (D) Rakhal Das Bandopadhyaya

Choose the correct answer from the options given below :

- (1) (A) and (C) only
- (2) (A) and (D) only
- (3) (B) and (D) only
- (4) (B) and (C) only

Options :

92090660341. 1
92090660342. 2
92090660343. 3
92090660344. 4

Question Number : 86 Question Id : 92090615270 Question Type : MCQ Option Shuffling : No Is Question Mandatory : No Calculator : None Response Time : N.A Think Time : N.A Minimum Instruction Time : 0

Correct Marks : 4 Wrong Marks : 1

निम्नलिखित में से कौन से व्यक्ति हड़प्पा के उत्खनन से संबंधित थे?

- A. एस.एस.विस्वास
- B. जॉन मार्शल
- C. आर.डी. बनर्जी
- D. रखाल दास बंद्योपाध्याय

नीचे दिए गए विकल्पों में से सही उत्तर का चयन कीजिए :

- (1) केवल A और C
- (2) केवल A और D
- (3) केवल B और D
- (4) केवल B और C

Options :

- 92090660341. 1
- 92090660342. 2
- 92090660343. 3
- 92090660344. 4

Question Number : 87 Question Id : 92090615271 Question Type : MCQ Option Shuffling : No Is Question Mandatory : No Calculator : None Response Time : N.A Think Time : N.A Minimum Instruction Time : 0

Correct Marks : 4 Wrong Marks : 1

Which of the following paintings are found in Ajanta caves?

- (A) Apsara, Buddha
- (B) Surasundari, A Divine couple
- (C) Shiva, Avalokitesvara
- (D) Monks, Lotus

Choose the correct answer from the options given below :

- (1) (A), (B), (C) only
- (2) (A), (D), (B) only
- (3) (B), (C), (D) only
- (4) (A), (C), (D) only

Options :

- 92090660345. 1
- 92090660346. 2
- 92090660347. 3
- 92090660348. 4

Question Number : 87 Question Id : 92090615271 Question Type : MCQ Option Shuffling : No Is Question Mandatory : No Calculator : None Response Time : N.A Think Time : N.A Minimum Instruction Time : 0

Correct Marks : 4 Wrong Marks : 1

अजंता की गुफाओं में निम्नलिखित में से कौन से चित्र मिलते हैं?

- A. अप्सरा, बुद्ध
- B. सुरासुंदरी, एक दैवी युगल
- C. शिव , अवलोकितेश्वर
- D. भिक्षु कमल

नीचे दिए गए विकल्पों में से **सही उत्तर** का चयन कीजिए :

- (1) केवल A, B,C
- (2) केवल A,D,B
- (3) केवल B,C,D
- (4) केवल A,C,D

Options :

- 92090660345. 1
- 92090660346. 2

92090660347. 3

92090660348. 4

Question Number : 88 Question Id : 92090615272 Question Type : MCQ Option Shuffling : No Is Question Mandatory : No Calculator : None Response Time : N.A Think Time : N.A Minimum Instruction Time : 0

Correct Marks : 4 Wrong Marks : 1

Which are the correct major forms of sculptures?

- (A) Intaglio
- (B) Reliefs
- (C) Mould
- (D) Pitcher

Choose the correct answer from the options given below :

- (1) (A) and (C) only
- (2) (C) and (D) only
- (3) (A) and (B) only
- (4) (B) and (C) only

Options :

92090660349. 1

92090660350. 2

92090660351. 3

92090660352. 4

Question Number : 88 Question Id : 92090615272 Question Type : MCQ Option Shuffling : No Is Question Mandatory : No Calculator : None Response Time : N.A Think Time : N.A Minimum Instruction Time : 0

Correct Marks : 4 Wrong Marks : 1

निम्नलिखित में से कौन मूर्तिकला के सही प्रमुख रूप हैं?

- A. उत्कीर्ण आकृति (इंटैगलियो)
- B. रिलीफ
- C. साँचा (मोल्ड)
- D. घड़ा (पिचर)

नीचे दिए गए विकल्पों में से सबसे उपयुक्त उत्तर का चयन कीजिए :

- (1) केवल A, और C
- (2) केवल C और D,
- (3) केवल A और B,
- (4) केवल B और C

Options :

- 92090660349. 1
- 92090660350. 2
- 92090660351. 3
- 92090660352. 4

Question Number : 89 Question Id : 92090615273 Question Type : MCQ Option Shuffling : No Is Question Mandatory : No Calculator : None Response Time : N.A Think Time : N.A Minimum Instruction Time : 0

Correct Marks : 4 Wrong Marks : 1

The distinct features of Indo- Islamic architecture were the-

- (A) Dome
- (B) Round base
- (C) Balconies
- (D) Tower of minarets

Choose the correct answer from the options given below :

- (1) (A) and (B) only
- (2) (A) and (D) only
- (3) (B) and (C) only
- (4) (B) and (D) only

Options :

- 92090660353. 1
- 92090660354. 2

92090660355. 3

92090660356. 4

Question Number : 89 Question Id : 92090615273 Question Type : MCQ Option Shuffling : No Is Question Mandatory : No Calculator : None Response Time : N.A Think Time : N.A Minimum Instruction Time : 0

Correct Marks : 4 Wrong Marks : 1

इंडो इस्लामिक वास्तुकला की मूलभूत विशेषतायें थीं :-

- A. गुंबद
- B. गोल आधार
- C. बालकनी
- D. मीनारों का स्तंभ

नीचे दिए गए विकल्पों में से सबसे उपयुक्त उत्तर का चयन कीजिए :

- (1) केवल A, और B
- (2) केवल A और D
- (3) केवल B और C,
- (4) केवल B और D

Options :

92090660353. 1

92090660354. 2

92090660355. 3

92090660356. 4

Question Number : 90 Question Id : 92090615274 Question Type : MCQ Option Shuffling : No Is Question Mandatory : No Calculator : None Response Time : N.A Think Time : N.A Minimum Instruction Time : 0

Correct Marks : 4 Wrong Marks : 1

Which of the following climatic conditions can damage oil painting?

- (A) High humidity
- (B) Insect
- (C) High temperature
- (D) Fungus

Choose the correct answer from the options given Below:

- (1) (A) and (B) only
- (2) (C) and (D) only
- (3) (B) and (D) only
- (4) (A) and (C) only

Options :

- 92090660357. 1
- 92090660358. 2
- 92090660359. 3
- 92090660360. 4

Question Number : 90 Question Id : 92090615274 Question Type : MCQ Option Shuffling : No Is Question Mandatory : No Calculator : None Response Time : N.A Think Time : N.A Minimum Instruction Time : 0

Correct Marks : 4 Wrong Marks : 1

निम्नलिखित में से कौन सी जलवायु परिस्थितियां तैल चित्रों को क्षति पहुंचा सकती हैं?

- A. उच्च आर्द्रता
- B. कीट
- C. उच्च तापमान
- D. कवक

नीचे दिए गए विकल्पों में से सबसे उपयुक्त उत्तर का चयन कीजिए :

- (1) केवल A, और B
- (2) केवल C और D,
- (3) केवल B और D,
- (4) केवल A और C

Options :

- 92090660357. 1
- 92090660358. 2
- 92090660359. 3
- 92090660360. 4

Question Number : 91 Question Id : 92090615275 Question Type : MCQ Option Shuffling : No Is Question Mandatory : No Calculator : None Response Time : N.A Think Time : N.A Minimum Instruction Time : 0

Correct Marks : 4 Wrong Marks : 1

The cave temples of Ellora are the creations of three faiths:

- (A) Buddhism
- (B) Christian
- (C) Sikhism
- (D) Jainism
- (E) Hinduism

Choose the correct answer from the options given Bellow :

- (1) (A), (B), (C) only
- (2) (B), (C), (D) only
- (3) (A), (D), (E) only
- (4) (A), (C), (D) only

Options :

92090660361. 1

92090660362. 2

92090660363. 3

92090660364. 4

Question Number : 91 Question Id : 92090615275 Question Type : MCQ Option Shuffling : No Is Question Mandatory : No Calculator : None Response Time : N.A Think Time : N.A Minimum Instruction Time : 0

Correct Marks : 4 Wrong Marks : 1

एलोरा के गुफा मंदिर तीन धर्मों के संगम हैं:

- A. बौद्ध
- B. इसाई
- C. सिख
- D. जैन
- E. हिंदू

नीचे दिए गए विकल्पों में से **सही उत्तर** का चयन कीजिए :

- (1) केवल A, B, C
- (2) केवल B, C, D
- (3) केवल A, D, E
- (4) केवल A, C, D

Options :

- 92090660361. 1
- 92090660362. 2
- 92090660363. 3
- 92090660364. 4

Question Number : 92 Question Id : 92090615276 Question Type : MCQ Option Shuffling : No Is Question Mandatory : No Calculator : None Response Time : N.A Think Time : N.A Minimum Instruction Time : 0

Correct Marks : 4 Wrong Marks : 1

Which of the following places have Buddhist stupas?

- (A) Tamluk
- (B) Sanchi
- (C) Amaravati
- (D) Shimla

Choose the correct answer from the options given below :

- (1) (A) and (B) only
- (2) (B) and (C) only
- (3) (C) and (D) only
- (4) (A) and (D) only

Options :

- 92090660365. 1
- 92090660366. 2

92090660367. 3

92090660368. 4

Question Number : 92 Question Id : 92090615276 Question Type : MCQ Option Shuffling : No Is Question Mandatory : No Calculator : None Response Time : N.A Think Time : N.A Minimum Instruction Time : 0

Correct Marks : 4 Wrong Marks : 1

निम्नलिखित में से किन स्थानों पर बौद्ध स्तूप हैं?

- A. तामलुक
- B. साँची
- C. अमरावती
- D. शिमला

नीचे दिए गए विकल्पों में से सबसे उपयुक्त उत्तर का चयन कीजिए :

- (1) केवल A, और B
- (2) केवल B और C
- (3) केवल C और D
- (4) केवल A और D

Options :

92090660365. 1

92090660366. 2

92090660367. 3

92090660368. 4

Question Number : 93 Question Id : 92090615277 Question Type : MCQ Option Shuffling : No Is Question Mandatory : No Calculator : None Response Time : N.A Think Time : N.A Minimum Instruction Time : 0

Correct Marks : 4 Wrong Marks : 1

Match List I with List II :

List I	List II
(A) Mahabodhi Temple Complex	(I) Mughal Style
(B) Rock Shelters	(II) Bodh Gaya
(C) Group of Monuments at Pattadakal	(III) Bhimbetka
(D) Fatehpur sikri	(IV) Chalukya dynasty

Choose the correct answer from the options given below :

- (1) (A)-(II), (B)-(III), (C)-(IV), (D)-(I)
- (2) (A)-(II), (B)-(III), (C)-(IV), (D)-(I)
- (3) (A)-(III), (B)-(IV), (C)-(II), (D)-(I)
- (4) (A)-(IV), (B)-(III), (C)-(I), (D)-(II)

Options :

92090660369. 1

92090660370. 2

92090660371. 3

92090660372. 4

Question Number : 93 Question Id : 92090615277 Question Type : MCQ Option Shuffling : No Is Question Mandatory : No Calculator : None Response Time : N.A Think Time : N.A Minimum Instruction Time : 0

Correct Marks : 4 Wrong Marks : 1

सूची I के साथ सूची II का मिलान कीजिए

सूची-I

- A. महाबोधि मंदिर परिसर
- B. चट्टान गृह
- C. पट्टडकल में स्मारक समूह
- D. फतेहपुर सीकरी

सूची -II

- I. मुगल शैली
- II. बोध गया
- III. भीम बेटका
- IV. चालुक्य वंश

नीचे दिए गए विकल्पों में से सही उत्तर का चयन कीजिए:

- 1 A-II, B-III, C-IV, D-I
- 2 A-II, B-III, C-IV, D-I
- 3 A-III, B-IV, C-II, D-I
- 4 A-IV, B-III, C-I, D-II

Options :

- 92090660369. 1
- 92090660370. 2
- 92090660371. 3
- 92090660372. 4

Question Number : 94 Question Id : 92090615278 Question Type : MCQ Option Shuffling : No Is Question Mandatory : No Calculator : None Response Time : N.A Think Time : N.A Minimum Instruction Time : 0

Correct Marks : 4 Wrong Marks : 1

Match List I with List II :

List I	List II
(A) Ninteenth century court Arts of India	(I) S. N. Das gupta
(B) Fundamentals of Indian Art	(II) S. S. Biswas, Julekha Haque
(C) Terracotta temples of Bengal	(III) Marika Sardar
(D) Museum Basics	(IV) T. Ambrose and C. painc

Choose the correct answer from the options given below :

- (1) (A)-(III), (B)-(I), (C)-(II), (D)-(IV)
- (2) (A)-(III), (B)-(II), (C)-(I), (D)-(IV)
- (3) (A)-(IV), (B)-(III), (C)-(II), (D)-(I)
- (4) (A)-(II), (B)-(IV), (C)-(III), (D)-(I)

Options :

- 92090660373. 1
- 92090660374. 2
- 92090660375. 3
- 92090660376. 4

Question Number : 94 Question Id : 92090615278 Question Type : MCQ Option Shuffling : No Is Question Mandatory : No Calculator : None Response Time : N.A Think Time : N.A Minimum Instruction Time : 0

Correct Marks : 4 Wrong Marks : 1

सूची I के साथ सूची II का मिलान कीजिए

सूची-I

- A भारत में 19वीं सदी की दरबारी कला
- B भारतीय कला के मूल तत्त्व
- C बंगाल के टेराकोटा मंदिर
- D संग्रहालय के मूल तत्त्व

सूची -II

- I एस.एन. दासगुप्त
- II एस.एस.बिस्वास, जुलेखा हक
- III मरिका सरदार
- IV टी. एम्ब्रोस और सी. पेन

नीचे दिए गए विकल्पों में से सही उत्तर का चयन कीजिए:

- 1 A-III, B-I, C-II, D-IV
- 2 A-III, B-II, C-I, D-IV
- 3 A- IV, B- III, C-II, D-I
- 4 A-II, B-IV, C-III, D-I

Options :

- 92090660373. 1
- 92090660374. 2
- 92090660375. 3
- 92090660376. 4

Question Number : 95 Question Id : 92090615279 Question Type : MCQ Option Shuffling : No Is Question Mandatory : No Calculator : None Response Time : N.A Think Time : N.A Minimum Instruction Time : 0

Correct Marks : 4 Wrong Marks : 1

Match List I with List II :

List I

- (A) The marriage of the virgin
- (B) The Last Supper
- (C) Sistine Chapel
- (D) Wheat field with crows

List II

- (I) Leonardo da vinci
- (II) Michelangelo
- (III) Vincent van Gogh
- (IV) Raphael

Choose the correct answer from the options given below :

- (1) (A)-(IV), (B)-(I), (C)-(II), (D)-(III)
- (2) (A)-(III), (B)-(II), (C)-(I), (D)-(IV)
- (3) (A)-(II), (B)-(IV), (C)-(III), (D)-(I)
- (4) (A)-(I), (B)-(III), (C)-(IV), (D)-(II)

Options :

92090660377. 1
92090660378. 2
92090660379. 3
92090660380. 4

Question Number : 95 Question Id : 92090615279 Question Type : MCQ Option Shuffling : No Is Question Mandatory : No Calculator : None Response Time : N.A Think Time : N.A Minimum Instruction Time : 0

Correct Marks : 4 Wrong Marks : 1

सूची I के साथ सूची II का मिलान कीजिए

सूची-I	सूची -II
A द मैरिज ऑफ द वर्जिन	I. लियानार्डो दा विंसी
B द लास्ट सपर	II. माइकल एंजेलो
C सिस्टीन चैपल	III. विंसेंट वॉन गॉग
D व्हीट फिल्ड विद क्रोज	IV. रफायेल

नीचे दिए गए विकल्पों में से सही उत्तर का चयन कीजिए:

- (1) A-IV, B-I, C-II, D-III
(2) A-III, B-II, C-I, D-IV
(3) A- II, B-IV, C-III, D-I
(4) A-I, B-III, C-IV, D-II

Options :

92090660377. 1
92090660378. 2
92090660379. 3
92090660380. 4

Question Number : 96 Question Id : 92090615280 Question Type : MCQ Option Shuffling : No Is Question Mandatory : No Calculator : None Response Time : N.A Think Time : N.A Minimum Instruction Time : 0

Correct Marks : 4 Wrong Marks : 1

Match List I with List II :

List I	List II
(A) Veiled Rebecca	(I) Patna Museum
(B) Didar gunj Yakshi	(II) National Museum
(C) Dancing girl	(III) Indian Museum
(D) Bharhut gallery	(IV) Salar Jung Museum

Choose the correct answer from the options given below :

- (1) (A)-(IV), (B)-(I), (C)-(II), (D)-(III)
- (2) (A)-(I), (B)-(III), (C)-(IV), (D)-(II)
- (3) (A)-(II), (B)-(I), (C)-(III), (D)-(IV)
- (4) (A)-(II), (B)-(III), (C)-(IV), (D)-(I)

Options :

92090660381. 1
92090660382. 2
92090660383. 3
92090660384. 4

Question Number : 96 Question Id : 92090615280 Question Type : MCQ Option Shuffling : No Is Question Mandatory : No Calculator : None Response Time : N.A Think Time : N.A Minimum Instruction Time : 0

Correct Marks : 4 Wrong Marks : 1

सूची I के साथ सूची II का मिलान कीजिए

सूची-I

- A वेल्ड रेबेका
B दीदारगंज यक्षी
C डांसिंग गर्ल
D भरहुत गैलरी

सूची-II

- I. पटना संग्रहालय
II. राष्ट्रीय संग्रहालय
III भारतीय संग्रहालय
IV सालार जंग संग्रहालय

नीचे दिए गए विकल्पों में से सही उत्तर का चयन कीजिए:

- (1) A-IV, B-I, C-II, D-III
- (2) A-I, B-III, C-IV, D-II
- (3) A- II, B-I, C-III, D-IV
- (4) A-II, B-III, C-IV, D-I

Options :

92090660381. 1
92090660382. 2
92090660383. 3
92090660384. 4

Question Number : 97 Question Id : 92090615281 Question Type : MCQ Option Shuffling : No Is Question Mandatory : No Calculator : None Response Time : N.A Think Time : N.A Minimum Instruction Time : 0

Correct Marks : 4 Wrong Marks : 1

Match List I with List II :

List I	List II
(A) Bismillakhan	(I) Bansuri
(B) Amjad Khan	(II) Table
(C) Ustad Rakkha	(III) Sarod
(D) Hari Prasad Chaurasia	(IV) Shenai

Choose the correct answer from the options given below :

- (1) (A)-(IV), (B)-(II), (C)-(I), (D)-(III)
(2) (A)-(I), (B)-(II), (C)-(III), (D)-(IV)
(3) (A)-(IV), (B)-(III), (C)-(II), (D)-(I)
(4) (A)-(III), (B)-(I), (C)-(IV), (D)-(II)

Options :

92090660385. 1
92090660386. 2
92090660387. 3
92090660388. 4

Question Number : 97 Question Id : 92090615281 Question Type : MCQ Option Shuffling : No Is Question Mandatory : No Calculator : None Response Time : N.A Think Time : N.A Minimum Instruction Time : 0

Correct Marks : 4 Wrong Marks : 1

सूची I के साथ सूची II का मिलान कीजिए

सूची-I

- A बिस्मिल्ला खान
- B अमजद खान
- C उस्ताद रक्खा
- D हरि प्रसाद चौरसिया

सूची -II

- I. बांसुरी
- II. तबला
- III सरोद
- IV शहनाई

नीचे दिए गए विकल्पों में से सही उत्तर का चयन कीजिए:

- (1) A-IV, B-II, C-I, D-III
- (2) A-I, B-II, C-III, D-IV
- (3) A- IV, B-III, C-II, D-I
- (4) A-III, B-I, C-IV, D-II

Options :

- 92090660385. 1
- 92090660386. 2
- 92090660387. 3
- 92090660388. 4

Question Number : 98 Question Id : 92090615282 Question Type : MCQ Option Shuffling : No Is Question Mandatory : No Calculator : None Response Time : N.A Think Time : N.A Minimum Instruction Time : 0

Correct Marks : 4 Wrong Marks : 1

Match List I with List II :

List I	List II
(A) 2500-2000 BC	(I) Mahavira was born
(B) 1000-600 BC	(II) The Aryans settled through Northen India
(C) 6 th century BC	(III) Expansion of Indus Valley Civilisation in Sindh
(D) 327 BC	(IV) Expedition of Alexander the great to the punjab and sindh

Choose the correct answer from the options given below :

- (1) (A)-(I), (B)-(II), (C)-(III), (D)-(IV)
- (2) (A)-(III), (B)-(II), (C)-(IV), (D)-(I)
- (3) (A)-(II), (B)-(III), (C)-(I), (D)-(IV)
- (4) (A)-(III), (B)-(II), (C)-(I), (D)-(IV)

Options :

- 92090660389. 1
- 92090660390. 2
- 92090660391. 3
- 92090660392. 4

Question Number : 98 Question Id : 92090615282 Question Type : MCQ Option Shuffling : No Is Question Mandatory : No Calculator : None Response Time : N.A Think Time : N.A Minimum Instruction Time : 0

Correct Marks : 4 Wrong Marks : 1

सूची I के साथ सूची II का मिलान कीजिए

सूची-I

- A. 2500 – 2000 B C
- B. 1000 - 600 B C
- C. 6 ठी शताब्दी B C
- D. 327 B C

सूची-II

- I महावीर का जन्म
- II आर्यों की पूरे भारत में बस्तियां
- III सिंधु घाटी सभ्यता का सिंध में विस्तार
- IV पंजाब और सिंध में सिकंदर महान का आगमन

नीचे दिए गए विकल्पों में से सही उत्तर का चयन कीजिए:

- (1) A-I, B-II, C-III, D-IV
- (2) A-III, B-II, C-IV, D-I
- (3) A- II, B-III, C-I, D-IV
- (4) A-III, B-II, C-I, D-IV

Options :

- 92090660389. 1
- 92090660390. 2
- 92090660391. 3
- 92090660392. 4

Question Number : 99 Question Id : 92090615283 Question Type : MCQ Option Shuffling : No Is Question Mandatory : No Calculator : None Response Time : N.A Think Time : N.A Minimum Instruction Time : 0

Correct Marks : 4 Wrong Marks : 1

Match List I with List II :

List I

- (A) The Gandhara school of Art.
- (B) The Mathura school of Art.
- (C) Odisha school
- (D) Dravida school

List II

- (I) Lingaraj Temple
- (II) Graeco-Buddhist school
- (III) Kushan
- (IV) Brihadeswara temple, Tanjavur

Choose the correct answer from the options given below :

- (1) (A)-(II), (B)-(III), (C)-(IV), (D)-(I)
- (2) (A)-(I), (B)-(II), (C)-(IV), (D)-(III)
- (3) (A)-(II), (B)-(III), (C)-(I), (D)-(IV)
- (4) (A)-(III), (B)-(IV), (C)-(II), (D)-(I)

Options :

92090660393. 1
92090660394. 2
92090660395. 3
92090660396. 4

**Question Number : 99 Question Id : 92090615283 Question Type : MCQ Option Shuffling : No Is
Question Mandatory : No Calculator : None Response Time : N.A Think Time : N.A Minimum
Instruction Time : 0**

Correct Marks : 4 Wrong Marks : 1

सूची I के साथ सूची II का मिलान कीजिए

- | सूची-I | सूची-II |
|------------------------|------------------------------|
| A. गंधार स्कूल ऑफ आर्ट | I. लिंगराज मंदिर |
| B. मथुरा स्कूल ऑफ आर्ट | II. ग्रीको - बुद्धिस्ट स्कूल |
| C. ओडिशा स्कूल | III. कुशान |
| D. द्रविड़ स्कूल | IV. बृहदेश्वर मंदिर तंजावुर |

नीचे दिए गए विकल्पों में से सही उत्तर का चयन कीजिए:

- (1) A-II, B-III, C-IV, D-I
(2) A-I, B-II, C-IV, D-III
(3) A- II, B-III, C-I, D-IV
(4) A-III, B-IV, C-II, D-I

Options :

92090660393. 1
92090660394. 2
92090660395. 3
92090660396. 4

**Question Number : 100 Question Id : 92090615284 Question Type : MCQ Option Shuffling : No Is
Question Mandatory : No Calculator : None Response Time : N.A Think Time : N.A Minimum
Instruction Time : 0**

Correct Marks : 4 Wrong Marks : 1

Match List I with List II :

List I	List II
(A) Vincent Van Gogh	(I) Italian Painter
(B) Pablo Picasso	(II) Spanish Painter
(C) Leonardo da vinci	(III) Dutch Painter
(D) Oskar- claudio Monet	(IV) French Painter

Choose the correct answer from the options given below :

- (1) (A)-(IV), (B)-(II), (C)-(I), (D)-(III)
- (2) (A)-(III), (B)-(II), (C)-(I), (D)-(IV)
- (3) (A)-(I), (B)-(IV), (C)-(III), (D)-(II)
- (4) (A)-(II), (B)-(III), (C)-(IV), (D)-(I)

Options :

92090660397. 1
92090660398. 2
92090660399. 3
92090660400. 4

Question Number : 100 Question Id : 92090615284 Question Type : MCQ Option Shuffling : No Is Question Mandatory : No Calculator : None Response Time : N.A Think Time : N.A Minimum Instruction Time : 0

Correct Marks : 4 Wrong Marks : 1

सूची I के साथ सूची II का मिलान कीजिए

सूची-I	सूची - II
A. विसेंट वॉर्न गॉग	I. इतालवी पेंट
B. पाबलो पिकासो	II. स्पैनिश पेंट
C. लियानार्डो दा विंसी	III. डच पेंट
D. ऑस्कर – क्लाउडो मोनेट	IV. फ्रेंच पेंट

नीचे दिए गए विकल्पों में से सही उत्तर का चयन कीजिए:

- (1) A-IV, B-II, C-I, D-III
- (2) A-III, B-II, C-I, D-IV
- (3) A- I, B-IV, C-III, D-II
- (4) A-II, B-III, C-IV, D-I

Options :

92090660397. 1
92090660398. 2

92090660399. 3

92090660400. 4