

# National Testing Agency

**Question Paper Name :** History of Art Eng 11th June 2023 Shift 2  
**Subject Name :** History of Art Eng  
**Creation Date :** 2023-06-11 20:39:58  
**Duration :** 120  
**Total Marks :** 400  
**Display Marks:** Yes

## History of Art

**Group Number :** 1  
**Group Id :** 686340132  
**Group Maximum Duration :** 0  
**Group Minimum Duration :** 120  
**Show Attended Group? :** No  
**Edit Attended Group? :** No  
**Break time :** 0  
**Group Marks :** 400  
**Is this Group for Examiner? :** No  
**Examiner permission :** Cant View  
**Show Progress Bar? :** No

## Part A

**Section Id :** 686340263  
**Section Number :** 1  
**Section type :** Online  
**Mandatory or Optional :** Mandatory  
**Number of Questions :** 21  
**Number of Questions to be attempted :** 21  
**Section Marks :** 100  
**Enable Mark as Answered Mark for Review and Clear Response :** Yes  
**Maximum Instruction Time :** 0  
**Sub-Section Number :** 1  
**Sub-Section Id :** 686340432  
**Question Shuffling Allowed :** No  
**Is Section Default? :** null

**Question Id : 68634013264 Question Type : COMPREHENSION Sub Question Shuffling Allowed : Yes Group Comprehension Questions : No Question Pattern Type : NonMatrix Calculator : None Response Time : N.A Think Time : N.A Minimum Instruction Time : 0**  
**Question Numbers : (1 to 5)**  
**Question Label : Comprehension**

Beijing: As China tries to slow its demographic decline , women like Chen Luojin could be part of the solution. The divorced 33-years-old lives in Chengdu , capital of the southwestern Sichuan province, which legalised registration of children by unmarried women in february , something China is considering implementing nationwide to address record low birth rates .

The changes mean unmarried woman can take paid maternity leave and receive child subsidies previously only available to married couples . Crucially ,Chen could access invitro fertility (IVF) treatment legally in a private clinic . She is now 10 weeks pregnant."Becoming a single parent is not for everyone but I am happy with the decision ,"said Chen, who works in logistics ."Equally, getting married or not is for each individual to decide . We have liberalised the policies here and I know a lot of single women are doing IVF."

Concerned about China's first population drop in six decades and its rapid ageing , the government's political advisers proposed in March that single and unmarried women should have access to egg freezing and IVF treatment .But leaders haven't commented publicly on the recommendations.

Liberalising IVF nationwide could unleash more demand for fertility treatment in what is already the world's biggest market ,straining limited fertility services . Some investors in the industry see an opportunity to expand .

" If China changes their policy to allow single women to have children ,this can result in an increase of IVF demand ,"said Yve Lyppens , director of business development for Asia Pacific at INVO Bioscience ,which is awaiting regulatory approval to launch its IVF technology in China after signing a distribution agreement with Guangzhou-based Onesky Holdings last year .

Shanghai and the southern Guangdong province have also permitted unmarried women to register their children but IVF services for single women remain banned

#### Sub questions

**Question Number : 1 Question Id : 68634013265 Question Type : MCQ Option Shuffling : No Is Question Mandatory : No Calculator : None Response Time : N.A Think Time : N.A Minimum Instruction Time : 0 Correct Marks : 4 Wrong Marks : 1**

Leberalising IVF means : -

1. Popularising IVF treatment.
2. Imposing fresh restrictions on IVF treatment .
3. Removing stingent conditions and allowing access to IVF treatment .
4. People who availed IVF treatment to be set free from jail.

#### Options :

- 68634052401. 1
- 68634052402. 2
- 68634052403. 3
- 68634052404. 4

**Question Number : 2 Question Id : 68634013266 Question Type : MCQ Option Shuffling : No Is Question Mandatory : No Calculator : None Response Time : N.A Think Time : N.A Minimum Instruction Time : 0 Correct Marks : 4 Wrong Marks : 1**

If IVF treatment is legalised as per the passage who would get paid maternity leave and child subsidies

1. Married and unmarried women
2. Only unmarried women
3. Only married women
4. Single women who became single parent through IVF treatment

**Options :**

- 68634052405. 1
- 68634052406. 2
- 68634052407. 3
- 68634052408. 4

**Question Number : 3 Question Id : 68634013267 Question Type : MCQ Option Shuffling : No Is Question Mandatory : No Calculator : None Response Time : N.A Think Time : N.A Minimum Instruction Time : 0 Correct Marks : 4 Wrong Marks : 1**

The correct statement given is

1. Chengdu is the capital of sichuan province.
2. China has age old policies to allow single woman to have children
3. China is suffering from demographic decline.
4. Chen works in logics company

**Options :**

- 68634052409. 1
- 68634052410. 2
- 68634052411. 3
- 68634052412. 4

**Question Number : 4 Question Id : 68634013268 Question Type : MCQ Option Shuffling : No Is Question Mandatory : No Calculator : None Response Time : N.A Think Time : N.A Minimum Instruction Time : 0 Correct Marks : 4 Wrong Marks : 1**

Antonym of the word liberal is :-

1. berserk
2. berth
3. bento
4. bigot

**Options :**

- 68634052413. 1
- 68634052414. 2
- 68634052415. 3
- 68634052416. 4

**Question Number : 5 Question Id : 68634013269 Question Type : MCQ Option Shuffling : No Is Question Mandatory : No Calculator : None Response Time : N.A Think Time : N.A Minimum Instruction Time : 0 Correct Marks : 4 Wrong Marks : 1**

According to this paragraph who is the Director of Business Development for Asia pacific at INVO bioscience ?

1. Yev Lypeens
2. Yve Lyppens
3. Yiv Lyappen
4. Yve Lyippen

**Options :**

- 68634052417. 1
- 68634052418. 2
- 68634052419. 3
- 68634052420. 4

**Question Id : 68634013264 Question Type : COMPREHENSION Sub Question Shuffling Allowed : Yes Group Comprehension Questions : No Question Pattern Type : NonMatrix Calculator : None Response Time : N.A Think Time : N.A Minimum Instruction Time : 0**

**Question Numbers : (1 to 5)**

Question Label : Comprehension

Beijing: As China tries to slow its demographic decline , women like Chen Luojin could be part of the solution. The divorced 33-years-old lives in Chengdu , capital of the southwestern Sichuan province, which legalised registration of children by unmarried women in february , something China is considering implementing nationwide to address record low birth rates .

The changes mean unmarried woman can take paid maternity leave and receive child subsidies previously only available to married couples . Crucially ,Chen could access invitro fertility (IVF) treatment legally in a private clinic . She is now 10 weeks pregnant."Becoming a single parent is not for everyone but I am happy with the decision ,"said Chen, who works in logistics ."Equally, getting married or not is for each individual to decide . We have liberalised the policies here and I know a lot of single women are doing IVF."

Concerned about China's first population drop in six decades and its rapid ageing , the government's political advisers proposed in March that single and unmarried women should have access to egg freezing and IVF treatment .But leaders haven't commented publicly on the recommendations.

Liberalising IVF nationwide could unleash more demand for fertility treatment in what is already the world's biggest market ,straining limited fertility services . Some investors in the industry see an opportunity to expand .

" If China changes their policy to allow single women to have children ,this can result in an increase of IVF demand ,"said Yve Lyppens , director of business development for Asia Pacific at INVO Bioscience ,which is awaiting regulatory approval to launch its IVF technology in China after signing a distribution agreement with Guangzhou-based Onesky Holdings last year .

Shanghai and the southern Guangdong province have also permitted unmarried women to register their children but IVF services for single women remain banned

**Sub questions**

**Question Number : 1 Question Id : 68634013265 Question Type : MCQ Option Shuffling : No Is Question Mandatory : No Calculator : None Response Time : N.A Think Time : N.A Minimum Instruction Time : 0 Correct Marks : 4 Wrong Marks : 1**

Leberalising IVF means : -

1. Popularising IVF treatment.
2. Imposing fresh restrictions on IVF treatment .
3. Removing stringent conditions and allowing access to IVF treament .
4. People who availed IVF treatment to be set free from jail.

**Options :**

- 68634052401. 1
- 68634052402. 2
- 68634052403. 3
- 68634052404. 4

**Question Number : 2 Question Id : 68634013266 Question Type : MCQ Option Shuffling : No Is Question Mandatory : No Calculator : None Response Time : N.A Think Time : N.A Minimum Instruction Time : 0 Correct Marks : 4 Wrong Marks : 1**

If IVF treatment is legalised as per the passage who would get paid maternity leave and child subsidies

1. Married and unmarried women
2. Only unmarried women
3. Only married women
4. Single women who became single parent through IVF treatment

**Options :**

- 68634052405. 1
- 68634052406. 2
- 68634052407. 3
- 68634052408. 4

**Question Number : 3 Question Id : 68634013267 Question Type : MCQ Option Shuffling : No Is Question Mandatory : No Calculator : None Response Time : N.A Think Time : N.A Minimum Instruction Time : 0 Correct Marks : 4 Wrong Marks : 1**

The correct statement given is

1. Chengdu is the capital of sichuan province.
2. China has age old policies to allow single woman to have children
3. China is suffering from demographic decline.
4. Chen works in logics company

**Options :**

- 68634052409. 1
- 68634052410. 2
- 68634052411. 3
- 68634052412. 4

**Question Number : 4 Question Id : 68634013268 Question Type : MCQ Option Shuffling : No Is Question Mandatory : No Calculator : None Response Time : N.A Think Time : N.A Minimum Instruction Time : 0 Correct Marks : 4 Wrong Marks : 1**

Antonym of the word liberal is :-

- 1. berserk
- 2. berth
- 3. bento
- 4. bigot

**Options :**

- 68634052413. 1
- 68634052414. 2
- 68634052415. 3
- 68634052416. 4

**Question Number : 5 Question Id : 68634013269 Question Type : MCQ Option Shuffling : No Is Question Mandatory : No Calculator : None Response Time : N.A Think Time : N.A Minimum Instruction Time : 0 Correct Marks : 4 Wrong Marks : 1**

According to this paragraph who is the Director of Business Development for Asia pacific at INVO bioscience ?

- 1. Yev Lypeens
- 2. Yve Lyppens
- 3. Yiv Lyappen
- 4. Yve Lyippen

**Options :**

- 68634052417. 1
- 68634052418. 2
- 68634052419. 3
- 68634052420. 4

<b>Sub-Section Number :</b>	2
<b>Sub-Section Id :</b>	686340433
<b>Question Shuffling Allowed :</b>	Yes
<b>Is Section Default? :</b>	null

**Question Number : 6 Question Id : 68634013270 Question Type : MCQ Option Shuffling : No Is Question Mandatory : No Calculator : None Response Time : N.A Think Time : N.A Minimum Instruction Time : 0 Correct Marks : 4 Wrong Marks : 1**

Choose the correctly spelt word from the given options:

1. TIMORIGENIC
2. TUMORIGENIC
3. TOMORGENIC
4. TUMARGENIC

**Options :**

- 68634052421. 1
- 68634052422. 2
- 68634052423. 3
- 68634052424. 4

**Question Number : 6 Question Id : 68634013270 Question Type : MCQ Option Shuffling : No Is Question Mandatory : No Calculator : None Response Time : N.A Think Time : N.A Minimum Instruction Time : 0 Correct Marks : 4 Wrong Marks : 1**

Choose the correctly spelt word from the given options:

1. TIMORIGENIC
2. TUMORIGENIC
3. TOMORGENIC
4. TUMARGENIC

**Options :**

- 68634052421. 1
- 68634052422. 2
- 68634052423. 3
- 68634052424. 4

**Question Number : 7 Question Id : 68634013271 Question Type : MCQ Option Shuffling : No Is Question Mandatory : No Calculator : None Response Time : N.A Think Time : N.A Minimum Instruction Time : 0 Correct Marks : 4 Wrong Marks : 1**

Transform the assertive sentence to exclamatory -

The falcon skims the air elegantly.

1. Bravo! The falcon is skimming
2. Wow! The falcon skims
3. The falcon skims elegantly in the air!
4. How elegantly the falcon skims the air!

**Options :**

- 68634052425. 1
- 68634052426. 2
- 68634052427. 3
- 68634052428. 4

**Question Number : 7 Question Id : 68634013271 Question Type : MCQ Option Shuffling : No Is Question Mandatory : No Calculator : None Response Time : N.A Think Time : N.A Minimum Instruction Time : 0 Correct Marks : 4 Wrong Marks : 1**

Transform the assertive sentence to exclamatory -

The falcon skims the air elegantly.

1. Bravo! The falcon is skimming
2. Wow! The falcon skims
3. The falcon skims elegantly in the air!
4. How elegantly the falcon skims the air!

**Options :**

- 68634052425. 1
- 68634052426. 2
- 68634052427. 3
- 68634052428. 4

**Question Number : 8 Question Id : 68634013272 Question Type : MCQ Option Shuffling : No Is Question Mandatory : No Calculator : None Response Time : N.A Think Time : N.A Minimum Instruction Time : 0 Correct Marks : 4 Wrong Marks : 1**

Synonym of the word ' TRANSCEND ' is:

1. Lower
2. Climb
3. Cross
4. Energise

**Options :**

- 68634052429. 1
- 68634052430. 2
- 68634052431. 3
- 68634052432. 4

**Question Number : 8 Question Id : 68634013272 Question Type : MCQ Option Shuffling : No Is Question Mandatory : No Calculator : None Response Time : N.A Think Time : N.A Minimum Instruction Time : 0 Correct Marks : 4 Wrong Marks : 1**

Synonym of the word ' TRANSCEND ' is:

1. Lower
2. Climb
3. Cross
4. Energise

**Options :**



68634052429. 1  
68634052430. 2  
68634052431. 3  
68634052432. 4

**Question Number : 9 Question Id : 68634013273 Question Type : MCQ Option Shuffling : No Is Question Mandatory : No Calculator : None Response Time : N.A Think Time : N.A Minimum Instruction Time : 0 Correct Marks : 4 Wrong Marks : 1**

'A fully grown male horse kept for breeding' is called:

1. Stride
2. Stooge
3. Stable
4. Stallion

**Options :**

68634052433. 1  
68634052434. 2  
68634052435. 3  
68634052436. 4

**Question Number : 9 Question Id : 68634013273 Question Type : MCQ Option Shuffling : No Is Question Mandatory : No Calculator : None Response Time : N.A Think Time : N.A Minimum Instruction Time : 0 Correct Marks : 4 Wrong Marks : 1**

'A fully grown male horse kept for breeding' is called:

1. Stride
2. Stooge
3. Stable
4. Stallion

**Options :**

68634052433. 1  
68634052434. 2  
68634052435. 3  
68634052436. 4

**Question Number : 10 Question Id : 68634013274 Question Type : MCQ Option Shuffling : No Is Question Mandatory : No Calculator : None Response Time : N.A Think Time : N.A Minimum Instruction Time : 0 Correct Marks : 4 Wrong Marks : 1**

Fill in the blanks with appropriate prepositions.

A high school teacher is to face trial \_\_\_ France after setting fire \_\_\_\_\_ his pupils English exam papers to protest \_\_\_\_\_ the state education system.

1. in, of, to
2. in, with, for
3. in, to, at
4. in, on, before

**Options :**

- 68634052437. 1
- 68634052438. 2
- 68634052439. 3
- 68634052440. 4

**Question Number : 10 Question Id : 68634013274 Question Type : MCQ Option Shuffling : No Is Question Mandatory : No Calculator : None Response Time : N.A Think Time : N.A Minimum Instruction Time : 0**

**Correct Marks : 4 Wrong Marks : 1**

Fill in the blanks with appropriate prepositions.

A high school teacher is to face trial \_\_\_ France after setting fire \_\_\_\_\_ his pupils English exam papers to protest \_\_\_\_\_ the state education system.

1. in, of, to
2. in, with, for
3. in, to, at
4. in, on, before

**Options :**

- 68634052437. 1
- 68634052438. 2
- 68634052439. 3
- 68634052440. 4

**Question Number : 11 Question Id : 68634013275 Question Type : MCQ Option Shuffling : No Is Question Mandatory : No Calculator : None Response Time : N.A Think Time : N.A Minimum Instruction Time : 0**

**Correct Marks : 4 Wrong Marks : 1**

The average age of a boy and a girl is 30 years. The ratio of their ages is 5:7. Ages of the boy and girl respectively:

1. 30 years, 25 years
2. 25 years, 35 years
3. 25 years, 40 years
4. 30 years , 42 years

**Options :**

- 68634052441. 1
- 68634052442. 2
- 68634052443. 3
- 68634052444. 4

**Question Number : 11 Question Id : 68634013275 Question Type : MCQ Option Shuffling : No Is Question Mandatory : No Calculator : None Response Time : N.A Think Time : N.A Minimum Instruction Time : 0**

**Correct Marks : 4 Wrong Marks : 1**

The average age of a boy and a girl is 30 years. The ratio of their ages is 5:7. Ages of the boy and girl respectively:

- 1. 30 years, 25 years
- 2. 25 years, 35 years
- 3. 25 years, 40 years
- 4. 30 years , 42 years

**Options :**

- 68634052441. 1
- 68634052442. 2
- 68634052443. 3
- 68634052444. 4

**Question Number : 12 Question Id : 68634013276 Question Type : MCQ Option Shuffling : No Is Question Mandatory : No Calculator : None Response Time : N.A Think Time : N.A Minimum Instruction Time : 0**

**Correct Marks : 4 Wrong Marks : 1**

An article is marked for ₹ 200. A shopkeeper earns 25% profit even after allowing  $12\frac{1}{2}\%$  discount on it. What is the cost price of the article (in ₹)?

- 1. 180
- 2. 165
- 3. 140
- 4. 112.50

**Options :**

- 68634052445. 1
- 68634052446. 2
- 68634052447. 3
- 68634052448. 4

**Question Number : 12 Question Id : 68634013276 Question Type : MCQ Option Shuffling : No Is Question Mandatory : No Calculator : None Response Time : N.A Think Time : N.A Minimum Instruction Time : 0**

**Correct Marks : 4 Wrong Marks : 1**

An article is marked for ₹ 200. A shopkeeper earns 25% profit even after allowing  $12\frac{1}{2}\%$  discount on it. What is the cost price of the article (in ₹)?

1. 180
2. 165
3. 140
4. 112.50

**Options :**

68634052445. 1  
68634052446. 2  
68634052447. 3  
68634052448. 4

**Question Number : 13 Question Id : 68634013277 Question Type : MCQ Option Shuffling : No Is Question Mandatory : No Calculator : None Response Time : N.A Think Time : N.A Minimum Instruction Time : 0 Correct Marks : 4 Wrong Marks : 1**

In how many years will a sum of ₹ 800 at 10% per annum compounded semi-annually become ₹ 926.10?

1.  $1\frac{1}{3}$  years
2.  $1\frac{1}{2}$  years
3.  $2\frac{1}{3}$  years
4. 3 years

**Options :**

68634052449. 1  
68634052450. 2  
68634052451. 3  
68634052452. 4

**Question Number : 13 Question Id : 68634013277 Question Type : MCQ Option Shuffling : No Is Question Mandatory : No Calculator : None Response Time : N.A Think Time : N.A Minimum Instruction Time : 0 Correct Marks : 4 Wrong Marks : 1**

In how many years will a sum of ₹ 800 at 10% per annum compounded semi-annually become ₹ 926.10?

1.  $1\frac{1}{3}$  years

2.  $1\frac{1}{2}$  years

3.  $2\frac{1}{3}$  years

4. 3 years

**Options :**

68634052449. 1

68634052450. 2

68634052451. 3

68634052452. 4

**Question Number : 14 Question Id : 68634013278 Question Type : MCQ Option Shuffling : No Is Question Mandatory : No Calculator : None Response Time : N.A Think Time : N.A Minimum Instruction Time : 0**

**Correct Marks : 4 Wrong Marks : 1**

Five men working 8 hours per day take 6 days to do a work. How many days will 12 men take to do the same work if they work for 10 hours per day?

1.  $3\frac{1}{2}$

2.  $3\frac{1}{3}$

3. 3

4. 2

**Options :**

68634052453. 1

68634052454. 2

68634052455. 3

68634052456. 4

**Question Number : 14 Question Id : 68634013278 Question Type : MCQ Option Shuffling : No Is Question Mandatory : No Calculator : None Response Time : N.A Think Time : N.A Minimum Instruction Time : 0**

**Correct Marks : 4 Wrong Marks : 1**

Five men working 8 hours per day take 6 days to do a work. How many days will 12 men take to do the same work if they work for 10 hours per day?

1.  $3\frac{1}{2}$

2.  $3\frac{1}{3}$

3. 3

4. 2

**Options :**

68634052453. 1

68634052454. 2

68634052455. 3

68634052456. 4

**Question Number : 15 Question Id : 68634013279 Question Type : MCQ Option Shuffling : No Is Question Mandatory : No Calculator : None Response Time : N.A Think Time : N.A Minimum Instruction Time : 0**

**Correct Marks : 4 Wrong Marks : 1**

The height of a room is 40% of semi-perimeter of the floor. Akshay wanted to put wall paper on the walls of his room. It cost ₹ 5,200 to put 50 cm wide wall paper at the rate of ₹40/m leaving an area of  $15\text{ m}^2$  for doors and windows . Height of room (in m) is:

1. 3.6

2. 3.8

3. 4

4. 3

**Options :**

68634052457. 1

68634052458. 2

68634052459. 3

68634052460. 4

**Question Number : 15 Question Id : 68634013279 Question Type : MCQ Option Shuffling : No Is Question Mandatory : No Calculator : None Response Time : N.A Think Time : N.A Minimum Instruction Time : 0**

**Correct Marks : 4 Wrong Marks : 1**

The height of a room is 40% of semi-perimeter of the floor. Akshay wanted to put wall paper on the walls of his room. It cost ₹ 5,200 to put 50 cm wide wall paper at the rate of ₹40/m leaving an area of  $15\text{ m}^2$  for doors and windows . Height of room (in m) is:

1. 3.6

2. 3.8

3. 4

4. 3

**Options :**

- 68634052457. 1
- 68634052458. 2
- 68634052459. 3
- 68634052460. 4

**Question Number : 16 Question Id : 68634013280 Question Type : MCQ Option Shuffling : No Is Question Mandatory : No Calculator : None Response Time : N.A Think Time : N.A Minimum Instruction Time : 0**

**Correct Marks : 4 Wrong Marks : 1**

Identify the water - image of the combination

"96FSH52"

- 1. 9 6 E 2 H 2 5
- 2. 6 9 E 2 H 2 5
- 3. 9 6 E 2 H 2 5
- 4. 6 9 E 2 H 5 2

**Options :**

- 68634052461. 1
- 68634052462. 2
- 68634052463. 3
- 68634052464. 4

**Question Number : 16 Question Id : 68634013280 Question Type : MCQ Option Shuffling : No Is Question Mandatory : No Calculator : None Response Time : N.A Think Time : N.A Minimum Instruction Time : 0**

**Correct Marks : 4 Wrong Marks : 1**

Identify the water - image of the combination

"96FSH52"

- 1. 9 6 E 2 H 2 5
- 2. 6 9 E 2 H 2 5
- 3. 9 6 E 2 H 2 5
- 4. 6 9 E 2 H 5 2

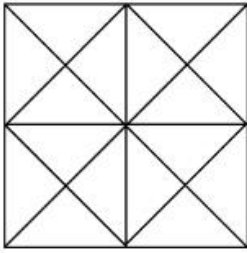
**Options :**

- 68634052461. 1
- 68634052462. 2
- 68634052463. 3
- 68634052464. 4

**Question Number : 17 Question Id : 68634013281 Question Type : MCQ Option Shuffling : No Is Question Mandatory : No Calculator : None Response Time : N.A Think Time : N.A Minimum Instruction Time : 0**

**Correct Marks : 4 Wrong Marks : 1**

In the following figure find the number of triangles and squares ?



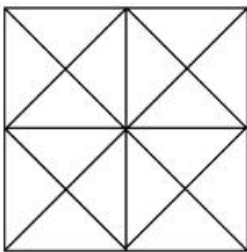
1. 44 triangles, 10 squares
2. 12 triangles, 14 squares
3. 27 triangles , 6 squares
4. 32 triangles , 12 squares

**Options :**

- 68634052465. 1
- 68634052466. 2
- 68634052467. 3
- 68634052468. 4

**Question Number : 17 Question Id : 68634013281 Question Type : MCQ Option Shuffling : No Is Question Mandatory : No Calculator : None Response Time : N.A Think Time : N.A Minimum Instruction Time : 0 Correct Marks : 4 Wrong Marks : 1**

In the following figure find the number of triangles and squares ?



1. 44 triangles, 10 squares
2. 12 triangles, 14 squares
3. 27 triangles , 6 squares
4. 32 triangles , 12 squares

**Options :**

- 68634052465. 1
- 68634052466. 2
- 68634052467. 3
- 68634052468. 4

**Question Number : 18 Question Id : 68634013282 Question Type : MCQ Option Shuffling : No Is Question Mandatory : No Calculator : None Response Time : N.A Think Time : N.A Minimum Instruction Time : 0 Correct Marks : 4 Wrong Marks : 1**



Select the related number from the given alternatives:

$$DXH : 4 \times 8 :: M \times Q : ?$$

1.  $12 \times 17$
2.  $13 \times 17$
3.  $12 \times 16$
4.  $14 \times 18$

**Options :**

- 68634052469. 1
- 68634052470. 2
- 68634052471. 3
- 68634052472. 4

**Question Number : 18 Question Id : 68634013282 Question Type : MCQ Option Shuffling : No Is Question Mandatory : No Calculator : None Response Time : N.A Think Time : N.A Minimum Instruction Time : 0**

**Correct Marks : 4 Wrong Marks : 1**

Select the related number from the given alternatives:

$$DXH : 4 \times 8 :: M \times Q : ?$$

1.  $12 \times 17$
2.  $13 \times 17$
3.  $12 \times 16$
4.  $14 \times 18$

**Options :**

- 68634052469. 1
- 68634052470. 2
- 68634052471. 3
- 68634052472. 4

**Question Number : 19 Question Id : 68634013283 Question Type : MCQ Option Shuffling : No Is Question Mandatory : No Calculator : None Response Time : N.A Think Time : N.A Minimum Instruction Time : 0**

**Correct Marks : 4 Wrong Marks : 1**

As per the given series 9, 15, 23, 33, 45, 59 observe the series 16, (A), (B), (C), (D), (E) and by establishing the same relation find what will come in place of (D) ?

1. 46
2. 60
3. 34
4. 64

**Options :**

- 68634052473. 1
- 68634052474. 2

68634052475. 3

68634052476. 4

**Question Number : 19 Question Id : 68634013283 Question Type : MCQ Option Shuffling : No Is Question Mandatory : No Calculator : None Response Time : N.A Think Time : N.A Minimum Instruction Time : 0**

**Correct Marks : 4 Wrong Marks : 1**

As per the given series 9, 15, 23, 33, 45, 59 observe the series 16, (A), (B), (C), (D), (E) and by establishing the same relation find what will come in place of (D) ?

1. 46

2. 60

3. 34

4. 64

**Options :**

68634052473. 1

68634052474. 2

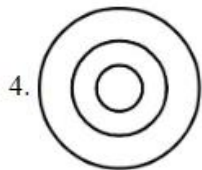
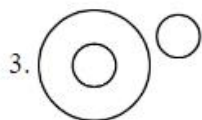
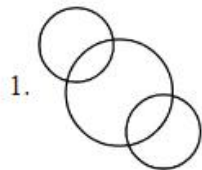
68634052475. 3

68634052476. 4

**Question Number : 20 Question Id : 68634013284 Question Type : MCQ Option Shuffling : No Is Question Mandatory : No Calculator : None Response Time : N.A Think Time : N.A Minimum Instruction Time : 0**

**Correct Marks : 4 Wrong Marks : 1**

Which of the following represents the relationship among factory, machinery and product:



**Options :**

68634052477. 1

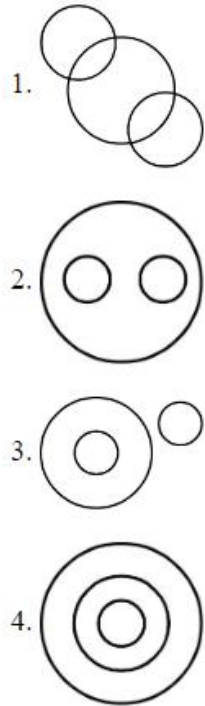
68634052478. 2

68634052479. 3

68634052480. 4

**Question Number : 20 Question Id : 68634013284 Question Type : MCQ Option Shuffling : No Is Question Mandatory : No Calculator : None Response Time : N.A Think Time : N.A Minimum Instruction Time : 0 Correct Marks : 4 Wrong Marks : 1**

Which of the following represents the relationship among factory, machinery and product:



**Options :**

- 68634052477. 1
- 68634052478. 2
- 68634052479. 3
- 68634052480. 4

**Question Number : 21 Question Id : 68634013285 Question Type : MCQ Option Shuffling : No Is Question Mandatory : No Calculator : None Response Time : N.A Think Time : N.A Minimum Instruction Time : 0 Correct Marks : 4 Wrong Marks : 1**

The statements which are true about Governor of a state:

- A. He is appointed by the President for five years.
- B. He should be above 45 years of age and should be an Indian citizen .
- C. Executive power of the state is vested in him.
- D. Chief minister and vice Chancellor of state university are appointed by Governor of a state.

- 1. A, D only
- 2. A, B and D only
- 3. A, C and D only
- 4. A, B and C only

**Options :**

68634052481. 1  
68634052482. 2  
68634052483. 3  
68634052484. 4

**Question Number : 21 Question Id : 68634013285 Question Type : MCQ Option Shuffling : No Is Question Mandatory : No Calculator : None Response Time : N.A Think Time : N.A Minimum Instruction Time : 0**

**Correct Marks : 4 Wrong Marks : 1**

The statements which are true about Governor of a state:

- A. He is appointed by the President for five years.
- B. He should be above 45 years of age and should be an Indian citizen .
- C. Executive power of the state is vested in him.
- D. Chief minister and vice Chancellor of state university are appointed by Governor of a state.

- 1. A, D only
- 2. A, B and D only
- 3. A, C and D only
- 4. A, B and C only

**Options :**

68634052481. 1  
68634052482. 2  
68634052483. 3  
68634052484. 4

**Question Number : 22 Question Id : 68634013286 Question Type : MCQ Option Shuffling : No Is Question Mandatory : No Calculator : None Response Time : N.A Think Time : N.A Minimum Instruction Time : 0**

**Correct Marks : 4 Wrong Marks : 1**

Out of the following , which is the highest Indian Literacy award:

- 1. Jnanpith Award
- 2. Sahitya Academi Award
- 3. Yuva Puraskar
- 4. Booker prize

**Options :**

68634052485. 1  
68634052486. 2  
68634052487. 3  
68634052488. 4

**Question Number : 22 Question Id : 68634013286 Question Type : MCQ Option Shuffling : No Is Question Mandatory : No Calculator : None Response Time : N.A Think Time : N.A Minimum Instruction Time : 0**

**Correct Marks : 4 Wrong Marks : 1**

Out of the following , which is the highest Indian Literacy award:

1. Jnanpith Award
2. Sahitya Academi Award
3. Yuva Puraskar
4. Booker prize

**Options :**

68634052485. 1  
68634052486. 2  
68634052487. 3  
68634052488. 4

**Question Number : 23 Question Id : 68634013287 Question Type : MCQ Option Shuffling : No Is Question Mandatory : No Calculator : None Response Time : N.A Think Time : N.A Minimum Instruction Time : 0 Correct Marks : 4 Wrong Marks : 1**

Match List I with List II

LIST I Folk Dance		LIST II State	
A.	Chhau dance	I.	Maharashtra
B.	Lavami	II.	Bihar
C.	Kuchipudi	III.	Andhra Pradesh
D.	Bidesiya	IV.	Jharkhand

Choose the correct answer from the options given below:

1. A-I, B-II, C-III, D-IV
2. A-I, B-IV, C-II, D-III
3. A-IV, B-I, C-III, D-II
4. A-IV, B-III, C-I, D-II

**Options :**

68634052489. 1  
68634052490. 2  
68634052491. 3  
68634052492. 4

**Question Number : 23 Question Id : 68634013287 Question Type : MCQ Option Shuffling : No Is Question Mandatory : No Calculator : None Response Time : N.A Think Time : N.A Minimum Instruction Time : 0 Correct Marks : 4 Wrong Marks : 1**

Match List I with List II

LIST I Folk Dance		LIST II State	
A.	Chhau dance	I.	Maharashtra
B.	Lavami	II.	Bihar
C.	Kuchipudi	III.	Andhra Pradesh
D.	Bidesiya	IV.	Jharkhand

Choose the correct answer from the options given below:

1. A-I, B-II, C-III, D-IV
2. A-I, B-IV, C-II, D-III
3. A-IV, B-I, C-III, D-II
4. A-IV, B-III, C-I, D-II

**Options :**

- 68634052489. 1
- 68634052490. 2
- 68634052491. 3
- 68634052492. 4

**Question Number : 24 Question Id : 68634013288 Question Type : MCQ Option Shuffling : No Is Question Mandatory : No Calculator : None Response Time : N.A Think Time : N.A Minimum Instruction Time : 0 Correct Marks : 4 Wrong Marks : 1**

Recently launched ' Bharat - NCAP ' is related to:

1. Crash safety performance of cars
2. Emission test protocols
3. Pollution control norms
4. Green fuel production

**Options :**

- 68634052493. 1
- 68634052494. 2
- 68634052495. 3
- 68634052496. 4

**Question Number : 24 Question Id : 68634013288 Question Type : MCQ Option Shuffling : No Is Question Mandatory : No Calculator : None Response Time : N.A Think Time : N.A Minimum Instruction Time : 0 Correct Marks : 4 Wrong Marks : 1**

Recently launched ' Bharat - NCAP ' is related to:

1. Crash safety performance of cars
2. Emission test protocols
3. Pollution control norms
4. Green fuel production

**Options :**

- 68634052493. 1
- 68634052494. 2
- 68634052495. 3
- 68634052496. 4

**Question Number : 25 Question Id : 68634013289 Question Type : MCQ Option Shuffling : No Is Question Mandatory : No Calculator : None Response Time : N.A Think Time : N.A Minimum Instruction Time : 0 Correct Marks : 4 Wrong Marks : 1**

Who is the first Indian to be Miss World ?

1. Aishwarya Rai
2. Reeta Faria
3. Diya Mirza
4. Lara Dutta

**Options :**

- 68634052497. 1
- 68634052498. 2
- 68634052499. 3
- 68634052500. 4

**Question Number : 25 Question Id : 68634013289 Question Type : MCQ Option Shuffling : No Is Question Mandatory : No Calculator : None Response Time : N.A Think Time : N.A Minimum Instruction Time : 0 Correct Marks : 4 Wrong Marks : 1**

Who is the first Indian to be Miss World ?

1. Aishwarya Rai
2. Reeta Faria
3. Diya Mirza
4. Lara Dutta

**Options :**

- 68634052497. 1
- 68634052498. 2
- 68634052499. 3
- 68634052500. 4

## Part B: History of Art

Section Id :	686340264
Section Number :	2
Section type :	Online
Mandatory or Optional :	Mandatory
Number of Questions :	75
Number of Questions to be attempted :	75
Section Marks :	300
Enable Mark as Answered Mark for Review and Clear Response :	Yes
Maximum Instruction Time :	0
Sub-Section Number :	1
Sub-Section Id :	686340434
Question Shuffling Allowed :	Yes
Is Section Default? :	null

Question Number : 26 Question Id : 68634013290 Question Type : MCQ Option Shuffling : No Is Question Mandatory : No  
Calculator : None Response Time : N.A Think Time : N.A Minimum Instruction Time : 0  
Correct Marks : 4 Wrong Marks : 1

What was the important finding at Kalibangan ?

1. Ploughed field
2. Artificial dock
3. Great Granary
4. Pashupati seal

Options :

68634052501. 1
68634052502. 2
68634052503. 3
68634052504. 4

Question Number : 26 Question Id : 68634013290 Question Type : MCQ Option Shuffling : No Is Question Mandatory : No  
Calculator : None Response Time : N.A Think Time : N.A Minimum Instruction Time : 0  
Correct Marks : 4 Wrong Marks : 1

कालीबंगा से कौन सी महत्त्वपूर्ण खोज मिलती है?

1. जोता हुआ खेत
2. कृत्रिम बन्दरगाह
3. अन्न भण्डार
4. पशुपति मुहर

Options :

68634052501. 1
68634052502. 2
68634052503. 3
68634052504. 4



**Question Number : 27 Question Id : 68634013291 Question Type : MCQ Option Shuffling : No Is Question Mandatory : No Calculator : None Response Time : N.A Think Time : N.A Minimum Instruction Time : 0 Correct Marks : 4 Wrong Marks : 1**

The rock cut caves of Barabar in Bihar belonged to which sect?

1. Jain
2. Buddhist
3. Ajivika
4. Vaishnav

**Options :**

- 68634052505. 1
- 68634052506. 2
- 68634052507. 3
- 68634052508. 4

**Question Number : 27 Question Id : 68634013291 Question Type : MCQ Option Shuffling : No Is Question Mandatory : No Calculator : None Response Time : N.A Think Time : N.A Minimum Instruction Time : 0 Correct Marks : 4 Wrong Marks : 1**

बिहार के बराबर रॉक-कट गुफाएँ किस सम्प्रदाय के थे ?

1. जैन
2. बौद्ध
3. आजीविक
4. वैष्णव

**Options :**

- 68634052505. 1
- 68634052506. 2
- 68634052507. 3
- 68634052508. 4

**Question Number : 28 Question Id : 68634013292 Question Type : MCQ Option Shuffling : No Is Question Mandatory : No Calculator : None Response Time : N.A Think Time : N.A Minimum Instruction Time : 0 Correct Marks : 4 Wrong Marks : 1**

Sutradhara Mandana famous for his works on architecture and iconography was attached to the court of :

1. Rana Kumbha
2. Bhoja
3. Kumarpala
4. Krishnadevaraya

**Options :**

68634052509. 1  
68634052510. 2  
68634052511. 3  
68634052512. 4

**Question Number : 28 Question Id : 68634013292 Question Type : MCQ Option Shuffling : No Is Question Mandatory : No Calculator : None Response Time : N.A Think Time : N.A Minimum Instruction Time : 0 Correct Marks : 4 Wrong Marks : 1**

वास्तुकला और प्रतिमालक्षण पर कार्य के लिए प्रसिद्ध सूत्रधार मंडन इनके राज-दरबार से संबंधित थे-

1. राणा कुंभा
2. भोज
3. कुमारपाल
4. कृष्णदेवराव

**Options :**

68634052509. 1  
68634052510. 2  
68634052511. 3  
68634052512. 4

**Question Number : 29 Question Id : 68634013293 Question Type : MCQ Option Shuffling : No Is Question Mandatory : No Calculator : None Response Time : N.A Think Time : N.A Minimum Instruction Time : 0 Correct Marks : 4 Wrong Marks : 1**

Kalyanasundara Image is a representation of:

1. Vishnu Lakshmi
2. Shiva-Parvati
3. Brahma-Sarawati
4. Kartikeya - Kaumari

**Options :**

68634052513. 1  
68634052514. 2  
68634052515. 3  
68634052516. 4

**Question Number : 29 Question Id : 68634013293 Question Type : MCQ Option Shuffling : No Is Question Mandatory : No Calculator : None Response Time : N.A Think Time : N.A Minimum Instruction Time : 0 Correct Marks : 4 Wrong Marks : 1**

कल्याण सुंदर चित्र प्रतीक है:

1. विष्णु-लक्ष्मी
2. शिव-पार्वती
3. ब्रह्मा-सरस्वती
4. कार्तिकेय - कौमारी

**Options :**

68634052513. 1
68634052514. 2
68634052515. 3
68634052516. 4

**Question Number : 30 Question Id : 68634013294 Question Type : MCQ Option Shuffling : No Is Question Mandatory : No Calculator : None Response Time : N.A Think Time : N.A Minimum Instruction Time : 0**

**Correct Marks : 4 Wrong Marks : 1**

That Gautama Buddha and Tirthankara Mahavira were contemporaries is known from :

1. Acharanga Sutra
2. Lalitvistara
3. Kalpasutra
4. Vinayapitak

**Options :**

68634052517. 1
68634052518. 2
68634052519. 3
68634052520. 4

**Question Number : 30 Question Id : 68634013294 Question Type : MCQ Option Shuffling : No Is Question Mandatory : No Calculator : None Response Time : N.A Think Time : N.A Minimum Instruction Time : 0**

**Correct Marks : 4 Wrong Marks : 1**

गौतम बुद्ध और तीर्थाकर महावीर समसामयिक थे इस रचना से ज्ञात होता है--

1. अचरंग सूत्र
2. ललितविस्तार
3. कल्पसूत्र
4. विनयपितक

**Options :**

68634052517. 1
68634052518. 2
68634052519. 3

68634052520. 4

**Question Number : 31 Question Id : 68634013295 Question Type : MCQ Option Shuffling : No Is Question Mandatory : No Calculator : None Response Time : N.A Think Time : N.A Minimum Instruction Time : 0 Correct Marks : 4 Wrong Marks : 1**

To which tirthankara is the Luna Vasahi on Mt. Abu Dedicated ?

1. Rishabhmath
2. Parshavanath
3. Neminath
4. Mahavir

**Options :**

68634052521. 1  
68634052522. 2  
68634052523. 3  
68634052524. 4

**Question Number : 31 Question Id : 68634013295 Question Type : MCQ Option Shuffling : No Is Question Mandatory : No Calculator : None Response Time : N.A Think Time : N.A Minimum Instruction Time : 0 Correct Marks : 4 Wrong Marks : 1**

माउंट अबू स्थित लूना वसही किस तीर्थाकर को समर्पित है ?

1. ऋषभनाथ
2. पार्श्वनाथ
3. नेमीनाथ
4. महावीर

**Options :**

68634052521. 1  
68634052522. 2  
68634052523. 3  
68634052524. 4

**Question Number : 32 Question Id : 68634013296 Question Type : MCQ Option Shuffling : No Is Question Mandatory : No Calculator : None Response Time : N.A Think Time : N.A Minimum Instruction Time : 0 Correct Marks : 4 Wrong Marks : 1**

Who wrote 'Pahari Masters'?

1. M. S. Randhawa
2. V. C. Ohry
3. W. G. Archer
4. B. N. Goswamy

**Options :**

- 68634052525. 1
- 68634052526. 2
- 68634052527. 3
- 68634052528. 4

**Question Number : 32 Question Id : 68634013296 Question Type : MCQ Option Shuffling : No Is Question Mandatory : No Calculator : None Response Time : N.A Think Time : N.A Minimum Instruction Time : 0**

**Correct Marks : 4 Wrong Marks : 1**

‘पहाडी मास्टर्स’ किसने लिखी ?

- 1. एम. एस. रंधावा
- 2. वी. सी. ओहरी
- 3. डब्ल्यू. जी. आर्चर
- 4. बी. एन. गोस्वामी

**Options :**

- 68634052525. 1
- 68634052526. 2
- 68634052527. 3
- 68634052528. 4

**Question Number : 33 Question Id : 68634013297 Question Type : MCQ Option Shuffling : No Is Question Mandatory : No Calculator : None Response Time : N.A Think Time : N.A Minimum Instruction Time : 0**

**Correct Marks : 4 Wrong Marks : 1**

Who is the author of the book ‘Development of Hindu Iconography’?

- 1. T. A. Gopinath Rao
- 2. J. N. Banerjea
- 3. M. K. Dhavalikar
- 4. Pramod Chandra

**Options :**

- 68634052529. 1
- 68634052530. 2
- 68634052531. 3
- 68634052532. 4

**Question Number : 33 Question Id : 68634013297 Question Type : MCQ Option Shuffling : No Is Question Mandatory : No Calculator : None Response Time : N.A Think Time : N.A Minimum Instruction Time : 0**

**Correct Marks : 4 Wrong Marks : 1**

‘डेवेलपमेंट औफ हिन्दू आईकोनोग्राफी’ नामक पुस्तक के लेखक कौन हैं ?

1. टी. ए. गोपीनाथ राव
2. जे. एन. बेनर्जी
3. एम. के. धवलिकर
4. प्रमोद चन्द्र

**Options :**

68634052529. 1  
68634052530. 2  
68634052531. 3  
68634052532. 4

**Question Number : 34 Question Id : 68634013298 Question Type : MCQ Option Shuffling : No Is Question Mandatory : No Calculator : None Response Time : N.A Think Time : N.A Minimum Instruction Time : 0 Correct Marks : 4 Wrong Marks : 1**

Which is the earlist surviving square shaped, single-domed mausoleum in Bengal ?

1. Eklakhi mosque
2. Adina mosque
3. Qutub Shahi mosque
4. Katra mosque

**Options :**

68634052533. 1  
68634052534. 2  
68634052535. 3  
68634052536. 4

**Question Number : 34 Question Id : 68634013298 Question Type : MCQ Option Shuffling : No Is Question Mandatory : No Calculator : None Response Time : N.A Think Time : N.A Minimum Instruction Time : 0 Correct Marks : 4 Wrong Marks : 1**

बंगाल की प्रारम्भिक वर्गाकार योजना और एक गुम्बद वाली समाधि कौन सी है ?

1. एकलखी मस्जिद
2. अदीना मस्जिद
3. कुतुब शाही मस्जिद
4. कटरा मस्जिद

**Options :**

68634052533. 1  
68634052534. 2  
68634052535. 3

68634052536. 4

**Question Number : 35 Question Id : 68634013299 Question Type : MCQ Option Shuffling : No Is Question Mandatory : No Calculator : None Response Time : N.A Think Time : N.A Minimum Instruction Time : 0 Correct Marks : 4 Wrong Marks : 1**

Aphrodite of Milo is presently located at the :

1. Uffizi Gallery
2. Louvre Museum
3. National Gallery of Art
4. The Metropolitan Museum of Art

**Options :**

- 68634052537. 1
- 68634052538. 2
- 68634052539. 3
- 68634052540. 4

**Question Number : 35 Question Id : 68634013299 Question Type : MCQ Option Shuffling : No Is Question Mandatory : No Calculator : None Response Time : N.A Think Time : N.A Minimum Instruction Time : 0 Correct Marks : 4 Wrong Marks : 1**

‘एफरोडाइट ऑफ मिलो’ कहाँ रखी गई है ?

1. उफ़्फ़ीजी गैलरी
2. लूव्र संग्रहालय
3. नेशनल गैलरी ऑफ आर्ट
4. दी मेट्रोपॉलिटन म्यूजियम ऑफ आर्ट

**Options :**

- 68634052537. 1
- 68634052538. 2
- 68634052539. 3
- 68634052540. 4

**Question Number : 36 Question Id : 68634013300 Question Type : MCQ Option Shuffling : No Is Question Mandatory : No Calculator : None Response Time : N.A Think Time : N.A Minimum Instruction Time : 0 Correct Marks : 4 Wrong Marks : 1**

Who is a contemporary Kalighat painting artist ?

1. Kalyan Joshi
2. Kalam Patua
3. Sita Devi
4. Shiva Dayal

**Options :**

68634052541. 1  
68634052542. 2  
68634052543. 3  
68634052544. 4

**Question Number : 36 Question Id : 68634013300 Question Type : MCQ Option Shuffling : No Is Question Mandatory : No Calculator : None Response Time : N.A Think Time : N.A Minimum Instruction Time : 0 Correct Marks : 4 Wrong Marks : 1**

इनमें से कौन वर्तमान में कालीघाट शैली के चित्रकार हैं?

1. कल्याण जोशी
2. कलम पटुआ
3. सीता देवी
4. शिव दयाल

**Options :**

68634052541. 1  
68634052542. 2  
68634052543. 3  
68634052544. 4

**Question Number : 37 Question Id : 68634013301 Question Type : MCQ Option Shuffling : No Is Question Mandatory : No Calculator : None Response Time : N.A Think Time : N.A Minimum Instruction Time : 0 Correct Marks : 4 Wrong Marks : 1**

Who is the '*apasmara purush*' related to in imagery ?

1. Nataraj
2. Anantshayi Vishnu
3. Yamaraj
4. Bahubali

**Options :**

68634052545. 1  
68634052546. 2  
68634052547. 3  
68634052548. 4



**Question Number : 37 Question Id : 68634013301 Question Type : MCQ Option Shuffling : No Is Question Mandatory : No Calculator : None Response Time : N.A Think Time : N.A Minimum Instruction Time : 0 Correct Marks : 4 Wrong Marks : 1**

किसके चित्रण से 'अपस्मार पुरुष' जुड़ा है ?

1. नटराज
2. अनन्तशायी विष्णु
3. यमराज
4. बाहुबली

**Options :**

68634052545. 1  
68634052546. 2  
68634052547. 3  
68634052548. 4

**Question Number : 38 Question Id : 68634013302 Question Type : MCQ Option Shuffling : No Is Question Mandatory : No Calculator : None Response Time : N.A Think Time : N.A Minimum Instruction Time : 0 Correct Marks : 4 Wrong Marks : 1**

Which of the following is not a characteristic of the Sarnath sculptures from Gupta period ?

1. Detailed folds of drapery
2. Refinement of form
3. Sense of movement
4. Slender physiognomy

**Options :**

68634052549. 1  
68634052550. 2  
68634052551. 3  
68634052552. 4

**Question Number : 38 Question Id : 68634013302 Question Type : MCQ Option Shuffling : No Is Question Mandatory : No Calculator : None Response Time : N.A Think Time : N.A Minimum Instruction Time : 0 Correct Marks : 4 Wrong Marks : 1**

निम्नलिखित में से क्या गुप्तकालीन सारनाथ मूर्तिकला की विशेषता नहीं है ?

1. विस्तृत तह की ड्रेपरी
2. रूप में शोधन
3. गति का भाव
4. सुडौल शरीराकृति

**Options :**

- 68634052549. 1
- 68634052550. 2
- 68634052551. 3
- 68634052552. 4

**Question Number : 39 Question Id : 68634013303 Question Type : MCQ Option Shuffling : No Is Question Mandatory : No Calculator : None Response Time : N.A Think Time : N.A Minimum Instruction Time : 0**

**Correct Marks : 4 Wrong Marks : 1**

An important sculpture in the Lakshmana Temple of Khajuraho is :

- 1. Anantshayi Vishnu
- 2. Kalyansundarmurti
- 3. Vishnu Chaturmurti
- 4. Ram with Lakshmana and Sita

**Options :**

- 68634052553. 1
- 68634052554. 2
- 68634052555. 3
- 68634052556. 4

**Question Number : 39 Question Id : 68634013303 Question Type : MCQ Option Shuffling : No Is Question Mandatory : No Calculator : None Response Time : N.A Think Time : N.A Minimum Instruction Time : 0**

**Correct Marks : 4 Wrong Marks : 1**

खजुराहो के लक्ष्मण मन्दिर की एक महत्वपूर्ण मूर्ति कौन सी है ?

- 1. अनन्तशायी विष्णु
- 2. कल्याणसुन्दर मूर्ति
- 3. विष्णु चतुर्मुर्ति
- 4. लक्ष्मण एवं सीता सहित राम

**Options :**

- 68634052553. 1
- 68634052554. 2
- 68634052555. 3
- 68634052556. 4

**Question Number : 40 Question Id : 68634013304 Question Type : MCQ Option Shuffling : No Is Question Mandatory : No Calculator : None Response Time : N.A Think Time : N.A Minimum Instruction Time : 0**

**Correct Marks : 4 Wrong Marks : 1**

The inscriptions at the Naneghat and Nashik caves were commissioned during the rule of which dynasty ?

1. Shunga
2. Satvahana
3. Mauryan
4. Gupta

**Options :**

- 68634052557. 1
- 68634052558. 2
- 68634052559. 3
- 68634052560. 4

**Question Number : 40 Question Id : 68634013304 Question Type : MCQ Option Shuffling : No Is Question Mandatory : No Calculator : None Response Time : N.A Think Time : N.A Minimum Instruction Time : 0**

**Correct Marks : 4 Wrong Marks : 1**

नानेघाट और नाशिक गुफाओं के शिलालेख किस राजवंश के शासन के दौरान बनाए गए थे ?

1. शुंग
2. सातवाहन
3. मौर्य
4. गुप्त

**Options :**

- 68634052557. 1
- 68634052558. 2
- 68634052559. 3
- 68634052560. 4

**Question Number : 41 Question Id : 68634013305 Question Type : MCQ Option Shuffling : No Is Question Mandatory : No Calculator : None Response Time : N.A Think Time : N.A Minimum Instruction Time : 0**

**Correct Marks : 4 Wrong Marks : 1**

Who wrote Brihatsamhita ?

1. Panini
2. Varahamihira
3. Aryabhata
4. Acharya Bhuvandev

**Options :**

- 68634052561. 1
- 68634052562. 2
- 68634052563. 3

68634052564. 4

**Question Number : 41 Question Id : 68634013305 Question Type : MCQ Option Shuffling : No Is Question Mandatory : No Calculator : None Response Time : N.A Think Time : N.A Minimum Instruction Time : 0 Correct Marks : 4 Wrong Marks : 1**

बृहत्संहिता किसने लिखी ?

1. पाणिनी
2. वराहमिहिर
3. आर्यभट्ट
4. आचार्य भुवनदेव

**Options :**

68634052561. 1  
68634052562. 2  
68634052563. 3  
68634052564. 4

**Question Number : 42 Question Id : 68634013306 Question Type : MCQ Option Shuffling : No Is Question Mandatory : No Calculator : None Response Time : N.A Think Time : N.A Minimum Instruction Time : 0 Correct Marks : 4 Wrong Marks : 1**

'Mother Teresa' is an artwork by -

1. M. F. Hussin
2. Rabindranth Tagore
3. F. N. Souza
4. S. H. Raza

**Options :**

68634052565. 1  
68634052566. 2  
68634052567. 3  
68634052568. 4

**Question Number : 42 Question Id : 68634013306 Question Type : MCQ Option Shuffling : No Is Question Mandatory : No Calculator : None Response Time : N.A Think Time : N.A Minimum Instruction Time : 0 Correct Marks : 4 Wrong Marks : 1**

‘मदर टेरिसा’ किसकी कृति है ?

1. एम. एफ. हुस्सैन
2. रबिन्द्रनाथ टैगोर
3. एफ. एन. सूजा
4. एस. एच. रजा

**Options :**

68634052565. 1  
68634052566. 2  
68634052567. 3  
68634052568. 4

**Question Number : 43 Question Id : 68634013307 Question Type : MCQ Option Shuffling : No Is Question Mandatory : No Calculator : None Response Time : N.A Think Time : N.A Minimum Instruction Time : 0 Correct Marks : 4 Wrong Marks : 1**

Bhittargaon terracotta temple belongs to which period ?

1. Mauryan Period
2. Gupta Period
3. Pala Period
4. Mughal Period

**Options :**

68634052569. 1  
68634052570. 2  
68634052571. 3  
68634052572. 4

**Question Number : 43 Question Id : 68634013307 Question Type : MCQ Option Shuffling : No Is Question Mandatory : No Calculator : None Response Time : N.A Think Time : N.A Minimum Instruction Time : 0 Correct Marks : 4 Wrong Marks : 1**

भीतरगाँव इटो का मंदिर किस काल का है ?

1. मौर्यकाल
2. गुप्तकाल
3. पालकाल
4. मुगलकाल

**Options :**

68634052569. 1  
68634052570. 2  
68634052571. 3

68634052572. 4

**Question Number : 44 Question Id : 68634013308 Question Type : MCQ Option Shuffling : No Is Question Mandatory : No Calculator : None Response Time : N.A Think Time : N.A Minimum Instruction Time : 0 Correct Marks : 4 Wrong Marks : 1**

Who is the artist that painted the painting titled "Allgory of Artists Studio."

1. Goya
2. Courbet
3. Daumier
4. Cezanne

**Options :**

- 68634052573. 1
- 68634052574. 2
- 68634052575. 3
- 68634052576. 4

**Question Number : 44 Question Id : 68634013308 Question Type : MCQ Option Shuffling : No Is Question Mandatory : No Calculator : None Response Time : N.A Think Time : N.A Minimum Instruction Time : 0 Correct Marks : 4 Wrong Marks : 1**

'एलिगोरी ऑफ आर्टिस्ट स्टूडियो' नामक चित्रकला किस चित्रकार द्वारा बनाई गई है?

1. गोया
2. कुर्बे
3. डॉमियर
4. सेज़ान

**Options :**

- 68634052573. 1
- 68634052574. 2
- 68634052575. 3
- 68634052576. 4

**Question Number : 45 Question Id : 68634013309 Question Type : MCQ Option Shuffling : No Is Question Mandatory : No Calculator : None Response Time : N.A Think Time : N.A Minimum Instruction Time : 0 Correct Marks : 4 Wrong Marks : 1**

Who built the Statue of Zeus at Olympia ?

1. Praxiteles
2. Phidias
3. Polykleitos
4. Lysippos

**Options :**

- 68634052577. 1
- 68634052578. 2
- 68634052579. 3
- 68634052580. 4

**Question Number : 45 Question Id : 68634013309 Question Type : MCQ Option Shuffling : No Is Question Mandatory : No Calculator : None Response Time : N.A Think Time : N.A Minimum Instruction Time : 0**

**Correct Marks : 4 Wrong Marks : 1**

ओलंपिया के 'स्टैचू ऑफ जीयस' को किसने बनाया था ?

- 1. प्राक्सिटेलिस
- 2. फिडियस
- 3. पॉलिक्लैटोस
- 4. लिसिप्पोस

**Options :**

- 68634052577. 1
- 68634052578. 2
- 68634052579. 3
- 68634052580. 4

**Question Number : 46 Question Id : 68634013310 Question Type : MCQ Option Shuffling : No Is Question Mandatory : No Calculator : None Response Time : N.A Think Time : N.A Minimum Instruction Time : 0**

**Correct Marks : 4 Wrong Marks : 1**

What is '*hashiya*' in Mughal Miniature Paintings ?

- 1. Painting School
- 2. Paint Brush
- 3. Calligraphy
- 4. Border

**Options :**

- 68634052581. 1
- 68634052582. 2
- 68634052583. 3
- 68634052584. 4

**Question Number : 46 Question Id : 68634013310 Question Type : MCQ Option Shuffling : No Is Question Mandatory : No Calculator : None Response Time : N.A Think Time : N.A Minimum Instruction Time : 0**

**Correct Marks : 4 Wrong Marks : 1**

मुगल चित्रकारी में 'हाशिया' क्या होता है ?

1. चित्रकारी विद्यालय
2. पेंट ब्रश
3. सुलेख
4. मार्जिन बॉर्डर

**Options :**

68634052581. 1
68634052582. 2
68634052583. 3
68634052584. 4

**Question Number : 47 Question Id : 68634013311 Question Type : MCQ Option Shuffling : No Is Question Mandatory : No Calculator : None Response Time : N.A Think Time : N.A Minimum Instruction Time : 0**

**Correct Marks : 4 Wrong Marks : 1**

Where at the Great Stupa at Sanchi the narrative panel of 'Temptation by Mara' is found ?

1. Torana
2. Railings
3. Pillars
4. Anda

**Options :**

68634052585. 1
68634052586. 2
68634052587. 3
68634052588. 4

**Question Number : 47 Question Id : 68634013311 Question Type : MCQ Option Shuffling : No Is Question Mandatory : No Calculator : None Response Time : N.A Think Time : N.A Minimum Instruction Time : 0**

**Correct Marks : 4 Wrong Marks : 1**

साँची स्तूप का कौन सा द्वार 'मार द्वार प्रलोभन पर विजय' की कथानक पैनल को दर्शाता है ?

1. तोरण
2. रेलिंग
3. खंभे
4. अंड

**Options :**

68634052585. 1
68634052586. 2
68634052587. 3



68634052588. 4

**Question Number : 48 Question Id : 68634013312 Question Type : MCQ Option Shuffling : No Is Question Mandatory : No Calculator : None Response Time : N.A Think Time : N.A Minimum Instruction Time : 0**

**Correct Marks : 4 Wrong Marks : 1**

Aparajitapriccha is a work on -

1. Silpasastra
2. Polity
3. Natyashastra
4. Philosophy

**Options :**

68634052589. 1  
68634052590. 2  
68634052591. 3  
68634052592. 4

**Question Number : 48 Question Id : 68634013312 Question Type : MCQ Option Shuffling : No Is Question Mandatory : No Calculator : None Response Time : N.A Think Time : N.A Minimum Instruction Time : 0**

**Correct Marks : 4 Wrong Marks : 1**

अपराजितपृच्छा इस विषय पर आधारित है -

1. शिल्पशास्त्र
2. राजनीति
3. नाट्यशास्त्र
4. दर्शनशास्त्र

**Options :**

68634052589. 1  
68634052590. 2  
68634052591. 3  
68634052592. 4

**Question Number : 49 Question Id : 68634013313 Question Type : MCQ Option Shuffling : No Is Question Mandatory : No Calculator : None Response Time : N.A Think Time : N.A Minimum Instruction Time : 0**

**Correct Marks : 4 Wrong Marks : 1**

In which museum is the famous maryan period sculpture of Diadarganj Yakshi placed ?

1. Baroda Museum
2. Indian Museum
3. Patna Museum
4. National Museum

**Options :**

- 68634052593. 1
- 68634052594. 2
- 68634052595. 3
- 68634052596. 4

**Question Number : 49 Question Id : 68634013313 Question Type : MCQ Option Shuffling : No Is Question Mandatory : No Calculator : None Response Time : N.A Think Time : N.A Minimum Instruction Time : 0**

**Correct Marks : 4 Wrong Marks : 1**

प्रसिद्ध मौर्यकालीन दीदारगंजयक्षी की मूर्ति किस संग्रहालय में है?

- 1. बड़ौदा संग्रहालय
- 2. भारतीय संग्रहालय
- 3. पटना संग्रहालय
- 4. राष्ट्रीय संग्रहालय

**Options :**

- 68634052593. 1
- 68634052594. 2
- 68634052595. 3
- 68634052596. 4

**Question Number : 50 Question Id : 68634013314 Question Type : MCQ Option Shuffling : No Is Question Mandatory : No Calculator : None Response Time : N.A Think Time : N.A Minimum Instruction Time : 0**

**Correct Marks : 4 Wrong Marks : 1**

This Western Gate of the Agra Fort is the grandest of the four gates :

- 1. Khizri gate
- 2. Delhi gate
- 3. Lahore gate
- 4. Amar Singh gate

**Options :**

- 68634052597. 1
- 68634052598. 2
- 68634052599. 3
- 68634052600. 4

**Question Number : 50 Question Id : 68634013314 Question Type : MCQ Option Shuffling : No Is Question Mandatory : No Calculator : None Response Time : N.A Think Time : N.A Minimum Instruction Time : 0**

**Correct Marks : 4 Wrong Marks : 1**

यह पश्चिमी दरवाजा आगरा किले के चारों दरवाजों में सबसे भव्यतम है -

1. खिजरी दरवाजा
2. दिल्ली दरवाजा
3. लाहौर दरवाजा
4. अमर सिंह दरवाजा

**Options :**

68634052597. 1
68634052598. 2
68634052599. 3
68634052600. 4

**Question Number : 51 Question Id : 68634013315 Question Type : MCQ Option Shuffling : No Is Question Mandatory : No Calculator : None Response Time : N.A Think Time : N.A Minimum Instruction Time : 0**

**Correct Marks : 4 Wrong Marks : 1**

Vajra is the weapon of which deity ?

1. Indra
2. Brahma
3. Yama
4. Varah

**Options :**

68634052601. 1
68634052602. 2
68634052603. 3
68634052604. 4

**Question Number : 51 Question Id : 68634013315 Question Type : MCQ Option Shuffling : No Is Question Mandatory : No Calculator : None Response Time : N.A Think Time : N.A Minimum Instruction Time : 0**

**Correct Marks : 4 Wrong Marks : 1**

वज्र किस देवता का आयुध है ?

1. इन्द्र
2. ब्रह्म
3. यम
4. वराह

**Options :**

68634052601. 1
68634052602. 2
68634052603. 3

68634052604. 4

**Question Number : 52 Question Id : 68634013316 Question Type : MCQ Option Shuffling : No Is Question Mandatory : No Calculator : None Response Time : N.A Think Time : N.A Minimum Instruction Time : 0 Correct Marks : 4 Wrong Marks : 1**

Who among the following is a known painter of Guler style -

1. Sahibdin
2. Pandit Seu
3. Nihalchand
4. Nainsukh

**Options :**

- 68634052605. 1
- 68634052606. 2
- 68634052607. 3
- 68634052608. 4

**Question Number : 52 Question Id : 68634013316 Question Type : MCQ Option Shuffling : No Is Question Mandatory : No Calculator : None Response Time : N.A Think Time : N.A Minimum Instruction Time : 0 Correct Marks : 4 Wrong Marks : 1**

इनमें से कौन गुलेर शैली का चित्रकार नहीं है ?

1. साहिबदिन
2. पंडित सेउ
3. नीहालचंद
4. नैनसुख

**Options :**

- 68634052605. 1
- 68634052606. 2
- 68634052607. 3
- 68634052608. 4

**Question Number : 53 Question Id : 68634013317 Question Type : MCQ Option Shuffling : No Is Question Mandatory : No Calculator : None Response Time : N.A Think Time : N.A Minimum Instruction Time : 0 Correct Marks : 4 Wrong Marks : 1**

Which cave does not have a sculpture of Nataraj ?

1. Elephanta cave
2. Badami caves
3. Ellora caves
4. Ghatotkacha caves

**Options :**

- 68634052609. 1
- 68634052610. 2
- 68634052611. 3
- 68634052612. 4

**Question Number : 53 Question Id : 68634013317 Question Type : MCQ Option Shuffling : No Is Question Mandatory : No Calculator : None Response Time : N.A Think Time : N.A Minimum Instruction Time : 0**

**Correct Marks : 4 Wrong Marks : 1**

कौन से गुफा में नटराज की मूर्ति है ?

- 1. एलिफंटा गुफा
- 2. बादामी गुफा
- 3. एलोरा गुफा
- 4. घटोत्कच गुफा

**Options :**

- 68634052609. 1
- 68634052610. 2
- 68634052611. 3
- 68634052612. 4

**Question Number : 54 Question Id : 68634013318 Question Type : MCQ Option Shuffling : No Is Question Mandatory : No Calculator : None Response Time : N.A Think Time : N.A Minimum Instruction Time : 0**

**Correct Marks : 4 Wrong Marks : 1**

Which ancient university was built by the Maitraka ruler Bhattarka ?

- 1. Takshashila University
- 2. Vallabhi University
- 3. Somapura Mahavihara
- 4. Sharada Peeth

**Options :**

- 68634052613. 1
- 68634052614. 2
- 68634052615. 3
- 68634052616. 4

**Question Number : 54 Question Id : 68634013318 Question Type : MCQ Option Shuffling : No Is Question Mandatory : No Calculator : None Response Time : N.A Think Time : N.A Minimum Instruction Time : 0**

**Correct Marks : 4 Wrong Marks : 1**

इनमें से कौन सा प्राचीन विश्वविद्यालय मैत्रक शासक भट्टारक द्वारा बनाया गया था ?

1. तक्षशिला विश्वविद्यालय
2. वल्लभी विश्वविद्यालय
3. सोमपुर विश्वविद्यालय
4. शारदा पीठ

**Options :**

68634052613. 1  
68634052614. 2  
68634052615. 3  
68634052616. 4

**Question Number : 55 Question Id : 68634013319 Question Type : MCQ Option Shuffling : No Is Question Mandatory : No Calculator : None Response Time : N.A Think Time : N.A Minimum Instruction Time : 0**

**Correct Marks : 4 Wrong Marks : 1**

What type of colour palette Fauvist artists used in their art - works.

1. Analogous colours
2. Monochromatic
3. Complementary colours
4. Cool colours

**Options :**

68634052617. 1  
68634052618. 2  
68634052619. 3  
68634052620. 4

**Question Number : 55 Question Id : 68634013319 Question Type : MCQ Option Shuffling : No Is Question Mandatory : No Calculator : None Response Time : N.A Think Time : N.A Minimum Instruction Time : 0**

**Correct Marks : 4 Wrong Marks : 1**

फॉविष्ट चित्रकारों ने अपनी कलाकृतियों में किस प्रकार का रंग-पट्टिका का उपयोग किया?

1. समरूप रंग
2. एकवर्णी
3. अनुपूरक रंग
4. शीतल रंग

**Options :**

68634052617. 1  
68634052618. 2  
68634052619. 3

68634052620. 4

**Question Number : 56 Question Id : 68634013320 Question Type : MCQ Option Shuffling : No Is Question Mandatory : No Calculator : None Response Time : N.A Think Time : N.A Minimum Instruction Time : 0 Correct Marks : 4 Wrong Marks : 1**

Who among the following Vedic deities has been invoked in the Rigveda ?

1. Hanumana
2. Indra
3. Rama
4. Kalaki

**Options :**

68634052621. 1  
68634052622. 2  
68634052623. 3  
68634052624. 4

**Question Number : 56 Question Id : 68634013320 Question Type : MCQ Option Shuffling : No Is Question Mandatory : No Calculator : None Response Time : N.A Think Time : N.A Minimum Instruction Time : 0 Correct Marks : 4 Wrong Marks : 1**

निम्नलिखित में से किस वैदिक देवता का ऋग्वेद में आह्वान किया गया है ?

1. हनुमान
2. इन्द्र
3. राम
4. कलकी

**Options :**

68634052621. 1  
68634052622. 2  
68634052623. 3  
68634052624. 4

**Question Number : 57 Question Id : 68634013321 Question Type : MCQ Option Shuffling : No Is Question Mandatory : No Calculator : None Response Time : N.A Think Time : N.A Minimum Instruction Time : 0 Correct Marks : 4 Wrong Marks : 1**

Which of the following is also called Flavian Amphitheater ?

1. Colosseum
2. Pantheon
3. Triumphal arch
4. Basilica

**Options :**

- 68634052625. 1
- 68634052626. 2
- 68634052627. 3
- 68634052628. 4

**Question Number : 57 Question Id : 68634013321 Question Type : MCQ Option Shuffling : No Is Question Mandatory : No Calculator : None Response Time : N.A Think Time : N.A Minimum Instruction Time : 0**

**Correct Marks : 4 Wrong Marks : 1**

निम्नलिखित में से किसे फ्लैवियन अखाड़ा भी कहते हैं ?

- 1. कोलॉसियम
- 2. पैन्थियॉन
- 3. ट्राईयम्फल आर्च
- 4. बैसिलिका

**Options :**

- 68634052625. 1
- 68634052626. 2
- 68634052627. 3
- 68634052628. 4

**Question Number : 58 Question Id : 68634013322 Question Type : MCQ Option Shuffling : No Is Question Mandatory : No Calculator : None Response Time : N.A Think Time : N.A Minimum Instruction Time : 0**

**Correct Marks : 4 Wrong Marks : 1**

Shrinathji is a recurring figurine in the style of :

- 1. Bundelkhand
- 2. Nathdwara
- 3. Kishangrah
- 4. Jammu

**Options :**

- 68634052629. 1
- 68634052630. 2
- 68634052631. 3
- 68634052632. 4

**Question Number : 58 Question Id : 68634013322 Question Type : MCQ Option Shuffling : No Is Question Mandatory : No Calculator : None Response Time : N.A Think Time : N.A Minimum Instruction Time : 0**

**Correct Marks : 4 Wrong Marks : 1**



किस शैली में श्रीनाथजी की पूर्णावृत्ति आकृतियाँ बनाई जाती हैं ?

1. बुन्देलखण्ड
2. नाथद्वारा
3. किशनगढ़
4. जम्मू

**Options :**

68634052629. 1  
68634052630. 2  
68634052631. 3  
68634052632. 4

**Question Number : 59 Question Id : 68634013323 Question Type : MCQ Option Shuffling : No Is Question Mandatory : No Calculator : None Response Time : N.A Think Time : N.A Minimum Instruction Time : 0**

**Correct Marks : 4 Wrong Marks : 1**

To which art movement artist Vassily Kandinsky belongs :-

1. Cubism
2. Blue Rider
3. Futurism
4. Constructivism

**Options :**

68634052633. 1  
68634052634. 2  
68634052635. 3  
68634052636. 4

**Question Number : 59 Question Id : 68634013323 Question Type : MCQ Option Shuffling : No Is Question Mandatory : No Calculator : None Response Time : N.A Think Time : N.A Minimum Instruction Time : 0**

**Correct Marks : 4 Wrong Marks : 1**

चित्रकार वैसिली कैन्डिन्सकी किस कला आंदोलन से संबंधित था?

1. क्यूबिज़म
2. ब्लू राइडर
3. भविष्यवाद
4. रचनात्मकवाद

**Options :**

68634052633. 1  
68634052634. 2  
68634052635. 3

68634052636. 4

**Question Number : 60 Question Id : 68634013324 Question Type : MCQ Option Shuffling : No Is Question Mandatory : No Calculator : None Response Time : N.A Think Time : N.A Minimum Instruction Time : 0 Correct Marks : 4 Wrong Marks : 1**

Where did Heliiodorus set the Garuda dhwaja in honour of Vasudeva ?

1. Kaushambi
2. Rajgir
3. Vidisha
4. Ahmedabad

**Options :**

- 68634052637. 1
- 68634052638. 2
- 68634052639. 3
- 68634052640. 4

**Question Number : 60 Question Id : 68634013324 Question Type : MCQ Option Shuffling : No Is Question Mandatory : No Calculator : None Response Time : N.A Think Time : N.A Minimum Instruction Time : 0 Correct Marks : 4 Wrong Marks : 1**

वासुदेव के सम्मान में गरुड़ध्वज हेलियोडोरस ने कहाँ स्थापित किया था ?

1. कौशाम्बी
2. राजगीर
3. विदिशा
4. अहमदाबाद

**Options :**

- 68634052637. 1
- 68634052638. 2
- 68634052639. 3
- 68634052640. 4

**Question Number : 61 Question Id : 68634013325 Question Type : MCQ Option Shuffling : No Is Question Mandatory : No Calculator : None Response Time : N.A Think Time : N.A Minimum Instruction Time : 0 Correct Marks : 4 Wrong Marks : 1**

Pinaka is the bow of which deity ?

1. Karttikeya
2. Vinayak
3. Vishnu
4. Shiva

**Options :**

- 68634052641. 1
- 68634052642. 2
- 68634052643. 3
- 68634052644. 4

**Question Number : 61 Question Id : 68634013325 Question Type : MCQ Option Shuffling : No Is Question Mandatory : No Calculator : None Response Time : N.A Think Time : N.A Minimum Instruction Time : 0**

**Correct Marks : 4 Wrong Marks : 1**

पिनाक किस देवता का धनुष है ?

- 1. कार्तिकेय
- 2. विनायक
- 3. विष्णु
- 4. शिव

**Options :**

- 68634052641. 1
- 68634052642. 2
- 68634052643. 3
- 68634052644. 4

**Question Number : 62 Question Id : 68634013326 Question Type : MCQ Option Shuffling : No Is Question Mandatory : No Calculator : None Response Time : N.A Think Time : N.A Minimum Instruction Time : 0**

**Correct Marks : 4 Wrong Marks : 1**

The *Jivantswami* images represent Mahavira as a

- 1. Prince
- 2. King
- 3. Lion
- 4. Sanyasi

**Options :**

- 68634052645. 1
- 68634052646. 2
- 68634052647. 3
- 68634052648. 4

**Question Number : 62 Question Id : 68634013326 Question Type : MCQ Option Shuffling : No Is Question Mandatory : No Calculator : None Response Time : N.A Think Time : N.A Minimum Instruction Time : 0**

**Correct Marks : 4 Wrong Marks : 1**

महावीर के जीवन्तस्वामी प्रतिमाओं में उन्हें इस रूप में दर्शाया गया है :

1. युवराज
2. राजा
3. शेर
4. संन्यासी

**Options :**

68634052645. 1
68634052646. 2
68634052647. 3
68634052648. 4

**Question Number : 63 Question Id : 68634013327 Question Type : MCQ Option Shuffling : No Is Question Mandatory : No Calculator : None Response Time : N.A Think Time : N.A Minimum Instruction Time : 0**

**Correct Marks : 4 Wrong Marks : 1**

Fatehpur Sikri's Buland Darwaza is the entrance to which structure

1. Panch Mahal
2. Diwan-i-AAm
3. Jama Masjid
4. Diwan -i-khas

**Options :**

68634052649. 1
68634052650. 2
68634052651. 3
68634052652. 4

**Question Number : 63 Question Id : 68634013327 Question Type : MCQ Option Shuffling : No Is Question Mandatory : No Calculator : None Response Time : N.A Think Time : N.A Minimum Instruction Time : 0**

**Correct Marks : 4 Wrong Marks : 1**

फतेहपुर सिकरी का बुलंद दरवाजा किस इमारत का प्रवेश द्वारा है ?

1. पंच महल
2. दिवान-ए-आम
3. जामा मस्जिद
4. दिवान-ए-खास

**Options :**

68634052649. 1
68634052650. 2
68634052651. 3

68634052652. 4

**Question Number : 64 Question Id : 68634013328 Question Type : MCQ Option Shuffling : No Is Question Mandatory : No Calculator : None Response Time : N.A Think Time : N.A Minimum Instruction Time : 0 Correct Marks : 4 Wrong Marks : 1**

Which architectural device in Iltutmish's tomb was used for the first time in India ?

1. Ture arch
2. Merlons
3. Squinch
4. Maqsura screen

**Options :**

- 68634052653. 1
- 68634052654. 2
- 68634052655. 3
- 68634052656. 4

**Question Number : 64 Question Id : 68634013328 Question Type : MCQ Option Shuffling : No Is Question Mandatory : No Calculator : None Response Time : N.A Think Time : N.A Minimum Instruction Time : 0 Correct Marks : 4 Wrong Marks : 1**

वास्तुकला का कौन सा तत्व भारत में प्रथम बार इल्तुतमिश के मकबरे में प्रायोजित हुआ ?

1. शुद्ध मेहराब
2. कंगुरा
3. स्क्वीच
4. मकसूरा जाली

**Options :**

- 68634052653. 1
- 68634052654. 2
- 68634052655. 3
- 68634052656. 4

**Question Number : 65 Question Id : 68634013329 Question Type : MCQ Option Shuffling : No Is Question Mandatory : No Calculator : None Response Time : N.A Think Time : N.A Minimum Instruction Time : 0 Correct Marks : 4 Wrong Marks : 1**

Who wrote 'Santiniketan : The Making of a Contextual Modernism'?

1. Gayatri Sinha
2. R. Siva Kumar
3. Vidya Dehejia
4. Anita Dube

**Options :**

68634052657. 1  
68634052658. 2  
68634052659. 3  
68634052660. 4

**Question Number : 65 Question Id : 68634013329 Question Type : MCQ Option Shuffling : No Is Question Mandatory : No Calculator : None Response Time : N.A Think Time : N.A Minimum Instruction Time : 0**

**Correct Marks : 4 Wrong Marks : 1**

‘शान्तिनिकेतनः द मेकिंग ऑफ अ कॉन्टेक्सच्युल मॉडर्निज्म’ किस की रचना है ?

1. गायत्री सिन्हा
2. आर. शिव कुमार
3. विद्या देहेजिया
4. अनिता दूबे

**Options :**

68634052657. 1  
68634052658. 2  
68634052659. 3  
68634052660. 4

**Question Number : 66 Question Id : 68634013330 Question Type : MCQ Option Shuffling : No Is Question Mandatory : No Calculator : None Response Time : N.A Think Time : N.A Minimum Instruction Time : 0**

**Correct Marks : 4 Wrong Marks : 1**

Who was the only sculptor -cum-painter member of the Progressive Artist's Group ?

1. H. K. Gade
2. V. S. Gaitonde
3. K. H. Ara
4. S. K. Bakre

**Options :**

68634052661. 1  
68634052662. 2  
68634052663. 3  
68634052664. 4

**Question Number : 66 Question Id : 68634013330 Question Type : MCQ Option Shuffling : No Is Question Mandatory : No Calculator : None Response Time : N.A Think Time : N.A Minimum Instruction Time : 0 Correct Marks : 4 Wrong Marks : 1**

प्रोग्रेसिव आर्टिस्ट ग्रुप के कौन सा कलाकार मूर्तिकार और चित्रकार दोनों ही थे?

1. एच. के. गाडे
2. वी. एस. गायतोंडे
3. के. एच. आरा
4. एस. के. बाकरे

**Options :**

- 68634052661. 1
- 68634052662. 2
- 68634052663. 3
- 68634052664. 4

**Question Number : 67 Question Id : 68634013331 Question Type : MCQ Option Shuffling : No Is Question Mandatory : No Calculator : None Response Time : N.A Think Time : N.A Minimum Instruction Time : 0 Correct Marks : 4 Wrong Marks : 1**

Kalpautra manuscript painting belong to which religion tradition.

1. Buddhist
2. Pashupat
3. Jaina
4. Ajivika

**Options :**

- 68634052665. 1
- 68634052666. 2
- 68634052667. 3
- 68634052668. 4

**Question Number : 67 Question Id : 68634013331 Question Type : MCQ Option Shuffling : No Is Question Mandatory : No Calculator : None Response Time : N.A Think Time : N.A Minimum Instruction Time : 0 Correct Marks : 4 Wrong Marks : 1**

कल्पसूत्र पांडुलिपि के चित्र किस धर्म से संबंधित है ?

1. बौद्ध
2. पाशुपत
3. जैन
4. आजीवीक

**Options :**

- 68634052665. 1
- 68634052666. 2
- 68634052667. 3
- 68634052668. 4

**Question Number : 68 Question Id : 68634013332 Question Type : MCQ Option Shuffling : No Is Question Mandatory : No Calculator : None Response Time : N.A Think Time : N.A Minimum Instruction Time : 0 Correct Marks : 4 Wrong Marks : 1**

Which among the following were important sites of sculpture during the reign of Kushana Empire ?

- 1. Sanchi and Mathura
- 2. Mathura and Gandhara
- 3. Sanchi and Bharhut
- 4. Sanchi and Sarnath

**Options :**

- 68634052669. 1
- 68634052670. 2
- 68634052671. 3
- 68634052672. 4

**Question Number : 68 Question Id : 68634013332 Question Type : MCQ Option Shuffling : No Is Question Mandatory : No Calculator : None Response Time : N.A Think Time : N.A Minimum Instruction Time : 0 Correct Marks : 4 Wrong Marks : 1**

निम्नलिखित में से कौन से पुरास्थल कुषाण शासन के दौरान मूर्तिकला के प्रमुख केन्द्र थे ?

- 1. साँची एवं मथुरा
- 2. मथुरा एवं गांधार
- 3. साँची एवं भरहुत
- 4. साँची एवं सारनाथ

**Options :**

- 68634052669. 1
- 68634052670. 2
- 68634052671. 3
- 68634052672. 4

**Question Number : 69 Question Id : 68634013333 Question Type : MCQ Option Shuffling : No Is Question Mandatory : No Calculator : None Response Time : N.A Think Time : N.A Minimum Instruction Time : 0 Correct Marks : 4 Wrong Marks : 1**



Where do we find the sculptural relief of Narsimhadeva I as an archer ?

1. Lingaraj Temple, Bhubaneswar
2. Rajarani Temple, Bhubaneswar
3. Kandariya Mahadev, Khajuraho
4. Sun Temple, Konark

**Options :**

- 68634052673. 1
- 68634052674. 2
- 68634052675. 3
- 68634052676. 4

**Question Number : 69 Question Id : 68634013333 Question Type : MCQ Option Shuffling : No Is Question Mandatory : No Calculator : None Response Time : N.A Think Time : N.A Minimum Instruction Time : 0 Correct Marks : 4 Wrong Marks : 1**

नरसिंहदेव प्रथम का धनुर्धर मूर्ति कहाँ से मिलता है ?

1. लिंगराज मन्दिर, भुवनेश्वर
2. राजारानी मन्दिर, भुवनेश्वर
3. कन्दरिया महादेव, खजुराहो
4. सूर्य मन्दिर, कोर्णाक

**Options :**

- 68634052673. 1
- 68634052674. 2
- 68634052675. 3
- 68634052676. 4

**Question Number : 70 Question Id : 68634013334 Question Type : MCQ Option Shuffling : No Is Question Mandatory : No Calculator : None Response Time : N.A Think Time : N.A Minimum Instruction Time : 0 Correct Marks : 4 Wrong Marks : 1**

The Chunar Ragmala painted in 1561 is one of the earliest stylistic example of :

1. Bundi style
2. Mewar style
3. Kota style
4. Kishangarh style

**Options :**

- 68634052677. 1
- 68634052678. 2
- 68634052679. 3

68634052680. 4

**Question Number : 70 Question Id : 68634013334 Question Type : MCQ Option Shuffling : No Is Question Mandatory : No Calculator : None Response Time : N.A Think Time : N.A Minimum Instruction Time : 0 Correct Marks : 4 Wrong Marks : 1**

चुनारा रागमाला जो 1561 में बनाए गए थे, किस शैली के प्रथम उदाहरण है ?

1. बूँदी शैली
2. मेवाड़ शैली
3. कौटा शैली
4. किशनगढ़ शैली

**Options :**

68634052677. 1
68634052678. 2
68634052679. 3
68634052680. 4

**Question Number : 71 Question Id : 68634013335 Question Type : MCQ Option Shuffling : No Is Question Mandatory : No Calculator : None Response Time : N.A Think Time : N.A Minimum Instruction Time : 0 Correct Marks : 4 Wrong Marks : 1**

Who wrote 'The Transformation of Nature in Art' ?

1. Stella Kramrisch
2. Diana L. Eyck
3. M. W. Meister
4. Ananda Coomaraswamy

**Options :**

68634052681. 1
68634052682. 2
68634052683. 3
68634052684. 4

**Question Number : 71 Question Id : 68634013335 Question Type : MCQ Option Shuffling : No Is Question Mandatory : No Calculator : None Response Time : N.A Think Time : N.A Minimum Instruction Time : 0 Correct Marks : 4 Wrong Marks : 1**

‘दि ट्रांसफर्मिशन ऑफ नेचर इन आर्ट’ किसने लिखी ?

1. स्टैला क्रेमरिश
2. डायना एल. ऐक
3. डब्ल्यू. एम. माईस्टर
4. आनन्द कुमारस्वामी

**Options :**

- 68634052681. 1
- 68634052682. 2
- 68634052683. 3
- 68634052684. 4

**Question Number : 72 Question Id : 68634013336 Question Type : MCQ Option Shuffling : No Is Question Mandatory : No Calculator : None Response Time : N.A Think Time : N.A Minimum Instruction Time : 0**

**Correct Marks : 4 Wrong Marks : 1**

"Luncheon in the Grass" painting is painted by which impressionist artist.

1. Eduard Manet
2. Degas
3. Renoir
4. Seurat

**Options :**

- 68634052685. 1
- 68634052686. 2
- 68634052687. 3
- 68634052688. 4

**Question Number : 72 Question Id : 68634013336 Question Type : MCQ Option Shuffling : No Is Question Mandatory : No Calculator : None Response Time : N.A Think Time : N.A Minimum Instruction Time : 0**

**Correct Marks : 4 Wrong Marks : 1**

"लंचन ऑन द ग्रास" नामक चित्र किस प्रभाववादी चित्रकार द्वारा बनाया गया है?

1. एडुअर्ड माने
2. देगा
3. रेन्वॉ
4. सुरा

**Options :**

- 68634052685. 1
- 68634052686. 2
- 68634052687. 3

68634052688. 4

**Question Number : 73 Question Id : 68634013337 Question Type : MCQ Option Shuffling : No Is Question Mandatory : No Calculator : None Response Time : N.A Think Time : N.A Minimum Instruction Time : 0 Correct Marks : 4 Wrong Marks : 1**

Equestrian sculptures started form which period ?

1. Greek
2. Roman
3. Mesopotamia
4. Egyptian

**Options :**

- 68634052689. 1
- 68634052690. 2
- 68634052691. 3
- 68634052692. 4

**Question Number : 73 Question Id : 68634013337 Question Type : MCQ Option Shuffling : No Is Question Mandatory : No Calculator : None Response Time : N.A Think Time : N.A Minimum Instruction Time : 0 Correct Marks : 4 Wrong Marks : 1**

इक्वेस्ट्रीयन शिल्प किस कार्यकाल से प्रारम्भ हुआ?

1. ग्रीक
2. रोमन
3. मेसोपोटामीया
4. इजीपशीयन

**Options :**

- 68634052689. 1
- 68634052690. 2
- 68634052691. 3
- 68634052692. 4

**Question Number : 74 Question Id : 68634013338 Question Type : MCQ Option Shuffling : No Is Question Mandatory : No Calculator : None Response Time : N.A Think Time : N.A Minimum Instruction Time : 0 Correct Marks : 4 Wrong Marks : 1**

Amrita Shergill was influenced by which modern European artist ?

1. Gauguin
2. Van Gogh
3. Cezanne
4. Seurat

**Options :**

- 68634052693. 1
- 68634052694. 2
- 68634052695. 3
- 68634052696. 4

**Question Number : 74 Question Id : 68634013338 Question Type : MCQ Option Shuffling : No Is Question Mandatory : No Calculator : None Response Time : N.A Think Time : N.A Minimum Instruction Time : 0**

**Correct Marks : 4 Wrong Marks : 1**

अमृता शेरगिल किस आधुनिक यूरोपीय चित्रकार द्वारा प्रभावित हुई थी?

- 1. गॉगिन
- 2. वैन गॉ
- 3. सीज़ान
- 4. सुरा

**Options :**

- 68634052693. 1
- 68634052694. 2
- 68634052695. 3
- 68634052696. 4

**Question Number : 75 Question Id : 68634013339 Question Type : MCQ Option Shuffling : No Is Question Mandatory : No Calculator : None Response Time : N.A Think Time : N.A Minimum Instruction Time : 0**

**Correct Marks : 4 Wrong Marks : 1**

Nandlal Bose was deeply influenced by which of the following ?

- 1. Sculptures of Ellora caves
- 2. Murals of Ajanta caves
- 3. European academic style
- 4. Patna Qalam

**Options :**

- 68634052697. 1
- 68634052698. 2
- 68634052699. 3
- 68634052700. 4

**Question Number : 75 Question Id : 68634013339 Question Type : MCQ Option Shuffling : No Is Question Mandatory : No Calculator : None Response Time : N.A Think Time : N.A Minimum Instruction Time : 0**

**Correct Marks : 4 Wrong Marks : 1**

नन्दलाल बोस के कला पर किस शैली का गहरा प्रभाव था ?

1. एलौरा गुफाओं की मूर्तियों का
2. अजन्ता गुफाओं की भित्ति चित्रों का
3. युरोपियन अकादमिक शैली का
4. पटना कलम का

**Options :**

68634052697. 1  
68634052698. 2  
68634052699. 3  
68634052700. 4

**Question Number : 76 Question Id : 68634013340 Question Type : MCQ Option Shuffling : No Is Question Mandatory : No Calculator : None Response Time : N.A Think Time : N.A Minimum Instruction Time : 0**

**Correct Marks : 4 Wrong Marks : 1**

Which of the following state is famous for Kantha embroidery ?

1. West Bengal
2. Punjab
3. Maharashtra
4. Gujarat

**Options :**

68634052701. 1  
68634052702. 2  
68634052703. 3  
68634052704. 4

**Question Number : 76 Question Id : 68634013340 Question Type : MCQ Option Shuffling : No Is Question Mandatory : No Calculator : None Response Time : N.A Think Time : N.A Minimum Instruction Time : 0**

**Correct Marks : 4 Wrong Marks : 1**

कांथा कढ़ाई के लिए निम्नलिखित में से कौन सा प्रदेश प्रसिद्ध है ?

1. पश्चिम बंगाल
2. पंजाब
3. महाराष्ट्र
4. गुजरात

**Options :**

68634052701. 1  
68634052702. 2  
68634052703. 3

68634052704. 4

**Question Number : 77 Question Id : 68634013341 Question Type : MCQ Option Shuffling : No Is Question Mandatory : No Calculator : None Response Time : N.A Think Time : N.A Minimum Instruction Time : 0 Correct Marks : 4 Wrong Marks : 1**

Corinthian orders are a notable example of -

1. Pillars
2. Arch
3. Pediment
4. Freeze

**Options :**

- 68634052705. 1
- 68634052706. 2
- 68634052707. 3
- 68634052708. 4

**Question Number : 77 Question Id : 68634013341 Question Type : MCQ Option Shuffling : No Is Question Mandatory : No Calculator : None Response Time : N.A Think Time : N.A Minimum Instruction Time : 0 Correct Marks : 4 Wrong Marks : 1**

कॉरिथियन ऑर्डर किस के उदाहरण है ?

1. स्तंभ
2. आर्च
3. पेडीमेन्ट
4. फ्रीज़

**Options :**

- 68634052705. 1
- 68634052706. 2
- 68634052707. 3
- 68634052708. 4

**Question Number : 78 Question Id : 68634013342 Question Type : MCQ Option Shuffling : No Is Question Mandatory : No Calculator : None Response Time : N.A Think Time : N.A Minimum Instruction Time : 0 Correct Marks : 4 Wrong Marks : 1**

Where is Atala Masjid located ?

1. Dhar
2. Mandu
3. Bijapur
4. Jaunpur

**Options :**

- 68634052709. 1
- 68634052710. 2
- 68634052711. 3
- 68634052712. 4

**Question Number : 78 Question Id : 68634013342 Question Type : MCQ Option Shuffling : No Is Question Mandatory : No Calculator : None Response Time : N.A Think Time : N.A Minimum Instruction Time : 0**

**Correct Marks : 4 Wrong Marks : 1**

अटाला मस्जिद कहाँ स्थित है ?

- 1. धार
- 2. मांडु
- 3. बीजापुर
- 4. जौनपुर

**Options :**

- 68634052709. 1
- 68634052710. 2
- 68634052711. 3
- 68634052712. 4

**Question Number : 79 Question Id : 68634013343 Question Type : MCQ Option Shuffling : No Is Question Mandatory : No Calculator : None Response Time : N.A Think Time : N.A Minimum Instruction Time : 0**

**Correct Marks : 4 Wrong Marks : 1**

Chakreshwari is the *yakshi* of *Tirthankara*

- 1. Rishabhanath
- 2. Neminath
- 3. Mahavir
- 4. Shreyansnath

**Options :**

- 68634052713. 1
- 68634052714. 2
- 68634052715. 3
- 68634052716. 4

**Question Number : 79 Question Id : 68634013343 Question Type : MCQ Option Shuffling : No Is Question Mandatory : No Calculator : None Response Time : N.A Think Time : N.A Minimum Instruction Time : 0**

**Correct Marks : 4 Wrong Marks : 1**



चक्रेश्वरी इन तीर्थकर की यक्षी है -

1. ऋषभनाथ
2. नेमिनाथ
3. महावीर
4. श्रेयांसनाथ

**Options :**

- 68634052713. 1
- 68634052714. 2
- 68634052715. 3
- 68634052716. 4

**Question Number : 80 Question Id : 68634013344 Question Type : MCQ Option Shuffling : No Is Question Mandatory : No Calculator : None Response Time : N.A Think Time : N.A Minimum Instruction Time : 0**

**Correct Marks : 4 Wrong Marks : 1**

The architecture from which period is considered to be a “phase of transition” between the fortified tombs and the terraced gardens of the Mughals ?

1. Lodi dynasty (1451-1526)
2. Tughlaq dynasty (1320-1413)
3. Khalji dynasty (1290-1320)
4. Slave kings (1200-1246)

**Options :**

- 68634052717. 1
- 68634052718. 2
- 68634052719. 3
- 68634052720. 4

**Question Number : 80 Question Id : 68634013344 Question Type : MCQ Option Shuffling : No Is Question Mandatory : No Calculator : None Response Time : N.A Think Time : N.A Minimum Instruction Time : 0**

**Correct Marks : 4 Wrong Marks : 1**

किस काल की वास्तुकला को किलेदार मकबरा और मुगलकालीन सीढ़ीदार बाग के बीच की कड़ी माना गया है ?

1. लोदी शासन (1451-1526)
2. तुगलक शासन (1320-1413)
3. खिलजी शासन (1290-1320)
4. गुलाम वंश (1200-1246)

**Options :**

- 68634052717. 1
- 68634052718. 2

68634052719. 3

68634052720. 4

**Question Number : 81 Question Id : 68634013345 Question Type : MCQ Option Shuffling : No Is Question Mandatory : No Calculator : None Response Time : N.A Think Time : N.A Minimum Instruction Time : 0**

**Correct Marks : 4 Wrong Marks : 1**

Give below are two statements : One is labelled as **Assertion A** and the other is labelled as **Reason R** :

**Assertion A** : The deity of the Keshava temple at Belur was named Vijaya Narayana.

**Reason R** : It was done so to establish strong political ties with Cholas.

In the light of the above statements, choose the **most appropriate answer** from the options given below :

1. Both **A** and **R** are correct and **R** is the correct explanation of **A**
2. Both **A** and **R** are correct but **R** is **NOT** the correct explanation of **A**
3. **A** is correct but **R** is not correct
4. **A** is not correct but **R** is correct

**Options :**

68634052721. 1

68634052722. 2

68634052723. 3

68634052724. 4

**Question Number : 81 Question Id : 68634013345 Question Type : MCQ Option Shuffling : No Is Question Mandatory : No Calculator : None Response Time : N.A Think Time : N.A Minimum Instruction Time : 0**

**Correct Marks : 4 Wrong Marks : 1**

नीचे दो कथन दिए गए हैं: एक **अभिकथन (Assertion A)** के रूप में लिखित है तो दूसरा उसके **कारण (Reason R)** के रूप में:

**अभिकथन A** : बेलूर के केशव मन्दिर के देवता को विजय नारायण का नाम दिया गया था।

**कारण R** : यह चोल से मजबूत राजनीतिक संबंध स्थापित करने के लिए किया गया था।

उपरोक्त कथन के आलोक में, नीचे दिए गए विकल्पों में से **सबसे उपयुक्त उत्तर** का चयन कीजिए।

1. **A** और **R** दोनों सही हैं और **R, A** की सही व्याख्या है
2. **A** और **R** दोनों सही हैं, लेकिन **R, A** की सही व्याख्या नहीं है
3. **A** सही है लेकिन **R** सही नहीं है
4. **A** सही नहीं है लेकिन **R** सही है

**Options :**

68634052721. 1

68634052722. 2

68634052723. 3

68634052724. 4

**Question Number : 82 Question Id : 68634013346 Question Type : MCQ Option Shuffling : No Is Question Mandatory : No Calculator : None Response Time : N.A Think Time : N.A Minimum Instruction Time : 0**

**Correct Marks : 4 Wrong Marks : 1**

Give below are two statements : One is labelled as **Assertion A** and the other is labelled as **Reason R** :

**Assertion A** : The Company school was an Indo-European style of painting made in Delhi, Calcutta, Patna etc.

**Reason R** : The artistic style was a hybrid of Indian miniature painting elements with western techniques.

In the light of the above statements, choose the **most appropriate answer** from the options given below :

1. Both **A** and **R** are correct and **R** is the correct explanation of **A**
2. Both **A** and **R** are correct but **R** is **NOT** the correct explanation of **A**
3. **A** is correct but **R** is not correct
4. **A** is not correct but **R** is correct

**Options :**

68634052725. 1

68634052726. 2

68634052727. 3

68634052728. 4

**Question Number : 82 Question Id : 68634013346 Question Type : MCQ Option Shuffling : No Is Question Mandatory : No Calculator : None Response Time : N.A Think Time : N.A Minimum Instruction Time : 0**

**Correct Marks : 4 Wrong Marks : 1**

नीचे दो कथन दिए गए हैं: एक **अभिकथन (Assertion A)** के रूप में लिखित है तो दूसरा उसके **कारण (Reason R)** के रूप में:

**अभिकथन A** : कम्पनी शैली भारत-यूरोपी शैली की चित्रकला थी जिसका केंद्र दिल्ली, कलकत्ता, पटना आदि में था।

**कारण R** : यह चित्रकारी भारतीय लघुचित्र के तत्व एवं पश्चिमी तकनीकों का मिश्रण था।

उपरोक्त कथन के आलोक में, नीचे दिए गए विकल्पों में से **सबसे उपयुक्त उत्तर** का चयन कीजिए।

1. **A** और **R** दोनों सही हैं और **R, A** की सही व्याख्या है
2. **A** और **R** दोनों सही हैं, परन्तु **R, A** की सही व्याख्या नहीं है
3. **A** सही है परन्तु **R** सही नहीं है
4. **A** सही नहीं है परन्तु **R** सही है

**Options :**

68634052725. 1

68634052726. 2

68634052727. 3

68634052728. 4

**Question Number : 83 Question Id : 68634013347 Question Type : MCQ Option Shuffling : No Is Question Mandatory : No Calculator : None Response Time : N.A Think Time : N.A Minimum Instruction Time : 0**

**Correct Marks : 4 Wrong Marks : 1**

Give below are two statements : One is labelled as **Assertion A** and the other is labelled as **Reason R** :

**Assertion A** : The wheel of Dharma denotes preaching of the sermon.

**Reason R** : Early Buddhist artisans employed multiple symbols to exemplify the teachings and life of Buddha.

In the light of the above statements, choose the **most appropriate answer** from the options given below :

1. Both **A** and **R** are correct and **R** is the correct explanation of **A**
2. Both **A** and **R** are correct but **R** is **NOT** the correct explanation of **A**
3. **A** is correct but **R** is not correct
4. **A** is not correct but **R** is correct

**Options :**

68634052729. 1

68634052730. 2

68634052731. 3

68634052732. 4

**Question Number : 83 Question Id : 68634013347 Question Type : MCQ Option Shuffling : No Is Question Mandatory : No Calculator : None Response Time : N.A Think Time : N.A Minimum Instruction Time : 0**

**Correct Marks : 4 Wrong Marks : 1**

नीचे दो कथन दिए गए हैं: एक **अभिकथन (Assertion A)** के रूप में लिखित है तो दूसरा उसके **कारण (Reason R)** के रूप में:

**अभिकथन A** : धर्म-चक्र, उपदेश का प्रतीक है ।

**कारण R** : प्राथमिक बौद्ध कलाकार विभिन्न चिह्नों द्वारा बुद्ध के जीवन एवं शिक्षाओं को निरूपित करते थे।

उपरोक्त कथन के आलोक में, नीचे दिए गए विकल्पों में से **सबसे उपयुक्त उत्तर** का चयन कीजिए ।

1. **A** और **R** दोनों सही हैं और **R, A** की सही व्याख्या है
2. **A** और **R** दोनों सही हैं, परन्तु **R, A** की सही व्याख्या नहीं है
3. **A** सही है परन्तु **R** सही नहीं है
4. **A** सही नहीं है परन्तु **R** सही है

**Options :**

68634052729. 1

68634052730. 2

68634052731. 3

68634052732. 4

**Question Number : 84 Question Id : 68634013348 Question Type : MCQ Option Shuffling : No Is Question Mandatory : No Calculator : None Response Time : N.A Think Time : N.A Minimum Instruction Time : 0**

**Correct Marks : 4 Wrong Marks : 1**

Give below are two statements : One is labelled as **Assertion A** and the other is labelled as **Reason R** :

**Assertion A** : The architecture of Humayun's tomb was so elaborate that it set a precedent for further Mughal architecture in the country.

**Reason R** : It was the first structure to use granite at such a scale.

In the light of the above statements, choose the **most appropriate answer** from the options given below :

1. Both **A** and **R** are correct and **R** is the correct explanation of **A**
2. Both **A** and **R** are correct but **R** is **NOT** the correct explanation of **A**
3. **A** is correct but **R** is not correct
4. **A** is not correct but **R** is correct

**Options :**

68634052733. 1

68634052734. 2

68634052735. 3

68634052736. 4

**Question Number : 84 Question Id : 68634013348 Question Type : MCQ Option Shuffling : No Is Question Mandatory : No Calculator : None Response Time : N.A Think Time : N.A Minimum Instruction Time : 0**

**Correct Marks : 4 Wrong Marks : 1**

नीचे दो कथन दिए गए हैं: एक **अभिकथन (Assertion A)** के रूप में लिखित है तो दूसरा उसके **कारण (Reason R)** के रूप में:

**अभिकथन A** : हुमायूँ मकबरे की वास्तुकला इतनी विस्तृत थी कि वह आगे बनने वाली मुगल वास्तुकला के लिए उदाहरण व मिसाल बन गई।

**कारण R** : वह प्रथम इमारत थी जिसने ग्रनाईट का प्रयोग इतने विशाल स्तर पर किया।

उपरोक्त कथन के आलोक में, नीचे दिए गए विकल्पों में से **सबसे उपयुक्त उत्तर** का चयन कीजिए।

1. **A** और **R** दोनों सही हैं और **R, A** की सही व्याख्या है
2. **A** और **R** दोनों सही हैं, परन्तु **R, A** की सही व्याख्या नहीं है
3. **A** सही है परन्तु **R** सही नहीं है
4. **A** सही नहीं है परन्तु **R** सही है

**Options :**

68634052733. 1

68634052734. 2

68634052735. 3

68634052736. 4

**Question Number : 85 Question Id : 68634013349 Question Type : MCQ Option Shuffling : No Is Question Mandatory : No Calculator : None Response Time : N.A Think Time : N.A Minimum Instruction Time : 0**

**Correct Marks : 4 Wrong Marks : 1**

Give below are two statements : One is labelled as **Assertion A** and the other is labelled as **Reason R** :

**Assertion A** : "The Gates of Hell" is a masterpiece of Rodin.

**Reason R** : "The Gates of Hell" includes major art works like "the thinker", "the poet" by Rodin.

In the light of the above statements, choose the **most appropriate answer** from the options given below :

1. Both **A** and **R** are correct and **R** is the correct explanation of **A**
2. Both **A** and **R** are correct but **R** is **NOT** the correct explanation of **A**
3. **A** is correct but **R** is not correct
4. **A** is not correct but **R** is correct

**Options :**

68634052737. 1

68634052738. 2

68634052739. 3

68634052740. 4

**Question Number : 85 Question Id : 68634013349 Question Type : MCQ Option Shuffling : No Is Question Mandatory : No Calculator : None Response Time : N.A Think Time : N.A Minimum Instruction Time : 0**

**Correct Marks : 4 Wrong Marks : 1**

नीचे दो कथन दिए गए हैं: एक अभिकथन (**Assertion A**) के रूप में लिखित है तो दूसरा उसके कारण (**Reason R**) के रूप में:

**अभिकथन A** : "द गेट्स ऑफ हेल" रोदिन की एक श्रेष्ठ कृति है।

**कारण R** : "द गेट्स ऑफ हेल" में रोदिन की "द थिंकर", "द पॉयट" प्रमुख कलाकृतियाँ सम्मिलित हैं।

उपरोक्त कथन के आलोक में, नीचे दिए गए विकल्पों में से सबसे उपयुक्त उत्तर का चयन कीजिए।

1. **A** और **R** दोनों सही हैं और **R**, **A** की सही व्याख्या है
2. **A** और **R** दोनों सही हैं और **R**, **A** की सही व्याख्या नहीं है
3. **A** सही है लेकिन **R** सही नहीं है
4. **A** सही नहीं है लेकिन **R** सही है

**Options :**

68634052737. 1

68634052738. 2

68634052739. 3

68634052740. 4

**Question Number : 86 Question Id : 68634013350 Question Type : MCQ Option Shuffling : No Is Question Mandatory : No Calculator : None Response Time : N.A Think Time : N.A Minimum Instruction Time : 0**

**Correct Marks : 4 Wrong Marks : 1**

Give below are two statements : One is labelled as **Assertion A** and the other is labelled as **Reason R** :

**Assertion A** : The Trajan's column was a religious symbol.

**Reason R** : The column itself depicts the Roman emperor's triumphal victory in a war with Dacians.

In the light of the above statements, choose the **most appropriate answer** from the options given below :

1. Both **A** and **R** are correct and **R** is the correct explanation of **A**
2. Both **A** and **R** are correct but **R** is **NOT** the correct explanation of **A**
3. **A** is correct but **R** is not correct
4. **A** is not correct but **R** is correct

**Options :**

68634052741. 1

68634052742. 2

68634052743. 3

68634052744. 4

**Question Number : 86 Question Id : 68634013350 Question Type : MCQ Option Shuffling : No Is Question Mandatory : No Calculator : None Response Time : N.A Think Time : N.A Minimum Instruction Time : 0**

**Correct Marks : 4 Wrong Marks : 1**

नीचे दो कथन दिए गए हैं: एक **अभिकथन (Assertion A)** के रूप में लिखित है तो दूसरा उसके **कारण (Reason R)** के रूप में:

**अभिकथन A** : ट्राजन कॉलम एक धार्मिक चिन्ह था ।

**कारण R** : यह स्तम्भ रोमन सम्राट के डिसियन्स के साथ युद्ध में महाविजय को दर्शाता है।

उपरोक्त कथन के आलोक में, नीचे दिए गए विकल्पों में से **सबसे उपयुक्त उत्तर** का चयन कीजिए ।

1. **A** और **R** दोनों सही हैं और **R, A** की सही व्याख्या है
2. **A** और **R** दोनों सही हैं, परन्तु **R, A** की सही व्याख्या नहीं है
3. **A** सही है परन्तु **R** सही नहीं है
4. **A** सही नहीं है परन्तु **R** सही है

**Options :**

68634052741. 1

68634052742. 2

68634052743. 3

68634052744. 4

**Question Number : 87 Question Id : 68634013351 Question Type : MCQ Option Shuffling : No Is Question Mandatory : No Calculator : None Response Time : N.A Think Time : N.A Minimum Instruction Time : 0**

**Correct Marks : 4 Wrong Marks : 1**

Give below are two statements : One is labelled as **Assertion A** and the other is labelled as **Reason R** :  
**Assertion A** : Abanindranatha Tagore developed the traditional wash technique brought to India by the Chinese.

**Reason R** : Amongst his many visions was the idea to create a pan-asian model of art.

In the light of the above statements, choose the **most appropriate answer** from the options given below :

1. Both **A** and **R** are correct and **R** is the correct explanation of **A**
2. Both **A** and **R** are correct but **R** is **NOT** the correct explanation of **A**
3. **A** is correct but **R** is not correct
4. **A** is not correct but **R** is correct

**Options :**

- 68634052745. 1
- 68634052746. 2
- 68634052747. 3
- 68634052748. 4

**Question Number : 87 Question Id : 68634013351 Question Type : MCQ Option Shuffling : No Is Question Mandatory : No Calculator : None Response Time : N.A Think Time : N.A Minimum Instruction Time : 0**

**Correct Marks : 4 Wrong Marks : 1**

नीचे दो कथन दिए गए हैं: एक **अभिकथन (Assertion A)** के रूप में लिखित है तो दूसरा उसके **कारण (Reason R)** के रूप में:

**अभिकथन A** : अबनिन्द्रनाथ टैगोर ने परम्परागत वॉश तकनीक को विकसित किया जो भारत में चीन से आया था।

**कारण R** : उनके विभिन्न उद्देश्यों में से एक था पैन-एशियाई कला का निर्माण करना ।

उपरोक्त कथन के आलोक में, नीचे दिए गए विकल्पों में से **सबसे उपयुक्त उत्तर** का चयन कीजिए ।

1. **A** और **R** दोनों सही हैं और **R, A** की सही व्याख्या है
2. **A** और **R** दोनों सही हैं, परन्तु **R, A** की सही व्याख्या नहीं है
3. **A** सही है परन्तु **R** सही नहीं है
4. **A** सही नहीं है परन्तु **R** सही है

**Options :**

- 68634052745. 1
- 68634052746. 2
- 68634052747. 3
- 68634052748. 4

**Question Number : 88 Question Id : 68634013352 Question Type : MCQ Option Shuffling : No Is Question Mandatory : No Calculator : None Response Time : N.A Think Time : N.A Minimum Instruction Time : 0**

**Correct Marks : 4 Wrong Marks : 1**



Give below are two statements :

**Statement I** : The tomb of Khan-i-Jahan Tilangani had a crude eight - sided plan from which the later distinct octagonal plan of Indo-Islamic architecture was developed.

**Statement II** : The tomb of Tilangani is from Tuglaq period.

In the light of the above statements, choose the **most appropriate answer** from the options given below :

1. Both Statement I and Statement II are correct
2. Both Statement I and Statement II are incorrect
3. Statement I is correct but Statement II is incorrect
4. Statement I is incorrect but Statement II is correct

**Options :**

68634052749. 1  
68634052750. 2  
68634052751. 3  
68634052752. 4

**Question Number : 88 Question Id : 68634013352 Question Type : MCQ Option Shuffling : No Is Question Mandatory : No Calculator : None Response Time : N.A Think Time : N.A Minimum Instruction Time : 0**

**Correct Marks : 4 Wrong Marks : 1**

नीचे दो कथन दिए गए हैं:

**कथन I** : खान-ए-ज़हान तिलंगानी के अपरिष्कृत आठ कोनों के मकबरे से ही आगे चलकर भारतीय -इस्लामी वास्तुकला में अष्टकोणात्मक योजना का विकास हुआ।

**कथन II** : तिलंगानी का मकबरा तुगलक कालीन है।

उपरोक्त कथन के आलोक में, नीचे दिए गए विकल्पों में से **सबसे उपयुक्त उत्तर** का चयन कीजिए:

1. कथन I और II दोनों सही हैं
2. कथन I और II दोनों गलत हैं
3. कथन I सही है, लेकिन कथन II गलत है
4. कथन I गलत है, लेकिन कथन II सही है

**Options :**

68634052749. 1  
68634052750. 2  
68634052751. 3  
68634052752. 4

**Question Number : 89 Question Id : 68634013353 Question Type : MCQ Option Shuffling : No Is Question Mandatory : No Calculator : None Response Time : N.A Think Time : N.A Minimum Instruction Time : 0**

**Correct Marks : 4 Wrong Marks : 1**

Give below are two statements :

**Statement I** : The Vijaynagar period sculptures are characteristic of large and lively monolithic carvings.

**Statement II** : The reclining Nandi northeast to the Lepakshi temple and the Ugra Narasimha at Vijaynagar are testimonials to this assertion.

In the light of the above statements, choose the **most appropriate answer** from the options given below :

1. Both Statement I and Statement II are correct
2. Both Statement I and Statement II are incorrect
3. Statement I is correct but Statement II is incorrect
4. Statement I is incorrect but Statement II is correct

**Options :**

68634052753. 1  
68634052754. 2  
68634052755. 3  
68634052756. 4

**Question Number : 89 Question Id : 68634013353 Question Type : MCQ Option Shuffling : No Is Question Mandatory : No Calculator : None Response Time : N.A Think Time : N.A Minimum Instruction Time : 0**

**Correct Marks : 4 Wrong Marks : 1**

नीचे दो कथन दिए गए हैं:

**कथन I** : विजयनगर शासन के दौरान बनाई गई मूर्तिकला अपने वृहद् एवं जीवन्त नक्काशी के लिए जानी जाती है।

**कथन II** : लेपाक्षी मन्दिर के उत्तरपूर्व में लेटे हुए नन्दी की प्रतिमा और उग्र नरसिंह की प्रतिमा इस अभिकथन को प्रमाणित करती है।

उपरोक्त कथन के आलोक में, नीचे दिए गए विकल्पों में से **सबसे उपयुक्त उत्तर** का चयन कीजिए:

1. कथन I और II दोनों सही हैं
2. कथन I और II दोनों गलत हैं
3. कथन I सही है, किन्तु कथन II गलत है
4. कथन I गलत है, किन्तु कथन II सही है

**Options :**

68634052753. 1  
68634052754. 2  
68634052755. 3  
68634052756. 4

**Question Number : 90 Question Id : 68634013354 Question Type : MCQ Option Shuffling : No Is Question Mandatory : No Calculator : None Response Time : N.A Think Time : N.A Minimum Instruction Time : 0**

**Correct Marks : 4 Wrong Marks : 1**

Give below are two statements :

**Statement I** : The Chaurpanchasika paintings depict the two characters in full profile for the first time in Indian Miniature Painting.

**Statement II** : A distinct characteristic of the painting style is its bright colour.

In the light of the above statements, choose the **most appropriate answer** from the options given below :

1. Both Statement I and Statement II are correct
2. Both Statement I and Statement II are incorrect
3. Statement I is correct but Statement II is incorrect
4. Statement I is incorrect but Statement II is correct

**Options :**

68634052757. 1

68634052758. 2

68634052759. 3

68634052760. 4

**Question Number : 90 Question Id : 68634013354 Question Type : MCQ Option Shuffling : No Is Question Mandatory : No Calculator : None Response Time : N.A Think Time : N.A Minimum Instruction Time : 0**

**Correct Marks : 4 Wrong Marks : 1**

नीचे दो कथन दिए गए हैं:

**कथन I** : भारतीय लघुचित्र में पहली बार चौरपंचासिका के चित्र अपने दोनों पात्रों को पूर्ण प्रोफाइल में दर्शाती है ।

**कथन II** : भड़कीले रंग इस शैली की विशेषता है।

उपरोक्त कथन के आलोक में, नीचे दिए गए विकल्पों में से **सबसे उपयुक्त उत्तर** का चयन कीजिए:

1. कथन I और II दोनों सही हैं
2. कथन I और II दोनों गलत हैं
3. कथन I सही है, किन्तु कथन II गलत है
4. कथन I गलत है, किन्तु कथन II सही है

**Options :**

68634052757. 1

68634052758. 2

68634052759. 3

68634052760. 4

**Question Number : 91 Question Id : 68634013355 Question Type : MCQ Option Shuffling : No Is Question Mandatory : No Calculator : None Response Time : N.A Think Time : N.A Minimum Instruction Time : 0**

**Correct Marks : 4 Wrong Marks : 1**

Give below are two statements :

Statement I : In Mewar miniature paintings, fine brushes were often made from squirrel hair.

Statement II : The materials used were cloth and paper.

In the light of the above statements, choose the most appropriate answer from the options given below :

1. Both Statement I and Statement II are correct
2. Both Statement I and Statement II are incorrect
3. Statement I is correct but Statement II is incorrect
4. Statement I is incorrect but Statement II is correct

**Options :**

68634052761. 1  
68634052762. 2  
68634052763. 3  
68634052764. 4

**Question Number : 91 Question Id : 68634013355 Question Type : MCQ Option Shuffling : No Is Question Mandatory : No Calculator : None Response Time : N.A Think Time : N.A Minimum Instruction Time : 0**

**Correct Marks : 4 Wrong Marks : 1**

नीचे दो कथन दिए गए हैं:

**कथन I :** मेवाड़ लघुचित्रों में पतली ब्रश गिलहरी के केश से बनाए जाते थे ।

**कथन II :** इस्तेमाल में आने वाली सामग्रियों में कपड़ा और कागज थे ।

उपरोक्त कथन के आलोक में, नीचे दिए गए विकल्पों में से **सबसे उपयुक्त उत्तर** का चयन कीजिए:

1. कथन I और II दोनों सही हैं
2. कथन I और II दोनों गलत हैं
3. कथन I सही है, किन्तु कथन II गलत है
4. कथन I गलत है, किन्तु कथन II सही है

**Options :**

68634052761. 1  
68634052762. 2  
68634052763. 3  
68634052764. 4

**Question Number : 92 Question Id : 68634013356 Question Type : MCQ Option Shuffling : No Is Question Mandatory : No Calculator : None Response Time : N.A Think Time : N.A Minimum Instruction Time : 0**

**Correct Marks : 4 Wrong Marks : 1**

Give below are two statements :

**Statement I** : Avalokiteshwara is often depicted in India with multiple eyes to denote his omnipresence.

**Statement II** : There is a popular Avalokiteshwara painting in Ajanta Cave No. 1.

In the light of the above statements, choose the **most appropriate answer** from the options given below :

1. Both Statement I and Statement II are correct
2. Both Statement I and Statement II are incorrect
3. Statement I is correct but Statement II is incorrect
4. Statement I is incorrect but Statement II is correct

**Options :**

68634052765. 1

68634052766. 2

68634052767. 3

68634052768. 4

**Question Number : 92 Question Id : 68634013356 Question Type : MCQ Option Shuffling : No Is Question Mandatory : No Calculator : None Response Time : N.A Think Time : N.A Minimum Instruction Time : 0**

**Correct Marks : 4 Wrong Marks : 1**

नीचे दो कथन दिए गए हैं:

**कथन I** : अवलोकितेश्वर को भारत में बहुसंख्यक नेत्रों वाला बनाया जाता है जिससे उनकी सर्वभूति का संकेत मिले।

**कथन II** : अजन्ता के गुफा संख्या 1 में अवलोकितेश्वर का एक प्रसिद्ध चित्र है।

उपरोक्त कथन के आलोक में, नीचे दिए गए विकल्पों में से **सबसे उपयुक्त उत्तर** का चयन कीजिए:

1. कथन I और II दोनों सही हैं
2. कथन I और II दोनों गलत हैं
3. कथन I सही है, किन्तु कथन II गलत है
4. कथन I गलत है, किन्तु कथन II सही है

**Options :**

68634052765. 1

68634052766. 2

68634052767. 3

68634052768. 4

**Question Number : 93 Question Id : 68634013357 Question Type : MCQ Option Shuffling : No Is Question Mandatory : No Calculator : None Response Time : N.A Think Time : N.A Minimum Instruction Time : 0**

**Correct Marks : 4 Wrong Marks : 1**

Give below are two statements :

**Statement I** : Van Gogh was post Impressionist Artist.

**Statement II** : Van Gogh used colours to express his inner emotions.

In the light of the above statements, choose the **most appropriate answer** from the options given below :

1. Both Statement I and Statement II are correct
2. Both Statement I and Statement II are incorrect
3. Statement I is correct but Statement II is incorrect
4. Statement I is incorrect but Statement II is correct

**Options :**

68634052769. 1

68634052770. 2

68634052771. 3

68634052772. 4

**Question Number : 93 Question Id : 68634013357 Question Type : MCQ Option Shuffling : No Is Question Mandatory : No Calculator : None Response Time : N.A Think Time : N.A Minimum Instruction Time : 0**

**Correct Marks : 4 Wrong Marks : 1**

नीचे दो कथन दिए गए हैं:

**कथन I** : वैन गॉ एक उत्तर प्रभाववादी चित्रकार था।

**कथन II** : वैन गॉ ने अपनी आंतरिक संवेदनाओं की अभिव्यक्ति के लिए रंगों का उपयोग किया।

उपरोक्त कथन के आलोक में, नीचे दिए गए विकल्पों में से सही उत्तर का चयन कीजिए।

1. कथन I और II दोनों सत्य हैं
2. कथन I और II दोनों असत्य हैं
3. कथन I सत्य है, लेकिन कथन II असत्य है
4. कथन I असत्य है, लेकिन कथन II सत्य है

**Options :**

68634052769. 1

68634052770. 2

68634052771. 3

68634052772. 4

**Question Number : 94 Question Id : 68634013358 Question Type : MCQ Option Shuffling : No Is Question Mandatory : No Calculator : None Response Time : N.A Think Time : N.A Minimum Instruction Time : 0**

**Correct Marks : 4 Wrong Marks : 1**

Match List I with List II

LIST I		LIST II	
A.	Harappa	I.	Daya Ram Sahnii
B.	Mohenjodaro	II.	S. R. Rao
C.	Lothal	III.	R. D. Banerjee
D.	Dholavira	IV.	J. P. Joshi

Choose the correct answer from the options given below:

1. A-I , B-III , C-II , D-IV
2. A-I , B-IV , C-II , D-III
3. A-IV , B-II , C-I , D-III
4. A-III , B-I , C-II , D-IV

Options :

68634052773. 1  
68634052774. 2  
68634052775. 3  
68634052776. 4

Question Number : 94 Question Id : 68634013358 Question Type : MCQ Option Shuffling : No Is Question Mandatory : No  
Calculator : None Response Time : N.A Think Time : N.A Minimum Instruction Time : 0  
Correct Marks : 4 Wrong Marks : 1

सूची I का सूची II से मिलान कीजिए

सूची I		सूची II	
A.	हड़प्पा	I.	दयाराम साहनी
B.	मोहनजोदड़ो	II.	एस. आर. राव
C.	लोथल	III.	आर. डी. बैनर्जी
D.	धौलावीरा	IV.	जे. पी. जोशी

निम्नलिखित विकल्पों में से सही उत्तर का चयन कीजिए :

1. A-I , B-III , C-II , D-IV
2. A-I , B-IV , C-II , D-III
3. A-IV , B-II , C-I , D-III
4. A-III , B-I , C-II , D-IV

Options :

68634052773. 1  
68634052774. 2  
68634052775. 3  
68634052776. 4

Question Number : 95 Question Id : 68634013359 Question Type : MCQ Option Shuffling : No Is Question Mandatory : No  
Calculator : None Response Time : N.A Think Time : N.A Minimum Instruction Time : 0  
Correct Marks : 4 Wrong Marks : 1

Match List I with List II

LIST I		LIST II	
A.	Vidurpandita Jataka	I.	Cave 17
B.	Hamsa Jataka	II.	Cave 2
C.	Chaddanta Jataka	III.	Cave 10
D.	Mahajanaka Jataka	IV.	Cave 1

Choose the correct answer from the options given below:

1. A-III , B-I , C-II , D- IV
2. A-I , B-III , C-II , D-IV
3. A-II , B-I , C-III, D-IV
4. A-I , B-IV , C-II , D-III

Options :

68634052777. 1  
68634052778. 2  
68634052779. 3  
68634052780. 4

Question Number : 95 Question Id : 68634013359 Question Type : MCQ Option Shuffling : No Is Question Mandatory : No  
Calculator : None Response Time : N.A Think Time : N.A Minimum Instruction Time : 0  
Correct Marks : 4 Wrong Marks : 1

सूची I का सूची II से मिलान कीजिए

सूची I		सूची II	
A.	विदुरपंडित जातक	I.	गुफा सं०.17
B.	हंसा जातक	II.	गुफा सं०.2
C.	छदन्त जातक	III.	गुफा सं०.10
D.	महाजनक जातक	IV.	गुफा सं०.1

निम्नलिखित विकल्पों में से सही उत्तर का चयन कीजिए :

1. A-III , B-I , C-II , D- IV
2. A-I , B-III , C-II , D-IV
3. A-II , B-I , C-III, D-IV
4. A-I , B-IV , C-II , D-III

Options :

68634052777. 1  
68634052778. 2  
68634052779. 3  
68634052780. 4

Question Number : 96 Question Id : 68634013360 Question Type : MCQ Option Shuffling : No Is Question Mandatory : No  
Calculator : None Response Time : N.A Think Time : N.A Minimum Instruction Time : 0  
Correct Marks : 4 Wrong Marks : 1



Match List I with List II

LIST I		LIST II	
A.	Varuna	I.	Plough
B.	Yama	II.	Chakra
C.	Vishnu	III.	Danda
D.	Balram	IV.	Naga paash

Choose the correct answer from the options given below:

1. A-I , B-II , C-III , D-IV
2. A-IV , B-III , C-II , D-I
3. A-IV , B-II , C-III , D- I
4. A-IV , B-II , C-I , D-III

**Options :**

68634052781. 1  
68634052782. 2  
68634052783. 3  
68634052784. 4

**Question Number : 96 Question Id : 68634013360 Question Type : MCQ Option Shuffling : No Is Question Mandatory : No Calculator : None Response Time : N.A Think Time : N.A Minimum Instruction Time : 0 Correct Marks : 4 Wrong Marks : 1**

सूची I का सूची II से मिलान कीजिए

सूची I		सूची II	
A.	वरुण	I.	हल
B.	यम	II.	चक्र
C.	विष्णु	III.	दंड
D.	बलराम	IV.	नाग पाश

निम्नलिखित विकल्पों में से सही उत्तर का चयन कीजिए :

1. A-I , B-II , C-III , D-IV
2. A-IV , B-III , C-II , D-I
3. A-IV , B-II , C-III , D- I
4. A-IV , B-II , C-I , D-III

**Options :**

68634052781. 1  
68634052782. 2  
68634052783. 3  
68634052784. 4

**Question Number : 97 Question Id : 68634013361 Question Type : MCQ Option Shuffling : No Is Question Mandatory : No Calculator : None Response Time : N.A Think Time : N.A Minimum Instruction Time : 0 Correct Marks : 4 Wrong Marks : 1**

Match List I with List II

LIST I		LIST II	
A.	Rishabhnaath	I.	Conch
B.	Shreyansanath	II.	Rhinoceros
C.	Neminath	III.	Serpent
D.	Parshavanath	IV.	Ox

Choose the correct answer from the options given below:

1. A-I , B-IV , C-II , D-III
2. A-III , B-I , C-II , D-IV
3. A-I , B-III , C-II , D-IV
4. A-IV , B-II , C-I , D-III

Options :

68634052785. 1  
68634052786. 2  
68634052787. 3  
68634052788. 4

Question Number : 97 Question Id : 68634013361 Question Type : MCQ Option Shuffling : No Is Question Mandatory : No  
Calculator : None Response Time : N.A Think Time : N.A Minimum Instruction Time : 0  
Correct Marks : 4 Wrong Marks : 1

सूची I का सूची II से मिलान कीजिए

सूची I		सूची II	
A.	ऋषभनाथ	I.	शंख
B.	श्रेयांसनाथ	II.	गैंडा
C.	नेमिनाथ	III.	सर्प
D.	पार्श्वनाथ	IV.	बैल

नीचे दिए गए विकल्पों में से सही उत्तर चुनिए :

1. A-I , B-IV , C-II , D-III
2. A-III , B-I , C-II , D-IV
3. A-I , B-III , C-II , D-IV
4. A-IV , B-II , C-I , D-III

Options :

68634052785. 1  
68634052786. 2  
68634052787. 3  
68634052788. 4

Question Number : 98 Question Id : 68634013362 Question Type : MCQ Option Shuffling : No Is Question Mandatory : No  
Calculator : None Response Time : N.A Think Time : N.A Minimum Instruction Time : 0  
Correct Marks : 4 Wrong Marks : 1

Match List I with List II

LIST I		LIST II	
A.	Paul Gauguin	I.	Sun Flower
B.	Van Gogh	II.	Guernica
C.	Pablo Picasso	III.	Vision After the Sermon
D.	Henry Matisse	IV.	Harmony of Red

Choose the correct answer from the options given below:

1. A-III , B-I , C-II , D-IV

2. A-IV , B-II , C-I , D-III

3. A-II , B-IV , C-III , D- I

4. A-I , B-II , C-III , D- IV

**Options :**

68634052789. 1

68634052790. 2

68634052791. 3

68634052792. 4

**Question Number : 98 Question Id : 68634013362 Question Type : MCQ Option Shuffling : No Is Question Mandatory : No Calculator : None Response Time : N.A Think Time : N.A Minimum Instruction Time : 0**

**Correct Marks : 4 Wrong Marks : 1**

सूची I के साथ सूची II का मिलान कीजिए

सूची I		सूची II	
A.	पॉल गागुिन	I.	सन फ्लावर
B.	वैन गॉ	II.	ग्वरनिका
C.	पाब्लो पिकासो	III.	विज़न आफ्टर द सर्मन
D.	हेनरी मतीज़	IV.	हार्मनी ऑफ़ रेड

नीचे दिए गए विकल्पों में से सही उत्तर का चयन कीजिए:

1. A-III , B-I , C-II , D-IV

2. A-IV , B-II , C-I , D-III

3. A-II , B-IV , C-III , D- I

4. A-I , B-II , C-III , D- IV

**Options :**

68634052789. 1

68634052790. 2

68634052791. 3

68634052792. 4

**Question Number : 99 Question Id : 68634013363 Question Type : MCQ Option Shuffling : No Is Question Mandatory : No Calculator : None Response Time : N.A Think Time : N.A Minimum Instruction Time : 0**

**Correct Marks : 4 Wrong Marks : 1**

Match List I with List II

LIST I		LIST II	
A.	Asit Kumar Halder	I.	Bengal School of Art
B.	Rabindranath Tagore	II.	Delhi
C.	Ram Kumar	III.	Marg magazine
D.	Mulk Raj Anand	IV.	Shantiniketan

Choose the correct answer from the options given below:

1. A-IV , B-II , C-I , D- III

2. A-I , B-IV , C-III , D- II

3. A-I , B-IV , C-II , D- III

4. A-II , B-I , C-III , D- IV

Options :

68634052793. 1

68634052794. 2

68634052795. 3

68634052796. 4

Question Number : 99 Question Id : 68634013363 Question Type : MCQ Option Shuffling : No Is Question Mandatory : No  
Calculator : None Response Time : N.A Think Time : N.A Minimum Instruction Time : 0  
Correct Marks : 4 Wrong Marks : 1

सूची I का सूची II से मिलान कीजिए

सूची I		सूची II	
A.	असित कुमार हल्दर	I.	बंगाल स्कूल ऑफ आर्ट
B.	रबिन्द्रनाथ टैगोर	II.	दिल्ली
C.	राम कुमार	III.	मार्ग मैगजीन
D.	मुल्क राज आनन्द	IV.	शान्तिनिकेतन

नीचे दिए गए विकल्पों में से सही उत्तर चुनिए :

1. A-IV , B-II , C-I , D- III

2. A-I , B-IV , C-III , D- II

3. A-I , B-IV , C-II , D- III

4. A-II , B-I , C-III , D- IV

Options :

68634052793. 1

68634052794. 2

68634052795. 3

68634052796. 4

Question Number : 100 Question Id : 68634013364 Question Type : MCQ Option Shuffling : No Is Question Mandatory : No  
Calculator : None Response Time : N.A Think Time : N.A Minimum Instruction Time : 0  
Correct Marks : 4 Wrong Marks : 1

Match List I with List II

LIST I		LIST II	
A.	Devnimori	I.	Gujarat
B.	Gajendramoksha Penel	II.	Ahichchhatra
C.	Ganga and Yamuna figures	III.	Dashavatar temple, Deogarh
D.	Colossal Varaha	IV.	Eran

Choose the correct answer from the options given below:

1. A-III , B-I , C-II , D- IV

2. A-I , B-III , C-II , D- IV

3. A-II , B-I , C-III , D- IV

4. A-I , B-IV , C-II , D- III

**Options :**

68634052797. 1

68634052798. 2

68634052799. 3

68634052800. 4

**Question Number : 100 Question Id : 68634013364 Question Type : MCQ Option Shuffling : No Is Question Mandatory : No Calculator : None Response Time : N.A Think Time : N.A Minimum Instruction Time : 0**

**Correct Marks : 4 Wrong Marks : 1**

सूची I का सूची II से मिलान कीजिए

सूची I		सूची II	
A.	देवनीमोरी	I.	गुजरात
B.	गजेन्द्रमोक्ष पैनल	II.	अहिछत्र
C.	गंगा-यमुना आकृतियाँ	III.	दशावतार मन्दिर
D.	प्रकांड वराह	IV.	एरण

नीचे दिए गए विकल्पों में से सही उत्तर चुनिए :

1. A-III , B-I , C-II , D- IV

2. A-I , B-III , C-II , D- IV

3. A-II , B-I , C-III , D- IV

4. A-I , B-IV , C-II , D- III

**Options :**

68634052797. 1

68634052798. 2

68634052799. 3

68634052800. 4