

# N 760

Seat No. 

--	--	--	--	--	--

2022 IV 04 1030 -N 760- SOCIAL SCIENCES (73) GEOGRAPHY—PAPER II (E)  
(REVISED COURSE)

Time : 2 Hours

(Pages 7)

Max. Marks : 40

---

*Note* :—

- (1) All questions/activities are compulsory.
- (2) Figures to the right indicate full marks.
- (3) For Q. No. 4(A) use supplied outline map of India and tie it to your answer-book.
- (4) For Q. No. 6(A) use the graph paper supplied to you and attach it to the main answer-book.
- (5) Use of stencil is allowed for drawing map.
- (6) Draw neat diagrams and sketches wherever necessary.
- (7) Answers should be written in Black or Blue ink only.
- (8) Use of Pencil/Colour Pencil is allowed for drawing, sketches and map work.
- (9) Answers written in pencil will not be considered.

P.T.O.

## 2/N 760

1. Complete the following sentences by choosing the appropriate alternatives from those given and rewrite the sentences in your answer-book :

4

- (1) India is located in the ..... hemispheres of the earth.
- (i) Northern and Eastern
  - (ii) Southern and Western
  - (iii) Northern and Western
  - (iv) Southern and Eastern
- (2) Brazil gets rainfall from south-east and north-east ..... winds.
- (i) Monsoon
  - (ii) Trade (eastern)
  - (iii) Anti-trade
  - (iv) Cyclonic
- (3) The economies of India and Brazil are of the ..... type.
- (i) Underdeveloped
  - (ii) Developed
  - (iii) Highly developed
  - (iv) Developing
- (4) Brazil is covered mainly by .....
- (i) Plains
  - (ii) Highlands
  - (iii) Mountainous region
  - (iv) Dissected hills

## 3/N 760

2. Match the following :

4

'A'

'B'

- |                          |                            |
|--------------------------|----------------------------|
| (1) Field Visit          | (i) Tourist place          |
| (2) Pico De Neblina      | (ii) Goa                   |
| (3) Most Urbanised State | (iii) Sample questionnaire |
| (4) Rio de Janeiro       | (iv) Himachal Pradesh      |
|                          | (v) Highest peak in Brazil |

3. Answer the following in *one* sentence (any *four*) :

4

- (1) What is the rainshadow region in Brazil called ?
- (2) Which is the popular sport of Brazil ?
- (3) Areawise which is the largest state in India ?
- (4) Which longitude in India is considered as Indian Standard Time ?
- (5) What type of agriculture is mainly practised in India ?

4. (A) Mark the following in the outline map of India supplied to you, write the names and give index (any *four*) : 4

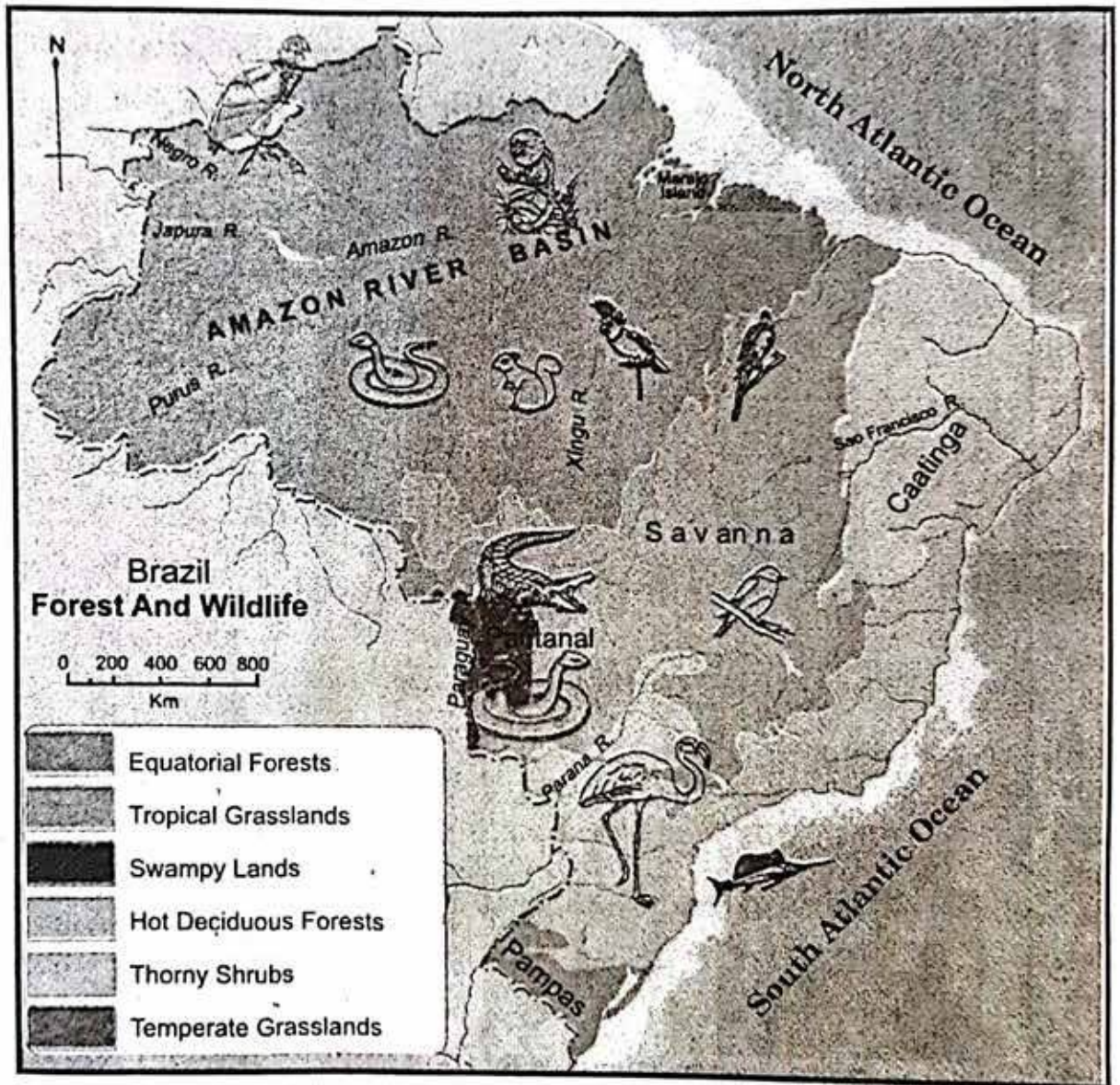
- (1) Sikkim
- (2) Lakshadweep Island
- (3) Chennai Port
- (4) Mineral oil refineries in Assam—Digboi
- (5) Any one southern state with high density of population
- (6) Tropic of Cancer.



# 4/N 760

- (B) Observe the given map and answer the questions given below it (any four) :

4



Questions :

- (1) Name any *two* forests in Brazil.
- (2) Name the Island shown in the map.
- (3) In which place do you find crocodiles ?
- (4) Where are Tamairin found in Brazil ?
- (5) Name the grassland to the southernmost part of Brazil.

## 5/N 760

5. Give geographical reasons for the following (any two) : 6
- (1) Deciduous type of vegetation are found in India.
  - (2) Eco-tourism is being developed more in Brazil.
  - (3) Fishing plays an important role in the economy of India.
  - (4) There are limitations on mining in the interior parts of Brazil.
6. (A) With the help of given statistical data prepare a simple bar graph and answer the following questions : 6

### Percentage of Urban Population—Brazil

(1960 to 2010)

Years	% of Urban Population
1960	47.1
1970	56.8
1980	66.0
1990	74.6
2000	81.5
2010	84.6

Questions :

- (1) What does the above line graph show ?
- (2) In which decade urbanisation occurred slowly ?
- (3) What was the percentage of increase in urbanisation during the period from 1980 to 1990 ?

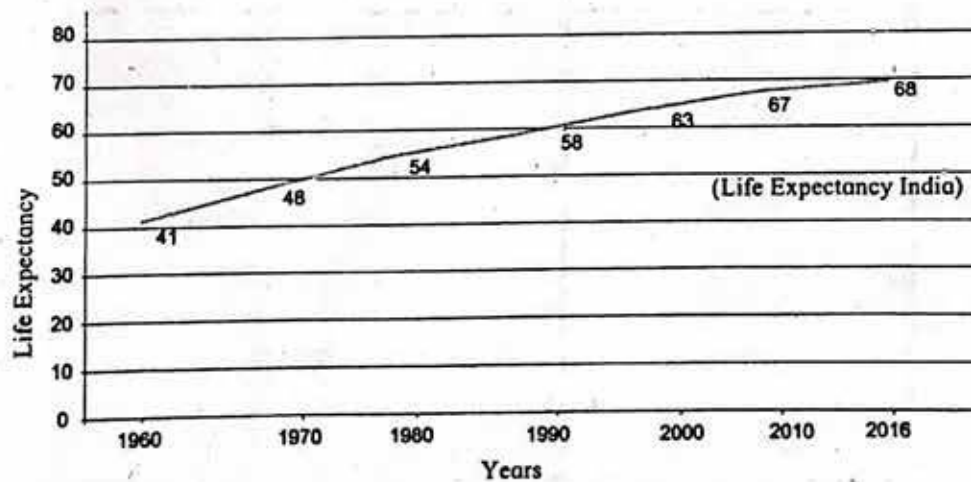
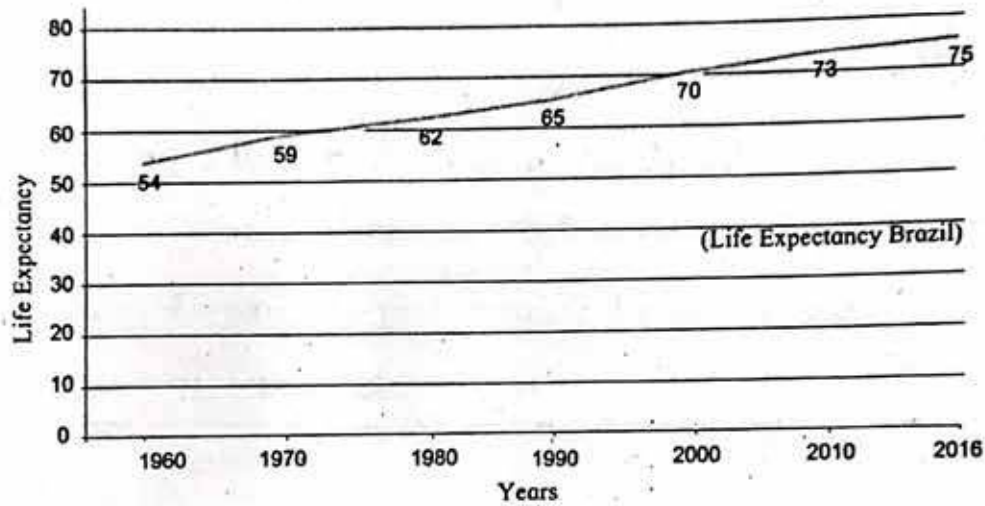


# 6/N 760

Or

(B) Observe the following graph and answer the given questions : 6

## LIFE EXPECTANCY :



### Questions :

- (1) What is the average life expectancy in India in the year 2016 ?
- (2) In the year 1990, how much was an increase in life expectancy in Brazil as compared to India ?
- (3) How much was the average life expectancy in 1980 in India, during which year do you find the same in Brazil ?

## 7/N 760

- (4) Which country shows an increase in life expectancy during the period from 2010 to 2016 ?
- (5) In which country do you find high life expectancy ?
- (6) By how much was India's life expectancy lesser than Brazil in the year 1960 ?

7. Answer the following questions in detail (any *two*) : 8

- (1) If you were a part of field visit, what preparations would you make ?  
Prepare a questionnaire for a field visit to a forest.
- (2) Compare the climate of Brazil and India.
- (3) Explain the characteristics of North Indian Plains.