



# JEE (Main)

PAPER-1 (B.E./B. TECH.)

# 2022

## COMPUTER BASED TEST (CBT) Memory Based Questions & Solutions

Date: 26 June, 2022 (SHIFT-2) | TIME : (3.00 p.m. to 6.00 p.m)

Duration: 3 Hours | Max. Marks: 300

**SUBJECT: PHYSICS**

### Resonance Eduventures Ltd.

Reg. Office & Corp. Office : CG Tower, A-46 & 52, IPIA, Near City Mall, Jhalawar Road, Kota (Raj.) - 324005

Ph. No.: +91-744-2777777, 2777700 | FAX No.: +91-022-39167222

To Know more : sms RESO at 56677 | Website : [www.resonance.ac.in](http://www.resonance.ac.in) | E-mail : [contact@resonance.ac.in](mailto:contact@resonance.ac.in) | CIN : U80302RJ2007PLC024029

Toll Free : 1800 258 5555 | [7340010333](https://www.facebook.com/ResonanceEd) | [facebook.com/ResonanceEd](https://www.facebook.com/ResonanceEd) | [twitter.com/ResonanceEd](https://twitter.com/ResonanceEd) | [www.youtube.com/resonance](https://www.youtube.com/resonance) | [blog.resonance.ac.in](https://blog.resonance.ac.in)

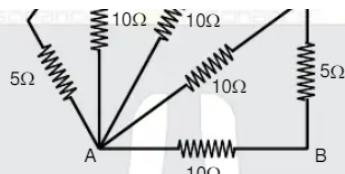
This solution was download from Resonance JEE (MAIN) 2022 Solution portal

Resonance Eduventures Ltd. | JEE MAIN-2022 | DATE : 26-06-2022 (SHIFT-2) | PAPER-1 | MEMORY BASED | PHYSICS

### PART : PHYSICS

1. Find resistance between points A and B.

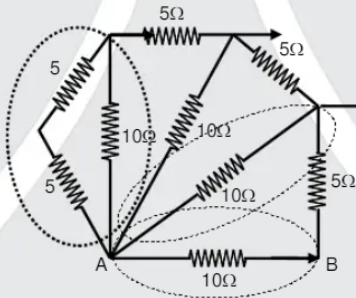




- (1)  $10\ \Omega$  (2)  $5\ \Omega$  (3)  $200\ \Omega$  (4)  $15\ \Omega$

Ans. (2)

Sol. By reduction method



2. Two inductor are connected as shown in figure. Mutual inductance between the inductor is  $M$ . Equivalent self-inductance of the circuit is.



- (1)  $L_{eq} = L_1 + L_2 + 2M$  (2)  $L_{eq} = L_1 + L_2 - 2M$  (3)  $L_{eq} = L_1 + L_2 + M$  (4)  $L_{eq} = L_1 + L_2 - M$

Ans. (2)

## Resonance Eduventures Ltd.

Reg. Office & Corp. Office : CG Tower, A-46 & 52, IPIA, Near City Mall, Jhalawar Road, Kota (Raj.) - 324005

Ph. No.: +91-744-2777777, 2777700 | FAX No.: +91-022-39167222

To Know more : sms RESO at 56677 | Website : [www.resonance.ac.in](http://www.resonance.ac.in) | E-mail : [contact@resonance.ac.in](mailto:contact@resonance.ac.in) | CIN : U80302RJ2007PLC024029

Toll Free : 1800 258 5555 | 7340010333 | [facebook.com/Resonanceedu](https://www.facebook.com/Resonanceedu) | [twitter.com/Resonanceedu](https://twitter.com/Resonanceedu) | [www.youtube.com/resonanceedu](https://www.youtube.com/resonanceedu) | [blog.resonance.ac.in](https://blog.resonance.ac.in)

This solution was download from Resonance JEE (MAIN) 2022 Solution portal

PAGE # 1

**Resonance**  
Educating for better tomorrow | JEE MAIN-2022 | DATE : 26-06-2022 (SHIFT-2) | PAPER-1 | MEMORY BASED | PHYSICS

3. Consider a conducting rod of length  $\ell = 1\text{ m}$  rotating in horizontal earth magnetic field  $B_H = 3.9 \times 10^{-5}\text{ T}$  about one end in vertical plane passing through east west direction with angular speed  $\omega = 5\text{ rad/sec}$ . Then potential difference between the both ends of the rod will be :

- (1)  $9.75 \times 10^{-5}\text{ V}$  (2)  $3.75 \times 10^{-5}\text{ V}$  (3)  $11.75 \times 10^{-5}\text{ V}$  (4)  $5.75 \times 10^{-5}\text{ V}$

Ans. (1)

Sol. Potential difference between the ends of rod =  $\frac{1}{2} B_H \omega \ell^2 = \frac{1}{2} \times 3.9 \times 10^{-5} \times 5 \times 1^2$   
 $= 9.75 \times 10^{-5}\text{ V}$

4. Formula of Reynolds number is ( $\rho$  = density of the fluid,  $u$  = flow speed,  $D$  = diameter of pipe,  $\eta$  = coefficient of viscosity of the fluid)

- (1)  $\frac{\rho u D}{\eta}$  (2)  $\frac{\eta u D}{\rho}$  (3)  $\frac{\eta \rho D}{u}$  (4)  $\frac{\eta \rho u}{D}$

Ans. (1)

5. Dimension formula of mutual inductance is :

- (1)  $M^1 L^1 T^{-2} A^{-2}$  (2)  $M^1 L^2 T^{-2} A^{-2}$  (3)  $M^1 L^2 T^{-2} A^{-2}$  (4)  $M^1 L^2 T^{-1} A^{-2}$

Ans. (2)

6. Two parallel wires on of length 1 m and other is infinite are lying at a distance of 2m. If the current flowing in each wire is 5 ampere then the force between them will be—

(1) 2.5  $\mu\text{N}$  (2) 3.5  $\mu\text{N}$  (3) 4.5  $\mu\text{N}$  (4) 5.5  $\mu\text{N}$

Ans. (1)

Sol. 
$$\frac{F}{\ell} = \frac{\mu_0 I_1 I_2}{2\pi d} = 2.5 \mu\text{N}$$

7. The ratio of rotational kinetic energy to the total kinetic energy of a rolling solid sphere

(1)  $\frac{2}{7}$  (2)  $\frac{5}{7}$  (3)  $\frac{3}{7}$  (4)  $\frac{7}{5}$

Ans. (1)

Sol. 
$$K.E_R = \frac{1}{2} m v^2 \left( \frac{k^2}{R^2} \right)$$

$$K.E_{\text{Total}} = \frac{1}{2} I \omega^2 + \frac{1}{2} m v^2$$

$$= \frac{1}{2} m v^2 \left( 1 + \frac{k^2}{R^2} \right)$$

## Resonance Eduventures Ltd.

Reg. Office & Corp. Office : CG Tower, A-46 & 52, IPIA, Near City Mall, Jhalawar Road, Kota (Raj.) - 324005

Ph. No.: +91-744-2777777, 2777700 | FAX No.: +91-022-39167222

To Know more : sms RESO at 56677 | Website : www.resonance.ac.in | E-mail : contact@resonance.ac.in | CIN : U80302RJ2007PLC024029

Toll Free : 1800 258 5555 | 7340010333 | facebook.com/ResonanceEdu | twitter.com/ResonanceEdu | www.youtube.com/resonance | blog.resonance.ac.in

This solution was download from Resonance JEE (MAIN) 2022 Solution portal

PAGE # 2

$$\frac{(K.E.)_{\text{rotational}}}{(K.E.)_{\text{Total}}} = \frac{\frac{1}{2} m v^2 \left( \frac{k^2}{R^2} \right)}{\frac{1}{2} m v^2 \left( 1 + \frac{k^2}{R^2} \right)} = \frac{2}{7}$$

For solid sphere

$$I = m K^2$$

$$I = \frac{2}{5} m R^2$$

$$\frac{k^2}{R^2} = \frac{2}{5}$$

8. Arrange the EM waves according to increasing order of wavelength.

(1)  $\lambda_{x\text{-ray}} > \lambda_{\text{gamma}} > \lambda_{\text{microwave}} > \lambda_{\text{x-ray}}$  (2)  $\lambda_{\text{gamma}} > \lambda_{x\text{-ray}} > \lambda_{\text{visible}} > \lambda_{\text{microwave}}$   
 (3)  $\lambda_{\text{gamma}} < \lambda_{x\text{-ray}} < \lambda_{\text{visible}} < \lambda_{\text{microwave}}$  (4)  $\lambda_{\text{gamma}} = \lambda_{x\text{-ray}} = \lambda_{\text{visible}} > \lambda_{\text{microwave}}$

Ans. (3)

Sol. 
$$E = \frac{hc}{\lambda}$$

$$E_{\text{max}} \propto \frac{1}{\lambda_{\text{min}}}$$

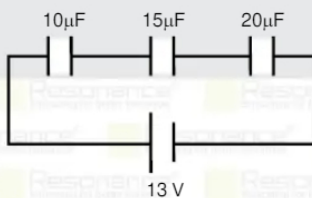
Energy of proton

$$E_{\text{gamma}} > E_{x\text{-ray}} > E_{\text{visible}} > E_{\text{microwave}}$$

wavelength of proton

$$\lambda_{\text{gamma}} < \lambda_{x\text{-ray}} < \lambda_{\text{visible}} < \lambda_{\text{microwave}}$$

9. Find charge on 15  $\mu\text{F}$  capacitor



(1)  $60 \mu\text{C}$ (2)  $30 \mu\text{C}$ (3)  $40 \mu\text{C}$ (4)  $20 \mu\text{C}$ 

Ans. (1)

## Resonance Eduventures Ltd.

Reg. Office &amp; Corp. Office : CG Tower, A-46 &amp; 52, IPIA, Near City Mall, Jhalawar Road, Kota (Raj.) - 324005

Ph. No.: +91-744-2777777, 2777700 | FAX No.: +91-022-39167222

To Know more : sms RESO at 56677 | Website : www.resonance.ac.in | E-mail : contact@resonance.ac.in | CIN : U80302RJ2007PLC024029

Toll Free : 1800 258 5555 | 7340010333 | facebook.com/ResonanceEdu | twitter.com/ResonanceEdu | www.youtube.com/resonance | blog.resonance.ac.in

This solution was download from Resonance JEE (MAIN) 2022 Solution portal

PAGE # 3

Resonance® Educating for better tomorrow | JEE MAIN-2022 | DATE : 26-06-2022 (SHIFT-2) | PAPER-1 | MEMORY BASED | PHYSICS

Sol.  $\frac{1}{C_{eq}} = \frac{1}{10} + \frac{1}{15} + \frac{1}{20}$

$$= \frac{6+4+3}{60} = \frac{13}{60}$$

$$C_{eq} = \frac{60}{13} \mu\text{F}$$

$$q = C_{eq}V$$

$$= \frac{60}{13} \times 13$$

$$q = 60 \mu\text{C}$$

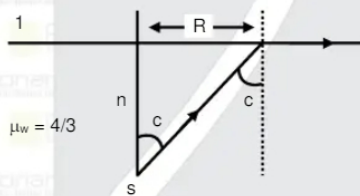
All capacitors have same charges.

10. A light source is present at depth  $d = \sqrt{7}$  meter from water surface in a pond. r.f. of water is  $\frac{4}{3}$  calculate maximum area of water surface from which light rays will come out in air.

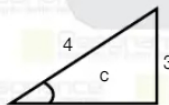
(1)  $\pi \text{ m}^2$ (2)  $7 \text{ m}^2$ (3)  $9 \pi^2$ (4)  $11 \pi^2$ 

Ans. (3)

Sol.



$$\sin c = \frac{\mu_r}{\mu_d} = \frac{3}{4}$$



$$\sqrt{16-9} = \sqrt{7}$$

$$\frac{R}{h} = \tan c = \frac{3}{\sqrt{7}}$$

$$R = 3$$

$$A = \pi R^2 = 9\pi \text{ m}^2$$

## Resonance Eduventures Ltd.

Reg. Office &amp; Corp. Office : CG Tower, A-46 &amp; 52, IPIA, Near City Mall, Jhalawar Road, Kota (Raj.) - 324005

Ph. No.: +91-744-2777777, 2777700 | FAX No.: +91-022-39167222

To Know more : sms RESO at 56677 | Website : www.resonance.ac.in | E-mail : contact@resonance.ac.in | CIN : U80302RJ2007PLC024029

Toll Free : 1800 258 5555 | 7340010333 | facebook.com/ResonanceEdu | twitter.com/ResonanceEdu | www.youtube.com/resonance | blog.resonance.ac.in

This solution was download from Resonance JEE (MAIN) 2022 Solution portal

PAGE # 4

11. A bar magnet of magnetic moment  $M = 2 \times 10^5 \text{ A-m}^2$  is rotated from  $\theta = 0$  to  $\theta = 60^\circ$  in uniform magnetic field  $B = 14 \times 10^{-5} \text{ Tesla}$ . The work done against magnetic field is :

- (1) 14 J (2) 7 J (3) 1.4 J (4) 140 J

Ans. (1)

Sol.  $W = U_f - U_i$   
 $= (-MB \cos 60^\circ) - (-MB \cos 0^\circ)$

$$= MB \left( 1 - \frac{1}{2} \right)$$

$$= 2 \times 10^5 \times 14 \times 10^{-5} \times \frac{1}{2}$$

$$= 14 \text{ Joule}$$

12. A ball of mass 200 gram moving with velocity 15 m/s collides to a bat and return with same speed in reverse direction, calculate the impulse given by bat to ball :

- (1) 2 N-sec (2) 4 N-sec (3) 6 N-sec (4) 8 N-sec

Ans. (3)

Sol.  $I = P_f - P_i = (mv) - (-mv)$   
 $= 2mv$   
 $= 2 \times (200 \times 10^{-3}) \times 15$   
 $I = 6 \text{ N-sec}$

13. Two particles are thrown upwards with a time interval of 2 sec, with same speed 50 m/s. How much later from first one, particles will collide in mid air :

- (1) 2 sec (2) 4 sec (3) 6 sec. (4) 8 sec.

Ans. (3)

Sol. After 2 sec.

The relative position between them

$$r_{12} = \left( 50 \times 2 - \frac{1}{2} \times 10 \times 2^2 \right) - 0$$

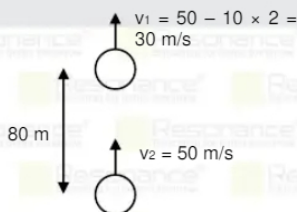
$$= 100 - 20 = 80 \text{ m}$$

$$V_{21} = 50 - 30 = 20 \text{ m/s}$$

$$a_{\text{rel}} = g - g = 0$$

$$\Delta t = \frac{r_{\text{rel}}}{v_{\text{rel}}} = \frac{80}{20} = 4 \text{ sec.}$$

$$\text{Time to meet} = 2 + 4 = 6 \text{ sec.}$$



## Resonance Eduventures Ltd.

Reg. Office & Corp. Office : CG Tower, A-46 & 52, IPIA, Near City Mall, Jhalawar Road, Kota (Raj.) - 324005

Ph. No.: +91-744-2777777, 2777700 | FAX No.: +91-022-39167222

To Know more : sms RESO at 56677 | Website : www.resonance.ac.in | E-mail : contact@resonance.ac.in | CIN : U80302RJ2007PLC024029

Toll Free : 1800 258 5555 | 7340010333 | Facebook.com/ResonanceEdu | Twitter.com/ResonanceEdu | www.youtube.com/resonance | Blog.resonance.ac.in

This solution was download from Resonance JEE (MAIN) 2022 Solution portal

PAGE # 5

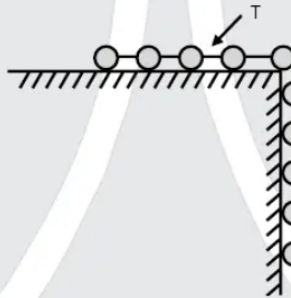
14. Statement -1 : An object is moving from pole to equator on earth surface. Gravitational force on it remains constant.

Statement -2 : Direction of gravitational force on object at equator is towards centre of the earth.

- (1) Statement-1 is true, Statement-2 is true  
 (2) Statement-1 is false, Statement-2 is false  
 (3) Statement-1 is false, Statement-2 is true  
 (4) Statement-1 is true, Statement-2 is false

Ans. (3)

15. 10 balls are connected by light strings and are placed on friction less table, mass of each ball is 2 kg. When 6<sup>th</sup> ball is about to fall from table, calculate tension in string connecting 7<sup>th</sup> & 8<sup>th</sup> ball.



- (1) 9 Newton (2) 18 Newton (3) 36 Newton (4) 72 Newton

Ans. (3)

Sol. Acceleration  $a = \frac{6mg}{10m} = 6 \text{ m/s}^2$



$$T = (3m) a$$

$$T = 3 \times 2 \times 6 = 36 \text{ Newton}$$

16. A positive feedback circuit for an amplifier to act as an oscillator –

- (1) is the 'feedback' from input to output  
(2) is the 'feedback' from output to input  
(3) is the external 'feedback' from input to output  
(4) is the external 'feedback' from output to input

Ans. (2)

## Resonance Eduventures Ltd.

Reg. Office & Corp. Office : CG Tower, A-46 & 52, IPIA, Near City Mall, Jhalawar Road, Kota (Raj.) - 324005

Ph. No.: +91-744-2777777, 2777700 | FAX No.: +91-022-39167222

To Know more : sms RESO at 56677 | Website : www.resonance.ac.in | E-mail : contact@resonance.ac.in | CIN : U80302RJ2007PLC024029

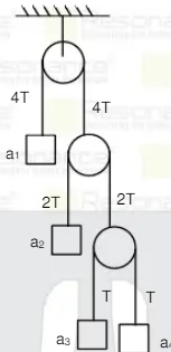
Toll Free : 1800 258 5555 | 7340010333 | Facebook.com/ResonanceEdu | Twitter.com/ResonanceEdu | www.youtube.com/resonance | blog.resonance.ac.in

This solution was download from Resonance JEE (MAIN) 2022 Solution portal

PAGE # 6

Resonance® Educating for better tomorrow | JEE MAIN-2022 | DATE : 26-06-2022 (SHIFT-2) | PAPER-1 | MEMORY BASED | PHYSICS

17. In given diagram assuming  $a_1$ ,  $a_2$ ,  $a_3$  and  $a_4$  upwards, the correct relation between them is :



- (1)  $4a_1 - 2a_2 - a_3 - a_4 = 0$   
(2)  $4a_1 + 2a_2 + a_3 + a_4 = 0$   
(3)  $2a_1 + 4a_2 + 4a_3 + a_4 = 0$   
(4)  $4a_1 - 2a_2 + a_3 + a_4 = 0$

Ans. (2)

Sol. Wall (int) = 0

$$\sum \vec{F} \cdot \vec{v} = 0$$

$$\sum \vec{F} \cdot \vec{a} = 0$$

$$a_1 (4T) + a_2 (2T) + a_3 (T) + a_4 (T) = 0$$

$$4a_1 + 2a_2 + a_3 + a_4 = 0$$

18. 64 identical charged drops of conducting liquid are combined to form a big drop. Calculate the ratio of surface charge density of a bigger drop to smaller drop.
- (1) 2 (2) 4 (3) 6 (4) 8

Ans. (2)

Sol. From charge conservation

$$64 (4\pi r^2) \sigma_i = 1 (4\pi R^2) \sigma_f$$

$$\frac{\sigma_i}{\sigma_f} = \left(\frac{R}{r}\right)^2 \times \frac{1}{64} \dots (1)$$

from volume conservation

$$(64) \left(\frac{4}{3} \pi r^3\right) = 1 \left(\frac{4}{3} \pi R^3\right)$$

$$R = 4r \dots (2)$$

from (1) & (2)

$$\frac{\sigma_i}{\sigma_f} = \frac{1}{4}$$

## Resonance Eduventures Ltd.

Reg. Office & Corp. Office : CG Tower, A-46 & 52, IPIA, Near City Mall, Jhalawar Road, Kota (Raj.) - 324005

Ph. No.: +91-744-2777777, 2777700 | FAX No. : +91-022-39167222

To Know more : sms RESO at 56677 | Website : www.resonance.ac.in | E-mail : contact@resonance.ac.in | CIN : U80302RJ2007PLC024029

Toll Free : 1800 258 5555 | 7340010333 | facebook.com/ResonanceEdu | twitter.com/ResonanceEdu | www.youtube.com/reswatch | blog.resonance.ac.in

This solution was download from Resonance JEE (MAIN) 2022 Solution portal

PAGE # 7

## Resonance® | JEE MAIN-2022 | DATE : 26-06-2022 (SHIFT-2) | PAPER-1 | MEMORY BASED | PHYSICS

19. An atom emits a photon of wavelength  $\lambda = 670$  nm, when it was at rest when atom is in motion and emits a photon in opposite direction of motion the wavelength of photon is  $670.7$  nm. Calculate fractional change in speed of atom :

- (1)  $\frac{0.7}{670}$  (2)  $\frac{0.7}{570}$  (3)  $\frac{0.5}{470}$  (4)  $\frac{0.3}{370}$

Ans. (1)

Sol.  $p = \frac{h}{\lambda}$

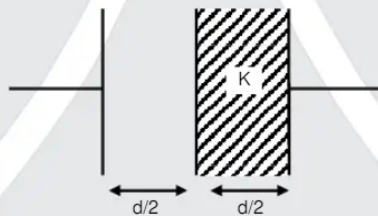
$$\frac{\Delta p}{p} = -\frac{\Delta \lambda}{\lambda}$$

$$\Delta p = \frac{\Delta \lambda}{\lambda} \cdot p$$

$$|\Delta u| = \frac{\Delta \lambda}{\lambda} (v)$$

$$\frac{\Delta u}{v} = \left(\frac{\Delta \lambda}{\lambda}\right) = \frac{0.7}{670}$$

20. A capacitor of capacitance  $C_0$  is filled with dielectric constant  $K=3$  as shown.



Now its capacitance becomes  $C$ , calculate ratio  $\frac{C}{C_0}$

- (1)  $\frac{1}{2}$  (2)  $\frac{3}{2}$  (3)  $\frac{5}{2}$  (4)  $\frac{7}{2}$

Ans. (2)

Sol.  $C = \frac{\epsilon_0 A}{\frac{d}{2} + \frac{d}{2(K)}} = \frac{2C_0}{1 + \frac{1}{K}}$

$$\frac{C}{C_0} = \frac{2}{1 + \frac{1}{3}} = \frac{6}{4} = \frac{3}{2}$$

## Resonance Eduventures Ltd.

Reg. Office & Corp. Office : CG Tower, A-46 & 52, IPIA, Near City Mall, Jhalawar Road, Kota (Raj.) - 324005

Ph. No.: +91-744-2777777, 2777700 | FAX No. : +91-022-39167222

To Know more : sms RESO at 56677 | Website : www.resonance.ac.in | E-mail : contact@resonance.ac.in | CIN : U80302RJ2007PLC024029

Toll Free : 1800 258 5555 | 7340010333 | Facebook.com/ResonanceEdu | Twitter.com/ResonanceEdu | www.youtube.com/resonance | blog.resonance.ac.in

This solution was download from Resonance JEE (MAIN) 2022 Solution portal

PAGE # 8



JEE MAIN-2022 | DATE : 26-06-2022 (SHIFT-2) | PAPER-1 | MEMORY BASED | PHYSICS

21. Heat energy given to Carnot engine is 300 J. Heat energy flow towards sink is 180 J. If lower temperature is 324K, then higher temperature is :

- (1) 340 K (2) 430 K (3) 540 K (4) 640 K

Ans. (3)

Sol. Efficiency  $\eta = 1 - \frac{T_2}{T_1} = 1 - \frac{Q_2}{Q_1}$

$$\frac{Q_1}{Q_2} = \frac{T_{\text{high}}}{T_{\text{low}}}$$

$$\frac{300}{180} = \frac{T_{\text{high}}}{324}$$

$$T_{\text{high}} = 540 \text{ K}$$

## Resonance Eduventures Ltd.

Reg. Office & Corp. Office : CG Tower, A-46 & 52, IPIA, Near City Mall, Jhalawar Road, Kota (Raj.) - 324005

Ph. No.: +91-744-2777777, 2777700 | FAX No. : +91-022-39167222

To Know more : sms RESO at 56677 | Website : www.resonance.ac.in | E-mail : contact@resonance.ac.in | CIN : U80302RJ2007PLC024029

Toll Free : 1800 258 5555 | 7340010333 | Facebook.com/ResonanceEdu | Twitter.com/ResonanceEdu | www.youtube.com/resonance | blog.resonance.ac.in

This solution was download from Resonance JEE (MAIN) 2022 Solution portal

PAGE # 9



# BEST RANK

from Kota Classroom among  
all Institutes of Kota

AIR

8

CHAITANYA AGGARWAL  
JEE (Advanced) 2021



Numbers that Inspire Students to EXCEL



\* Since 2001 | \*\*Students Qualified from JEE (Main) to JEE (Advanced) since 2013

Total Selections & AIR in TOP-100 in JEE (Adv.) / JEE (Main) since 2002, JEE (Main) / AIEEE (since 2009), NEET (UG) / APMT (since 2012) | AIR: All India Rank

## For Class XII Passed Students

### TARGET

JEE (Main+Advanced) 2023

COURSE

**VISHESH (JD)**



CLASS STARTS

27<sup>th</sup> June & 4<sup>th</sup> July

### TARGET

JEE (Main) 2023

COURSE

**ABHYAAS (ED)**



CLASS STARTS

27<sup>th</sup> June & 4<sup>th</sup> July

\*T & C Apply

**Scholarship upto 90%\***  
on the basis of JEE (Main) Percentile Score

अपनी **स्कॉलरशिप** जानने के लिए **अपनी जेईई (मेन) परसेंटाइल वाट्सअप करें: 73400-10345**

**Resonance Eduventures Ltd.**

Kota Study Centre & Registered Corporate Office: CG Tower, A-46 & 52, IPIA, Near City Mall, Jhalawar Road, Kota (Raj.) - 324005  
Tel. No.: 0744-2777777, 2777700 | CIN: U80302RJ2007PLC024029 | [www.resonance.ac.in](http://www.resonance.ac.in) | [contact@resonance.ac.in](mailto:contact@resonance.ac.in)