**Resonance**[®]
Educating for better tomorrow

JEE
(Main)
PAPER-1 (B.E./B. TECH.)
2022

COMPUTER BASED TEST (CBT)
Memory Based Questions & Solutions

Date: 29 June, 2022 (SHIFT-2) | TIME : (3.00 p.m. to 6.00 p.m)
Duration: 3 Hours | Max. Marks: 300

SUBJECT: PHYSICS

Resonance Eduventures Ltd.
Reg. Office & Corp. Office : CG Tower, A-46 & 52, IPIA, Near City Mall, Jhalawar Road, Kota (Raj.) - 324005
Ph. No.: +91-744-2777777, 2777700 | FAX No.: +91-022-39167222
To Know more : sms RESO at 56677 | Website : www.resonance.ac.in | E-mail : contact@resonance.ac.in | CIN : U80302RJ2007PLC024029
Toll Free : 1800 258 5555 | [7340010333](https://www.facebook.com/ResonanceIndia) | [facebook.com/ResonanceIndia](https://www.youtube.com/resonance) | twitter.com/ResonanceIndia | www.youtube.com/resonance | blog.resonance.ac.in

This solution was download from Resonance JEE (MAIN) 2022 Solution portal

PART : PHYSICS

1. Two point charge each of same magnitude 'Q' are placed as shown in figure determine distance from O at equatorial axis where force on q is maximum.



(1) $\frac{d}{\sqrt{3}}$

(2) $\frac{d}{\sqrt{2}}$

(3) $\frac{d}{\sqrt{5}}$

(4) $\frac{d}{\sqrt{7}}$

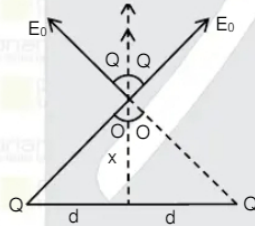
Ans. (2)

Sol. Force on q is

$$F = qE$$

$$\Rightarrow F = q \frac{2kQx}{(x^2 + d^2)^{3/2}}$$

for $F = F_{\max}$.



$$E = 2E_0 \cos\theta$$

$$= \frac{2kQx}{(x^2 + d^2)^{3/2}}$$

$$\Rightarrow \frac{d}{dx} \left[\frac{2x}{(x^2 + d^2)^{3/2}} \right] = 0 \Rightarrow x = \frac{d}{\sqrt{2}}$$

Resonance Eduventures Ltd.

Reg. Office & Corp. Office : CG Tower, A-46 & 52, IPIA, Near City Mall, Jhalawar Road, Kota (Raj.) - 324005

Ph. No.: +91-744-2777777, 2777700 | FAX No. : +91-022-39167222

To Know more : sms RESO at 56677 | Website : www.resonance.ac.in | E-mail : contact@resonance.ac.in | CIN : U80302RJ2007PLC024029

Toll Free : 1800 258 5555 | 7340010333 | facebook.com/Resonanceedu | twitter.com/Resonanceedu | www.youtube.com/resonance | blog.resonance.ac.in

This solution was download from Resonance JEE (MAIN) 2022 Solution portal

PAGE # 1

2. A gas is expanded from volume ' V_1 ' to ' V_2 ' by three different process these three process are isothermal, adiabatic and isobaric. Work done by gas in isothermal is W_1 and that in adiabatic is W_2 and that in isobaric is W_3 . Select the correct option?

(1) $W_1 > W_2 > W_3$

(2) $W_2 < W_1 < W_3$

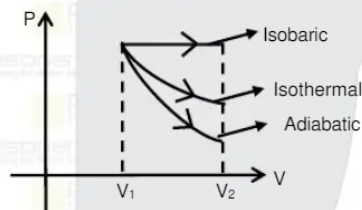
(3) $W_1 = W_2 = W_3$

(4) $W_1 > W_2 = W_3$

Ans. (2)

Sol. $W = \text{area under P-V curve}$

so according to graph



$$W_3 > W_1 > W_2$$

$V_1 \rightarrow V_2$ in three different ways

$W_1 \rightarrow$ Isothermal $W_2 \rightarrow$ Adiabatic

$W_3 \rightarrow$ Isochoric

$$W_1 > W_2 > W_3$$

$$W_1 < W_2 < W_3$$

3. Time period of earth rotating in orbit is 7hr. If radius is thrice then new time period of earth :

(1) 36 hr (2) 30 hr (3) 21 hr (4) 28 hr

Ans. (1)

Sol. $T^2 \propto r^3$

$$\frac{T^2}{T'^2} = \left(\frac{R}{3R}\right)^3$$

$$\frac{49}{T'^2} = \frac{1}{27}$$

$$T'^2 = 49 \times 27$$

$$T' = 7 \times 3\sqrt{3} = 21 \times 1.732$$

$$= 35.7$$

Resonance Eduventures Ltd.

Reg. Office & Corp. Office : CG Tower, A-46 & 52, IPIA, Near City Mall, Jhalawar Road, Kota (Raj.) - 324005

Ph. No.: +91-744-2777777, 2777700 | FAX No.: +91-022-39167222

To Know more : sms RESO at 56677 | Website : www.resonance.ac.in | E-mail : contact@resonance.ac.in | CIN : U80302RJ2007PLC024029

Toll Free : 1800 258 5555 | 7340010333 | facebook.com/ResonanceEdu | twitter.com/ResonanceEdu | www.youtube.com/resonance | blog.resonance.ac.in

This solution was download from Resonance JEE (MAIN) 2022 Solution portal

PAGE # 2

4. The Height of T.V. tower is 125 m if its range is doubled for signal, find the new height :

(1) 125 m (2) 250 m (3) 500 m (4) 300 m

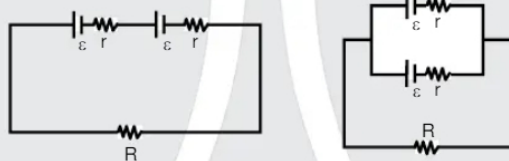
Ans. (3)

Sol. $d = \sqrt{2hR}$

$$2d = \sqrt{2h'R}$$

$$h' = 4h = 4 \times 125 = 500 \text{ m}$$

5. Two Identical cell give same current across R resistance when they are in series combination and when they are in parallel combination. Find internal resistance of cell?



(1) R (2) 3R (3) $\frac{R}{2}$ (4) 5R

Ans. (1)

$$\text{Sol. } \frac{2\varepsilon}{R+2r} = \frac{\varepsilon}{R+\frac{r}{2}}$$

$$\Rightarrow 2R + r = R + 2r$$

$$\Rightarrow r = R$$

$$r = R$$

6. Find the acceleration of system shown.



(1) $\frac{4}{3} \text{ m/s}^2$

(2) $\frac{8}{12} \text{ m/s}^2$

(3) $\frac{8}{9} \text{ m/s}^2$

(4) $\frac{8}{11} \text{ m/s}^2$

Ans. (4)

Resonance Eduventures Ltd.

Reg. Office & Corp. Office : CG Tower, A-46 & 52, IPIA, Near City Mall, Jhalawar Road, Kota (Raj.) - 324005

Ph. No.: +91-744-2777777, 2777700 | FAX No.: +91-022-39167222

To Know more : sms RESO at 56677 | Website : www.resonance.ac.in | E-mail : contact@resonance.ac.in | CIN : U80302RJ2007PLC024029

Toll Free : 1800 258 5555 | 7340010333 | facebook.com/ResonanceEdu | twitter.com/ResonanceEdu | www.youtube.com/reswatch | blog.resonance.ac.in

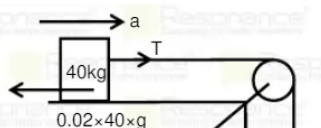
This solution was download from Resonance JEE (MAIN) 2022 Solution portal

PAGE # 3



JEE MAIN-2022 | DATE : 29-06-2022 (SHIFT-2) | PAPER-1 | MEMORY BASED | PHYSICS

Sol.



$$T - 8 = 40a$$

$$4g - T = 4a$$

$$32 = 44a$$

$$a = \frac{8}{11} \text{ m/s}^2$$

7. A particle starts from rest along straight line path with constant acceleration. If covers 10 m distance in first t , sec. Find distance covered by it in next t sec :

(1) 20 m

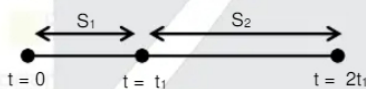
(2) 30 m

(3) 40 m

(4) 50 m

Ans. (2)

Sol.



$$S_1 = \frac{1}{2} a t_1^2$$

$$\Rightarrow S_1 + S_2 = \frac{1}{2} a (2t_1)^2 = \frac{1}{2} a 4t_1^2$$

$$\Rightarrow S_1 : S_1 + S_2 = 1 : 4$$

$$\Rightarrow S_1 : S_2 = 1 : 3$$

Here $S_1 = 10 \text{ m}$

So, $S_2 = 30 \text{ m}$

8. Electric Potential varies as $V = 3x^2$ find electric field at the point having Co-ordinates (1, 0, 3).

(1) -6 V/m

(2) -8 V/m

(3) 9 V/m

(4) 10 V/m

Ans. (1)

Resonance Eduventures Ltd.

Reg. Office & Corp. Office : CG Tower, A-46 & 52, IPIA, Near City Mall, Jhalawar Road, Kota (Raj.) - 324005

Ph. No.: +91-744-2777777, 2777700 | FAX No.: +91-022-39167222

To Know more : sms RESO at 56677 | Website : www.resonance.ac.in | E-mail : contact@resonance.ac.in | CIN : U80302RJ2007PLC024029

Toll Free : 1800 258 5555 | 7340010333 | facebook.com/ResonanceEdu | twitter.com/ResonanceEdu | www.youtube.com/reswatch | blog.resonance.ac.in

This solution was download from Resonance JEE (MAIN) 2022 Solution portal

PAGE # 4

Sol. We know that

$$E = -\frac{dv}{dx}$$

$$\Rightarrow E = -\frac{d}{dx}(3x^2) = -6x$$

at (1, 0, 3), $E = -6$

9. If maximum possible range of a projectile is 100 m what will be the maximum possible height for same speed :

- (1) 100 m (2) 200 m (3) 50 m (4) 25 m

Ans. (1)

Sol. $R_{\max} = u^2/g = 100$ m

$$H_{\max} = u^2/2g = 50$$
 m

10. Electric field of light is given by $E = 200[\sin(6 \times 10^{15}t) + \sin(9 \times 10^{15}t)]$. It is incident on a metal surface of work function 2.5 eV find the maximum kinetic energy of emitted electrons :

- (1) 3.4 eV (2) 2.5 eV (3) 3.8 eV (4) 4 eV

Ans. (1)

Sol. $KE_{\max} = E - \phi$

$$= \frac{h\nu}{2\pi} - \phi$$

$$= \frac{4.14 \times 10^{-15} \times 9 \times 10^{15}}{2 \times 3.14} - 2.5 = 5.9 - 2.5 = 3.4$$
 eV

11. A block of mass M is released from rest from height of y. When it fall down by y. its kinetic energy is :

- (1) $mg(y - y_0)$ (2) $1/2 mgy_0^2$ (3) mgy_0 (4) mgy_0^2

Ans. (1)

Sol. W by gravity = mgh

$$h = y - y_0$$

12. In the decay process ${}^{182}_{74}\text{D} \xrightarrow{\alpha} \text{D}_1 \xrightarrow{\beta^-} \text{D}_2 \xrightarrow{\alpha} \text{D}_3 \xrightarrow{\gamma} \text{D}_4$ find the atomic number and mass number of element D_4 :

- (1) 174, 71 (2) 176, 72 (3) 174, 70 (4) 176, 71

Ans. (1)

Sol. ${}^{182}_{74}\text{D} \xrightarrow{\alpha} {}^{178}_{72}\text{D}_1 \xrightarrow{\beta^-} {}^{178}_{73}\text{D}_2 \xrightarrow{\alpha} {}^{174}_{71}\text{D}_3 \xrightarrow{\gamma} {}^{174}_{71}\text{D}_4$

Resonance Eduventures Ltd.

Reg. Office & Corp. Office : CG Tower, A-46 & 52, IPIA, Near City Mall, Jhalawar Road, Kota (Raj.) - 324005

Ph. No.: +91-744-2777777, 2777700 | FAX No.: +91-022-39167222

To Know more : sms RESO at 56677 | Website : www.resonance.ac.in | E-mail : contact@resonance.ac.in | CIN : U80302RJ2007PLC024029

Toll Free : 1800 258 5555 | 7340010333 | facebook.com/ResonanceEdu | twitter.com/ResonanceEdu | www.youtube.com/resonance | blog.resonance.ac.in

This solution was download from Resonance JEE (MAIN) 2022 Solution portal

PAGE # 5

13. Equation of a simple pendulum is $\theta = \theta_0 \sin(\pi t + \phi)$. Find the length of pendulum :

- (1) 1 m (2) 2 m (3) 0.5 m (4) 4 m

Ans. (1)

Sol. $\omega = \pi$

$$\sqrt{\frac{g}{l}} = \pi$$

$$l = \frac{g}{\pi^2}$$

$$\ell = \frac{g}{\pi^2} = 1 \text{ m}$$

14. **Statement-1** : Electric field changes the speed of charge particle but magnetic field does not change the speed.

Statement-2 : Charge particle travels perpendicular to electric field and parallel to magnetic field.

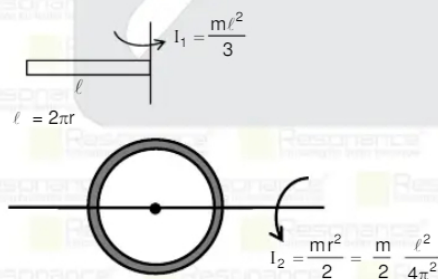
- (1) Statement-1 is false, statement-2 is true
 (2) Both statement is true & statement 2 is not the correct explanation of statement-1.
 (3) Statement-1 is true, statement-2 is false.
 (4) Statement-1 is true, statement-2 is true and statement-2 is the correct explanation of statement-1

Ans. (3)

15. Moment of intertie of a rod about its end is I_1 Rod is bent into a ring and its moment of inertia about diameter is I_2 Find the $I_1 - I_2$.

- (1) $m\ell^2 \left[\frac{1}{3} + \frac{1}{4\pi^2} \right]$ (2) $m\ell^2 \left[\frac{1}{3} - \frac{1}{2\pi^2} \right]$ (3) $m\ell^2 \left[\frac{1}{3} + \frac{1}{8\pi^2} \right]$ (4) $m\ell^2 \left[\frac{1}{3} - \frac{1}{8\pi^2} \right]$

Ans. (4)
 Sol.



$$I_1 = \frac{m\ell^2}{3}$$

$$\ell = 2\pi r$$

$$I_2 = \frac{mr^2}{2} = \frac{m}{2} \frac{\ell^2}{4\pi^2}$$

$$I_2 = \frac{m\ell^2}{8\pi^2}$$

$$I_1 - I_2 = m\ell^2 \left[\frac{1}{3} - \frac{1}{8\pi^2} \right]$$

Resonance Eduventures Ltd.

Reg. Office & Corp. Office : CG Tower, A-46 & 52, IPIA, Near City Mall, Jhalawar Road, Kota (Raj.) - 324005

Ph. No.: +91-744-2777777, 2777700 | FAX No.: +91-022-39167222

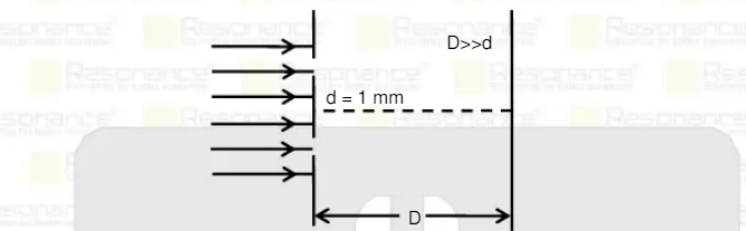
To Know more : sms RESO at 56677 | Website : www.resonance.ac.in | E-mail : contact@resonance.ac.in | CIN : U80302RJ2007PLC024029

Toll Free : 1800 258 5555 | 7340010333 | Facebook.com/ResonanceEdu | Twitter.com/ResonanceEdu | www.youtube.com/resonance | blog.resonance.ac.in

This solution was download from Resonance JEE (MAIN) 2022 Solution portal

PAGE # 6

16. If in YDSE set up screen is shifted towards plane of slit by 0.3 metre then fringe width changes by 0.4 mm. Determine wavelength ' λ ' of light.



(1) $\frac{10^{-3}}{3}$ mm (2) $\frac{7}{3} \times 10^{-3}$ mm (3) $\frac{4}{3} \times 10^{-3}$ mm (4) $\frac{5}{3} \times 10^{-3}$ mm

Ans. (3)

Sol.

$$\beta = \frac{\lambda D}{d}$$

$$\beta' = \frac{\lambda(D - 0.3)}{d}$$

$$\beta - \beta' = \frac{\lambda \times 0.3}{d}$$

$$\lambda \times 0.3 \times 10^3$$

$$0.4 = \frac{1}{\lambda}$$

$$\lambda = \frac{4}{3} \times 10^{-3} \text{ mm}$$

17. Time taken by a capacitance to reduce its energy by half is t_1 & time taken by the same capacitor to reduce its charge by $1/8^{\text{th}}$ is t_2 . The value of t_1/t_2 will be

(1) $1/3$ (2) $1/6$ (3) $1/2$ (4) $1/4$

Ans. (2)

Sol. $q = Qe^{-\frac{t}{\tau}}$ $U = \frac{q^2}{2C}$

$$\frac{Q}{\sqrt{2}} = Qe^{-\frac{t_1}{\tau}}$$

$$t_1 = \tau/n\sqrt{2}$$

$$\frac{Q}{8} = Qe^{-\frac{t_2}{\tau}}$$

$$t_2 = \tau/n8$$

$$\frac{t_1}{t_2} = \frac{\tau/n\sqrt{2}}{\tau/n8} = \frac{1}{2} \cdot \frac{\tau/n2}{3\tau/n2} = \frac{1}{6}$$

Resonance Eduventures Ltd.

Reg. Office & Corp. Office : CG Tower, A-46 & 52, IPIA, Near City Mall, Jhalawar Road, Kota (Raj.) - 324005

Ph. No.: +91-744-2777777, 2777700 | FAX No. : +91-022-39167222

To Know more : sms RESO at 56677 | Website : www.resonance.ac.in | E-mail : contact@resonance.ac.in | CIN : U80302RJ2007PLC024029

Toll Free : 1800 258 5555 | 7340010333 | Facebook.com/ResonanceEdu | Twitter.com/ResonanceEdu | www.youtube.com/resonance | blog.resonance.ac.in

This solution was download from Resonance JEE (MAIN) 2022 Solution portal

PAGE # 7

18. Vernier constant of vernier scale = 0.1 mm on measuring diameter of shaft. Main scale reading = 1.7 cm. If main scale coincides with 5 division of vernier scale & zero error is - 0.05 cm. Diameter of shaft in cm is :

(1) 1.80 cm (2) 2.80 cm (3) 4.80 cm (4) 6.80 cm

Ans. (1)

Sol. Reading = MSR + L.C \times V.S.R + correction

Correction = - zero error = 0.05 cm

$$\text{Reading} = 1.7 + 0.1 \times 10^{-1} (5) + 0.05$$

$$= 1.7 + 0.05 + 0.05$$

$$\Rightarrow 1.80 \text{ cm}$$

19. Two long wires are separated by 8 cm the magnetic field at the mid-point is $300 \mu\text{T}$. Two wire carries current of same value which is :

(1) 30 A in opposite direction (2) 30 A in same direction
(3) 60 A in same direction (4) 60 A in opposite direction

Ans. (1)

Sol. Current is opposite direction

$$B = \frac{2\mu_0 i}{2\pi 4\text{cm}} \Rightarrow 300 \times 10^{-6} = \frac{2 \times 2 \times 10^{-7} \times i}{4 \times 10^{-2}} \Rightarrow i = 30 \text{ Amp.}$$

20. If normal force exerted is $1/4^{\text{th}}$ the weight of box find acceleration of lift.

(1) $3g/4$ (2) $g/4$ (3) $g/2$ (4) g

Ans. (1)

Sol. $mg - N = ma$

$$\frac{mg - mg}{4} = mg$$

$$a = \frac{3g}{4}$$

21. Half-life of a radioactive sample is 5 years. Find time taken to reduce the sample 6.25% of its initial value.

(1) 20 years (2) 15 years (3) 25 years (4) 50 years

Ans. (1)

Sol. Time taken is 50% is T

Sol. Time taken in 50% is T_H
 Time taken in 25% is $2T_H$
 Time taken in 12.5% is $3T_H$
 Time taken in 6.25% is $4T_H$
 So $4T_H = 4 \times 5 = 20$ years

Resonance Eduventures Ltd.

Reg. Office & Corp. Office : CG Tower, A-46 & 52, IPIA, Near City Mall, Jhalawar Road, Kota (Raj.) - 324005

Ph. No.: +91-744-2777777, 2777700 | FAX No. : +91-022-39167222

To Know more : sms RESO at 56677 | Website : www.resonance.ac.in | E-mail : contact@resonance.ac.in | CIN : U80302RJ2007PLC024029

Toll Free : 1800 258 5555 | 7340010333 | facebook.com/ResonanceEdu | twitter.com/ResonanceEdu | www.youtube.com/resonance | blog.resonance.ac.in

This solution was download from Resonance JEE (MAIN) 2022 Solution portal

PAGE # 8

22. In resonance tube first resonance is obtain at 20 cm, then third resonance length will be :(frequency of source = 400 Hz, Speed of sound in air = 336 m/s)

- (1) 60 cm (2) 104 cm (3) 60 cm (4) 100 cm

Ans. (2)

Sol. Wavelength of wave $\Rightarrow \lambda = \frac{V}{f} = \frac{336}{400} = 84$ cm

At first resonance

$$\frac{\lambda}{4} = l + e \Rightarrow \frac{84}{4} = 20 + e$$

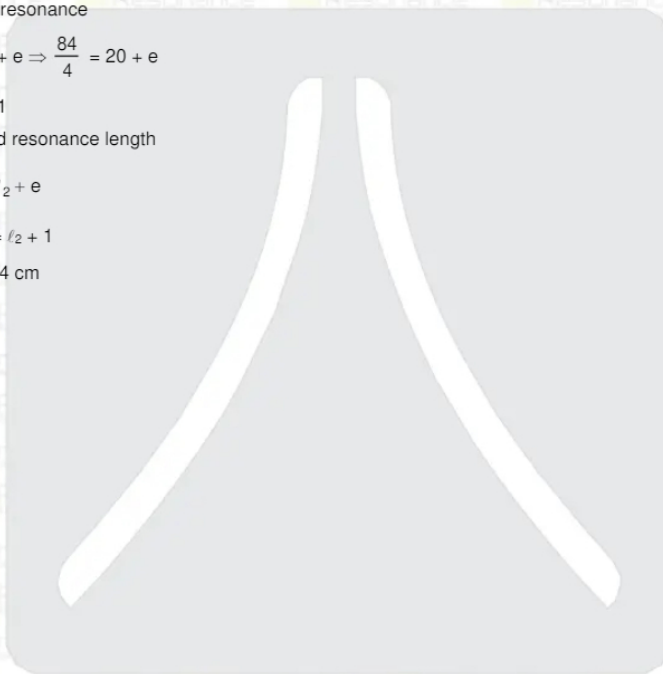
$$\Rightarrow e = 1$$

So third resonance length

$$5\frac{\lambda}{4} = l_2 + e$$

$$5(21) = l_2 + 1$$

$$l_2 = 104 \text{ cm}$$



Resonance Eduventures Ltd.

Reg. Office & Corp. Office : CG Tower, A-46 & 52, IPIA, Near City Mall, Jhalawar Road, Kota (Raj.) - 324005

Ph. No.: +91-744-2777777, 2777700 | FAX No. : +91-022-39167222

To Know more : sms RESO at 56677 | Website : www.resonance.ac.in | E-mail : contact@resonance.ac.in | CIN : U80302RJ2007PLC024029

Toll Free : 1800 258 5555 | 7340010333 | facebook.com/ResonanceEdu | twitter.com/ResonanceEdu | www.youtube.com/resonance | blog.resonance.ac.in

This solution was download from Resonance JEE (MAIN) 2022 Solution portal

PAGE # 9



BEST RANK

from Kota Classroom among
all Institutes of Kota

AIR

8

CHAITANYA AGGARWAL
JEE (Advanced) 2021



Numbers that Inspire Students to **EXCEL**

Trust of
9,50,000+
STUDENTS*

Total Selections
1,78,546
JEE (Adv.) - Eligibility for
JEE (Adv.)** - NEET (UG)

AIRs in **TOP-100**
350
JEE (Adv.) - JEE (Main)
- NEET (UG)

Pool of
800+
FACULTY

Study Centres in
70+
CITIES

* Since 2001 | **Students Qualified from JEE (Main) to JEE (Advanced) since 2013

Total Selections & AIR in TOP-100 in JEE (Adv.) / JEE (Main) since 2002, JEE (Main) / AIEEE (since 2009), NEET (UG) / APMT (since 2012) | AIR: All India Rank

For Class XII Passed Students

TARGET

JEE (Main+Advanced) 2023

COURSE

VISHESH (JD)



CLASS STARTS

27th June & 4th July

TARGET

JEE (Main) 2023

COURSE

ABHYAAS (ED)



CLASS STARTS

27th June & 4th July

*T & C Apply

Scholarship upto 90%*
on the basis of JEE (Main) Percentile Score

अपनी **स्कोलरशिप** जानने के लिए **अपनी जेईई (मेन) परसेंटाइल वाट्सअप करें: 73400-10345**

Resonance Eduventures Ltd.

Kota Study Centre & Registered Corporate Office: CG Tower, A-46 & 52, IPIA, Near City Mall, Jhalawar Road, Kota (Raj.) - 324005
Tel. No.: 0744-2777777, 2777700 | CIN: U80302RJ2007PLC024029 | www.resonance.ac.in | contact@resonance.ac.in