



162

I

Total No. of Questions : 37

Total No. of Printed Pages : 2

Reg. No.

--	--	--	--	--	--	--	--	--	--	--	--	--	--	--	--	--	--	--	--

Map of India

Part – III
HISTORY
Paper – I
(English Version)

Time : 3 Hours

Max. Marks : 100

Note : Read the following instructions **carefully** :

- (i) **Section – ‘A’** consists of “Long answer type” questions. Every answer may be limited to **40** lines. **Each** question carries **10** marks.
- (ii) **Section – ‘B’** consists of “Short answer type” questions. Every answer may be limited to **20** lines. **Each** question carries **5** marks.
- (iii) **Section – ‘C’** consists of “Very short answer type” questions. Every answer may be limited to **5** lines. **Each** question carries **2** marks.
- (iv) Answer **ALL** questions one after another in the **same** order.

SECTION – A

(3×10=30)

I. Answer **ANY THREE** of the following questions.

- 1) Describe the main teachings of Buddhism and its impact on Indian Society.
- 2) Why Gupta period was called ‘Golden Age’ ?
- 3) Describe the salient features of Mughal administration.
- 4) Describe the achievements of Srikrishna Devaraya.
- 5) Write an account of Non-cooperation Movement in India.



SECTION – B

(8×5=40)

II. Answer **ANY EIGHT** of the following questions. Question No. 17 of Map is **compulsory**.

- 6) Critically assess the importance of literary sources in writing Indian History.
- 7) Write about Harappan script.
- 8) What were the factors contributed for the rise of Magadhan Empire ?
- 9) What do you understand by Ashoka Dhamma ?
- 10) Describe the greatness of Goutamiputra Satakarni.



- 11) Bring out the salient aspects of Chola's local self-government.
- 12) Write about marketing reforms of Ala-ud-din-Khilji.
- 13) Bring out main features of Bhakthi preachers. 
- 14) Explain main features of Cornwallis's reforms. 
- 15) Discuss various causes lead to the outbreak of 1857 revolt.
- 16) Critically examine the work of the 'Home Rule Movement'.
- 17) Locate the following places in the Ashoka's Empire on the given Map of India :
 - (a) Kalinga
 - (b) Madhura
 - (c) Taxila
 - (d) Sanchi
 - (e) Pataliputra.

OR




Locate the following places in Akbar's Empire on the given Map of India :

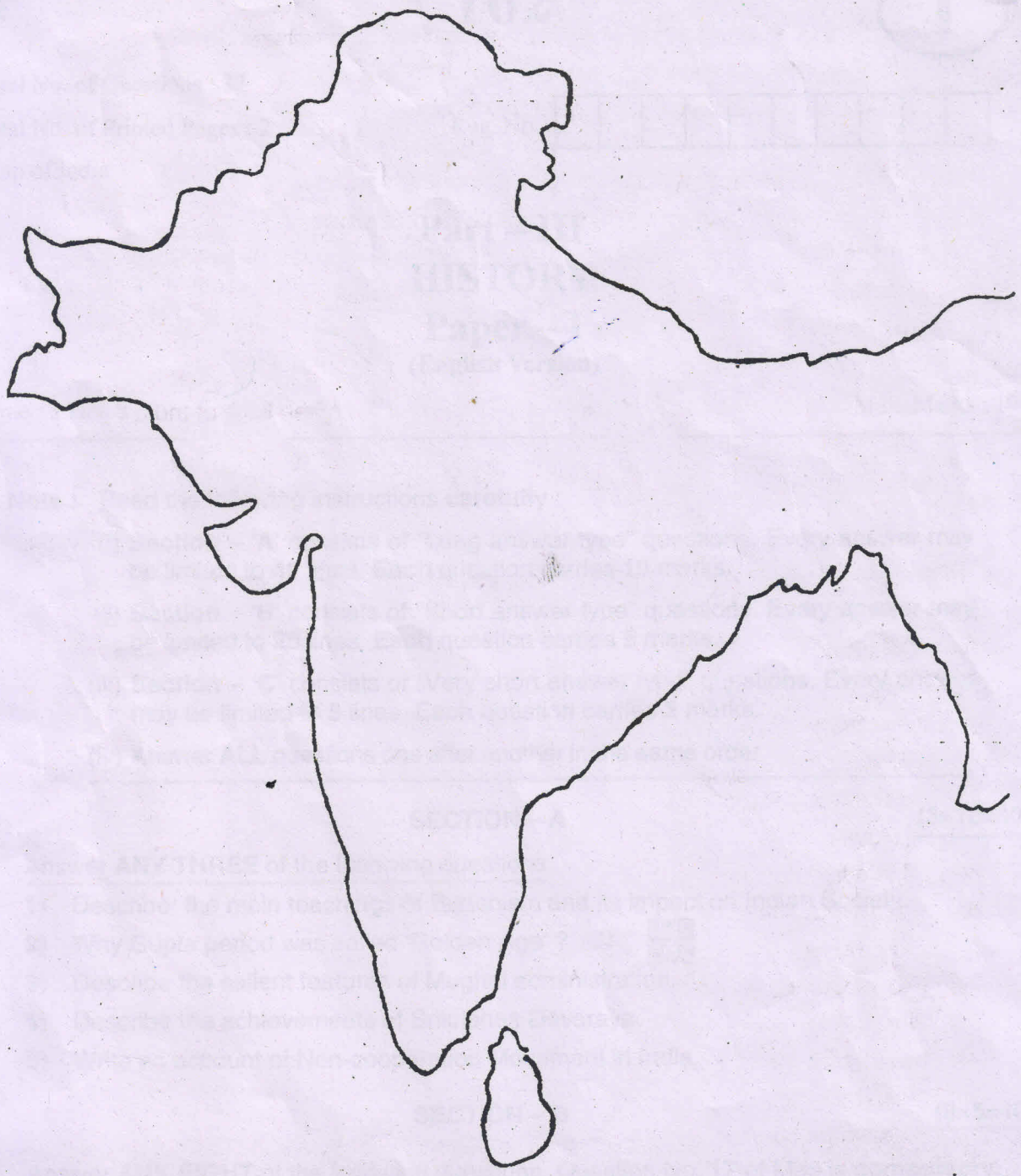
- (a) Delhi
- (b) Panipat
- (c) Agra
- (d) Gondwana
- (e) Gujarat.

SECTION – C

(15×2=30)

III. Write notes on **ANY FIFTEEN** of the following:

- 18) Inscriptions.
- 19) Great bath.
- 20) Vedas.
- 21) How many trade routes were there in the 6th BC ?
- 22) Ajavikas. 
- 23) Principles of Buddhism.
- 24) Kalidasa.
- 25) Aihole Inscription.
- 26) Pallava Architecture.
- 27) Qutb Minar.
- 28) Token Currency Reforms.
- 29) Noorjahan. 
- 30) Taj Mahal. 
- 31) Shankaracharya.
- 32) Ramanujacharya.
- 33) Nayankara system.
- 34) Rani Lakshmi Bai.
- 35) Warren Hastings.
- 36) Who were moderates ?
- 37) Write about Rowlatt Satyagraha.




CUT HERE





1) ...
 2) ...
 3) ...
 4) ...
 5) ...
 6) ...
 7) ...



8) ...
 9) ...
 10) ...
 11) ...
 12) ...

13) ...
 14) ...
 15) ...
 16) ...
 17) ...
 18) ...
 19) ...
 20) ...
 21) ...
 22) ...
 23) ...
 24) ...
 25) ...
 26) ...
 27) ...
 28) ...
 29) ...
 30) ...
 31) ...
 32) ...
 33) ...
 34) ...
 35) ...
 36) ...
 37) ...
 38) ...
 39) ...
 40) ...
 41) ...
 42) ...
 43) ...
 44) ...
 45) ...
 46) ...
 47) ...
 48) ...
 49) ...
 50) ...
 51) ...
 52) ...
 53) ...
 54) ...
 55) ...
 56) ...
 57) ...
 58) ...
 59) ...
 60) ...
 61) ...
 62) ...
 63) ...
 64) ...
 65) ...
 66) ...
 67) ...
 68) ...
 69) ...
 70) ...
 71) ...
 72) ...
 73) ...
 74) ...
 75) ...
 76) ...
 77) ...
 78) ...
 79) ...
 80) ...
 81) ...
 82) ...
 83) ...
 84) ...
 85) ...
 86) ...
 87) ...
 88) ...
 89) ...
 90) ...
 91) ...
 92) ...
 93) ...
 94) ...
 95) ...
 96) ...
 97) ...
 98) ...
 99) ...
 100) ...

CBSE