

**PLEASE ENSURE THAT THIS QUESTION BOOKLET CONTAINS
120 QUESTIONS SERIALLY NUMBERED FROM 1 TO 120
PRINTED PAGES 32**

1. An inductor coil with an internal resistance of $50\ \Omega$ stores magnetic field energy of $180\ \text{mJ}$ and dissipates energy as heat at the rate of $200\ \text{W}$ when a constant current is passed through it. The inductance of the coil will be :
 (A) $90\ \text{mH}$ (B) $120\ \text{mH}$ (C) $45\ \text{mH}$ (D) $30\ \text{mH}$ (E) $60\ \text{mH}$
2. A current carrying long solenoid is formed by winding 200 turns per cm. If the number of turns per cm is increased to 201 keeping the current constant, then the magnetic field inside the solenoid will change by :
 (A) 0.2% (B) 0.4% (C) 0.5% (D) 1% (E) 2%
3. A metallic cylindrical wire 'A' has length $10\ \text{cm}$ and radius $3\ \text{mm}$. Another hollow cylindrical wire 'B' of the same metal has length $10\ \text{cm}$, inner radius $3\ \text{mm}$ and outer radius $4\ \text{mm}$. The ratio of the resistance of the wires A to B is :
 (A) $\frac{7}{9}$ (B) $\frac{9}{7}$ (C) $\frac{9}{16}$ (D) $\frac{16}{9}$ (E) $\frac{3}{4}$
4. A small bar magnet lies along the x-axis with its centre fixed at the origin. If the magnetic field at point $(5\hat{i})\ \text{m}$ due to this magnet is $4 \times 10^{-6}\ \text{T}$, then the magnetic field at point $(10\hat{j})\ \text{m}$ will be :
 (A) $2.5 \times 10^{-7}\ \text{T}$ (B) $2 \times 10^{-6}\ \text{T}$ (C) $1 \times 10^{-6}\ \text{T}$ (D) $2.0 \times 10^{-7}\ \text{T}$ (E) $8.0 \times 10^{-8}\ \text{T}$
- An ideal gas is compressed in volume by a factor of 2 , while keeping its temperature constant. The speed of sound in it is :
 (A) doubled (B) unchanged (C) reduced to half
 (D) increased by 4 times (E) reduced by 4 times

Space for rough work

6. In the magnetic meridian of a certain plane, the horizontal component of earth's magnetic field is 0.36 Gauss and the dip angle is 60° . The magnetic field of the earth at that location is :
- (A) 0.72 Gauss (B) 0.18 Gauss (C) 0.42 Gauss
 (D) 0.56 Gauss (E) 0.81 Gauss
7. A resistance R is connected across an ideal battery. The total power dissipated in the circuit is P. If another resistance R is added in series, the new total dissipated power is :
- (A) 2P (B) 4P (C) P (D) $\frac{P}{2}$ (E) $\frac{P}{4}$
8. A toroid with 500 turns of wire carries a current of (2π) Ampere. A metal ring inside the toroid provides the core and has susceptibility of 2×10^{-5} . If the magnetization is 5×10^{-2} A/m, then radius of the ring is :
- (A) 50 cm (B) 20π cm (C) $\frac{50}{\pi}$ cm (D) 20 cm (E) 60 cm
9. When a vibrating tuning fork moves towards a stationary observer with a speed of 50 m/s, the observer hears a frequency of 350 Hz. The frequency of vibration of the fork is : (Take speed of sound = 350 m/s)
- (A) 350 Hz (B) 400 Hz (C) 200 Hz (D) 300 Hz (E) 250 Hz

Space for rough work

Handwritten rough work for question 6:

$$B_H = B \cos \theta$$

$$0.36 = B \cos 60^\circ$$

$$0.36 = B \times \frac{1}{2}$$

$$B = 0.72 \text{ Gauss}$$

Handwritten rough work for question 8:

$$M = \chi H$$

$$5 \times 10^{-2} = 2 \times 10^{-5} \times H$$

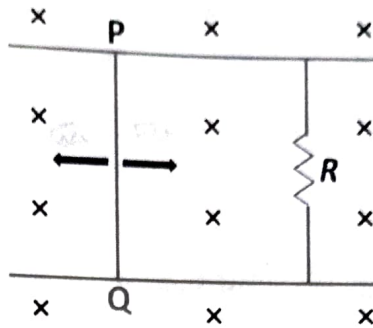
$$H = \frac{5 \times 10^{-2}}{2 \times 10^{-5}} = 2500 \text{ A/m}$$

$$H = \frac{N I}{2\pi r}$$

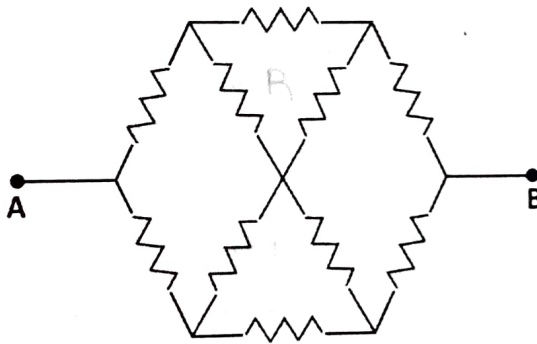
$$2500 = \frac{500 \times 2\pi}{2\pi r}$$

$$r = \frac{500}{2500} = 0.2 \text{ m} = 20 \text{ cm}$$

10. The rod PQ slides along 2 parallel rails as shown in the figure. It has a length of 20 cm and is perpendicular to the 2 rails. It performs simple harmonic motion with amplitude 5 cm and frequency 10 Hz. The magnetic field is 10^{-4} T and is directed perpendicular to the plane of paper. What is the peak induced electro-magnetic force ?



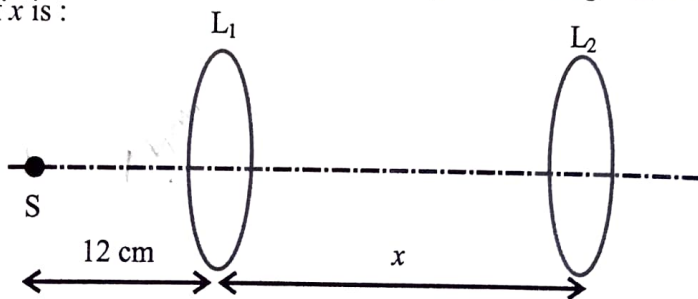
- (A) $2\pi \times 10^{-7}$ V (B) $4\pi^2 \times 10^{-3}$ V (C) $2\pi \times 10^{-5}$ V
 (D) $4\pi \times 10^{-5}$ V (E) $\pi^2 \times 10^{-4}$ V
11. Find the effective resistance between points A and B. Each resistance is equal to R.



- (A) $2R$ (B) $\frac{3}{4}R$ (C) $3R$ (D) $\frac{4}{3}R$ (E) $\frac{9}{5}R$

Space for rough work

12. A projectile is thrown at a speed V and at an angle θ with the horizontal. If the speed at its maximum height is $\frac{V}{3}$, then the value of $\tan \theta$ is :
- (A) $\sqrt{3}$ (B) $\frac{1}{\sqrt{3}}$ (C) $2\sqrt{2}$ (D) 3 (E) $3\sqrt{3}$
13. Consider a vector addition $\vec{P} + \vec{Q} = \vec{R}$. If $\vec{P} = |\vec{P}|\hat{i}$, $|\vec{Q}| = 10$ and $\vec{R} = 3|\vec{P}|\hat{j}$, then $|\vec{P}|$ is :
- (A) $\sqrt{10}$ (B) 30 (C) $\sqrt{30}$ (D) $2\sqrt{10}$ (E) $2\sqrt{20}$
14. A car is moving with an initial speed of 5 m/s. A constant braking force is applied and the car is brought to rest in a distance of 10 m. What is the average speed of the car during the deceleration process ?
- (A) 1 m/s (B) 2.5 m/s (C) 4 m/s (D) 5 m/s (E) 7 m/s
15. Consider a particle executing a simple harmonic motion. Let x , A , K and U are displacement, amplitude, kinetic energy and potential energy, respectively, of the particle at certain instant of time. If $\frac{K}{U} = 3$, then $\frac{x}{A}$ is :
- (A) $\frac{1}{3}$ (B) $\frac{1}{2}$ (C) $\frac{2}{3}$ (D) $\frac{1}{9}$ (E) $\frac{4}{9}$
16. Two thin convex lenses L_1 and L_2 have focal lengths 4 cm and 10 cm, respectively. They are separated by a distance of x cm as shown in the figure. A point source S is placed on the principal axis at a distance 12 cm to the left of L_1 . If the image of S is formed at infinity, the value of x is :



- (A) 6 (B) 16 (C) 14 (D) 24 (E) 10

Space for rough work

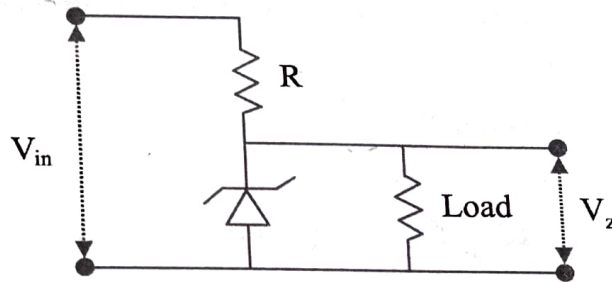
17. What is the de Broglie wavelength corresponding to a ball of mass 100 g moving with a speed of 33 m/s? (Planck's constant = 6.6×10^{-34} J/s)
- (A) 1×10^{-34} m (B) 2×10^{-34} m (C) 3×10^{-34} m
 (D) 1×10^{34} m (E) 2×10^{34} m
18. A laser source emits light of wavelength 300 nm and has a power of 3.3 mW. The average number of photons emitted per second is :
- (Speed of light = 3×10^8 m/s, Planck's constant = 6.6×10^{-34} J/s)
- (A) 2×10^{15} (B) 1×10^{15} (C) 5×10^{15} (D) 3×10^{15} (E) 4×10^{15}
19. A thin convex lens of refractive index 1.5 has a focal length of 10 cm in air. When the lens is immersed in a fluid, its focal length becomes 70 cm. The refractive index of the fluid is :
- (A) 1.33 (B) 1.6 (C) 1.25 (D) 1.45 (E) 1.4
20. For the hydrogen spectrum, the wavelength in Balmer series is given by
- $$\frac{1}{\lambda} = R \left(\frac{1}{n_1^2} - \frac{1}{n_2^2} \right)$$
- where λ = wavelength and R is Rydberg constant. What are the values of n_1 and n_2 for the longest wavelength in the Balmer series?
- (A) $n_1 = 2, n_2 = 3$ (B) $n_1 = 2, n_2 = 4$ (C) $n_1 = 1, n_2 = 2$
 (D) $n_1 = 2, n_2 = \infty$ (E) $n_1 = 3, n_2 = \infty$
21. Car P is heading east with a speed V and car Q is heading north with a speed $\sqrt{3}$. What is the velocity of car Q with respect to car P ?
- (A) $V\sqrt{3}$, heading north (B) $2V$, 30° east of north (C) $V\sqrt{3}$, 60° west of north
 (D) $2V$, 30° west of north (E) $V\sqrt{2}$, 45° west of north
22. A particle at rest starts from the origin with a constant acceleration \vec{a} that makes an angle 60° with the positive y-axis. If its displacement along y-axis is 10 m in time 2 s, then the magnitude of \vec{a} is :
- (A) 10 ms^{-2} (B) 4 ms^{-2} (C) 8 ms^{-2} (D) 15 ms^{-2} (E) 20 ms^{-2}

Space for rough work

23. Suppose a force is given by the expression $= kx^2$; where x has the dimension of length. The dimension of k is :
 (A) $M L^{-1} T^{-1}$ (B) $M L T^{-1}$ (C) $M T^{-2}$ (D) $M^{-1} L^{-1} T$ (E) $M L^{-1} T^{-2}$
24. A horizontal force is exerted on a 20 kg box to slide it up on an inclined plane with an angle of 30° . The frictional force retarding the motion is 80 N. If the box moves with a constant speed, then the magnitude of the force is : (Take $g = 10 \text{ ms}^{-2}$)
 (A) $50\sqrt{2}$ N (B) 100 N (C) $80\sqrt{3}$ N (D) $100\sqrt{2}$ N (E) $120\sqrt{3}$ N
25. In a Young's double slit experiment which of the following statements is NOT true ?
 (A) Angular separation of the fringes remains constant when the screen is moved away from the plane of the slits.
 (B) Fringe separation increases when the separation between the two slits decreases.
 (C) Sharpness of the fringe pattern decreases when the source slit width increases.
 (D) Distance between the fringes decreases when the separation between slits and the screen increases.
 (E) The central fringe is white when the monochromatic source is replaced by a white light source.
26. N capacitors, each with $1 \mu\text{F}$ capacitance, are connected in parallel to store a charge of 1 C. The potential across each capacitor is 100 V. If these N capacitors are now connected in series, the equivalent capacitance in the circuit will be :
 (A) 10^{-4} F (B) 10^{-6} F (C) 10^{-10} F (D) 5×10^{-8} F (E) 10^{-2} F
27. A train consists of an engine and 3 coaches, first coach is closest to the engine, third coach is farthest from engine. The train is moving with a constant acceleration a . The mass of each coach is M . The force exerted by the first coach on the second coach will be :
 (A) Ma (B) $2Ma$ (C) $3Ma$ (D) $4Ma$ (E) $\sqrt{2} Ma$
28. A uniform thin rod of mass 3 kg has a length of 1 m. If a point mass of 1 kg is attached to it at a distance of 40 cm from its center, the center of mass shifts by a distance of :
 (A) 2.5 cm (B) 5 cm (C) 8 cm (D) 10 cm (E) 20 cm

Space for rough work

29. A wheel is rolling on a plane surface. A point on the rim of the wheel at the same level as the centre has a speed of 4 m/s. The speed of the centre of the wheel is :
 (A) 4 m/s (B) 0 (C) $2\sqrt{2}$ m/s (D) 8 m/s (E) $4\sqrt{2}$ m/s
30. An unpolarised light is incident on a glass slab such that the reflected ray is totally polarised. If the angle of refraction is 30° , the refractive index of the glass is :
 (A) 1.5 (B) 1.73 (C) 1.41 (D) 1.45 (E) 1.60
31. A planet has an escape speed of 10 km/s. The radius of the planet is 10,000 km. The acceleration due to gravity of the planet at its surface is :
 (A) 10 m/s^2 (B) 9.8 m/s^2 (C) 20 m/s^2 (D) 2.5 m/s^2 (E) 5 m/s^2
32. In a Zener regulated power supply circuit as shown in figure below, a Zener diode with $V_z = 10 \text{ V}$ is used for regulation. The load current, Zener current and unregulated input V_{in} are 5 mA, 35 mA and 20 V, respectively. The value of R is :



- (A) 1000Ω (B) 750Ω (C) 250Ω (D) 100Ω (E) 500Ω
33. An average frictional force of 80 N is required to stop an object at a distance of 25 m. If the initial speed of the object is 20 m/s, the mass of the object is :
 (A) 25 kg (B) 12 kg (C) 30 kg (D) 40 kg (E) 10 kg
34. An ideal gas is kept in a closed container. If the temperature is doubled and the volume of the container is reduced to half, the gas pressure is :
 (A) unchanged (B) halved (C) doubled
 (D) increased by 4 times (E) increased by 16 times

Space for rough work

35. A metal wire of natural length 50 cm and cross-sectional area 4.0 mm^2 is fixed at one end. A mass of 2.4 kg is hung from the other end of the wire. If the elastic potential energy of the wire is $1.8 \times 10^{-4} \text{ J}$, then its Young's modulus is : (Take $g = 10 \text{ ms}^{-2}$)
- (A) $1.6 \times 10^{11} \text{ Nm}^{-2}$ (B) $2.4 \times 10^{11} \text{ Nm}^{-2}$ (C) $3.2 \times 10^{11} \text{ Nm}^{-2}$
 (D) $1.8 \times 10^{11} \text{ Nm}^{-2}$ (E) $2.0 \times 10^{11} \text{ Nm}^{-2}$
36. Select the incorrect statement about friction :
- (A) Static friction force is always equal to μN , where μ is co-efficient of static friction and N is normal force.
 (B) Friction is a non-conservative force.
 (C) Friction arises from electro-magnetic force.
 (D) Friction always opposes relative motion between two surfaces.
 (E) Maximum value of static friction is μN , where μ is co-efficient of static friction and N is normal force.
37. The angle of minimum deviation for a prism of apex angle 60° and refractive index of $\sqrt{2}$ is :
- (A) 45° (B) 90° (C) 30° (D) 60° (E) 15°
38. An ideal diatomic gas is made up of molecules that do not vibrate. Its volume is compressed by a factor of 32, without any exchange of heat. If the initial and final pressures are P_1 and P_2 , respectively, the ratio $P_1:P_2$ is :
- (A) 7:5 (B) 128:1 (C) 1:32 (D) 32:1 (E) 1:128

Space for rough work

$\frac{P_1}{P_2} = \frac{V_2}{V_1}$

$\frac{P_1}{P_2} = \frac{1}{32}$

(A) 7:5 (B) 128:1 (C) 1:32 (D) 32:1 (E) 1:128

- 24
40
39. A body is moving in a straight line under the influence of a source of constant power. If its displacement at time $t = 0$ and 10 s are 0 and 10 m, respectively. The displacement at time $t = 20$ s is :
- (A) 20 m (B) 40 m (C) $10\sqrt{2}$ m (D) $20\sqrt{2}$ m (E) $5\sqrt{10}$ m
40. A glass capillary of radius 0.15 mm is dipped into a liquid of density and surface tension 1600 kg/m^3 and 0.12 Nm^{-1} , respectively. The liquid in the capillary rises by a height of 5.0 cm. The contact angle between liquid and glass will be : (Take $g = 10 \text{ ms}^{-2}$)
- (A) 30° (B) 0° (C) 45° (D) 75° (E) 60°
41. A gun fires N bullets per minute. The mass of each bullet is 10 g and every bullet travels with a speed of 600 m/s. If the power delivered by the gun is 9000 W, the value of N is :
- (A) 300 (B) 400 (C) 360 (D) 420 (E) 250
42. In an oil drop experiment, 'n' numbers of electrons are stripped from an oil drop to make it positively charged. A vertical electric field of magnitude 4.9×10^{14} N/C is applied to balance the force due to gravity on the oil drop. If the mass of oil drop is $80 \mu\text{g}$, the value of 'n' will be :
(Take $g = 9.8 \text{ m/s}^2$ and charge of an electron = 1.6×10^{-19} C)
- (A) 1 (B) 10 (C) 100 (D) 1000 (E) 10000
43. A radioactive nuclei has a half life of 693 s. The activity of one mole of that nuclei sample is : (Avogadro's number = 6.023×10^{23} and $\ln(2) = 0.693$)
- (A) 2×10^{10} Bq (B) 3.7×10^{10} Bq (C) 6.023×10^{20} Bq
(D) 0.5×10^{-10} Bq (E) 1×10^{20} Bq

Space for rough work

44. A projectile is thrown at an angle 60° above the horizontal and with kinetic energy 40 J . The kinetic energy of the projectile at the highest point of its trajectory will be :
 (A) 10 J (B) 40 J (C) 20 J (D) $20\sqrt{2}\text{ J}$ (E) $20\sqrt{3}\text{ J}$
45. A billiard ball B_1 moving with velocity V , collides with another billiard ball B_2 . After the collision, ball B_1 is deflected by 60° and the angle between the velocities of these two balls is 90° . The speed of the ball B_2 after the collision is :
 (A) $\frac{V}{2}$ (B) $\frac{3V}{2}$ (C) $2V$ (D) $\frac{2V}{\sqrt{3}}$ (E) $\frac{\sqrt{3}V}{2}$
46. Two satellites A and B are moving around the earth in a circular orbit of radii R and $2R$, respectively. If the kinetic energy of the satellite A is two-times the kinetic energy of the satellite B, the ratio of their masses ($m_A : m_B$) is :
 (A) 1:2 (B) 2:1 (C) 1:1 (D) 1:4 (E) 4:1
47. An object at rest suddenly explodes into three parts of equal masses. Two of the parts fly away at right angles to each other with equal speed of 10 m/s . The speed of the third part just after the explosion will be :
 (A) 10 m/s (B) 20 m/s (C) $2\sqrt{10}\text{ m/s}$ (D) 0 (E) $10\sqrt{2}\text{ m/s}$
48. Two identical solid spheres, each of radius 10 cm , are kept in contact. If the moment of inertia of this system about the tangent passing through the point of contact is 0.1 kg m^2 , then mass of each sphere is :
 (A) 5 kg (B) 17.5 kg (C) 35 kg (D) 2.5 kg (E) 10 kg

Space for rough work

[Handwritten notes and calculations in pencil, including diagrams and formulas like $\frac{1}{2}mv^2$, $\frac{1}{2}I\omega^2$, and $\frac{1}{2}mV^2$ are visible.]

49. A NOR gate has two input I_1 and I_2 and one output terminal Y . Which of the following configuration (truth table) is **INCORRECT** for the NOR gate ?
- (A) $I_1 = 0, I_2 = 0, Y = 1$
 (B) $I_1 = 0, I_2 = 0, Y = 0$
 (C) $I_1 = 1, I_2 = 1, Y = 0$
 (D) $I_1 = 1, I_2 = 0, Y = 0$
 (E) $I_1 = 0, I_2 = 1, Y = 0$
50. The kinetic energy of a particle of mass m_1 moving with a speed V is same as the kinetic energy of a solid sphere of mass m_2 rolling on the plane surface. If the speed of the centre of the sphere is also V , then $\frac{m_1}{m_2}$ is :
- (A) $\frac{7}{10}$ (B) $\frac{1}{2}$ (C) $\frac{5}{7}$ (D) $\frac{7}{5}$ (E) $\frac{2}{3}$
51. Line-of-sight communication happens by means of :
- (A) Ground wave (B) Sky wave (C) Surface wave
 (D) Space wave (E) Seismic wave
52. A ring of radius 1.75 m stands vertically. A small sphere of mass 1 kg rolls on the inside of this ring without slipping. If it has a velocity of 10 m/s at the bottom of the ring, then its velocity when it reaches the top is : (Take $g = 10 \text{ m/s}^2$)
- (A) $3\sqrt{2}$ m/s (B) $2\sqrt{3}$ m/s (C) $8\sqrt{2}$ m/s (D) $2\sqrt{5}$ m/s (E) $5\sqrt{2}$ m/s
53. A signal of 5 kHz frequency is amplitude modulated on a carrier wave of frequency 5 MHz. The frequencies of the side bands are :
- (A) 4.5 MHz and 5.5 MHz (B) 4.95 MHz and 5.05 MHz
 (C) 4.995 MHz and 5.005 MHz (D) 4.9995 MHz and 5.0005 MHz
 (E) 5 MHz and 5 kHz

Space for rough work

$$\sqrt{v_{\text{ring}} = 10 \text{ m/s}}$$

$$1.75 \times 9.8$$

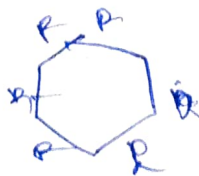
$$5 \times 5$$

$$5 \times 5$$

$$v = \frac{10 \times 10}{5 \times 10}$$

54. A string clamped at both the ends has a mass 10 gm, length 1 m and it is kept under tension of 1N. It is vibrating in the fundamental mode with an amplitude of 1 cm. Assuming the standing wave pattern, the maximum acceleration seen in the string is :
 (A) $4\pi^2 \text{ m/s}^2$ (B) $2\pi^2 \text{ m/s}^2$ (C) $\pi^2 \text{ m/s}^2$ (D) $4\pi \text{ m/s}^2$ (E) $2\pi \text{ m/s}^2$
55. A spherical ball is subjected to a pressure of 100 atmosphere. If the bulk modulus of the ball is 10^{11} N/m^2 , then change in the volume is :
 (A) $10^{-1} \%$ (B) $10^{-2} \%$ (C) $10^{-3} \%$ (D) $10^{-4} \%$ (E) $10^{-5} \%$
56. A hollow sphere of radius 'r' encloses an electric dipole composed of two charges +q and -q. The net flux of electric field through the surface of the sphere due to the enclosed dipole is :
 (A) $\frac{2q}{\epsilon_0}$ (B) $\frac{2q}{\epsilon_0} \cdot 4\pi r^2$ (C) infinite (D) zero (E) $\frac{q}{\epsilon_0}$
57. The work done W is required by an agent to form a bubble of radius R. An extra amount of work ΔW is required to increase the radius by ΔR . If $\frac{\Delta R}{R} = 1\%$, then $\frac{\Delta W}{W}$ is :
 (A) 2% (B) 1% (C) 4% (D) 3% (E) 0.5%
58. Each side of a regular hexagon has resistance R. The effective resistance between the two opposite vertices of the hexagon is :
 (A) R (B) 2R (C) $\frac{3R}{2}$ (D) $\frac{2R}{3}$ (E) 3R
59. Two metallic solid spheres A and B, have radius R and 3R, respectively. The spheres are charged and kept isolated. Then, the two spheres are connected to each other through a thin conducting wire. The ratio of the final charge on the spheres A to B is :
 (A) 1:1 (B) 1:3 (C) 3:1 (D) 1:9 (E) 9:1

Space for rough work



60. A heat engine operates between a cold reservoir and a hot reservoir. The engine takes 200 J of heat from the hot reservoir and has the efficiency of 0.4. The amount of heat delivered to the cold reservoir in a cycle is :
 (A) 100 J (B) 120 J (C) 140 J (D) 160 J (E) 80 J
61. A system of ideal gas undergoes a thermodynamic process in which the initial pressure and volume are equal to the final pressure and volume. Let ΔQ is the heat supplied to the system, ΔW is the work done by the system and ΔU is the change in internal energy. The correct option is :
 (A) $\Delta Q = \Delta W$ (B) $\Delta U > 0$ (C) $\Delta U \neq 0$ (D) $\Delta U + \Delta Q + \Delta W = 0$ (E) $\Delta Q + \Delta W = 0$
62. The rms speed of a gas having diatomic molecules at temperature T (in Kelvin) is 200 m/s. If the temperature is increased to 4T and the molecules dissociate into monoatomic atoms, the rms speed will become :
 (A) 400 m/s (B) 200 m/s (C) 800 m/s (D) $200\sqrt{2}$ m/s (E) $400\sqrt{2}$ m/s
63. A metallic bullet with an initial velocity of 500 m/s penetrates a solid object and melts. The initial temperature of the bullet is 30°C and its melting point is 280°C . The ratio of total heat generated to the initial kinetic energy of the bullet will be : [Latent heat of fusion of metal = 3.0×10^4 J/kg and specific heat capacity of metal = 200 J/kg-K]
 (A) 0.5 (B) 1.0 (C) 0.81 (D) 0.36 (E) 0.64
64. Identify which type of electromagnetic wave is produced using Klystron or Magnetron valve :
 (A) Gamma rays (B) Microwave (C) Infrared rays
 (D) Ultraviolet rays (E) X-rays

Space for rough work

$$P = 100 \text{ atm}$$

$$B = \frac{P}{\rho v}$$

$$10^{-11} \times 1$$

65. A long wire carrying a current of 5 A lies along the positive z-axis. The magnetic field at the point with position vector $\vec{r} = (\hat{i} + 2\hat{j} + 2\hat{k})$ m will be : ($\mu_0 = 4\pi \times 10^{-7}$ in SI units)
- (A) $2\sqrt{5} \times 10^{-7}$ T (B) 5×10^{-7} T (C) 0.33×10^{-7} T
 (D) 0.66×10^{-7} T (E) $7\sqrt{5} \times 10^{-7}$ T
66. Which of the following scientific principle is used to produce the ultra-high magnetic fields ?
- (A) Magnetic confinement of plasma
 (B) Faraday's laws of electromagnetic induction
 (C) Controlled nuclear fusion
 (D) Motion of charged particles in electromagnetic fields
 (E) Superconductivity
67. A laser beam with an energy flux of 20 W/cm² is incident on a non-reflecting surface at normal incidence. If the surface has an area of 30 cm², the total momentum delivered by the laser in 30 minutes for complete absorption will be :
- (A) 2.8×10^{-3} kg m/s (B) 4.2×10^{-3} kg m/s (C) 3.6×10^{-3} kg m/s
 (D) 3.3×10^{-3} kg m/s (E) 2.4×10^{-3} kg m/s
68. A series LCR circuit consists of a variable capacitor connected to an inductor of inductance 50 mH, resistor of resistance 100 Ω and an AC source of angular frequency 500 rad/s. The value of capacitance so that maximum current may be drawn into the circuit is :
- (A) 60 μ F (B) 50 μ F (C) 100 μ F (D) 80 μ F (E) 25 μ F

Space for rough work

$$X_C = X_L$$

$$\frac{1}{C\omega} = L\omega$$

$$\frac{1}{C} = L\omega^2$$

$$\frac{1}{C} = 100 \times 2500$$

$$\frac{10000}{125}$$

$$250$$

69. A magnetic field of $(10^{-4} \hat{k})$ T exerts a force of $(4\hat{i} - 3\hat{j}) \times 10^{-12}$ N on a particle having a charge of 10^{-9} C. The speed of the particle is :
- (A) 40 m/s (B) $40\sqrt{2}$ m/s (C) 50 m/s
(D) $50\sqrt{3}$ m/s (E) $100\sqrt{2}$ m/s
70. A simple pendulum experiment is performed for the value of 'g', the acceleration due to the Earth's gravity. The measured value of length of the pendulum is 25 cm with an accuracy of 1 mm and the measured time for 100 oscillations is found to be 100 sec with an accuracy of 1 sec. The percentage uncertainty in the determination of 'g' is :
- (A) 9.8 (B) 0.98 (C) 4.8 (D) 2.4 (E) 1.4
71. A combination of two charges +1 nC and -1 nC are separated by a distance of 1 μ m. This constituted electric dipole is placed in an electric field of 1000 V/m at an angle of 45° . The torque and the potential energy on the electric dipole are :
- (A) $\frac{1}{\sqrt{2}} \times 10^{-12}$ N.m and $\frac{1}{\sqrt{2}} \times 10^{-12}$ J
(B) $\frac{1}{\sqrt{2}} \times 10^{-12}$ N.m and $\sqrt{2} \times 10^{-12}$ J
(C) $\sqrt{2} \times 10^{-12}$ N.m and $\frac{1}{\sqrt{2}} \times 10^{-12}$ J
(D) $\sqrt{2} \times 10^{-12}$ N.m and $\sqrt{2} \times 10^{-12}$ J
(E) $\frac{\sqrt{3}}{2} \times 10^{-12}$ N.m and $\frac{\sqrt{3}}{2} \times 10^{-12}$ J
72. In a current carrying coil of inductance 60 mH, the current is changed from 2.5 A in one direction to 2.5 A in the opposite direction in 0.10 sec. The average induced EMF in the coil will be :
- (A) 1.2 V (B) 2.4 V (C) 3.0 V (D) 1.8 V (E) 0.6 V

Space for rough work

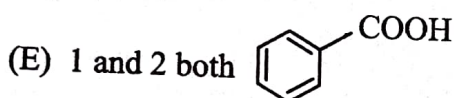
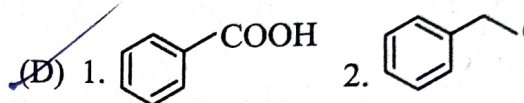
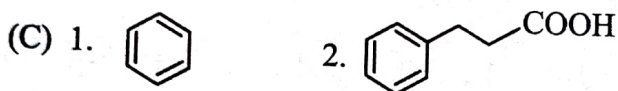
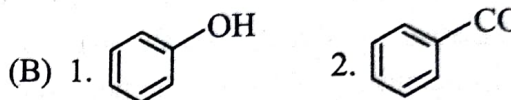
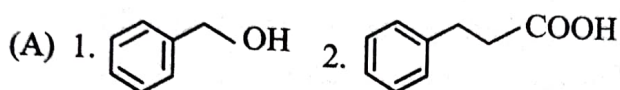
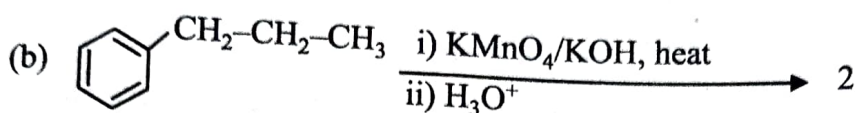

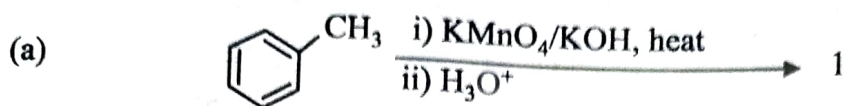
$$L = 60 \text{ mH.}$$

$$F = q \times B.$$

$$V = \frac{F}{q \times B.}$$

$$16 \quad \underline{5}$$

73. Identify 1 and 2 in the following reactions :



74.

In which of the following reactions, we will get new C-C bond ?

- (A) Cannizzaro reaction and Aldol condensation reaction
- (B) Cannizzaro reaction and Sandmeyer's reaction
- (C) Friedel-Crafts reaction and Gattermann-Koch reaction
- (D) Cannizzaro reaction and Reimer-Tiemann reaction
- (E) Sandmeyer's reaction and Aldol condensation reaction

75. The nitrogen oxide that does not contain N-N bond is :

- (A) N_2O_5 (B) N_2O_3 (C) NO_2 (D) N_2O_4 (E) N_2O

Space for rough work



76. In a zero-order reaction, the reactant A disappeared with a rate of reaction $k = 0.04 \text{ M sec}^{-1}$. The initial concentration of A is 1 M. What will be the concentration of A after 20 seconds?

- (A) 1.08 M (B) 0.2 M (C) 0.8 M (D) 0.002 M (E) 0.008 M

77. Following of which can be an empirical relationship between the quantity of adsorbed by unit mass of solid adsorbent and pressure at a particular temperature. x = mass of the gas adsorbed on a mass 'm' of the adsorbent at a pressure 'P'. k and n are constants, which depend on the nature of the adsorbent and the gas at a particular temperature.

- (A) $\log x + \log m = \log k + \frac{1}{n} \log P$ (B) $\log x + \log m = \log k - \frac{1}{n} \log P$
(C) $\log x + \log m = -\log k + \frac{1}{n} \log P$ (D) $\log x - \log m = \log k + \frac{1}{n} \log P$
(E) $\log x - \log m = \log k - \frac{1}{n} \log P$

78. In the following which can be used as an antidepressant drug?

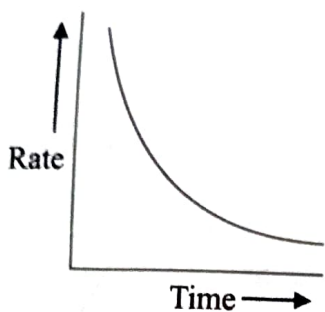
- (A) Salvarsan (B) Ofloxacin (C) Erythromycin.
(D) Serotonin (E) Chloroxylenol

79. $[\text{Co}(\text{NH}_3)_4(\text{NO}_2)_2]\text{Cl}$ exhibits :

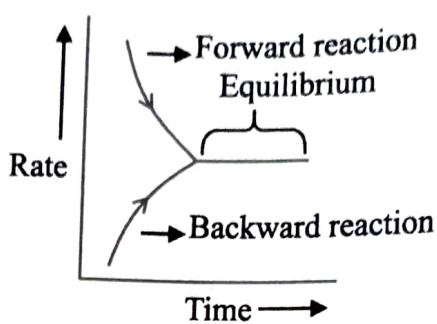
- (A) Linkage isomerism, ionisation isomerism and optical isomerism
(B) Linkage isomerism, geometrical isomerism and ionisation isomerism
(C) Ionisation isomerism, geometrical isomerism and optical isomerism
(D) Linkage isomerism, geometrical isomerism and optical isomerism
(E) Optical isomerism, geometrical isomerism and ionisation isomerism

Space for rough work

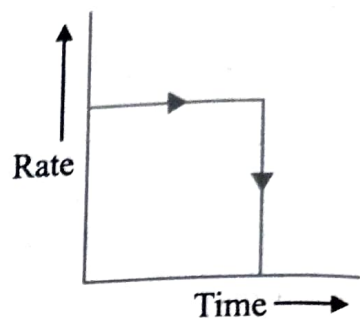
80. Find the correct combination about the following plots (P, Q and R) for the variation of rate of reaction with time.



(P)



(Q)



(R)

- (A) Q = Reversible; P = Zero order; R = Irreversible
 (B) R = Zero order; P = Zero order; R = Irreversible
 (C) Q = Irreversible; R = Reversible; P = Zero order
 (D) P = Irreversible; Q = Reversible; R = Zero order
 (E) P = Reversible; Q = Zero order; R = Irreversible
81. The resistance of the cell containing the aqueous solution of NaCl at 20°C is 60 ohm. If the specific conductivity of this solution at 20°C is $0.04 \text{ ohm}^{-1} \text{ cm}^{-1}$, what is the cell constant in cm^{-1} ?

- (A) 2.0 (B) 1.5 (C) 0.5 (D) 0.15 (E) 2.4

Space for rough work

82. Match the following columns (P) with (Q) :

(P)

(Q)

- | | |
|----------------------------|-------------------------------|
| a) Grignard reagent | (i) AlCl_3 |
| b) Sandmeyer's reaction | (ii) Sodium metal |
| c) Cannizzaro reaction | (iii) Cu(I) |
| d) Friedel-Crafts reaction | (iv) CH_3MgBr |
| e) Wurtz reaction | (v) NaOH |

(A) a) - (iv); b) - (iii); c) - (ii); d) - (i); e) - (v)

(B) a) - (v); b) - (ii); c) - (iii); d) - (iv); e) - (i)

(C) a) - (iv); b) - (i); c) - (v); d) - (iii); e) - (ii)

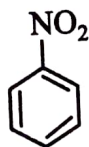
(D) a) - (ii); b) - (iii); c) - (i); d) - (v); e) - (iv)

(E) a) - (iv); b) - (iii); c) - (v); d) - (i); e) - (ii)

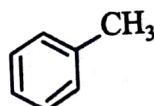
83. Which compound will not take part in the Friedel-Crafts acylation ?



i



ii



iii

(A) ii and iii

(B) only iii

(C) i and iii


(D) only ii

(E) only i

Space for rough work

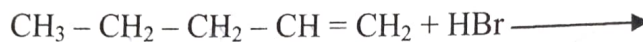
[P.T.O.]

84. Identify 1 and 2 in the following reaction :



- (A) $\text{H}_3\text{C}-\text{CH}_3$ and $\text{CH}_3\text{C}(\text{OH})\text{CH}_3$ (B) CH_3MgBr and CH_3CHO
 (C) CH_3MgBr and $\text{CH}_3\text{C}(\text{OH})\text{CH}_3$ (D) CH_4 and CH_3CHO
 (E) $\text{H}_3\text{C}-\text{CH}_3$ and $\text{CH}_3\text{C}(\text{OH})\text{CH}_3$

85. What is the major product in the following reaction ?



- (A) $\text{CH}_3-\text{CH}_2-\text{CH}_2-\text{CH}_2-\text{CH}_2-\text{Br}$ (B) $\text{CH}_3-\text{CH}_2-\text{CH}_2-\underset{\text{Br}}{\text{CH}}-\text{CH}_3$
 (C) $\text{CH}_3-\text{CH}_2-\text{CH}_2-\underset{\text{Br}}{\overset{\text{Br}}{\text{C}}}-\text{CH}_3$ (D) $\text{CH}_3-\text{CH}_2-\text{CH}_2-\underset{\text{Br}}{\text{CH}}-\text{CH}_2-\text{Br}$
 (E) $\text{CH}_3-\text{CH}_2-\text{CH}_2-\text{CH}_2-\text{CH}_3$

Space for rough work

86. The number of electrons in one mole of methane :
- (A) 6.023×10^{23} (B) 60.23×10^{23} (C) 0.6023×10^{23}
(D) 602.3×10^{23} (E) 6023×10^{23}
87. Which of the following statement cannot be explained by the proposals of Dalton's atomic theory ?
- (A) Reorganisation of atoms in chemical reactions
(B) Identical properties of all atoms of given element
(C) The reason for combining of atoms
(D) Formation of compounds from the combination of elements in a fixed ratio
(E) Matter consists of individual atoms
88. The correct order of variation of first ionisation enthalpies is :
- (A) $\text{Ne} < \text{Xe} > \text{Li} > \text{K} < \text{Cs}$ (B) $\text{Xe} < \text{Li} < \text{K} < \text{Cs} < \text{Ne}$
(C) $\text{Cs} > \text{K} > \text{Li} > \text{Xe} > \text{Ne}$ (D) $\text{Li} > \text{K} > \text{Cs} > \text{Ne} > \text{Xe}$
(E) $\text{Ne} > \text{Xe} > \text{Li} > \text{K} > \text{Cs}$
89. Which of the following statements is **WRONG** ?
- (A) The bond order of He_2 is zero; so He_2 molecule is unstable.
(B) Li_2 molecule is diamagnetic.
(C) O_2 molecule contains two unpaired electron and is paramagnetic.
(D) C_2 molecule is paramagnetic in vapour phase.
(E) H_2 molecule has no unpaired electrons.

Space for rough work

90. Find the **WRONG** statement from the following lists :

- (A) Dipole-dipole interaction exists in the HCl molecules.
(B) Three states of matter are due to the balance between intermolecular forces and the thermal energy of the molecules.
(C) According to kinetic theory of gases, the collisions of gas molecules are perfectly elastic.
(D) Strength of hydrogen bond depends on the coulombic interaction between lone pair of electrons of one atom and the hydrogen atom.
(E) Aqueous tension of water decreases with the increase in temperature.

91. The hybridisation of Xe in XeF₂ is :

- (A) sp³ (B) sp³d (C) sp³d² (D) sp²d (E) sp²

92. Which of the following compounds is known as inorganic benzene ?

- (A) B₆H₆ (B) C₅H₅B (C) C₃N₃H₃
(D) B₃N₃H₆ (E) BF₃

93. The number of S-S bonds and the number of lone pairs in S₈ molecule, respectively, are :

- (A) 8, 8 (B) 8, 16 (C) 16, 8 (D) 8, 4 (E) 4, 8

94. The shape of XeOF₄ molecule is :

- (A) Square pyramid (B) Planar (C) Trigonal bipyramid
(D) Pentagonal bipyramid (E) Linear

95. The geometry of [NiCl₄]²⁻ and [Ni(CN)₄]²⁻ ions are :

- (A) Both tetrahedral (B) Both square planar
(C) Both octahedral (D) Square planar and tetrahedral, respectively
(E) Tetrahedral and square planar, respectively

Space for rough work

96. Which of the following compounds extensively has Mg as an important element in the living world ?

- (A) Haemoglobin (B) ATP (C) Florigen
(D) Ferritin (E) Chlorophyll

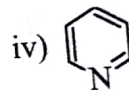
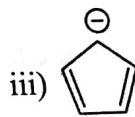
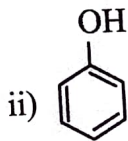
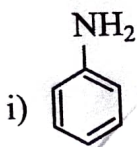
97. The basic character of the hydrides of 15 group elements decreases in the order :

- (A) $\text{NH}_3 > \text{PH}_3 > \text{AsH}_3 > \text{SbH}_3$ (B) $\text{SbH}_3 > \text{AsH}_3 > \text{PH}_3 > \text{NH}_3$
(C) $\text{NH}_3 > \text{AsH}_3 > \text{PH}_3 > \text{SbH}_3$ (D) $\text{NH}_3 > \text{SbH}_3 > \text{PH}_3 > \text{AsH}_3$
(E) $\text{SbH}_3 > \text{PH}_3 > \text{AsH}_3 > \text{NH}_3$

98. Which of the following contains sp hybridised carbon atom ?

- (A) $\text{CH}_3\text{-CH}=\text{CH-CH}_3$ (B) $\text{CH}_3\text{-C}\equiv\text{C-CH}_3$
(C) $\text{CH}_3\text{-CH}_3$ (D) CHCl_3
(E) $\text{CH}_3\text{-CH}_2\text{-Cl}$

99. Which are the non-benzenoid aromatic compounds in the following ?



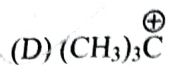
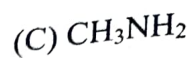
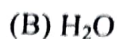

- (A) iii and iv (B) i and iv (C) ii and iv
(D) i and iv (E) ii and iii

100. Which of the following is the most stable carbocation ?

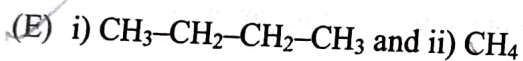
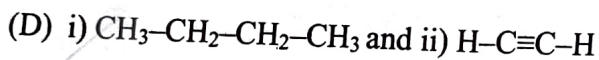
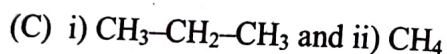
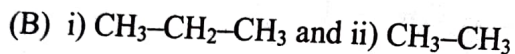
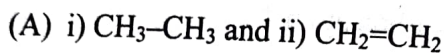
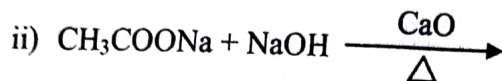
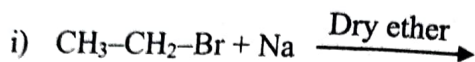
- (A) $\text{CH}_3\text{-CH}_2^+$ (B) CH_3^+ (C) $\text{CH}_3\text{-CH}^+\text{-CH}_3$
(D) $(\text{CH}_3)_3\text{C}^+$ (E) $\text{CH}_3\text{-CH}_2\text{-CH}_2^+$

Space for rough work

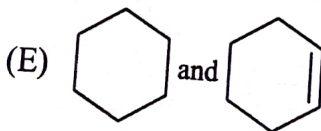
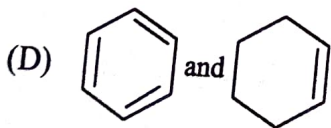
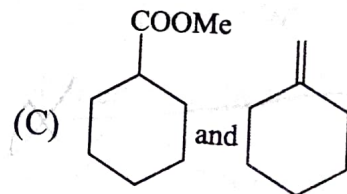
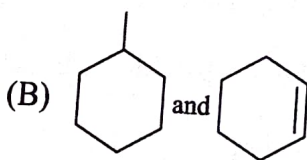
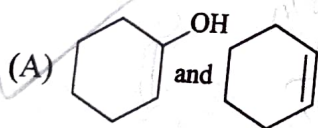
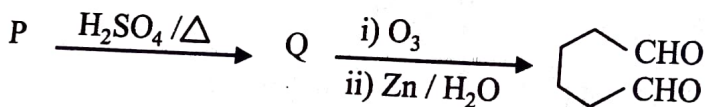
101. Which of the following cannot act as a nucleophile ?



102. What are the products of the following reactions ?



103. Find the compounds P and Q in the following reactions :

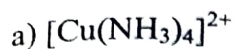


Space for rough work

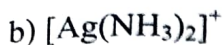
104. Match the following complexes (P) with the geometry (Q) :

(P)

(Q)



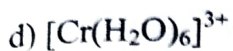
(i) Tetrahedral



(ii) Octahedral



(iii) Square planar



(iv) Trigonal bipyramidal



(v) Linear

(A) a) – (ii); b) – (iii); c) – (i); d) – (iv); e) – (v)

(B) a) – (iii); b) – (v); c) – (iv); d) – (ii); e) – (i)

(C) a) – (iv); b) – (iii); c) – (v); d) – (i); e) – (ii)

(D) a) – (v); b) – (iv); c) – (ii); d) – (iii); e) – (i)

(E) a) – (iv); b) – (ii); c) – (iii); d) – (v); e) – (i)

105. The tetrahedral crystal field splitting is only _____ of the octahedral splitting.

(A) $\frac{1}{9}$

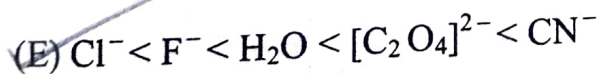
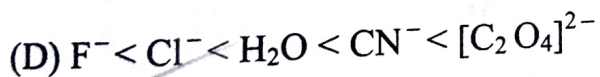
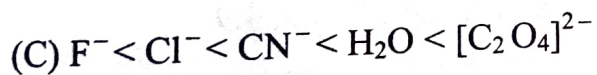
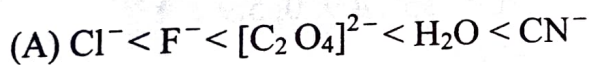
(B) $\frac{2}{9}$

(C) $\frac{3}{9}$

(D) $\frac{4}{9}$

(E) $\frac{5}{9}$

106. Which order is correct in spectrochemical series of ligands :



Space for rough work