

# Telangana State Council Higher Education

## Notations :

- 1.Options shown in green color and with ✓ icon are correct.
- 2.Options shown in red color and with ✗ icon are incorrect.

<b>Question Paper Name :</b>	EDCET URDU 2024 23rd May 2024 Shift 2
<b>Subject Name :</b>	EDCET URDU 2024
<b>Creation Date :</b>	2024-05-23 17:24:41
<b>Duration :</b>	120
<b>Total Marks :</b>	150
<b>Display Marks:</b>	No
<b>Share Answer Key With Delivery Engine :</b>	Yes
<b>Actual Answer Key :</b>	Yes
<b>Calculator :</b>	None
<b>Magnifying Glass Required? :</b>	No
<b>Ruler Required? :</b>	No
<b>Eraser Required? :</b>	No
<b>Scratch Pad Required? :</b>	No
<b>Rough Sketch/Notepad Required? :</b>	No
<b>Protractor Required? :</b>	No
<b>Show Watermark on Console? :</b>	Yes
<b>Highlighter :</b>	No
<b>Auto Save on Console?</b>	Yes
<b>Change Font Color :</b>	No
<b>Change Background Color :</b>	No
<b>Change Theme :</b>	No
<b>Help Button :</b>	No

**Show Reports :** No  
**Show Progress Bar :** No

## **TS EdCET**

**Group Number :** 1  
**Group Id :** 3819067  
**Group Maximum Duration :** 0  
**Group Minimum Duration :** 120  
**Show Attended Group? :** No  
**Edit Attended Group? :** No  
**Break time :** 0  
**Group Marks :** 150  
**Is this Group for Examiner? :** No  
**Examiner permission :** Cant View  
**Show Progress Bar? :** No

## **Subject**

**Section Id :** 38190631  
**Section Number :** 1  
**Section type :** Online  
**Mandatory or Optional :** Mandatory  
**Number of Questions :** 60  
**Number of Questions to be attempted :** 60  
**Section Marks :** 60  
**Enable Mark as Answered Mark for Review and Clear Response :** Yes  
**Maximum Instruction Time :** 0  
**Sub-Section Number :** 1

Sub-Section Id : 38190637

Question Shuffling Allowed : Yes

Is Section Default? : null

Question Number : 1 Question Id : 381906907 Question Type : MCQ Option Shuffling : No  
Display Question Number : Yes Is Question Mandatory : No Calculator : None Response Time  
: N.A Think Time : N.A Minimum Instruction Time : 0

Correct Marks : 1 Wrong Marks : 0

$$3 + \frac{1}{4 + \frac{1}{5 + \frac{1}{2}}} =$$

Options :

1. ✓  $\frac{149}{46}$

2. ✗  $\frac{147}{48}$

3. ✗  $\frac{51}{152}$

4. ✗  $\frac{151}{30}$

Question Number : 2 Question Id : 381906908 Question Type : MCQ Option Shuffling : No  
Display Question Number : Yes Is Question Mandatory : No Calculator : None Response Time  
: N.A Think Time : N.A Minimum Instruction Time : 0

Correct Marks : 1 Wrong Marks : 0

If  $(16)^{2x+3} = (64)^{x+3}$ , then  $4^{2x+5} =$   
 $= 4^{2x+5}$  اگر  $(16)^{2x+3} = (64)^{x+3}$  تب

Options :

1. ✖  $4^7$

2. ✖  $4^{13}$

3. ✖  $4^9$

4. ✔  $4^{11}$

Question Number : 3 Question Id : 381906909 Question Type : MCQ Option Shuffling : No  
Display Question Number : Yes Is Question Mandatory : No Calculator : None Response Time  
: N.A Think Time : N.A Minimum Instruction Time : 0

Correct Marks : 1 Wrong Marks : 0

The number of positive integers less than 50 and relatively prime to 50 is

50 سے کم مثبت صحیح اعداد اور 50 کے اضافی مفرد کا عدد ہوگا

Options :

1. ✖ 40

2. ✖ 30

3. ✔ 20

4. ✖ 10

Question Number : 4 Question Id : 381906910 Question Type : MCQ Option Shuffling : No  
Display Question Number : Yes Is Question Mandatory : No Calculator : None Response Time  
: N.A Think Time : N.A Minimum Instruction Time : 0

Correct Marks : 1 Wrong Marks : 0

If A's salary is 50% more than that of B, then how much percent is B's salary less than that of A?

اگر A کی تنخواہ B سے 50% زیادہ ہو تب B کی تنخواہ A سے کتنے فیصد کم ہوگی

Options :

1. ✘ 50

2. ✘ 25

3. ✔  $33\frac{1}{3}$

4. ✘  $37\frac{1}{3}$

Question Number : 5 Question Id : 381906911 Question Type : MCQ Option Shuffling : No  
Display Question Number : Yes Is Question Mandatory : No Calculator : None Response Time  
: N.A Think Time : N.A Minimum Instruction Time : 0

Correct Marks : 1 Wrong Marks : 0

Let  $\mathbb{N}$  denote the set of all natural numbers.

Also let  $S = \{m \in \mathbb{N} | 1 \leq m \leq 100\}$

and  $A = \{m \in S | m \text{ is multiple of } 2\}$

$B = \{m \in S | m \text{ is multiple of } 3\}$ .

Then the number of elements in the set  $A \cup B$  is

مان لیجئے  $\mathbb{N}$  ایک تمام طبعی اعداد کے سیٹ کو ظاہر کرتا ہے اور مان لیجئے

$A =$  اور  $S = \{m \in \mathbb{N} | 1 \leq m \leq 100\}$

$B = \{m \in S | 2, m \text{ ضعف کا ہو}\}$ ,

$\{m \in S | 3, m \text{ ضعف کا ہو}\}$ .

تب  $A \cup B$  میں ارکان کی تعداد ہوگی

Options :

1. ✘ 83

2. ✘ 16

3. ✘ 33

4. ✔ 67

Question Number : 6 Question Id : 381906912 Question Type : MCQ Option Shuffling : No

Display Question Number : Yes Is Question Mandatory : No Calculator : None Response Time

: N.A Think Time : N.A Minimum Instruction Time : 0

Correct Marks : 1 Wrong Marks : 0

The sum of digits in the number  $10^{32} - 84$  is

عدد  $10^{32} - 84$  کے ہندسوں کا مجموعہ ہوگا

Options :

1. ✘ 278

2. ✓ 277

3. ✗ 267

4. ✗ 287

Question Number : 7 Question Id : 381906913 Question Type : MCQ Option Shuffling : No  
Display Question Number : Yes Is Question Mandatory : No Calculator : None Response Time  
: N.A Think Time : N.A Minimum Instruction Time : 0

Correct Marks : 1 Wrong Marks : 0

The square root of  $\frac{a^2}{4} + \frac{1}{a^2} - \frac{1}{a} + \frac{a}{2} - \frac{3}{4}$  is

جزء المربع ہوگا  $\frac{a^2}{4} + \frac{1}{a^2} - \frac{1}{a} + \frac{a}{2} - \frac{3}{4}$

Options :

1. ✓  $\frac{a}{2} - \frac{1}{a} + \frac{1}{2}$

2. ✗  $\frac{a}{2} + \frac{1}{a} + 1$

3. ✗  $a + \frac{1}{2a} + \frac{1}{2}$

4. ✗  $a + \frac{1}{2a} + 2$

Question Number : 8 Question Id : 381906914 Question Type : MCQ Option Shuffling : No  
Display Question Number : Yes Is Question Mandatory : No Calculator : None Response Time  
: N.A Think Time : N.A Minimum Instruction Time : 0

Correct Marks : 1 Wrong Marks : 0

$$\frac{(a^2 - b^2)^3 + (b^2 - c^2)^3 + (c^2 - a^2)^3}{(a - b)^3 + (b - c)^3 + (c - a)^3} =$$

Options :

1. ✘  $(a - b)(b - c)(c - a)$
2. ✔  $(a + b)(b + c)(c + a)$
3. ✘  $(a^2 + b^2)(b^2 + c^2)(c^2 + a^2)$
4. ✘  $(a^3 + b^3)(b^3 + c^3)(c^3 + a^3)$

Question Number : 9 Question Id : 381906915 Question Type : MCQ Option Shuffling : No  
Display Question Number : Yes Is Question Mandatory : No Calculator : None Response Time  
: N.A Think Time : N.A Minimum Instruction Time : 0

Correct Marks : 1 Wrong Marks : 0

If  $\alpha$  and  $\beta$  are roots of the equation  $2x^2 - 5x + 2 = 0$ , then  $\alpha^4 + \beta^4 =$

اگر  $\alpha$  اور  $\beta$  مساوات  $2x^2 - 5x + 2 = 0$  کے ریشے ہوں تب  $\alpha^4 + \beta^4 =$

Options :

1. ✘  $\frac{126}{25}$
2. ✘  $\frac{82}{9}$
- 3.



✓  $\frac{257}{16}$

4. ✗  $\frac{217}{36}$

Question Number : 10 Question Id : 381906916 Question Type : MCQ Option Shuffling : No  
Display Question Number : Yes Is Question Mandatory : No Calculator : None Response Time  
: N.A Think Time : N.A Minimum Instruction Time : 0

Correct Marks : 1 Wrong Marks : 0

In a  $\triangle ABC$ ,  $BC = AB$  and  $\angle B = 80^\circ$ , then  $\angle A =$

$\angle A =$   $\angle B = 80^\circ$  اور  $BC = AB$  میں  $\triangle ABC$

Options :

1. ✗  $100^\circ$

2. ✗  $55^\circ$

3. ✗  $60^\circ$

4. ✓  $50^\circ$

Question Number : 11 Question Id : 381906917 Question Type : MCQ Option Shuffling : No  
Display Question Number : Yes Is Question Mandatory : No Calculator : None Response Time  
: N.A Think Time : N.A Minimum Instruction Time : 0

Correct Marks : 1 Wrong Marks : 0

The area of the figure formed by joining the midpoints of the sides of rectangle of sides 20 cm and 18 cm is (in  $\text{cm}^2$ )

اس شکل کا رقبہ جو مستطیل کے ضلعوں کے وسطی نقاط کو ملانے سے بنتا ہے مستطیل کے ضلع 20 سم 18 سم ہوں (سمروں میں)

Options :

1. ✘ 90

2. ✘ 360

3. ✔ 180

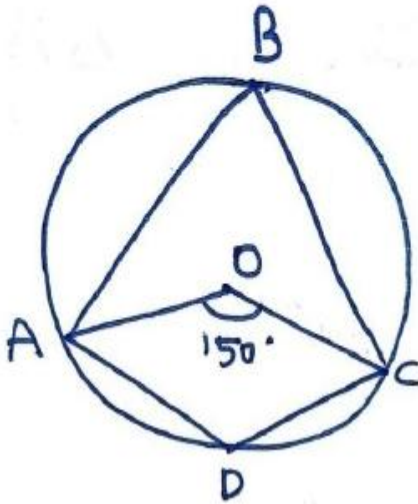
4. ✘ 270

Question Number : 12 Question Id : 381906918 Question Type : MCQ Option Shuffling : No  
Display Question Number : Yes Is Question Mandatory : No Calculator : None Response Time  
: N.A Think Time : N.A Minimum Instruction Time : 0

Correct Marks : 1 Wrong Marks : 0

In the figure, if O is the centre of the circle and  $\angle AOC = 150^\circ$ , then  $\angle ADC =$

دی گئی شکل میں اگر O دائرے کا مرکز ہو اور  $\angle AOC = 150^\circ$  تب  $\angle ADC =$



Options :

1. ✘  $75^\circ$

2. ✔  $105^\circ$

3. ✖  $50^\circ$

4. ✖  $30^\circ$

Question Number : 13 Question Id : 381906919 Question Type : MCQ Option Shuffling : No  
Display Question Number : Yes Is Question Mandatory : No Calculator : None Response Time  
: N.A Think Time : N.A Minimum Instruction Time : 0

Correct Marks : 1 Wrong Marks : 0

If the volumes of two cubes are in ratio 64:125, then the ratio of their surface areas is

اگر دو مکعبوں کے حجموں کی نسبت 64:125 ہو تب ان کے سطحی رقبوں کی نسبت ہوگی

Options :

1. ✔ 16:25

2. ✖ 25:16

3. ✖ 4:5

4. ✖ 5:4

Question Number : 14 Question Id : 381906920 Question Type : MCQ Option Shuffling : No  
Display Question Number : Yes Is Question Mandatory : No Calculator : None Response Time  
: N.A Think Time : N.A Minimum Instruction Time : 0

Correct Marks : 1 Wrong Marks : 0

If A (2, k), B (4,6) and C (8,8) are collinear, then k =

اگر A (2, k)، B (4,6) اور C (8,8) ہم خط ہوں تب k کی قدر

Options :

1. ✘ 2

2. ✘ 4

3. ✘ 3

4. ✔ 5

Question Number : 15 Question Id : 381906921 Question Type : MCQ Option Shuffling : No  
Display Question Number : Yes Is Question Mandatory : No Calculator : None Response Time  
: N.A Think Time : N.A Minimum Instruction Time : 0

Correct Marks : 1 Wrong Marks : 0

The slope of the line which is perpendicular to the line joining the points  
A (3,4) and B (5,9) is

نقطہ A (3,4) اور B (5,9) کو ملانے والے خط پر عمودی خط کا ڈھال ہوگا

Options :

1. ✘  $\frac{2}{5}$

2. ✔  $-\frac{2}{5}$

3. ✘  $\frac{5}{2}$

4. ✘  $-\frac{5}{2}$

Question Number : 16 Question Id : 381906922 Question Type : MCQ Option Shuffling : No  
Display Question Number : Yes Is Question Mandatory : No Calculator : None Response Time  
: N.A Think Time : N.A Minimum Instruction Time : 0

Correct Marks : 1 Wrong Marks : 0

$$5+9+13+\dots+97 =$$

Options :

1. ✘ 1226

2. ✘ 1214

3. ✔ 1224

4. ✘ 1210

Question Number : 17 Question Id : 381906923 Question Type : MCQ Option Shuffling : No  
Display Question Number : Yes Is Question Mandatory : No Calculator : None Response Time  
: N.A Think Time : N.A Minimum Instruction Time : 0

Correct Marks : 1 Wrong Marks : 0

$$\frac{\sec x + 1 - \tan x}{\tan x - \sec x + 1} =$$

Options :

1. ✔  $\frac{1 + \cos x}{\sin x}$

2. ✘  $\frac{1 + \tan x}{\cos x}$

3. ✘  $\frac{1 + \tan x}{1 - \tan x}$

4. ✘  $\frac{1 - \tan x}{1 + \tan x}$

Question Number : 18 Question Id : 381906924 Question Type : MCQ Option Shuffling : No  
Display Question Number : Yes Is Question Mandatory : No Calculator : None Response Time  
: N.A Think Time : N.A Minimum Instruction Time : 0

Correct Marks : 1 Wrong Marks : 0

If  $\cos x + \sin x = \sqrt{2} \cos x$ , then  $\cos x - \sin x =$   
 $\cos x - \sin x$  اگر  $\cos x + \sin x = \sqrt{2} \cos x$  ہے

Options :

1. ✘  $\sqrt{2} \tan x$

2. ✔  $\sqrt{2} \sin x$

3. ✘  $\sqrt{2} \operatorname{cosec} x$

4. ✘  $\sqrt{2} \sec x$

Question Number : 19 Question Id : 381906925 Question Type : MCQ Option Shuffling : No  
Display Question Number : Yes Is Question Mandatory : No Calculator : None Response Time  
: N.A Think Time : N.A Minimum Instruction Time : 0

Correct Marks : 1 Wrong Marks : 0

The arithmetic mean of the cubes of first 11 natural numbers is

پہلے 11 طبعی اعداد کے مکعبوں کا اوسط حسابیہ ہوگا

Options :

1. ✖ 369

2. ✔ 396

3. ✖ 376

4. ✖ 366

Question Number : 20 Question Id : 381906926 Question Type : MCQ Option Shuffling : No  
Display Question Number : Yes Is Question Mandatory : No Calculator : None Response Time  
: N.A Think Time : N.A Minimum Instruction Time : 0

Correct Marks : 1 Wrong Marks : 0

If two dice are thrown simultaneously, then the probability of getting a sum  
of at least 9 is

اگر دو پانسوں کو ایک ساتھ ڈالا جائے تب کم از کم مجموعہ 9 ہونے کا کیا قیاس ہوگا

Options :

1. ✖  $\frac{1}{4}$

2. ✖  $\frac{1}{6}$

3. ✔  $\frac{5}{18}$

4. ✖  $\frac{5}{6}$

Question Number : 21 Question Id : 381906927 Question Type : MCQ Option Shuffling : No  
Display Question Number : Yes Is Question Mandatory : No Calculator : None Response Time  
: N.A Think Time : N.A Minimum Instruction Time : 0

Correct Marks : 1 Wrong Marks : 0

The focal length of the plano-convex lens is \_\_\_\_\_ when its radius of curvature of the surface is R and n is the refractive index of the lens.

مستوی محدب عدسہ کا ماسکی طول \_\_\_\_\_ ہے جبکہ اسکی سطح کا منحنی نصف قطر R ہے اور عدسہ کا انعطاف نما n ہے

Options :

1. ✘  $f = R$
2. ✘  $f = R/2$
3. ✔  $f = R/(n-1)$
4. ✘  $f = (n-1)/R$

Question Number : 22 Question Id : 381906928 Question Type : MCQ Option Shuffling : No  
Display Question Number : Yes Is Question Mandatory : No Calculator : None Response Time  
: N.A Think Time : N.A Minimum Instruction Time : 0

Correct Marks : 1 Wrong Marks : 0

Which one of the following four elements is more electronegative?

ذیل کے چار عناصر میں سب سے زیادہ برقی منفیت کس کی ہے؟

Options :

Sodium

1. ✘ سوڈیم

Oxygen

2. ✔ آکسیجن



Magnesium

3. ✘ میگنیشیم

Calcium

4. ✘ کیلیم

Question Number : 23 Question Id : 381906929 Question Type : MCQ Option Shuffling : No  
Display Question Number : Yes Is Question Mandatory : No Calculator : None Response Time  
: N.A Think Time : N.A Minimum Instruction Time : 0

Correct Marks : 1 Wrong Marks : 0

Kilogram-meter per second squared is equivalent to

کلوگرام میٹر فی سکینڈ مربع کس کے مساوی ہے؟

Options :

1 Joule

1. ✘ اجول

1 Watt

2. ✘ 1 واٹ

1 Pascal

3. ✘ 1 پاسکل

1 Newton

4. ✔ 1 نیوٹن

Question Number : 24 Question Id : 381906930 Question Type : MCQ Option Shuffling : No  
Display Question Number : Yes Is Question Mandatory : No Calculator : None Response Time  
: N.A Think Time : N.A Minimum Instruction Time : 0

Correct Marks : 1 Wrong Marks : 0

Newton used the word 'mass in motion' to represent

نیوٹن نے لفظ ماس ان موشن، کا استعمال کس کو ظاہر کرنے کے لئے کیا تھا؟

Options :

Linear momentum

1. ✓ خطی حرکت

Inertia of motion

2. ✗ سکونی حرکت

Velocity

3. ✗ رفتار

Inertia at rest

4. ✗ جنبش سکونی

Question Number : 25 Question Id : 381906931 Question Type : MCQ Option Shuffling : No  
Display Question Number : Yes Is Question Mandatory : No Calculator : None Response Time  
: N.A Think Time : N.A Minimum Instruction Time : 0

Correct Marks : 1 Wrong Marks : 0

Mirage is a best example for the phenomenon of

سراب اس مظہر کے لئے ایک بہترین مثال ہے

Options :

Reflection

1. ✗ انعکاس

Diffraction

2. ✘ انکسار

Total internal reflection

3. ✔ مکمل داخلی انعکاس

Shift

4. ✘ شفٹ

Question Number : 26 Question Id : 381906932 Question Type : MCQ Option Shuffling : No  
Display Question Number : Yes Is Question Mandatory : No Calculator : None Response Time  
: N.A Think Time : N.A Minimum Instruction Time : 0

Correct Marks : 1 Wrong Marks : 0

The reaction of the formation hydrogen chloride from hydrogen and chloride represents the following type of chemical reaction

ہائیڈروجن اور کلورائیڈ کے استعمال سے تشکیل پانے والا ہائیڈروجن کلورائیڈ ذیل میں کس کیمیائی تعامل کا اظہار کرتا ہے

Options :

Decomposition

1. ✘ اصل جز میں اجزاء کو علیحدہ کرنا

Displacement

2. ✘ علیحدگی

Combination

3. ✔ اتصالی

4.

## Double-displacement

✖ اصل جز سے اجزاء کو دو بارہ علیحدہ کرنے کا عمل

Question Number : 27 Question Id : 381906933 Question Type : MCQ Option Shuffling : No  
Display Question Number : Yes Is Question Mandatory : No Calculator : None Response Time  
: N.A Think Time : N.A Minimum Instruction Time : 0

Correct Marks : 1 Wrong Marks : 0

Which of the following is not an electrolyte?

ذیل میں کون برق پاشیدہ نہیں ہے

Options :

Sulphuric acid

1. ✖ سلفیورک ترشہ

Lemon juice

2. ✖ لیمو کارس

Tamarind juice

3. ✖ املی کارس

Detergent solution

4. ✓ مصفی کا محلول

Question Number : 28 Question Id : 381906934 Question Type : MCQ Option Shuffling : No  
Display Question Number : Yes Is Question Mandatory : No Calculator : None Response Time  
: N.A Think Time : N.A Minimum Instruction Time : 0

Correct Marks : 1 Wrong Marks : 0

What happens when a glass rod is rubbed with a piece of silk cloth?

ایک شیشہ کی سلاخ کو ریشم کے کپڑے سے رگڑنے پر کیا واقعہ ہوگا؟

Options :

Rod and the cloth acquire positive charge

سلاخ اور کپڑا مثبت بار حاصل کریں گے

1. ✘

Rod becomes positively charged while the cloth has a negative charge

سلاخ مثبت بار حاصل کرے گا جبکہ کپڑا منفی بار کا حامل ہوگا

2. ✔

Rod and the cloth both acquire negative charge

سلاخ اور کپڑا دونوں منفی بار حاصل کریں گے

3. ✘

Rod becomes negatively charged while the cloth has a positive charge

سلاخ منفی بار ہو جائیگا جبکہ کپڑا مثبت بار ہے گا

4. ✘

Question Number : 29 Question Id : 381906935 Question Type : MCQ Option Shuffling : No

Display Question Number : Yes Is Question Mandatory : No Calculator : None Response Time

: N.A Think Time : N.A Minimum Instruction Time : 0

Correct Marks : 1 Wrong Marks : 0

$\alpha$  - particles are made up of the following primary particle \_\_\_\_\_

$\alpha$ -ذرات ذیل کے \_\_\_\_\_ ابتدائی ذرات سے بنتے ہیں

Options :

2 Protons and 2 Neutrons

2 پروٹان اور 2 نیوٹران

1. ✔

2 Protons and 2 Electrons

2. ✘ 2 پروٹان اور 2 الیکٹران

2 Neutrons and 2 Positrons

3. ✘ 2 نیوٹران اور 2 پوزیٹران

2 Protons and 2 Neutrinos

4. ✘ 2 پروٹان اور 2 نیوٹریناس

Question Number : 30 Question Id : 381906936 Question Type : MCQ Option Shuffling : No  
Display Question Number : Yes Is Question Mandatory : No Calculator : None Response Time  
: N.A Think Time : N.A Minimum Instruction Time : 0

Correct Marks : 1 Wrong Marks : 0

Which of the following Element does not belong to the  
VIIA group (Periodic table)\_\_\_\_\_

(دوری جدول) میں VIIA گروپ سے ذیل کا کونسا عنصر تعلق نہیں رکھتا

Options :

Chlorine

1. ✘ کلورین

Bromine

2. ✘ برومین

Iodine

3. ✘ آئیوڈین

4.

## Radon

✓ ریڈان

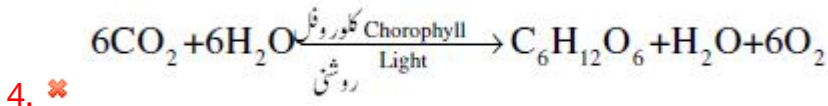
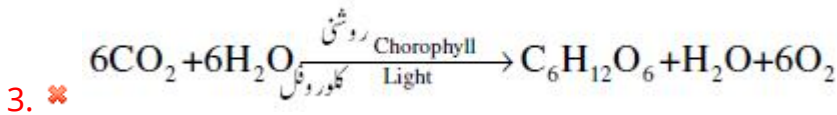
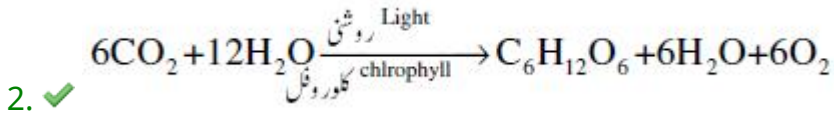
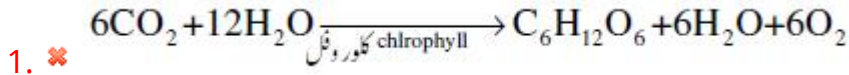
Question Number : 31 Question Id : 381906937 Question Type : MCQ Option Shuffling : No  
Display Question Number : Yes Is Question Mandatory : No Calculator : None Response Time  
: N.A Think Time : N.A Minimum Instruction Time : 0

Correct Marks : 1 Wrong Marks : 0

Photosynthesis process can be represented as the following:

شعاعی ترکیب کے عمل کو ذیل کی مساوات سے ظاہر کیا جاسکتا ہے

Options :



Question Number : 32 Question Id : 381906938 Question Type : MCQ Option Shuffling : No  
Display Question Number : Yes Is Question Mandatory : No Calculator : None Response Time  
: N.A Think Time : N.A Minimum Instruction Time : 0

Correct Marks : 1 Wrong Marks : 0

The digestive juice without enzyme is

وہ ہضمی رس جو خامروں کے بغیر ہے

Options :

Gastric juice

1. ✘ معدنی رس

Pancreatic juice

2. ✘ لیلی رس

Bile juice

3. ✔ پت رس

Saliva

4. ✘ لعاب

Question Number : 33 Question Id : 381906939 Question Type : MCQ Option Shuffling : No  
Display Question Number : Yes Is Question Mandatory : No Calculator : None Response Time  
: N.A Think Time : N.A Minimum Instruction Time : 0

Correct Marks : 1 Wrong Marks : 0

What is the college order of the Waste Management hierarchy?

ذیل میں ویسٹ مینجمنٹ مراتب کو صحیح ترتیب میں لکھئے

i. Reduce

تخلیل کرنا

ii. Recycle

ریسائیکل کرنا

iii. Recover

بحال کرنا

iv. Reuse

دوبارہ استعمال کرنا

Options :



1. ✓ i, iv, ii, iii

2. ✗ i, ii, iii, iv

3. ✗ i, ii, iv, iii

4. ✗ ii, i, iii, iv

Question Number : 34 Question Id : 381906940 Question Type : MCQ Option Shuffling : No  
Display Question Number : Yes Is Question Mandatory : No Calculator : None Response Time  
: N.A Think Time : N.A Minimum Instruction Time : 0

Correct Marks : 1 Wrong Marks : 0

The following crop that grow in the rainy season

بارش کے موسم میں کاشت کی جانے والی فصل کونسی ہے

Options :

Black gram

1. ✓ چنا

Maize

2. ✗ مکئی

Wheat

3. ✗ گہوں

Coriander

4. ✗ کو تیر

Question Number : 35 Question Id : 381906941 Question Type : MCQ Option Shuffling : No  
Display Question Number : Yes Is Question Mandatory : No Calculator : None Response Time  
: N.A Think Time : N.A Minimum Instruction Time : 0

Correct Marks : 1 Wrong Marks : 0

Fat soluble vitamins are

چربی میں حل پذیر حیاتین ہیں

Options :

Vitamin A, D, E and K

1. ✓

وٹامن A، D، E اور K

Vitamin A, B-complex, Vitamin C

2. ✘

وٹامن A، B، C کا کمپلکس، وٹامن C

Vitamin B-complex, Vitamin C, Vitamin K

3. ✘

وٹامن B، C، K کا کمپلکس، وٹامن C، وٹامن K

Vitamin A, D, E

4. ✘

وٹامن A، D، E

Question Number : 36 Question Id : 381906942 Question Type : MCQ Option Shuffling : No  
Display Question Number : Yes Is Question Mandatory : No Calculator : None Response Time  
: N.A Think Time : N.A Minimum Instruction Time : 0

Correct Marks : 1 Wrong Marks : 0

Match the following

ذیل کے جوڑ لگائیے

- |               |   |                                 |
|---------------|---|---------------------------------|
| i. Niacin     | - | (a) Nerves Disorders            |
| نیاسن         | - | عصبی عدم ترتیب                  |
| ii. Tocoferol | - | (b) pellagra                    |
| ٹوکوفیرول     | - | پیلاگرا                         |
| iii. Biotin   | - | (c) Fertility related disorders |
| بائیوٹن       | - | باروری سے متعلق بے ترتیبی       |
| iv. Thiamin   | - | (d) Beriberi                    |
| تھیامین       | - | بیری بیری                       |

Options :

1. ✘ i-c, ii-d, iii-a, iv-b
2. ✘ i-b, ii-a, iii-d, iv-c
3. ✘ i-b, ii-a, iii-c, iv-d
4. ✔ i-b, ii-c, iii-a, iv-d

Question Number : 37 Question Id : 381906943 Question Type : MCQ Option Shuffling : No  
Display Question Number : Yes Is Question Mandatory : No Calculator : None Response Time  
: N.A Think Time : N.A Minimum Instruction Time : 0

Correct Marks : 1 Wrong Marks : 0

Complete and irreversible kidney failure is called

گردوں کا مکمل طور پر ناقابل تبدیل ہونا کہلاتا ہے

Options :

Excretion renal Disease

1. ✘ گردوں کی اخراجی بیماری

End stage Reverse disease

2. ✘ تبدیلی کے آخری مرحلے کی بیماری

End stage renal disease

3. ✔ آخری مرحلے کا گردوں کا مرض

Excretion stage renal disease

4. ✘ گردوں کی بیماری کا اخراجی مرحلہ

Question Number : 38 Question Id : 381906944 Question Type : MCQ Option Shuffling : No  
Display Question Number : Yes Is Question Mandatory : No Calculator : None Response Time  
: N.A Think Time : N.A Minimum Instruction Time : 0

Correct Marks : 1 Wrong Marks : 0

The Government established the following to supply medicine to HIV patients

HIV مریضوں کو حکومت کی جانٹ سے قائم کردہ ادویات کی سربراہی کا مرکز

Options :

1. ✔ ART

2. ✘ AHI

3. ✘ AHT

4. ✘ ARH

Question Number : 39 Question Id : 381906945 Question Type : MCQ Option Shuffling : No  
Display Question Number : Yes Is Question Mandatory : No Calculator : None Response Time

: N.A Think Time : N.A Minimum Instruction Time : 0

Correct Marks : 1 Wrong Marks : 0

Kawal sanctuary is located in the following District:

کاؤل سینکچوری ذیل کے کس ضلع میں قائم ہے

Options :

Jayashankar Bhupalapalli

1. ✘

جیاشنکر بھوپال پالی

Karimnagar

2. ✘

کریم نگر

Warangal Rural

3. ✘

ورنگل رورل

Adilabad

4. ✔

عادل آباد

Question Number : 40 Question Id : 381906946 Question Type : MCQ Option Shuffling : No

Display Question Number : Yes Is Question Mandatory : No Calculator : None Response Time

: N.A Think Time : N.A Minimum Instruction Time : 0

Correct Marks : 1 Wrong Marks : 0

Orize sativa is cultivated in

اورائز اسٹیوا کی کاشت کہاں

Options :

Asia

1. ✔

ایشیاء

2. ✘

Africa

آفریقہ

America

3. ✘ امریکہ

Japan

4. ✘ جاپان

Question Number : 41 Question Id : 381906947 Question Type : MCQ Option Shuffling : No  
Display Question Number : Yes Is Question Mandatory : No Calculator : None Response Time  
: N.A Think Time : N.A Minimum Instruction Time : 0

Correct Marks : 1 Wrong Marks : 0

During which two months, the sun shines in the Tundra region?

کن دو مہینوں میں ٹنڈرا علاقے میں سورج چمکتا ہے؟

Options :

October-November

1. ✘ اکتوبر-نومبر

December –January

2. ✘ دسمبر-جنوری

February –March

3. ✔ فروری-مارچ

August-September

4. ✘ اگست-سپٹمبر

Question Number : 42 Question Id : 381906948 Question Type : MCQ Option Shuffling : No  
Display Question Number : Yes Is Question Mandatory : No Calculator : None Response Time  
: N.A Think Time : N.A Minimum Instruction Time : 0

Correct Marks : 1 Wrong Marks : 0

Consider the following statements;

درج ذیل بیانات پر غور کیجئے

A. The term “Hydrosphere” comes from the Greek word ‘hydro’ meaning water.

اصطلاح “Hydrosphere” یونانی لفظ ‘hydro’ سے نکلا ہے جس کے معنی ہیں پانی

B. Hydrosphere consists of various gases such as oxygen, hydrogen, water vapour, etc.

ہائیڈروسفر مختلف گیسوں سے بنتا ہے جیسا کہ آکسیجن، ہائیڈروجن، پانی کے بخارات وغیرہ

Which of the above statements is/are correct?

درج ذیل کون سا بیان/بیانات صحیح ہے/ہیں؟

Options :

A only

1. ✘ صرف A

B only

2. ✔ صرف B

Both A and B

3. ✘ صرف A اور B

Neither A nor B

4. ✘ نہ A اور نہ B

Question Number : 43 Question Id : 381906949 Question Type : MCQ Option Shuffling : No  
Display Question Number : Yes Is Question Mandatory : No Calculator : None Response Time  
: N.A Think Time : N.A Minimum Instruction Time : 0

Correct Marks : 1 Wrong Marks : 0

Identify the incorrect statement:

غلط بیان کی شناخت کیجئے

Options :

A Canyon is a form of erosion

1. ✘ Canyon ایک قسم کا کٹاؤ ہے

It is narrow at the top and wider at the bottom.

2. ✘ یہ اوپر کی جانب پتلا اور نیچے کی جانب چوڑا ہوتا ہے

It has steep side slopes.

3. ✔ اس کے بازو کی ڈھلاؤ بہت گہری ہوتی ہیں

The Grand Canyon on the river Colorado is the biggest in the world.

4. ✘ دریائے کولوراڈو پر واقع گراند کانیون دنیا کا سب سے بڑا ہے

Question Number : 44 Question Id : 381906950 Question Type : MCQ Option Shuffling : No  
Display Question Number : Yes Is Question Mandatory : No Calculator : None Response Time  
: N.A Think Time : N.A Minimum Instruction Time : 0

Correct Marks : 1 Wrong Marks : 0



Match the following

جوڑ لگائیے

- |                                 |   |
|---------------------------------|---|
| i. Troposphere<br>ٹروپوسفر      | a) Uppermost layer of the atmosphere<br>فضا کی سب سے اوپر کی سطح                |
| ii. Exosphere<br>ایگزوسفر       | b) Layer free from clouds<br>وہ سطح جہاں بادل نہیں ہوتے                         |
| iii. Stratosphere<br>اسٹراٹوسفر | c) Contains electrically charged particles<br>اسمیں برقی چارج شدہ ذرات ہوتی ہیں |
| iv. Thermosphere<br>تھرموسفر    | d) Lower most layer of atmosphere<br>فضا کی سب سے نیچلی سطح                     |

Choose the correct answer:

صحیح جواب کا انتخاب کیجئے

Options :

1. ✓ i-a      ii-c      iii-b      iv-d
2. ✗ i-b      ii-d      iii-c      iv-a
3. ✗ i-d      ii-a      iii-b      iv-c
4. ✗ i-d      ii-b      iii-c      iv-a

Question Number : 45 Question Id : 381906951 Question Type : MCQ Option Shuffling : No  
Display Question Number : Yes Is Question Mandatory : No Calculator : None Response Time  
: N.A Think Time : N.A Minimum Instruction Time : 0

Correct Marks : 1 Wrong Marks : 0

Identify the incorrect pair.

غلط جوڑ کی شناخت کیجئے

Options :

1. ✗

Chinook - Himalayas

چنوک

ہمالیہ

Puna - Andes

پونا

انڈیز

2. ✘

Pampero - Pampas

پمپيرو

پمپاس

3. ✘

Mistral - Alps

مسترال

آپس

4. ✔

Question Number : 46 Question Id : 381906952 Question Type : MCQ Option Shuffling : No  
Display Question Number : Yes Is Question Mandatory : No Calculator : None Response Time  
: N.A Think Time : N.A Minimum Instruction Time : 0

Correct Marks : 1 Wrong Marks : 0

In which month the 'Road Safety Week' is observed every year in India?

ہندوستان میں ہر سال کس مہینے میں "روڈ سیفٹی ویک" منایا جاتا ہے؟

Options :

January

جنوری

1. ✔

April

اپریل

2. ✘

August

3. ✖ اگست

November

4. ✖ نومبر

Question Number : 47 Question Id : 381906953 Question Type : MCQ Option Shuffling : No  
Display Question Number : Yes Is Question Mandatory : No Calculator : None Response Time  
: N.A Think Time : N.A Minimum Instruction Time : 0

Correct Marks : 1 Wrong Marks : 0

Which Committee was appointed by the Central Government for seeking suggestions to prevent sexual assault and abuse?

مرکزی حکومت نے جنسی حملوں اور استعمال کے تدارک کے لئے تجاویز حاصل کرنے کے لئے کس کمیٹی کو قائم کیا؟

Options :

Arun Goel Committee

1. ✖ ارون گوئل کمیٹی

P. K. Mohanty Committee

2. ✖ پی کے مننتی کمیٹی

Ramesh Chand Committee

3. ✖ رمیش چند کمیٹی

Justice J. S. Verma Committee

4. ✔ جسٹس جے ایس ورما کمیٹی

Question Number : 48 Question Id : 381906954 Question Type : MCQ Option Shuffling : No  
Display Question Number : Yes Is Question Mandatory : No Calculator : None Response Time  
: N.A Think Time : N.A Minimum Instruction Time : 0

Correct Marks : 1 Wrong Marks : 0

Which of the following is not essential in a Democracy?

جمہوریت میں درج ذیل کون سی چیز ضروری نہیں ہے

Options :

Active participation of citizens

شہریوں کی فعال شمولیت

1. ✘

Free and fair elections

آزادانہ اور منصفانہ انتخابات

2. ✔

Respect for law

قانون کے تئیں احترام

3. ✘

Exclusiveness of common people

عام لوگوں کی غیر شمولیت

4. ✘

Question Number : 49 Question Id : 381906955 Question Type : MCQ Option Shuffling : No  
Display Question Number : Yes Is Question Mandatory : No Calculator : None Response Time  
: N.A Think Time : N.A Minimum Instruction Time : 0

Correct Marks : 1 Wrong Marks : 0

Identify the incorrect pair.

غلط جوڑ کی شناخت کیجئے

Options :

Myanmar - Aung San Suu Kyi

میانمار

آنگ سان سیو کی

1. ✘

2. ✘ Egypt - Muammar Gaddafi  
مصر معمر قذافی

3. ✔ Zimbabwe - Robert Mugabe  
زمبابوے رابرٹ مگابے

4. ✘ Mexico - Benito Juarez  
میکسیکو بنیٹو جواریز

Question Number : 50 Question Id : 381906956 Question Type : MCQ Option Shuffling : No  
Display Question Number : Yes Is Question Mandatory : No Calculator : None Response Time  
: N.A Think Time : N.A Minimum Instruction Time : 0

Correct Marks : 1 Wrong Marks : 0

Arrange the following political parties in the chronological order from the date of their inception.

درج ذیل سیاسی پارٹیوں کو ان کے قیام کے سال کے اعتبار سے تاریخی ترتیب دیجئے

A. Telugu Desam Party

تلگو دیشم پارٹی

B. Trinamool Congress

ترنمول کانگریس

C. Rashtriya Janata Dal

راشٹریہ جنتادل

D. Shiromani Akali Dal

شرومنی اکالی دل

E. Dravida Munnetra Kazagam

ڈراویڈا منیتر اکازاگم

Options :

1. ✘ E, C, A, D, B

2. ✘ D, A, E, B, C

3. ✔ D, E, A, C, B

4. ✘ A, C, B, E, D

Question Number : 51 Question Id : 381906957 Question Type : MCQ Option Shuffling : No  
Display Question Number : Yes Is Question Mandatory : No Calculator : None Response Time  
: N.A Think Time : N.A Minimum Instruction Time : 0

Correct Marks : 1 Wrong Marks : 0

Which of the following statements is/ are correct ?

درج ذیل کون سا بیان / بیانات صحیح ہے / ہیں؟

A. Banking activity done through electronic means of communication is known as Internet banking.

بنکوں کی وہ سرگرمی جو الیکٹرانک ذرائع کے ذریعہ کی جاتی ہے انٹرنیٹ بینکنگ کہلاتی ہے

B. Internet Banking helps to repay loans using mobile phones.

انٹرنیٹ بینکنگ موبائل فون کا استعمال کرتے ہوئے قرضوں کی ادائیگی میں مدد کرتا ہے

C. Internet banking reduces paper work.

انٹرنیٹ بینکنگ کاغذی کام کو کم کرتا ہے

D. Internet banking takes additional time in transferring funds.

انٹرنیٹ بینکنگ فنڈز کو ٹرانسفر کرنے میں زائد وقت لیتا ہے

Options :

1. ✔ A and B

2. ✘ B and C

3. ✖ A, B and C

4. ✖ B, C, and D

Question Number : 52 Question Id : 381906958 Question Type : MCQ Option Shuffling : No  
Display Question Number : Yes Is Question Mandatory : No Calculator : None Response Time  
: N.A Think Time : N.A Minimum Instruction Time : 0

Correct Marks : 1 Wrong Marks : 0

Which of the statements about organic farming is/are **Not** correct?

نامیاتی کاشتکاری سے متعلق درج ذیل کون سا بیان / بیانات صحیح نہیں ہے / ہیں؟

Options :

It is based on crop rotation.

1. ✖ یہ فصل بدلنے پر مبنی ہے

It uses biological pest control methods.

2. ✖ یہ حیاتیاتی کیڑا مار طریقوں کا استعمال کرتی ہے

It minimizes the usage of synthetic fertilizers.

3. ✖ یہ سنتھٹک کھاد کے استعمال کو کم کرتا ہے

Yield is very high in organic farming.

4. ✔ نامیاتی کاشتکاری میں فصل کی مقدار بہت زیادہ ہوتی ہے

Question Number : 53 Question Id : 381906959 Question Type : MCQ Option Shuffling : No  
Display Question Number : Yes Is Question Mandatory : No Calculator : None Response Time  
: N.A Think Time : N.A Minimum Instruction Time : 0

Correct Marks : 1 Wrong Marks : 0

What is the full form of MGNREGA?

؟ MGNREGA کی پوری شکل کیا ہے؟

Options :

1. ✘ Mahatma Gandhi National Rural Employment Guarantee Act.
2. ✔ Mahatma Gandhi National Rural Employment Generation Act.
3. ✘ Mahatma Gandhi National Rural Education Guarantee Aid.
4. ✘ Mahatma Gandhi National Rural Engineers Governing Act.

Question Number : 54 Question Id : 381906960 Question Type : MCQ Option Shuffling : No  
Display Question Number : Yes Is Question Mandatory : No Calculator : None Response Time : N.A Think Time : N.A Minimum Instruction Time : 0

Correct Marks : 1 Wrong Marks : 0

Identify the incorrect pair.

غلط جوڑ کی شناخت کیجئے

Options :

1. ✘ CPI - Consumer Price Index
2. ✔ FPI - Fuel Price Index
3. ✘ WPI - Wholesale Price Index
4. ✘ PIN - Price Index Number



Question Number : 55 Question Id : 381906961 Question Type : MCQ Option Shuffling : No  
Display Question Number : Yes Is Question Mandatory : No Calculator : None Response Time  
: N.A Think Time : N.A Minimum Instruction Time : 0

Correct Marks : 1 Wrong Marks : 0

Arrange the following dams in the chronological order according to the date of their completion.

درج ذیل ڈیم کو ان کی تکمیل کے سال کے اعتبار سے صحیح ترتیب دیجئے

A. Bhakra -Nangal Dam

بھاکرا-ننگل ڈیم

B. Hira Kund Dam

ہیرا کونڈ ڈیم

C. Nagarjuna Sagar Dam

ناگر جینا ساگر ڈیم

D. Gandhi Sagar Dam

گاندھی ساگر ڈیم

Options :

1. ✘ C, D, A, B

2. ✘ B, D, A, C

3. ✘ A, C, B, D

4. ✔ B, C, D, A

Question Number : 56 Question Id : 381906962 Question Type : MCQ Option Shuffling : No  
Display Question Number : Yes Is Question Mandatory : No Calculator : None Response Time  
: N.A Think Time : N.A Minimum Instruction Time : 0

Correct Marks : 1 Wrong Marks : 0

By what name the settlements of peasants during the Chola period were called?

چولادور کے دوران کسانوں کی بستی کو کیا نام دیا جاتا تھا

Options :

Brahmadeya

1. ✘ برہمادیا

Uru

2. ✘ اُرو

Nagaram

3. ✔ ناگام

Mandalam

4. ✘ منڈلم

Question Number : 57 Question Id : 381906963 Question Type : MCQ Option Shuffling : No  
Display Question Number : Yes Is Question Mandatory : No Calculator : None Response Time  
: N.A Think Time : N.A Minimum Instruction Time : 0

Correct Marks : 1 Wrong Marks : 0

“Amuktamalyada” written by Sri Krishnadevaraya deals with the life of which Tamil Bhakta poetess?

سری کرشنا دیورائے کی لکھی گئی کتاب ”امکتاملیادا“ کس نامل بھکتا شاعرہ کی زندگی کے بارے میں ہے

Options :

Andal

1. ✘ انڈال

2. ✔

Goda Devi

گوڈا دیوی

Karaikkal Ammaiyyar

کارائی کل امانی یار

3. ✘

Korravai

کرّاوئی

4. ✘

Question Number : 58 Question Id : 381906964 Question Type : MCQ Option Shuffling : No  
Display Question Number : Yes Is Question Mandatory : No Calculator : None Response Time  
: N.A Think Time : N.A Minimum Instruction Time : 0

Correct Marks : 1 Wrong Marks : 0

Telangana Movement innovated different modes of popular protests.  
Which among the following is not a popular protest?

تلنگانہ تحریک میں مختلف قسم کے عوامی احتجاج کو جنم دیا۔ درج ذیل میں کونسا احتجاج عوامی طور پر مقبول احتجاج نہیں تھا؟

Options :

Dhoom Dham

دھوم دھام

1. ✘

Bonalu

بونالو

2. ✘

Tudumdebba

توڈم ڈببا

3. ✘

4. ✔

Question Number : 59 Question Id : 381906965 Question Type : MCQ Option Shuffling : No  
Display Question Number : Yes Is Question Mandatory : No Calculator : None Response Time  
: N.A Think Time : N.A Minimum Instruction Time : 0

Correct Marks : 1 Wrong Marks : 0

Arrange the following events of the American War of Independence in chronological order.

امریکی جنگ آزادی سے متعلق درج ذیل واقعات کو تاریخی اعتبار سے ترتیب دیجئے

A) Declaration of Independence

آزادی کا اعلان

B) Adoption of Republican Constitution

ری پبلکن دستور کا نفاذ

C) Philadelphia Congress

فلاڈلفیا کانگریس

D) Boston Tea Party

بوسٹن ٹی پارٹی

Options :

1. ✓ A, C, D, B

2. ✗ B, C, A, D

3. ✗ C, A, B, D

4. ✗ D, C, A, B

Question Number : 60 Question Id : 381906966 Question Type : MCQ Option Shuffling : No

Display Question Number : Yes Is Question Mandatory : No Calculator : None Response Time : N.A Think Time : N.A Minimum Instruction Time : 0

Correct Marks : 1 Wrong Marks : 0

Identify the INCORRECT statement about Luddism:

لڈزم سے متعلق غلط بیان کی شناخت کیجئے

Options :

It fights for safeguarding the industrial machinery

یہ صنعتی مشنری کے تحفظ کے لئے لڑتا ہے

1. ✓

It demands minimum wages for workers

یہ کامگاروں کے لئے اقل ترین تنخواہوں کی ڈیمانڈ کرتا ہے

2. ✘

It seeks control over women and child labour

یہ خواتین اور بچہ مزدوروں پر کنٹرول حاصل کرنا چاہتا ہے

3. ✘

It demands right to form trade unions

یہ ٹریڈ یونین قائم کرنے کے حق کی ڈیمانڈ کرتا ہے

4. ✘

## Teaching Aptitude

Section Id :	38190632
Section Number :	2
Section type :	Online
Mandatory or Optional :	Mandatory
Number of Questions :	20
Number of Questions to be attempted :	20
Section Marks :	20

Enable Mark as Answered Mark for Review and Clear Response :	Yes
Maximum Instruction Time :	0
Sub-Section Number :	1
Sub-Section Id :	38190638
Question Shuffling Allowed :	Yes
Is Section Default? :	null

Question Number : 61 Question Id : 381906967 Question Type : MCQ Option Shuffling : No  
Display Question Number : Yes Is Question Mandatory : No Calculator : None Response Time : N.A Think Time : N.A Minimum Instruction Time : 0

Correct Marks : 1 Wrong Marks : 0

Education is

تعلیم ہے

Options :

To prepare for job

1. ✘ جاب کے لئے تیاری

Drawing out the best from the child

2. ✔ بچہ کی بہترین صلاحیتوں کو باہر لانا

To enforce discipline

3. ✘ ڈسپلن کا نفاذ کرنا

For physical development

4. ✘ جسمانی نشوونما

Question Number : 62 Question Id : 381906968 Question Type : MCQ Option Shuffling : No

Display Question Number : Yes Is Question Mandatory : No Calculator : None Response Time : N.A Think Time : N.A Minimum Instruction Time : 0

Correct Marks : 1 Wrong Marks : 0

Primary response of a teacher is to

ایک ٹیچر کی بنیادی ذمہ داری

Options :

Dictate

1. ✘ حکم دینا

Facilitate

2. ✔ سہولت پہنچانا

Indoctrinate

3. ✘ اصول پسندی

Impress

4. ✘ متاثر کرنا

Question Number : 63 Question Id : 381906969 Question Type : MCQ Option Shuffling : No Display Question Number : Yes Is Question Mandatory : No Calculator : None Response Time : N.A Think Time : N.A Minimum Instruction Time : 0

Correct Marks : 1 Wrong Marks : 0

All - round development was emphasized by Sri Aurobindo at ----- levels

ہمہ جہت نشوونما کو سری اربند نے اس سطح کے لئے زور دیا

Options :

1. ✘ 2

2. ✘ 3

3. ✘ 4

4. ✔ 5

Question Number : 64 Question Id : 381906970 Question Type : MCQ Option Shuffling : No  
Display Question Number : Yes Is Question Mandatory : No Calculator : None Response Time  
: N.A Think Time : N.A Minimum Instruction Time : 0

Correct Marks : 1 Wrong Marks : 0

The Ultimate goal of education is to

تعلیم کا سب سے اہم مقصد

Options :

Make a man like a robot

1. ✘ انسان کو روبروٹ کی طرح بنانا

Make a man to earn bread and butter

2. ✘ انسان کو روزی روٹی کمانے کے قابل بنانا

Make a complete man

3. ✔ ایک مکمل انسان بنانا

Make him physically strong

4. ✘ جسمانی طور پر مضبوط بنانا

Question Number : 65 Question Id : 381906971 Question Type : MCQ Option Shuffling : No



Display Question Number : Yes Is Question Mandatory : No Calculator : None Response Time : N.A Think Time : N.A Minimum Instruction Time : 0

Correct Marks : 1 Wrong Marks : 0

In Indian Constitution Education is in the -----

ہندوستانی دستور کے مطابق تعلیم شامل ہے

Options :

Central list

1. ✘ مرکزی فہرست

State list

2. ✘ ریاستی فہرست

Concurrent list

3. ✔ مشترکہ فہرست

Local list

4. ✘ مقامی فہرست

Question Number : 66 Question Id : 381906972 Question Type : MCQ Option Shuffling : No Display Question Number : Yes Is Question Mandatory : No Calculator : None Response Time : N.A Think Time : N.A Minimum Instruction Time : 0

Correct Marks : 1 Wrong Marks : 0

Before commencement of teaching, the teacher should ensure

تدریس شروع کرنے سے قبل، ٹیچر کو یہ یقین کر لینا چاہئے

Options :

Strict discipline should be maintained in the class

1. ✘ کلاس میں سخت ڈسپلن کو قائم ہونا چاہئے

Student should be motivated to learn

2. ✘ طلباء کو اکتساب کے لئے تحریک ہونا چاہئے

Student should be ready to take notes

3. ✘ طلباء نوٹس لینے کے لئے تیار رہنا چاہئے

That the black board is clean

4. ✔ بلیک بورڈ صاف ستھرا ہے

Question Number : 67 Question Id : 381906973 Question Type : MCQ Option Shuffling : No  
Display Question Number : Yes Is Question Mandatory : No Calculator : None Response Time  
: N.A Think Time : N.A Minimum Instruction Time : 0

Correct Marks : 1 Wrong Marks : 0

A teacher should always be

ایک ٹیچر کو ہمیشہ ہونا چاہئے

Options :

Democratic

1. ✔ جمہوریت پسند

Autocratic

2. ✘ آمریت پسند

Monarchic

3. ✘ بادشاہ پسند

Stereotype

4. ✘ ایک مخصوص طرز کا حامل

Question Number : 68 Question Id : 381906974 Question Type : MCQ Option Shuffling : No  
Display Question Number : Yes Is Question Mandatory : No Calculator : None Response Time  
: N.A Think Time : N.A Minimum Instruction Time : 0

Correct Marks : 1 Wrong Marks : 0

Continuous comprehensive evaluation is introduced with a purpose of

مسلل جامع جانچ کو اس مقصد کے لئے متعارف کیا گیا

Options :

Grading the student

1. ✘ طالب علم کو گریڈ دینے

Promoting students to the next class

2. ✘ طلباء کو اگلی کلاس میں بھیجنے

Giving awards

3. ✘ ایوارڈ دینے

Understanding the learning abilities and difficulties of the learner

4. ✔ طالب علم کی اکتسابی صلاحیتوں اور مشکلات کو سمجھنے

Question Number : 69 Question Id : 381906975 Question Type : MCQ Option Shuffling : No  
Display Question Number : Yes Is Question Mandatory : No Calculator : None Response Time  
: N.A Think Time : N.A Minimum Instruction Time : 0

Correct Marks : 1 Wrong Marks : 0

When a teacher is teaching, if a student disturbs other students, then the teacher has to

اگر ٹیچر کی تدریس کے دوران کوئی طالب علم دوسرے طلباء کو ڈسٹرب کرتا ہو، تو ٹیچر کو چاہئے

Options :

Ignore the student

1. ✘ طالب علم کو نظر انداز کریں

Punish the student

2. ✘ طالب علم کو سزا دیں

Send the student out of the class

3. ✘ طالب علم کو کلاس سے باہر کر دیں

Counsel the student

4. ✔ طالب علم سے مشاورت کریں

Question Number : 70 Question Id : 381906976 Question Type : MCQ Option Shuffling : No  
Display Question Number : Yes Is Question Mandatory : No Calculator : None Response Time  
: N.A Think Time : N.A Minimum Instruction Time : 0

Correct Marks : 1 Wrong Marks : 0

The crux of the teaching learning process is \_\_\_\_\_

تدریسی و اکتسابی عمل میں مرکزی حیثیت رکھتا ہے

Options :

Teacher

1. ✘ ٹیچر

Student

2. ✔ طالب علم

3. ✘

Headmaster

ہیڈ ماسٹر

Parents

4. ✘ والدین

Question Number : 71 Question Id : 381906977 Question Type : MCQ Option Shuffling : No  
Display Question Number : Yes Is Question Mandatory : No Calculator : None Response Time  
: N.A Think Time : N.A Minimum Instruction Time : 0

Correct Marks : 1 Wrong Marks : 0

----- is Doordarshan's Educational Television Channel?

دوردرشن کا تعلیمی ٹیلی ویژن چینل ہے-----

Options :

Gurukul

1. ✘ گروکل

GyanBharati

2. ✘ گیان بھارتی

GyanDarshan

3. ✔ گیان درشن

Vidya

4. ✘ ودیا

Question Number : 72 Question Id : 381906978 Question Type : MCQ Option Shuffling : No

Display Question Number : Yes Is Question Mandatory : No Calculator : None Response Time : N.A Think Time : N.A Minimum Instruction Time : 0

Correct Marks : 1 Wrong Marks : 0

The situation best for maximum transfer of learning is

اكتساب کی اعلیٰ ترین منتقلی کے لئے بہترین موقع

Options :

Different tasks requiring different responses

1. ✘ مختلف کاموں کے لئے مختلف رد عمل کی ضرورت ہوتی ہے

Different tasks requiring the same response

2. ✔ مختلف کاموں کے لئے یکساں رد عمل کی ضرورت ہوتی ہے

Similar tasks requiring different responses

3. ✘ ایک جیسے کاموں کے لئے مختلف رد عمل کی ضرورت ہوتی ہے

Similar tasks requiring the same response

4. ✘ ایک جیسے کاموں کے لئے یکساں رد عمل کی ضرورت ہوتی ہے

Question Number : 73 Question Id : 381906979 Question Type : MCQ Option Shuffling : No

Display Question Number : Yes Is Question Mandatory : No Calculator : None Response Time : N.A Think Time : N.A Minimum Instruction Time : 0

Correct Marks : 1 Wrong Marks : 0

\_\_\_\_\_ measure the extent of students learning in a given content area.

کسی بھی دیئے گئے مضمون میں طلباء کے اکتساب کی پیمائش کرتے ہیں

Options :

Achievement Tests

1. ✔ تحصیلی ٹسٹ

## Aptitude Tests

2. ✖ رجحان کے ٹسٹ

## Diagnostic Tests

3. ✖ تشخیصی ٹسٹ

## Readiness Test

4. ✖ آمادگی کے ٹسٹ

Question Number : 74 Question Id : 381906980 Question Type : MCQ Option Shuffling : No  
Display Question Number : Yes Is Question Mandatory : No Calculator : None Response Time  
: N.A Think Time : N.A Minimum Instruction Time : 0

Correct Marks : 1 Wrong Marks : 0

The strategy adopted as a teacher when a student is rude to her/him

جب کوئی طالب علم استاد کے ساتھ بد تمیزی سے پیش آتا ہے تو ٹیچر کی جانب سے اختیار کی جانے والی حکمت عملی ہوگی

Options :

Argue with the student

1. ✖ طالب علم سے بحث

Express shock at such behavior

2. ✖ اسکے برتاؤ پر تعجب ظاہر کریں

Punish the student

3. ✖ طالب علم کو سزا دیں

## Remind the student of classroom rules

طالب علم کو کلاس روم کے ضوابط یاد دلائیں

4. ✓

Question Number : 75 Question Id : 381906981 Question Type : MCQ Option Shuffling : No  
Display Question Number : Yes Is Question Mandatory : No Calculator : None Response Time  
: N.A Think Time : N.A Minimum Instruction Time : 0

Correct Marks : 1 Wrong Marks : 0

If majority of the students in a class misbehave then a teacher must identify the

اگر کلاس میں بیش تر طلباء ٹیچر کے ساتھ غلط برتاؤ کریں تو ٹیچر کو چاہئے کہ اس بات کی نشاندہی کریں

Options :

Presence of distractions in the class

1. ✘

کلاس میں خلل اندازی کرنے والے عوامل کی نشاندہی

Lack of a code of conduct

2. ✘

ضابطہ اخلاق کی کمی

presence of too many rules

3. ✘

کئی ضوابط کا پایا جانا

General indiscipline amongst students

4. ✓

طلباء کے اندر عمومی عدم ڈسپلین

Question Number : 76 Question Id : 381906982 Question Type : MCQ Option Shuffling : No  
Display Question Number : Yes Is Question Mandatory : No Calculator : None Response Time  
: N.A Think Time : N.A Minimum Instruction Time : 0

Correct Marks : 1 Wrong Marks : 0



Method generally adopted to handle an aggressive student is

ایک جارحانہ طالب علم سے نمٹنے کے لئے عام طور پر اختیار کیا جانے والا طریقہ

Options :

Allow him/her the opportunity to act aggressively

اسے جارحانہ انداز سے پیش آنے کا موقع فراہم کرنا

1. ✘

Explain him/her about the harmful consequences of aggression

اسے جارحیت پسندی کے نقصان دہ نتائج کے بارے میں سمجھانا

2. ✔

Punish him/her

سزا دینا

3. ✘

Put him/ her in a highly frustrating and embarrassing situation

اسے انتہائی مایوس کن اور ہتک آمیز صورت حال میں ڈالنا

4. ✘

Question Number : 77 Question Id : 381906983 Question Type : MCQ Option Shuffling : No

Display Question Number : Yes Is Question Mandatory : No Calculator : None Response Time

: N.A Think Time : N.A Minimum Instruction Time : 0

Correct Marks : 1 Wrong Marks : 0

Exams are held to \_\_\_\_\_.

امتحانات منعقد کئے جاتے ہیں تاکہ

Options :

Assess learner's skills

متعلم کی مہارتوں کا اندازہ لگایا جائے

1. ✔

Identify learning problems

اکتسابی مسائل کی نشاندہی کی جائے

2. ✘

3. ✖ Identify the level of learning  
اكتساب کی سطح کی نشاندہی کی جائے

4. ✖ Rank students for selection  
انتخاب کے لئے طلباء کو رینک دیئے جائیں

Question Number : 78 Question Id : 381906984 Question Type : MCQ Option Shuffling : No  
Display Question Number : Yes Is Question Mandatory : No Calculator : None Response Time  
: N.A Think Time : N.A Minimum Instruction Time : 0

Correct Marks : 1 Wrong Marks : 0

The least important thing to do in teaching is \_\_\_\_\_

تدریس کے دوران کی جانے والی سب سے غیر اہم چیز

Options :

1. ✖ Drawing sketches and diagrams on the blackboard  
تخت سیاہ پر اسکیچ اور خاکے آٹارنا

2. ✖ Lecturing in interesting way  
دلچسپ طریقے سے لکچر دینا

3. ✖ Ensuring discipline in the class  
کلاس میں ڈسپلین قائم رکھنا

4. ✔ Punishing the students  
طلبہ کو سزا دینا

Question Number : 79 Question Id : 381906985 Question Type : MCQ Option Shuffling : No  
Display Question Number : Yes Is Question Mandatory : No Calculator : None Response Time  
: N.A Think Time : N.A Minimum Instruction Time : 0

Correct Marks : 1 Wrong Marks : 0

Most important skill to be possessed by a teacher is

ایک ٹیچر کے اندر پائی جانے والی سب سے اہم مہارت

Options :

Covering the prescribed course

مجوزہ نصاب کو پورا کرنا

1. ✘

Ensuring that the students are relaxed while teaching

اس بات کو یقینی بنانا کہ تدریس کے دوران طلباء اطمینان سے ہوں

2. ✘

Making students understand whatever is explained

جو کچھ بھی سمجھایا جائے اسے طلباء کے سمجھنے کے قابل بنانا

3. ✔

Being regular

پابندی سے مدرسہ آنا

4. ✘

Question Number : 80 Question Id : 381906986 Question Type : MCQ Option Shuffling : No  
Display Question Number : Yes Is Question Mandatory : No Calculator : None Response Time  
: N.A Think Time : N.A Minimum Instruction Time : 0

Correct Marks : 1 Wrong Marks : 0

\_\_\_\_\_ is not required for an effective communication

موثر ترسیل کے لئے اسکی ضرورت نہیں ہے

Options :

Appropriate gestures

مناسب اشارے و حرکات

1. ✘

Speech modulation

2. ✘ اظہار بیان میں اتار چڑھاؤ

Charming personality

3. ✔ دلکش شخصیت

Good knowledge of the content

4. ✘ مواد مضمون کی بہتر معلومات

## General English

Section Id :	38190633
Section Number :	3
Section type :	Online
Mandatory or Optional :	Mandatory
Number of Questions :	16
Number of Questions to be attempted :	16
Section Marks :	20
Enable Mark as Answered Mark for Review and Clear Response :	Yes
Maximum Instruction Time :	0
Sub-Section Number :	1
Sub-Section Id :	38190639
Question Shuffling Allowed :	No
Is Section Default? :	null

Question Id : 381906987 Question Type : COMPREHENSION Sub Question Shuffling Allowed :

**No Group Comprehension Questions : No Question Pattern Type : NonMatrix Calculator :**

**None Response Time : N.A Think Time : N.A Minimum Instruction Time : 0**

**Question Numbers : (81 to 85)**

**Read the passage carefully and mark the correct answers for the questions.**

We set out very early in the morning. Father had his camera slung on his shoulder and carried a walking stick. Mother carried two large flasks full of coffee. I walked along, a hamper (bag) full of chapathis, dry potato curry and pickled prawn, swinging now from right arm – and now from my left – it was quite heavy. My little sister bore up bravely under the weight of a blanket. Three hours of steady walking through the countryside brought us to a river. It flowed lazily along and curved away to our left. There was a tiny island in the middle of which was a stunted tree. The view was beautiful. Mother said in a firm voice: 'Let's spend the day here, under the mango tree'. For once Father agreed. Ants bit us and we were pestered by two crows during our meal, but altogether it was a very pleasant day.

**Sub questions**

**Question Number : 81 Question Id : 381906988 Question Type : MCQ Option Shuffling : No**

**Display Question Number : Yes Is Question Mandatory : No Calculator : None Response Time**

**: N.A Think Time : N.A Minimum Instruction Time : 0**

**Correct Marks : 1 Wrong Marks : 0**

Why did the picnic party have to start very early?

**Options :**

1. ✘ They had to catch a bus.
2. ✘ They had to catch a train.
3. ✔ Walking in the morning is easy

4. ✘ Walking early is good for health.

Question Number : 82 Question Id : 381906989 Question Type : MCQ Option Shuffling : No  
Display Question Number : Yes Is Question Mandatory : No Calculator : None Response Time  
: N.A Think Time : N.A Minimum Instruction Time : 0

Correct Marks : 1 Wrong Marks : 0

What pestered the picnickers during the meal?

Options :

1. ✔ They had to fight a couple of crows
2. ✘ They had too much food to eat
3. ✘ They were tired because of walking
4. ✘ They were not used to eating in the open

Question Number : 83 Question Id : 381906990 Question Type : MCQ Option Shuffling : No  
Display Question Number : Yes Is Question Mandatory : No Calculator : None Response Time  
: N.A Think Time : N.A Minimum Instruction Time : 0

Correct Marks : 1 Wrong Marks : 0

What did the hamper contain?

Options :

1. ✘ Clothes and books
2. ✔ Food for the picnickers

3. ✖ Toys for the children

4. ✖ Plates, spoons, and cups

**Question Number : 84 Question Id : 381906991 Question Type : MCQ Option Shuffling : No  
Display Question Number : Yes Is Question Mandatory : No Calculator : None Response Time  
: N.A Think Time : N.A Minimum Instruction Time : 0**

**Correct Marks : 1 Wrong Marks : 0**

Why do people go on picnics?

**Options :**

1. ✖ They have a lot of money to spend

2. ✖ They don't like their homes/towns

3. ✖ They want to be away from friends

4. ✔ They want to relax and enjoy

**Question Number : 85 Question Id : 381906992 Question Type : MCQ Option Shuffling : No  
Display Question Number : Yes Is Question Mandatory : No Calculator : None Response Time  
: N.A Think Time : N.A Minimum Instruction Time : 0**

**Correct Marks : 1 Wrong Marks : 0**

Where did they spend their time?

**Options :**

1. ✔ Under a mango tree

2. ✘ On a nest built by ants

3. ✘ A place that had lot of fish

4. ✘ In a crowded restaurant

**Sub-Section Number :** 2  
**Sub-Section Id :** 38190640  
**Question Shuffling Allowed :** Yes  
**Is Section Default? :** null

**Question Number : 86 Question Id : 381906993 Question Type : MCQ Option Shuffling : No  
Display Question Number : Yes Is Question Mandatory : No Calculator : None Response Time  
: N.A Think Time : N.A Minimum Instruction Time : 0**

**Correct Marks : 1 Wrong Marks : 0**

Choose the correct prefix for the word 'management'

**Options :**

1. ✘ Dis -----

2. ✘ Il-----

3. ✔ Mis-----

4. ✘ Ir-----

**Question Number : 87 Question Id : 381906994 Question Type : MCQ Option Shuffling : No  
Display Question Number : Yes Is Question Mandatory : No Calculator : None Response Time**



: N.A Think Time : N.A Minimum Instruction Time : 0

Correct Marks : 1 Wrong Marks : 0

Which of the words has been spelt correctly?

Options :

1. ✓ Accomodation
2. ✘ Accommodation
3. ✘ Acommodation
4. ✘ Accommadation

Question Number : 88 Question Id : 381906995 Question Type : MCQ Option Shuffling : No  
Display Question Number : Yes Is Question Mandatory : No Calculator : None Response Time  
: N.A Think Time : N.A Minimum Instruction Time : 0

Correct Marks : 1 Wrong Marks : 0

Fill in the blanks with a suitable article

As \_\_\_\_\_ train moved from the station, we saw \_\_\_\_\_ huge banyan tree.

Options :

1. ✘ a, a
2. ✘ a, the
3. ✓ the, a
4. ✘ the, the

Question Number : 89 Question Id : 381906996 Question Type : MCQ Option Shuffling : No  
Display Question Number : Yes Is Question Mandatory : No Calculator : None Response Time  
: N.A Think Time : N.A Minimum Instruction Time : 0

Correct Marks : 1 Wrong Marks : 0

Fill in the blanks with a suitable article:

When I go to the school, \_\_\_\_\_ first person I see is \_\_\_\_\_ peon.

Options :

1. ✓ the, the

2. ✗ a, an

3. ✗ a, a

4. ✗ an, an

Question Number : 90 Question Id : 381906997 Question Type : MCQ Option Shuffling : No  
Display Question Number : Yes Is Question Mandatory : No Calculator : None Response Time  
: N.A Think Time : N.A Minimum Instruction Time : 0

Correct Marks : 1 Wrong Marks : 0

Complete the sentence by choosing the correct preposition

I was walking on the road. Suddenly a car ran \_\_\_\_\_ a school boy.

Options :

1. ✗ on

2. ✗ upon

3. ✗ along

4. ✓ over

Question Number : 91 Question Id : 381906998 Question Type : MCQ Option Shuffling : No  
Display Question Number : Yes Is Question Mandatory : No Calculator : None Response Time  
: N.A Think Time : N.A Minimum Instruction Time : 0

Correct Marks : 1 Wrong Marks : 0

Choose the correct synonym for the word underlined

At the end of the class, the teacher questioned the students.

Options :

1. ✓ tested

2. ✗ revised

3. ✗ punished

4. ✗ praised

Question Number : 92 Question Id : 381906999 Question Type : MCQ Option Shuffling : No  
Display Question Number : Yes Is Question Mandatory : No Calculator : None Response Time  
: N.A Think Time : N.A Minimum Instruction Time : 0

Correct Marks : 1 Wrong Marks : 0

Choose the correct antonym for the word underlined

A cow is always known as a docile animal

Options :

1. ✗ gentle

2. ✘ domesticated

3. ✔ ferocious

4. ✘ friendly

**Question Number : 93 Question Id : 3819061000 Question Type : MCQ Option Shuffling : No Display Question Number : Yes Is Question Mandatory : No Calculator : None Response Time : N.A Think Time : N.A Minimum Instruction Time : 0**

**Correct Marks : 1 Wrong Marks : 0**

Fill in the blank with a phrasal verb

My mother has always been \_\_\_\_\_ cooking delightful snacks

**Options :**

1. ✘ made up

2. ✔ known for

3. ✘ looked upon

4. ✘ made for

**Question Number : 94 Question Id : 3819061001 Question Type : MCQ Option Shuffling : No Display Question Number : Yes Is Question Mandatory : No Calculator : None Response Time : N.A Think Time : N.A Minimum Instruction Time : 0**

**Correct Marks : 1 Wrong Marks : 0**

Which is the correct passive form of the sentence given below?

The teacher taught the lesson a week ago.

**Options :**

1. ✘ A week ago the teacher taught the lesson
2. ✔ The lesson was taught by the teacher a week ago
3. ✘ The lesson taught a week ago by the teacher
4. ✘ The teacher a week ago taught the lesson

**Question Number : 95 Question Id : 3819061002 Question Type : MCQ Option Shuffling : No Display Question Number : Yes Is Question Mandatory : No Calculator : None Response Time : N.A Think Time : N.A Minimum Instruction Time : 0**

**Correct Marks : 1 Wrong Marks : 0**

Identify the correct present perfect form of the sentence given below

This work was completed last month

**Options :**

1. ✘ This work was completed a month ago
2. ✘ This work has been completed
3. ✘ This work has completed a month ago
4. ✔ This work has been completed a month ago

Question Number : 96 Question Id : 3819061003 Question Type : MCQ Option Shuffling : No  
Display Question Number : Yes Is Question Mandatory : No Calculator : None Response Time  
: N.A Think Time : N.A Minimum Instruction Time : 0

Correct Marks : 1 Wrong Marks : 0

Join the give sentences using a proper conjunction

- i. The tailor stitched the shirts very quickly.
- ii. The tailor did not stitch the shirts nicely.

Options :

1. ✓ however

2. ✗ and

3. ✗ but

4. ✗ therefore

Question Number : 97 Question Id : 3819061004 Question Type : MCQ Option Shuffling : No  
Display Question Number : Yes Is Question Mandatory : No Calculator : None Response Time  
: N.A Think Time : N.A Minimum Instruction Time : 0

Correct Marks : 1 Wrong Marks : 0

Add a question tag to the given statement

The police investigated the case and found the culprit.

They are very efficient \_\_\_\_\_?

Options :

1. ✗ isn't it?

2. ✗ haven't they?

3. ✓ aren't they?

4. ✗ can't they?

Question Number : 98 Question Id : 3819061005 Question Type : MCQ Option Shuffling : No  
Display Question Number : Yes Is Question Mandatory : No Calculator : None Response Time  
: N.A Think Time : N.A Minimum Instruction Time : 0

Correct Marks : 1 Wrong Marks : 0

Fill in the blank to complete the sentence properly

This girl in the class is bright and has written several poems.  
She is recognised as a good \_\_\_\_\_.

Options :

1. ✗ author

2. ✓ poet

3. ✗ writer

4. ✗ girl

Question Number : 99 Question Id : 3819061006 Question Type : MCQ Option Shuffling : No  
Display Question Number : Yes Is Question Mandatory : No Calculator : None Response Time  
: N.A Think Time : N.A Minimum Instruction Time : 0

Correct Marks : 1 Wrong Marks : 0

Which of the following sentences is correct?

Options :

1. ✘ All the students in my class liking me very much
2. ✘ All the students in my class very much liking me
3. ✔ All the students in my class like me very much
4. ✘ All the students in my class like me much very

**Question Number : 100 Question Id : 3819061007 Question Type : MCQ Option Shuffling : No Display Question Number : Yes Is Question Mandatory : No Calculator : None Response Time : N.A Think Time : N.A Minimum Instruction Time : 0**

**Correct Marks : 1 Wrong Marks : 0**

Here are four sentences from a paragraph. Choose the correct order in which they should appear to make the paragraph meaningful.

- a. The teacher gave a prize to Suleman
- b. Suleman scored the highest marks in maths
- c. Suleman practices sums every day
- d. Suleman is a good student.

**Options :**

1. ✔ c, b, a, d
2. ✘ a, b, c, d
3. ✘ b, c, a, d
4. ✘ a, d, c, b



# General Knowledge and Educational Issues

Section Id :	38190634
Section Number :	4
Section type :	Online
Mandatory or Optional :	Mandatory
Number of Questions :	30
Number of Questions to be attempted :	30
Section Marks :	30
Enable Mark as Answered Mark for Review and Clear Response :	Yes
Maximum Instruction Time :	0
Sub-Section Number :	1
Sub-Section Id :	38190641
Question Shuffling Allowed :	Yes
Is Section Default? :	null

Question Number : 101 Question Id : 3819061008 Question Type : MCQ Option Shuffling : No  
Display Question Number : Yes Is Question Mandatory : No Calculator : None Response Time : N.A Think Time : N.A Minimum Instruction Time : 0

Correct Marks : 1 Wrong Marks : 0

The Royal seal of Gupta's bore the emblem of \_\_\_\_\_

”گپتا دور کی شاہی مہر“ میں کون سی علامت پائی جاتی ہے؟

Options :

Hasthi (Elephant)

ہستی (ہاتھی)

1. ✘

Mayura (peacock)

میورا (مور)

2. ✘

Garuda (Eagle)

3. ✓ گاروڈا (چیل)

Tiger

4. ✘ شیر

Question Number : 102 Question Id : 3819061009 Question Type : MCQ Option Shuffling : No  
Display Question Number : Yes Is Question Mandatory : No Calculator : None Response Time  
: N.A Think Time : N.A Minimum Instruction Time : 0

Correct Marks : 1 Wrong Marks : 0

The temples of Konark were built by Narasimha of the \_\_\_\_\_

کونارک کے مندریں \_\_\_\_\_ کے نرسیمہا نے تعمیر کروائے۔

Options :

Maratha dynasty

1. ✘ مراٹھا حکومت

Chola Dynasty

2. ✘ چولا حکومت

Ganga dynasty

3. ✓ گنگا حکومت

Vijayanagara Empire

4. ✘ وجے نگر حکومت

Question Number : 103 Question Id : 3819061010 Question Type : MCQ Option Shuffling : No  
Display Question Number : Yes Is Question Mandatory : No Calculator : None Response Time  
: N.A Think Time : N.A Minimum Instruction Time : 0

Correct Marks : 1 Wrong Marks : 0

Which of the following most notable remains of Gupta empire in the Western Indian city of Ajantha are?

مغربی ہندوستانی شہر اجنتا میں درج ذیل گپت حکومت کے کون سے مشہور باقیات ملتے ہیں؟

Options :

Cave Paintings

1. ✓ غاروں کی پینٹنگ

Buddhist monastery

2. ✘ بدھ مت کی خانقاہ

Stone carving

3. ✘ پتھر کی تراش

Large temples

4. ✘ بڑے منادر

Question Number : 104 Question Id : 3819061011 Question Type : MCQ Option Shuffling : No  
Display Question Number : Yes Is Question Mandatory : No Calculator : None Response Time  
: N.A Think Time : N.A Minimum Instruction Time : 0

Correct Marks : 1 Wrong Marks : 0

In which language the Buddhist literary works mostly written

بدھ مت کی زیادہ تر ادبی تصانیف کس زبان میں لکھی گئی؟

Options :

1. ✘

Sanskrit

संस्कृत

Prakrit

2. ✘ प्राकृत

Pali

3. ✔ पाली

Brahmi

4. ✘ ब्रह्मी

Question Number : 105 Question Id : 3819061012 Question Type : MCQ Option Shuffling : No  
Display Question Number : Yes Is Question Mandatory : No Calculator : None Response Time  
: N.A Think Time : N.A Minimum Instruction Time : 0

Correct Marks : 1 Wrong Marks : 0

Which of the following places are connected by “Banihal Pass”?

درج ذیل کون سے مقامات بنی ہال درزہ کو جوڑتے ہیں؟

Options :

Manali and Leh

1. ✘ منالی اور لیہہ

Jammu and Kashmir

2. ✔ جموں اور کشمیر

Ladakh and Tibet

3. ✘ لداخ اور تبت

## Leh and Siachin

4. ✖ لیہ اور سیاچن

Question Number : 106 Question Id : 3819061013 Question Type : MCQ Option Shuffling : No  
Display Question Number : Yes Is Question Mandatory : No Calculator : None Response Time : N.A Think Time : N.A Minimum Instruction Time : 0

Correct Marks : 1 Wrong Marks : 0

Which of the following metal is found in Hutti, Kolar and Ramagiri in India?

ہندوستان میں ہٹی، کولار اور رام گیری میں درج ذیل کون سی دھات پائی جاتی ہے؟

Options :

Gold

1. ✓ سونا

Aluminium

2. ✖ المونیم

Copper

3. ✖ تانبہ

Silver

4. ✖ چاندی

Question Number : 107 Question Id : 3819061014 Question Type : MCQ Option Shuffling : No  
Display Question Number : Yes Is Question Mandatory : No Calculator : None Response Time : N.A Think Time : N.A Minimum Instruction Time : 0

Correct Marks : 1 Wrong Marks : 0

Who is the author of the “Chip War: The light for the World’s most critical Technology”?

”چپ وار۔ دی لائٹ فار دی ورلڈ موونٹ کر۔ ٹیکھل ٹکنالوجی“ کے مصنف کون ہیں؟

Options :

YuvalnathHarari

1. ✘ یوول ناتھ براری

Malcolm Gladwell

2. ✘ مالکم گلاڈویل

Chris Miller

3. ✔ کرائس ملر

Walter Isaacson

4. ✘ والٹر آئساکسن

Question Number : 108 Question Id : 3819061015 Question Type : MCQ Option Shuffling : No Display Question Number : Yes Is Question Mandatory : No Calculator : None Response Time : N.A Think Time : N.A Minimum Instruction Time : 0

Correct Marks : 1 Wrong Marks : 0

Which country will host 19<sup>th</sup> Summit of Non-Aligned movement in 2024?

2024 میں غیر جانبدار تحریک کی اٹیسویں چوٹی کانفرنس کون سا ملک میزبانی کرے گا؟

Options :

India

1. ✘ ہندوستان

2. ✔

Uganda

یوگانڈا

Azerbaijan

3. ✘ آذربائیجان

South Africa

4. ✘ جنوبی آفریقہ

Question Number : 109 Question Id : 3819061016 Question Type : MCQ Option Shuffling : No  
Display Question Number : Yes Is Question Mandatory : No Calculator : None Response Time  
: N.A Think Time : N.A Minimum Instruction Time : 0

Correct Marks : 1 Wrong Marks : 0

Which among the following States of India has the highest potential for Biogas?

ہندوستان کے درج ذیل کس ریاست میں بائیو گیس کی سب سے زیادہ صلاحیت ہے؟

Options :

Uttar Pradesh

1. ✔ اتر پردیش

Odisha

2. ✘ اوڈیشہ

Madhya Pradesh

3. ✘ مدھیہ پردیش

Chattisgarh

4. ✘ چھتیس گڑھ

Question Number : 110 Question Id : 3819061017 Question Type : MCQ Option Shuffling : No  
Display Question Number : Yes Is Question Mandatory : No Calculator : None Response Time  
: N.A Think Time : N.A Minimum Instruction Time : 0

Correct Marks : 1 Wrong Marks : 0

Which Airport is the Venue of “Wings India 2024”, India’s largest Civil aviation event?

ہندوستان کے سب سے بڑے سیول ایویشن ایونٹ ”ونگس انڈیا 2024“ کے منعقد ہونے کا مقام کون سا ایئر پورٹ ہے؟

Options :

Rajiv Gandhi International Airport, Hyderabad

راجیو گاندھی انٹرنیشنل ایئر پورٹ، حیدرآباد

1. ✘

Begumpet Airport, Hyderabad

بیگم پیٹ ایئر پورٹ، حیدرآباد

2. ✔

Sri Satyasai Airport, Andhra pradesh

سری ستیہ سائی ایئر پورٹ، آندھرا پردیش

3. ✘

Mamnoor Airport, Warangal

ممنور ایئر پورٹ، ورنگل

4. ✘

Question Number : 111 Question Id : 3819061018 Question Type : MCQ Option Shuffling : No  
Display Question Number : Yes Is Question Mandatory : No Calculator : None Response Time  
: N.A Think Time : N.A Minimum Instruction Time : 0

Correct Marks : 1 Wrong Marks : 0

In which state “Ranathambhor National Park “ is located?

”رانا تھمبور نیشنل پارک“ کس ریاست میں واقع ہے؟



Options :

Rajasthan

1. ✓ راجستھان

Gujarat

2. ✗ گجرات

Assam

3. ✗ آسام

West Bengal

4. ✗ مغربی بنگال

Question Number : 112 Question Id : 3819061019 Question Type : MCQ Option Shuffling : No  
Display Question Number : Yes Is Question Mandatory : No Calculator : None Response Time  
: N.A Think Time : N.A Minimum Instruction Time : 0

Correct Marks : 1 Wrong Marks : 0

State Bank of India (SBI) has on boarded which Indian personality as its  
Brand Ambassador?

اسٹیٹ بینک آف انڈیا نے کس ہندوستانی شخصیت کو اپنے برانڈ امبیسیڈر کے بطور نامزد کیا؟

Options :

Amitab Bacchan

1. ✗ امیتابھ بچن

M.S. Dhoni

2. ✓ میس دھونی

Marykom

3. ✘ میری کام

P.V. Sindhu

4. ✘ پی وی سندھو

Question Number : 113 Question Id : 3819061020 Question Type : MCQ Option Shuffling : No  
Display Question Number : Yes Is Question Mandatory : No Calculator : None Response Time  
: N.A Think Time : N.A Minimum Instruction Time : 0

Correct Marks : 1 Wrong Marks : 0

Which one of the following describes “Sky Dew”, that was in news recently?

حالیہ عرصہ میں خبروں میں رہنے والے ”اسکائی ڈیو“ درج ذیل کس کے بارے میں ہے؟

Options :

A cruise missile system

1. ✘ کروزمیزائل سسٹم

A high altitude observation balloon

2. ✔ ایک اونچائی والا مشاہداتی غبارہ

A fighter aircraft

3. ✘ ایک فائٹرائیر کرافٹ

A fuel efficient drone

4. ✘ فیول ایفی شینٹ ڈرون

Question Number : 114 Question Id : 3819061021 Question Type : MCQ Option Shuffling : No

Display Question Number : Yes Is Question Mandatory : No Calculator : None Response Time : N.A Think Time : N.A Minimum Instruction Time : 0

Correct Marks : 1 Wrong Marks : 0

What is the name of a guideline issued by University Grants Commission (UGC) in India to instill human values and professional ethics in higher educational institutions?

یونیورسٹی گرانٹس کمیشن (UGC) کی طرف سے جاری ہونے والے رہنمایانہ خطوط کا کیا نام ہے جسے اعلیٰ تعلیم کے اداروں میں پیشہ وارانہ اخلاقیات اور انسانی اقدار کو فروغ دینے جاری کیا گیا ہے؟

Options :

UTSAH

1. ✘ آتساہ

NEP SAARTHI

2. ✘ نیپ سار تھی

MULYA PRAVAH 2.0

3. ✔ مولیہ پراواہ 2.0

DIKSHA

4. ✘ ڈیکشا

Question Number : 115 Question Id : 3819061022 Question Type : MCQ Option Shuffling : No Display Question Number : Yes Is Question Mandatory : No Calculator : None Response Time : N.A Think Time : N.A Minimum Instruction Time : 0

Correct Marks : 1 Wrong Marks : 0

Which space Organization has announced its plan to launch its first X-ray polar meter Satellite (X-Polsat)?

کس خلائی ادارہ نے پہلے ایکس رے پولار میٹر سٹلائٹ (X-Polsat) کو شروع کرنے کا منصوبہ کا اعلان کیا ہے؟

Options :

ISRO

1. ✓ اسرو

NASA

2. ✘ ناسا

JASA

3. ✘ جاسا

ESA

4. ✘ ایسا

Question Number : 116 Question Id : 3819061023 Question Type : MCQ Option Shuffling : No  
Display Question Number : Yes Is Question Mandatory : No Calculator : None Response Time  
: N.A Think Time : N.A Minimum Instruction Time : 0

Correct Marks : 1 Wrong Marks : 0

What is Alzheimer's disease?

الزہیمیر بیماری کیا ہے؟

Options :

A Progressive brain condition affecting memory and cognitive skills

1. ✓ ایک بڑھتی ہوئی دماغ کی حالت جس سے حافظہ اور ذہانتی مہارتوں پر اثر پڑتا ہے۔

A disease primarily affecting kidneys

2. ✘ ایک بیماری جو بنیادی طور پر گردوں پر اثر کرتی ہے

A contagious viral infection

3. ✘ ایک پھیلنے والا وائرل انفیکشن

A type of cancer

4. ✘ کینسر کی ایک قسم

Question Number : 117 Question Id : 3819061024 Question Type : MCQ Option Shuffling : No  
Display Question Number : Yes Is Question Mandatory : No Calculator : None Response Time  
: N.A Think Time : N.A Minimum Instruction Time : 0

Correct Marks : 1 Wrong Marks : 0

Which among the following plays an important role in production of alcohol in Beer?

بیر میں الکوحل کی پیداوار میں درج ذیل کون سب سے اہم کردار ادا کرتا ہے

Options :

Bacteria

1. ✘ بیکٹیریا

Protozoan

2. ✘ پروٹوزوان

Virus

3. ✘ وائرس

Yeast

4. ✔ ایسٹ

Question Number : 118 Question Id : 3819061025 Question Type : MCQ Option Shuffling : No  
Display Question Number : Yes Is Question Mandatory : No Calculator : None Response Time  
: N.A Think Time : N.A Minimum Instruction Time : 0

Correct Marks : 1 Wrong Marks : 0

Which institution launched the “Har Payment Digital Mission”?

کس ادارہ نے ”ہر پے منٹ ڈیجیٹل“ مشن کو شروع کیا؟

Options :

NITI Aayog

1. ✘ نئی آیوگ

NPCI

2. ✘ این پی سی آئی

RBI

3. ✔ آر بی آئی

Finance Ministry

4. ✘ فینانس منسٹری

Question Number : 119 Question Id : 3819061026 Question Type : MCQ Option Shuffling : No  
Display Question Number : Yes Is Question Mandatory : No Calculator : None Response Time  
: N.A Think Time : N.A Minimum Instruction Time : 0

Correct Marks : 1 Wrong Marks : 0

What is a country's disparity between the exports and imports of goods and services called?

کسی بھی ملک کے خدمات اور اشیا کی درآمد اور برآمد کے درمیان تفاوت کو کہتے ہیں

Options :

Budget deficit

1. ✘ بجٹ ڈیفیسٹ

Current Account deficit

2. ✓

کرنٹ اکاؤنٹ ڈیفیسٹ

Gross Domestic Product

3. ✘

گراس ڈومیسٹک پراڈکٹ

Gross National Product

4. ✘

گراس نیشنل پراڈکٹ

Question Number : 120 Question Id : 3819061027 Question Type : MCQ Option Shuffling : No  
Display Question Number : Yes Is Question Mandatory : No Calculator : None Response Time  
: N.A Think Time : N.A Minimum Instruction Time : 0

Correct Marks : 1 Wrong Marks : 0

Liquified Petroleum Gas (LPG) is mostly a mixture of which of the following two carbon compounds?

لکویفائیڈ پٹرولیم گیس (LPG) درج ذیل کون سے کماوندز کا مکچر ہیں؟

Options :

Methane and Ethane

1. ✘

میٹھین اور ایتھین

Ethane and Propane

2. ✘

ایتھین اور پروپین

Propane and Butane

3. ✓

پروپین اور بوٹین

4. ✘

## Methane and Propane

میٹھن اور پروپین

Question Number : 121 Question Id : 3819061028 Question Type : MCQ Option Shuffling : No  
Display Question Number : Yes Is Question Mandatory : No Calculator : None Response Time  
: N.A Think Time : N.A Minimum Instruction Time : 0

Correct Marks : 1 Wrong Marks : 0

NEP 2020, has replaced the current 10+2+3 system by a new curricular structure that is...

NEP 2020 نے 10+2+3 نصابی ڈھانچے کو نئے نصابی ڈھانچے میں بدل دیا ہے۔ وہ ہے

Options :

1. ✘ 3+4+4+5

2. ✔ 5+3+3+4

3. ✘ 4+3+3+5

4. ✘ 5+4+3+3

Question Number : 122 Question Id : 3819061029 Question Type : MCQ Option Shuffling : No  
Display Question Number : Yes Is Question Mandatory : No Calculator : None Response Time  
: N.A Think Time : N.A Minimum Instruction Time : 0

Correct Marks : 1 Wrong Marks : 0

Government of India's flagship programme for achievement of Universalization of Elementary Education (UEE) in a time bound manner is.....

ایک مخصوص وقت کے فریم میں تھانوی تعلیم کی ہمہ گیریت کے حصول کا حکومت ہند کا فلگ شپ پروگرام

Options :



1. ✘ APPEP

2. ✘ DPEP

3. ✘ UEE

4. ✔ SSA

Question Number : 123 Question Id : 3819061030 Question Type : MCQ Option Shuffling : No  
Display Question Number : Yes Is Question Mandatory : No Calculator : None Response Time  
: N.A Think Time : N.A Minimum Instruction Time : 0

Correct Marks : 1 Wrong Marks : 0

The Act serves as a building block to ensure that every child has his or her right to get a quality elementary education is

یہ ایکٹ ایک بلڈنگ بلاک کے بطور کام کرتا ہے تاکہ اس بات کو یقینی بنایا جائے کہ ہر بچہ کو معیاری تھانوی تعلیم حاصل کرنے کا حق حاصل ہو

Options :

1. ✘ RTI

Article 21-A

2. ✘ آرٹیکل 21-A

Child labour act

3. ✘ بچہ مزدور ایکٹ

RTE act 2009

4. ✔

Question Number : 124 Question Id : 3819061031 Question Type : MCQ Option Shuffling : No  
Display Question Number : Yes Is Question Mandatory : No Calculator : None Response Time  
: N.A Think Time : N.A Minimum Instruction Time : 0

Correct Marks : 1 Wrong Marks : 0

The Skill India mission was launched in which year?

اسکل انڈیا میشن کو کس سال شروع کیا گیا ہے؟

Options :

1. ✘ 2011

2. ✔ 2015

3. ✘ 2014

4. ✘ 2016

Question Number : 125 Question Id : 3819061032 Question Type : MCQ Option Shuffling : No  
Display Question Number : Yes Is Question Mandatory : No Calculator : None Response Time  
: N.A Think Time : N.A Minimum Instruction Time : 0

Correct Marks : 1 Wrong Marks : 0

Programme that is launched by Prime minister to provide multimodal connectivity infrastructure to various economic zones.

مختلف معاشی زونس کے کثیر ماڈل رابطہ انفراسٹرکچر فراہم کرنے کے لئے وزیراعظم کی جانب سے شروع کیا گیا پروگرام

Options :

PARAKH

1. ✘ پارکھ

2. ✔

## PM Gati Shakti National Master Plan (NMP)

پی ایم گتی شکتی نیشنل ماسٹر پلان (NMP)

### Skill India Mission

اسکل انڈیا میشن

3. ✖

### SamagraShiksha

ساما گرا شیکشا

4. ✖

Question Number : 126 Question Id : 3819061033 Question Type : MCQ Option Shuffling : No  
Display Question Number : Yes Is Question Mandatory : No Calculator : None Response Time  
: N.A Think Time : N.A Minimum Instruction Time : 0

Correct Marks : 1 Wrong Marks : 0

How many categories of disabilities are included in RPWD act 2016 ?

RPWD 2016 ایکٹ میں معذوریات کے کتنے زمرہ شامل ہیں؟

Options :

1. ✖ 22

2. ✔ 21

3. ✖ 07

4. ✖ 19

Question Number : 127 Question Id : 3819061034 Question Type : MCQ Option Shuffling : No  
Display Question Number : Yes Is Question Mandatory : No Calculator : None Response Time

: N.A Think Time : N.A Minimum Instruction Time : 0

Correct Marks : 1 Wrong Marks : 0

Expand SWAYAM

SWAYAM کی توسیع شدہ شکل

Options :

1. ✓ Study Webs of Active learning for Young Aspiring Minds
2. ✘ Study Websites of Art learning for Young Aspiring Minds
3. ✘ Story Webs of Adult learning for Young Aspiring Minds
4. ✘ Study Web of Active learning for Youth Aspiring Minds

Question Number : 128 Question Id : 3819061035 Question Type : MCQ Option Shuffling : No

Display Question Number : Yes Is Question Mandatory : No Calculator : None Response Time

: N.A Think Time : N.A Minimum Instruction Time : 0

Correct Marks : 1 Wrong Marks : 0

Which of the following is a print media?

درج ذیل میں پرنٹ میڈیا ہے

Options :

News papers

1. ✓ اخبارات

Social media

2. ✘ سوشل میڈیا

3. ✘

YouTube

یوٹیوب

Television

ٹیلی ویژن

4. ✘

Question Number : 129 Question Id : 3819061036 Question Type : MCQ Option Shuffling : No  
Display Question Number : Yes Is Question Mandatory : No Calculator : None Response Time  
: N.A Think Time : N.A Minimum Instruction Time : 0

Correct Marks : 1 Wrong Marks : 0

Vedas are compiled by \_\_\_\_\_

ویدوں کو انہوں نے ترتیب دیا

Options :

Rishi Gautam

رشی گوتم

1. ✘

Rishi Kanad

رشی کند

2. ✘

Rishi Bharadwaj

رشی بھردواج

3. ✘

Rishi Ved Vyasa

رشی ویدویاس

4. ✔

Question Number : 130 Question Id : 3819061037 Question Type : MCQ Option Shuffling : No

Display Question Number : Yes Is Question Mandatory : No Calculator : None Response Time : N.A Think Time : N.A Minimum Instruction Time : 0

Correct Marks : 1 Wrong Marks : 0

Govt. of India initiative to provide psychosocial support to students, family members and teachers for their mental health and well-being during the times of Covid-19.

کوئیڈ-19 کے دوران طلباء، ارکان خاندان اور اساتذہ کو ان کی ذہنی صحت اور بھلائی کے لئے نفسیاتی و سماجی تعاون فراہم کرنے والا حکومت ہند کا پروگرام ہے

Options :

Manovignan

1. ✘ مانو وگنن

Ayushmanbhav

2. ✘ ایوش مان بھاؤ

Manodarpan

3. ✔ منودرپن

Atma nirbhar bharath

4. ✘ آتمناز بھر بھارت

## Computer Awareness

Section Id : 38190635

Section Number : 5

Section type : Online

Mandatory or Optional : Mandatory

Number of Questions :	20
Number of Questions to be attempted :	20
Section Marks :	20
Enable Mark as Answered Mark for Review and Clear Response :	Yes
Maximum Instruction Time :	0
Sub-Section Number :	1
Sub-Section Id :	38190642
Question Shuffling Allowed :	Yes
Is Section Default? :	null

Question Number : 131 Question Id : 3819061038 Question Type : MCQ Option Shuffling : No  
Display Question Number : Yes Is Question Mandatory : No Calculator : None Response Time : N.A Think Time : N.A Minimum Instruction Time : 0

Correct Marks : 1 Wrong Marks : 0

What is the primary function of a real-time operating system (RTOS)?

ریئل ٹائم آپریٹنگ سسٹم (RTOS) کا بنیادی فنکشن کیا ہے؟

Options :

Managing resources and scheduling tasks in real-time

1. ✓

ریئل ٹائم میں ریسورس کو مینیج کرنا اور ٹاسکس کو شیڈول کرنا

Providing networking capabilities for distributed systems

2. ✘

تقسیم کردہ سسٹم کے لئے نیٹ ورکنگ صلاحیتیں فراہم کرنا

Supporting multiple users and applications simultaneously

3. ✘

کثیر یوزرس اور اپلی کیشن کو بہ یک وقت مدد کرنا

## Managing hardware components and device drivers

ہارڈ ویئر کمپوننٹس اور ڈیوائس ڈرائیور کو مینیج کرنا

4. ✖

Question Number : 132 Question Id : 3819061039 Question Type : MCQ Option Shuffling : No  
Display Question Number : Yes Is Question Mandatory : No Calculator : None Response Time  
: N.A Think Time : N.A Minimum Instruction Time : 0

Correct Marks : 1 Wrong Marks : 0

Which type of operating system is designed to manage resources and provide services to clients over a network?

کون سا آپریٹنگ سسٹم ریورس کو مینیج کرنے اور گراہکوں کو نیٹ ورک کے لئے خدمات فراہم کرنے ڈیزائن کیا گیا ہے؟

Options :

Real-time operating system

1. ✖ ریئل ٹائم آپریٹنگ سسٹم

Network operating system

2. ✔ نیٹ ورک آپریٹنگ سسٹم

Multi-user operating system

3. ✖ ملٹی یوزر آپریٹنگ سسٹم

Embedded operating system

4. ✖ امبیڈڈ آپریٹنگ سسٹم

Question Number : 133 Question Id : 3819061040 Question Type : MCQ Option Shuffling : No  
Display Question Number : Yes Is Question Mandatory : No Calculator : None Response Time  
: N.A Think Time : N.A Minimum Instruction Time : 0



Correct Marks : 1 Wrong Marks : 0

Which of the following is an example of a procedural programming language?

پروسیجورل پروگرامنگ لنگویج کی درج ذیل مثال کون سی ہے؟

Options :

Java

1. ✘ جاوا

Python

2. ✘ پایتھن

3. ✔ C

4. ✘ SQL

Question Number : 134 Question Id : 3819061041 Question Type : MCQ Option Shuffling : No Display Question Number : Yes Is Question Mandatory : No Calculator : None Response Time : N.A Think Time : N.A Minimum Instruction Time : 0

Correct Marks : 1 Wrong Marks : 0

Which programming paradigm emphasizes the use of objects and classes to represent real-world entities and their interactions?

کون سا پروگرامنگ پاراڈم اشیاء اور کلاسز کا استعمال حقیقی دنیا کی اشیاء اور ان کے تعامل کو ظاہر کرنے کے لئے زور دیتا ہے؟

Options :

Procedural programming

1. ✘ پروسیجورل پروگرامنگ

2. ✘

Functional programming

فنکشن پروگرامنگ

Object-oriented programming

آجکٹ اووینٹڈ پروگرامنگ

3. ✓

Logic programming

لوچک پروگرامنگ

4. ✘

Question Number : 135 Question Id : 3819061042 Question Type : MCQ Option Shuffling : No  
Display Question Number : Yes Is Question Mandatory : No Calculator : None Response Time  
: N.A Think Time : N.A Minimum Instruction Time : 0

Correct Marks : 1 Wrong Marks : 0

Which memory type retains its data even when the power is turned off?

کون سی میموری اسکے ڈاٹا کو پور آف ہونے پر بھی قائم رکھتی ہے؟

Options :

Volatile memory

وولٹائل میموری

1. ✘

Non-volatile memory

نان وولٹائل میموری

2. ✓

Cache memory

کایج میموری

3. ✘

4. ✘

## Virtual memory

ورچول میموری

Question Number : 136 Question Id : 3819061043 Question Type : MCQ Option Shuffling : No  
Display Question Number : Yes Is Question Mandatory : No Calculator : None Response Time  
: N.A Think Time : N.A Minimum Instruction Time : 0

Correct Marks : 1 Wrong Marks : 0

Which type of memory allows both read and write operations?

کون سی میموری ”ریڈ“ اور ”رائٹ“ دونوں آپریشن کے قابل ہوتی ہے؟

Options :

1. ✓ RAM

2. ✗ ROM

Cache memory

3. ✗ کاچ میموری

Virtual memory

4. ✗ ورچول میموری

Question Number : 137 Question Id : 3819061044 Question Type : MCQ Option Shuffling : No  
Display Question Number : Yes Is Question Mandatory : No Calculator : None Response Time  
: N.A Think Time : N.A Minimum Instruction Time : 0

Correct Marks : 1 Wrong Marks : 0

Which of the following is a type of database management system (DBMS) designed for handling structured data and supporting SQL queries?

درج ذیل میں ڈائابیس مینجمنٹ (DBMS) کی وہ قسم جو اسٹرکچرڈ ڈیٹا سے نمٹنے اور SQL کو سپورٹ کرنے ڈیزائین کی گئی ہے؟

Options :

Relational database

1. ✓ ریلیشنل ڈیٹا بیس

NoSQL database

2. ✘ NoSQL ڈیٹا بیس

Graph database

3. ✘ گراف ڈیٹا بیس

Document database

4. ✘ ڈاکیومنٹ ڈیٹا بیس

Question Number : 138 Question Id : 3819061045 Question Type : MCQ Option Shuffling : No  
Display Question Number : Yes Is Question Mandatory : No Calculator : None Response Time  
: N.A Think Time : N.A Minimum Instruction Time : 0

Correct Marks : 1 Wrong Marks : 0

Which type of database is optimized for storing and querying unstructured or semi-structured data, and typically uses flexible schemas?

کون سا ڈیٹا بیس کو اسٹوریج اور کوئرینگ ان اسٹرکچرڈ یا سیمی اسٹرکچرڈ ڈیٹا کے زیادہ سے زیادہ استعمال کرتا ہے لچکدار شیمیا کا استعمال کرتا ہے

Options :

Relational database

1. ✘ ریلیشنل ڈیٹا بیس

NoSQL database

2. ✓ NoSQL ڈیٹا بیس

## Graph database

3. ✖ گراف ڈائابیس

## Document database

4. ✖ ڈاکیومنٹ ڈائابیس

Question Number : 139 Question Id : 3819061046 Question Type : MCQ Option Shuffling : No  
Display Question Number : Yes Is Question Mandatory : No Calculator : None Response Time  
: N.A Think Time : N.A Minimum Instruction Time : 0

Correct Marks : 1 Wrong Marks : 0

Which tab in the Ribbon interface of Microsoft Word contains options for formatting text and paragraphs?

مائیکروسافٹ ورڈ کے ربن انٹرفیس میں کون سا ٹیب ہوتا ہے جو ٹیکسٹ اور پیراگراف کے فارمیٹنگ کے آپشنس کو رکھتا ہے

Options :

1. ✓ Home

2. ✖ Insert

3. ✖ Page Layout

4. ✖ References

Question Number : 140 Question Id : 3819061047 Question Type : MCQ Option Shuffling : No  
Display Question Number : Yes Is Question Mandatory : No Calculator : None Response Time  
: N.A Think Time : N.A Minimum Instruction Time : 0

Correct Marks : 1 Wrong Marks : 0

How do you save a document to a different drive in Microsoft Word?

مائیکروسافٹ ورڈ میں آپ ایک مختلف ڈرائیور میں ڈاکیومنٹ کو کس طرح محفوظ کریں گے۔

Options :

Click on the "Save" button and select the drive from the dropdown menu

"Save" بٹن پر کلک کریں اور ڈراپ ڈاؤن مینو سے ڈرائیو کو سلیکٹ کریں

1. ✘

Use the keyboard shortcut Ctrl + S and select the drive from the Save dialog

کی بورڈ شارٹ کٹ Ctrl + S کا استعمال کریں اور "سیو ڈائیلاگ" سے ڈرائیو کو سلیکٹ کریں

2. ✘

Click on the "File" tab, then select "Save As" and choose the drive from the Save dialog

"فائل" ٹیب پر کلک کریں، پھر "Save As" کو سلیکٹ کریں اور سیو ڈائیلاگ سے ڈرائیور کو منتخب کریں

3. ✔

Right-click on the document and select "Save to another drive"

ڈاکیومنٹ کو رائٹ کلک کریں اور "سیو ٹو انادر" کو سلیکٹ کریں

4. ✘

Question Number : 141 Question Id : 3819061048 Question Type : MCQ Option Shuffling : No  
Display Question Number : Yes Is Question Mandatory : No Calculator : None Response Time : N.A Think Time : N.A Minimum Instruction Time : 0

Correct Marks : 1 Wrong Marks : 0

Which option is used to delete data from cells, rows, or columns in Excel?

اکسیل میں سیلز، ریز اور کالمز سے ڈیٹا کو ڈیلیٹ کرنے کو کون سا آپشن استعمال ہوتا ہے؟

Options :

Cut

1. ✘ کٹ

Copy

2. ✘ کاپی

Paste

3. ✘ پیسٹ

Clear

4. ✔ کلیر

Question Number : 142 Question Id : 3819061049 Question Type : MCQ Option Shuffling : No  
Display Question Number : Yes Is Question Mandatory : No Calculator : None Response Time  
: N.A Think Time : N.A Minimum Instruction Time : 0

Correct Marks : 1 Wrong Marks : 0

Which function in Excel calculates the standard deviation of a population based on a sample of numbers?

ایکسل میں کون سا فنکشن تعداد کے نمونہ کی بنیاد پر آبادی کا معیاری انحراف محسوب کرتا ہے؟

Options :

1. ✔ STDEV

2. ✘ STDEVP

3. ✘ VAR

4. ✘ VARP

Question Number : 143 Question Id : 3819061050 Question Type : MCQ Option Shuffling : No  
Display Question Number : Yes Is Question Mandatory : No Calculator : None Response Time  
: N.A Think Time : N.A Minimum Instruction Time : 0

Correct Marks : 1 Wrong Marks : 0

Which feature in PowerPoint is used to apply a consistent look and feel to all slides in a presentation?

پاورپوائنٹ کا کون سا فیچر پریزنٹیشن میں تمام سلائیڈز کو مسلسل دیکھنے اور محسوس کرنے کے اطلاق کے لئے استعمال ہوتا ہے؟

Options :

Slide Layouts

1. ✘ سلائیڈ لے آؤٹ

Slide Transitions

2. ✘ سلائیڈ ٹرانزیشن

Themes

3. ✔ تھیمز

SmartArt

4. ✘ اسمارٹ آرٹ

Question Number : 144 Question Id : 3819061051 Question Type : MCQ Option Shuffling : No  
Display Question Number : Yes Is Question Mandatory : No Calculator : None Response Time  
: N.A Think Time : N.A Minimum Instruction Time : 0

Correct Marks : 1 Wrong Marks : 0

Which option in PowerPoint allows you to rehearse timings for a slide show presentation?

پاورپوائنٹ کا کون سا آپشن آپ کو سلائیڈز شو پر پریزنٹیشن کے اوقات کو ریہرس کا موقع دیتا ہے؟

Options :



## Record Slide Show

1. ✘ ریکارڈ سلائیڈ شو

## Slide Show Setup

2. ✘ سلائیڈ شو سیٹ اپ

## Slide Show Presenter View

3. ✘ سلائیڈ شو پریزنٹر ویو

## Slide Show Rehearse Timings

4. ✔ سلائیڈ شو ریزرٹائمنگ

Question Number : 145 Question Id : 3819061052 Question Type : MCQ Option Shuffling : No  
Display Question Number : Yes Is Question Mandatory : No Calculator : None Response Time  
: N.A Think Time : N.A Minimum Instruction Time : 0

Correct Marks : 1 Wrong Marks : 0

In most email clients, what does the "Inbox" folder typically contain?

زیادہ تر ای میل استعمال کرنے والوں کے "ان باکس" فولڈر میں عام طور پر کیا پایا جاتا ہے؟

Options :

Sent emails

1. ✘ Sent ای میلز

Drafts

2. ✘ ڈرافٹس

3. ✘

## Junk emails

جنگ ای میلز

## Received emails

4. ✓ Received ای میلز

Question Number : 146 Question Id : 3819061053 Question Type : MCQ Option Shuffling : No  
Display Question Number : Yes Is Question Mandatory : No Calculator : None Response Time  
: N.A Think Time : N.A Minimum Instruction Time : 0

Correct Marks : 1 Wrong Marks : 0

Which feature allows you to mark emails as important or prioritize them in your inbox?

کون سا فیچر آپ کے ان باکس میں ای میلز کو "اہم" اور فوقیت والے ای میلز کے بطور نشان لگانے کا موقع دیتا ہے؟

Options :

Sorting

1. ✘ سارٹنگ

Filtering

2. ✘ فلٹرنگ

Flagging

3. ✓ فلیگنگ

Categorizing

4. ✘ کیٹوگورائزنگ

Question Number : 147 Question Id : 3819061054 Question Type : MCQ Option Shuffling : No  
Display Question Number : Yes Is Question Mandatory : No Calculator : None Response Time  
: N.A Think Time : N.A Minimum Instruction Time : 0

Correct Marks : 1 Wrong Marks : 0

Which of the following is NOT a common type of computer virus?

درج ذیل میں کون سا عام قسم کا کمپیوٹر وائرس نہیں ہے؟

Options :

Trojan horse

1. ✘ ٹروجن ہارس

Worm

2. ✘ وارم

Firewall

3. ✔ فائر وال

Ransomware

4. ✘ رائسم ویئر

Question Number : 148 Question Id : 3819061055 Question Type : MCQ Option Shuffling : No  
Display Question Number : Yes Is Question Mandatory : No Calculator : None Response Time  
: N.A Think Time : N.A Minimum Instruction Time : 0

Correct Marks : 1 Wrong Marks : 0

What is the primary function of antivirus software?

اینٹی وائرس سافٹ ویئر کا بنیادی کام کیا ہے؟

Options :

Protecting computer hardware from physical damage

1. ✘ کمپیوٹر کے ہارڈ ویئر کو فزیکل خراب ہونے سے حفاظت کرنا

Preventing unauthorized access to computer networks

کمپیوٹرنیٹ ورکس تک غیر قانونی رسائی سے حفاظت کرنا

2. ✘

Detecting and removing computer viruses and other malware

کمپیوٹروائرس اور دیگر مالویئر کا پتہ لگانا اور انہیں دور کرنا

3. ✔

Optimizing computer performance

کمپیوٹر کے پرفارمنس کو مزید بہتر بنانا

4. ✘

Question Number : 149 Question Id : 3819061056 Question Type : MCQ Option Shuffling : No  
Display Question Number : Yes Is Question Mandatory : No Calculator : None Response Time  
: N.A Think Time : N.A Minimum Instruction Time : 0

Correct Marks : 1 Wrong Marks : 0

Which industry commonly uses AI-powered chatbots for customer service?

کون سی انڈسٹری AI سے لیس چٹ بوٹس کا کسٹمر سروس کے لئے استعمال کرتی ہے؟

Options :

Retail

1. ✔ رٹیل

Agriculture

2. ✘ زراعت

Construction

3. ✘ تعمیرات

4.

Energy

✘ توانائی

Question Number : 150 Question Id : 3819061057 Question Type : MCQ Option Shuffling : No  
Display Question Number : Yes Is Question Mandatory : No Calculator : None Response Time  
: N.A Think Time : N.A Minimum Instruction Time : 0

Correct Marks : 1 Wrong Marks : 0

What is a typical application of computer vision technology?

کمپیوٹر وژن ٹکنالوجی کا ایک عام ایپلی کیشن کیا ہے

Options :

Fraud detection in financial transactions

مالیاتی لین دین میں فراڈ کا پتہ لگانا

1. ✘

Autonomous vehicles

خود کار گاڑیاں

2. ✘

Stock market prediction

اسٹاک مارکیٹ کی پیش گوئی

3. ✘

Facial recognition

چہرہ کو پہچاننا

4. ✓