

# BOARD QUESTION PAPER: MARCH 2022

## CHEMISTRY

Time: 3 Hrs

Max. Marks: 70

### General Instructions:

The question paper is divided into four sections.

- Section A:** Q. No. 1 contains Ten multiple choice type of questions carrying One mark each. Q. No. 2 contains Eight very short answer type of questions carrying One mark each.
  - Section B:** Q. No. 3 to Q. No. 14 are Twelve short answer type of questions carrying Two marks each. (Attempt any Eight).
  - Section C:** Q. No. 15 to Q. No. 26 are Twelve short answer type of questions carrying Three marks each. (Attempt any Eight).
  - Section D:** Q. No. 27 to Q. No. 31 are Five long answer type of questions carrying Four marks each. (Attempt any Three).
- (5) Use of log table is allowed. Use of calculator is not allowed.  
(6) Figures to the right indicate full marks.  
(7) For each multiple choice type of question, it is mandatory to write the correct answer along with its alphabet. e.g. (a)...../(b)...../(c)...../(d)..... etc.


No marks(s) shall be given, if ONLY the correct answer or the alphabet of the correct answer is written. Only the first attempt will be considered for evaluation.

### SECTION – A

Q.1. Select and write the correct answer for the following multiple choice type of questions: [10]

- The co-ordination number of atoms in body centred cubic structure (bcc) is \_\_\_\_\_.  
(a) 4 (b) 6 (c) 8 (d) 12
- In calculating osmotic pressure, the concentration of solute is expressed in \_\_\_\_\_.  
(a) molarity (b) molality  
(c) mole fraction (d) percentage mass
- The enthalpy change for the chemical reaction  $\text{H}_2\text{O}_{(s)} \longrightarrow \text{H}_2\text{O}_{(l)}$  is called enthalpy of \_\_\_\_\_.  
(a) vapourisation (b) fusion  
(c) combustion (d) sublimation
- Which of the following transition element shows maximum oxidation state?  
(a) Sc (b) Fe (c) Mn (d) V
- The correct formula for the complex compound, sodium hexacyanoferrate (III) is \_\_\_\_\_.  
(a)  $\text{Na} [\text{Fe}(\text{CN})_6]$  (b)  $\text{Na}_2 [\text{Fe}(\text{CN})_6]$   
(c)  $\text{Na}_3 [\text{Fe}(\text{CN})_6]$  (d)  $\text{Na}_4 [\text{Fe}(\text{CN})_6]$
- Isopropylbenzene on air oxidation followed by decomposition by dilute acid gives \_\_\_\_\_.  
(a)  $\text{C}_6\text{H}_5\text{OH}$  (b)  $\text{C}_6\text{H}_5\text{COOCH}_3$   
(c)  $\text{C}_6\text{H}_5\text{COOH}$  (d)  $\text{C}_6\text{H}_5\text{CHO}$
- The name of metal nanoparticle which acts as highly effective bacterial disinfectant in water purification process is \_\_\_\_\_.  
(a) carbon black (b) silver  
(c) gold (d) copper
- Acid anhydride on reaction with primary amine gives compound having a functional group \_\_\_\_\_.  
(a) amide (b) nitrile  
(c) secondary amine (d) imine

(ix) The standard potential of the cell in the following reaction is \_\_\_\_\_.



$$(E_{\text{Cd}}^{\circ} = -0.403\text{V}, E_{\text{Cu}}^{\circ} = 0.334\text{V})$$

(a)  $-0.737\text{V}$

(b)  $0.737\text{V}$

(c)  $-0.069\text{V}$

(d)  $0.069\text{V}$

(x) The value of  $[\text{H}_3\text{O}^+]$  in  $\text{mol lit}^{-1}$  of  $0.001\text{M}$  acetic acid solution ( $K_a = 1.8 \times 10^{-5}$ ) is \_\_\_\_\_.

(a)  $1.34 \times 10^{-1}$

(b)  $1.34 \times 10^{-2}$

(c)  $1.34 \times 10^{-3}$

(d)  $1.34 \times 10^{-4}$

**Q.2. Answer the following questions:**

**[8]**

(i) Write the product formed when alkyl halide reacts with silver nitrite.

(ii) Write the name of product formed, when acetone is treated with 2, 4-dinitrophenyl hydrazine.

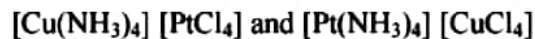
(iii) Write the name of biodegradable polyamide copolymer.

(iv) Identify the molecularity of following elementary reaction:



(v) What is the action of selenium on magnesium metal?

(vi) Write the name of isomerism in the following complexes:



(vii) Write the name of the alloy used in Fischer Tropsch process in the synthesis of gasoline.

(viii) Henry's law constant for  $\text{CH}_3\text{Br}_{(g)}$  is  $0.159\text{ mol dm}^{-3}\text{ bar}^{-1}$  at  $25^\circ\text{C}$ . What is solubility of  $\text{CH}_3\text{Br}_{(g)}$  in water at same temperature and partial pressure of  $0.164\text{ bar}$ ?

### SECTION – B

**Attempt any EIGHT of the following questions:**

**[16]**

**Q.3.** Explain pseudo-first order reaction with suitable example.

**Q.4.** Write the consequences of Schottky defect with reasons.

**Q.5.** What is the action of following on ethyl bromide:

(i) Na in dry ether

(ii) Mg in dry ether

**Q.6.** Explain formation of peptide linkage in protein with an example.

**Q.7.** Derive an expression to calculate molar mass of non volatile solute by osmotic pressure measurement.

**Q.8.** Explain monodentate and ambidentate ligands with example.

**Q.9.** Explain the trends in the following atomic properties of group 16 elements:

(i) Atomic radii

(ii) Ionisation enthalpy

(iii) Electronegativity

(iv) Electron gain enthalpy

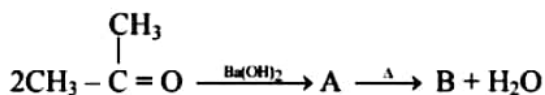
**Q.10.** Write preparation of phenol from aniline.

**Q.11.** Write chemical reactions to prepare ethanamine from:

(i) acetonitrile

(ii) nitroethane

**Q.12.** Identify A and B from the following reaction:



- Q.13.** One mole of an ideal gas is expanded isothermally and reversibly from 10 L to 15 L at 300 K. Calculate the work done in the process.
- Q.14.** How many moles of electrons are required for reduction of 2 moles of  $Zn^{2+}$  to Zn? How many Faradays of electricity will be required?

### SECTION – C

**Attempt any EIGHT of the following questions:**

**[24]**

- Q.15.** Write chemical composition of haematite. Write the names and electronic configurations of first two elements of group 17.
- Q.16.** Write classification of polymers on the basis of structure.
- Q.17.** Define green chemistry. Write two disadvantages of nanotechnology.
- Q.18.** Write commercial method for preparation of glucose. Write structure of adipic acid.
- Q.19.** Write chemical reactions of following reagents on methoxyethane:
- hot HI
  - $PCl_5$
  - dilute  $H_2SO_4$
- Q.20.** Explain cationic, anionic and neutral sphere complexes with example.
- Q.21.** Calculate spin only magnetic moment of divalent cation of transition metal with atomic number 25. Salts of  $Ti^{4+}$  are colourless. Give reason.
- Q.22.** What is lanthanoid contraction?  
Write preparation of acetic acid from
- dry ice
  - acetyl chloride
- Q.23.** Write the classification of aliphatic ketones with example. What is the action of sodium hypiodite on acetone?
- Q.24.** Define half life of first order reaction. Obtain the expression for half life and rate constant of the first order reaction.
- Q.25.** Calculate the standard enthalpy of formation of  $CH_3OH_{(l)}$  from the following data
- $CH_3OH_{(l)} + \frac{3}{2}O_{2(g)} \longrightarrow CO_{2(g)} + 2H_2O_{(l)} \quad \Delta H^\circ = -726 \text{ kJ mol}^{-1}$
  - $C_{(s)} + O_{2(g)} \longrightarrow CO_{2(g)} \quad \Delta_c H^\circ = -393 \text{ kJ mol}^{-1}$
  - $H_{2(g)} + \frac{1}{2}O_{2(g)} \longrightarrow H_2O_{(l)} \quad \Delta_f H^\circ = -286 \text{ kJ mol}^{-1}$
- Q.26.** Calculate the pH of buffer solution composed of 0.01 M weak base BOH and 0.02 M of its salt BA. [ $K_b = 1.8 \times 10^{-5}$  for weak base]

### SECTION – D

**Attempt any THREE of the following questions:**

**[12]**

- Q.27.** Define the following terms:
- Isotonic solution
  - Osmosis
- Gold crystallises into face-centred cubic cells. The edge length of unit cell is  $4.08 \times 10^{-8}$  cm. Calculate the density of gold. [Molar mass of gold =  $197 \text{ g mol}^{-1}$ ]
- Q.28.** Write the mathematical equation for the first law of thermodynamics for
- isothermal process
  - adiabatic process
- Derive the relationship between pH and pOH.

- Q.29.** Define reference electrode. Write functions of salt bridge. Draw neat, labelled diagram of standard hydrogen electrode (SHE).
- Q.30.** Explain metal deficiency defect with example. Write chemical equation for preparation of sulphur dioxide from sulphur. Write uses of sulphur.
- Q.31.** Write chemical reactions for the following conversions:
- (i) Ethyl bromide to ethyl methyl ether.
  - (ii) Ethyl bromide to ethene,
  - (iii) Bromobenzene to toluene.
  - (iv) Chlorobenzene to biphenyl.