



DR ACADEMY

DO RIGHT FOR GENUINE EDUCATION

#42, 100FT ROAD,
KAMMAGONDANAHALLI,
JALAHALLI WEST,
BENGALURU - 560 015
Phone : 9008030463
9008030896 / 9513330437

HOSKOTE - MALUR ROAD,
ISRI CROSS, KATTIGENAHALLI,
JADIGENAHALLI HOBLI,
BENGALURU - 562114
Phone : 9741332998
7760575487 / 9535527713

PLOT NO.87, VAHINI NIVAS
MATRUSRI NAGAR COLONY,
HAFAEZ PET, MIYAPUR,
HYDERABAD - 500049
Phone : 8977548407
8977548408 / 8977548409

KCET EXAMINATION - 2024

SUBJECT : PHYSICS

VERSION : C4

DATE :- 19-04-2024

TIME : 10.30 AM TO 11.50 AM



K.B.C. Trust®
**ASHOK
PU COLLEGE**

(Approved by Board of Pre-University Education, Karnataka.)



DR ACADEMY
DO RIGHT FOR GENUINE EDUCATION

CONGRATULATIONS

II PU SCIENCE ANNUAL EXAM 2024 RESULT



State **4th** Rank
REG NO. 20249143765
595 MARKS

AMODH NAIK



State **5th** Rank
REG NO. 20249144120
594 MARKS

KAVANA M

| | | | | | | | | | | | |
|--|--|--|--|---|---------------------------------------|---|--------------------------------------|---|--|--|------------------------------------|
| NANDITHA R REG NO. 20249144309 | POORVIKA REG NO. 20249144412 | NAVYA REG NO. 20249144317 | TEJASWINI N N REG NO. 20249144765 | SPOORTHI R REG NO. 20249144893 | BRUNIKA K REG NO. 20249143993 | AMITH R ALMUNDI REG NO. 20249143764 | SHREYA D REG NO. 20249144053 | KAVYASHREE REG NO. 20249144123 | DEVIKA B REG NO. 20249143939 | KETHANA P V REG NO. 20249144132 | KARTHIK REG NO. 20249144413 |
| POORNACHANDRA S REG NO. 20249144406 | TARUN N REG NO. 20249144758 | C SATHYAM REG NO. 20249143879 | SATHVIK T K REG NO. 20249144004 | KUSHAL KUMAR N REG NO. 20249144161 | CHAITRA B REG NO. 20249143884 | K NAGAMOULYA REG NO. 20249144098 | VIMARSHA REG NO. 20249144821 | THANUSHREE B T REG NO. 20249144773 | CHANDANA B M REG NO. 20249143854 | G SANJANA REG NO. 20249143882 | ANANYA REG NO. 20249143782 |
| ANMOL SHEGUNASI REG NO. 20249143281 | RAJAVARDHAN S M REG NO. 20249144497 | ABHISHEK MURARI REG NO. 20249144374 | RAJIV B CHOUDHARI REG NO. 20249144459 | TARJANI K R REG NO. 20249144757 | KOMAL INDI REG NO. 20249144144 | MANASA REDDY B C REG NO. 20249144220 | BHANUNI M REG NO. 20249144519 | SAMBRAMA HREPATT REG NO. 20249144570 | SANJANA SARUKAR REG NO. 20249144581 | SHREE GOURI REG NO. 20249144584 | AND MANY MORE... |

| | | |
|-------------------------------|---------------------------|---------------------------|
| NO. OF STUDENTS 452 | DISTINCTION 347 | FIRST CLASS 104 |
| | | SECOND CLASS 1 |

100% PASS

9008030463 / 896 / 9513330437
#42, 100ft Road, Kammagondanahalli, Jalahalli West, Bengaluru - 560 015

1. The ratio of molar specific heats of oxygen is
 (A) 1.4
 (B) 1.67
 (C) 1.33
 (D) 1.28

Ans. A

Sol. $\gamma = 1 + \frac{2}{f}$

f=number of degrees of freedom
 f=5 for O₂

2. For a particle executing simple harmonic motion (SHM), at its mean position
 (A) Velocity is zero and acceleration is maximum
 (B) Velocity is maximum and acceleration is zero
 (C) Both velocity and acceleration are maximum
 (D) Both velocity and acceleration are zero

Ans. B

Sol. $V = \omega\sqrt{A^2 - y^2}$
 $a = -\omega^2 y$

3. A motor-cyclist moving towards a huge cliff with a speed of 18 kmh⁻¹, blows a horn of source frequency 325 Hz. If the speed of the sound in air is 330 ms⁻¹, the number of beats heard by him is
 (A) 5
 (B) 4
 (C) 10
 (D) 7

Ans. A

Sol. $\Delta f = f \left(\frac{V_s}{V - V_s} \right)$ ($V_0 = V_s$)
 $\Delta f = 325 \left(\frac{5}{330 - 5} \right) = 5$

4. A body has a charge of -3.2μC. The number of excess electrons it has is
 (A) 5.12 × 10²⁵
 (B) 5 × 10¹²
 (C) 2 × 10¹³
 (D) 5.12 × 10¹³

Ans. C

Sol. $Q = ne$

$n = \frac{Q}{e} = \frac{3.2 \times 10^{-6}}{1.6 \times 10^{-19}}$
 $n = 2 \times 10^{13}$

5. A point charge A of +10μC and another point charge B of +20μC are kept 1m apart in free space. The electrostatic force on A due to B is \vec{F}_1 and the electrostatic force on B due to A is \vec{F}_2 . Then

- (A) $\vec{F}_1 = -2\vec{F}_2$
 (B) $\vec{F}_1 = -\vec{F}_2$
 (C) $2\vec{F}_1 = -\vec{F}_2$
 (D) $\vec{F}_1 = \vec{F}_2$

Ans. B

Sol. Force on 1st charge due to 2nd charge is equal to force on 2nd charge due to first charge.

$\vec{F}_1 = -\vec{F}_2$

6. A uniform electric field $E = 3 \times 10^5 \text{ NC}^{-1}$ is acting along the positive Y-axis. The electric flux through a rectangle of area 10 cm × 30 cm whose plane is parallel to the Z-X plane is
 (A) 12 × 10³ Vm
 (B) 9 × 10³ Vm
 (C) 15 × 10³ Vm
 (D) 18 × 10³ Vm

Ans. B

Sol. $\phi = E.A = 3 \times 10^5 \times 300 \times 10^{-4}$
 $= 9 \times 10^3 \text{ V-m}$

7. The total electric flux through a closed spherical surface of radius 'r' enclosing an electric dipole of dipole moment 2aq is (Give ϵ_0 = permittivity of free space)

- (A) Zero
 (B) $\frac{q}{\epsilon_0}$
 (C) $\frac{2q}{\epsilon_0}$
 (D) $\frac{8\pi r^2 q}{\epsilon_0}$

Ans. A

Sol. As net charge is zero.

8. Under electrostatic condition of a charged conductor, which among the following statements is true?
 (A) The electric field on the surface of a charged conductor is $\frac{\sigma}{2\epsilon_0}$, where σ is the surface charge density
 (B) The electric potential inside a charged conductor is always zero
 (C) Any excess charge resides on the surface of the conductor
 (D) The net electric field is tangential to the surface of the conductor

Ans. C

Sol. The excess charge resides on the surface of the conductor.

9. A cube of side 1 cm contains 100 molecules each having an induced dipole moment of $0.2 \times 10^{-6} \text{ C-m}$ in an external electric field of 4 NC^{-1} . The electric susceptibility of the materials is $\text{C}^2 \text{N}^{-1} \text{m}^{-2}$

- (A) 50
 (B) 5
 (C) 0.5
 (D) 0.05

Ans. B

Sol. $X_e = \frac{P}{E} \times n$

$$X_e = \frac{0.2 \times 10^{-6}}{(10^{-2})^3 \times 4} \times 100 = 5 \text{ C}^2 \text{N}^{-1} \text{m}^{-2}$$

10. A capacitor of capacitance $5 \mu\text{F}$ is charged by a battery of emf 10V . At an instant of time, the potential difference across the capacitors is 4V and the time rate of change of potential difference across the capacitor is 0.6 Vs^{-1} . Then the time rate at which energy is stored the capacitor at the instant is

- (A) $12 \mu\text{W}$ (B) $3 \mu\text{W}$
 (C) Zero (D) $30 \mu\text{W}$

Ans. A

Sol. $u = \frac{1}{2} CV^2$

$$\frac{du}{dt} = \frac{1}{2} C \cdot 2V \frac{dV}{dt} = CV \frac{dV}{dt}$$

$$\frac{du}{dt} = 5 \times 10^{-6} \times 4 \times 0.6 = 12 \times 10^{-6}$$

11. \vec{E} is the electric field inside a conductor whose material has conductivity σ and resistivity ρ . The current density inside the conductor is \vec{j} . The correct form of Ohm's law is
 (A) $\vec{E} = \sigma \vec{j}$ (B) $\vec{j} = \rho \vec{E}$
 (C) $\vec{E} = \rho \vec{j}$ (D) $\vec{E} \cdot \vec{j} = \rho$

Ans. C

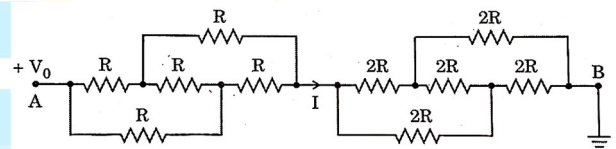
Sol. Ohms law $V = iR$

$$V = i \frac{\rho \ell}{A}$$

$$\frac{V}{\ell} = \frac{i}{A} \rho$$

$$\vec{E} = \rho \vec{j}$$

12. In the circuit shown, the end A is at potential V_0 and end B is grounded. The electric current I indicated in the circuit is

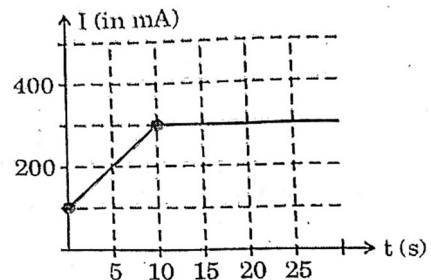


- (A) $\frac{V_0}{R}$ (B) $\frac{2V_0}{R}$ (C) $\frac{3V_0}{R}$ (D) $\frac{V_0}{3R}$

Ans. D

Sol. $i = \frac{V_0}{R_{\text{eff}}}$
 $R_{\text{eff}} = R + 2R = 3R$

13. The electric current flowing through a given conductor varies with time as shown in the graph below. The number of free electrons which flow through a given cross-section of the conductor in the time interval $0 \leq t \leq 20\text{s}$ is



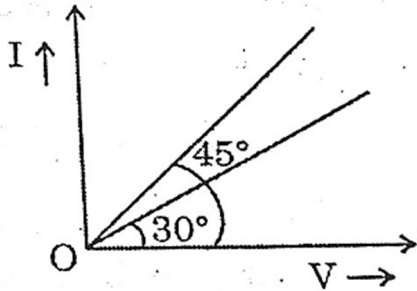
- (A) 3.125×10^{19} (B) 1.6×10^{19}
 (C) 6.25×10^{18} (D) 1.625×10^{18}

Ans. A

Sol. $Q = ne = \text{area under } I-t \text{ graph}$

$$n = \frac{5000 \times 10^{-3}}{1.6 \times 10^{-19}} = 3.125 \times 10^{19}$$

14. The I-V graph for a conductor at two different temperatures 100°C and 400°C is as shown in the figure. The temperature coefficient of resistance of the conductor is about (in per degree Celsius)



- (A) 3×10^{-3}
 (B) 6×10^{-3}
 (C) 9×10^{-3}
 (D) 12×10^{-3}

Ans. A

Sol. $R_1 = \frac{1}{\tan 45^{\circ}} = 1$

$R_2 = \frac{1}{\tan 30^{\circ}} = \sqrt{3}$

$\alpha = \frac{R_2 - R_1}{R_1 t_2 - R_2 t_1} = 3.22 \times 10^{-3} / ^{\circ}\text{C}$

15. An electric bulb of 60 W, 120 V is to be connected to 220 V source. What resistance should be connected in series with the bulb, so that the bulb glows properly?

- (A) 50 Ω
 (B) 100 Ω
 (C) 200 Ω
 (D) 288 Ω

Ans. C

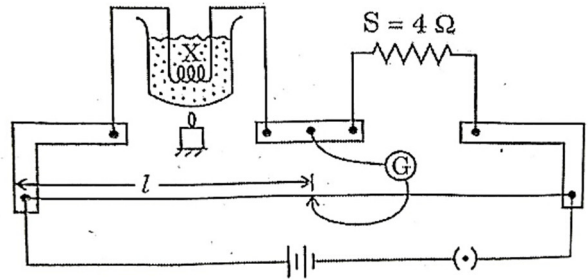
Sol. $P = \frac{V^2}{R} \Rightarrow R = \frac{120 \times 120}{60} = 240 \Omega$

$I = \frac{P}{V} = \frac{60}{120} = \frac{1}{2} \text{ A}$

$R = \frac{V}{I} = \frac{220}{1/2} = 440 \Omega$

$R_s = 200 \Omega$

16. In an experiment to determine the temperature coefficient of resistance of a conductor, a coil of wire X is immersed in a liquid. It is heated by an external agent. A meter bridge set up is used to determine resistance of the coil X at different temperatures. The balancing points measured at temperatures $t_1 = 0^{\circ}\text{C}$ and $t_2 = 100^{\circ}\text{C}$ are 50 cm and 60 cm respectively. If the standard resistance taken out is $S = 4 \Omega$ in both trials, the temperature coefficient of the coil is



- (A) $0.05^{\circ}\text{C}^{-1}$
 (B) $0.02^{\circ}\text{C}^{-1}$
 (C) $0.005^{\circ}\text{C}^{-1}$
 (D) 2.0°C^{-1}

Ans. C

Sol. $R = \frac{Sl}{100 - l}$

$R_1 = 4 \Omega$

$R_2 = 6 \Omega$

$\alpha = \frac{R_2 - R_1}{R_1 t_2 - R_2 t_1} = \frac{6 - 4}{4 \times 100 - 0} = \frac{2}{400}$

$\alpha = 0.005^{\circ}\text{C}^{-1}$

17. A moving electron produces
 (A) only electric field
 (B) both electric and magnetic field
 (C) only magnetic field
 (D) neither electric nor magnetic field

Ans. B


Sol. Moving electron produce both electric and magnetic field.

18. A coil having 9 turns carrying a current produces magnetic field B_1 at the centre. Now the coil is rewound into 3 turns carrying same current. Then the magnetic field at the centre $B_2 =$

- (A) $\frac{B_1}{9}$ (B) $9B_1$ (C) $3B_1$ (D) $\frac{B_1}{3}$

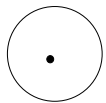
Ans. A

Sol.



No. of turns = $N_1 = 9$

$$B_1 = \frac{\mu_0 N_1 i}{2R} = \frac{9\mu_0 i}{2R}$$



$$B_2 = \frac{\mu_0 N_2 i}{2r} = \frac{\mu_0 i}{2R}$$

$$\frac{B_1}{B_2} = \frac{\frac{9\mu_0 i}{2R}}{\frac{\mu_0 i}{2R}} = 9 \Rightarrow B_1 = 9B_2$$

$$\therefore B_2 = \frac{B_1}{9}$$

19. A particle of specific charge $\frac{q}{m} = \pi \text{ C kg}^{-1}$ is projected the origin towards positive x-axis with the velocity 10 ms^{-1} in a uniform magnetic field $\vec{B} = -2\hat{k} \text{ T}$. The velocity \vec{v} of particle after time $t = \frac{1}{12} \text{ s}$ will be (in ms^{-1})

- (A) $5(\hat{i} + \hat{j})$ (B) $5(\hat{i} + \sqrt{3}\hat{j})$
 (C) $5(\sqrt{3}\hat{i} - \hat{j})$ (D) $5(\sqrt{3}\hat{i} + \hat{j})$

Ans. D

$$\text{Time period } T = \frac{2\pi m}{qB} = \frac{2\pi}{m \times 2} = 15$$

Particle will be at point P after time

$$t = \frac{1}{12} \text{ s} = \frac{1}{12} = \frac{T}{12}$$

$$\text{It is deviated by angle } \theta = \frac{2\pi}{12} = 30^\circ$$

\therefore Velocity of particle at point P

$$\vec{v} = 10 \cos 30^\circ \hat{i} + 10 \sin 30^\circ \hat{j}$$

$$= 10 \left(\frac{\sqrt{3}}{2} \hat{i} + \frac{1}{2} \hat{j} \right)$$

$$\vec{v} = 5(\sqrt{3}\hat{i} + \hat{j})$$

20. The magnetic field at the centre of a circular coil of radius R carrying current I is 64 times the magnetic field at a distance x on its axis from the centre of the coil. Then the value of x is

- (A) $\frac{R}{4} \sqrt{15}$
 (B) $R\sqrt{3}$
 (C) $\frac{R}{4}$
 (D) $R\sqrt{15}$

Ans. D

$$\text{Sol. } B_{\text{centre}} = 64 B_{\text{axis}}$$

$$B_c = \frac{\mu_0 I}{2R} = 64 \frac{\mu_0 I R^2}{2(R^2 + x^2)^{3/2}}$$

$$(R^2 + x^2)^{3/2} = 64R^3 = (4R)^3$$

$$(R^2 + x^2) = 16R$$

$$15R^2 = x^2$$

$$x = \sqrt{15}R$$

21. Magnetic hysteresis is exhibited by _____ magnetic materials.

- (A) only para
 (B) only dia
 (C) only ferro
 (D) both para and ferro

Ans. C

Sol. Conceptual

22. Magnetic susceptibility of Mg at 300 K is 1.2×10^{-5} . What is its susceptibility at 200 K ?

- (A) 18×10^{-5}
 (B) 180×10^{-5}
 (C) 1.8×10^{-5}
 (D) 0.18×10^{-5}

Ans. C

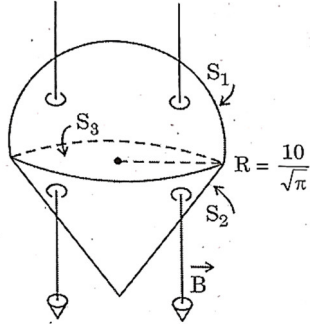
$$\text{Sol. } \chi \propto \frac{1}{T}$$

$$\frac{\chi_1}{\chi_2} = \frac{T_2}{T_1} \Rightarrow \chi_2 = \chi_1 \cdot \frac{T_1}{T_2}$$

$$= 1.2 \times 10^{-5} \times \frac{300}{200}$$

$$= 1.8 \times 10^{-5}$$

23. A uniform magnetic field of strength $B = 2\text{mT}$ exists vertically downwards. These magnetic field lines pass through a closed surface as shown in the figure. The closed surface consists of a hemisphere S_1 , a right circular cone S_2 and a circular surface S_3 . The magnetic flux through S_1 and S_2 are respectively



- (A) $\Phi_{S_1} = -20\mu\text{Wb}, \Phi_{S_2} = +20\mu\text{Wb}$
 (B) $\Phi_{S_1} = +20\mu\text{Wb}, \Phi_{S_2} = -20\mu\text{Wb}$
 (C) $\Phi_{S_1} = -40\mu\text{Wb}, \Phi_{S_2} = +40\mu\text{Wb}$
 (D) $\Phi_{S_1} = +40\mu\text{Wb}, \Phi_{S_2} = -40\mu\text{Wb}$

Ans. A

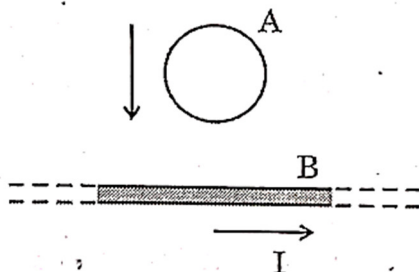
Sol. Flux entering = Flux leaving
 Flux entering
 $\phi = B.A$

$$= 2 \times 10^{-3} \times \pi \times \frac{10^2}{\pi} \times 10^{-4}$$

$$= -20\mu\text{wb}$$

Flux leaving
 $\phi = 20\mu\text{wb}$

24. In the figure, a conducting ring of certain resistance is falling towards a current carrying straight long conductor. The ring and conductor are in the same plane. Then the



- (A) induced electric current is zero
 (B) induced electric current is anticlockwise
 (C) induced electric current is clockwise
 (D) ring will come to rest

Ans. C

Sol. Conceptual

25. An induced current of 2 A flows through a coil. The resistance of the coil is 10Ω . What is the change in magnetic flux associated with the coil in 1 ms ?
 (A) $0.2 \times 10^{-2} \text{ Wb}$ (B) $2 \times 10^{-2} \text{ Wb}$
 (C) $22 \times 10^{-2} \text{ Wb}$ (D) $0.22 \times 10^{-2} \text{ Wb}$

Ans. B

Sol. $e = \frac{d\phi}{dt}$

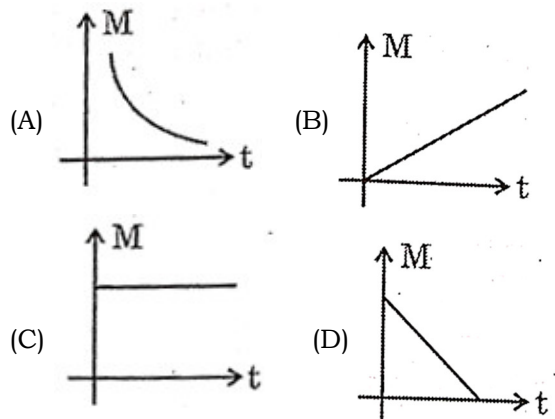
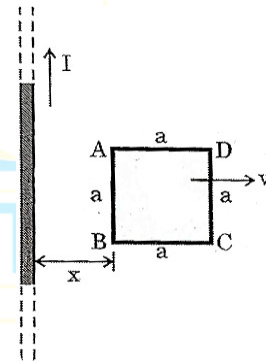
$$iR = \frac{d\phi}{dt}$$

$$2 \times 10 = \frac{d\phi}{1 \times 10^{-3}}$$

$$\phi = 2 \times 10^{-3}$$

$$= 2 \times 10^{-2} \text{ wb}$$

26. A square loop of side length 'a' is moving away from an infinitely long current carrying conductor at a constant speed 'v' as shown. Let 'x' be the instantaneous distance between the long conductor and side AB. The mutual inductance (M) of the square loop - long conductor pair changes with time (t) according to which of the following graphs?



Ans. C

Sol. $M = \frac{\mu_0 N_1 N_2 i \pi r_2^2}{l}$

"M" independent of "t"

27. Which of the following combinations should be selected for better tuning of an LCR circuit used for communication?
 (A) $R = 20\Omega, L = 1.5H, C = 35\mu F$
 (B) $R = 25\Omega, L = 2.5H, C = 45\mu F$
 (C) $R = 25\Omega, L = 1.5H, C = 45\mu F$
 (D) $R = 15\Omega, L = 3.5H, C = 30\mu F$

Ans. D

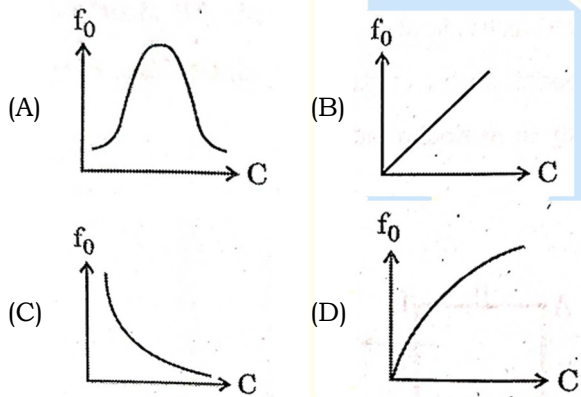
Sol. For good communication Q factor should be high

$$Q = \frac{1}{R} \sqrt{\frac{L}{C}}$$

$$\frac{1}{5} \sqrt{\frac{3.5}{30}}$$

$$= 0.022$$

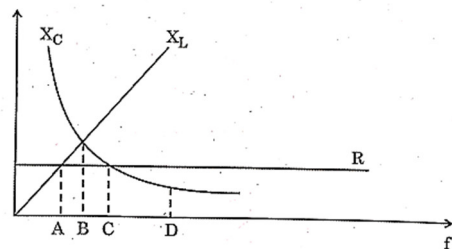
28. In an LCR series circuit, the value of only capacitance C is varied. The resulting variation of resonance frequency f_0 as a function of C can be represented as



Ans. C

Sol. $f_0 = \frac{1}{2\pi} \sqrt{\frac{L}{C}}$

29. The figure shows variation of R, X_L and X_C with frequency 'f' in a series LCR circuit. Then for what frequency point is the circuit capacitive?



- (A) B (B) D (C) A (D) C

Ans. C

Sol. Conceptual

30. Electromagnetic waves are incident normally on a perfectly reflecting surface having surface area A. If I is the intensity of the incident electromagnetic radiation and c is the speed of light in vacuum, the force exerted by the electromagnetic wave on the reflecting surface is

- (A) $\frac{2IA}{c}$ (B) $\frac{IA}{c}$
 (C) $\frac{IA}{2c}$ (D) $\frac{I}{2Ac}$

Ans. A

Sol. $F = \frac{2IA}{C}$

31. The final image formed by an astronomical telescope is
 (A) real, erect and diminished
 (B) virtual, inverted and diminished
 (C) real, inverted and magnified
 (D) virtual, inverted and magnified

Ans. D

Sol.

32. If the angle of minimum deviation is equal to angle of a prism for an equilateral prism, then the speed of light inside the prism is _____

- (A) $3 \times 10^8 \text{ ms}^{-1}$
 (B) $2\sqrt{3} \times 10^8 \text{ ms}^{-1}$
 (C) $\sqrt{3} \times 10^8 \text{ ms}^{-1}$
 (D) $\frac{\sqrt{3}}{2} \times 10^8 \text{ ms}^{-1}$

Ans. C

Sol. $\mu = \frac{\sin\left(\frac{A + d_m}{2}\right)}{\sin\left(\frac{A}{2}\right)}$

$A = d_m = 60^\circ$

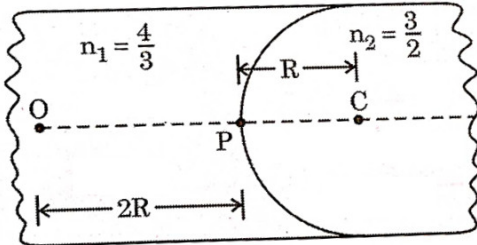
$\mu = \frac{\sin 60^\circ}{\sin 30^\circ} = \sqrt{3}$

$\frac{C}{C_m} = \mu = \sqrt{3}$

$C_m = \frac{C}{\sqrt{3}}$

$= \sqrt{3} \times 10^8 \text{ m/sec}$

33. A luminous point object O is placed at a distance $2R$ from the spherical boundary separating two transparent media of refractive indices n_1 and n_2 as shown, where R is the radius of curvature of the spherical surface. If $n_1 = \frac{4}{3}$, $n_2 = \frac{3}{2}$ and $R = 10$ cm, the image is obtained at a distance from P equal to



- (A) 30 cm in the rarer medium
 (B) 30 cm in the denser medium
 (C) 18 cm in the rarer medium
 (D) 18 cm in the denser medium

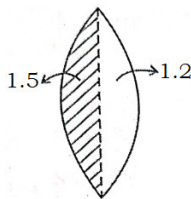
Ans. A

Sol.
$$\frac{\mu_2}{v} - \frac{\mu_1}{u} = \frac{\mu_2 - \mu_1}{R}$$

$$\frac{3/2}{v} - \frac{4}{3(-2R)} = \frac{3/2 - 4/3}{R}$$

$$V = -3R = -30\text{cm}$$

34. An equiconvex lens of radius of curvature 14 cm is made up of two different materials. Left half and right half of vertical portion is made up of material of refractive index 1.5 and 1.2 respectively as shown in the figure. If a point object is placed at a distance of 40 cm, calculate the image distance.



- (A) 25 cm
 (B) 50 cm
 (C) 35 cm
 (D) 40 cm

Ans. D

Sol. Effective focal length

$$\frac{1}{f} = \frac{1}{f_1} + \frac{1}{f_2} = \frac{(\mu_1 - 1)}{R} + \frac{(\mu_2 - 1)}{R}$$

$$\Rightarrow f = 20\text{cm}$$

$$\frac{1}{f} = \frac{1}{v} - \frac{1}{u} \Rightarrow \frac{1}{20} = \frac{1}{v} - \left(\frac{1}{-40}\right) \Rightarrow v = 40\text{cm}$$

35. A galaxy is moving away from the Earth so that a spectral line at 600 nm is observed at 601 nm. Then the speed of the galaxy with respect to the Earth is
- (A) 500 km s⁻¹
 (B) 50 km s⁻¹
 (C) 200 km s⁻¹
 (D) 20 km s⁻¹

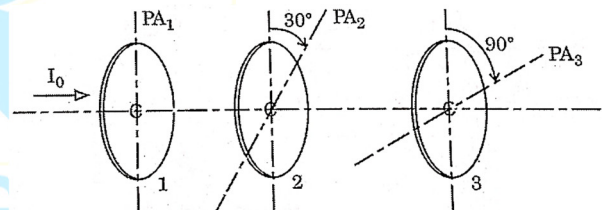
Ans. A

Sol.
$$\frac{\Delta\lambda}{\lambda} = \frac{V}{C}$$

$$\Rightarrow \frac{1}{600} = \frac{v}{3 \times 10^8}$$

$$V = \frac{3 \times 10^8}{600} = 500 \text{ km/s}$$

36. Three polaroid sheets are co-axially placed as indicated in the diagram. Pass axes of the polaroids 2 and 3 make 30° and 90° with pass axis of polaroid sheet 1. If I_0 is the intensity of the incident unpolarised light entering sheet 1, the intensity of the emergent light through sheet 3 is



- (A) zero
 (B) $\frac{3I_0}{32}$
 (C) $\frac{3I_0}{8}$
 (D) $\frac{3I_0}{16}$

Ans. B

Sol.
$$I_{\text{res}} = \frac{I_0}{2} \cos^2 \theta \sin^2 \theta$$

$$= \frac{I_0}{2} \cos^2 30^\circ \sin^2 30^\circ$$

$$= \frac{3I_0}{32}$$

37. In Young's double slit experiment, an electron beam is used to produce interference fringes of width β_1 . Now the electron beam is replaced by a beam of protons with the same experimental set-up and same speed. The fringe width obtained is β_2 . The correct relation between β_1 and β_2 is
- (A) $\beta_1 = \beta_2$
 (B) No fringes are formed
 (C) $\beta_1 < \beta_2$
 (D) $\beta_1 > \beta_2$

Ans. D

Sol. $\beta = \frac{\lambda D}{d} \Rightarrow \beta \propto \lambda$

$$\lambda = \frac{h}{p} = \frac{h}{mv} \Rightarrow \lambda \propto \frac{1}{m}$$

$$\Rightarrow m_e < m_p$$

$$\Rightarrow \lambda_e > \lambda_p \quad \therefore \beta_1 > \beta_2$$

38. Light of energy E falls normally on a metal of work function $\frac{E}{3}$. The kinetic energies (K) of the photo electrons are
- (A) $K = \frac{2E}{3}$ (B) $K = \frac{E}{3}$
 (C) $0 \leq K \leq \frac{2E}{3}$ (D) $0 \leq K \leq \frac{E}{3}$

Ans. C

Sol. $KE_{\max} = E - w_0$

$$= E - \frac{E}{3} = \frac{2E}{3}$$

KE lies from 0 to $\frac{2E}{3}$

39. The photoelectric work function for photo metal is 2.4eV . Among the four wavelengths, the wavelength of light for which photo-emission does not take place is
- (A) 200 nm (B) 300 nm
 (C) 700 nm (D) 400 nm

Ans. C

Sol. $w_0 = 2.4\text{eV}$

$$\lambda_0 = \frac{12400}{w_0} = \frac{12400}{2.4}$$

$$\lambda_0 = 5166\text{\AA}$$

$$= 516.6\text{ nm} = \text{maximum}$$

\therefore For $\lambda = 700\text{nm}$ photo electric effect does not take place.

40. In alpha particle scattering experiment, if v is the initial velocity of the particle, then the distance of closest approach is d . If the velocity is doubled, then the distance of closest approach becomes
- (A) $4d$
 (B) $2d$
 (C) $\frac{d}{2}$
 (D) $\frac{d}{4}$

Ans. D

Sol. $v^2 \propto \frac{1}{d}$

$$\frac{d_2}{d_1} = \left(\frac{v_1}{v_2}\right)^2 = \left(\frac{v}{2v}\right)^2$$

$$d_2 = \frac{d}{4}$$

41. The ratio of area of first excited state to ground state of orbit of hydrogen atom is
- (A) 1:16
 (B) 1:4
 (C) 4:1
 (D) 16:1

Ans. D

Sol. Area $\propto r^2 \propto n^4$

$$\frac{A_1}{A_2} = \left(\frac{n_1}{n_2}\right)^4 = \left(\frac{2}{1}\right)^4$$

$$= \frac{16}{1}$$

42. The ratio of volume of Al^{27} nucleus to its surface area is (Given $R_0 = 1.2 \times 10^{-15}\text{m}$)
- (A) $2.1 \times 10^{-15}\text{m}$
 (B) $1.3 \times 10^{-15}\text{m}$
 (C) $0.22 \times 10^{-15}\text{m}$
 (D) $1.2 \times 10^{-15}\text{m}$

Ans. D

Sol. $\frac{V}{\text{Area}} = \frac{\frac{4}{3}\pi R^3}{4\pi R^2} = \frac{1}{3}R$

$$= \frac{1}{3} \times R_0 A^{1/3}$$

$$= \frac{1}{3} \times 1.2 \times 10^{-15} \times (27)^{1/3}$$

$$= 1.2 \times 10^{-15}\text{m}$$

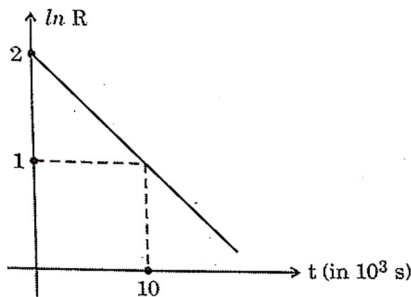
43. Consider the nuclear fission reaction ${}^1_0\text{n} + {}^{235}_{92}\text{U} \rightarrow {}^{144}_{56}\text{Ba} + {}^{89}_{36}\text{Kr} + 3{}^1_0\text{n}$. Assuming all the kinetic energy is carried away by the fast neutrons only and total binding energies of ${}^{235}_{92}\text{U}$, ${}^{144}_{56}\text{Ba}$, and ${}^{89}_{36}\text{Kr}$ to be 1800 MeV, 1200 MeV and 780 MeV respectively, the average kinetic energy carried by each fast neutron is (in MeV)
(A) 200 (B) 180 (C) 67 (D) 60

Ans. D

Sol.
$$K.E_n = \frac{\text{B.E of products} - \text{B.E of reactants}}{3}$$

$$= \frac{1980 - 1800}{3} = 60 \text{ MeV}$$

44. The natural logarithm of the activity R of a radioactive sample varies with time t as shown. At t=0, there are N_0 undecayed nuclei. Then N_0 is equal to [Take $e^2 = 7.5$]



- (A) 7,500 (B) 3,500
(C) 75,000 (D) 1,50,000

Ans. C

Sol. $\log_e R_0 = 2$
 $R_0 = e^2 = 7.5$
 $R_0 = \lambda N_0$
 $\lambda = \text{slope} = \frac{1}{10 \times 10^3} = \frac{1}{10^4} = 10^{-4} / \text{sec}$
 $N_0 = \frac{R_0}{\lambda} = \frac{7.5}{10^{-4}} = 75,000$

45. Depletion region in an unbiased semiconductor diode is a region consisting of
(A) both free electrons and holes
(B) neither free electrons nor holes
(C) only free electrons
(D) only holes

Ans. B

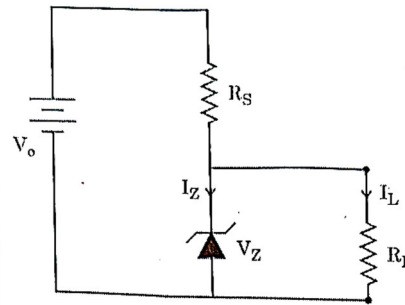
Sol. As recombination of holes and electrons takes place, it is free from charge carriers.

46. The upper level of valence band and lower level of conduction band overlap in the case of
(A) silicon
(B) copper
(C) carbon
(D) germanium

Ans. B

Sol. Copper is a conductor, In conductors, V.B and C-B are overlapped

47. In the diagram shown, the Zener diode has a reverse breakdown voltage of V_Z . The current through the load resistance R_L is I_L . The current through the Zener diode is



- (A) $\frac{V_0 - V_Z}{R_S}$
(B) $\frac{V_0 - V_Z}{R_L}$
(C) $\frac{V_Z}{R_L}$
(D) $\left(\frac{V_0 - V_Z}{R_S}\right) - I_L$

Ans. D

Sol. $I = I_Z + I_L \Rightarrow I_Z = I - I_L = \left(\frac{V_0 - V_Z}{R_S}\right) - I_L$
 $I = I_Z + I_L \Rightarrow I_Z = I - I_L$

48. A p-n junction diode is connected to a battery of emf 5.7 V in series with a resistant $5\text{k}\Omega$ such that it is forward biased. If the barrier potential of the diode is 0.7 V, neglecting the diode resistance, the current in the circuit is
(A) 1.14 mA
(B) 1mA
(C) 1A
(D) 1.14A

Ans. B

Sol. $i = \frac{V - V_B}{R_S} = \frac{5.7 - 0.7}{5 \times 10^3} = \frac{5}{5} \times 10^{-3} = 1\text{mA}$

49. An athlete runs along a circular track of diameter 80m. The distance travelled and the magnitude of displacement of the athlete when he covers $\frac{3}{4}$ of the circle is (in m)

- (A) $60\pi, 40\sqrt{2}$ (B) $40\pi, 60\sqrt{2}$
 (C) $120\pi, 80\sqrt{2}$ (D) $80\pi, 120\sqrt{2}$

Ans. A

Sol. Distance = $\frac{3\pi r}{2} = 60\pi$

Displacement = $\sqrt{2}R = 40\sqrt{2}$

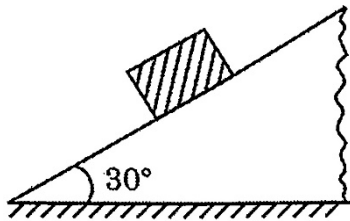
50. Among the given pair of vectors, the resultant of two vectors can never be 3 units. The vectors are

- (A) 1 unit and 2 units
 (B) 2 units and 5 units
 (C) 3 units and 6 units
 (D) 4 units and 8 units

Ans. D

Sol. Resultant of two vectors is always lies between maximum (P+Q) and minimum (P~Q) resultant

51. A block of certain mass is placed on a rough inclined plane. The angle between the plane and the horizontal is 30° . The coefficients of static and kinetic frictions between the block and the inclined plane are 0.6 and 0.5 respectively Then the magnitude of the acceleration of the block is [Take $g=10 \text{ ms}^{-2}$]



- (A) 2 ms^{-2}
 (B) zero
 (C) 0.196 ms^{-2}
 (D) 0.67 ms^{-2}

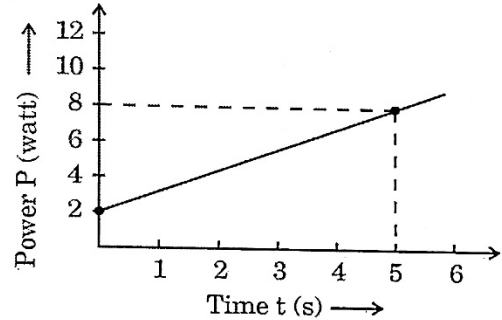
Ans. B

Sol. $f_s = \mu_s mg \cos \theta$
 $= 0.6 \times mg \times \cos 30$
 $= 0.3\sqrt{3} mg$

$mg \sin \theta = mg \sin 30 = \frac{mg}{2}$

As $f_s > mg \sin \theta$ the block will be at rest.

52. A particle of mass 500 g is at rest. It is free to move along a straight line. The power delivered to the particle varies with time according to the following graph :



The momentum of the particle at $t=5\text{s}$ is

- (A) $2\sqrt{5}\text{Ns}$ (B) $5\sqrt{2}\text{Ns}$
 (C) 5 Ns (D) 5.5 Ns

Ans. C

Sol. $w = \Delta kE = \text{Area under the graph}$

$$25 = \frac{P^2}{2m}$$

$$25 = \frac{P^2}{2 \times 500 \times 10^{-3}}$$

$$P = 5 \text{ kg m / s}$$

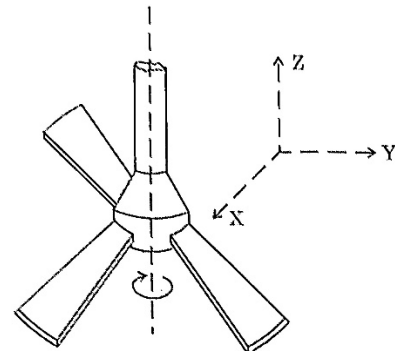
53. Dimensional formula for activity of a radioactive substance is

- (A) $M^0L^1T^{-1}$ (B) $M^0L^{-1}T^0$
 (C) $M^0L^0T^{-1}$ (D) $M^{-1}L^0T^0$

Ans. C

Sol. D.F for activity is $\frac{1}{T} = M^0L^0T^{-1}$

54. A ceiling fan is rotating around a fixed axle as shown. The direction of angular velocity is along _____.

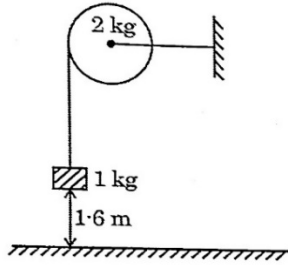


- (A) $+\hat{j}$ (B) $-\hat{j}$
 (C) $+\hat{k}$ (D) $-\hat{k}$

Ans. D

Sol. Direction of angular velocity is along -ve z axis.

55. A body of mass 1 kg is suspended by a weightless string which passes over a frictionless pulley of mass 2 kg as shown in the figure. The mass is released from a height of 1.6m from the ground. With what velocity does it strike the ground ?



- (A) 16 ms⁻¹ (B) 8 ms⁻¹
 (C) 4√2 ms⁻¹ (D) 4 ms⁻¹

Ans. D

Sol. $m_1gh = \frac{1}{2}m_1V^2 + \frac{1}{2}I\omega^2$

$$I = \frac{m_2R^2}{2} \times \frac{V^2}{R^2} = \frac{M_2}{2} V^2$$

$$m_1gh = \frac{1}{2}m_1V^2 + \frac{1}{2} \frac{m_2}{2} V^2$$

$$1 \times 10 \times 1.6 = \left(\frac{1}{2} \times 1 + \frac{1}{2} \times 1 \right) V^2$$

$$V = 4 \text{ ms}^{-1}$$

56. What is the value of acceleration due to gravity at a height equal to half the radius of the Earth, from its surface ?

- (A) 4.4 ms⁻² (B) 6.5 ms⁻²
 (C) zero (D) 9.8 ms⁻²

Ans. A

Sol. $g_h = \frac{gR^2}{(R+h)^2} = \frac{4g}{9} = \frac{4}{9} \times 9.8 = 4.4 \text{ m/s}^2$

57. A thick metal wire of density ρ and length 'L' is hung from a rigid support. The increase in length of the wire due to its own weight is (Y=Young's modulus of the material of the wire)

(A) $\frac{\rho g L}{Y}$ (B) $\frac{1}{2} \frac{\rho g L^2}{Y}$

(C) $\frac{\rho g L^2}{Y}$ (D) $\frac{1}{4Y} \rho g L^2$

Ans. B

Sol. Increase in weight due to its own weight = $\frac{mgl}{2Ay}$

$$= \frac{L^2 \rho g}{2y}$$

58. Water flows through a horizontal pipe of varying cross-section at a rate of 0.314 m³s⁻¹. The velocity of water at a point where the radius of the pipe is 10 cm is

- (A) 0.1 ms⁻¹ (B) 1 ms⁻¹
 (C) 10 ms⁻¹ (D) 100 ms⁻¹

Ans. C

Sol. $Q = AV$

$$0.314 = \pi r^2 \cdot V$$

$$0.314 = 3.14 \times 10^{-2} \times V$$

$$V = 10 \text{ ms}^{-1}$$

59. A solid cube of mass m at a temperature θ_0 is heated at a constant rate. It becomes liquid at temperature θ_1 and vapour at temperature θ_2 .

Let s_1 and s_2 be specific heats in its solid and liquid states respectively. If L_f and L_v are latent heats of fusion and vaporisation respectively, then the minimum heat energy supplied to the cube until it vaporises is

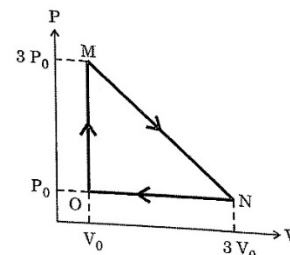
- (A) $ms_1(\theta_1 - \theta_0) + ms_2(\theta_2 - \theta_1)$
 (B) $mL_f + ms_2(\theta_2 - \theta_1) + mL_v$
 (C) $ms_1(\theta_1 - \theta_0) + mL_f + ms_2(\theta_2 - \theta_1) + mL_v$
 (D) $ms_1(\theta_1 - \theta_0) + mL_f + ms_2(\theta_2 - \theta_0) + mL_v$

Ans. C

Sol. Heat energy supplied

$$Q = ms_1(\theta_1 - \theta_0) + mL_f + ms_2(\theta_2 - \theta_1) + mL_v$$

60. One mole of an ideal monoatomic gas is taken round the cyclic process MNOM. The work done by the gas is



- (A) 4.5 P₀V₀ (B) 4 P₀V₀
 (C) 9 P₀V₀ (D) 2 P₀V₀

Ans. D

Sol. Work done $W = \frac{1}{2} \times \text{Base} \times \text{height}$

$$= \frac{1}{2} (3V_0 - V_0)(3P_0 - P_0)$$

$$= \frac{1}{2} (2V_0)(2P_0)$$

$$W = 2P_0V_0$$



**INDO SUNRISE
PU COLLEGE**

Approved by Board of Pre-University Education, Karnataka - BB 212



DR ACADEMY
DO RIGHT FOR GENUINE EDUCATION



CONGRATULATIONS



II PU SCIENCE ANNUAL EXAM - 2024 RESULT

| | | | | | | | | | |
|------------------------------------|-------------------------------|-------------------------------|-----------------------------|----------------------------------|----------------------------------|---------------------------------|------------------------------------|--------------------------|---------------------------------|
| 583 SANJANA R | 579 RADHAKRISHNAN | 579 S KOUSHIK RAM | 576 ARCHANA A M | 574 SAI SAHAS K B | 574 SUJAN K A | 573 D M SUDEEP | 573 NEERAJ M | 572 SAQIB KHAN B | 571 DHEEKSHITH NAREYAN V |
| 571 MANASA | 569 TANUSHA V | 569 M MAHESH BABU | 569 CHANDU | 568 AATHREYA SHASHI KUMAR | 568 ARPITH GOWDA S B | 568 GAUTHAMI HARIKRISHNA | 567 MAITRA PATIL | 566 SAMARTH PATIL | 565 DUDUKU TEJASWINI |
| 565 RAKSHA H N | 563 VIKAS R | 563 NAGASAI CH | 562 RIDHI D V | 561 PRAFUL S | 561 GUNAVARDHAN REDDY K J | 559 PUNISHCHITHA SHANKAR | 559 M CHARAN TEJ | 559 SRILEKHA K S | 559 MOUNISH D S |
| 559 MANOHAR R | 558 DHANUSH A | 558 SHIVANAND HALLI | 558 SIRISHA YADAV C | 558 MOUNIKA B S | 558 B V SUJEETH | 557 SHREDEVI | 557 SRIRAMTH BHIMASHANKAR P | 557 TEJAS G | 557 AKSHITHA SRI M |
| 556 MEHAR ARFA | 555 ANJANEYA REDDY B M | 555 HARSHITHA YADAV R | 555 HARSHA M | 553 DHANUSHREE Y | 553 BHUVAN GOWDA H S | 553 RAJ SHEKAR M | 552 THANUSHREE N | 552 MONISHA M | 552 MADHU CHANDAN N |
| 551 TRISHA S | 551 CHANDANA S | 551 PRATHIKSHA A | 551 SAMERA ARYAA D B | 550 MOHITH S | 550 SHREYA R A | 550 MANJUNATH V | 550 SHABNUM KHANUM | 549 NUTHAN R | 547 ABIYA SAMUEL |
| 546 SHARANAGOURA BIRADAR | 545 HAJIRA KHANUM | 545 SRUJAN SHRISHAIL K | 544 NAYANA M S | 544 VINAYAK RAJU B | 541 ADITYA | 541 MANOHAR B S | 541 RATANRAJ BIRADAR | 540 THANUSHREE C | 540 ATHIYA KOUSAR |
| 540 BHAKTI SHIVAKUMAR HANJI | 540 SANJAY C V | AND MANY MORE... | | | | | | | |

REGISTRATION OPEN
PCMB NEET | JEE | KCET
PCMCs

| NO. OF STUDENTS | DISTINCTION | FIRST CLASS | 64 |
|-----------------|-------------|--------------|----------|
| 177 | 108 | SECOND CLASS | 3 |



9741332998 / 8147397999 / 9535527713
HOSKOTE - MALUR ROAD, ISRI Cross, Kattigenahalli, Jadigenahalli Hobli, Bengaluru.