

# Andhra Pradesh State Council of Higher Education

## Notations :

- 1.Options shown in green color and with ✓ icon are correct.
- 2.Options shown in red color and with ✗ icon are incorrect.

|  |  |
|--|--|
| <b>Question Paper Name :</b>                   | Metallurgical Engineering 08th May 2024<br>Shift 2 |
| <b>Duration :</b>                              | 180  |
| <b>Total Marks :</b>                           | 200  |
| <b>Display Marks:</b>                          | No   |
| <b>Share Answer Key With Delivery Engine :</b> | Yes  |
| <b>Calculator :</b>                            | None   |
| <b>Magnifying Glass Required? :</b>            | No   |
| <b>Ruler Required? :</b>                       | No   |
| <b>Eraser Required? :</b>                      | No   |
| <b>Scratch Pad Required? :</b>                 | No   |
| <b>Rough Sketch/Notepad Required? :</b>        | No   |
| <b>Protractor Required? :</b>                  | No   |
| <b>Show Watermark on Console? :</b>            | Yes  |
| <b>Highlighter :</b>                           | No   |
| <b>Auto Save on Console?</b>                   | Yes  |
| <b>Change Font Color :</b>                     | No   |
| <b>Change Background Color :</b>               | No   |
| <b>Change Theme :</b>                          | No   |
| <b>Help Button :</b>                           | No   |
| <b>Show Reports :</b>                          | No   |

|                               |           |
|-------------------------------|-----------|
| Show Progress Bar :           | No        |
| Is this Group for Examiner? : | No        |
| Examiner permission :         | Cant View |
| Show Progress Bar? :          | No        |

## Mathematics

|  |           |
|--|-----------|
| Section Id :   | 210688182 |
| Section Number :   | 1         |
| Mandatory or Optional :                                      | Mandatory |
| Number of Questions :  | 50        |
| Section Marks :  | 50        |
| Enable Mark as Answered Mark for Review and Clear Response : | Yes       |
| Maximum Instruction Time :                                   | 0         |
| Is Section Default? :  | null      |

Question Number : 1 Question Id : 2106889207 Display Question Number : Yes Is Question Mandatory : No Calculator : None Response Time : N.A Think Time : N.A Minimum Instruction Time : 0

$$\text{If } \begin{vmatrix} 15 - x & 11 & 10 \\ 11 - 3x & 17 & 16 \\ 7 - x & 14 & 13 \end{vmatrix} = 0 \text{ then the value of } x \text{ is}$$

Options :

1. ✓ 6

2. ✗ 5

3. ✘ 7

4. ✘ -6

Question Number : 2 Question Id : 2106889208 Display Question Number : Yes Is Question Mandatory : No Calculator : None Response Time : N.A Think Time : N.A Minimum Instruction Time : 0

The adjoint of  $A = \begin{pmatrix} 1 & 4 & -2 \\ -2 & -5 & 4 \\ 1 & -2 & 1 \end{pmatrix}$  is

Options :

1. ✘  $\begin{pmatrix} 1 & 4 & -2 \\ -2 & -5 & 4 \\ 1 & -2 & 1 \end{pmatrix}$

2. ✘  $\begin{pmatrix} 1 & 4 & -2 \\ -2 & -5 & -4 \\ 1 & -2 & 1 \end{pmatrix}$

3. ✔  $\begin{pmatrix} 3 & 0 & 6 \\ 6 & 3 & 0 \\ 9 & 6 & 3 \end{pmatrix}$

4. ✘  $\begin{pmatrix} 3 & 2 & 1 \\ 4 & 1 & -1 \\ 0 & 3 & 4 \end{pmatrix}$

Question Number : 3 Question Id : 2106889209 Display Question Number : Yes Is Question

**Mandatory : No Calculator : None Response Time : N.A Think Time : N.A Minimum Instruction**

**Time : 0**

If  $A = \begin{pmatrix} 3 & 2 & x \\ 4 & 1 & -1 \\ 0 & 3 & 4 \end{pmatrix}$  is a singular matrix then the value of  $x$  is

**Options :**

1. ✓  $11/12$

2. ✗  $-11/12$

3. ✗  $13/12$

4. ✗  $5/4$

**Question Number : 4 Question Id : 2106889210 Display Question Number : Yes Is Question**

**Mandatory : No Calculator : None Response Time : N.A Think Time : N.A Minimum Instruction**

**Time : 0**

The solution of the following simultaneous linear equations by using Cramer's rule  $3x+4y+5z=18$ ;  $2x-y+8z=13$ ;  $5x-2y+7z=20$  is

**Options :**

1. ✗  $-3, -1, 1$

2. ✓  $3, 1, 1$

3. ✘ 3,0,1

4. ✘ 3,1,-1

Question Number : 5 Question Id : 2106889211 Display Question Number : Yes Is Question Mandatory : No Calculator : None Response Time : N.A Think Time : N.A Minimum Instruction Time : 0

The value of  $\begin{vmatrix} 441 & 442 & 443 \\ 445 & 446 & 447 \\ 449 & 450 & 451 \end{vmatrix}$  is

Options :

1. ✔ 0

2. ✘ 1

3. ✘ 4

4. ✘ 6

Question Number : 6 Question Id : 2106889212 Display Question Number : Yes Is Question Mandatory : No Calculator : None Response Time : N.A Think Time : N.A Minimum Instruction Time : 0

$$\frac{3x-1}{(x-1)(x-2)(x-3)} =$$

Options :

1. ✘  $\frac{2}{x-1} + \frac{5}{x-2} - \frac{4}{x-3}$

2. ✘  $\frac{-1}{x-1} + \frac{5}{x-2} - \frac{4}{x-3}$

3. ✘  $\frac{1}{x-1} + \frac{5}{x-2} + \frac{4}{x-3}$

4. ✔  $\frac{1}{x-1} - \frac{5}{x-2} + \frac{4}{x-3}$

Question Number : 7 Question Id : 2106889213 Display Question Number : Yes Is Question Mandatory : No Calculator : None Response Time : N.A Think Time : N.A Minimum Instruction Time : 0

$$\frac{5x+1}{(x+2)(x-1)} =$$

Options :

1. ✔  $\frac{3}{x+2} + \frac{2}{x-1}$

2. ✘  $\frac{3}{x+2} - \frac{2}{x-1}$

3. ✘  $\frac{-3}{x+2} + \frac{2}{x-1}$

4. ✘  $\frac{3}{x-2} + \frac{2}{x+1}$

Question Number : 8 Question Id : 2106889214 Display Question Number : Yes Is Question Mandatory : No Calculator : None Response Time : N.A Think Time : N.A Minimum Instruction Time : 0

$$\cos 100^\circ \cos 40^\circ + \sin 100^\circ \sin 40^\circ =$$

Options :

1. ✔  $\frac{1}{2}$

2. ✘  $-\frac{1}{2}$

3. ✘  $\frac{1}{4}$

4. ✘  $\frac{1}{8}$

Question Number : 9 Question Id : 2106889215 Display Question Number : Yes Is Question Mandatory : No Calculator : None Response Time : N.A Think Time : N.A Minimum Instruction Time : 0

If  $\sin\theta = \frac{3}{5}$ ,  $\theta$  is acute, then  $2\tan\theta + 3\sec\theta + 4\sec\theta \operatorname{cosec}\theta =$

Options :

1. ✘ -1

2. ✔  $\frac{163}{12}$

3. ✘  $\frac{-163}{12}$

4. ✘  $\frac{13}{12}$

Question Number : 10 Question Id : 2106889216 Display Question Number : Yes Is Question Mandatory : No Calculator : None Response Time : N.A Think Time : N.A Minimum Instruction Time : 0

If  $\tan^{-1}x + \tan^{-1}y + \tan^{-1}z = \frac{\pi}{2}$  then  $xy + yz + zx =$

Options :

1. ✘ -1

2. ✘ 3

3. ✘ 5



4. ✓ 1

Question Number : 11 Question Id : 2106889217 Display Question Number : Yes Is Question Mandatory : No Calculator : None Response Time : N.A Think Time : N.A Minimum Instruction Time : 0

If  $A = \frac{\pi}{6}$  and  $B = \frac{\pi}{3}$  then  $16\sin^3 A + 8\cos^3 B =$

Options :

1. ✓ 3

2. ✗ 1

3. ✗ -3

4. ✗ 0

Question Number : 12 Question Id : 2106889218 Display Question Number : Yes Is Question Mandatory : No Calculator : None Response Time : N.A Think Time : N.A Minimum Instruction Time : 0

If  $x + \frac{1}{x} = 2 \cos \theta$  then  $x^n + \frac{1}{x^n} =$

Options :

1. ✓  $2 \cos n\theta$

2. ✘  $-2 \cos n\theta$

3. ✘  $3 \cos \theta$

4. ✘  $2 \sin n\theta$

Question Number : 13 Question Id : 2106889219 Display Question Number : Yes Is Question Mandatory : No Calculator : None Response Time : N.A Think Time : N.A Minimum Instruction Time : 0

$$\cos \left[ \sin^{-1} \left( \frac{1}{2} \right) + \cos^{-1} \left( -\frac{\sqrt{3}}{2} \right) \right] =$$

Options :

1. ✘ 0

2. ✘ 1

3. ✘ 3

4. ✔ -1

Question Number : 14 Question Id : 2106889220 Display Question Number : Yes Is Question

**Mandatory : No Calculator : None Response Time : N.A Think Time : N.A Minimum Instruction Time : 0**

If  $\sin\alpha = \frac{15}{17}$ ,  $\cos\beta = \frac{12}{13}$  then  $\sin(\alpha + \beta) =$

**Options :**

1. ✘  $\frac{110}{105}$

2. ✘  $-\frac{121}{152}$

3. ✔  $\frac{220}{221}$

4. ✘  $\frac{5}{4}$

**Question Number : 15 Question Id : 2106889221 Display Question Number : Yes Is Question Mandatory : No Calculator : None Response Time : N.A Think Time : N.A Minimum Instruction Time : 0**

If  $x$  is an acute angle and  $\sin(x + 10^\circ) = \cos(3x - 68^\circ)$  then  $x =$

**Options :**

1. ✘  $48^\circ$

2. ✔  $37^\circ$

3. ✘  $38^0$

4. ✘  $10^0$

Question Number : 16 Question Id : 2106889222 Display Question Number : Yes Is Question Mandatory : No Calculator : None Response Time : N.A Think Time : N.A Minimum Instruction Time : 0

$$\tan^{-1}(2\sin 150^0) =$$

Options :

1. ✘  $\pi$

2. ✘  $3\pi$

3. ✘  $\frac{\pi}{2}$

4. ✔  $\frac{\pi}{4}$

Question Number : 17 Question Id : 2106889223 Display Question Number : Yes Is Question Mandatory : No Calculator : None Response Time : N.A Think Time : N.A Minimum Instruction Time : 0

The general solution of  $4\cos^2x - 3 = 0$  is

Options :

1. ✓  $2n\pi \pm \frac{\pi}{6}$

2. ✗  $2n\pi \pm \frac{7\pi}{6}$

3. ✗  $3n\pi \pm \frac{5\pi}{6}$

4. ✗  $2n\pi \pm \frac{11\pi}{6}$

Question Number : 18 Question Id : 2106889224 Display Question Number : Yes Is Question Mandatory : No Calculator : None Response Time : N.A Think Time : N.A Minimum Instruction Time : 0

$$\left(\frac{\sqrt{3}}{2} + \frac{i}{2}\right)^5 - \left(\frac{\sqrt{3}}{2} - \frac{i}{2}\right)^5 =$$

Options :

1. ✓  $i$

2. ✗  $-i$

3. ✘  $2i$

4. ✘  $-3i$

Question Number : 19 Question Id : 2106889225 Display Question Number : Yes Is Question Mandatory : No Calculator : None Response Time : N.A Think Time : N.A Minimum Instruction Time : 0

The modulus of the complex number  $(-1 - \sqrt{3}i)$  is

Options :

1. ✘ 1

2. ✘ 6

3. ✔ 2

4. ✘ 4

Question Number : 20 Question Id : 2106889226 Display Question Number : Yes Is Question Mandatory : No Calculator : None Response Time : N.A Think Time : N.A Minimum Instruction Time : 0

If the line  $2y = 5x + k$  is a tangent to the parabola  $y^2 = 6x$  then  $k =$

Options :

1. ✘  $\frac{2}{5}$

2. ✘  $\frac{3}{5}$

3. ✔  $\frac{6}{5}$

4. ✘  $\frac{7}{5}$

**Question Number : 21 Question Id : 2106889227 Display Question Number : Yes Is Question Mandatory : No Calculator : None Response Time : N.A Think Time : N.A Minimum Instruction Time : 0**

The length of the major axis of the ellipse:  $4x^2 + 3y^2 = 48$  is

**Options :**

1. ✘ 10

2. ✘ 11

3. ✔ 8

4. ✘ 12

Question Number : 22 Question Id : 2106889228 Display Question Number : Yes Is Question Mandatory : No Calculator : None Response Time : N.A Think Time : N.A Minimum Instruction Time : 0

The eccentricity of the hyperbola  $36x^2 - 25y^2 = 900$  is

Options :

1. ✓  $\frac{\sqrt{61}}{5}$

2. ✗  $\frac{9}{2}$

3. ✗  $\frac{3}{2}$

4. ✗  $\frac{5}{2}$

Question Number : 23 Question Id : 2106889229 Display Question Number : Yes Is Question Mandatory : No Calculator : None Response Time : N.A Think Time : N.A Minimum Instruction Time : 0

The length of the tangent from (1,3) to the circle  $x^2 + y^2 - 2x + 4y - 11 = 0$  is

Options :

1. ✗ 2



2. ✓ 3

3. ✘ 5

4. ✘ 4

**Question Number : 24 Question Id : 2106889230 Display Question Number : Yes Is Question Mandatory : No Calculator : None Response Time : N.A Think Time : N.A Minimum Instruction Time : 0**

If the line  $2x + \sqrt{6}y = 2$  touches the hyperbola  $x^2 - 2y^2 = 4$  then the point of contact is

**Options :**

1. ✘  $(4, \sqrt{6})$

2. ✓  $(4, -\sqrt{6})$

3. ✘  $(-4, 6)$

4. ✘  $(5, 7)$

**Question Number : 25 Question Id : 2106889231 Display Question Number : Yes Is Question Mandatory : No Calculator : None Response Time : N.A Think Time : N.A Minimum Instruction**

Time : 0

The equation of the parabola with focus at  $(-3,2)$  and vertex  $(-2,2)$  is

Options :

$$x^2 - 4x + 8y + 12 = 0$$

1. ✖

$$x^2 + 5x - 8y - 11 = 0$$

2. ✖

$$y^2 + 4x - 4y + 12 = 0$$

3. ✔

$$x^2 - 4x - 8y - 12 = 0$$

4. ✖

Question Number : 26 Question Id : 2106889232 Display Question Number : Yes Is Question Mandatory : No Calculator : None Response Time : N.A Think Time : N.A Minimum Instruction

Time : 0

$$\lim_{x \rightarrow 0} \frac{a^x - b^x}{x} =$$

Options :

$$1. \text{ ✖ } \log\left(\frac{b}{a}\right)$$

$$2. \text{ ✖ } 2\log\left(\frac{b}{a}\right)$$

3. ✓  $\log\left(\frac{a}{b}\right)$

4. ✗  $2\log\left(\frac{a}{b}\right)$

**Question Number : 27 Question Id : 2106889233 Display Question Number : Yes Is Question Mandatory : No Calculator : None Response Time : N.A Think Time : N.A Minimum Instruction Time : 0**

If  $x = a \left[ \cos t + \log \left( \tan \frac{t}{2} \right) \right]$ ,  $y = a \sin t$  then  $\frac{dy}{dx}$  is

**Options :**

1. ✗  $-\tan t$

2. ✓  $\tan t$

3. ✗  $\tan t + \sin t$

4. ✗  $\sin t$

**Question Number : 28 Question Id : 2106889234 Display Question Number : Yes Is Question Mandatory : No Calculator : None Response Time : N.A Think Time : N.A Minimum Instruction Time : 0**

If an error of 3% occurs in measuring the side of a cube then the percentage error in its volume is

Options :

1. ✘ 3

2. ✘ 7

3. ✘ 8

4. ✔ 9

Question Number : 29 Question Id : 2106889235 Display Question Number : Yes Is Question Mandatory : No Calculator : None Response Time : N.A Think Time : N.A Minimum Instruction Time : 0

The angle between the curves  $y = x^2 + 3x - 7$  and  $y^2 = 2x + 5$  at  $(2,3)$  is

Options :

1. ✔  $\tan \theta = 2$

2. ✘  $\sec \theta = 2$

3. ✘  $\cos \theta = 1$

4. ✘  $\sin \theta = 3$

Question Number : 30 Question Id : 2106889236 Display Question Number : Yes Is Question Mandatory : No Calculator : None Response Time : N.A Think Time : N.A Minimum Instruction Time : 0

If  $u = \log\left(\frac{x^2+y^2}{x+y}\right)$  then  $x \frac{\partial u}{\partial x} + y \frac{\partial u}{\partial y} =$

Options :

1. ✘ 2

2. ✘ 4

3. ✘ 5

4. ✔ 1

Question Number : 31 Question Id : 2106889237 Display Question Number : Yes Is Question Mandatory : No Calculator : None Response Time : N.A Think Time : N.A Minimum Instruction Time : 0

The interval in which the function  $f(x) = x^2 \log x$  is a decreasing function is

Options :

1. ✘  $(1, e^{-1/2})$

2. ✘  $(2, e^{-1/2})$

3. ✘  $(-\infty, 0)$

4. ✔  $(0, e^{-1/2})$

Question Number : 32 Question Id : 2106889238 Display Question Number : Yes Is Question Mandatory : No Calculator : None Response Time : N.A Think Time : N.A Minimum Instruction Time : 0

If  $z = e^{(ax+by)} f(ax - by)$  then  $b \frac{\partial z}{\partial x} + a \frac{\partial z}{\partial y} =$

Options :

1. ✘  $-2abz$

2. ✘  $3abz$

3. ✔  $2abz$

4. ✘  $5abz$

Question Number : 33 Question Id : 2106889239 Display Question Number : Yes Is Question Mandatory : No Calculator : None Response Time : N.A Think Time : N.A Minimum Instruction Time : 0

The volume of a spherical ball is increasing at the rate of  $4\pi$  cc/s, then the rate of increase of the radius, when the volume is  $288\pi$  cc is

**Options :**

1. ✘ 2 cm/sec
2. ✔  $1/36$  cm/sec
3. ✘  $1/4$  cm/sec
4. ✘ 6 cm/sec

**Question Number : 34 Question Id : 2106889240 Display Question Number : Yes Is Question Mandatory : No Calculator : None Response Time : N.A Think Time : N.A Minimum Instruction Time : 0**

The slope of the tangent to the curve  $y = 5x^2$  at the point  $x = -1$  is

**Options :**

1. ✘ 10
2. ✘ 7
3. ✔ -10
4. ✘

Question Number : 35 Question Id : 2106889241 Display Question Number : Yes Is Question Mandatory : No Calculator : None Response Time : N.A Think Time : N.A Minimum Instruction Time : 0

The extreme values of the function  $f(x) = x^3 - 9x^2 + 15x - 1$  are

Options :

1. ✓ 6,-26

2. ✗ 3,-26

3. ✗ 6,26

4. ✗ -6,-26

Question Number : 36 Question Id : 2106889242 Display Question Number : Yes Is Question Mandatory : No Calculator : None Response Time : N.A Think Time : N.A Minimum Instruction Time : 0

$$\int_0^2 \sqrt{4-x^2} dx =$$

Options :

1. ✗  $\frac{\pi}{2}$



2. ✘  $-\frac{\pi}{2}$

3. ✔  $\pi$

4. ✘  $-\pi$

**Question Number : 37 Question Id : 2106889243 Display Question Number : Yes Is Question Mandatory : No Calculator : None Response Time : N.A Think Time : N.A Minimum Instruction Time : 0**

The value of  $\int x\sqrt{x} dx$  on  $[0, \infty)$  is

**Options :**

1. ✔  $\frac{2}{5}x^{5/2} + c$

2. ✘  $-\frac{2}{5}x^{5/2} + c$

3. ✘  $\frac{2}{5}x^{-5/2} + c$

4. ✘  $\frac{2}{3}x^{3/2} + c$

Question Number : 38 Question Id : 2106889244 Display Question Number : Yes Is Question Mandatory : No Calculator : None Response Time : N.A Think Time : N.A Minimum Instruction Time : 0

The area enclosed between the curve  $y^2 = 4x$  and the line  $x = 2y$  is

Options :

1. ✖  $\frac{64}{5}$  sq. units

2. ✔  $\frac{64}{3}$  sq. units

3. ✖  $\frac{65}{4}$  sq. units

4. ✖  $\frac{63}{4}$  sq. units

Question Number : 39 Question Id : 2106889245 Display Question Number : Yes Is Question Mandatory : No Calculator : None Response Time : N.A Think Time : N.A Minimum Instruction Time : 0

$$\int \frac{dx}{\sqrt{4x^2 - 4x + 2}} =$$

Options :

1. ✖  $-\frac{1}{2} \sinh^{-1}(x - 1) + c$

2. ✘  $\frac{1}{2} \sinh^{-1}(2x + 1) + c$

3. ✔  $\frac{1}{2} \sinh^{-1}(2x - 1) + c$

4. ✘  $\frac{1}{2} \sinh^{-1}(3x - 1) + c$

Question Number : 40 Question Id : 2106889246 Display Question Number : Yes Is Question Mandatory : No Calculator : None Response Time : N.A Think Time : N.A Minimum Instruction Time : 0

$$\int_0^{\pi/2} \frac{\sin x}{1 + \cos^2 x} dx =$$

Options :

1. ✔  $\pi/4$

2. ✘  $-\pi/4$

3. ✘  $\pi/3$

4. ✘  $\pi/2$

Question Number : 41 Question Id : 2106889247 Display Question Number : Yes Is Question Mandatory : No Calculator : None Response Time : N.A Think Time : N.A Minimum Instruction Time : 0

The mean value of  $\frac{1}{4+x^2}$  on  $[-2,2]$  is

Options :

1. ✘  $\frac{\pi}{12}$

2. ✘  $-\frac{\pi}{2}$

3. ✘  $\frac{\pi}{2}$

4. ✔  $\frac{\pi}{16}$

Question Number : 42 Question Id : 2106889248 Display Question Number : Yes Is Question Mandatory : No Calculator : None Response Time : N.A Think Time : N.A Minimum Instruction Time : 0

$$\int_0^{\pi/4} \sqrt{1 + \sin 2x} dx =$$

Options :

1. ✘ -1

2. ✘ -3

3. ✘ 3

4. ✔ 1

**Question Number : 43 Question Id : 2106889249 Display Question Number : Yes Is Question Mandatory : No Calculator : None Response Time : N.A Think Time : N.A Minimum Instruction Time : 0**

The area enclosed by the curves  $y = 3x$  and  $y = 6x - x^2$  is

**Options :**

1. ✘  $\frac{7}{2}$  square units

2. ✘  $\frac{5}{2}$  square units

3. ✘  $\frac{3}{2}$  square units

4. ✔  $\frac{9}{2}$  square units

**Question Number : 44 Question Id : 2106889250 Display Question Number : Yes Is Question Mandatory : No Calculator : None Response Time : N.A Think Time : N.A Minimum Instruction Time : 0**

The value of  $\int \frac{e^x(1+x)}{(2+x)^2} dx$  on  $I \in R \setminus \{-2\}$  is

Options :

1. ✓  $\frac{e^x}{2+x} + c$

2. ✗  $-\frac{e^x}{2+x} + c$

3. ✗  $\frac{e^x}{2-x} + c$

4. ✗  $\frac{e^{3x}}{2+x} + c$

Question Number : 45 Question Id : 2106889251 Display Question Number : Yes Is Question Mandatory : No Calculator : None Response Time : N.A Think Time : N.A Minimum Instruction Time : 0

The solution of the homogeneous differential equation  $xy^2 dy - (x^3 + y^3) dx = 0$  is

Options :

1. ✗  $y^3 = -3x^3 \log(xc)$

2. ✗  $y^3 = 3x^3 \log(x/c)$

3. ✗

$$y^3 = 3x^3 \log(x^2 c)$$

4. ✓  $y^3 = 3x^3 \log(xc)$

**Question Number : 46 Question Id : 2106889252 Display Question Number : Yes Is Question Mandatory : No Calculator : None Response Time : N.A Think Time : N.A Minimum Instruction Time : 0**

The order and degree of the differential equation  $\left(\frac{dy}{dx}\right)^2 + 3\left(\frac{dy}{dx}\right) + 2 = 0$  is

**Options :**

Order=2, degree=2

1. ✗

Order=2, degree=1

2. ✗

order = 1, degree = 2

3. ✓

Order=3, degree=1

4. ✗

**Question Number : 47 Question Id : 2106889253 Display Question Number : Yes Is Question Mandatory : No Calculator : None Response Time : N.A Think Time : N.A Minimum Instruction Time : 0**

The necessary and the sufficient condition for the differential equation  $M(x, y)dx + N(x, y)dy = 0$  to be an exact equation is

Options :

1. ✘  $\frac{\partial M}{\partial x} = \frac{\partial N}{\partial y}$

2. ✔  $\frac{\partial M}{\partial y} = \frac{\partial N}{\partial x}$

3. ✘  $\frac{\partial M}{\partial y} = -\frac{\partial N}{\partial x}$

4. ✘  $\frac{\partial M}{\partial x} = -\frac{\partial N}{\partial y}$

Question Number : 48 Question Id : 2106889254 Display Question Number : Yes Is Question Mandatory : No Calculator : None Response Time : N.A Think Time : N.A Minimum Instruction Time : 0

The general solution of the differential equation  $\frac{dy}{dx} + \frac{y}{x} = y^2x$  is

Options :

1. ✔  $\frac{1}{xy} = -x + c$

2. ✘  $\frac{-1}{xy} = -x + c$

3. ✘  $\frac{2}{xy} = x + c$



4. ✘  $\frac{1}{y} = -x + c$

Question Number : 49 Question Id : 2106889255 Display Question Number : Yes Is Question Mandatory : No Calculator : None Response Time : N.A Think Time : N.A Minimum Instruction Time : 0

The solution of  $(D^2 + 10D + 25)y = 0$  is

Options :

1. ✔  $y = e^{-5x} (c_1x + c_2)$

2. ✘  $y = e^{3x}(c_1 \cos 2x + c_2 \sin 2x)$

3. ✘  $y = e^{3x}(c_1 \cos 2x - c_2 \sin 2x)$

4. ✘  $y = e^{3x}(c_1 \cos 3x + c_2 \sin 3x)$

Question Number : 50 Question Id : 2106889256 Display Question Number : Yes Is Question Mandatory : No Calculator : None Response Time : N.A Think Time : N.A Minimum Instruction Time : 0

The complementary function of  $(D^2 + 3D + 2)y = 8\sin 5x$  is

Options :

1. ✔  $c_1e^{-x} + c_2e^{-2x}$

$$c_1 e^x + c_2 e^{2x}$$

2. ✖

$$c_1 e^{-x} + c_2 e^{2x}$$

3. ✖

$$c_1 e^{2x} + c_2 e^{3x}$$

4. ✖

## Physics

|  |           |
|--|-----------|
| Section Id :   | 210688183 |
| Section Number :   | 2         |
| Mandatory or Optional :                                      | Mandatory |
| Number of Questions :  | 25        |
| Section Marks :  | 25        |
| Enable Mark as Answered Mark for Review and Clear Response : | Yes       |
| Maximum Instruction Time :                                   | 0         |
| Is Section Default? :  | null      |

Question Number : 51 Question Id : 2106889257 Display Question Number : Yes Is Question Mandatory : No Calculator : None Response Time : N.A Think Time : N.A Minimum Instruction Time : 0

If we choose velocity  $V$ , acceleration  $A$  and force  $F$  as fundamental physical quantities then how would you express angular momentum in terms of  $V$ ,  $A$  and  $F$ .

Options :

1.

✘  $F^1 A^{-1} V^1$

2. ✘  $F^1 A^0 V^1$

3. ✘  $F^1 A^{-1} V^2$

4. ✔  $F^1 A^{-2} V^3$

Question Number : 52 Question Id : 2106889258 Display Question Number : Yes Is Question Mandatory : No Calculator : None Response Time : N.A Think Time : N.A Minimum Instruction Time : 0

If the velocity of a body at any time 't' is given by the equation

$$v = A t^2 + B t + C, \text{ then the unit of A is}$$

Options :

1. ✘ metre/sec

2. ✘ metre/sec<sup>2</sup>

3. ✔ metre/sec<sup>3</sup>

4. ✘ metre

Question Number : 53 Question Id : 2106889259 Display Question Number : Yes Is Question

**Mandatory : No Calculator : None Response Time : N.A Think Time : N.A Minimum Instruction Time : 0**

If  $|\mathbf{A}| + |\mathbf{B}| = |\mathbf{C}|$  and  $\mathbf{A} + \mathbf{B} = \mathbf{C}$ , then the angle between vectors  $\mathbf{A}$  and  $\mathbf{B}$  is

**Options :**

1. ✘  $90^\circ$

2. ✘  $60^\circ$

3. ✔  $0^\circ$

4. ✘  $120^\circ$

**Question Number : 54 Question Id : 2106889260 Display Question Number : Yes Is Question Mandatory : No Calculator : None Response Time : N.A Think Time : N.A Minimum Instruction Time : 0**

The area of triangle with sides as  $\mathbf{A} = 2\mathbf{i} + 3\mathbf{j}$  and  $\mathbf{B} = \mathbf{i} + 4\mathbf{j}$  is

**Options :**

1. ✘ 5 units

2. ✘ 10 units

3. ✔ 2.5 units

4. ✘ 20 units

**Question Number : 55 Question Id : 2106889261 Display Question Number : Yes Is Question Mandatory : No Calculator : None Response Time : N.A Think Time : N.A Minimum Instruction Time : 0**

If the velocity of a body moving with uniform acceleration is doubled in  $t_1$  sec and tripled in  $t_2$  sec then

**Options :**

1. ✓  $t_2 = 2 t_1$

2. ✗  $t_1 = 2 t_2$

3. ✗  $t_1 t_2 = 2$

4. ✗  $t_2 = 3 t_1$

**Question Number : 56 Question Id : 2106889262 Display Question Number : Yes Is Question Mandatory : No Calculator : None Response Time : N.A Think Time : N.A Minimum Instruction Time : 0**

If a body travels half of its total path in the last second of its fall from rest then the height of its fall is (take  $g = 10 \text{ ms}^{-2}$ )

**Options :**

1. ✓ 57.1m

2. ✗ 28.26m

3. ✘ 64m

4. ✘ 45m

**Question Number : 57 Question Id : 2106889263 Display Question Number : Yes Is Question Mandatory : No Calculator : None Response Time : N.A Think Time : N.A Minimum Instruction Time : 0**

In Olympics, a javelin thrown at an angle  $45^\circ$  attains a maximum height of 30m, then the horizontal distance covered by the javelin is

**Options :**

1. ✘ 60m

2. ✔ 120m

3. ✘ 100m

4. ✘ 90m

**Question Number : 58 Question Id : 2106889264 Display Question Number : Yes Is Question Mandatory : No Calculator : None Response Time : N.A Think Time : N.A Minimum Instruction Time : 0**

The coefficient of friction between the floor and the wooden cube of side length 0.5m is 0.2. The coefficient of friction for a wooden cube of side length 1m is

**Options :**

1. ✓ 0.2

2. ✗ 0.5

3. ✗ 0.1

4. ✗ 0.4

**Question Number : 59 Question Id : 2106889265 Display Question Number : Yes Is Question Mandatory : No Calculator : None Response Time : N.A Think Time : N.A Minimum Instruction Time : 0**

The force required just to move a body up an inclined plane is double the force required just to prevent the body sliding down it. If The coefficient of friction is  $1/\sqrt{3}$ , then the angle of the plane is

**Options :**

1. ✗  $45^\circ$

2. ✗  $30^\circ$

3. ✗  $53^\circ$

4. ✓  $60^\circ$

**Question Number : 60 Question Id : 2106889266 Display Question Number : Yes Is Question Mandatory : No Calculator : None Response Time : N.A Think Time : N.A Minimum Instruction Time : 0**

If an ice block of mass 42Kg moves with initial velocity 4m/s on a rough surface of coefficient of friction 0.1. then the amount of ice melted as a result of friction before the block comes to rest is

**Options :**

1. ✘ 0.5 gm.

2. ✔ 1 gm.

3. ✘ 8 gm.

4. ✘ 16 gm.

**Question Number : 61 Question Id : 2106889267 Display Question Number : Yes Is Question Mandatory : No Calculator : None Response Time : N.A Think Time : N.A Minimum Instruction Time : 0**

A ship of mass  $3 \times 10^7$  Kg initially at rest is pulled by a force of  $5 \times 10^4$  N through a distance of 3m. Assuming that the resistance due to water is negligible, the speed of the ship is

**Options :**

1. ✘ 2 m/s

2. ✔ 0.1 m/s



3. ✘ 0.2 m/s

4. ✘ 10 m/s

**Question Number : 62 Question Id : 2106889268 Display Question Number : Yes Is Question Mandatory : No Calculator : None Response Time : N.A Think Time : N.A Minimum Instruction Time : 0**

When a force  $\mathbf{F} = 2\mathbf{i} + 4\mathbf{j} + 5\mathbf{k}$  newton acts on a body and produces a displacement of  $\mathbf{S} = 3\mathbf{i} + 2\mathbf{j} + \mathbf{k}$  metre., then the work done by this force is

**Options :**

1. ✘ 13 J

2. ✘ 15 J

3. ✘ 17 J

4. ✔ 19 J

**Question Number : 63 Question Id : 2106889269 Display Question Number : Yes Is Question Mandatory : No Calculator : None Response Time : N.A Think Time : N.A Minimum Instruction Time : 0**

An engine expends 45 HP in propelling a car along a level track at 15m/s. The total retarding force acting on the car is

**Options :**

1. ✓ 2238 N

2. ✗ 3900 N

3. ✗ 3228 N

4. ✗ 4280 N

**Question Number : 64 Question Id : 2106889270 Display Question Number : Yes Is Question Mandatory : No Calculator : None Response Time : N.A Think Time : N.A Minimum Instruction Time : 0**

Two bodies A and B of equal masses are suspended from two separate massless springs of spring constants  $K_1$  and  $K_2$  respectively. If the two bodies oscillate such that their maximum velocities are equal, the ratio of amplitude of A to that of B is

**Options :**

1. ✗  $\frac{K_1}{K_2}$

2. ✗  $\frac{K_2}{K_1}$

3. ✓  $\sqrt{\frac{K_2}{K_1}}$

4. ✗

$$\sqrt{\frac{K_1}{K_2}}$$

**Question Number : 65 Question Id : 2106889271 Display Question Number : Yes Is Question Mandatory : No Calculator : None Response Time : N.A Think Time : N.A Minimum Instruction Time : 0**

A block is on a piston which is moving vertically with a SHM of period 1sec. The amplitude of the motion at which block and the piston will separate is (take  $g = 10 \text{ ms}^{-2}$ )

**Options :**

1. ✓ 0.25m

2. ✗ 0.5m

3. ✗ 0.75m

4. ✗ 1m

**Question Number : 66 Question Id : 2106889272 Display Question Number : Yes Is Question Mandatory : No Calculator : None Response Time : N.A Think Time : N.A Minimum Instruction Time : 0**

A seconds pendulum is working in a lift. If the lift begins to fall freely, then what will be the time period of the pendulum in this case

**Options :**

1. ✗ 2 sec

2. ✘ 1 sec

3. ✘ 0

4. ✔ infinity

**Question Number : 67 Question Id : 2106889273 Display Question Number : Yes Is Question Mandatory : No Calculator : None Response Time : N.A Think Time : N.A Minimum Instruction Time : 0**

A tuning fork of frequency 90 hertz is sounded and moving towards an observer with a velocity equal to one-tenth the velocity of sound; the frequency of the note heard by the observer is

**Options :**

1. ✔ 100 Hz

2. ✘ 90 Hz

3. ✘ 80 Hz

4. ✘ 110 Hz

**Question Number : 68 Question Id : 2106889274 Display Question Number : Yes Is Question Mandatory : No Calculator : None Response Time : N.A Think Time : N.A Minimum Instruction Time : 0**

If the reverberation time of a class room of dimensions  $100 \times 30 \times 10 \text{ m}^3$  is 1.5 sec.

then the total absorption of the class room is

**Options :**

1. ✘ 2300 metric Sabine
2. ✔ 3400 metric Sabine
3. ✘ 1700 metric Sabine
4. ✘ 850 metric Sabine

**Question Number : 69 Question Id : 2106889275 Display Question Number : Yes Is Question Mandatory : No Calculator : None Response Time : N.A Think Time : N.A Minimum Instruction Time : 0**

The standard constant volume gas thermometer cannot use any vapour as working substance because

**Options :**

1. ✘ Vapours are likely to catch fire
2. ✔ Vapours are not perfect gases
3. ✘ It is difficult to obtain pure vapours
4. ✘ The properties are not constant over a long range of temperature

**Question Number : 70 Question Id : 2106889276 Display Question Number : Yes Is Question Mandatory : No Calculator : None Response Time : N.A Think Time : N.A Minimum Instruction Time : 0**

The equation of state corresponding to 14g of nitrogen( $N_2$ ) at pressure P and temperature T, when occupying a volume V, will be (R is universal gas constant)

**Options :**

1. ✘  $PV = 7RT$

2. ✔  $PV = \frac{1}{2} RT$

3. ✘  $PV = \frac{1}{4} RT$

4. ✘  $PV = 2 RT$

**Question Number : 71 Question Id : 2106889277 Display Question Number : Yes Is Question Mandatory : No Calculator : None Response Time : N.A Think Time : N.A Minimum Instruction Time : 0**

A vessel contains certain quantity of gas at a pressure of 80 cm of Hg. If  $\frac{2}{5}$ <sup>th</sup> of the mass of gas leaks out at the same temperature, then the pressure of remaining gas is

**Options :**

1. ✘ 40 cm of Hg

2.

✘ 32 cm of Hg

3. ✔ 48 cm of Hg

4. ✘ 20 cm of Hg

**Question Number : 72 Question Id : 2106889278 Display Question Number : Yes Is Question Mandatory : No Calculator : None Response Time : N.A Think Time : N.A Minimum Instruction Time : 0**

An ideal diatomic gas is heated at constant pressure. The fraction of the heat energy supplied to increase the internal energy of the gas is

**Options :**

1. ✘  $\frac{2}{5}$

2. ✘  $\frac{3}{5}$

3. ✘  $\frac{3}{7}$

4. ✔  $\frac{5}{7}$

**Question Number : 73 Question Id : 2106889279 Display Question Number : Yes Is Question Mandatory : No Calculator : None Response Time : N.A Think Time : N.A Minimum Instruction**

**Time : 0**

The distance between the atoms of a diatomic gas remains constant. Then its molar specific heat at constant volume is

**Options :**

1. ✓  $\frac{5}{2}R$

2. ✗  $\frac{3}{2}R$

3. ✗  $R$

4. ✗  $\frac{1}{2}R$

**Question Number : 74 Question Id : 2106889280 Display Question Number : Yes Is Question Mandatory : No Calculator : None Response Time : N.A Think Time : N.A Minimum Instruction**

**Time : 0**

In photo electric effect the energy of the emitted electrons is

**Options :**

1. ✗ Larger than that of incident photon

2. ✓ Smaller than that of incident photon

3. ✗ Same as that of incident photon



4. ✘ Proportional to the intensity of incident light

Question Number : 75 Question Id : 2106889281 Display Question Number : Yes Is Question Mandatory : No Calculator : None Response Time : N.A Think Time : N.A Minimum Instruction Time : 0

In water-air system for which colour the critical angle is maximum?

Options :

1. ✔ Red

2. ✘ Violet

3. ✘ Yellow

4. ✘ Same for all colours

## Chemistry

|  |           |
|--|-----------|
| Section Id :   | 210688184 |
| Section Number :   | 3         |
| Mandatory or Optional :                                      | Mandatory |
| Number of Questions :  | 25        |
| Section Marks :  | 25        |
| Enable Mark as Answered Mark for Review and Clear Response : | Yes       |

Maximum Instruction Time :

0

Is Section Default? :

null

Question Number : 76 Question Id : 2106889282 Display Question Number : Yes Is Question Mandatory : No Calculator : None Response Time : N.A Think Time : N.A Minimum Instruction Time : 0

The total number of 'm' values possible for a sublevel with  $l=3$  is

Options :

1. ✘ 3

2. ✘ 5

3. ✔ 7

4. ✘ 9

Question Number : 77 Question Id : 2106889283 Display Question Number : Yes Is Question Mandatory : No Calculator : None Response Time : N.A Think Time : N.A Minimum Instruction Time : 0

The value of Rydberg constant for hydrogen atom ( $R_H$ ) (in  $m^{-1}$ ) is

Options :

1. ✘  $1.09 \times 10^{-5}$

2. ✘  $1.09 \times 10^{-7}$

3. ✘  $1.09 \times 10^5$

4. ✔  $1.09 \times 10^7$

**Question Number : 78 Question Id : 2106889284 Display Question Number : Yes Is Question Mandatory : No Calculator : None Response Time : N.A Think Time : N.A Minimum Instruction Time : 0**

In which of the following, the orbitals are correctly arranged in the order of increasing energy?

**Options :**

1. ✘  $3d < 4s < 4d < 5p$

2. ✔  $4s < 3d < 5p < 4d$

3. ✘  $4s < 5p < 3d < 4d$

4. ✘  $3d < 4d < 4s < 5p$

**Question Number : 79 Question Id : 2106889285 Display Question Number : Yes Is Question Mandatory : No Calculator : None Response Time : N.A Think Time : N.A Minimum Instruction**

Time : 0

Identify the molecule in which central atom has octet of electrons.

Options :

1. ✓  $\text{H}_2\text{O}$

2. ✗  $\text{BeCl}_2$

3. ✗  $\text{BCl}_3$

4. ✗  $\text{PCl}_5$

Question Number : 80 Question Id : 2106889286 Display Question Number : Yes Is Question Mandatory : No Calculator : None Response Time : N.A Think Time : N.A Minimum Instruction Time : 0

The incorrect statement about an ionic compound is

Options :

1. ✗ It is readily soluble in water

2. ✓ It is a conductor in solid state

3. ✗ It has non directional ionic bond

4. ✘ It has high melting point

Question Number : 81 Question Id : 2106889287 Display Question Number : Yes Is Question Mandatory : No Calculator : None Response Time : N.A Think Time : N.A Minimum Instruction Time : 0

The weight of 0.01 moles of  $\text{KClO}_3$  (in g) is (K = 39u, Cl = 35.5 u, O = 16u)

Options :

1. ✔ 1.225

2. ✘ 2.45

3. ✘ 3.225

4. ✘ 1.205

Question Number : 82 Question Id : 2106889288 Display Question Number : Yes Is Question Mandatory : No Calculator : None Response Time : N.A Think Time : N.A Minimum Instruction Time : 0

100 ml of 0.1M HCl is mixed with 100 ml of 0.1M  $\text{H}_2\text{SO}_4$  and the solution is diluted to 1.0 L. the Molarity of the final solution is

Options :

1. ✘ 0.01 M

2. ✘ 0.02 M

3. ✔ 0.03 M

4. ✘ 0.04 M

**Question Number : 83 Question Id : 2106889289 Display Question Number : Yes Is Question Mandatory : No Calculator : None Response Time : N.A Think Time : N.A Minimum Instruction Time : 0**

The normality of 5.3% (w/v) solution of  $\text{Na}_2\text{CO}_3$  is (Na = 23u, C = 12u, O = 16u)

**Options :**

1. ✘ 0.5 N

2. ✘ 3 N

3. ✘ 2 N

4. ✔ 1 N

**Question Number : 84 Question Id : 2106889290 Display Question Number : Yes Is Question**

**Mandatory : No Calculator : None Response Time : N.A Think Time : N.A Minimum Instruction Time : 0**

Identify the substance which can act only as Lewis acid

**Options :**

1. ✘ HCl

2. ✔ AlCl<sub>3</sub>

3. ✘ NH<sub>3</sub>

4. ✘ H<sub>2</sub>O

**Question Number : 85 Question Id : 2106889291 Display Question Number : Yes Is Question Mandatory : No Calculator : None Response Time : N.A Think Time : N.A Minimum Instruction Time : 0**

At 25<sup>0</sup>C, 4.0 g of NaOH is Present in 2.0 L solution. The ionic product of water (in mol<sup>2</sup>/L<sup>2</sup>) at that temperature is

**Options :**

1. ✔  $1 \times 10^{-14}$

2. ✘  $1 \times 10^{-13}$

3. ✘  $1 \times 10^{-12}$

4. ✘  $5 \times 10^{-14}$

Question Number : 86 Question Id : 2106889292 Display Question Number : Yes Is Question Mandatory : No Calculator : None Response Time : N.A Think Time : N.A Minimum Instruction Time : 0

Which of the following is not a strong electrolyte?

Options :

1. ✘ HCl (aq)

2. ✘ H<sub>2</sub>SO<sub>4</sub>(aq)

3. ✘ CH<sub>3</sub>COONa(aq)

4. ✔ NH<sub>4</sub>OH(aq)

Question Number : 87 Question Id : 2106889293 Display Question Number : Yes Is Question Mandatory : No Calculator : None Response Time : N.A Think Time : N.A Minimum Instruction Time : 0



How many grams of copper is deposited on cathode, when 0.5F current is passed through 100 ml of 0.1 M  $\text{CuSO}_4$  solution? (Molecular Weight of  $\text{CuSO}_4 = 63.5\text{u}$ )

**Options :**

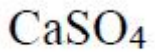
1. ✘ 63.5
2. ✘ 16.35
3. ✔ 15.875
4. ✘ 31.75

**Question Number : 88 Question Id : 2106889294 Display Question Number : Yes Is Question Mandatory : No Calculator : None Response Time : N.A Think Time : N.A Minimum Instruction Time : 0**

The electrolyte commonly used in salt bridge is

**Options :**

1. ✘  $\text{ZnCl}_2$
2. ✔  $\text{KCl}$
3. ✘  $\text{MgCl}_2$



4. ✖

Question Number : 89 Question Id : 2106889295 Display Question Number : Yes Is Question Mandatory : No Calculator : None Response Time : N.A Think Time : N.A Minimum Instruction Time : 0

At 25°C, the emf of the cell Zn|Zn<sup>2+</sup>(1M)||Cu<sup>2+</sup>(1M)|Cu is \_\_\_

(Given:  $E_{Zn^{2+}|Zn}^0 = -0.76$  V &  $E_{Cu^{2+}|Cu}^0 = +0.34$  V)

Options :

1. ✔ 1.1 V

2. ✖ -0.46 V

3. ✖ -1.1 V

4. ✖ 1.5 V

Question Number : 90 Question Id : 2106889296 Display Question Number : Yes Is Question Mandatory : No Calculator : None Response Time : N.A Think Time : N.A Minimum Instruction Time : 0

Water gets permanent hardness due to

Options :

1. ✖ NaCl

2. ✘ KCl

3. ✔ MgCl<sub>2</sub>

4. ✘ AlCl<sub>3</sub>

**Question Number : 91 Question Id : 2106889297 Display Question Number : Yes Is Question Mandatory : No Calculator : None Response Time : N.A Think Time : N.A Minimum Instruction Time : 0**

2.43 g of Ca (HCO<sub>3</sub>)<sub>2</sub> (molecular weight is 162u) is present in 20L water sample.

The degree of hardness of water (in mg/l) is \_\_

**Options :**

1. ✘ 150

2. ✔ 75

3. ✘ 200

4. ✘ 125

**Question Number : 92 Question Id : 2106889298 Display Question Number : Yes Is Question**

**Mandatory : No Calculator : None Response Time : N.A Think Time : N.A Minimum Instruction Time : 0**

In softening of hardwater by ion exchange resin method, the cation exchange resin contains

**Options :**

1. ✓ -COOH group
2. ✗ -OH group
3. ✗ -NH<sub>3</sub>OH group
4. ✗ -Al<sub>2</sub>Si<sub>2</sub>O<sub>8</sub> group

**Question Number : 93 Question Id : 2106889299 Display Question Number : Yes Is Question Mandatory : No Calculator : None Response Time : N.A Think Time : N.A Minimum Instruction Time : 0**

Corrosion is

**Options :**

1. ✗ A chemical process
2. ✗ An electrical process
3. ✓

An electrochemical process

4. ✘ A physical process

Question Number : 94 Question Id : 2106889300 Display Question Number : Yes Is Question Mandatory : No Calculator : None Response Time : N.A Think Time : N.A Minimum Instruction Time : 0

Galvanization is applying a coating of

Options :

1. ✔ Zn

2. ✘ Pb

3. ✘ Cr

4. ✘ Cu

Question Number : 95 Question Id : 2106889301 Display Question Number : Yes Is Question Mandatory : No Calculator : None Response Time : N.A Think Time : N.A Minimum Instruction Time : 0

The hetero atom present in neoprene is

Options :

1. ✘ S

2. ✘ O

3. ✔ Cl

4. ✘ F

Question Number : 96 Question Id : 2106889302 Display Question Number : Yes Is Question Mandatory : No Calculator : None Response Time : N.A Think Time : N.A Minimum Instruction Time : 0

The monomer of Teflon is

Options :

1. ✘  $C_2Cl_4$

2. ✘  $C_2Br_2$

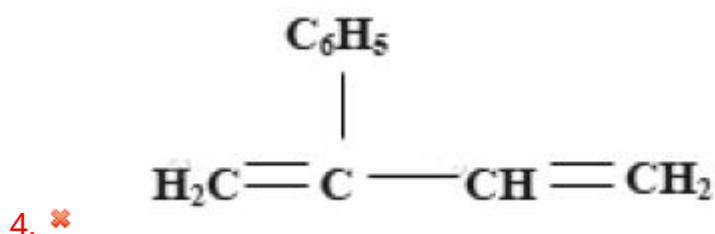
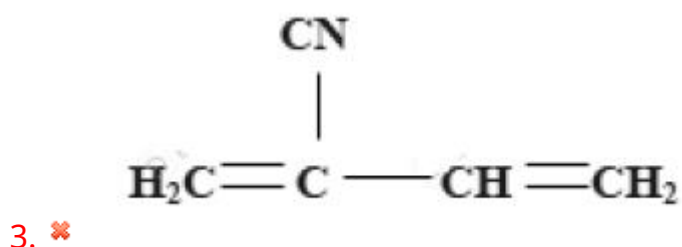
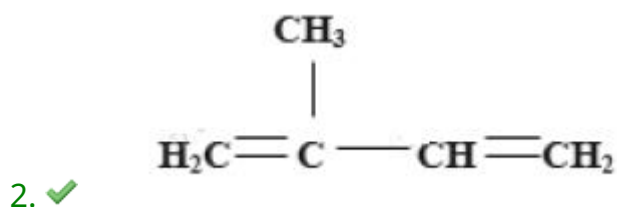
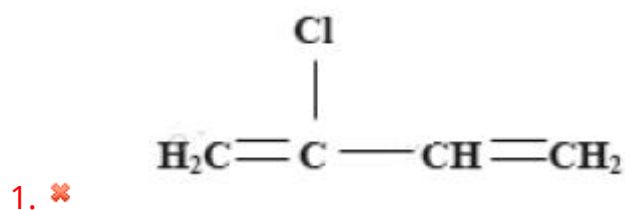
3. ✔  $C_2F_4$

4. ✘  $C_2F_6$

Question Number : 97 Question Id : 2106889303 Display Question Number : Yes Is Question Mandatory : No Calculator : None Response Time : N.A Think Time : N.A Minimum Instruction Time : 0

The structure of the monomer of natural rubber is

Options :



Question Number : 98 Question Id : 2106889304 Display Question Number : Yes Is Question Mandatory : No Calculator : None Response Time : N.A Think Time : N.A Minimum Instruction Time : 0

The major components of producer gas are

Options :

1. ✘ CO, H<sub>2</sub>

2. ✔ CO, N<sub>2</sub>

3. ✘ CH<sub>4</sub>, CO

4. ✘ CH<sub>4</sub>, N<sub>2</sub>

Question Number : 99 Question Id : 2106889305 Display Question Number : Yes Is Question Mandatory : No Calculator : None Response Time : N.A Think Time : N.A Minimum Instruction Time : 0

Depletion of ozone layer causes

Options :

1. ✘ Forest fires

2. ✘ Eutrophication

3. ✘ Bio-Magnification



## Skin Cancer

4. ✓

Question Number : 100 Question Id : 2106889306 Display Question Number : Yes Is Question Mandatory : No Calculator : None Response Time : N.A Think Time : N.A Minimum Instruction Time : 0

Which of the following is a secondary pollutant?

Options :

1. ✗ CO<sub>2</sub>

2. ✗ SO<sub>2</sub>

3. ✓ Peroxyacetyl nitrate

4. ✗ NO<sub>2</sub>

## Metallurgical Engineering

|                         |           |
|-------------------------|-----------|
| Section Id :            | 210688185 |
| Section Number :        | 4         |
| Mandatory or Optional : | Mandatory |
| Number of Questions :   | 100       |
| Section Marks :         | 100       |

|   |      |
|---|------|
| <b>Enable Mark as Answered Mark for Review and Clear Response :</b> | Yes  |
| <b>Maximum Instruction Time :</b>                                   | 0    |
| <b>Is Section Default? :</b>  | null |

**Question Number : 101 Question Id : 2106889307 Display Question Number : Yes Is Question Mandatory : No Calculator : None Response Time : N.A Think Time : N.A Minimum Instruction Time : 0**

A process by which particles of different sizes and specific gravities are sorted out into uniform groups is known as \_\_\_\_\_

**Options :**

1. ✘ Separation
2. ✔ Classification
3. ✘ Concentration
4. ✘ Capacity

**Question Number : 102 Question Id : 2106889308 Display Question Number : Yes Is Question Mandatory : No Calculator : None Response Time : N.A Think Time : N.A Minimum Instruction Time : 0**

What is the basis of separation of 'screening' process?

**Options :**

1. ✔ Particle size
- 2.

✘ Particle weight

3. ✘ Particle mass

4. ✘ Particle shape

**Question Number : 103 Question Id : 2106889309 Display Question Number : Yes Is Question Mandatory : No Calculator : None Response Time : N.A Think Time : N.A Minimum Instruction Time : 0**

Which of the following processes is not a part of Pyrometallurgy?

**Options :**

1. ✘ Calcination

2. ✘ Roasting

3. ✘ Smelting

4. ✔ Leaching

**Question Number : 104 Question Id : 2106889310 Display Question Number : Yes Is Question Mandatory : No Calculator : None Response Time : N.A Think Time : N.A Minimum Instruction Time : 0**

Which metal is extracted by leaching ?

**Options :**

1. ✘ Copper
2. ✘ Steel
3. ✘ Sulphur
4. ✔ Gold

**Question Number : 105 Question Id : 2106889311 Display Question Number : Yes Is Question Mandatory : No Calculator : None Response Time : N.A Think Time : N.A Minimum Instruction Time : 0**

What is the process used to extract sodium from halide ores such as sodium chloride(NaCl)?

**Options :**

1. ✘ Pyro metallurgy
2. ✘ Hydro metallurgy
3. ✔ Electro metallurgy
4. ✘ Magnetic separation

Question Number : 106 Question Id : 2106889312 Display Question Number : Yes Is Question Mandatory : No Calculator : None Response Time : N.A Think Time : N.A Minimum Instruction Time : 0

What is the role of a reducing agent in the extraction of metals?

Options :

1. ✘ To oxidize the metal
2. ✘ To increase the metal's melting point
3. ✘ To remove impurities from the ore
4. ✔ To donate electrons and reduce metal compounds to metals

Question Number : 107 Question Id : 2106889313 Display Question Number : Yes Is Question Mandatory : No Calculator : None Response Time : N.A Think Time : N.A Minimum Instruction Time : 0

Coal rank denotes \_\_\_\_\_ of coal.

Options :

1. ✘ Classification
2. ✔ Maturity

3. ✘ Chemical composition

4. ✘ Analysis

Question Number : 108 Question Id : 2106889314 Display Question Number : Yes Is Question Mandatory : No Calculator : None Response Time : N.A Think Time : N.A Minimum Instruction Time : 0

Dry quenching of coke aims at recovering \_\_\_\_\_ of coke.

Options :

1. ✔ Sensible heat

2. ✘ Blending

3. ✘ Preheating

4. ✘ Briquettes

Question Number : 109 Question Id : 2106889315 Display Question Number : Yes Is Question Mandatory : No Calculator : None Response Time : N.A Think Time : N.A Minimum Instruction Time : 0

Water gas mainly consists of \_\_\_\_\_

Options :

1. ✓ H<sub>2</sub> & CO

2. ✗ CH<sub>4</sub> & N<sub>2</sub>

3. ✗ N<sub>2</sub> & CO

4. ✗ N<sub>2</sub> & H<sub>2</sub>

**Question Number : 110 Question Id : 2106889316 Display Question Number : Yes Is Question Mandatory : No Calculator : None Response Time : N.A Think Time : N.A Minimum Instruction Time : 0**

Among the following coke types which coke has the highest purity ?

**Options :**

1. ✗ Beehive

2. ✗ Foundry

3. ✗ L T coke

4. ✓ Petroleum coke

**Question Number : 111 Question Id : 2106889317 Display Question Number : Yes Is Question**

**Mandatory : No Calculator : None Response Time : N.A Think Time : N.A Minimum Instruction Time : 0**

Radiation pyrometer works based on \_\_\_\_\_ law

**Options :**

1. ✘ Fourier

2. ✘ Plank

3. ✔ Stefan-Boltzmann

4. ✘ Thomson

**Question Number : 112 Question Id : 2106889318 Display Question Number : Yes Is Question Mandatory : No Calculator : None Response Time : N.A Think Time : N.A Minimum Instruction Time : 0**

What is the entropy of the system at equilibrium state?

**Options :**

1. ✘ Zero

2. ✘ Minimum

3. ✔ Maximum



4. ✘ Constant but not maximum

Question Number : 113 Question Id : 2106889319 Display Question Number : Yes Is Question Mandatory : No Calculator : None Response Time : N.A Think Time : N.A Minimum Instruction Time : 0

$PV^\gamma = \text{constant}$  is valid for ----- process

Options :

1. ✘ Isothermal

2. ✘ Isentropic

3. ✘ Isobaric

4. ✔ Adiabatic

Question Number : 114 Question Id : 2106889320 Display Question Number : Yes Is Question Mandatory : No Calculator : None Response Time : N.A Think Time : N.A Minimum Instruction Time : 0

Enthalpy H is defined as

Options :

1. ✘  $H = E - PV$

2.

✘  $H=F-TS$

3. ✔  $H=E+PV$

4. ✘  $H=P+TS$

Question Number : 115 Question Id : 2106889321 Display Question Number : Yes Is Question Mandatory : No Calculator : None Response Time : N.A Think Time : N.A Minimum Instruction Time : 0

The equation  $PV = nRT$  is best obeyed by gases at

Options :

1. ✔ Low pressure and high temperature

2. ✘ High pressure and low temperature

3. ✘ Low pressure and low temperature

4. ✘ High pressure and high temperature

Question Number : 116 Question Id : 2106889322 Display Question Number : Yes Is Question Mandatory : No Calculator : None Response Time : N.A Think Time : N.A Minimum Instruction Time : 0

Second law of thermodynamics is concerned with the

**Options :**

1. ✘ Amount of energy transferred

2. ✔ Direction of energy transfer

3. ✘ Irreversible process only

4. ✘ Non cyclic process only

**Question Number : 117 Question Id : 2106889323 Display Question Number : Yes Is Question Mandatory : No Calculator : None Response Time : N.A Think Time : N.A Minimum Instruction Time : 0**

Number of components(C), phases (P), and degrees of freedom (F) are related by Gibbs rule

**Options :**

1. ✔  $P+F-C=2$

2. ✘  $C=P-F+2$

3. ✘  $F=C-P-2$

4. ✘

P=F-C-2

Question Number : 118 Question Id : 2106889324 Display Question Number : Yes Is Question Mandatory : No Calculator : None Response Time : N.A Think Time : N.A Minimum Instruction Time : 0

Constant 'A' in Arrhenius equation is called

Options :

1. ✘ Rate constant

2. ✔ Arrhenius factor

3. ✘ Activity constant

4. ✘ Equilibrium Constant

Question Number : 119 Question Id : 2106889325 Display Question Number : Yes Is Question Mandatory : No Calculator : None Response Time : N.A Think Time : N.A Minimum Instruction Time : 0

At triple point (for one component system) vapor pressure of solid as compared to that of Liquid will be

Options :

1. ✘ More

2. ✘ Less

3. ✔ Same

4. ✘ Depends on system

**Question Number : 120 Question Id : 2106889326 Display Question Number : Yes Is Question Mandatory : No Calculator : None Response Time : N.A Think Time : N.A Minimum Instruction Time : 0**

Crystal Structure of Cementite

**Options :**

1. ✘ FCC

2. ✘ BCC

3. ✔ Orthorhombic

4. ✘ Tetragonal

**Question Number : 121 Question Id : 2106889327 Display Question Number : Yes Is Question Mandatory : No Calculator : None Response Time : N.A Think Time : N.A Minimum Instruction Time : 0**

Which of the following is not an age hardening alloy?

Options :

1. ✘ Al-Cu
2. ✘ Al-Mg-Si
3. ✔ Cu-Ni
4. ✘  $\beta$  titanium alloys

Question Number : 122 Question Id : 2106889328 Display Question Number : Yes Is Question Mandatory : No Calculator : None Response Time : N.A Think Time : N.A Minimum Instruction Time : 0

$Mg_2Si$  is an example of

Options :

1. ✘ Alloy
2. ✘ Electron Compound
3. ✔ Interstitial Compound
4. ✘ Ceramic

Question Number : 123 Question Id : 2106889329 Display Question Number : Yes Is Question Mandatory : No Calculator : None Response Time : N.A Think Time : N.A Minimum Instruction Time : 0

The atomic packing factor for the diamond cubic structure is

Options :

1. ✘ 0.74

2. ✘ 0.68

3. ✔ 0.34

4. ✘ 0.25

Question Number : 124 Question Id : 2106889330 Display Question Number : Yes Is Question Mandatory : No Calculator : None Response Time : N.A Think Time : N.A Minimum Instruction Time : 0

Relative amounts of phases in a region can be deduced using

Options :

1. ✘ Phase rule

2. ✔ Lever rule

3. ✘ Normality

4. ✘ Mole fraction

**Question Number : 125 Question Id : 2106889331 Display Question Number : Yes Is Question Mandatory : No Calculator : None Response Time : N.A Think Time : N.A Minimum Instruction Time : 0**

Maximum solubility of carbon in austenite phase at  $1147^{\circ}\text{C}$  is

**Options :**

1. ✘ 0.02 %

2. ✘ 4.3 %

3. ✔ 2.1%

4. ✘ 0.5%

**Question Number : 126 Question Id : 2106889332 Display Question Number : Yes Is Question Mandatory : No Calculator : None Response Time : N.A Think Time : N.A Minimum Instruction Time : 0**

Which of the following is Curie temperature in Iron-Iron carbide phase diagram?



**Options :**

1. ✘ 727<sup>0</sup> C

2. ✔ 768<sup>0</sup> C

3. ✘ 910<sup>0</sup> C

4. ✘ 1258<sup>0</sup> C

**Question Number : 127 Question Id : 2106889333 Display Question Number : Yes Is Question Mandatory : No Calculator : None Response Time : N.A Think Time : N.A Minimum Instruction Time : 0**

Time temperature transformation diagrams are drawn for

**Options :**

1. ✘ Iron

2. ✘ Manganese

3. ✘ Any alloy

4. ✔ Only steel

Question Number : 128 Question Id : 2106889334 Display Question Number : Yes Is Question Mandatory : No Calculator : None Response Time : N.A Think Time : N.A Minimum Instruction Time : 0

Which is the primary element used for making stainless steel alloy?

Options :

1. ✓ Chromium

2. ✘ Zirconium

3. ✘ Vanadium

4. ✘ Indium

Question Number : 129 Question Id : 2106889335 Display Question Number : Yes Is Question Mandatory : No Calculator : None Response Time : N.A Think Time : N.A Minimum Instruction Time : 0

Graphite flakes are present in \_\_\_\_\_ Cast iron

Options :

1. ✘ White

2. ✓ Grey

3. ✘ Malleable

4. ✘ Nodular

**Question Number : 130 Question Id : 2106889336 Display Question Number : Yes Is Question Mandatory : No Calculator : None Response Time : N.A Think Time : N.A Minimum Instruction Time : 0**

Alloy containing copper, tin, and zinc is known as

**Options :**

1. ✔ Gunmetal

2. ✘ Bronze

3. ✘ Brass

4. ✘ Cupro-nickel

**Question Number : 131 Question Id : 2106889337 Display Question Number : Yes Is Question Mandatory : No Calculator : None Response Time : N.A Think Time : N.A Minimum Instruction Time : 0**

The process used to eliminate retained austenite is

**Options :**

1. ✘ Martempering
2. ✘ Austempering
3. ✔ Sub-zero treatment
4. ✘ Patenting

**Question Number : 132 Question Id : 2106889338 Display Question Number : Yes Is Question Mandatory : No Calculator : None Response Time : N.A Think Time : N.A Minimum Instruction Time : 0**

Which of the following processes is used to reduce the brittleness of hardened steel?

**Options :**

1. ✘ Annealing
2. ✘ Normalizing
3. ✘ Spheroidizing
4. ✔ Tempering

Question Number : 133 Question Id : 2106889339 Display Question Number : Yes Is Question Mandatory : No Calculator : None Response Time : N.A Think Time : N.A Minimum Instruction Time : 0

Which of the following is formed less when cooling rate is decreased?

Options :

1. ✘ Pearlite
2. ✘ Fine pearlite
3. ✘ Bainite
4. ✔ Martensite

Question Number : 134 Question Id : 2106889340 Display Question Number : Yes Is Question Mandatory : No Calculator : None Response Time : N.A Think Time : N.A Minimum Instruction Time : 0

Match the following and choose right option

- |                                       |   |
|---------------------------------------|---|
| P. Annealing                          | 1.Coarse pearlite                         |
| Q. Normalising                        | 2.Fine pearlite                           |
| R.Subcritical annealing for long time | 3. Tempered Martensite                    |
| S. Martempering                       | 4.Spherodised cementite in ferrite matrix |

Options :

1. ✘ P-1, Q-4, R-3, S-2

2. ✘ P-2, Q-3, R-1, S-4

3. ✘ P-4, Q-1, R-2, S-3

4. ✔ P-1, Q-2, R-4, S-3

**Question Number : 135 Question Id : 2106889341 Display Question Number : Yes Is Question Mandatory : No Calculator : None Response Time : N.A Think Time : N.A Minimum Instruction Time : 0**

Assertion: Hardneability of steel can be increased by adding certain alloying elements

Reason: The alloying elements can provide a fine dispersion of alloy carbides

**Options :**

1. ✔ Both Assertion and Reason are true but reason is not a correct explanation for assertion

2. ✘ Both Assertion and Reason are false

3. ✘ Both Assertion and Reason are true, reason is correct explanation for Assertion

4. ✘ Assertion is true but reason is false

**Question Number : 136 Question Id : 2106889342 Display Question Number : Yes Is Question**

**Mandatory : No Calculator : None Response Time : N.A Think Time : N.A Minimum Instruction Time : 0**

In Jomminy End Quench Test as the distance from the sample to water jet increases Hardenability

**Options :**

1. ✘ Remains same
2. ✘ Increases initially then decreases
3. ✔ Decreases
4. ✘ Increases

**Question Number : 137 Question Id : 2106889343 Display Question Number : Yes Is Question Mandatory : No Calculator : None Response Time : N.A Think Time : N.A Minimum Instruction Time : 0**

Arrange the following in terms of increasing severity of quench

- P. Oil quenching
- Q. Water quenching
- R. Water quenching with violent agitation
- S. Brine quenching

**Options :**

1. ✔  $P < Q < R < S$
2. ✘

$$Q < R < P < S$$

3. ✘  $P < Q < S < R$

4. ✘  $Q < P < R < S$

**Question Number : 138 Question Id : 2106889344 Display Question Number : Yes Is Question Mandatory : No Calculator : None Response Time : N.A Think Time : N.A Minimum Instruction Time : 0**

In an isothermal curve, which of the following is true when the temperature is increased?

**Options :**

1. ✔ The curve shifts rightward

2. ✘ The curve shifts leftward

3. ✘ The curve goes down

4. ✘ The curve goes up

**Question Number : 139 Question Id : 2106889345 Display Question Number : Yes Is Question Mandatory : No Calculator : None Response Time : N.A Think Time : N.A Minimum Instruction Time : 0**



Bainite has

**Options :**

1. ✘ The same morphology as austenite
2. ✔ A non lamellar morphology of ferrite and cementite
3. ✘ The coarsest morphology among all the products from austenite
4. ✘ Needle like structure

**Question Number : 140 Question Id : 2106889346 Display Question Number : Yes Is Question Mandatory : No Calculator : None Response Time : N.A Think Time : N.A Minimum Instruction Time : 0**

The process of deforming the steel at liquid nitrogen temperature is

**Options :**

1. ✘ Ausforming
2. ✔ Cryoforming
3. ✘ Tempering
4. ✘

✘ Austenizing

Question Number : 141 Question Id : 2106889347 Display Question Number : Yes Is Question Mandatory : No Calculator : None Response Time : N.A Think Time : N.A Minimum Instruction Time : 0

\_\_\_\_\_ is not a thermo mechanical treatment

Options :

1. ✓ Austempering

2. ✘ Cryoforming

3. ✘ Ausforming

4. ✘ Isoforming

Question Number : 142 Question Id : 2106889348 Display Question Number : Yes Is Question Mandatory : No Calculator : None Response Time : N.A Think Time : N.A Minimum Instruction Time : 0

Which of the following phase will be resulted when the transformation temperature of steel is in the range of 100 °C to 300 °C?

Options :

1. ✘ Austenite

2. ✘ Pearlite

3. ✘ Bainite

4. ✔ Martensite

**Question Number : 143 Question Id : 2106889349 Display Question Number : Yes Is Question Mandatory : No Calculator : None Response Time : N.A Think Time : N.A Minimum Instruction Time : 0**

The maximum temperature attained in steel melting shop furnace of either type is not more than \_\_\_\_\_ degree Celsius

**Options :**

1. ✘ 1300

2. ✘ 1500

3. ✔ 1800

4. ✘ 1700

**Question Number : 144 Question Id : 2106889350 Display Question Number : Yes Is Question**

**Mandatory : No Calculator : None Response Time : N.A Think Time : N.A Minimum Instruction Time : 0**

With increase in steel melting furnace temperature, the slag viscosity

**Options :**

1. ✘ Increases
2. ✔ Decreases
3. ✘ Remains same
4. ✘ May increase or decrease, depends on the slag composition

**Question Number : 145 Question Id : 2106889351 Display Question Number : Yes Is Question Mandatory : No Calculator : None Response Time : N.A Think Time : N.A Minimum Instruction Time : 0**

Tap to tap time is the maximum in the case of

**Options :**

1. ✘ L.D converter
2. ✘ Kaldo process
3. ✔ Bessemer converter

Open hearth

4. ✘

**Question Number : 146 Question Id : 2106889352 Display Question Number : Yes Is Question Mandatory : No Calculator : None Response Time : N.A Think Time : N.A Minimum Instruction Time : 0**

Which among these is not an autogenous process?

**Options :**

1. ✘ L.D converter

2. ✔ Open hearth

3. ✘ Bessemer converter

4. ✘ Basic oxygen furnace

**Question Number : 147 Question Id : 2106889353 Display Question Number : Yes Is Question Mandatory : No Calculator : None Response Time : N.A Think Time : N.A Minimum Instruction Time : 0**

Slag basicity is the ratio of

**Options :**

1. ✘  $\text{SiO}_2$  to  $\text{CaO}$

2. ✘ Cao to SiO<sub>2</sub>

3. ✔ Basic to acid oxides

4. ✘ Acidic to basic oxides

**Question Number : 148 Question Id : 2106889354 Display Question Number : Yes Is Question Mandatory : No Calculator : None Response Time : N.A Think Time : N.A Minimum Instruction Time : 0**

In a basic steel making furnace, the

**Options :**

1. ✔ Refractory lining is basic in nature and Flux used is necessarily basic

2. ✘ Slag is highly acidic in nature.

3. ✘ Flux used is necessarily basic

4. ✘ Flux used is necessarily acidic

**Question Number : 149 Question Id : 2106889355 Display Question Number : Yes Is Question Mandatory : No Calculator : None Response Time : N.A Think Time : N.A Minimum Instruction**

**Time : 0**

The process of stopping the furnace operation at the end of its campaign life is called

**Options :**

1. ✘ Fanning
2. ✘ Coke rush
3. ✔ Blowing out
4. ✘ Blowing in

**Question Number : 150 Question Id : 2106889356 Display Question Number : Yes Is Question Mandatory : No Calculator : None Response Time : N.A Think Time : N.A Minimum Instruction Time : 0**

The maximum heat generated in the Blast furnace is due to

**Options :**

1. ✔ Reaction of Oxygen with Carbon
2. ✘ Burners
3. ✘ Blast furnace design
4. ✘

## Reaction of gaunge with dolomite

**Question Number : 151 Question Id : 2106889357 Display Question Number : Yes Is Question Mandatory : No Calculator : None Response Time : N.A Think Time : N.A Minimum Instruction Time : 0**

A large amount of material that gets stuck to the furnace wall apparently as a single block, mostly in top portion of bosh is called \_\_\_\_?

**Options :**

1. ✘ Hanging
2. ✔ Scaffolding
3. ✘ Slipping
4. ✘ Chilled hearth

**Question Number : 152 Question Id : 2106889358 Display Question Number : Yes Is Question Mandatory : No Calculator : None Response Time : N.A Think Time : N.A Minimum Instruction Time : 0**

How can channeling in a blast furnace be avoided?

**Options :**

1. ✘ Using fines as charge material



Having a good permeability of the bed through uniform burden distribution

2. ✓

3. ✘ Using lump ores for high bed permeability

Having a high blast pressure

4. ✘

**Question Number : 153 Question Id : 2106889359 Display Question Number : Yes Is Question Mandatory : No Calculator : None Response Time : N.A Think Time : N.A Minimum Instruction Time : 0**

High top pressure \_\_\_\_\_ the coke rate.

**Options :**

1. ✘ Increases

2. ✓ Decreases

3. ✘ No impact

4. ✘ Initially increases and then decreases

**Question Number : 154 Question Id : 2106889360 Display Question Number : Yes Is Question Mandatory : No Calculator : None Response Time : N.A Think Time : N.A Minimum Instruction**

Time : 0

Reduction ratio of hematite is \_\_\_\_\_ than that of magnetite

Options :

1. ✘ Faster
2. ✔ Slower
3. ✘ Equal
4. ✘ Very Faster

Question Number : 155 Question Id : 2106889361 Display Question Number : Yes Is Question Mandatory : No Calculator : None Response Time : N.A Think Time : N.A Minimum Instruction Time : 0

Copper smelting is carried out at a temperature of \_

Options :

1. ✔ 1200°C
2. ✘ 1300°C
3. ✘ 850°C
4. ✘

1300°C

Question Number : 156 Question Id : 2106889362 Display Question Number : Yes Is Question Mandatory : No Calculator : None Response Time : N.A Think Time : N.A Minimum Instruction Time : 0

Parke's process is used for the elimination of

Options :

1. ✘ Copper from Silver

2. ✘ Lead from Zinc

3. ✔ Lead from Silver

4. ✘ Iron from Silver

Question Number : 157 Question Id : 2106889363 Display Question Number : Yes Is Question Mandatory : No Calculator : None Response Time : N.A Think Time : N.A Minimum Instruction Time : 0

The main constituent of bauxite is

Options :

1. ✔  $\text{Al}_2\text{O}_3$

2. ✘  $\text{Al}_2(\text{SO}_4)_3$

3. ✘  $\text{CaSO}_4$

4. ✘  $\text{Na}_3\text{AlF}_6$

**Question Number : 158 Question Id : 2106889364 Display Question Number : Yes Is Question Mandatory : No Calculator : None Response Time : N.A Think Time : N.A Minimum Instruction Time : 0**

Which of the following are the ores of zinc?

**Options :**

1. ✔ Calamine and zinc blend

2. ✘ Zinc blend and cerussite

3. ✘ Calomine and siderate

4. ✘ Zinc blend and carnallite

**Question Number : 159 Question Id : 2106889365 Display Question Number : Yes Is Question Mandatory : No Calculator : None Response Time : N.A Think Time : N.A Minimum Instruction Time : 0**

The ternary alloy that is produced in Pidgeon process is

Options :

1. ✘ Ca-Si-Fe
2. ✔ Ca-Si-Mg
3. ✘ Ca-Fe-Mg
4. ✘ Fe-Si-Mg

Question Number : 160 Question Id : 2106889366 Display Question Number : Yes Is Question Mandatory : No Calculator : None Response Time : N.A Think Time : N.A Minimum Instruction Time : 0

Which of the following is not an ore of magnesium?

Options :

1. ✘ Carnallite
2. ✘ Magnesite
3. ✘ Dolomite
4. ✔ Gypsum

Question Number : 161 Question Id : 2106889367 Display Question Number : Yes Is Question Mandatory : No Calculator : None Response Time : N.A Think Time : N.A Minimum Instruction Time : 0

The binder that is used as a catalyst for preferential chlorination of Ilmenite is

Options :

1. ✘ Asphalt
2. ✘ Tar
3. ✘ Starch
4. ✔ Ferric chloride

Question Number : 162 Question Id : 2106889368 Display Question Number : Yes Is Question Mandatory : No Calculator : None Response Time : N.A Think Time : N.A Minimum Instruction Time : 0

Common mineral of Zircon is?

Options :

1. ✘  $\text{Al}_2(\text{SO}_4)_3$
2. ✔  $\text{ZrSiO}_4$

3. ✘ ZrSiO

4. ✘ ZrSi

**Question Number : 163 Question Id : 2106889369 Display Question Number : Yes Is Question Mandatory : No Calculator : None Response Time : N.A Think Time : N.A Minimum Instruction Time : 0**

Which of the following is an ore of Thorium?

**Options :**

1. ✘ Carnallite

2. ✘ Magnesite

3. ✘ Dolomite

4. ✔ Monazite

**Question Number : 164 Question Id : 2106889370 Display Question Number : Yes Is Question Mandatory : No Calculator : None Response Time : N.A Think Time : N.A Minimum Instruction Time : 0**

The theoretical percentage of alumina in gibbsite is

**Options :**

1. ✔

65.4

2. ✘ 85.4

3. ✘ 75.4

4. ✘ 55.4

**Question Number : 165 Question Id : 2106889371 Display Question Number : Yes Is Question Mandatory : No Calculator : None Response Time : N.A Think Time : N.A Minimum Instruction Time : 0**

The ability of the material to resist stress without failure is called

**Options :**

1. ✔ Strength

2. ✘ Hardness

3. ✘ Toughness

4. ✘ Stiffness

**Question Number : 166 Question Id : 2106889372 Display Question Number : Yes Is Question**



**Mandatory : No Calculator : None Response Time : N.A Think Time : N.A Minimum Instruction Time : 0**

What are the metal requirements to have creep resistance property?

**Options :**

1. ✘ Low melting point
2. ✔ High Oxidation resistance
3. ✘ Low Oxidation resistance
4. ✘ Brittleness

**Question Number : 167 Question Id : 2106889373 Display Question Number : Yes Is Question Mandatory : No Calculator : None Response Time : N.A Think Time : N.A Minimum Instruction Time : 0**

The indenter used in Brinell hardness test is a

**Options :**

1. ✔ Steel Ball
2. ✘ Diamond cone
3. ✘ Diamond pyramid

4. ✘ Steel cylinder

Question Number : 168 Question Id : 2106889374 Display Question Number : Yes Is Question Mandatory : No Calculator : None Response Time : N.A Think Time : N.A Minimum Instruction Time : 0

Pyramid type diamond indenter is used in

Options :

1. ✘ Brinell hardness tester

2. ✘ Rockwell hardness tester

3. ✔ Vickers hardness tester

4. ✘ Rebound hardness tester

Question Number : 169 Question Id : 2106889375 Display Question Number : Yes Is Question Mandatory : No Calculator : None Response Time : N.A Think Time : N.A Minimum Instruction Time : 0

Permanent deformation of material with respect to time due to constant load and variable temperature is

Options :

1. ✘ Elasticity

2. ✘ Hardness

3. ✘ Strength

4. ✔ Creep

**Question Number : 170 Question Id : 2106889376 Display Question Number : Yes Is Question Mandatory : No Calculator : None Response Time : N.A Think Time : N.A Minimum Instruction Time : 0**

Which of the following types of rays are used in radiography for the inspection of castings?

**Options :**

1. ✔ X- rays

2. ✘ Infrared rays

3. ✘ Ultraviolet rays

4. ✘ Visible ray

**Question Number : 171 Question Id : 2106889377 Display Question Number : Yes Is Question Mandatory : No Calculator : None Response Time : N.A Think Time : N.A Minimum Instruction Time : 0**

Which of the following methods of NDT requires leak proofing of casting before inspection?

**Options :**

1. ✘ Impact test
2. ✘ Visual inspection
3. ✘ Sound test
4. ✔ Pressure test

**Question Number : 172 Question Id : 2106889378 Display Question Number : Yes Is Question Mandatory : No Calculator : None Response Time : N.A Think Time : N.A Minimum Instruction Time : 0**

Which of the following terms changes in the eddy current testing method for the detection of defects?

**Options :**

1. ✘ Resistance
2. ✘ Impedance
3. ✔ Conductivity
4. ✘ Capacitance

Question Number : 173 Question Id : 2106889379 Display Question Number : Yes Is Question Mandatory : No Calculator : None Response Time : N.A Think Time : N.A Minimum Instruction Time : 0

Which of the following is true for metals?

Options :

1. ✘ Twin boundary energy > grain boundary energy > surface energy
2. ✘ Grain boundary energy > twin boundary energy > surface energy
3. ✔ Surface energy > grain boundary energy > twin boundary energy
4. ✘ Twin boundary energy > surface energy > grain boundary energy

Question Number : 174 Question Id : 2106889380 Display Question Number : Yes Is Question Mandatory : No Calculator : None Response Time : N.A Think Time : N.A Minimum Instruction Time : 0

A truly sessile dislocation in a F.C.C material is

Options :

1. ✘ shockley partial
2. ✘ lomer dislocation

3. ✓ Frank partial

4. ✗ lomer-cottrell dislocation

Question Number : 175 Question Id : 2106889381 Display Question Number : Yes Is Question Mandatory : No Calculator : None Response Time : N.A Think Time : N.A Minimum Instruction Time : 0

Usually Hot working of metal is carried out at temperature \_\_\_ of Melting Temperature ( $T_m$ )

Options :

1. ✗  $0.2T_m$

2. ✓  $0.6 T_m$

3. ✗  $0.4 T_m$

4. ✗  $1.2 T_m$

Question Number : 176 Question Id : 2106889382 Display Question Number : Yes Is Question Mandatory : No Calculator : None Response Time : N.A Think Time : N.A Minimum Instruction Time : 0

The strain in hot working is.

Options :

1.

✓ 0.5- 1

2. ✘ 1-2

3. ✘ 2-4

4. ✘ 4.5-8.5

**Question Number : 177 Question Id : 2106889383 Display Question Number : Yes Is Question Mandatory : No Calculator : None Response Time : N.A Think Time : N.A Minimum Instruction Time : 0**

Driving force for grain growth after completion of recrystallization is

**Options :**

1. ✓ Stored energy of cold work

2. ✘ Vacancy concentration

3. ✘ Dislocation density in the crystal

4. ✘ Grain boundary curvature

**Question Number : 178 Question Id : 2106889384 Display Question Number : Yes Is Question Mandatory : No Calculator : None Response Time : N.A Think Time : N.A Minimum Instruction**

**Time : 0**

Movement of jogs can produce

**Options :**

1. ✓ Vacancies
2. ✗ Interstitial
3. ✗ Grain boundary sliding
4. ✗ Grain boundary migration

**Question Number : 179 Question Id : 2106889385 Display Question Number : Yes Is Question Mandatory : No Calculator : None Response Time : N.A Think Time : N.A Minimum Instruction**

**Time : 0**

Region of disorder created by movement of dislocations in superlattice is called

**Options :**

1. ✗ Twin
2. ✗ Stacking fault
3. ✓ Anti-phase boundary



Orowon loop

4. ✘

**Question Number : 180 Question Id : 2106889386 Display Question Number : Yes Is Question Mandatory : No Calculator : None Response Time : N.A Think Time : N.A Minimum Instruction Time : 0**

Which of the following articles cannot be made from rolling?

**Options :**

Rails

1. ✘

Cups

2. ✔

Bars

3. ✘

Plates

4. ✘

**Question Number : 181 Question Id : 2106889387 Display Question Number : Yes Is Question Mandatory : No Calculator : None Response Time : N.A Think Time : N.A Minimum Instruction Time : 0**

Which of the following process belongs to sheet metal forming?

**Options :**

Deep drawing

1. ✔

2. ✘

Rolling

3. ✘ Forging

4. ✘ Extrusion

**Question Number : 182 Question Id : 2106889388 Display Question Number : Yes Is Question Mandatory : No Calculator : None Response Time : N.A Think Time : N.A Minimum Instruction Time : 0**

In which of the following atomization process very high purity powders are obtained ?

**Options :**

1. ✘ Water atomization

2. ✔ Gas atomization

3. ✘ Vacuum atomization

4. ✘ Centrifugal atomization

**Question Number : 183 Question Id : 2106889389 Display Question Number : Yes Is Question Mandatory : No Calculator : None Response Time : N.A Think Time : N.A Minimum Instruction Time : 0**

For shell moulding, the sand should have a GFN of \_\_\_\_\_ approximately

**Options :**

1. ✘ 35
2. ✘ 25-50
3. ✔ 50-100
4. ✘ 15

**Question Number : 184 Question Id : 2106889390 Display Question Number : Yes Is Question Mandatory : No Calculator : None Response Time : N.A Think Time : N.A Minimum Instruction Time : 0**

The sand mass does not fall out of the moulding box but is held firmly in it when the moulding box is lifted. This is due to the property of \_\_\_\_\_

**Options :**

1. ✘ Porosity of sand
2. ✔ Adhesiveness of sand
3. ✘ Refractoriness of sand
4. ✘ Plasticity of sand

**Question Number : 185 Question Id : 2106889391 Display Question Number : Yes Is Question Mandatory : No Calculator : None Response Time : N.A Think Time : N.A Minimum Instruction Time : 0**

The material which is responsible for strength of the mould in CO<sub>2</sub> moulding process is

**Options :**

1. ✓ Silica grains
2. ✗ Silica gel
3. ✗ Molasses
4. ✗ Zirconia

**Question Number : 186 Question Id : 2106889392 Display Question Number : Yes Is Question Mandatory : No Calculator : None Response Time : N.A Think Time : N.A Minimum Instruction Time : 0**

The chief advantage of die-casting is

**Options :**

1. ✗ Possibility of incorporating thick section in small castings
2. ✗ Casting of inserts is possible

Wide tolerances are possible

3. ✘

High production rates are possible

4. ✔

**Question Number : 187 Question Id : 2106889393 Display Question Number : Yes Is Question Mandatory : No Calculator : None Response Time : N.A Think Time : N.A Minimum Instruction Time : 0**

Addition of saw dust to moulding sand increases its

**Options :**

Gas permeability

1. ✔

Refractoriness

2. ✘

Cohesiveness

3. ✘

Strength

4. ✘

**Question Number : 188 Question Id : 2106889394 Display Question Number : Yes Is Question Mandatory : No Calculator : None Response Time : N.A Think Time : N.A Minimum Instruction Time : 0**

Volumetric shrinkage of grey cast iron is about .

**Options :**

1. ✘ 3-4%
2. ✘ 6%
3. ✔ 1.9% or negative
4. ✘ 4-6%

**Question Number : 189 Question Id : 2106889395 Display Question Number : Yes Is Question Mandatory : No Calculator : None Response Time : N.A Think Time : N.A Minimum Instruction Time : 0**

The expandable pattern is used in \_\_\_\_\_ operation.

**Options :**

1. ✔ Investment casting
2. ✘ Centrifugal casting
3. ✘ Slush casting
4. ✘ Squeeze casting

Question Number : 190 Question Id : 2106889396 Display Question Number : Yes Is Question Mandatory : No Calculator : None Response Time : N.A Think Time : N.A Minimum Instruction Time : 0

\_\_\_\_\_ allowance is not provided in the disposable pattern

Options :

1. ✘ Distortion
2. ✘ Shrinkage
3. ✘ Draft
4. ✔ Machining

Question Number : 191 Question Id : 2106889397 Display Question Number : Yes Is Question Mandatory : No Calculator : None Response Time : N.A Think Time : N.A Minimum Instruction Time : 0

In sand moulding the bottom most part of the flask is called.

Options :

1. ✘ Cope
2. ✘ Cheek
3. ✔ Drag

4. ✘ Flask bottom

Question Number : 192 Question Id : 2106889398 Display Question Number : Yes Is Question Mandatory : No Calculator : None Response Time : N.A Think Time : N.A Minimum Instruction Time : 0

Sodium silicate in sand is often used as

Options :

1. ✘ Substitute of moisture

2. ✔ Permeability promotion agent

3. ✘ Refractory material

4. ✘ Binder

Question Number : 193 Question Id : 2106889399 Display Question Number : Yes Is Question Mandatory : No Calculator : None Response Time : N.A Think Time : N.A Minimum Instruction Time : 0

The longitudinal shell of a boiler shell is always a

Options :

1. ✔ Lap joint



2. ✘ Butt joint

3. ✘ Lozenge joint

4. ✘ Diamond joint

**Question Number : 194 Question Id : 2106889400 Display Question Number : Yes Is Question Mandatory : No Calculator : None Response Time : N.A Think Time : N.A Minimum Instruction Time : 0**

Which of the following can be easily be welded from flash butt welding process?

**Options :**

1. ✘ Tin

2. ✘ Lead

3. ✘ Cast irons

4. ✔ Carbon steel

**Question Number : 195 Question Id : 2106889401 Display Question Number : Yes Is Question Mandatory : No Calculator : None Response Time : N.A Think Time : N.A Minimum Instruction Time : 0**

Electrodes used in spot welding are made up of which material?

**Options :**

1. ✓  Copper or copper alloys
2. ✗  Tungsten or tungsten alloys
3. ✗  Chromium or chromium alloys
4. ✗  Titanium or titanium alloys

**Question Number : 196 Question Id : 2106889402 Display Question Number : Yes Is Question Mandatory : No Calculator : None Response Time : N.A Think Time : N.A Minimum Instruction Time : 0**

Among the following for which material TIG welding is best suited ?

**Options :**

1. ✗  Stainless steel
2. ✗  Carbon steel
3. ✗  Silver
4. ✓  Aluminum

**Question Number : 197 Question Id : 2106889403 Display Question Number : Yes Is Question Mandatory : No Calculator : None Response Time : N.A Think Time : N.A Minimum Instruction Time : 0**

Typically, the temperature of the positive electrode in metal arc welding can reach up to approximately

**Options :**

1. ✘ 1300°C

2. ✔ 2400°C

3. ✘ 1500°C

4. ✘ 3600°C

**Question Number : 198 Question Id : 2106889404 Display Question Number : Yes Is Question Mandatory : No Calculator : None Response Time : N.A Think Time : N.A Minimum Instruction Time : 0**

Which of the following defects occur when the deposited metal is not focused on the root of weld?

**Options :**

1. ✘ Inclusion of slag

2. ✔ Inadequate penetration

3. ✘ Incomplete fusion

4. ✘ Porosity

**Question Number : 199 Question Id : 2106889405 Display Question Number : Yes Is Question Mandatory : No Calculator : None Response Time : N.A Think Time : N.A Minimum Instruction Time : 0**

Which of the following defects occur due to melting or burning away of base metal?

**Options :**

1. ✔ Undercut

2. ✘ Spatter

3. ✘ Cracking in weld metal

4. ✘ Cold cracking

**Question Number : 200 Question Id : 2106889406 Display Question Number : Yes Is Question Mandatory : No Calculator : None Response Time : N.A Think Time : N.A Minimum Instruction Time : 0**

Copper and aluminum can be joined by brazing when \_\_\_\_\_ alloy is used.

**Options :**

1. ✘

Copper-zinc

2. ✓ Aluminum-silicon

3. ✗ Copper-tellurium

4. ✗ Aluminum-zinc