



राष्ट्रीय डिज़ाइन संस्थान
NATIONAL INSTITUTE OF DESIGN

B.Des./GD&P 2019 DAT Prelims Test Paper Part-1



for answers, detailed explanations & 100+ student Sketches

edge.dqlabs.in | DQ Labs | 9591001000

Questions 1 to 22 are multiple choice questions. Please read the question carefully and select your response from the options provided. The correct answer must be marked in the OMR answer sheet provided separately. Do not write your name anywhere in the booklet. This will lead to disqualification.

Question Nos. 1 to 14 carry 1.0 mark each.

Q1. The icon below is associated with:



- (A) Women (B) Gay
(C) Labour (D) Transgender

Q2. Match the following line strokes with the related tools with which they were created, depicted in sequence from left to right.



- (A) Pen, Flat brush, Calligraphy pen, Round brush
(B) Calligraphy pen, Round brush, Pen, Flat brush
(C) Pen, Round brush, Calligraphy pen, Flat brush
(D) Calligraphy pen, Flat brush, Pen, Round brush

Q3. Which textile craft does the image below represent?



- (A) Kalamkari (B) Tie and dye (Bandhani)
(C) Ikkat (D) Block print

Q4. Which of the following DOES NOT belong with the rest?

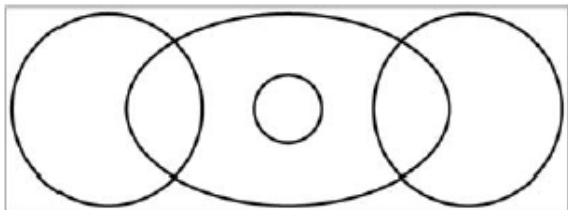
- (A) Wool (B) Cotton
(C) Jute (D) Coir



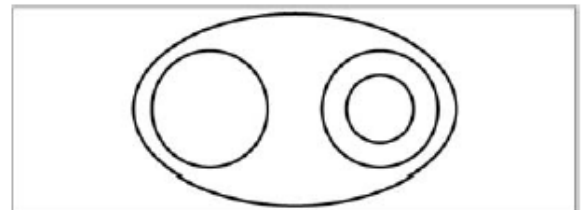
for answers, detailed explanations & 100+ student Sketches

edge.dqlabs.in | DQ Labs | 9591001000

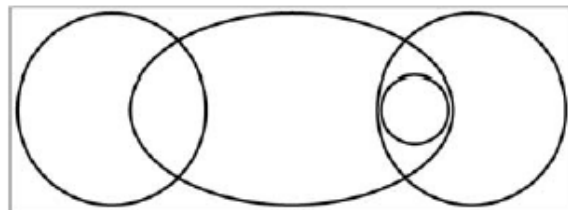
- Q5. Which of these dance forms is NOT a classical dance form?
 (A) Bharatnatyam (B) Manipuri
 (C) Odissi (D) Bihu
- Q6. Annapurna Devi was a famous player of which instrument?
 (A) Sitar (B) Sarod
 (C) Surbahar (D) Sarangi
- Q7. What is the inspiration for the design of the front portion of the Japanese bullet train?
 (A) Cheetah (B) Eagle
 (C) Kingfisher (D) Dolphin
- Q8. During ancient times, people used to navigate with the help of
 (A) The planet Venus (B) The Phases of the moon
 (C) The Pole star (D) Birds
- Q9. Which of the following Indian personalities is NOT known as an artist?
 (A) Raja Ravi Verma (B) Raja Rammohan Roy
 (C) Rabindranath Tagore (D) Ramkinkar Baij
- Q10. Which is the highest sporting award in India?
 (A) Rajiv Gandhi Khel Ratna Award (B) Dronacharya Award
 (C) Dhyan Chand Award (D) Maharaja Ranjit Singh Award
- Q11. Which diagram shown below can best depict the relationship between the following 4 words – Boys/Girls/Sister/Sibling, where each of the categories are represented by circles/eclipses.



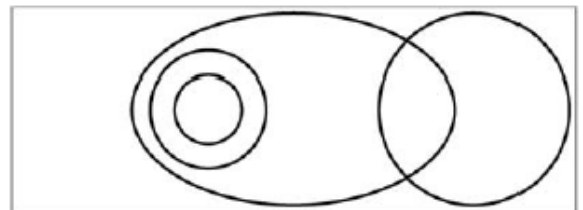
(A)



(B)



(C)



(D)

- Q12. The weight of a mother and her child together is 70 kg. The weight of the father and the child together is 90 kg. The weight of the father and the mother together is 120 kg. What is the combined weight of the family?
 (A) 100 kg (B) 150 kg
 (C) 140 kg (D) 200 kg



Q13. Based on the graphical representation (Figure X) of the physical characteristics of the 4 rectangles – P, Q, R & S based on the four characteristics of *tall*, *thin*, *short* and *fat*, which of the following depiction of rectangles is correct?

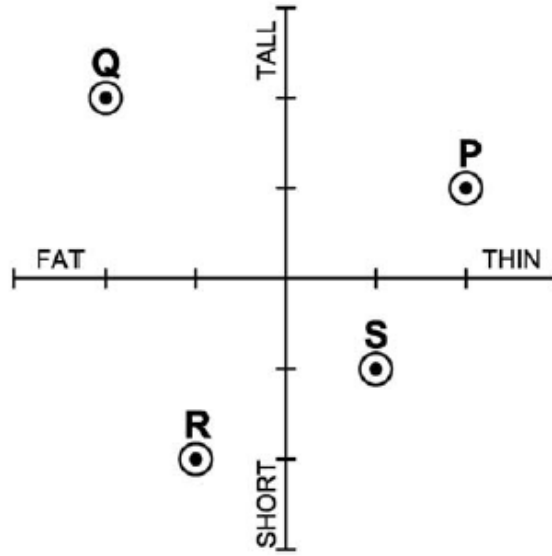
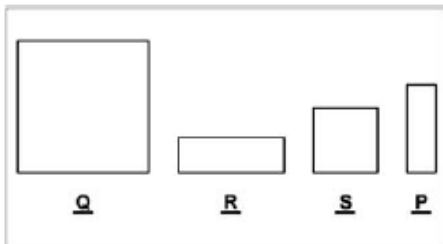
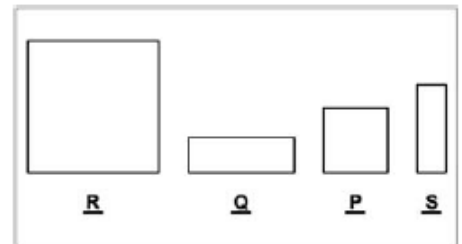


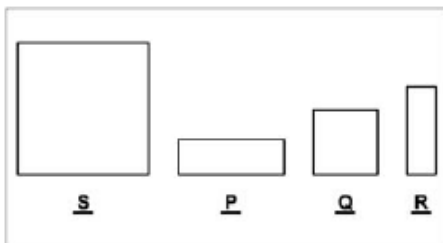
Figure X



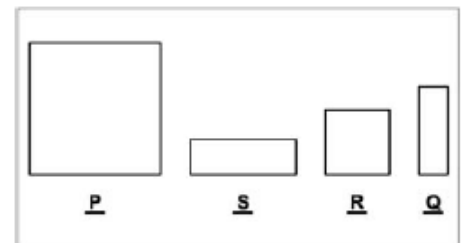
(A)



(B)




(C)



(D)



Q14. If the following profile is rotated along the given axis by 360 degrees,



which of the following 3-dimensional form would be created?



(A)



(B)


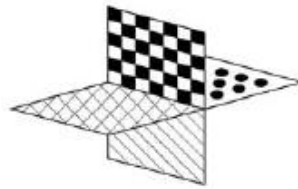
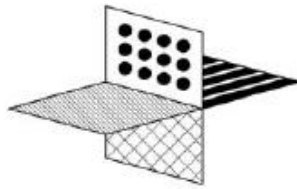
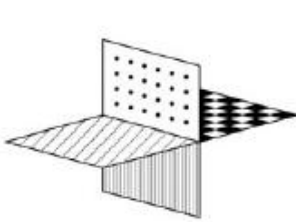


(C)

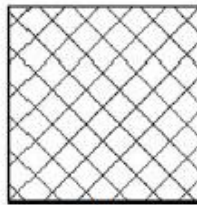


(D)


Q15. In the object given below, four different orientations are shown. Identify the pattern on the face with the "question mark(?)".




(A)



(B)



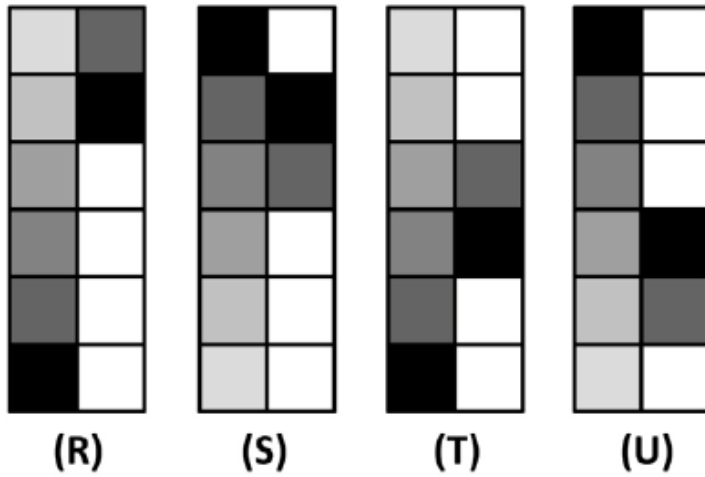
(C)



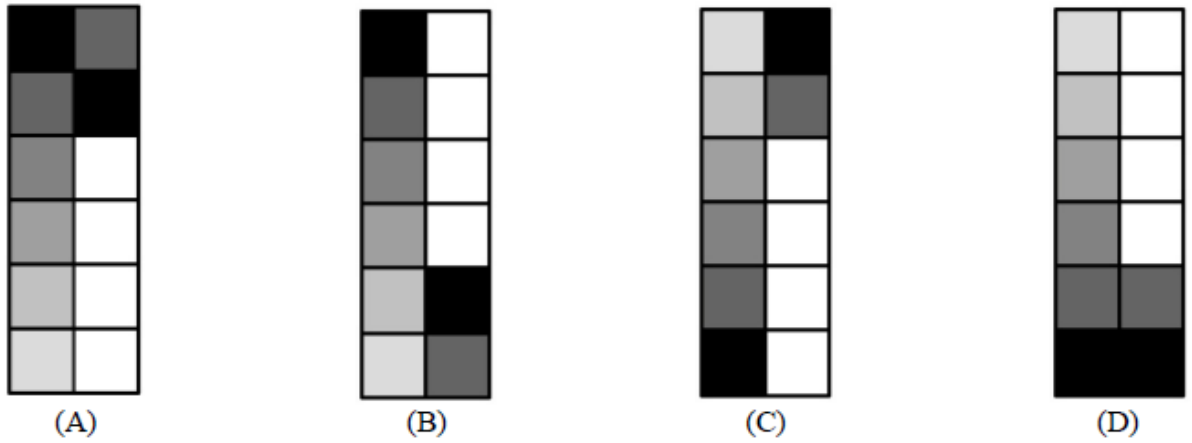
(D)



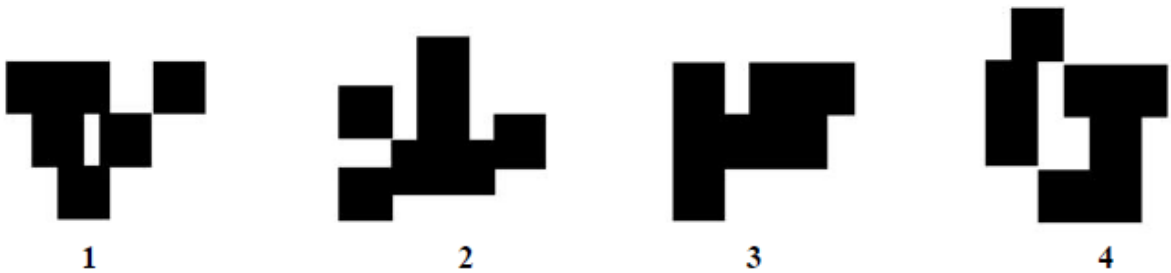
Q16. Four figures "R", "S", "T" and "U" are given below.



If figure "R" represents "ASC12", figure "S" represents "DES23", figure "T" represents "ASC34" and figure "U" represents "DES45", then which of the following figures will represent "DES12"?



Q17. Observe the images below and indicate which two images are equal in surface area?

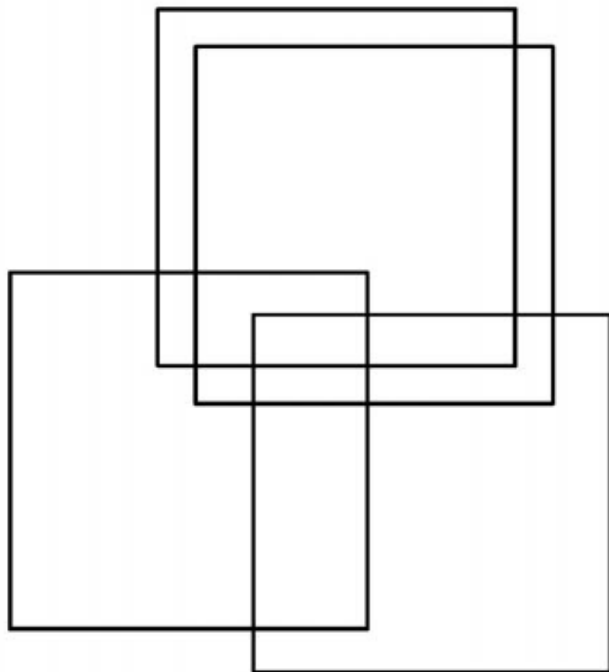


- (A) 1 and 2
- (C) 1 and 3

- (B) 2 and 3
- (D) 3 and 4



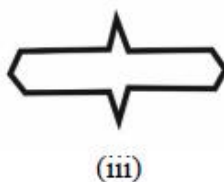


Q18. How many rectangles are there in the image given below?



- (A) 15
(C) 17

- (B) 21
(D) 19

Q19. Identify the set of shapes which can lead to the following pattern using repetition and combination as a technique.



- (A) (iii) (iv) (v) (vi)
(C) (i) (ii) (iii) (v)

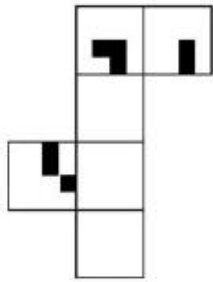
- (B) (i) (iii) (v) (vi)
(D) (ii) (iv) (v) (vi)

for answers, detailed explanations & 100+ student Sketches

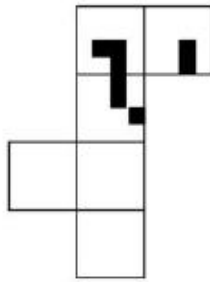
edge.dqlabs.in | DQ Labs | 9591001000



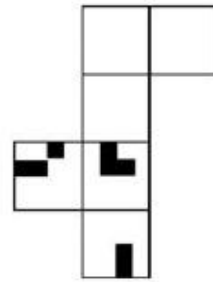
Q20. Which of the papers sets when folded along the intermediate borders can form the cube as given in the image below?



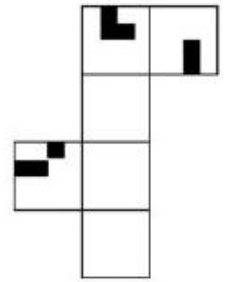
(A)



(B)

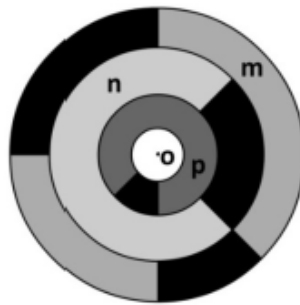


(C)



(D)

Q21. Observe the image given.



Please imagine the following process –

1. Rotate disc “m” 90 degrees clockwise around the center “o”
2. Rotate disc “n” 180 degrees counter-clockwise around the center “o”
3. Rotate disc “p” 180 degrees clockwise around the center “o”

What will the resultant figure look like?



(A)



(B)



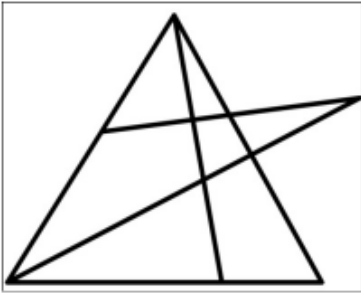
(C)



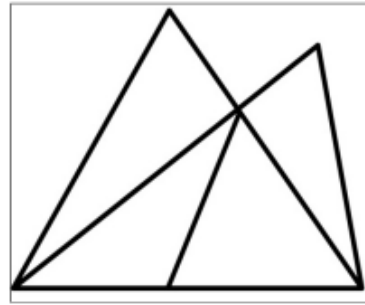
(D)



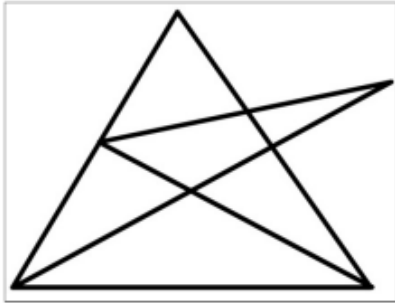
Q22. Which of the following figures can be drawn, if you have to draw it without lifting your pencil and without drawing over the line(s) you have already drawn.



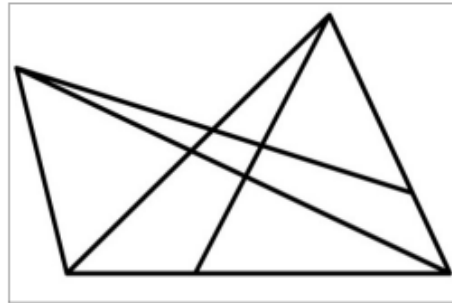
(A)



(B)



(C)



(D)

for answers, detailed explanations & 100+ student Sketches

edge.dqlabs.in | DQ Labs | 9591001000



Space for Rough Work

for answers, detailed explanations & 100+ student Sketches

edge.dqlabs.in | **DQ Labs** | **9591001000**



B.Des./GDPA
DAT Prelims
Sample Test Paper
Part-II


for answers, detailed explanations & 100+ student Sketches

edge.dqlabs.in | **DQ Labs** | **9591001000**



Questions 23 to 26 are of subjective type. Do not write your name anywhere in the booklet. This will lead to disqualification.

Q23. Observe the image of the scene as given below. A person tries to enter the room by a ladder from outside the window and sees the scene inside the room. Visualise and draw the scene from the person's point of view. No colour to be used. (15 marks)



for answers, detailed explanations & 100+ student Sketches

edge.dqlabs.in | DQ Labs | 9591001000




Q24. Imagine and draw a real life situation which represents “*All that is gold does not glitter*” in a meaningful way. Use the space given to draw and explain your interpretation in 5 lines. No colour to be used.

(20 marks)





Q25. To commemorate the 150th birth anniversary of Mahatma Gandhi, the Government of India has invited ideas to design a CIRCULAR postage stamp (Rs.20) from young minds. Depict your idea for the stamp in the given format. (you need to use colours). (15 marks)




for answers, detailed explanations & 100+ student Sketches

edge.dqlabs.in | DQ Labs | 9591001000




Q26. Visualise & draw the following as instructed. Do not use colour.

- A Draw a person sitting at a dining table with a plate, stainless steel spoon and fork laid out in front of him/her. (8 marks)



- B. An ant is sitting on the tip of a spoon handle. Draw the view of the table from the point of view of an ant. (6 marks)



- C. Visualise and draw a stainless steel spoon and fork tied into a knot at their handles. (6 marks)



for answers, detailed explanations & 100+ student Sketches

edge.dqlabs.in | DQ Labs | 9591001000



Space for Rough Work

for answers, detailed explanations & 100+ student Sketches

edge.dqlabs.in | DQ Labs | 9591001000



For more Detail Explanation and sample sketches

Log on to edge.dqlabs.in

Question No	Answer
1	D
2	D
3	C
4	A
5	D
6	C
7	C
8	C
9	B
10	A
11	C
12	C
13	A
14	B
15	D
16	A
17	B
18	***
19	B
20	B
21	A
22	C

***2 marks
awarded to
all candidates



for answers, detailed explanations & 100+ student Sketches

edge.dqlabs.in | DQ Labs | 9591001000

DQ Labs HALL OF FAME

NID



BARRI WAHLANG
NID PG 2020
RANK - 01



PRASHANT PRADHAN
NID PG 2020
RANK - 01



JAYA PRABHAKARAN
NID PG 2020
RANK - 01



PARVATHI
NID PG 2020
RANK - 01



MANASVINI
NID PG 2017
RANK - 01



KUSHAL SANDEEP
NID UG 2018
RANK - 03



LAXMI VIDYASAGAR
NID UG 2019
RANK - 04



DEVANSHI KAJANSHI
NID UG 2016
RANK - 04



RHEA ANGELA
NID UG 2018
RANK - 04



RAGHUL SREEDHAR
NID UG 2020
RANK - 05



TRISHA AMALERKAR
NID UG 2017
RANK - 05



TUSHAR SHIVAM
NID UG 2020
RANK - 05



CHANDRU
NID PG 2020
RANK - 06



SHUBHRA AGARWAL
NID UG 2020
RANK - 07



HARINI SURESH
NID UG 2020
RANK - 10



SHRIYA GURKHA
NID UG 2019
RANK - 10



POORNIMA S
NID UG 2017
RANK - 10



NIKITA DHAMIYA
NID UG 2020
RANK - 12



SUHANI CHHEDA
NID UG 2020
RANK - 14



ARUNDHATHI
NID UG 2020
RANK - 14



VRITTI MANGULLEY
NID UG 2019
RANK - 20



KOUSHIK RAM
NID PG 2020
RANK - 20



SAI VIDYASRI G
NID PG 2020
RANK - 19



for answers, detailed explanations & 100+ student Sketches

edge.dqlabs.in | DQ Labs | 9591001000

DQ Labs HALL OF FAME

UCEED



DARE LOBO
UCEED2017
RANK - 06



AMISHA NAIR
UCEED 2020
RANK - 8



CHERIAN JEREMIAH
UCEED 2018
RANK - 06



ZAID KHURAM
UCEED 2018
RANK - 14



MEDHAVI PARASARA
UCEED 2018
RANK - 15



SPOORTHI NAGESH
UCEED2018
RANK - 30



ARYAN VIJAY
UCEED 2020
RANK - 47



MADHAV G
UCEED2019
RANK - 50



UMANG SRIVASTA
UCEED2018
RANK - 63



SMIRTHI S
UCEED 2020
RANK - 64

NIFT RANKS



SIRIGOWRI
NIFT 2018
RANK - 01



DEEKSHITA RAMA
NIFT 2019
RANK - 03



SEEMRAN P
NIFT 2017
RANK - 07



JANANI
NIFT 2018
RANK - 10



SMIRTHI S
NIFT 2020
RANK - 12



NIDHI L RAO
NIFT 2020
RANK - 27



RHEA MORAS
NIFT 2018
RANK - 35



HARINI SURESH
NIFT 2020
RANK - 41



ANMOL VENKATESH
NIFT 2018
RANK - 42



ANANYA JAIN
NIFT 2018
RANK - 46

for answers, detailed explanations & 100+ student Sketches

edge.dqlabs.in | DQ Labs | 9591001000



DQ Labs HALL OF FAME

KCET NATA RANKS



MRUDHULAA C R
KCET 2016
RANK - 1



POORNIMA S
NATA 2017
RANK - 2



PRASIDH S BAGAMANE
NATA 2020
RANK - 3




NEHA SARAH ABRAHAM
NATA 2016
RANK - 3



NIKITA BIJU THOMAS
NATA 2019
RANK - 4



DEVYANI RAMAMOORTHY
NATA 2016
RANK - 4



ANIRUDH RAMESH
NATA 2020
RANK - 5



RISHI KUMARAN
NATA 2016
RANK - 5



ANIRUDH SHANKAR
NATA 2020
RANK - 6



SUMUKH S
NATA 2016
RANK - 6



ANANYA VAIDYANATHAN
NATA 2020
RANK - 6



BHUMIKA P B
NATA 2018
RANK - 7



ULLAS M
NATA 2016
RANK - 7



DISHA DILIP
NATA 2020
NATA - 8



SWARNAVALLI
NATA 2018
NATA - 8



ADITHI BHANU PRAKASH
NATA 2020
RANK - 9



ADITYA KARIYA
NATA 2017
RANK - 9



SHASHANK SHANKAR
NATA 2018
RANK - 10



AISHWARYA P HEGDE
NATA 2016
RANK - 10



SAMYATHA S
NATA 2020
RANK - 11



CHARITHA N REDDY
NATA 2020
RANK - 12



MELANIE MARY
NATA 2016
RANK - 12



DISHA MUKHERJEE
NATA 2018
RANK - 13

for answers, detailed explanations & 100+ student Sketches

edge.dqlabs.in | DQ Labs | 9591001000



DQ Labs HALL OF FAME


NATA



PRAMITHA S S
NATA 2020
SCORE - 182.5



CHARITHA N REDDY
NATA 2020
SCORE - 177.5



ANIRUDH RAMESH
NATA 2020
SCORE - 172



NITYA MAHESHA
NATA 2020
SCORE - 171.5



PRANAV S KADAMBI
NATA 2020
SCORE - 171



POORNIMA S
NATA 2020
SCORE - 171



R GAURAV
NATA 2020
SCORE - 170.5



LAKSHMI
NATA 2020
SCORE - 170.5



ANANYA VAIDYANATHAN
NATA 2020
SCORE - 168.5



ANIKETH KRISHNAN
NATA 2020
SCORE - 168.5



DISHA DILIP
NATA 2020
SCORE - 168.5



SIMRITHA B S
NATA 2020
SCORE - 168



GANESH BS
NATA 2020
SCORE - 167



DISHA MUKHERJEE
NATA 2020
SCORE - 166



SNEHA S
NATA 2020
SCORE - 166



ADITHI BHANU PRAKASH
NATA 2020
SCORE - 165



SHREEJA PAGDALA
NATA 2020
SCORE - 165



SHRIYA SAPHER
NATA 2020
SCORE - 165



VAISHNAVI SURESH
NATA 2020
SCORE - 165



RAJAT KAPOOR
NATA 2020
SCORE - 164.5



RASHI BISHT
NATA 2020
SCORE - 163.5



SHRUTHI SUNDER
NATA 2020
SCORE - 163.5



ARPITHA PRASAD
NATA 2020
SCORE - 163



KAKARLA PUNEETHA
NATA 2020
SCORE - 163

for answers, detailed explanations & 100+ student Sketches

edge.dqlabs.in | **DQ Labs** | 9591001000

