

23/01/2026

Morning



Aakash

Medical | IIT-JEE | Foundations

Corporate Office : AESL, 3rd Floor, Incuspaze Campus-2, Plot-13, Sector-18, Udyog Vihar,
Gurugram, Haryana-122015

Memory Based Answers & Solutions

Time : 3 hrs.

for

M.M. : 300

JEE (Main)-2026 (Online) Phase-1

(Physics, Chemistry and Mathematics)

Don't guess your JEE Main score.

Calculate it Instantly

with our

JEE Main Score Calculator.

HOW TO GET YOUR SCORES

- Open your response sheet on the JEE Main Site
- Copy the link from the browser's Address bar
- Paste it into the required field in the Calculator



jee-marks-calculator.aakash.ac.in/



Scan the QR code
to know more.

Our Problem *Solvers* shine bright in **JEE 2025**

JEE (Advanced)

ADVAY
MAYANK
AIR 36



RUJUL
GARG
AIR 41



ARUSH
ANAND
AIR 64



SHREYAS
LOHIYA
AIR 6
Uttar Pradesh Topper
100



KUSHAGRA
BAINGAHA
AIR 7
Uttar Pradesh Topper
100



HARSSH
A GUPTA
AIR 15
Telangana Topper
100



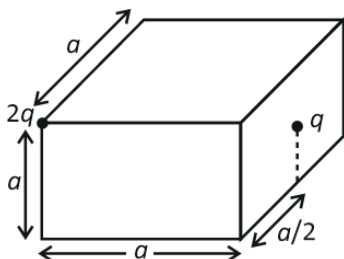
PHYSICS

SECTION - A

Multiple Choice Questions: This section contains 20 multiple choice questions. Each question has 4 choices (1), (2), (3) and (4), out of which **ONLY ONE** is correct.

Choose the correct answer:

1. There are two point charges, one at vertex and other at face as shown the cube. Find electric flux through the cube.

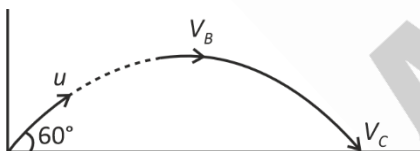


- (1) $3q/\epsilon_0$ (2) q/ϵ_0
(3) $3q/4\epsilon_0$ (4) $5q/\epsilon_0$

Answer (3)

Sol. $\phi = \frac{q_{enc}}{\epsilon_0} = \frac{\frac{2q}{8} + \frac{q}{2}}{\epsilon_0} = \frac{3q}{4\epsilon_0}$

2. If a projectile is being projected with speed v at an angle 60° with horizontal. Find the ratio of speed at highest point (V_B) to the speed at final point (V_C).



- (1) 3 : 4 (2) 1 : 3
(3) 1 : 2 (4) 1 : 12

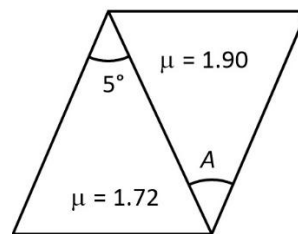
Answer (3)

Sol. $V_C = v$

$$V_B = v \cos 60^\circ = \frac{v}{2}$$

$$\frac{V_B}{V_C} = \frac{1}{2}$$

3. Find A for dispersion without deviation.



- (1) 3 (2) 4
(3) 4.5 (4) 5

Answer (2)

Sol. $A_1 (\mu_1 - 1) = A_2 (\mu_2 - 1)$

$$5(0.72) = A(.9)$$

$$\Rightarrow A = 4$$

4. For the given set of measurement find relative error.

20.00, 19.75, 18.25, 17.01

- (1) 0.12 (2) 0.06
(3) 0.09 (4) 0.17

Answer (2)

Sol. $\bar{x} = \frac{20.00 + 18.25 + 19.75 + 17.01}{4}$

$$\Rightarrow \bar{x} = 18.75$$

$$\Rightarrow |\Delta \bar{x}| = \frac{1.25 + 0.5 + 1 + 1.74}{4} = 1.12$$

$$\frac{\Delta \bar{x}}{\bar{x}} = \frac{1.12}{18.75} = 0.06$$

Our Problem *Solvers* shine bright in **JEE 2025**

JEE (Advanced)

ADVAY
MAYANK
AIR 36



RUJUL
GARG
AIR 41



ARUSH
ANAND
AIR 64



JEE (MAIN)

SHREYAS
LOHIYA
AIR 6
Uttar Pradesh Topper
100



KUSHAGRA
BAINGAHA
AIR 7
Uttar Pradesh Topper
100



HARSH
A GUPTA
AIR 15
Telangana Topper
100



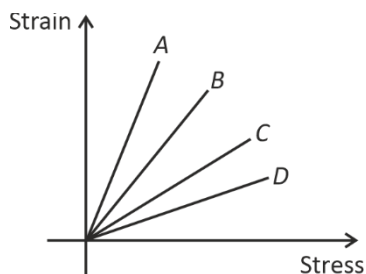
5. Find out the correct energy for the ground state or energy transition. (symbols have usual meaning & $n \rightarrow m$ gives the transition)

- (1) H (-6.8 eV) (2) $\text{Li}^{2+} (-13.6 \text{ eV})$
 (3) $\text{He}_2^+ \rightarrow 1 (40.8 \text{ eV})$ (4) $\text{Be}_2^{3+} \rightarrow 1 (+13.6 \text{ eV})$

Answer (3)

Sol. $E_n = 13.6 \frac{z^2}{n^2}$

6. Which of the following material has bigger Young's modulus



- (1) A (2) B
 (3) C (4) D

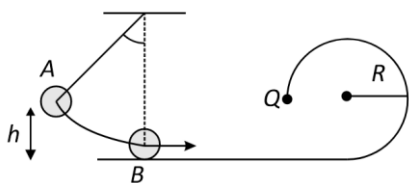
Answer (4)

Sol. $\text{Slope} = \frac{\text{Strain}}{\text{Stress}}$

$Y = \frac{1}{\text{Slope}}$

Thus D

7. Find h (in m) such that ball B just be able to reach Q after elastic collision with A. Mass of both the bodies are same m. ($R = 10 \text{ cm}$)



- (1) $\frac{3}{5}$ (2) $\frac{1}{\sqrt{5}}$
 (3) $\frac{1}{4}$ (4) $\frac{1}{5}$

Answer (3)

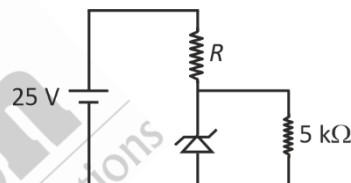
Sol. $V_A = V_B, V_A = \sqrt{5gR}$

$m_A gh = \frac{1}{2} m_A v_A^2$

$h = \frac{5}{2} R$

$h = \frac{5}{2} R = \frac{5}{2} \times \frac{1}{10} = \frac{1}{4}$

8. For the given circuit the breakdown voltage of Zener diode is $V_z = 5 \text{ volts}$. And it can withstand maximum current of $I_z = 5 \text{ mA}$.



Find the value of R .

- (1) $\frac{10}{3} \text{ k}\Omega$ (2) $5 \text{ k}\Omega$
 (3) $\frac{15}{4} \text{ k}\Omega$ (4) $8 \text{ k}\Omega$

Answer (1)

Sol. I_1 across $5 \text{ k}\Omega$ is

$I_1 = \frac{5}{5000} = 1 \text{ mA}$

So, total $I = 6 \text{ mA}$

$R = \frac{20}{6} \times 1000 = \frac{10}{3} \text{ k}\Omega$

Our Problem *Solvers* shine bright in **JEE 2025**

JEE (Advanced)

ADVAY
MAYANK
AIR 36



RUJUL
GARG
AIR 41



ARUSH
ANAND
AIR 64



JEE (MAIN)

SHREYAS
LOHIYA
AIR 6
Uttar Pradesh Topper
100



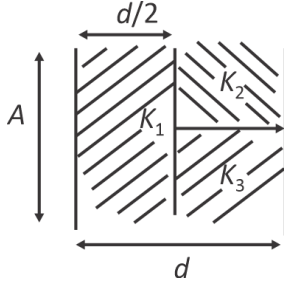
KUSHAGRA
BAINGAHA
AIR 7
Uttar Pradesh Topper
100



HARSH
A GUPTA
AIR 15
Telangana Topper
100



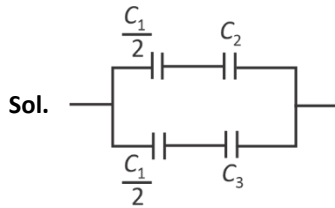
9. Find capacitance of capacitor given below if each plate has area A and separation is d between them.



$$K_1 = 3 \quad K_2 = 5 \quad K_3 = 2$$

- (1) $\frac{123\epsilon_0 A}{40d}$ (2) $\frac{140\epsilon_0 A}{6d}$
(3) $\frac{120\epsilon_0 A}{30d}$ (4) $\frac{128\epsilon_0 A}{4d}$

Answer (1)



$$C_1 = \frac{6\epsilon_0 A}{d} \quad C_2 = \frac{5\epsilon_0 A}{d} \quad C_3 = \frac{2\epsilon_0 A}{d}$$

$$C_{eq} = \frac{123\epsilon_0 A}{40d}$$

10. A simple pendulum of length 3 m completes 20 oscillations in 10 sec. What is length of another pendulum which completes 40 oscillations in same times

- (1) 0.75 m (2) 1.5 m
(3) 12 m (4) 6 m

Answer (1)

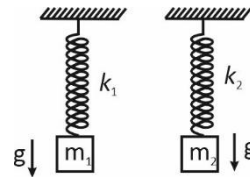
Sol. $T = 2\pi \sqrt{\frac{l}{g_{eff}}}$

$$\frac{Y_2}{Y_4} = \frac{\sqrt{3}}{\sqrt{1}}$$

$$l = \frac{3}{4} \text{ m}$$

11. Find ratio of energy stored in the two springs as shown in figure below

Given: $\frac{K_1}{K_2} = \frac{1}{2}$ and $\frac{m_1}{m_2} = \frac{1}{4}$



- (1) $\frac{1}{4}$ (2) $\frac{1}{2}$
(3) $\frac{1}{8}$ (4) 1

Answer (3)

Sol. Given: $\frac{k_1}{k_2} = \frac{1}{2}$ and $\frac{m_1}{m_2} = \frac{1}{4}$

$$E = \frac{2kq}{r^2} \Rightarrow E_{net} = E\sqrt{3}$$

12. In two different YDSE setup, two different monochromatic wave are used but fringe width on the screen is same. If $\frac{\lambda_1}{\lambda_2} = \frac{1}{2}$ and $\frac{d_1}{d_2} = \frac{2}{1}$, then find the ratio of $\frac{D_1}{D_2}$ (All symbols are standard).

- (1) 1 (2) $\frac{1}{2}$
(3) 2 (4) 4

Answer (4)

Sol. $\Delta\omega = \frac{\lambda D}{d}$

So, $\frac{\lambda_1 D_1}{d_1} = \frac{\lambda_2 D_2}{d_2}$

$$\frac{D_1}{D_2} = \left(\frac{d_1}{d_2}\right) \cdot \left(\frac{\lambda_2}{\lambda_1}\right) = \left(\frac{2}{1}\right) \times \left(\frac{2}{1}\right)$$

$$\frac{D_1}{D_2} = 4$$

Our Problem *Solvers* shine bright in **JEE 2025**

JEE (Advanced)

ADVAY
MAYANK
AIR 36



RUJUL
GARG
AIR 41



ARUSH
ANAND
AIR 64



SHREYAS
LOHIYA
AIR 6
Uttar Pradesh Topper
100



KUSHAGRA
BAINGAHA
AIR 7
Uttar Pradesh Topper
100



HARSH
A GUPTA
AIR 15
Telangana Topper
100



JEE (MAIN)

13. A 25 kg mass moving with 30 m/s and another mass 15 kg of same material moving with 10 m/s in opposite direction, collides perfectly inelastically. Find the rise in temperature of the system.

(Given: $C = 5 \times \text{cal/g}^\circ\text{C}$ & $1 \text{ cal} = 4.2 \text{ J}$)

- (1) $\frac{1}{50}^\circ\text{C}$
 (2) $\frac{1}{112}^\circ\text{C}$
 (3) $\frac{1}{150}^\circ\text{C}$
 (4) $\frac{1}{125}^\circ\text{C}$

Answer (1)

Sol. $25 \times 30 - 15 \times 10 = 40 V_f \Rightarrow V_f = 15 \text{ m/s}$

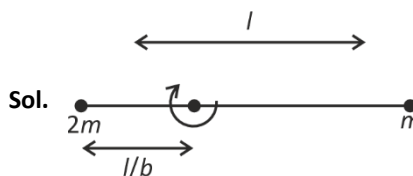
$$K\epsilon_i - K\epsilon_f = \frac{1}{2} \times 25 \times 900 + \frac{1}{2} \times 15 \times 100 - \frac{1}{2} \times 40 (225) = 7500 \text{ J}$$

$$ms\Delta T = 7500 \Rightarrow \Delta T = \frac{7500}{40 \times 5000 \times 4.2} = \frac{1}{112}^\circ\text{C}$$

14. Two point particles of masses $2m$ and m are attached to ends of a massless rod of length l . Find Angular momentum of this system about an axis passing through their center of mass and perpendicular to the rod if the system is rotating with angular velocity ω about the axis.

- (1) $\frac{2}{3}m\omega l^2$
 (2) $\frac{1}{3}m\omega l^2$
 (3) $\frac{m\omega l^2}{9}$
 (4) $m\omega l^2$

Answer (1)

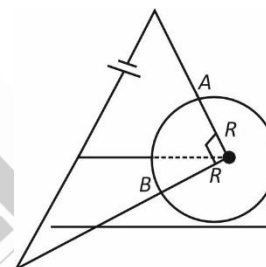


Sol.

$$L = 2m\omega\left(\frac{l}{3}\right)^2 + m\omega\left(\frac{2l}{3}\right)^2$$

$$L = \frac{2}{9}m\omega l^2 + \frac{4}{9}m\omega l^2 = \frac{2}{3}m\omega l^2$$

15. A uniform wire is bent into the shape of a circle of radius R has resistance per unit length $= \lambda$. A battery is connected across point A and B which subtends an angle of 90° at its centre as shown. Find the equivalent resistance of this circuit.



- (1) $\frac{3\pi}{4}\lambda R$ (2) $\frac{\pi}{2}\lambda R$
 (3) $\frac{3\pi}{8}\lambda R$ (4) $\frac{\pi}{4}\lambda R$

Answer (3)

Sol. $R_1 = \lambda \frac{3\pi R}{2}; R_2 = \frac{\lambda \pi}{2} R$

$$R_{eq} = \frac{\lambda \frac{\pi}{2} R \lambda \frac{3\pi}{2} R}{\pi \frac{\pi}{2} R + \lambda \frac{3\pi}{2} R} = \frac{\lambda^2 \frac{3\pi^2}{4} R^2}{\lambda \times 2\pi R}$$

$$R_{eq} = \frac{3\pi}{8}\lambda R$$

Our Problem *Solvers* shine bright in **JEE 2025**

JEE (Advanced)

ADVAY
MAYANK
AIR 36



RUJUL
GARG
AIR 41



ARUSH
ANAND
AIR 64



SHREYAS
LOHIYA
AIR 6
Uttar Pradesh Topper
100



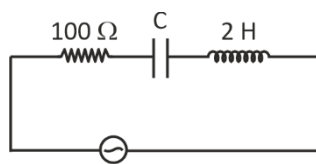
KUSHAGRA
BAINGAHA
AIR 7
Uttar Pradesh Topper
100



HARSH
A GUPTA
AIR 15
Telangana Topper
100



16. The peak current in given LCR series Ac circuit shown is 5 mA then capacitance in μF is nearly.



$$\varepsilon = 50 \sin 100t$$

- (1) 1 (2) 3
(3) 4 (4) 5

Answer (1)

Sol. $5 \times 10^{-3} = \frac{50}{\sqrt{(100)^2 + (200 - X_C)^2}}$

$$10^4 + (200 - X_C)^2 = 10^8$$

$$(200 - X_C) \approx \pm 10^4$$

$$X_C \approx 10^4 = \frac{1}{\omega C}$$

$$C = 10^{-6}$$

17. Two media of refractive indices n_1 & n_2 have plane interface. Speed of light in 1st is 2.4×10^8 m/s & in 2nd is 2.8×10^8 m/s.

Find critical angle of incidence when light travels from 1st to 2nd.

- (1) $\sin^{-1}\left(\frac{6}{7}\right)$ (2) $\sin^{-1}\left(\frac{7}{8}\right)$
(3) $\sin^{-1}\left(\frac{8}{9}\right)$ (4) $\tan^{-1}\left(\frac{9}{8}\right)$

Answer (1)

Sol. $\frac{n_1}{n_2} = \frac{2.8 \times 10^8}{2.4 \times 10^8} = \frac{1}{\sin(\theta_c)}$

$$\Rightarrow \theta_c = \sin^{-1}\left(\frac{6}{7}\right)$$

18. **Assertion (A):** In a ferromagnetic material, magnetic dipole are aligned in a localized domain.

Reason (R): When ferromagnetic substance is heated above the curie temperature, its magnetic properties are weakened heavily.

- (1) A is correct, R is correct and correct explanation of A
(2) A is correct, R is correct but not correct explanation of A
(3) Both A and R are incorrect
(4) A is correct, R is incorrect

Answer (2)

Sol. Conceptual.

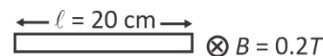
19.

20.

SECTION - B

Numerical Value Type Questions: This section contains 5 Numerical based questions. The answer to each question should be rounded-off to the nearest integer.

21. Find emf induced in Rod after it has fallen through 2000 m under gravity (in volt).



Answer (8)

Sol. $\varepsilon = Bvl = 0.2 \times \sqrt{2gh} \times l$

$$\Rightarrow 8 \text{ volt}$$

22.

23.

24.

25.

Our Problem *Solvers* shine bright in **JEE 2025**

JEE (Advanced)

ADVAY
MAYANK
AIR 36



RUJUL
GARG
AIR 41



ARUSH
ANAND
AIR 64



JEE (MAIN)

SHREYAS
LOHIYA
AIR 6
Uttar Pradesh Topper
100



KUSHAGRA
BAINGAHA
AIR 7
Uttar Pradesh Topper
100



HARSH
A GUPTA
AIR 15
Telangana Topper
100



CHEMISTRY

SECTION - A

Multiple Choice Questions: This section contains 20 multiple choice questions. Each question has 4 choices (1), (2), (3) and (4), out of which **ONLY ONE** is correct.

Choose the correct answer:

1. The correct order of ionisation energy of

Cl, S, P, Al, Si is

- (1) $\text{Cl} > \text{P} > \text{S} > \text{Si} > \text{Al}$
- (2) $\text{P} > \text{Cl} > \text{S} > \text{Al} > \text{Si}$
- (3) $\text{Cl} > \text{S} > \text{P} > \text{Si} > \text{Al}$
- (4) $\text{Cl} > \text{Al} > \text{Si} > \text{P} > \text{S}$

Answer (1)

Sol. kJ/mol

Cl \Rightarrow 1256

S \Rightarrow 999

P \Rightarrow 1012

Al \Rightarrow 577

Si \Rightarrow 786

2. Consider the statements below :

Statement I : $[\text{CoBr}_4]^{2-}$ absorbs lesser energy than $[\text{CoCl}_4]^{2-}$.

Statement II : $[\text{CoCl}_4]^{2-}$ has higher crystal field splitting energy than $[\text{CoBr}_4]^{2-}$.

- (1) Both statement I and statement II are correct
- (2) Both statement I and statement II are incorrect
- (3) Statement I correct and statement II incorrect
- (4) Statement I incorrect and statement II correct

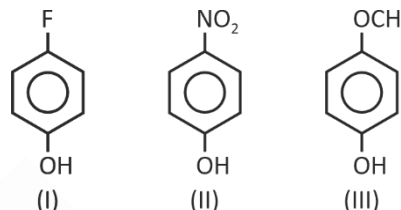
Answer (1)

Sol. Order of ligand strength $\text{Cl}^- > \text{Br}^-$

$[\text{CoCl}_4]^{2-}$ absorb more energy than $[\text{CoBr}_4]^{2-}$

$[\text{CoCl}_4]^{2-}$ has more CFSE value due to strength of ligand.

3. Arrange in increasing order of acid strength.



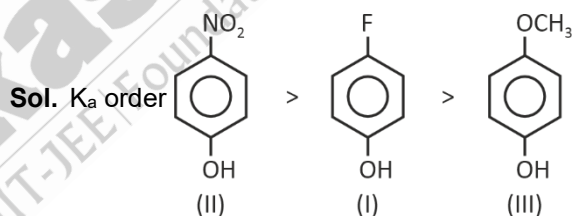
(1) (II) > (I) = (III)

(2) (I) > (II) > (III)

(3) (II) > (I) > (III)

(4) (II) = (I) > (III)

Answer (3)



4. Which of the following undergo nitration at fastest rate?

- (1) $\text{C}_6\text{H}_5\text{NO}_2$
- (2) $\text{C}_6\text{H}_5\text{CH}_3$
- (3) $\text{C}_6\text{H}_5\text{COOH}$
- (4) $\text{C}_6\text{H}_5\text{Br}$

Answer (2)

Sol. Methyl group is activating group

Our Problem *Solvers* shine bright in **JEE 2025**

JEE (Advanced)

**ADVAY
MAYANK**
AIR 36



**RUJUL
GARG**
AIR 41



**ARUSH
ANAND**
AIR 64



JEE (MAIN)

**SHREYAS
LOHIYA**
AIR 6
Uttar Pradesh Topper
100



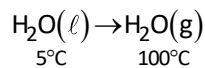
**KUSHAGRA
BAINGAHA**
AIR 7
Uttar Pradesh Topper
100



**HARSH
A GUPTA**
AIR 15
Telangana Topper
100



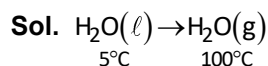
5. For the following change,



Select the correct answer:

- (1) $q = +ve, w = +ve, \Delta H = +ve$
- (2) $q = -ve, w = -ve, \Delta H = +ve$
- (3) $q = +ve, w = -ve, \Delta H = +ve$
- (4) $q = -ve, w = -ve, \Delta H = -ve$

Answer (3)

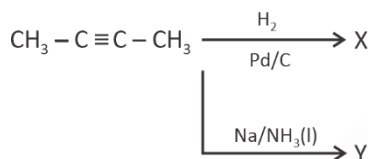


$\rightarrow \therefore$ expansion $w = -ve$.

\rightarrow It is heat absorbing, so, $q = +ve$.

$$\Delta H = +ve$$

6. Consider the following reaction

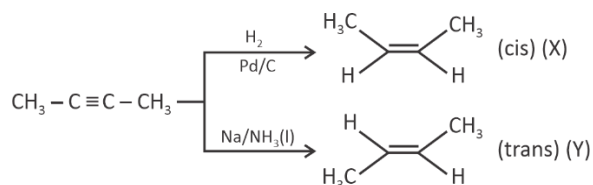


Choose the correct option.

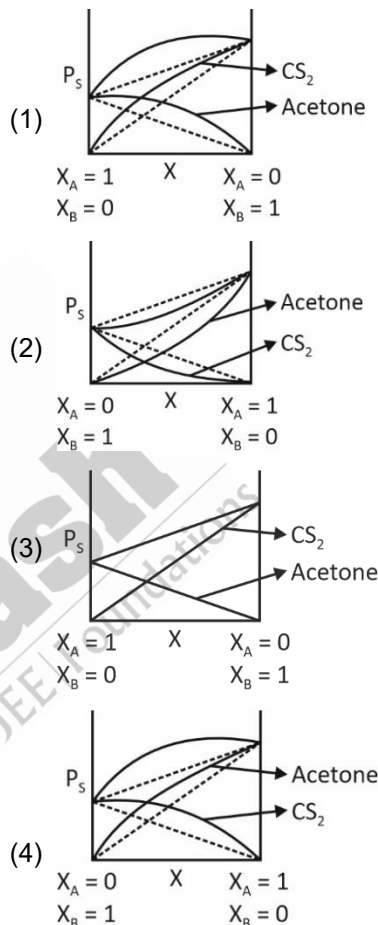
- (1) $\text{X} \Rightarrow \text{CH}_3 - \text{CH}_2 - \text{CH}_2 - \text{CH}_3$
 $\text{Y} \Rightarrow \text{CH}_3 - \text{CH} = \text{CH} - \text{CH}_3$ (cis)
- (2) $\text{X} \Rightarrow \text{CH}_3 - \text{CH} = \text{CH} - \text{CH}_3$ (cis)
 $\text{Y} \Rightarrow \text{CH}_3 - \text{CH} = \text{CH} - \text{CH}_3$ (trans)
- (3) $\text{X} \Rightarrow \text{CH}_3 - \text{CH} = \text{CH} - \text{CH}_3$ (cis)
 $\text{Y} \Rightarrow \text{CH}_3 - \text{CH} = \text{CH} - \text{CH}_3$ (cis)
- (4) $\text{X} \Rightarrow \text{CH}_3 - \text{CH} = \text{CH} - \text{CH}_3$ (trans)
 $\text{Y} \Rightarrow \text{CH}_3 - \text{CH} = \text{CH} - \text{CH}_3$ (cis)

Answer (2)

Sol.



7. A binary solution is formed by mixing Acetone (A) and CS_2 (B). The variation of vapour pressure v/s mole fraction will be



Answer (1)

Sol. $P_{\text{CS}_2}^0 \approx 510 \text{ mmHg}$

$P_{\text{Acetone}}^0 \approx 310 \text{ mmHg}$

CS_2 and Acetone shows positive deviation

$$P_s > P_A^0 X_A + P_B^0 X_B$$

Our Problem *Solvers* shine bright in **JEE 2025**

JEE (Advanced)

ADVAY
MAYANK
AIR 36



RUJUL
GARG
AIR 41



ARUSH
ANAND
AIR 64



JEE (MAIN)

SHREYAS
LOHIYA
AIR 6
Uttar Pradesh Topper
100



KUSHAGRA
BAINGAHA
AIR 7
Uttar Pradesh Topper
100



HARSH
A GUPTA
AIR 15
Telangana Topper
100



8. Match the List-I with List-II and choose the correct option :

	List-I		List-II
(a)	2 nd orbit of He ⁺ ion	(i)	$-1.96 \times 10^{-17} \text{ J}$
(b)	3 rd orbit of H-atom	(ii)	$-2.42 \times 10^{-19} \text{ J}$
(c)	1 st orbit of Li ²⁺ ion	(iii)	$-2.178 \times 10^{-18} \text{ J}$
(d)	2 nd orbit of Li ²⁺ ion	(iv)	$-4.9 \times 10^{-18} \text{ J}$

- (1) (a)-(iii); (b)-(ii); (c)-(i); (d)-(iv)
 (2) (a)-(iii); (b)-(ii); (c)-(iv); (d)-(i)
 (3) (a)-(iv); (b)-(iii); (c)-(ii); (d)-(i)
 (4) (a)-(i); (b)-(ii); (c)-(iii); (d)-(iv)

Answer (1)

Sol. $E_n = -2.178 \times 10^{-18} \frac{z^2}{n^2} \text{ J}$

- (a) $z = 2, n = 2$
 (b) $z = 1, n = 3$
 (c) $z = 3, n = 1$
 (d) $z = 3, n = 2$

9. Given below are two statements.

Statement I: Sublimation is a purification technique that is used to separate those solid substances which changes from solid to vapour state without passing through liquid state.

Statement II: If external atmospheric pressure is reduced, then boiling point of substance is decreased.

In the light of the above statements, choose the correct option.

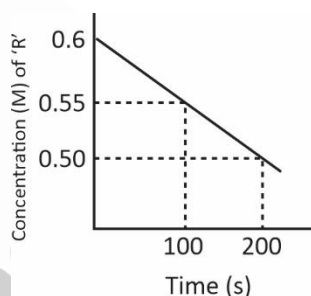
- (1) Both statement I and statement II are correct
 (2) Both statement I and statement II are incorrect
 (3) Statement I is correct but statement II is incorrect
 (4) Statement I is incorrect but statement II is correct

Answer (1)

Sol. Sublimable compounds are those compounds which changes from solid to vapour state without passing through liquid state.

Boiling point depends on external atmospheric pressure.

10. Consider the following graph of concentration vs time, of a reaction, $R \rightarrow P$



Find half-life of reaction.

- (1) 600 s
 (2) 200 s
 (3) 300 s
 (4) 100 s

Answer (1)

Sol. The graph shows straight line for concentration vs time.

For zero order

$$A_t = -kt + A_0$$

$$\text{At } t = 100 \text{ s, conc.} = 0.55$$

$$\text{At } t = 200 \text{ s, conc.} = 0.5$$

Our Problem *Solvers* shine bright in **JEE 2025**

JEE (Advanced)

ADVAY
MAYANK
AIR 36



RUJUL
GARG
AIR 41



ARUSH
ANAND
AIR 64



JEE (MAIN)

SHREYAS
LOHIYA
AIR 6
Uttar Pradesh Topper
100



KUSHAGRA
BAINGAHA
AIR 7
Uttar Pradesh Topper
100



HARSH
A GUPTA
AIR 15
Telangana Topper
100



$$k = - \frac{\text{Change in concentration}}{\text{Change in time}}$$

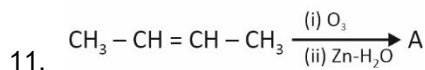
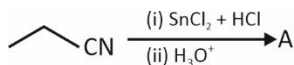
$$= \frac{0.5 - 0.55}{200 - 100} = \frac{0.05}{100}$$

$$k = 5 \times 10^{-4} \text{ ms}^{-1}$$

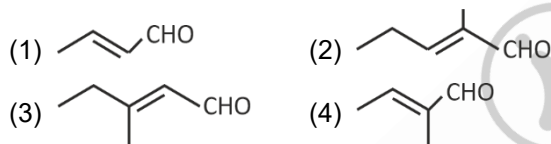
$$t_{\frac{1}{2}} = \frac{A_0}{2k}$$

$$= \frac{0.6}{2 \times 5 \times 10^{-4}}$$

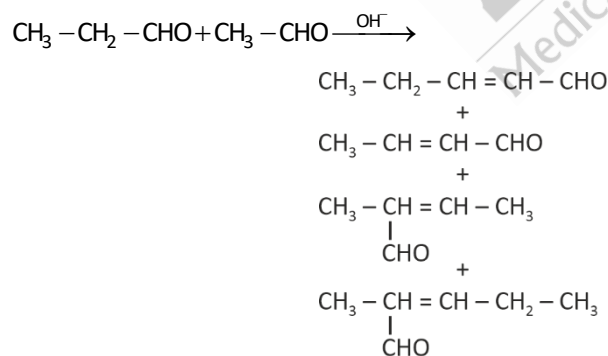
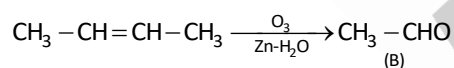
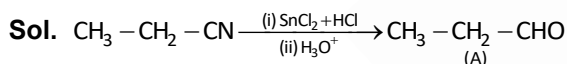
$$= \frac{6000}{100} = 600 \text{ s}$$



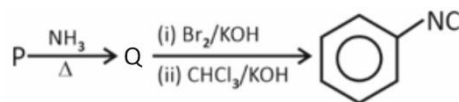
A and B are mixed and treated with dil. base to give mixture of products. Choose the incorrect product.



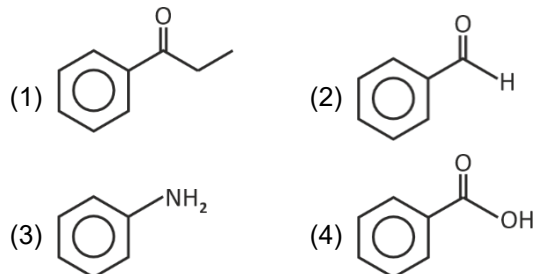
Answer (3)



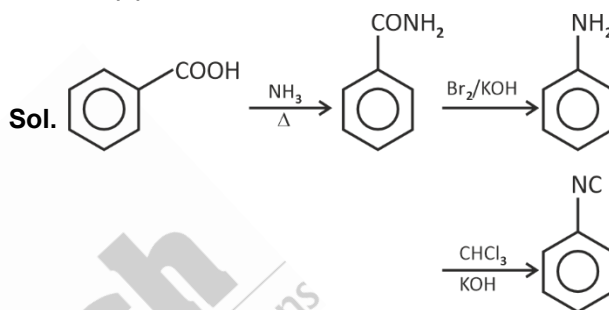
12. Consider the following reaction :



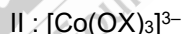
The structure of 'P' is



Answer (4)



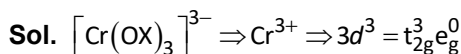
13. Consider the two complexes



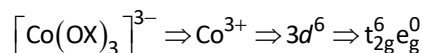
Find the ratio of CFSE of I to II complex (neglect pairing energy and consider Δ_o for both complexes to be x)

- (1) 2 (2) $\frac{1}{2}$
(3) $\frac{1}{3}$ (4) $\frac{2}{3}$

Answer (2)



$$\text{CFSE} = 3 \times (-0.4) \Delta_o = -1.2 \Delta_o$$



Our Problem *Solvers* shine bright in **JEE 2025**

JEE (Advanced)

ADVAY
MAYANK
AIR 36



RUJUL
GARG
AIR 41



ARUSH
ANAND
AIR 64



JEE (MAIN)

SHREYAS
LOHIYA
AIR 6
Uttar Pradesh Topper
100% in Overall



KUSHAGRA
BAINGAHA
AIR 7
Uttar Pradesh Topper
100% in Overall



HARSH
A GUPTA
AIR 15
Telangana Topper
100% in Overall



$$\text{CFSE} = -0.4 \times 6 \Delta_o = -2.4 \Delta_o$$

$$\text{Ratio of CFSE} = \frac{-1.2\Delta_o}{-2.4\Delta_o} = \frac{1}{2}$$

14. Select the correct statement about 13th group elements.

- A. Electronegativity decreases regularly down the graph.
 B. Ionic radii decreases down the graph.
 C. Boron has highest ionisation energy.
 D. Trichloride of aluminium are covalent in nature.

- (1) A, B, C only (2) C, D only
 (3) A, C, D only (4) B, C, D only

Answer (2)

Sol. (A) is false

$$\text{EN} \rightarrow \text{B} > \text{Al} < \text{Ga} < \text{In} < \text{Tl}$$

$$2 \quad 1.5 \quad 1.6 \quad 1.7 \quad 1.8$$

(B) is false

$$\text{Ionic radii} \rightarrow \text{B}^{3+} < \text{Al}^{3+} < \text{Ga}^{3+} < \text{In}^{3+} < \text{Tl}^{3+}$$

(C) is true

$$\text{I.E.} \rightarrow \text{B} \quad \text{Al} \quad \text{Ga} \quad \text{In} \quad \text{Tl}$$

$$(\text{kJ/mol}^{-1}) \quad 800 \quad 577 \quad 579 \quad 558 \quad 589$$

15. Match List-I with List-II.

	List-I		List-II
A.	Bayer's unsaturation test	(I)	Violet/purple colour
B.	Ceric ammonium nitrate test of alcohols	(II)	Red colour
C.	Tollen's reagent test	(III)	Silver mirror obtained
	FeCl ₃ test of phenol	(IV)	Pink colour discharge

Select the correct option.

- (1) A(II), B(I), C(IV), D(III)
 (2) A(II), B(I), C(III), D(IV)
 (3) A(IV), B(II), C(III), D(I)
 (4) A(IV), B(III), C(II), D(I)

Answer (3)

- Sol. A. Bayer's unsaturation test → Pink colour discharges
 B. Ceric ammonium nitrate test of alcohols → The colour of solution changes from yellow to red
 C. Tollen's reagent test → Silver mirror (Ag↓) is observed
 D. FeCl₃ test of phenol → Violet colour complex is formed

16. Consider the given cell

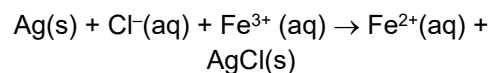
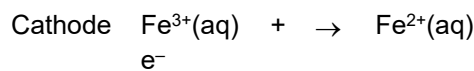
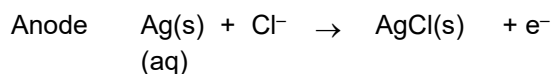


In which of the following cases, E_{cell} will increase

- (1) [Fe²⁺] increases
 [Cl⁻] increases
 (2) [Fe²⁺] increases
 [Cl⁻] decreases
 (3) [Fe³⁺] & [Cl⁻] increase
 (4) [Fe²⁺] decreases
 [Fe³⁺] decreases

Answer (3)

Sol.



$$Q = \frac{[\text{Fe}^{2+}]}{[\text{Fe}^{3+}][\text{Cl}^-]}$$

Our Problem *Solvers* shine bright in **JEE 2025**

JEE (Advanced)

ADVAY
MAYANK
AIR 36



RUJUL
GARG
AIR 41



ARUSH
ANAND
AIR 64



JEE (MAIN)

SHREYAS
LOHIYA
AIR 6
Uttar Pradesh Topper
100



KUSHAGRA
BAINGAHA
AIR 7
Uttar Pradesh Topper
100



HARSH
A GUPTA
AIR 15
Telangana Topper
100



$$E_{\text{cell}} = E^{\circ}_{\text{cell}} - \frac{0.06}{1} \log \frac{[\text{Fe}^{2+}]}{[\text{Fe}^{3+}][\text{Cl}^{-}]}$$

E_{cell} increase if $[\text{Fe}^{3+}]$ & $[\text{Cl}^{-}]$ increases

E_{cell} decreases if $[\text{Fe}^{2+}]$ increases

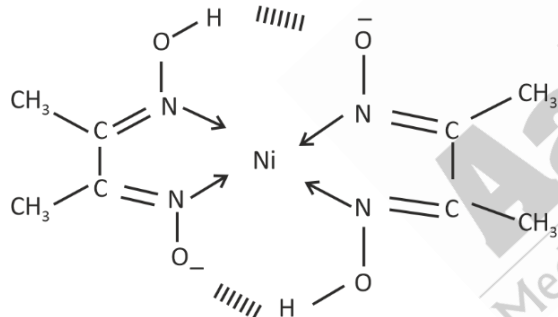
17. Consider the following statements and choose the correct option(s)

- (A) Ni^{2+} forms cherry red colour complex with dimethyl glyoximate ligand (dmg)
 - (B) Ni^{2+} complex with dmg contains two ring of five membered
 - (C) Ni^{2+} has 2 unpaired electron in d-orbitals in the complex
 - (D) Ni^{2+} complex with dmg is soluble at $\text{pH} = 9$
- (1) Only A & B
(2) Only B & C
(3) Only A & C
(4) Only A, C and D

Answer (1)

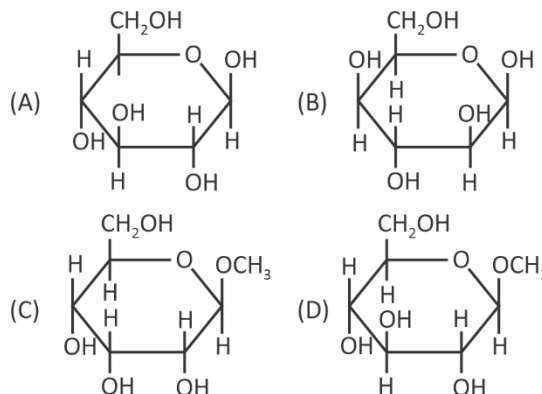
Sol. $\text{Ni}^{2+} + 2\text{dmg} \rightarrow [\text{Ni}(\text{dmg})_2]$

1. $[\text{Ni}(\text{dmg})_2]$ is of pink colour



2. 2 five membered ring is present.
3. Ni^{2+} with dmg for dsp^2 hybridised square planar complex
- $\text{Ni}^{2+} \Rightarrow 3d^8$
no unpaired electron
4. $[\text{Ni}(\text{dmg})_2]$ is soluble at low pH

18. Consider the following molecules.



The examples of non-reducing sugar(s) are

- (1) A, B only (2) A, C only
(3) B, D only (4) C, D only

Answer (4)

Sol. (A), (B) are reducing sugars as it contains hemiacetal linkage.

(C), (D) are non-reducing sugar as it contain acetal linkage.

19. Following molecules are given :

HNO_3 , NF_3 , H_2SO_4 , O_3

Consider the molecule (T) having maximum number of lone pairs (on all atoms).

The bond angle ($\angle \text{XMX}$), where M is central atom in T is

- (1) 110° (2) 97°
(3) 102° (4) 115°

Answer (3)

Sol. NF_3 has 10 lone pairs.

Bond angle is 102.3° .

20.

SECTION - B

Numerical Value Type Questions: This section contains 5 Numerical based questions. The answer to each question should be rounded-off to the nearest integer.

Our Problem *Solvers* shine bright in **JEE 2025**

JEE (Advanced)

ADVAY
MAYANK
AIR 36



RUJUL
GARG
AIR 41



ARUSH
ANAND
AIR 64



JEE (MAIN)

SHREYAS
LOHIYA
AIR 6
Uttar Pradesh Topper
100% in Overall



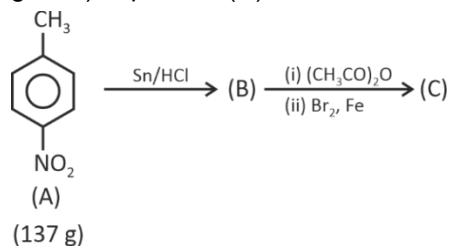
KUSHAGRA
BAINGAHA
AIR 7
Uttar Pradesh Topper
100% in Overall



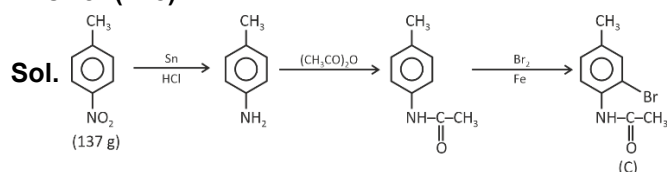
HARSH
A GUPTA
AIR 15
Telangana Topper
100% in Overall



21. In the reaction sequence, what is the mass (in grams) of product (C) formed?



Answer (228)



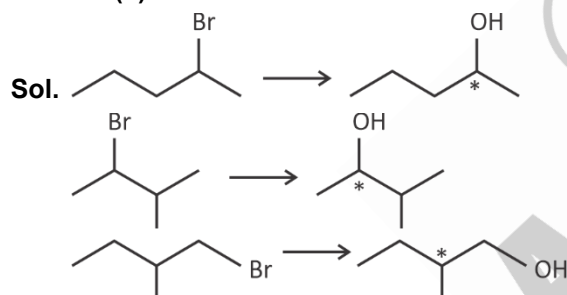
$$\text{moles of (A)} = \frac{137}{137} = 1 \text{ mole.}$$

moles of (C) formed = 1 moles

$$\text{mass of (C)} = 1 \times 228 = 228 \text{ (g)}$$

22. $\text{C}_5\text{H}_{11}\text{Br}$ reacts with aq. KOH without rearrangement. How many optically active compounds are formed.

Answer (3)



23. x g of pure Cl_2 is reacted with $\text{Ba}(\text{OH})_2$ to form $\text{Ba}(\text{ClO}_3)_2$. $\text{Ba}(\text{OH})_2$ concentration is 1 M and volume is 25 mL. Find x.

Answer (2)



$$1 \text{ M} \times 25 \text{ mL}$$

$$= 25 \text{ m mol}$$

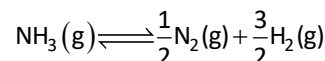
6 mol of $\text{Ba}(\text{OH})_2$ reacted with 6 mol Cl_2

25 m mol of $\text{Ba}(\text{OH})_2$ reacted with 25 m mol of Cl_2

$$\text{mol of } \text{Cl}_2 \text{ reacted} = 25 \times 10^{-3} \text{ mol}$$

$$\text{mass of } \text{Cl}_2 = 25 \times 10^{-3} \times 71 = 1.775 \text{ g} \approx 2 \text{ g}$$

24. For the reaction,



$$\text{Total pressure at equilibrium} = \sqrt{3} \text{ atm}$$

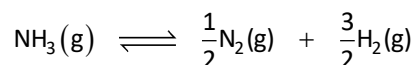
$$K_p = 9 \text{ atm}$$

$$\alpha = x \times 10^{-1}$$

$$\text{Use } \sqrt{2} = 1.41$$

Find x. (Report to nearest integer)

Answer (9)



Sol. $t = 0$ P

$$t = t_{\text{eq}} \quad P - \alpha P \quad \frac{\alpha P}{2} \quad \frac{3\alpha P}{2}$$

$$P + \alpha P = \sqrt{3} \quad \dots(1)$$

$$9 = K_p = \frac{\left(\frac{3\alpha P}{2}\right)^{3/2} \left(\frac{\alpha P}{2}\right)^{1/2}}{P(1-\alpha)} \quad \dots(2)$$

$$P(1+\alpha) = \sqrt{3} \Rightarrow P = \frac{\sqrt{3}}{1+\alpha}$$

$$\Rightarrow 9 = \frac{\left[\frac{3\alpha \times \sqrt{3}}{2(1+\alpha)}\right]^{3/2} \left[\frac{\alpha \times \sqrt{3}}{1+\alpha}\right]^{1/2}}{\frac{\sqrt{3}}{1+\alpha} [1-\alpha]}$$

$$= \frac{\left[\frac{3\sqrt{3}}{2}\right]^{3/2} [\sqrt{3}]^{1/2} \left[\frac{\alpha}{1+\alpha}\right]^{3/2} \left[\frac{\alpha}{1+\alpha}\right]^{1/2}}{(\sqrt{3}) \left(\frac{1-\alpha}{1+\alpha}\right)}$$

$$\text{Solving } \alpha = 0.86$$

$$= 8.6 \times 10^{-1}$$

25.

Our Problem *Solvers* shine bright in **JEE 2025**

JEE (Advanced)

ADVAY
MAYANK
AIR 36



RUJUL
GARG
AIR 41



ARUSH
ANAND
AIR 64



JEE (MAIN)

SHREYAS
LOHIYA
AIR 6
Uttar Pradesh Topper
100



KUSHAGRA
BAINGAHA
AIR 7
Uttar Pradesh Topper
100



HARSH
A GUPTA
AIR 15
Telangana Topper
100



MATHEMATICS

SECTION - A

Multiple Choice Questions: This section contains 20 multiple choice questions. Each question has 4 choices (1), (2), (3) and (4), out of which **ONLY ONE** is correct.

Choose the correct answer :

1. A rectangle is formed by lines $x = 0$, $y = 0$, $x = 3$, $y = 4$. A line perpendicular to $3x + 4y + 6 = 0$ divides the rectangle into two equal parts, then the distance of the line from $\left(-1, \frac{3}{2}\right)$ is
- (1) 2 (2) $\frac{17}{10}$
(3) $\frac{6}{5}$ (4) $\frac{8}{5}$

Answer (2)

Sol. Concept : line passes through centre of the rectangle = $\left(\frac{3}{2}, 2\right)$

$$\Rightarrow 4x - 3y = C \text{ passes through } \left(\frac{3}{2}, 2\right)$$

$$\Rightarrow C = 0$$

$$\Rightarrow \text{distance of } \left(-1, \frac{3}{2}\right) \text{ from } 4x - 3y = 0 \text{ is } \frac{\left|-4 - \frac{9}{2}\right|}{5} = \frac{17}{10}$$

2. Let $A = \{-2, -1, 0, 1, 2, 3, 4\}$ and R be a relation R , such that $R = \{(x, y) : (2x + y) \leq -2, x \in A, y \in A\}$
Let l = number of elements in R
 m = minimum number of elements to be added in R to make it reflexive
 n = minimum number of elements to be added in R to make it symmetric, then $(l + m + n)$ is
- (1) 10 (2) 17
(3) 11 (4) 14

Answer (2)

Sol. $R = \{(x, y) : 2x + y \leq -2, x \in A, y \in A\}$

$$A = \{-2, -1, 0, 1, 2, 3, 4\}$$

$$R = \{(-2, 2), (-2, 1), (-2, 0), (-2, -1), (-2, -2), (-1, 0), (-1, -1), (-1, -2), (0, -2)\}$$

$$l = 9$$

$$m = 5$$

$$n = \{(-2, 1), (-2, 2), (-1, 0)\} = 3$$

3. Number of 4 letter words with or without meaning formed from the letters of the word PQRSSSTUVV is
- (1) 1232 (2) 1400
(3) 1422 (4) 1162

Answer (3)

Sol. Case A : The word is ABCD

$$\Rightarrow {}^7C_4 \cdot 4! = 840$$

Case B: The word is AAAB

$$\Rightarrow (SSS) \times ({}^6C_1) \Rightarrow {}^6C_1 \cdot \frac{4!}{3!} = 24$$

Case C : The word is AABB

$$\Rightarrow {}^3C_2 \cdot \frac{4!}{2!2!} = 18$$

Case (D) : The word is AABC

$$\Rightarrow ({}^3C_1) \cdot ({}^6C_2) \cdot \frac{4!}{2!} = 3 \times 15 \times 12 = 540$$

Answer 1422

4. The area (in square units) bounded by the curve $f(x) = \max\{\sin x, \cos x\}$ and x -axis between $x = 0$ and $x = \frac{3\pi}{2}$ is A sq. unit. Then, the value of $A + A^2$ is
- (1) $8 - 2\sqrt{2}$ (2) $8 + 2\sqrt{2}$
(3) $6 - 2\sqrt{2}$ (4) $6 + 2\sqrt{2}$

Answer (1)

Our Problem *Solvers* shine bright in **JEE 2025**

JEE (Advanced)

ADVAY
MAYANK
AIR 36



RUJUL
GARG
AIR 41



ARUSH
ANAND
AIR 64



JEE (MAIN)

SHREYAS
LOHIYA
AIR 6
Uttar Pradesh Topper
100 Overall



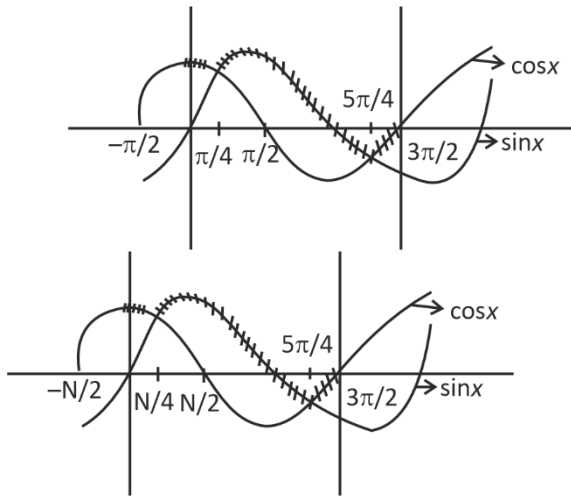
KUSHAGRA
BAINGAHA
AIR 7
Uttar Pradesh Topper
100 Overall



HARSH
A GUPTA
AIR 15
Telangana Topper
100 Overall



Sol.



$$\text{Required Area} = \int_0^{\pi/4} \cos x dx + \int_{\pi/4}^{5\pi/4} \sin x dx$$

$$\begin{aligned}
 &+ \int_{5\pi/4}^{3\pi/2} \cos x dx \\
 &= [\sin x]_0^{\pi/4} + [-\cos x]_{\pi/4}^{5\pi/4} + [\sin x]_{5\pi/4}^{3\pi/2} \\
 &= \frac{1}{\sqrt{2}} - \left[\frac{-1}{\sqrt{2}} - \frac{1}{\sqrt{2}} \right] + \left[-1 + \frac{1}{\sqrt{2}} \right] \\
 &= \frac{1}{\sqrt{2}} + \sqrt{2} - 1 + \frac{1}{\sqrt{2}}
 \end{aligned}$$

$$A = 2\sqrt{2} - 1$$

$$A + A^2 = (2\sqrt{2} - 1) + (2\sqrt{2} - 1)^2$$

$$= 2\sqrt{2} - 1 + 8 + 1 - 4\sqrt{2} = 8 - 2\sqrt{2} \text{ sq. unit}$$

5. The value of $\frac{{}^{100}C_{50}}{51} + \frac{{}^{100}C_{51}}{52} + \dots + \frac{{}^{100}C_{100}}{101}$ is

- (1) $\frac{2^{100}}{100}$ (2) $\frac{2^{101}}{101}$
 (3) $\frac{2^{100}}{101}$ (4) $\frac{2^{101}}{100}$

Answer (3)

$$\text{Sol. } (1+x)^{100} = {}^{100}C_0 + {}^{100}C_1x + {}^{100}C_2x^2 + \dots + {}^{100}C_{100}x^{100}$$

$$\sum_{r=50}^{100} \frac{{}^{100}C_r}{r+1} = \frac{1}{101} \sum_{r=50}^{100} {}^{101}C_{r+1}$$

$$\Rightarrow \frac{1}{101} \sum_{r=51}^{101} {}^{101}C_r$$

$$\Rightarrow \frac{2^{100}}{101}$$

6. For given vectors $\vec{a} = -\hat{i} + \hat{j} + 2\hat{k}$ and $\vec{b} = 2\hat{i} - \hat{j} + \hat{k}$ where $\vec{c} = \vec{a} \times \vec{b}$ and $\vec{d} = \vec{c} \times \vec{b}$. Then the value of $(\vec{a} - \vec{b}) \cdot \vec{d}$ is

- (1) -35 (2) 53
 (3) -52 (4) 25

Answer (1)

$$\text{Sol. } \vec{a} = -\hat{i} + \hat{j} + 2\hat{k}$$

$$\vec{b} = 2\hat{i} - \hat{j} + \hat{k}$$

$$\vec{c} = \vec{a} \times \vec{b} = 3\hat{i} + 5\hat{j} - \hat{k}$$

$$\vec{d} = \vec{c} \times \vec{b}$$

Now

$$(\vec{a} - \vec{b}) \cdot \vec{d} = (\vec{a} - \vec{b}) \cdot (\vec{c} \times \vec{b})$$

$$= \vec{a} \cdot (\vec{c} \times \vec{b}) - \vec{b} \cdot (\vec{c} \times \vec{b})$$

$$= -[\vec{a} \vec{b} \vec{c}]$$

$$= -35$$

$$\vec{a} \times \vec{b} = \begin{vmatrix} \hat{i} & \hat{j} & \hat{k} \\ -1 & 1 & 2 \\ 2 & -1 & 1 \end{vmatrix} = 3\hat{i} + 5\hat{j} - \hat{k}$$

$$\text{And } [\vec{a} \vec{b} \vec{c}] = \begin{vmatrix} -1 & 1 & 2 \\ 2 & -1 & 1 \\ 3 & 5 & -1 \end{vmatrix} = 35$$

$$\Rightarrow -[\vec{a} \vec{b} \vec{c}] = -35$$

Our Problem *Solvers* shine bright in **JEE 2025**

JEE (Advanced)

ADVAY MAYANK
AIR 36

RUJUL GARG
AIR 41

ARUSH ANAND
AIR 64

SHREYAS LOHIYA
AIR 6
 Uttar Pradesh Topper
 100 Overall

KUSHAGRA BAINGAHA
AIR 7
 Uttar Pradesh Topper
 100 Overall

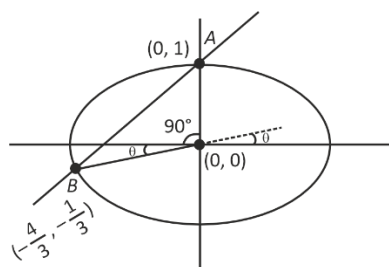
HARSH A GUPTA
AIR 15
 Telangana Topper
 100 Overall


7. The line $y = x + 1$ intersects the ellipse $\frac{x^2}{2} + \frac{y^2}{1} = 1$ at A and B . Find the angle sub-stained by segment AB and centre of ellipse is

- (1) $\frac{\pi}{2} + \tan^{-1}\left(\frac{1}{4}\right)$
(2) $\frac{\pi}{2} - \tan^{-1}\left(\frac{1}{4}\right)$
(3) $\frac{\pi}{2} + 2\tan^{-1}\left(\frac{1}{4}\right)$
(4) $\frac{\pi}{4} + \tan^{-1}\left(\frac{1}{4}\right)$

Answer (1)

Sol.



$$y = x + 1 \text{ intersects } \frac{x^2}{2} + y^2 = 1$$

$$\Rightarrow \frac{x^2}{2} + (x+1)^2 = 1 \Rightarrow x^2 + 2x^2 + 4x = 0$$

$$\Rightarrow x = 0, \frac{-4}{3}$$

\Rightarrow Points A and B are

$$(0, 1), \left(\frac{-4}{3}, \frac{-1}{3}\right)$$

$$\theta = \tan^{-1}\left(\frac{\frac{-1}{3}}{\frac{-4}{3}}\right) = \tan^{-1}\left(\frac{1}{4}\right)$$

$$\Rightarrow \angle AOB = \frac{\pi}{2} + \tan^{-1}\left(\frac{1}{4}\right)$$

8. Find $\int_{\frac{\pi}{24}}^{\frac{5\pi}{24}} \frac{dx}{1 + (\tan 2x)^{1/3}}$

- (1) $\frac{\pi}{24}$ (2) $\frac{\pi}{12}$
(3) $\frac{\pi}{6}$ (4) $\frac{\pi}{48}$

Answer (2)

Sol. $I = \int_{\frac{\pi}{24}}^{\frac{5\pi}{24}} \frac{1}{1 + (\tan 2x)^{1/3}} dx \quad \dots(1)$

$$\Rightarrow I = \int_{\frac{\pi}{24}}^{\frac{5\pi}{24}} \frac{1}{1 + \tan\left(2\left(\frac{5\pi}{24} + \frac{\pi}{24} - 4\right)\right)^{1/3}} dx$$

$$I = \int_{\frac{\pi}{24}}^{\frac{5\pi}{24}} \frac{1}{1 + \tan\left(\frac{\pi}{2} - 2x\right)^{1/3}} dx \quad \dots(2)$$

From equation (1) and (2)

$$2I = \int_{\frac{\pi}{24}}^{\frac{5\pi}{24}} \frac{(\tan(2x))^{1/3} + 1}{1 + (\tan 2x)^{1/3}} dx$$

$$= (x) \Big|_{\frac{\pi}{24}}^{\frac{5\pi}{24}} \Rightarrow I = \frac{1}{2} \times \frac{4\pi}{24} = \frac{\pi}{12}$$

9. The number of solutions of $13\cos 2\theta + 8\cos \theta - 3\sqrt{3} = 0$ if $\theta \in [-3\pi, 2\pi]$ is

- (1) 4 (2) 3
(3) 0 (4) 5

Answer (4)

Sol. $13[2\cos^2 \theta - 1] + 8\cos \theta - 3\sqrt{3} = 0$

$$26\cos^2 \theta + 8\cos \theta - 13 - 3\sqrt{3} = 0$$

$$\cos \theta = \frac{-8 \pm \sqrt{64 + 4 \times 26(13 + 3\sqrt{3})}}{52}$$

$$= \frac{-8 \pm \sqrt{1416 + 312\sqrt{3}}}{52} \approx 0.69$$

\therefore 5 Solution

Our Problem *Solvers* shine bright in **JEE 2025**

JEE (Advanced)

ADVAY
MAYANK
AIR 36



RUJUL
GARG
AIR 41



ARUSH
ANAND
AIR 64



JEE (MAIN)

SHREYAS
LOHIYA
AIR 6
Uttar Pradesh Topper
100 Overall



KUSHAGRA
BAINGAHA
AIR 7
Uttar Pradesh Topper
100 Overall



HARSH
A GUPTA
AIR 15
Telangana Topper
100 Overall



10. For the differential equation $x^4 dy + (4x^3 y + \sin x) dx = 0$ it is given that $y\left(\frac{\pi}{2}\right) = 0$. Then the value of $\pi^4 y\left(\frac{\pi}{3}\right)$ is equal to

- (1) $\frac{9}{2}$ (2) $\frac{81}{2}$
 (3) $\frac{27}{2}$ (4) $\frac{243}{2}$

Answer (2)

Sol. $x^4 dy + (4x^3 y + \sin x) dx = 0$

$$\frac{dy}{dx} + \frac{4x^3}{x^4} y = \frac{-\sin x}{x^4}$$

$$\frac{dy}{dx} + \frac{4}{x} y = \frac{-\sin x}{x^4}$$

$$\text{IF} = e^{\int \frac{4}{x} dx} = e^{\ln x^4} = x^4$$

$$x^4 \frac{dy}{dx} + 4x^3 y = -\sin x$$

$$\frac{d}{dx}(x^4 y) = -\sin x$$

$$\Rightarrow x^4 + y = \cos x + C$$

$$y\left(\frac{\pi}{2}\right) = 0$$

$$\Rightarrow C = 0$$

$$\therefore x^4 y = \cos x \Rightarrow y = \frac{\cos x}{x^4}$$

$$y\left(\frac{\pi}{3}\right) = \frac{\cos\left(\frac{\pi}{3}\right)}{\left(\frac{\pi}{3}\right)^4} = \frac{\frac{1}{2}}{\frac{\pi^4}{81}} = \frac{81}{2\pi^4}$$

$$\pi^4 y\left(\frac{\pi}{3}\right) = \frac{81}{2}$$

11. If coefficients of x , x^2 and x^3 are in arithmetic progression of the binomial expansion of $(1 + x^2)^n$, $n \in \mathbb{N}$. Then sum of all values of n is

- (1) 9 (2) 7
 (3) 8 (4) 10

Answer (1)

Sol. Coefficient of x in

$$(1 + 2x^2 + x^4) (1 + x)^4 \text{ is}$$

nC_1

Coefficient of x^2 is

$$\Rightarrow {}^nC_2 + 2 \cdot {}^nC_0$$

Coefficient of x^3 is

$${}^nC_3 + 2 \cdot {}^nC_1$$

\Rightarrow since they are in A.P.

$$\Rightarrow ({}^nC_1) + ({}^nC_3 + 2 \cdot {}^nC_1) = 2({}^nC_2 + 2 \cdot {}^nC_0)$$

$$\Rightarrow {}^nC_3 + 3 \cdot n = 2({}^nC_2 + 2)$$

$$\Rightarrow \frac{n(n-1)(n-2)}{6} + 3n = 2(n(n-1) + 4)$$

$$\Rightarrow (n^2 - n)(n - 2) + 18n = 6n^2 - 6n + 24$$

$$\Rightarrow n^3 - 3n^2 + 20n = 6n^2 - 6n + 24$$

$$\Rightarrow n^3 - 9n^2 + 26n - 24 = 0$$

$$n = 2, 3, 4$$

$$\Rightarrow \text{sum of all } n = 2 + 3 + 4 = 9$$

12. Let $f(x) = \int \frac{e^x(2-x^2)}{\sqrt{1+x}(1-x)^{\frac{3}{2}}} dx$, with $f(0) = 0$, then $f\left(\frac{1}{2}\right)$

is

- (1) $\sqrt{2}e + 1$ (2) $\sqrt{2}e - 1$
 (3) $\sqrt{3}e + 1$ (4) $\sqrt{3}e - 1$

Answer (4)

Sol. $f(x) = \int e^x \left[\frac{1}{\sqrt{1-x^2}(1-x)} + \frac{(1-x^2)}{\sqrt{1-x^2}(1-x)} \right] dx$

Our Problem *Solvers* shine bright in **JEE 2025**

JEE (Advanced)

ADVAY
MAYANK
AIR 36



RUJUL
GARG
AIR 41



ARUSH
ANAND
AIR 64



JEE (MAIN)

SHREYAS
LOHIYA
AIR 6
Uttar Pradesh Topper
100 Overall



KUSHAGRA
BAINGAHA
AIR 7
Uttar Pradesh Topper
100 Overall



HARSH
A GUPTA
AIR 15
Telangana Topper
100 Overall



$$= \int e^x \left(\frac{1}{(1-x)\sqrt{1-x^2}} + \frac{\sqrt{1-x^2}}{\sqrt{1-x^2}} \right)$$

$$= \int e^x \left(\frac{1}{(1-x)\sqrt{1-x^2}} + \sqrt{\frac{1+x}{1-x}} \right)$$

$$= e^x \sqrt{\frac{1+x}{1-x}} + c$$

$$\therefore f(0) = 0 \Rightarrow 0 = 1 + c \Rightarrow c = -1$$

$$f\left(\frac{1}{2}\right) \Rightarrow e^{\frac{1}{2}} \sqrt{3} - 1$$

13. If A is matrix of order 3 and $x = |3\text{adj}(A^2) \cdot \text{adj}(2A)|$ and $|A| = 6$ and $x = 2^n \cdot 3^m$, then $m + n$ is

- (1) 21 (2) 25
(3) 27 (4) 19

Answer (1)

Sol. $|3\text{adj}(A^2) \cdot \text{adj}(2A)| = 3^3 |\text{adj}(A^2)| |\text{adj}(2A)|$
 $= 3^3 |A^2|^2 |2A|^2 = 3^3 |A|^4 \cdot 2^6 |A|^2$
 $= 3^3 \cdot 2^6 \cdot |A|^6 = 3^3 \cdot 2^6 \cdot 6^6$
 $= 2^{12} \cdot 3^9$
 $m + n = 21$

14. Let the domain of $f(x) = \log_3(\log_5(\log_7(9x - x^2 - 13)))$

is (m, n) . Let $\frac{n}{3}$ and $\frac{3m}{8}$ be eccentricity and length of

latus rectum of hyperbola $\frac{x^2}{a^2} - \frac{y^2}{b^2} = 1$ respectively,

then the value of $\left(\frac{a+b^2}{a-b^2}\right)$ is equal to

- (1) 7 (2) 9
(3) 3 (4) 13

Answer (1)

Sol. $\Rightarrow \log_5(\log_7(9x - x^2 - 13)) > 0 = \log_5 1$

$$\log_7(9x - x^2 - 13) > 1 = \log_7 7$$

$$\Rightarrow 9x - x^2 - 13 > 7$$

$$\Rightarrow 9x - x^2 + 20 < 0 \Rightarrow x \in (4, 5)$$

$$\Rightarrow e = \frac{5}{3}, \frac{2b^2}{a} = \frac{3}{8} \times 4 = \frac{3}{2}$$

$$\Rightarrow \frac{b^2}{a} = \frac{3}{4} \Rightarrow \frac{a+b^2}{a-b^2} = \frac{3+4}{4-1} = 7$$

$$e^2 = 1 + \frac{b^2}{a^2} = 1 + \frac{3a}{4a^2} = \frac{25}{9}$$

$$\Rightarrow 1 + \frac{3}{4a} = \frac{25}{9} \Rightarrow \frac{30}{4a} = \frac{16}{9}$$

$$\Rightarrow a = \frac{27}{64}, b^2 = \frac{81}{256}$$

15. If point B and C lies on line $\frac{x}{1} = \frac{1-y}{-2} = \frac{z-2}{3}$ and point

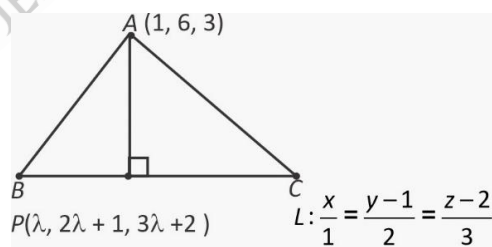
A is $(1, 6, 3)$. If $BC = 10$. Then, the area of $\triangle ABC$ is

- (1) $2\sqrt{13}$ (2) $5\sqrt{13}$
(3) $6\sqrt{13}$ (4) $4\sqrt{13}$

Answer (2)

Sol. $L: \frac{x}{1} = \frac{y-1}{2} = \frac{z-2}{3}$

Let any point on line L is $(\lambda, 2\lambda + 1, 3\lambda + 2)$



$$1(\lambda - 1) + 2(2\lambda - 5) + 3(3\lambda - 1) = 0$$

$$\lambda - 1 + 4\lambda - 10 + 9\lambda - 3 = 0$$

$$14\lambda - 14 = 0$$

$$\lambda = 1$$

Our Problem *Solvers* shine bright in **JEE 2025**

JEE (Advanced)

ADVAY
MAYANK
AIR 36



RUJUL
GARG
AIR 41



ARUSH
ANAND
AIR 64



JEE (MAIN)

SHREYAS
LOHIYA
AIR 6
Uttar Pradesh Topper
100 Overall



KUSHAGRA
BAINGAHA
AIR 7
Uttar Pradesh Topper
100 Overall



HARSH
A GUPTA
AIR 15
Telangana Topper
100 Overall



$$P(1, 3, 5)$$

$$AP = \sqrt{(1-1)^2 + (6-3)^2 + (3-5)^2}$$

$$= \sqrt{9+4}$$

$$= \sqrt{13}$$

$$\text{Area}(\triangle ABC) = \frac{1}{2} \times 10 \times \sqrt{13}$$

$$= 5\sqrt{13}$$

16.

17.

18.

19.

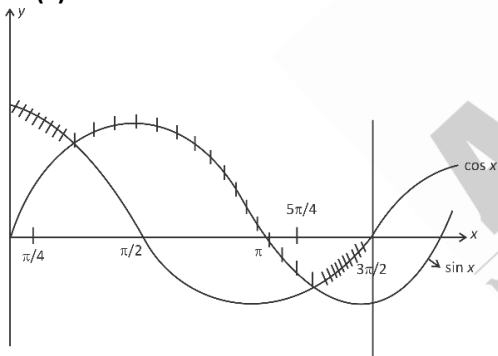
20.

SECTION - B

Numerical Value Type Questions: This section contains 5 Numerical based questions. The answer to each question should be rounded-off to the nearest integer.

21. The area (in square units) bounded by the curve $f(x) = \max\{\sin x, \cos x\}$ and x -axis between $x = 0$ and $x = \frac{3\pi}{2}$ is

A. Then, the value of $A + A^2$ is

Answer (3)**Sol.**

$$\text{Required area} = \int_0^{\pi/4} \cos x \, dx + \int_{\pi/4}^{\pi} \sin x \, dx$$

$$\begin{aligned} &+ \int_{\pi}^{5\pi/4} (-\sin x) \, dx + \int_{5\pi/4}^{3\pi/2} (-\cos x) \, dx \\ &= [\sin x]_0^{\pi/4} + [-\cos x]_{\pi/4}^{\pi} + [\cos x]_{\pi}^{5\pi/4} - [\sin x]_{5\pi/4}^{3\pi/2} \\ &= \frac{1}{\sqrt{2}} \left[1 + \frac{1}{\sqrt{2}} \right] + \left[-\frac{1}{\sqrt{2}} + 1 \right] - \left[-1 + \frac{1}{\sqrt{2}} \right] \\ &= \sqrt{2} + 1 - \frac{1}{\sqrt{2}} + 1 + 1 - \frac{1}{\sqrt{2}} \\ &= 3 \end{aligned}$$

22. The mean and variance of the 8 observations $-10, -7, -1, x, y, 16, 2, 9$ are $\frac{7}{2}$ and $\frac{293}{4}$ respectively. Then, the mean of $x, y, x+y+1, |x-y|$ is

Answer (11)

Sol. Mean = $\frac{7}{2}$

$$\frac{-10 - 7 - 1 + x + y + 16 + 2 + 9}{8} = \frac{7}{2}$$

$$\Rightarrow x + y + 9 = 28$$

$$\Rightarrow \boxed{x + y = 19}$$

$$\text{Var} = \frac{293}{4}$$

$$\frac{100 + 49 + 1 + x^2 + y^2 + 256 + 4 + 8}{8} - \frac{49}{4} = \frac{293}{4}$$

$$\frac{491 + x^2 + y^2}{8} = \frac{342}{4} \times 2$$

$$x^2 + y^2 = 193$$

$$\Rightarrow (x, y) = (7, 12) \text{ or } (12, 7)$$

$$\text{Mean} = \frac{x + y + x + y + 1 + (x - y)}{4}$$

$$= \frac{19 + 20 + 5}{4}$$

$$= 11$$

23.

24.

25.



Our Problem *Solvers* shine bright in **JEE 2025**

JEE (Advanced)
ADVAY MAYANK
AIR 36

RUJUL GARG
AIR 41

ARUSH ANAND
AIR 64
**JEE (MAIN)**
SHREYAS LOHIYA
AIR 6
 Uttar Pradesh Topper
100 Overall

KUSHAGRA BAINGAHA
AIR 7
 Uttar Pradesh Topper
100 Overall

HARSH A GUPTA
AIR 15
 Telangana Topper
100 Overall
